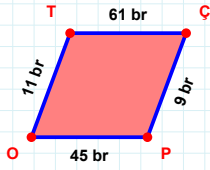
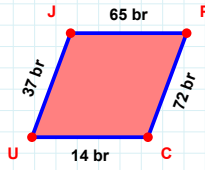


SORU: Aşağıdaki geometrik şekillerle ilgili soruları cevaplayınız.



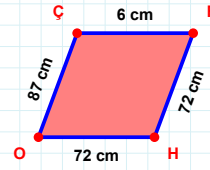
$$|ÇP| + |PO| = \dots$$

Cevap: br



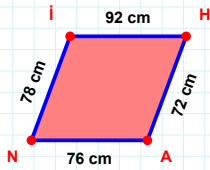
$$|CU| + |UJ| = \dots$$

Cevap: br



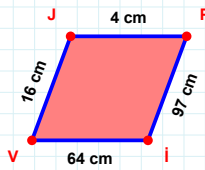
87 cm hangi kenara aittir?

- ☐ HO kenarı
☐ FO kenarı
☐ ÇF kenarı



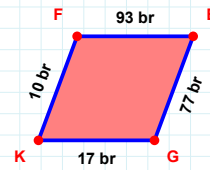
$$|HA| + |AN| = \dots$$

Cevap: cm



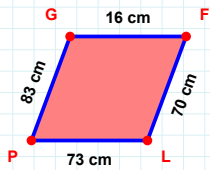
97 cm hangi kenara aittir?

Kenar:



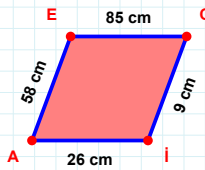
10 br hangi kenara aittir?

Kenar:



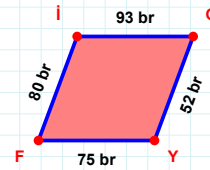
$|LP|$ kaç cmdir?

- ☐ 72 cm
☐ 73 cm
☐ 74 cm



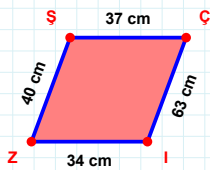
$$|Cİ| + |İA| = \dots$$

Cevap: cm



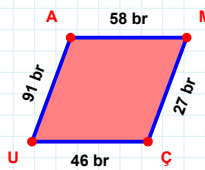
$|İG|$ kaç brdir?

- ☐ 92 br
☐ 93 br
☐ 94 br



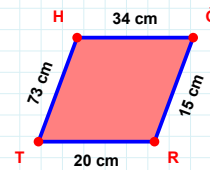
40 cm hangi kenara aittir?

- ☐ ÇZ kenarı
☐ ŞÇ kenarı
☐ ZŞ kenarı



46 br hangi kenara aittir?

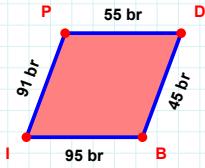
Kenar:



$|HĞ|$ kaç cmdir?

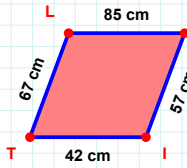
- ☐ 33 cm
☐ 34 cm
☐ 35 cm

SORU: Aşağıdaki geometrik şekillerle ilgili soruları cevaplayınız.



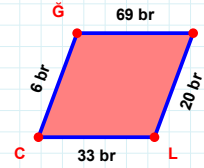
55 br hangi kenara aittir?

Kenar:



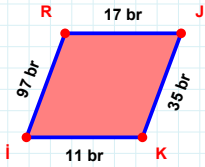
67 cm hangi kenara aittir?

Kenar:



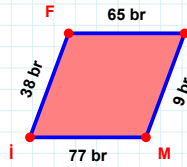
33 br hangi kenara aittir?

Kenar:



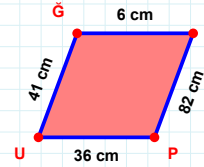
|IR| kaç brdir?

- ☐ 96 br
☐ 97 br
☐ 98 br



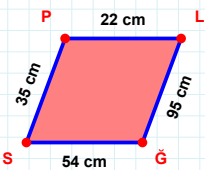
|KM| + |MI| =

Cevap: br



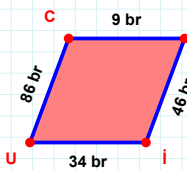
41 cm hangi kenara aittir?

Kenar:



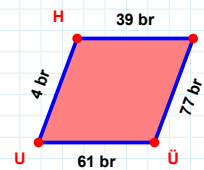
|SP| kaç cmdir?

- ☐ 34 cm
☐ 35 cm
☐ 36 cm



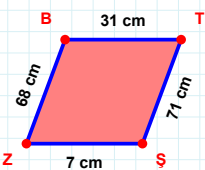
86 br hangi kenara aittir?

- ☐ CS kenarı
☐ SI kenarı
☐ SU kenarı



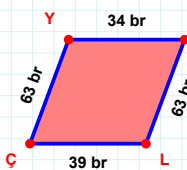
|NÜ| kaç brdir?

- ☐ 76 br
☐ 77 br
☐ 78 br



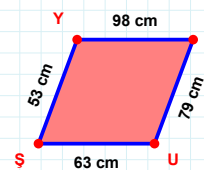
|TS| kaç cmdir?

- ☐ 70 cm
☐ 71 cm
☐ 72 cm



34 br hangi kenara aittir?

Kenar:



53 cm hangi kenara aittir?

- ☐ YU kenarı
☐ YA kenarı
☐ UŞ kenarı

SÜREÇ ODAKLI DEĞERLENDİRME ÖLÇEĞİ

Doğru Sayısı: / 24

Öğretmen ilgili kutucuğu işaretler.

Geliştirilmeli (0-8)

İyi (9-14)

Çok İyi (15-20)

Mükemmel (21-24)

☐
☐
☐
☐

Hazırlayan:

Bu bölüme sınıfınızın ilgili kazanıma yönelik genel durumuna ilişkin gözlem ve izlenimlerinizi, öğrencilerinizin bu kazanımla ilgili öğrenme eksikliklerini ve bu eksikliklerin giderilmesi amacıyla yaptığınız/yapmayı planladığınız faaliyetleri not edebilirsiniz.

No	Adı - Soyadı	Toplam Puan	Değerlendirme
1			
2			
3			
4			
5			
6			
7			
8			
9			
10			
11			
12			
13			
14			
15			
16			
17			
18			
19			
20			
21			
22			
23			
24			
25			
26			
27			
28			
29			
30			
31			
32			
33			
34			
35			

Hazırlayan: