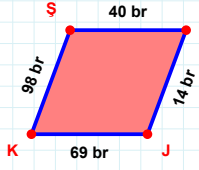
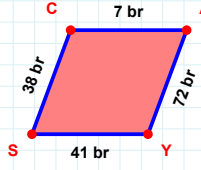


SORU: Aşağıdaki geometrik şekillerle ilgili soruları cevaplayınız.



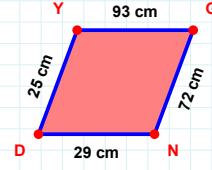
|SE| kaç brdir?

- ☐ 39 br
☐ 40 br
☐ 41 br



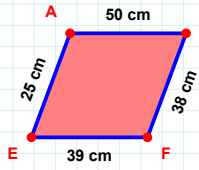
|SC| + |AY| =

Cevap: br



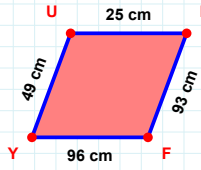
25 cm hangi kenara aittir?

- ☐ ND kenarı
☐ GN kenarı
☐ YN kenarı



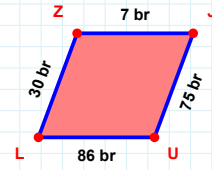
|EA| kaç cmdir?

- ☐ 24 cm
☐ 25 cm
☐ 26 cm



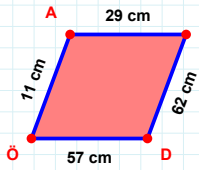
|FY| kaç cmdir?

- ☐ 95 cm
☐ 96 cm
☐ 97 cm



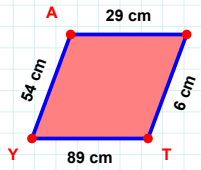
|JU| kaç brdir?

- ☐ 74 br
☐ 75 br
☐ 76 br



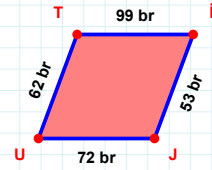
57 cm hangi kenara aittir?

Kenar:



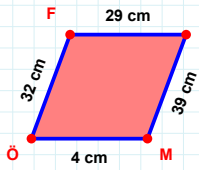
|AI| kaç cmdir?

- ☐ 28 cm
☐ 29 cm
☐ 30 cm



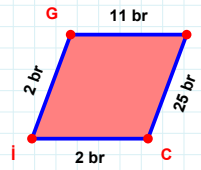
|İJ| + |JU| =

Cevap: br



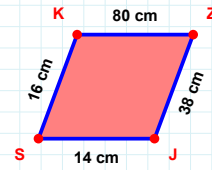
39 cm hangi kenara aittir?

Kenar:



|CI| + |FC| =

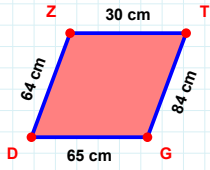
Cevap: br



|SK| kaç cmdir?

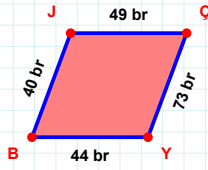
- ☐ 15 cm
☐ 16 cm
☐ 17 cm

SORU: Aşağıdaki geometrik şekillerle ilgili soruları cevaplayınız.



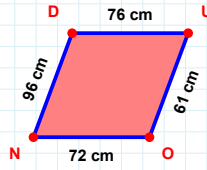
|TG| kaç cm'dir?

- ☐ 83 cm
☐ 84 cm
☐ 85 cm



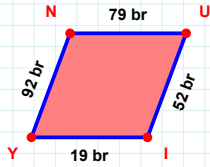
40 br hangi kenara aittir?

- ☐ YB kenarı
☐ JÇ kenarı
☐ BÇ kenarı



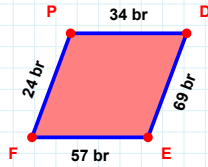
|ND| + |DU| =

Cevap: cm



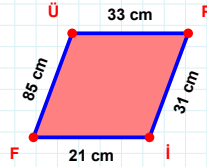
92 br hangi kenara aittir?

- ☐ UI kenarı
☐ IN kenarı
☐ YN kenarı



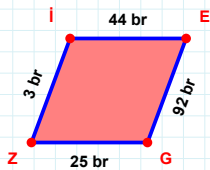
24 br hangi kenara aittir?

- ☐ DE kenarı
☐ FP kenarı
☐ FD kenarı



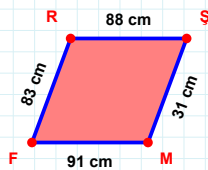
|PI| kaç cm'dir?

- ☐ 30 cm
☐ 31 cm
☐ 32 cm



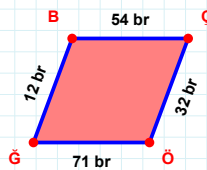
|IE| + |GZ| =

Cevap: br



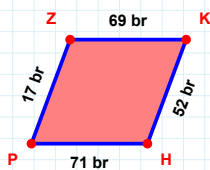
|RS| + |MF| =

Cevap: cm



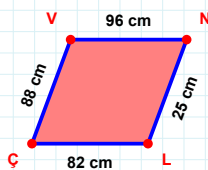
12 br hangi kenara aittir?

Kenar:



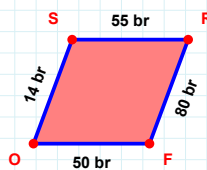
17 br hangi kenara aittir?

- ☐ KH kenarı
☐ ZH kenarı
☐ PZ kenarı



25 cm hangi kenara aittir?

Kenar:



|OS| + |SR| =

Cevap: br

SÜREÇ ODAKLI DEĞERLENDİRME ÖLÇEĞİ

Doğru Sayısı: / 24

Öğretmen ilgili kutucuğu işaretler.

Geliştirilmeli (0-8)

İyi (9-14)

Çok İyi (15-20)

Mükemmel (21-24)

☐
☐
☐
☐

Hazırlayan:

Bu bölüme sınıfınızın ilgili kazanıma yönelik genel durumuna ilişkin gözlem ve izlenimlerinizi, öğrencilerinizin bu kazanımla ilgili öğrenme eksikliklerini ve bu eksikliklerin giderilmesi amacıyla yaptığınız/yapmayı planladığınız faaliyetleri not edebilirsiniz.

No	Adı - Soyadı	Toplam Puan	Değerlendirme
1			
2			
3			
4			
5			
6			
7			
8			
9			
10			
11			
12			
13			
14			
15			
16			
17			
18			
19			
20			
21			
22			
23			
24			
25			
26			
27			
28			
29			
30			
31			
32			
33			
34			
35			

Hazırlayan: