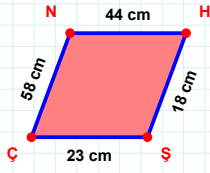
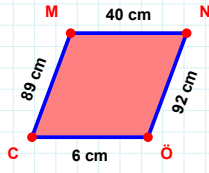


SORU: Aşağıdaki geometrik şekillerle ilgili soruları cevaplayınız.

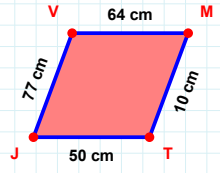
$|NH| + |HS| = \dots$

Cevap: cm



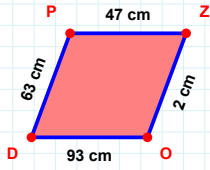
89 cm hangi kenara aittir?

- ☐ NC kenarı
☐ ÖC kenarı
☐ CM kenarı



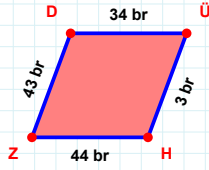
|VM| kaç cm'dir?

- ☐ 63 cm
☐ 64 cm
☐ 65 cm



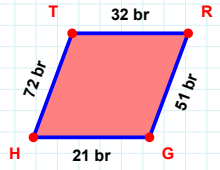
$|OD| + |PZ| = \dots$

Cevap: cm



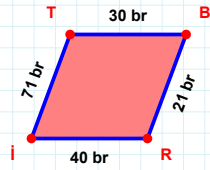
43 br hangi kenara aittir?

- ☐ ZD kenarı
☐ ÜH kenarı
☐ ZÜ kenarı



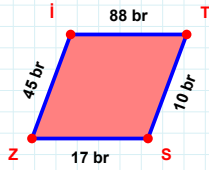
$|GH| + |HT| = \dots$

Cevap: br



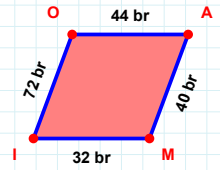
|BR| kaç br'dir?

- ☐ 20 br
☐ 21 br
☐ 22 br



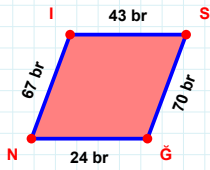
$|TS| + |SZ| = \dots$

Cevap: br



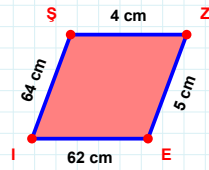
$|MI| + |AM| = \dots$

Cevap: br



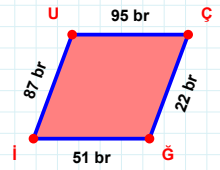
70 br hangi kenara aittir?

Kenar:



4 cm hangi kenara aittir?

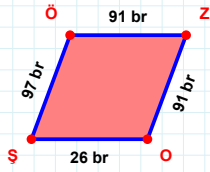
Kenar:



|UÇ| kaç br'dir?

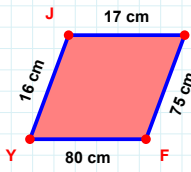
- ☐ 94 br
☐ 95 br
☐ 96 br

SORU: Aşağıdaki geometrik şekillerle ilgili soruları cevaplayınız.



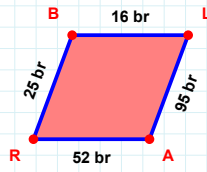
|ÖZ| kaç brdir?

- ☐ 90 br
☐ 91 br
☐ 92 br



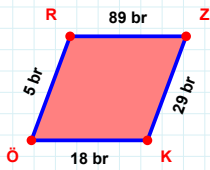
16 cm hangi kenara aittir?

- ☐ JZ kenarı
☐ FY kenarı
☐ YZ kenarı



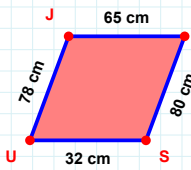
|RB| + |AR| =

Cevap: br



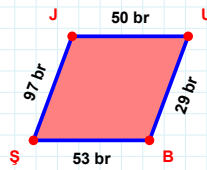
|ÖR| kaç brdir?

- ☐ 4 br
☐ 5 br
☐ 6 br



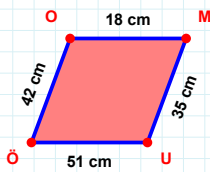
|JD| kaç cmdir?

- ☐ 64 cm
☐ 65 cm
☐ 66 cm



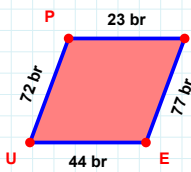
97 br hangi kenara aittir?

- ☐ ŞU kenarı
☐ UB kenarı
☐ ŞJ kenarı



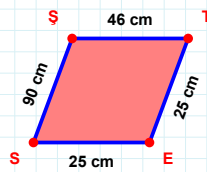
|OM| kaç cmdir?

- ☐ 17 cm
☐ 18 cm
☐ 19 cm



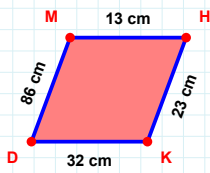
|PF| kaç brdir?

- ☐ 22 br
☐ 23 br
☐ 24 br



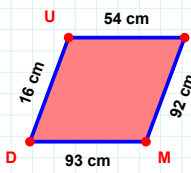
|ES| + |TE| =

Cevap: cm



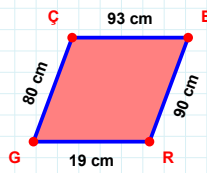
|KD| + |MH| =

Cevap: cm



|MD| kaç cmdir?

- ☐ 92 cm
☐ 93 cm
☐ 94 cm



19 cm hangi kenara aittir?

Kenar:

SÜREÇ ODAKLI DEĞERLENDİRME ÖLÇEĞİ

Doğru Sayısı: / 24

Öğretmen ilgili kutucuğu işaretler.

Geliştirilmeli (0-8)

İyi (9-14)

Çok İyi (15-20)

Mükemmel (21-24)

☐
☐
☐
☐

Hazırlayan:

Bu bölüme sınıfınızın ilgili kazanıma yönelik genel durumuna ilişkin gözlem ve izlenimlerinizi, öğrencilerinizin bu kazanımla ilgili öğrenme eksikliklerini ve bu eksikliklerin giderilmesi amacıyla yaptığınız/yapmayı planladığınız faaliyetleri not edebilirsiniz.

No	Adı - Soyadı	Toplam Puan	Değerlendirme
1			
2			
3			
4			
5			
6			
7			
8			
9			
10			
11			
12			
13			
14			
15			
16			
17			
18			
19			
20			
21			
22			
23			
24			
25			
26			
27			
28			
29			
30			
31			
32			
33			
34			
35			

Hazırlayan: