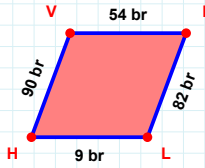
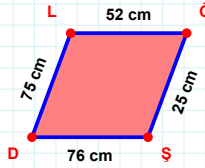


SORU: Aşağıdaki geometrik şekillerle ilgili soruları cevaplayınız.

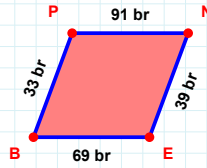
|IL| kaç brdir?

- ☐ 81 br
☐ 82 br
☐ 83 br



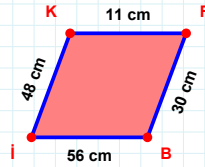
75 cm hangi kenara aittir?

- ☐ GS kenarı
☐ GD kenarı
☐ DL kenarı



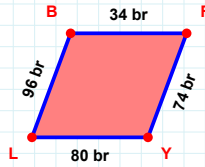
33 br hangi kenara aittir?

- ☐ EB kenarı
☐ BP kenarı
☐ NB kenarı



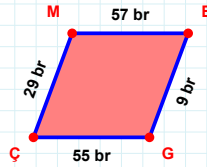
|BI| kaç cmdir?

- ☐ 55 cm
☐ 56 cm
☐ 57 cm



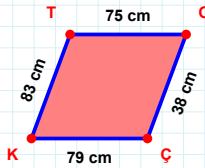
34 br hangi kenara aittir?

Kenar:



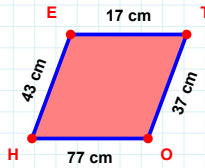
|ÇM| kaç brdir?

- ☐ 28 br
☐ 29 br
☐ 30 br



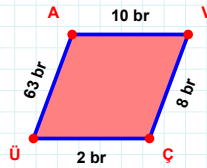
83 cm hangi kenara aittir?

Kenar:



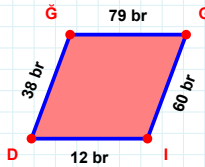
43 cm hangi kenara aittir?

- ☐ ET kenarı
☐ HT kenarı
☐ TO kenarı



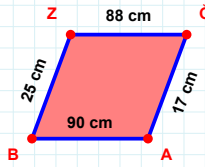
63 br hangi kenara aittir?

- ☐ ÇÜ kenarı
☐ AV kenarı
☐ ÜV kenarı



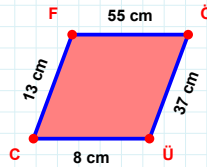
12 br hangi kenara aittir?

Kenar:



25 cm hangi kenara aittir?

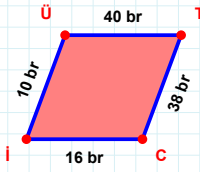
- ☐ AZ kenarı
☐ BZ kenarı
☐ AB kenarı



13 cm hangi kenara aittir?

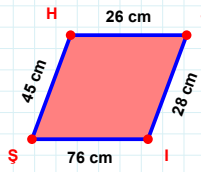
- ☐ CÖ kenarı
☐ CF kenarı
☐ ÜC kenarı

SORU: Aşağıdaki geometrik şekillerle ilgili soruları cevaplayınız.



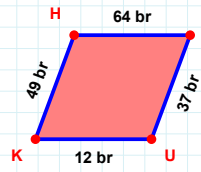
10 br hangi kenara aittir?

- ☐ CÜ kenarı
☐ ÜT kenarı
☐ İÜ kenarı

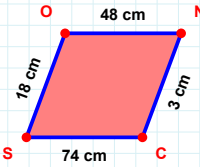


45 cm hangi kenara aittir?

Kenar:

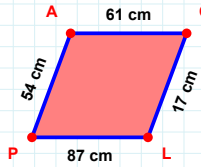
 $|UK| + |HG| = \dots$

Cevap: br

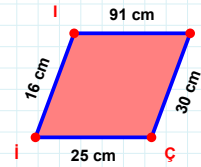


18 cm hangi kenara aittir?

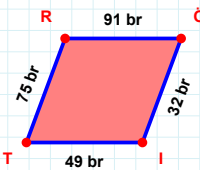
- ☐ NC kenarı
☐ SO kenarı
☐ NS kenarı

 $|ÖL| + |LP| = \dots$

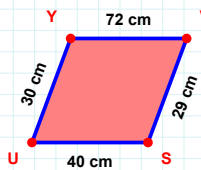
Cevap: cm

 $|Çİ| + |İV| = \dots$

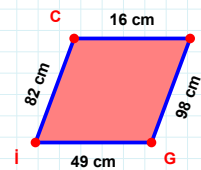
Cevap: cm

 $|İT| + |TR| = \dots$

Cevap: br

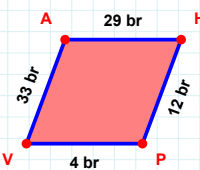
 $|UY|$ kaç cm'dir?

- ☐ 29 cm
☐ 30 cm
☐ 31 cm

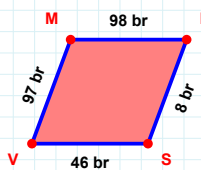


82 cm hangi kenara aittir?

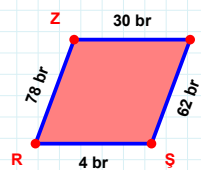
- ☐ MG kenarı
☐ GC kenarı
☐ CM kenarı

 $|HP| + |VA| = \dots$

Cevap: br

 $|SV|$ kaç br'dir?

- ☐ 45 br
☐ 46 br
☐ 47 br

 $|ES| + |SR| = \dots$

Cevap: br

SÜREÇ ODAKLI DEĞERLENDİRME ÖLÇEĞİ

Doğru Sayısı: / 24

Öğretmen ilgili kutucuğu işaretler.

Geliştirilmeli (0-8)

İyi (9-14)

Çok İyi (15-20)

Mükemmel (21-24)

☐☐☐☐

Hazırlayan:

Bu bölüme sınıfınızın ilgili kazanıma yönelik genel durumuna ilişkin gözlem ve izlenimlerinizi, öğrencilerinizin bu kazanımla ilgili öğrenme eksikliklerini ve bu eksikliklerin giderilmesi amacıyla yaptığınız/yapmayı planladığınız faaliyetleri not edebilirsiniz.

No	Adı - Soyadı	Toplam Puan	Değerlendirme
1			
2			
3			
4			
5			
6			
7			
8			
9			
10			
11			
12			
13			
14			
15			
16			
17			
18			
19			
20			
21			
22			
23			
24			
25			
26			
27			
28			
29			
30			
31			
32			
33			
34			
35			

Hazırlayan: