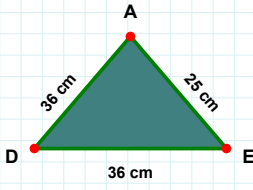
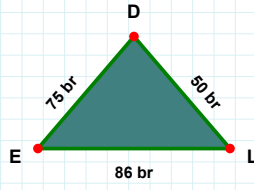


SORU: Aşağıdaki şekillerde istenen kenarın kaç birim veya santimetre olduğunu bulunuz.

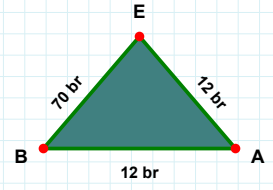
|EA| kaç cm'dir?

- ☐ 20 cm
☐ 25 cm
☐ 27 cm



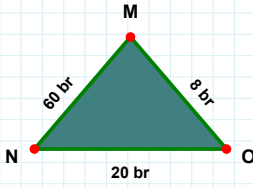
|AE| kaç br'dir?

- ☐ 12 br
☐ 14 br
☐ 17 br



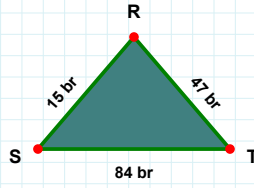
|LD| kaç br'dir?

- ☐ 49 br
☐ 47 br
☐ 50 br



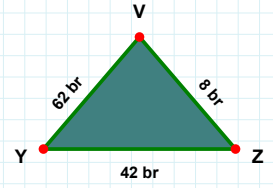
|VY| kaç br'dir?

- ☐ 52 br
☐ 62 br
☐ 57 br



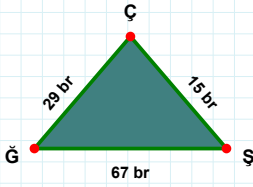
|ST| kaç br'dir?

- ☐ 94 br
☐ 85 br
☐ 84 br



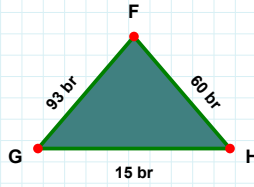
|MN| kaç br'dir?

- ☐ 60 br
☐ 57 br
☐ 62 br



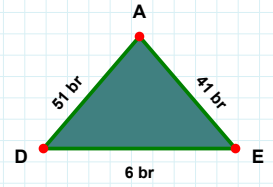
|AD| kaç br'dir?

- ☐ 50 br
☐ 48 br
☐ 51 br



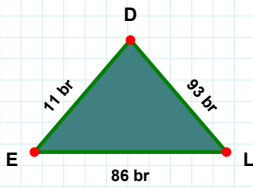
|ŞÇ| kaç br'dir?

- ☐ 14 br
☐ 15 br
☐ 17 br



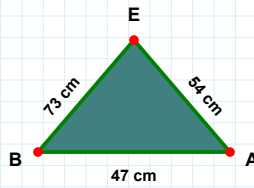
|FG| kaç br'dir?

- ☐ 90 br
☐ 83 br
☐ 93 br



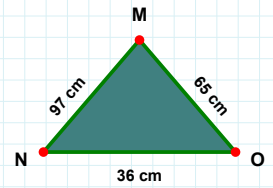
|LD| kaç br'dir?

- ☐ 93 br
☐ 83 br
☐ 94 br



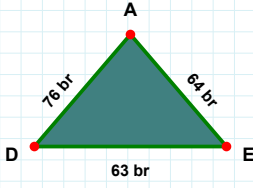
|NO| kaç cm'dir?

- ☐ 36 cm
☐ 46 cm
☐ 38 cm



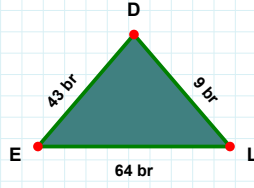
|BA| kaç cm'dir?

- ☐ 47 cm
☐ 52 cm
☐ 48 cm

SORU: Aşağıdaki şekillerde istenen kenarın kaç birim veya santimetre olduğunu bulunuz.

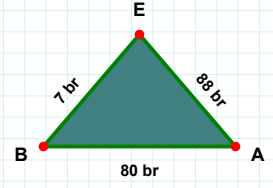
|BA| kaç brdir?

- ☐ 70 br
☐ 78 br
☐ 80 br



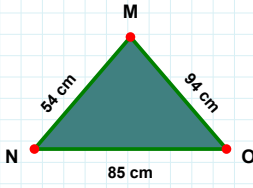
|EA| kaç brdir?

- ☐ 69 br
☐ 66 br
☐ 64 br



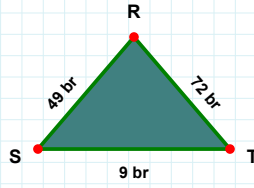
|EL| kaç brdir?

- ☐ 64 br
☐ 54 br
☐ 62 br



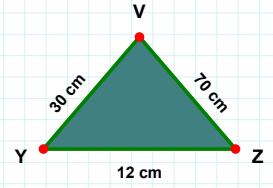
|NO| kaç cmdir?

- ☐ 85 cm
☐ 87 cm
☐ 90 cm



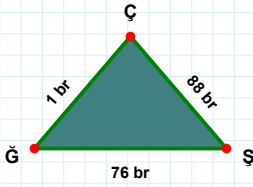
|ZV| kaç cmdir?

- ☐ 70 cm
☐ 75 cm
☐ 69 cm



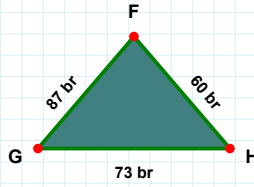
|RS| kaç brdir?

- ☐ 59 br
☐ 46 br
☐ 49 br



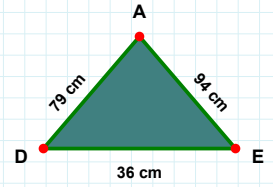
|ŞÇ| kaç brdir?

- ☐ 91 br
☐ 88 br
☐ 87 br



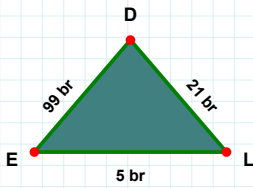
|DE| kaç cmdir?

- ☐ 38 cm
☐ 36 cm
☐ 34 cm



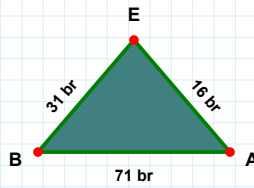
|FG| kaç brdir?

- ☐ 77 br
☐ 87 br
☐ 88 br



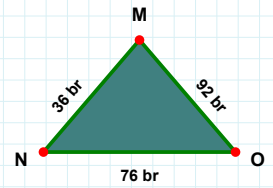
|EL| kaç brdir?

- ☐ 10 br
☐ 5 br
☐ 8 br



|EB| kaç brdir?

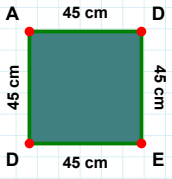
- ☐ 30 br
☐ 41 br
☐ 31 br



|NO| kaç brdir?

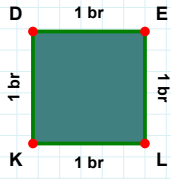
- ☐ 76 br
☐ 79 br
☐ 73 br

SORU: Aşağıdaki şekillerde istenen kenarın kaç birim veya santimetre olduğunu bulunuz.



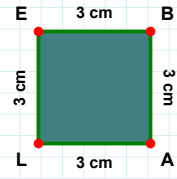
|KD| kaç brdir?

- ☐ 1 br
☐ 2 br
☐ 6 br



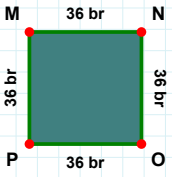
|AL| kaç cmdir?

- ☐ 1 cm
☐ 8 cm
☐ 3 cm



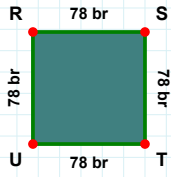
|DA| kaç cmdir?

- ☐ 45 cm
☐ 46 cm
☐ 47 cm



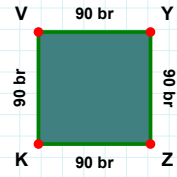
|YZ| kaç brdir?

- ☐ 92 br
☐ 89 br
☐ 90 br



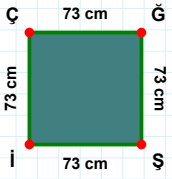
|NO| kaç brdir?

- ☐ 38 br
☐ 36 br
☐ 46 br



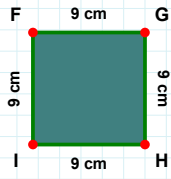
|ST| kaç brdir?

- ☐ 75 br
☐ 73 br
☐ 78 br



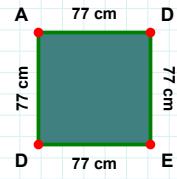
|Şİ| kaç cmdir?

- ☐ 76 cm
☐ 78 cm
☐ 73 cm



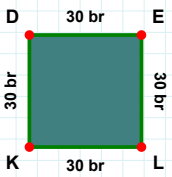
|HI| kaç cmdir?

- ☐ 12 cm
☐ 9 cm
☐ 10 cm



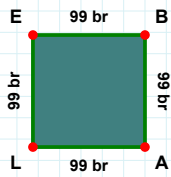
|ED| kaç cmdir?

- ☐ 72 cm
☐ 78 cm
☐ 77 cm



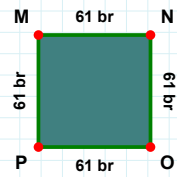
|EL| kaç brdir?

- ☐ 40 br
☐ 30 br
☐ 35 br



|LE| kaç brdir?

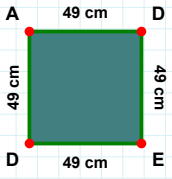
- ☐ 94 br
☐ 99 br
☐ 89 br



|MN| kaç brdir?

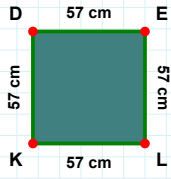
- ☐ 59 br
☐ 61 br
☐ 56 br

SORU: Aşağıdaki şekillerde istenen kenarın kaç birim veya santimetre olduğunu bulunuz.



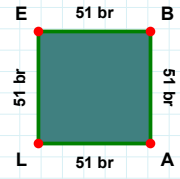
|AD| kaç cm'dir?

- ☐ 49 cm
☐ 51 cm
☐ 48 cm



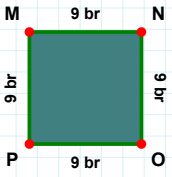
|KD| kaç cm'dir?

- ☐ 59 cm
☐ 47 cm
☐ 57 cm



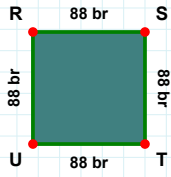
|EB| kaç br'dir?

- ☐ 41 br
☐ 53 br
☐ 51 br



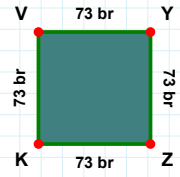
|PM| kaç br'dir?

- ☐ 10 br
☐ 9 br
☐ 8 br



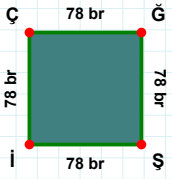
|TU| kaç br'dir?

- ☐ 86 br
☐ 88 br
☐ 91 br



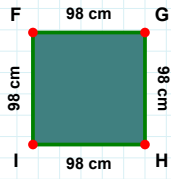
|KV| kaç br'dir?

- ☐ 73 br
☐ 71 br
☐ 78 br



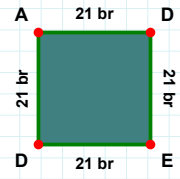
|ÇĞ| kaç br'dir?

- ☐ 81 br
☐ 78 br
☐ 68 br



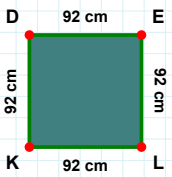
|AD| kaç br'dir?

- ☐ 21 br
☐ 23 br
☐ 11 br



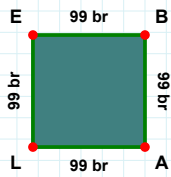
|İF| kaç cm'dir?

- ☐ 95 cm
☐ 98 cm
☐ 88 cm



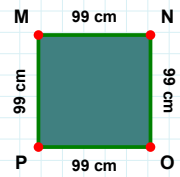
|LE| kaç br'dir?

- ☐ 94 br
☐ 97 br
☐ 99 br



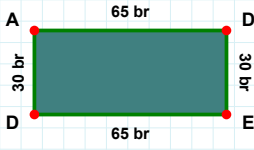
|OP| kaç cm'dir?

- ☐ 89 cm
☐ 94 cm
☐ 99 cm



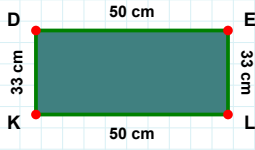
|LK| kaç cm'dir?

- ☐ 82 cm
☐ 97 cm
☐ 92 cm

SORU: Aşağıdaki şekillerde istenen kenarın kaç birim veya santimetre olduğunu bulunuz.

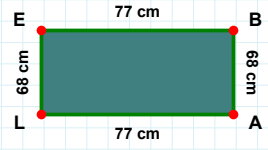
|AD| kaç brdir?

- ☐ 65 br
☐ 60 br
☐ 67 br



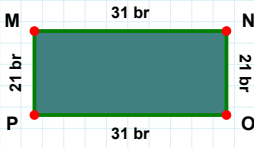
|EB| kaç cmdir?

- ☐ 76 cm
☐ 77 cm
☐ 78 cm



|DE| kaç cmdir?

- ☐ 49 cm
☐ 45 cm
☐ 50 cm



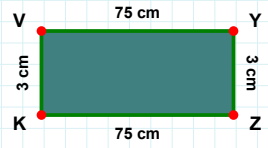
|OP| kaç brdir?

- ☐ 29 br
☐ 30 br
☐ 31 br



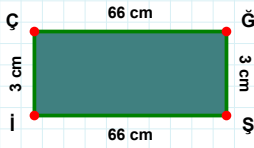
|UR| kaç brdir?

- ☐ 55 br
☐ 57 br
☐ 58 br



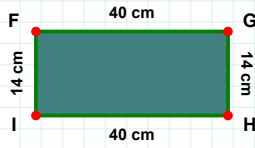
|VY| kaç cmdir?

- ☐ 65 cm
☐ 75 cm
☐ 78 cm



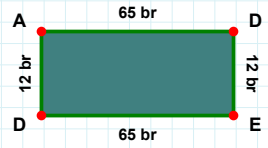
|İŞ| kaç cmdir?

- ☐ 3 cm
☐ 5 cm
☐ 4 cm



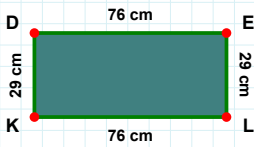
|İF| kaç cmdir?

- ☐ 12 cm
☐ 13 cm
☐ 14 cm



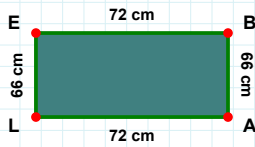
|DA| kaç brdir?

- ☐ 12 br
☐ 22 br
☐ 7 br



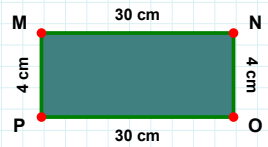
|OP| kaç cmdir?

- ☐ 30 cm
☐ 29 cm
☐ 20 cm



|LK| kaç cmdir?

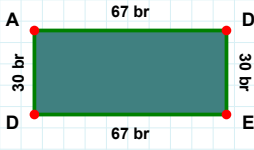
- ☐ 71 cm
☐ 76 cm
☐ 66 cm



|EB| kaç cmdir?

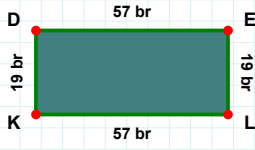
- ☐ 73 cm
☐ 70 cm
☐ 72 cm

SORU: Aşağıdaki şekillerde istenen kenarın kaç birim veya santimetre olduğunu bulunuz.



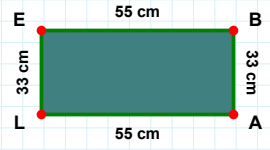
|KD| kaç brdir?

- ☐ 20 br
☐ 16 br
☐ 19 br



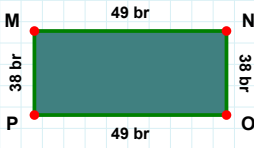
|DE| kaç brdir?

- ☐ 30 br
☐ 20 br
☐ 40 br



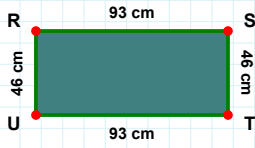
|EB| kaç cmdir?

- ☐ 52 cm
☐ 53 cm
☐ 55 cm



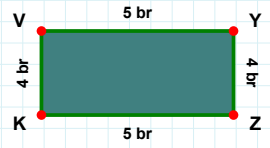
|YY| kaç brdir?

- ☐ 5 br
☐ 3 br
☐ 4 br



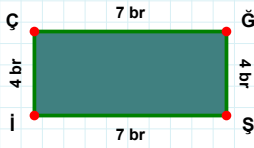
|TU| kaç cmdir?

- ☐ 93 cm
☐ 90 cm
☐ 96 cm



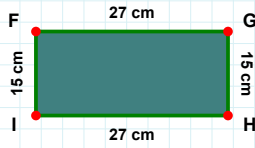
|OP| kaç brdir?

- ☐ 47 br
☐ 44 br
☐ 49 br



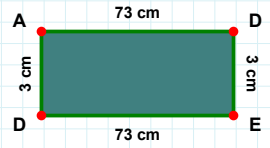
|DA| kaç cmdir?

- ☐ 4 cm
☐ 3 cm
☐ 13 cm



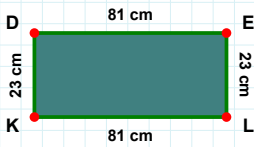
|İF| kaç cmdir?

- ☐ 18 cm
☐ 25 cm
☐ 15 cm



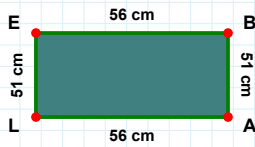
|İÇ| kaç brdir?

- ☐ 4 br
☐ 5 br
☐ 7 br



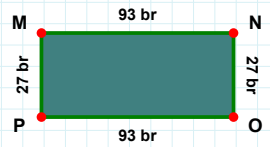
|OP| kaç brdir?

- ☐ 93 br
☐ 95 br
☐ 94 br



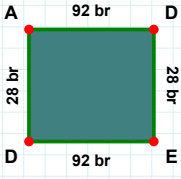
|KD| kaç cmdir?

- ☐ 23 cm
☐ 26 cm
☐ 25 cm



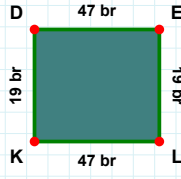
|AL| kaç cmdir?

- ☐ 51 cm
☐ 55 cm
☐ 56 cm

SORU: Aşağıdaki şekillerde istenen kenarın kaç birim veya santimetre olduğunu bulunuz.

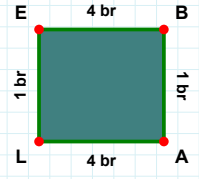
|DA| kaç brdir?

- ☐ 26 br
☐ 25 br
☐ 28 br



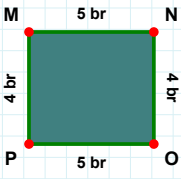
|DE| kaç brdir?

- ☐ 45 br
☐ 47 br
☐ 50 br



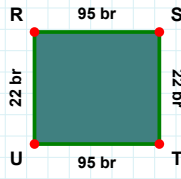
|AL| kaç brdir?

- ☐ 1 br
☐ 5 br
☐ 4 br



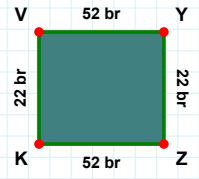
|NO| kaç brdir?

- ☐ 14 br
☐ 4 br
☐ 9 br



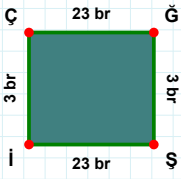
|TU| kaç brdir?

- ☐ 97 br
☐ 92 br
☐ 95 br



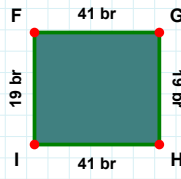
|ZK| kaç brdir?

- ☐ 57 br
☐ 52 br
☐ 51 br



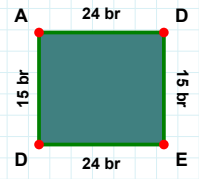
|İŞ| kaç brdir?

- ☐ 13 br
☐ 15 br
☐ 18 br



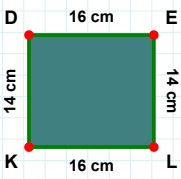
|İÇ| kaç brdir?

- ☐ 13 br
☐ 3 br
☐ 4 br



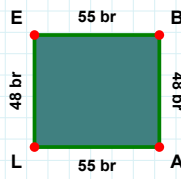
|GH| kaç brdir?

- ☐ 17 br
☐ 19 br
☐ 20 br



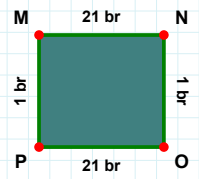
|NO| kaç brdir?

- ☐ 1 br
☐ 6 br
☐ 4 br



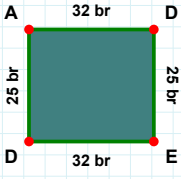
|LK| kaç cmdir?

- ☐ 21 cm
☐ 16 cm
☐ 18 cm



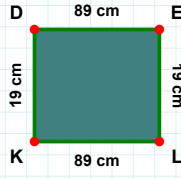
|LE| kaç brdir?

- ☐ 48 br
☐ 47 br
☐ 49 br

SORU: Aşağıdaki şekillerde istenen kenarın kaç birim veya santimetre olduğunu bulunuz.

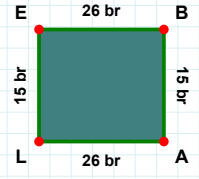
|DE| kaç cm'dir?

- ☐ 91 cm
☐ 89 cm
☐ 88 cm



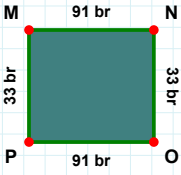
|LE| kaç br'dir?

- ☐ 16 br
☐ 13 br
☐ 15 br



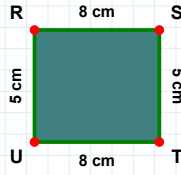
|DA| kaç br'dir?

- ☐ 22 br
☐ 25 br
☐ 35 br



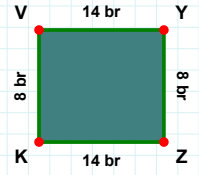
|TU| kaç cm'dir?

- ☐ 9 cm
☐ 10 cm
☐ 8 cm



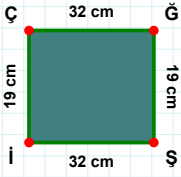
|ZK| kaç br'dir?

- ☐ 14 br
☐ 12 br
☐ 16 br



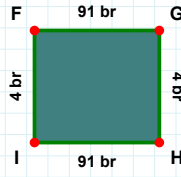
|PM| kaç br'dir?

- ☐ 33 br
☐ 34 br
☐ 38 br



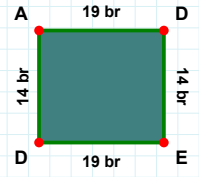
|ĞŞ| kaç cm'dir?

- ☐ 19 cm
☐ 20 cm
☐ 22 cm



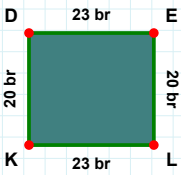
|İF| kaç br'dir?

- ☐ 3 br
☐ 4 br
☐ 5 br



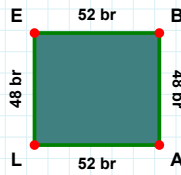
|AD| kaç br'dir?

- ☐ 24 br
☐ 19 br
☐ 29 br



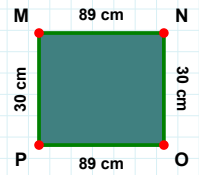
|EL| kaç br'dir?

- ☐ 17 br
☐ 20 br
☐ 30 br



|MN| kaç cm'dir?

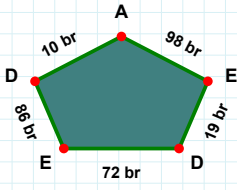
- ☐ 90 cm
☐ 89 cm
☐ 84 cm



|AL| kaç br'dir?

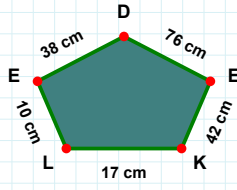
- ☐ 47 br
☐ 49 br
☐ 52 br

SORU: Aşağıdaki şekillerde istenen kenarın kaç birim veya santimetre olduğunu bulunuz.



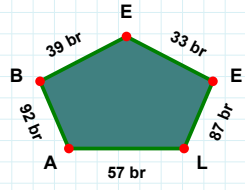
|DE| kaç brdir?

- ☐ 86 br
☐ 87 br
☐ 91 br



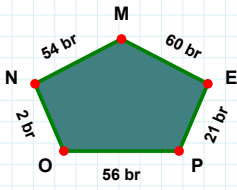
|LK| kaç cmdir?

- ☐ 20 cm
☐ 17 cm
☐ 7 cm



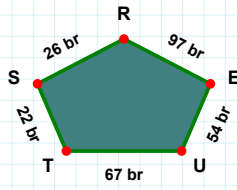
|EB| kaç brdir?

- ☐ 40 br
☐ 36 br
☐ 39 br



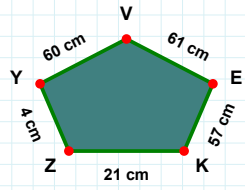
|YZ| kaç cmdir?

- ☐ 4 cm
☐ 5 cm
☐ 9 cm



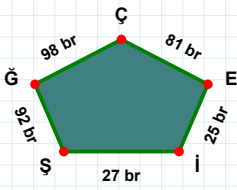
|PE| kaç brdir?

- ☐ 19 br
☐ 18 br
☐ 21 br



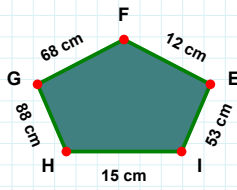
|UE| kaç brdir?

- ☐ 44 br
☐ 57 br
☐ 54 br



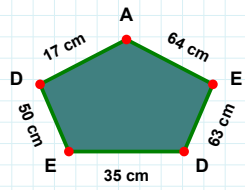
|Şİ| kaç brdir?

- ☐ 29 br
☐ 27 br
☐ 24 br



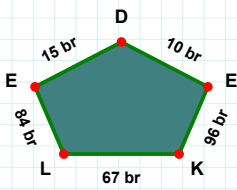
|FG| kaç cmdir?

- ☐ 68 cm
☐ 78 cm
☐ 66 cm



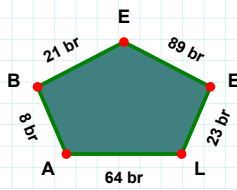
|AD| kaç cmdir?

- ☐ 27 cm
☐ 22 cm
☐ 17 cm



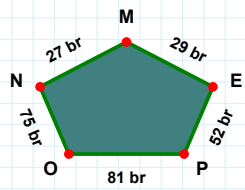
|ED| kaç brdir?

- ☐ 10 br
☐ 9 br
☐ 15 br



|NO| kaç brdir?

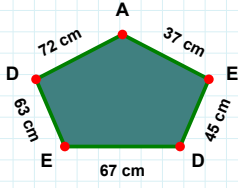
- ☐ 85 br
☐ 73 br
☐ 75 br



|EB| kaç brdir?

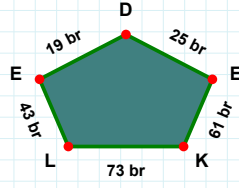
- ☐ 21 br
☐ 26 br
☐ 22 br

SORU: Aşağıdaki şekillerde istenen kenarın kaç birim veya santimetre olduğunu bulunuz.



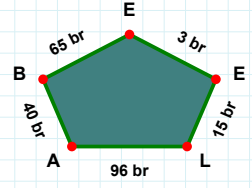
|LK| kaç brdir?

- ☐ 73 br
☐ 83 br
☐ 70 br



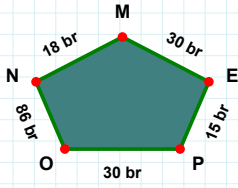
|BA| kaç brdir?

- ☐ 40 br
☐ 35 br
☐ 50 br



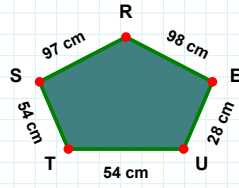
|ED| kaç cmdir?

- ☐ 67 cm
☐ 68 cm
☐ 57 cm



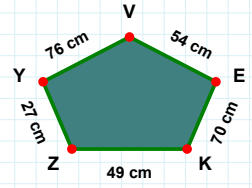
|OP| kaç brdir?

- ☐ 30 br
☐ 27 br
☐ 28 br



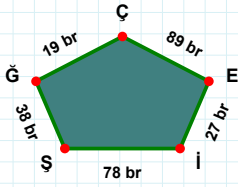
|KE| kaç cmdir?

- ☐ 70 cm
☐ 75 cm
☐ 80 cm



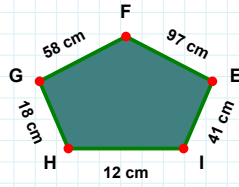
|UE| kaç cmdir?

- ☐ 27 cm
☐ 28 cm
☐ 29 cm



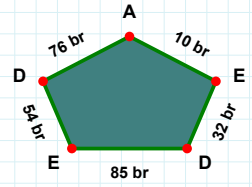
|ED| kaç brdir?

- ☐ 90 br
☐ 75 br
☐ 85 br



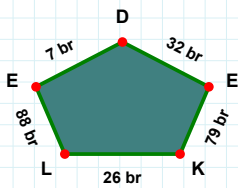
|Şİ| kaç brdir?

- ☐ 88 br
☐ 78 br
☐ 73 br



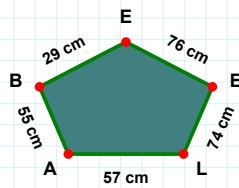
|HI| kaç cmdir?

- ☐ 10 cm
☐ 2 cm
☐ 12 cm



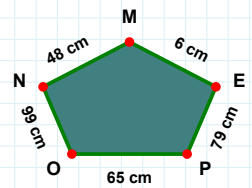
|AL| kaç cmdir?

- ☐ 47 cm
☐ 58 cm
☐ 57 cm



|DE| kaç brdir?

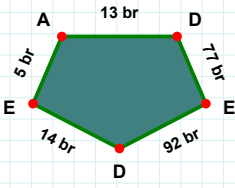
- ☐ 7 br
☐ 4 br
☐ 6 br



|OP| kaç cmdir?

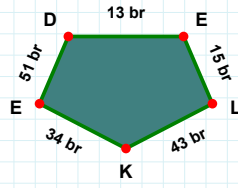
- ☐ 55 cm
☐ 66 cm
☐ 65 cm

SORU: Aşağıdaki şekillerde istenen kenarın kaç birim veya santimetre olduğunu bulunuz.



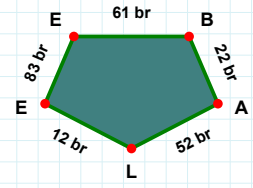
|EE| kaç brdir?

- ☐ 85 br
☐ 88 br
☐ 83 br



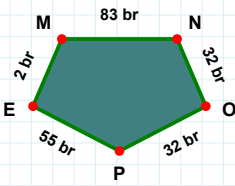
|DE| kaç brdir?

- ☐ 74 br
☐ 77 br
☐ 87 br



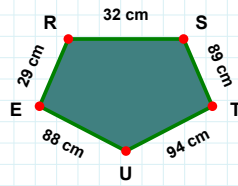
|ED| kaç brdir?

- ☐ 56 br
☐ 49 br
☐ 51 br



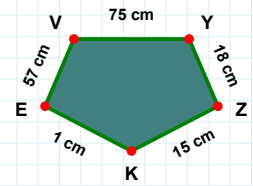
|OP| kaç brdir?

- ☐ 34 br
☐ 32 br
☐ 37 br



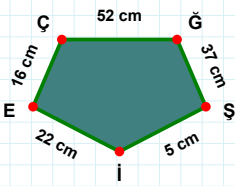
|KE| kaç cmdir?

- ☐ 3 cm
☐ 11 cm
☐ 1 cm



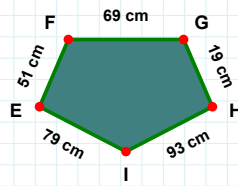
|TU| kaç cmdir?

- ☐ 94 cm
☐ 99 cm
☐ 97 cm



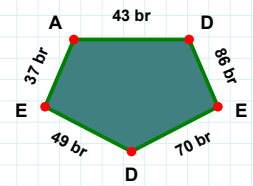
|EÇ| kaç cmdir?

- ☐ 19 cm
☐ 16 cm
☐ 13 cm



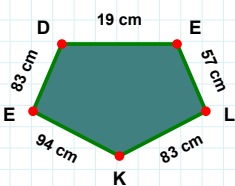
|FG| kaç cmdir?

- ☐ 69 cm
☐ 71 cm
☐ 68 cm



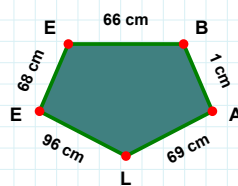
|AD| kaç brdir?

- ☐ 45 br
☐ 38 br
☐ 43 br



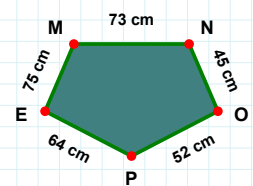
|BA| kaç cmdir?

- ☐ 1 cm
☐ 2 cm
☐ 6 cm



|LK| kaç cmdir?

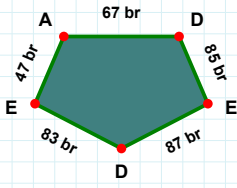
- ☐ 83 cm
☐ 82 cm
☐ 81 cm



|NO| kaç cmdir?

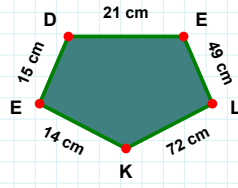
- ☐ 55 cm
☐ 47 cm
☐ 45 cm

SORU: Aşağıdaki şekillerde istenen kenarın kaç birim veya santimetre olduğunu bulunuz.



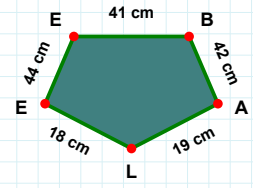
|ED| kaç cm'dir?

- ☐ 15 cm
☐ 10 cm
☐ 12 cm



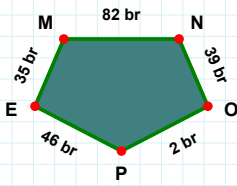
|EE| kaç cm'dir?

- ☐ 44 cm
☐ 47 cm
☐ 49 cm



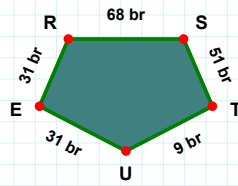
|EA| kaç br'dir?

- ☐ 37 br
☐ 47 br
☐ 49 br



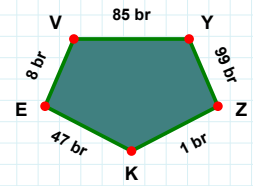
|PE| kaç br'dir?

- ☐ 43 br
☐ 47 br
☐ 46 br



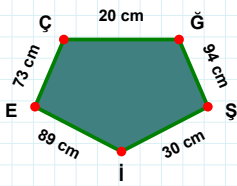
|ER| kaç br'dir?

- ☐ 31 br
☐ 33 br
☐ 29 br



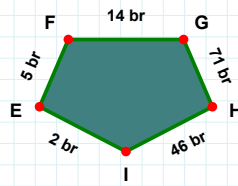
|KE| kaç br'dir?

- ☐ 57 br
☐ 47 br
☐ 42 br



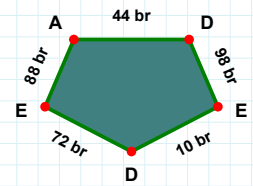
|DE| kaç br'dir?

- ☐ 98 br
☐ 96 br
☐ 95 br



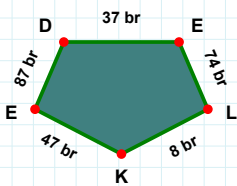
|İE| kaç br'dir?

- ☐ 5 br
☐ 4 br
☐ 2 br



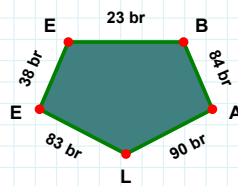
|ĞŞ| kaç cm'dir?

- ☐ 96 cm
☐ 94 cm
☐ 84 cm



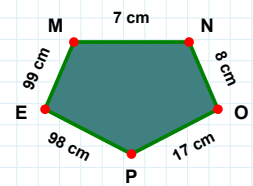
|EB| kaç br'dir?

- ☐ 26 br
☐ 28 br
☐ 23 br



|ED| kaç br'dir?

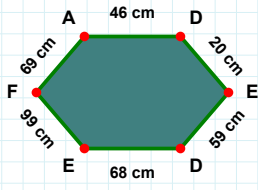
- ☐ 87 br
☐ 77 br
☐ 97 br



|PE| kaç cm'dir?

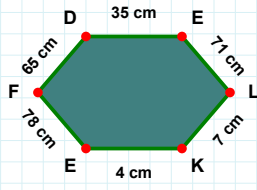
- ☐ 98 cm
☐ 99 cm
☐ 97 cm

SORU: Aşağıdaki şekillerde istenen kenarın kaç birim veya santimetre olduğunu bulunuz.



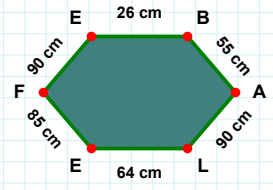
|DE| kaç cmdir?

- ☐ 20 cm
☐ 19 cm
☐ 18 cm



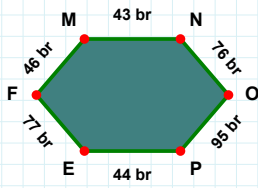
|EB| kaç cmdir?

- ☐ 36 cm
☐ 26 cm
☐ 23 cm



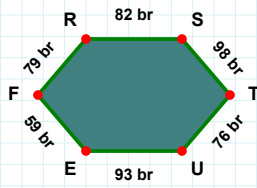
|FD| kaç cmdir?

- ☐ 62 cm
☐ 75 cm
☐ 65 cm



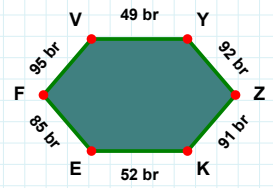
|EF| kaç brdir?

- ☐ 57 br
☐ 59 br
☐ 60 br



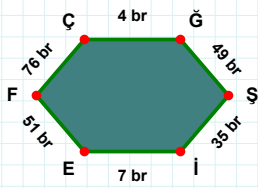
|OP| kaç brdir?

- ☐ 95 br
☐ 94 br
☐ 97 br



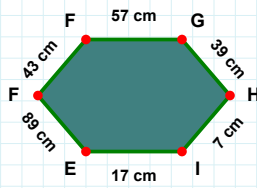
|KE| kaç brdir?

- ☐ 52 br
☐ 54 br
☐ 50 br



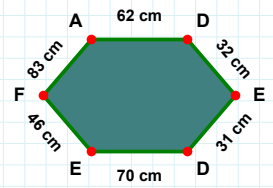
|ED| kaç cmdir?

- ☐ 32 cm
☐ 36 cm
☐ 31 cm



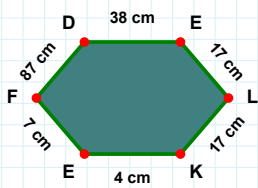
|FG| kaç cmdir?

- ☐ 59 cm
☐ 47 cm
☐ 57 cm



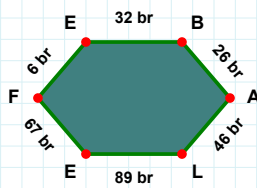
|GS| kaç brdir?

- ☐ 54 br
☐ 47 br
☐ 49 br



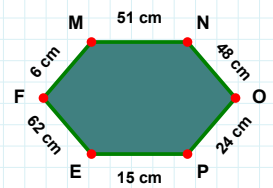
|AL| kaç brdir?

- ☐ 48 br
☐ 46 br
☐ 36 br



|LK| kaç cmdir?

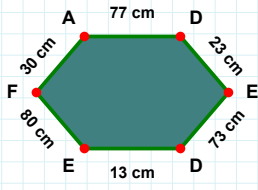
- ☐ 17 cm
☐ 19 cm
☐ 12 cm



|PE| kaç cmdir?

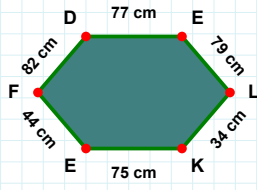
- ☐ 15 cm
☐ 13 cm
☐ 5 cm

SORU: Aşağıdaki şekillerde istenen kenarın kaç birim veya santimetre olduğunu bulunuz.



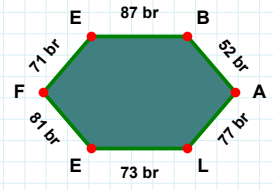
|LE| kaç brdir?

- ☐ 72 br
☐ 76 br
☐ 73 br



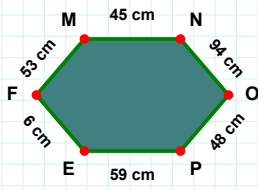
|EF| kaç cmdir?

- ☐ 44 cm
☐ 39 cm
☐ 34 cm



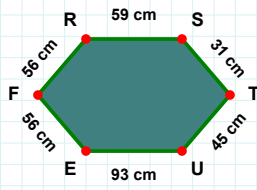
|DE| kaç cmdir?

- ☐ 13 cm
☐ 10 cm
☐ 14 cm



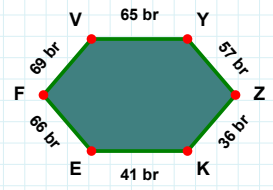
|EF| kaç cmdir?

- ☐ 46 cm
☐ 56 cm
☐ 55 cm



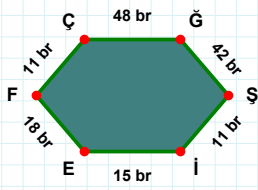
|VY| kaç brdir?

- ☐ 67 br
☐ 55 br
☐ 65 br



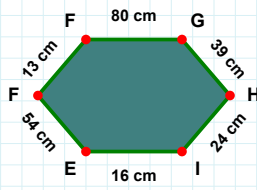
|NO| kaç cmdir?

- ☐ 96 cm
☐ 93 cm
☐ 94 cm



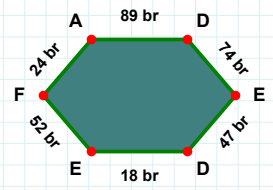
|HI| kaç cmdir?

- ☐ 27 cm
☐ 25 cm
☐ 24 cm



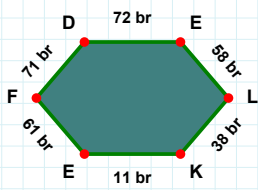
|ED| kaç brdir?

- ☐ 42 br
☐ 47 br
☐ 44 br



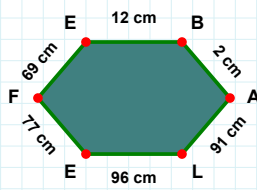
|Şİ| kaç brdir?

- ☐ 14 br
☐ 11 br
☐ 6 br



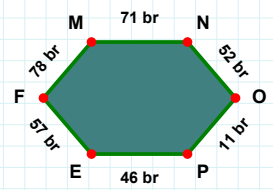
|FD| kaç brdir?

- ☐ 71 br
☐ 73 br
☐ 74 br



|BA| kaç cmdir?

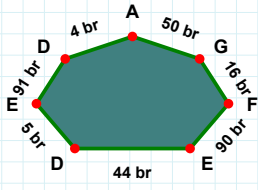
- ☐ 4 cm
☐ 2 cm
☐ 1 cm



|PE| kaç brdir?

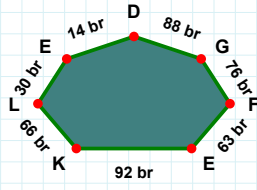
- ☐ 46 br
☐ 43 br
☐ 44 br

SORU: Aşağıdaki şekillerde istenen kenarın kaç birim veya santimetre olduğunu bulunuz.



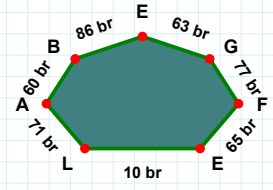
|EF| kaç brdir?

- ☐ 87 br
☐ 91 br
☐ 90 br



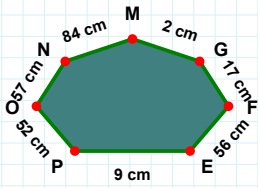
|GD| kaç brdir?

- ☐ 93 br
☐ 88 br
☐ 87 br



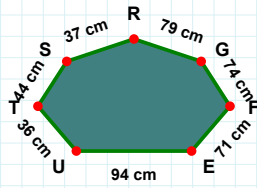
|GE| kaç brdir?

- ☐ 63 br
☐ 62 br
☐ 65 br



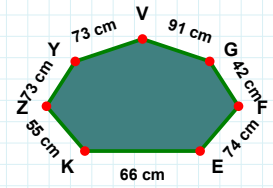
|FG| kaç cmdir?

- ☐ 76 cm
☐ 74 cm
☐ 72 cm



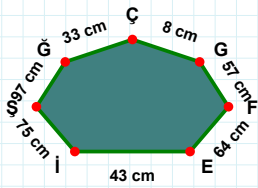
|KE| kaç cmdir?

- ☐ 76 cm
☐ 66 cm
☐ 56 cm



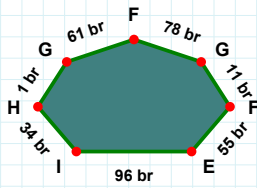
|MN| kaç cmdir?

- ☐ 85 cm
☐ 84 cm
☐ 82 cm



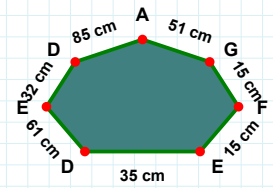
|Şİ| kaç cmdir?

- ☐ 75 cm
☐ 78 cm
☐ 85 cm



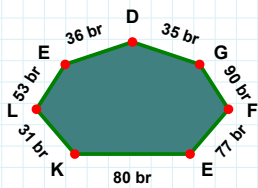
|GH| kaç brdir?

- ☐ 1 br
☐ 6 br
☐ 11 br



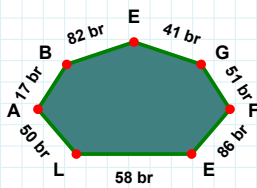
|FG| kaç cmdir?

- ☐ 20 cm
☐ 18 cm
☐ 15 cm



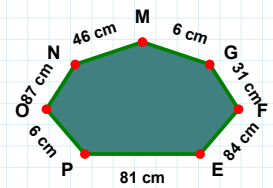
|EF| kaç cmdir?

- ☐ 84 cm
☐ 85 cm
☐ 83 cm



|EF| kaç brdir?

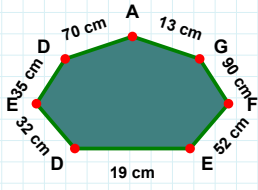
- ☐ 91 br
☐ 86 br
☐ 81 br



|FG| kaç brdir?

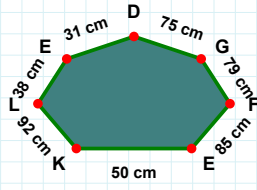
- ☐ 95 br
☐ 87 br
☐ 90 br

SORU: Aşağıdaki şekillerde istenen kenarın kaç birim veya santimetre olduğunu bulunuz.



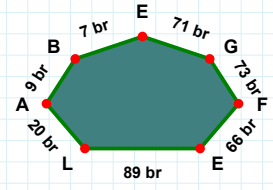
|LE| kaç brdir?

- ☐ 89 br
☐ 92 br
☐ 84 br



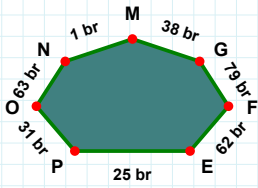
|EF| kaç cmdir?

- ☐ 50 cm
☐ 55 cm
☐ 52 cm



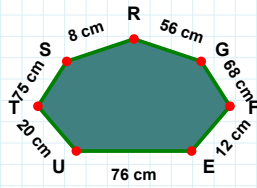
|KE| kaç cmdir?

- ☐ 51 cm
☐ 45 cm
☐ 50 cm



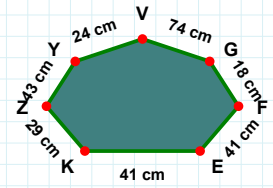
|FG| kaç cmdir?

- ☐ 67 cm
☐ 58 cm
☐ 68 cm



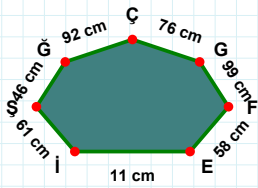
|GV| kaç cmdir?

- ☐ 73 cm
☐ 69 cm
☐ 74 cm



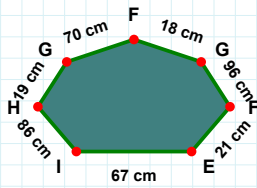
|GM| kaç brdir?

- ☐ 48 br
☐ 38 br
☐ 28 br



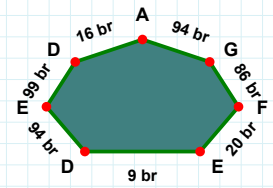
|GŞ| kaç cmdir?

- ☐ 48 cm
☐ 51 cm
☐ 46 cm



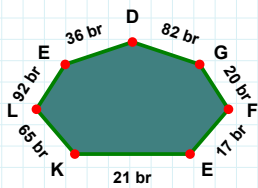
|ED| kaç brdir?

- ☐ 94 br
☐ 99 br
☐ 96 br



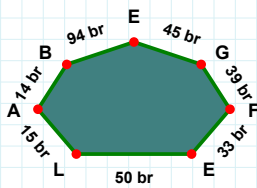
|FG| kaç cmdir?

- ☐ 71 cm
☐ 69 cm
☐ 70 cm



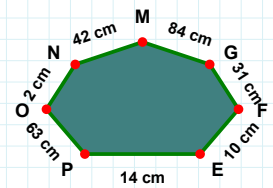
|DE| kaç brdir?

- ☐ 39 br
☐ 36 br
☐ 35 br



|FG| kaç cmdir?

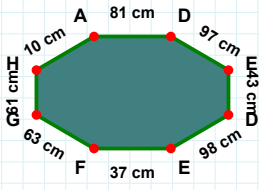
- ☐ 36 cm
☐ 30 cm
☐ 31 cm



|GE| kaç brdir?

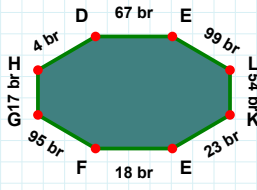
- ☐ 45 br
☐ 42 br
☐ 35 br

SORU: Aşağıdaki şekillerde istenen kenarın kaç birim veya santimetre olduğunu bulunuz.



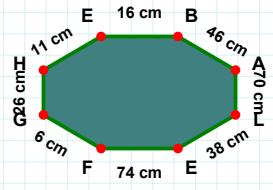
|LK| kaç brdir?

- ☐ 53 br
☐ 56 br
☐ 54 br



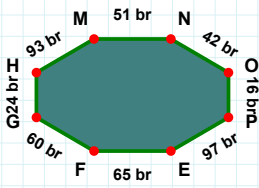
|GH| kaç cmdir?

- ☐ 58 cm
☐ 61 cm
☐ 63 cm



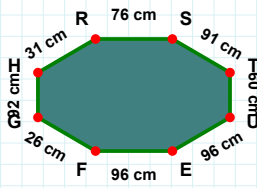
|EB| kaç cmdir?

- ☐ 15 cm
☐ 19 cm
☐ 16 cm



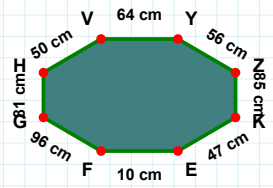
|YZ| kaç cmdir?

- ☐ 61 cm
☐ 56 cm
☐ 66 cm



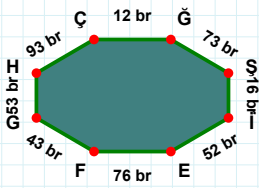
|GH| kaç brdir?

- ☐ 19 br
☐ 27 br
☐ 24 br



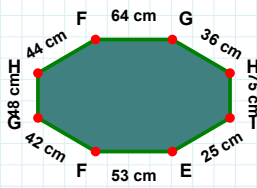
|RS| kaç cmdir?

- ☐ 76 cm
☐ 86 cm
☐ 73 cm



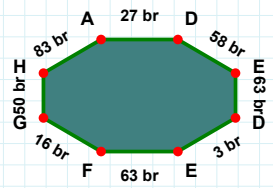
|EF| kaç brdir?

- ☐ 61 br
☐ 58 br
☐ 63 br



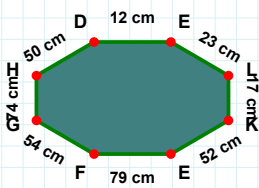
|FG| kaç cmdir?

- ☐ 61 cm
☐ 66 cm
☐ 64 cm



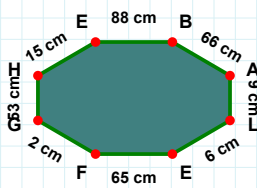
|GH| kaç brdir?

- ☐ 53 br
☐ 58 br
☐ 48 br



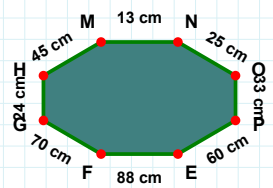
|FG| kaç cmdir?

- ☐ 54 cm
☐ 49 cm
☐ 64 cm



|LE| kaç cmdir?

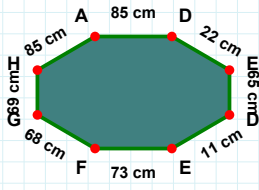
- ☐ 11 cm
☐ 1 cm
☐ 6 cm



|OP| kaç cmdir?

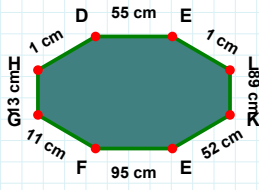
- ☐ 33 cm
☐ 36 cm
☐ 23 cm

SORU: Aşağıdaki şekillerde istenen kenarın kaç birim veya santimetre olduğunu bulunuz.



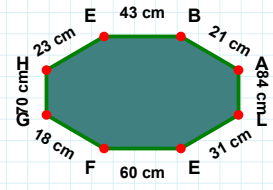
|DE| kaç cm'dir?

- ☐ 12 cm
☐ 11 cm
☐ 21 cm



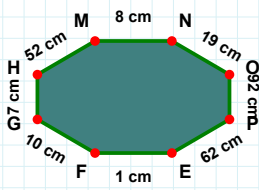
|EF| kaç cm'dir?

- ☐ 60 cm
☐ 57 cm
☐ 63 cm



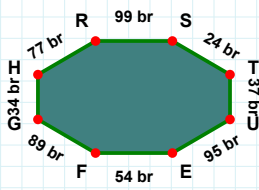
|HD| kaç cm'dir?

- ☐ 2 cm
☐ 11 cm
☐ 1 cm



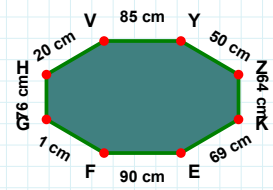
|MN| kaç cm'dir?

- ☐ 8 cm
☐ 13 cm
☐ 6 cm



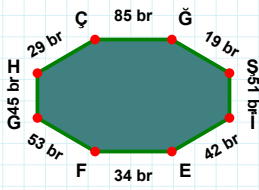
|UE| kaç br'dir?

- ☐ 95 br
☐ 85 br
☐ 97 br



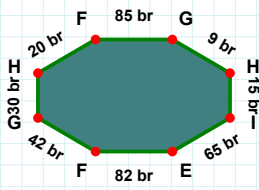
|KE| kaç cm'dir?

- ☐ 70 cm
☐ 69 cm
☐ 72 cm



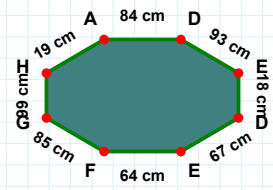
|GH| kaç br'dir?

- ☐ 30 br
☐ 28 br
☐ 40 br



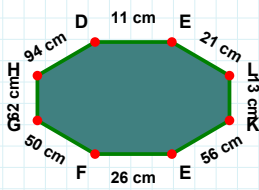
|DE| kaç cm'dir?

- ☐ 69 cm
☐ 66 cm
☐ 67 cm



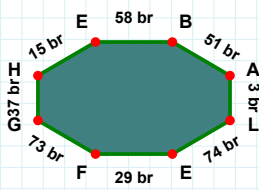
|FG| kaç br'dir?

- ☐ 53 br
☐ 48 br
☐ 51 br



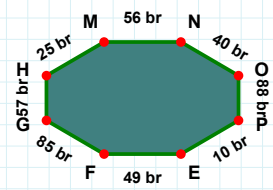
|BA| kaç br'dir?

- ☐ 51 br
☐ 49 br
☐ 54 br



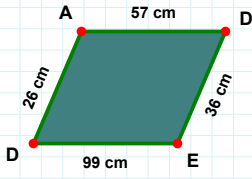
|EF| kaç br'dir?

- ☐ 49 br
☐ 44 br
☐ 46 br



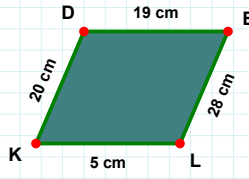
|KE| kaç cm'dir?

- ☐ 55 cm
☐ 46 cm
☐ 56 cm

SORU: Aşağıdaki şekillerde istenen kenarın kaç birim veya santimetre olduğunu bulunuz.

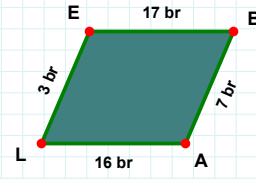
|DE| kaç cmdir?

- ☐ 19 cm
☐ 22 cm
☐ 14 cm



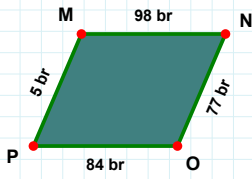
|EB| kaç brdir?

- ☐ 18 br
☐ 7 br
☐ 17 br



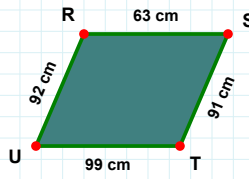
|ED| kaç cmdir?

- ☐ 99 cm
☐ 98 cm
☐ 96 cm



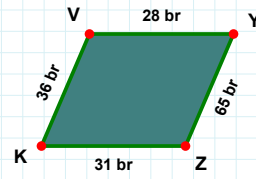
|RS| kaç cmdir?

- ☐ 58 cm
☐ 60 cm
☐ 63 cm



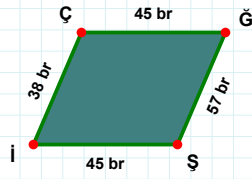
|ZK| kaç brdir?

- ☐ 34 br
☐ 31 br
☐ 32 br



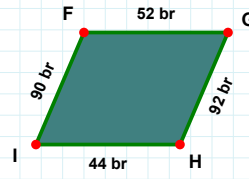
|NO| kaç brdir?

- ☐ 75 br
☐ 77 br
☐ 74 br



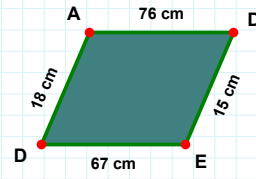
|İF| kaç brdir?

- ☐ 95 br
☐ 90 br
☐ 88 br



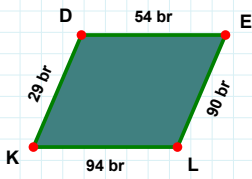
|Şİ| kaç brdir?

- ☐ 43 br
☐ 47 br
☐ 45 br



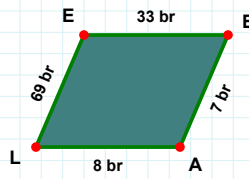
|ED| kaç cmdir?

- ☐ 69 cm
☐ 67 cm
☐ 66 cm



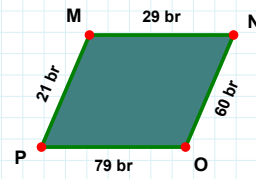
|LE| kaç brdir?

- ☐ 67 br
☐ 72 br
☐ 69 br



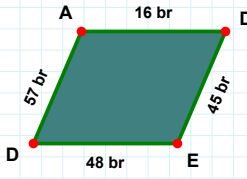
|KD| kaç brdir?

- ☐ 34 br
☐ 29 br
☐ 28 br



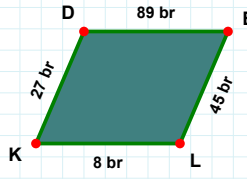
|OP| kaç brdir?

- ☐ 76 br
☐ 74 br
☐ 79 br

SORU: Aşağıdaki şekillerde istenen kenarın kaç birim veya santimetre olduğunu bulunuz.

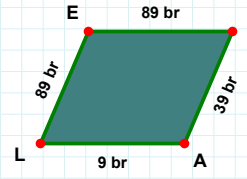
|EB| kaç brdir?

- ☐ 86 br
☐ 89 br
☐ 87 br



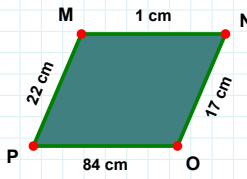
|KD| kaç brdir?

- ☐ 22 br
☐ 26 br
☐ 27 br



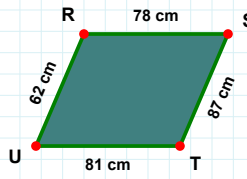
|DE| kaç brdir?

- ☐ 40 br
☐ 45 br
☐ 35 br



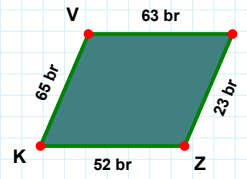
|MN| kaç cmdir?

- ☐ 3 cm
☐ 4 cm
☐ 1 cm



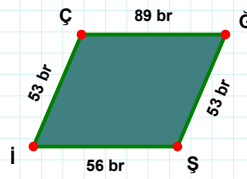
|KV| kaç brdir?

- ☐ 65 br
☐ 68 br
☐ 60 br



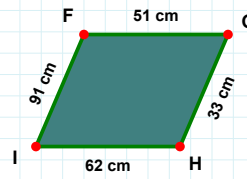
|ST| kaç cmdir?

- ☐ 87 cm
☐ 85 cm
☐ 89 cm



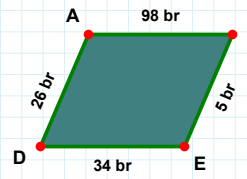
|İÇ| kaç brdir?

- ☐ 56 br
☐ 63 br
☐ 53 br



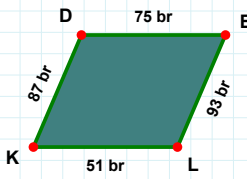
|FG| kaç cmdir?

- ☐ 49 cm
☐ 51 cm
☐ 61 cm



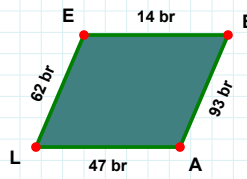
|DE| kaç brdir?

- ☐ 5 br
☐ 7 br
☐ 6 br



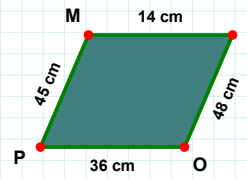
|DE| kaç brdir?

- ☐ 76 br
☐ 75 br
☐ 85 br



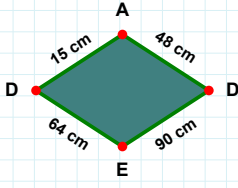
|LE| kaç brdir?

- ☐ 62 br
☐ 57 br
☐ 63 br



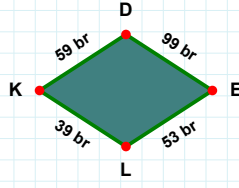
|MN| kaç cmdir?

- ☐ 16 cm
☐ 14 cm
☐ 17 cm

SORU: Aşağıdaki şekillerde istenen kenarın kaç birim veya santimetre olduğunu bulunuz.

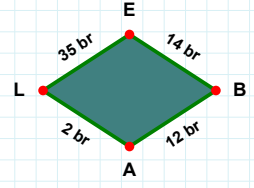
|DE| kaç cm'dir?

- ☐ 85 cm
☐ 90 cm
☐ 91 cm



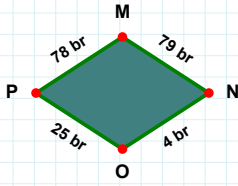
|LE| kaç br'dir?

- ☐ 33 br
☐ 25 br
☐ 35 br



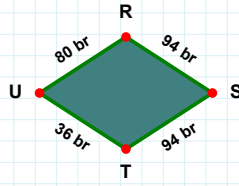
|LK| kaç br'dir?

- ☐ 44 br
☐ 39 br
☐ 29 br



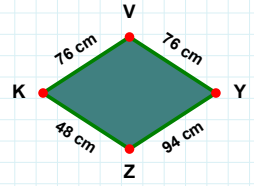
|KV| kaç cm'dir?

- ☐ 76 cm
☐ 74 cm
☐ 81 cm



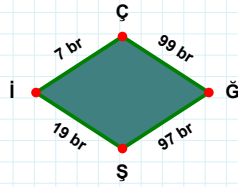
|UR| kaç br'dir?

- ☐ 83 br
☐ 82 br
☐ 80 br



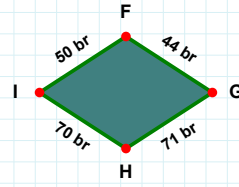
|OP| kaç br'dir?

- ☐ 30 br
☐ 24 br
☐ 25 br



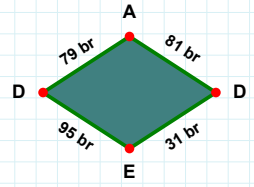
|ED| kaç br'dir?

- ☐ 93 br
☐ 95 br
☐ 92 br



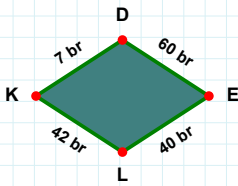
|FG| kaç br'dir?

- ☐ 43 br
☐ 34 br
☐ 44 br



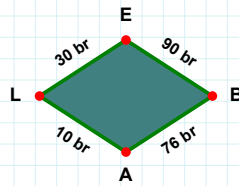
|İÇ| kaç br'dir?

- ☐ 12 br
☐ 7 br
☐ 4 br



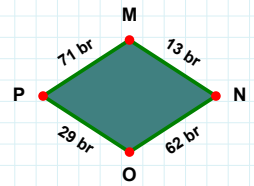
|AL| kaç br'dir?

- ☐ 7 br
☐ 9 br
☐ 10 br



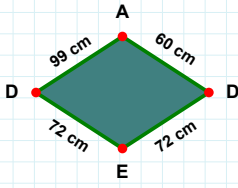
|EL| kaç br'dir?

- ☐ 41 br
☐ 40 br
☐ 30 br



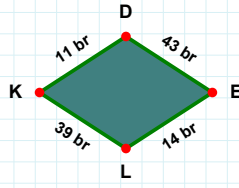
|OP| kaç br'dir?

- ☐ 30 br
☐ 26 br
☐ 29 br

SORU: Aşağıdaki şekillerde istenen kenarın kaç birim veya santimetre olduğunu bulunuz.

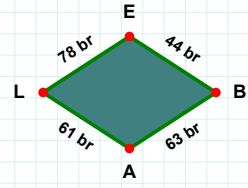
|BA| kaç brdir?

- ☐ 68 br
☐ 63 br
☐ 60 br



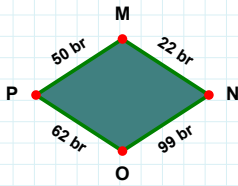
|DE| kaç brdir?

- ☐ 46 br
☐ 43 br
☐ 33 br



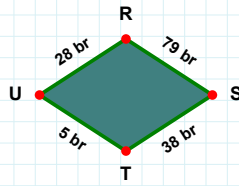
|AD| kaç cmdir?

- ☐ 50 cm
☐ 60 cm
☐ 55 cm



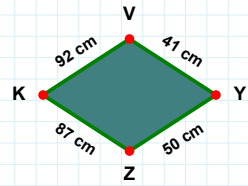
|UR| kaç brdir?

- ☐ 28 br
☐ 27 br
☐ 30 br



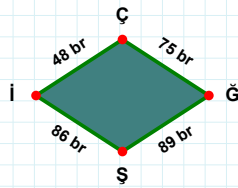
|MN| kaç brdir?

- ☐ 22 br
☐ 21 br
☐ 17 br



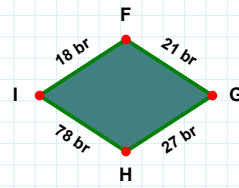
|YZ| kaç cmdir?

- ☐ 50 cm
☐ 47 cm
☐ 52 cm



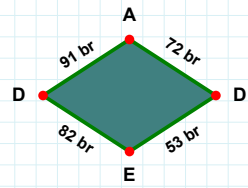
|AD| kaç brdir?

- ☐ 77 br
☐ 72 br
☐ 74 br



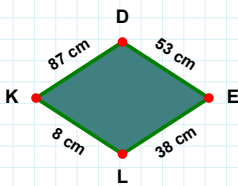
|İÇ| kaç brdir?

- ☐ 48 br
☐ 45 br
☐ 51 br



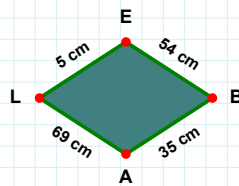
|HI| kaç brdir?

- ☐ 83 br
☐ 78 br
☐ 75 br



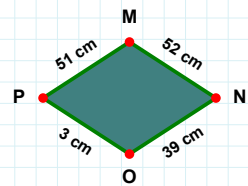
|DE| kaç cmdir?

- ☐ 54 cm
☐ 51 cm
☐ 53 cm



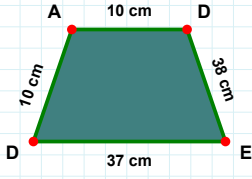
|LE| kaç cmdir?

- ☐ 5 cm
☐ 4 cm
☐ 3 cm



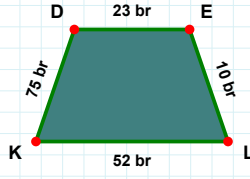
|NO| kaç cmdir?

- ☐ 39 cm
☐ 37 cm
☐ 29 cm

SORU: Aşağıdaki şekillerde istenen kenarın kaç birim veya santimetre olduğunu bulunuz.

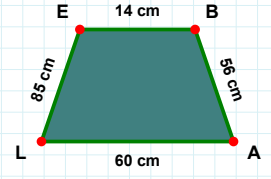
|BA| kaç cm'dir?

- ☐ 56 cm
☐ 53 cm
☐ 58 cm



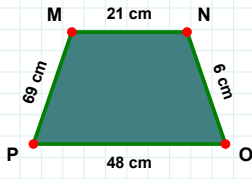
|ED| kaç cm'dir?

- ☐ 32 cm
☐ 36 cm
☐ 37 cm



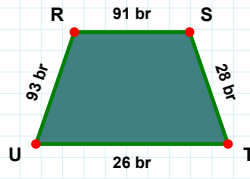
|KD| kaç br'dir?

- ☐ 75 br
☐ 65 br
☐ 85 br



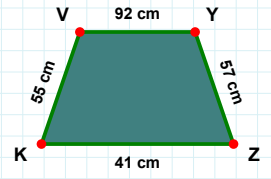
|YZ| kaç cm'dir?

- ☐ 57 cm
☐ 55 cm
☐ 54 cm



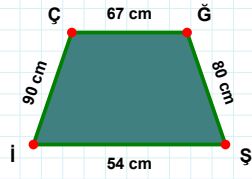
|RS| kaç br'dir?

- ☐ 96 br
☐ 81 br
☐ 91 br



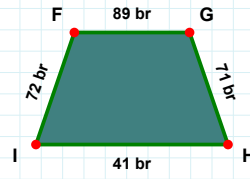
|MN| kaç cm'dir?

- ☐ 16 cm
☐ 24 cm
☐ 21 cm



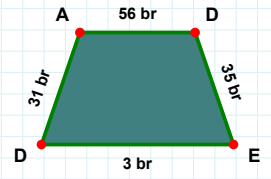
|İF| kaç br'dir?

- ☐ 72 br
☐ 67 br
☐ 70 br



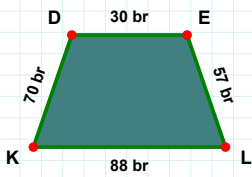
|DE| kaç br'dir?

- ☐ 36 br
☐ 35 br
☐ 32 br



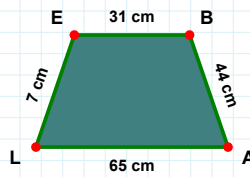
|ÇĞ| kaç cm'dir?

- ☐ 62 cm
☐ 65 cm
☐ 67 cm



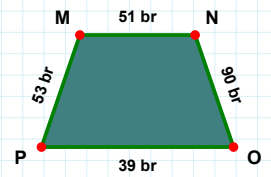
|KD| kaç br'dir?

- ☐ 80 br
☐ 70 br
☐ 68 br



|OP| kaç br'dir?

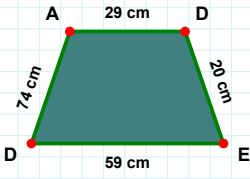
- ☐ 29 br
☐ 39 br
☐ 49 br



|AL| kaç cm'dir?

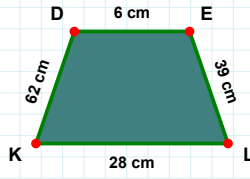
- ☐ 65 cm
☐ 64 cm
☐ 75 cm

SORU: Aşağıdaki şekillerde istenen kenarın kaç birim veya santimetre olduğunu bulunuz.



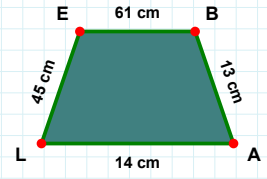
|KD| kaç cm'dir?

- ☐ 52 cm
☐ 62 cm
☐ 67 cm



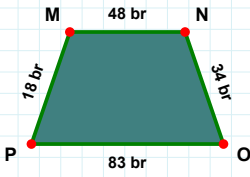
|EB| kaç cm'dir?

- ☐ 62 cm
☐ 60 cm
☐ 61 cm



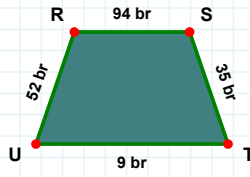
|ED| kaç cm'dir?

- ☐ 49 cm
☐ 59 cm
☐ 69 cm



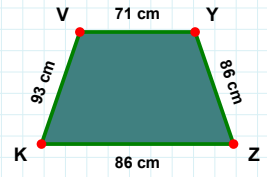
|YZ| kaç cm'dir?

- ☐ 84 cm
☐ 87 cm
☐ 86 cm



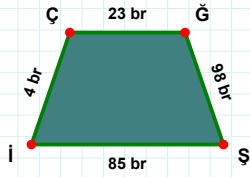
|UR| kaç br'dir?

- ☐ 55 br
☐ 62 br
☐ 52 br



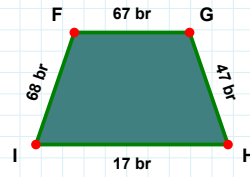
|NO| kaç br'dir?

- ☐ 36 br
☐ 29 br
☐ 34 br



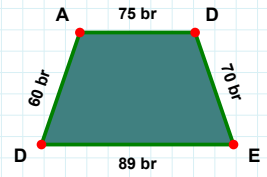
|AD| kaç br'dir?

- ☐ 77 br
☐ 75 br
☐ 74 br



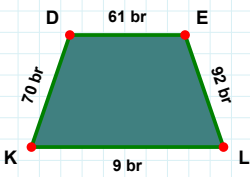
|FG| kaç br'dir?

- ☐ 65 br
☐ 67 br
☐ 72 br



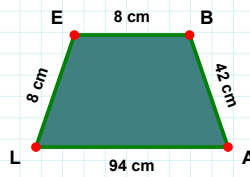
|ÇĞ| kaç br'dir?

- ☐ 23 br
☐ 20 br
☐ 24 br



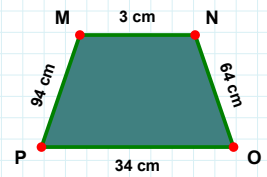
|EL| kaç br'dir?

- ☐ 87 br
☐ 92 br
☐ 95 br



|EB| kaç cm'dir?

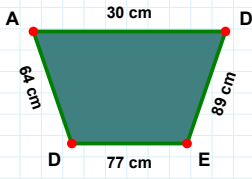
- ☐ 5 cm
☐ 8 cm
☐ 10 cm



|PM| kaç cm'dir?

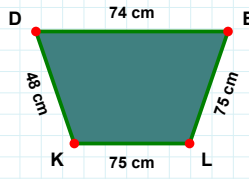
- ☐ 94 cm
☐ 99 cm
☐ 96 cm

SORU: Aşağıdaki şekillerde istenen kenarın kaç birim veya santimetre olduğunu bulunuz.



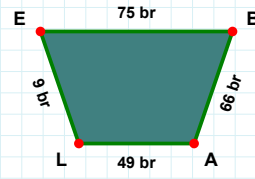
|KD| kaç cmdir?

- ☐ 48 cm
☐ 49 cm
☐ 47 cm



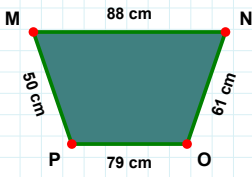
|LE| kaç brdir?

- ☐ 9 br
☐ 8 br
☐ 11 br



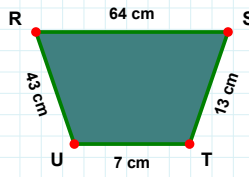
|AD| kaç cmdir?

- ☐ 25 cm
☐ 29 cm
☐ 30 cm



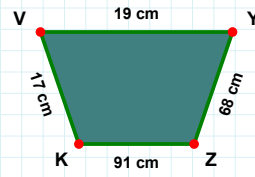
|VY| kaç cmdir?

- ☐ 19 cm
☐ 16 cm
☐ 17 cm



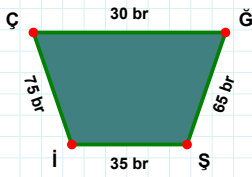
|ST| kaç cmdir?

- ☐ 13 cm
☐ 15 cm
☐ 16 cm



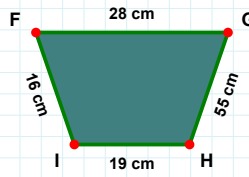
|OP| kaç cmdir?

- ☐ 84 cm
☐ 82 cm
☐ 79 cm



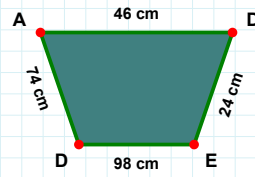
|İÇ| kaç brdir?

- ☐ 75 br
☐ 80 br
☐ 70 br



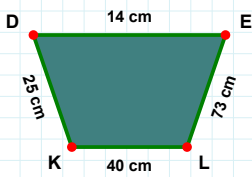
|DE| kaç cmdir?

- ☐ 29 cm
☐ 24 cm
☐ 14 cm



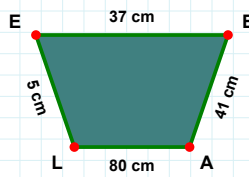
|GH| kaç cmdir?

- ☐ 55 cm
☐ 54 cm
☐ 65 cm



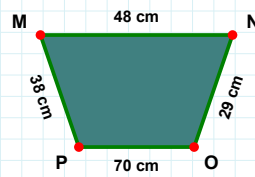
|LE| kaç cmdir?

- ☐ 10 cm
☐ 4 cm
☐ 5 cm



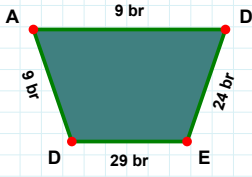
|EL| kaç cmdir?

- ☐ 63 cm
☐ 73 cm
☐ 74 cm



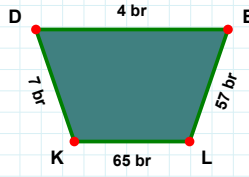
|OP| kaç cmdir?

- ☐ 69 cm
☐ 60 cm
☐ 70 cm

SORU: Aşağıdaki şekillerde istenen kenarın kaç birim veya santimetre olduğunu bulunuz.

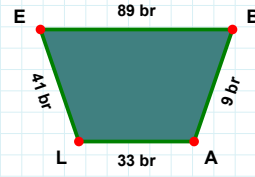
|LE| kaç brdir?

- ☐ 51 br
☐ 42 br
☐ 41 br



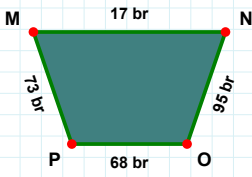
|EL| kaç brdir?

- ☐ 57 br
☐ 47 br
☐ 54 br



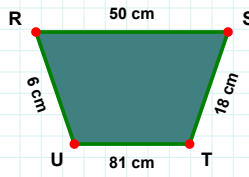
|ED| kaç brdir?

- ☐ 29 br
☐ 26 br
☐ 28 br



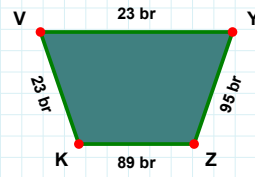
|TU| kaç cmdir?

- ☐ 81 cm
☐ 71 cm
☐ 80 cm



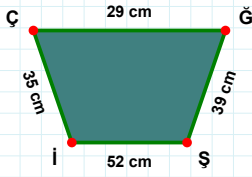
|VY| kaç brdir?

- ☐ 21 br
☐ 23 br
☐ 20 br



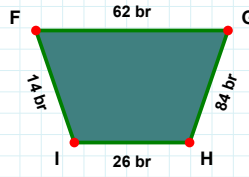
|PM| kaç brdir?

- ☐ 70 br
☐ 73 br
☐ 72 br



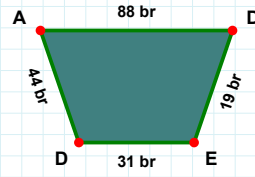
|ÇĞ| kaç cmdir?

- ☐ 34 cm
☐ 29 cm
☐ 31 cm



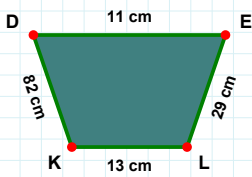
|DA| kaç brdir?

- ☐ 44 br
☐ 46 br
☐ 47 br



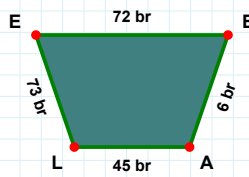
|HI| kaç brdir?

- ☐ 29 br
☐ 26 br
☐ 21 br



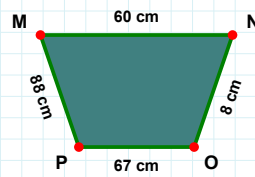
|LE| kaç brdir?

- ☐ 70 br
☐ 74 br
☐ 73 br



|LK| kaç cmdir?

- ☐ 15 cm
☐ 13 cm
☐ 18 cm



|NO| kaç cmdir?

- ☐ 10 cm
☐ 8 cm
☐ 9 cm

SÜREÇ ODAKLI DEĞERLENDİRME ÖLÇEĞİ

Geliştirilmeli (0-109)	İyi (110-187)	Çok İyi (188-265)	Mükemmel (266-312)
<input type="checkbox"/>	<input type="checkbox"/>	<input type="checkbox"/>	<input type="checkbox"/>

Hazırlayan:

Bu bölüme sınıfınızın ilgili kazanıma yönelik genel durumuna ilişkin gözlem ve izlenimlerinizi, öğrencilerinizin bu kazanımla ilgili öğrenme eksikliklerini ve bu eksikliklerin giderilmesi amacıyla yaptığınız/yapmayı planladığınız faaliyetleri not edebilirsiniz.

No	Adı - Soyadı	Toplam Puan	Değerlendirme
1			
2			
3			
4			
5			
6			
7			
8			
9			
10			
11			
12			
13			
14			
15			
16			
17			
18			
19			
20			
21			
22			
23			
24			
25			
26			
27			
28			
29			
30			
31			
32			
33			
34			
35			

Hazırlayan: