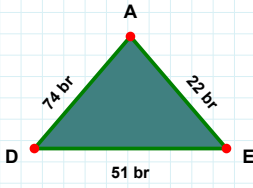
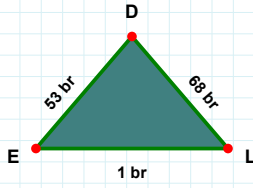


**SORU:** Aşağıdaki şekillerde istenen kenarın kaç birim veya santimetre olduğunu bulunuz.

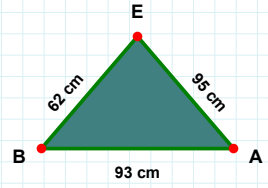
|AD| kaç brdir?

- ☐ 74 br  
☐ 76 br  
☐ 71 br



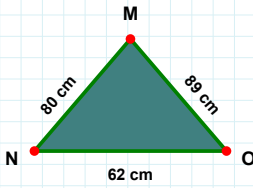
|LD| kaç brdir?

- ☐ 70 br  
☐ 67 br  
☐ 68 br



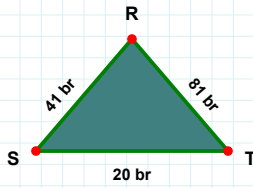
|EB| kaç cmdir?

- ☐ 52 cm  
☐ 62 cm  
☐ 61 cm



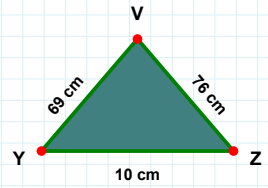
|RS| kaç brdir?

- ☐ 41 br  
☐ 46 br  
☐ 31 br



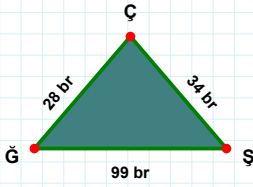
|YZ| kaç cmdir?

- ☐ 10 cm  
☐ 12 cm  
☐ 9 cm



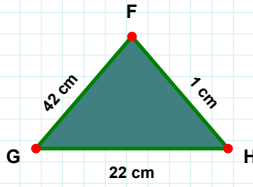
|OM| kaç cmdir?

- ☐ 92 cm  
☐ 89 cm  
☐ 99 cm



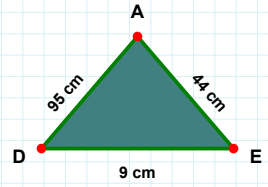
|ŞÇ| kaç brdir?

- ☐ 33 br  
☐ 34 br  
☐ 24 br



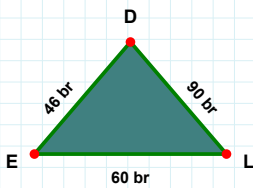
|HF| kaç cmdir?

- ☐ 6 cm  
☐ 1 cm  
☐ 3 cm



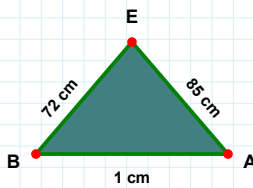
|EA| kaç cmdir?

- ☐ 54 cm  
☐ 44 cm  
☐ 47 cm



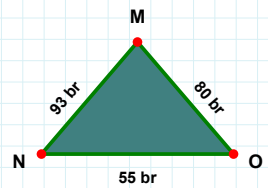
|NO| kaç brdir?

- ☐ 55 br  
☐ 45 br  
☐ 53 br



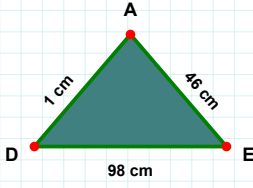
|LD| kaç brdir?

- ☐ 90 br  
☐ 91 br  
☐ 85 br



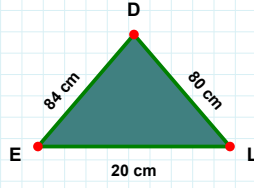
|AE| kaç cmdir?

- ☐ 85 cm  
☐ 88 cm  
☐ 90 cm

**SORU:** Aşağıdaki şekillerde istenen kenarın kaç birim veya santimetre olduğunu bulunuz.

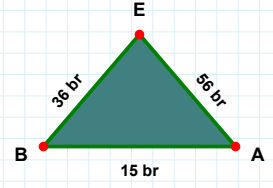
|AD| kaç cmdir?

- ☐ 4 cm  
☐ 1 cm  
☐ 2 cm



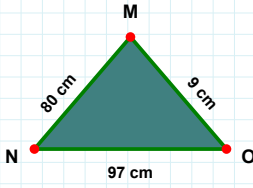
|BA| kaç brdir?

- ☐ 15 br  
☐ 13 br  
☐ 5 br



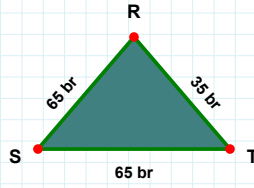
|EL| kaç cmdir?

- ☐ 10 cm  
☐ 18 cm  
☐ 20 cm



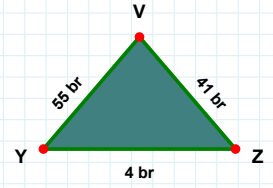
|MN| kaç cmdir?

- ☐ 78 cm  
☐ 81 cm  
☐ 80 cm



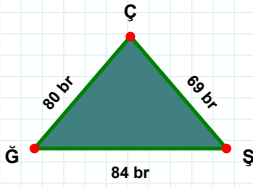
|ST| kaç brdir?

- ☐ 60 br  
☐ 65 br  
☐ 70 br



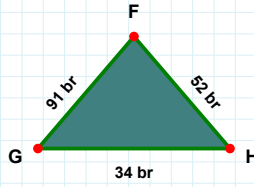
|YZ| kaç brdir?

- ☐ 5 br  
☐ 9 br  
☐ 4 br



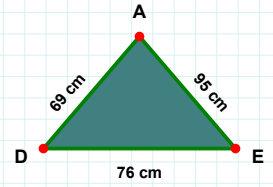
|HF| kaç brdir?

- ☐ 52 br  
☐ 55 br  
☐ 62 br



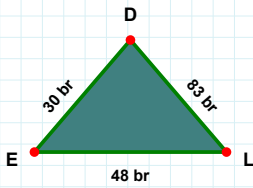
|AD| kaç cmdir?

- ☐ 68 cm  
☐ 72 cm  
☐ 69 cm



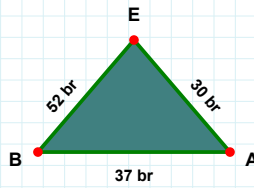
|ÇĞ| kaç brdir?

- ☐ 90 br  
☐ 80 br  
☐ 75 br



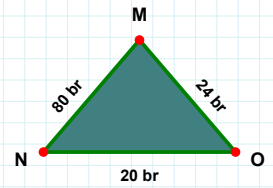
|AE| kaç brdir?

- ☐ 20 br  
☐ 30 br  
☐ 28 br



|NO| kaç brdir?

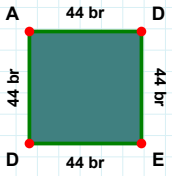
- ☐ 23 br  
☐ 20 br  
☐ 10 br



|DE| kaç brdir?

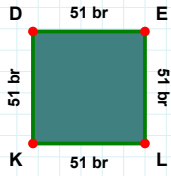
- ☐ 28 br  
☐ 30 br  
☐ 25 br

**SORU:** Aşağıdaki şekillerde istenen kenarın kaç birim veya santimetre olduğunu bulunuz.



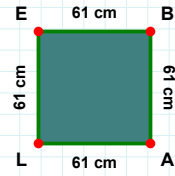
|EL| kaç brdir?

- ☐ 54 br  
☐ 51 br  
☐ 53 br



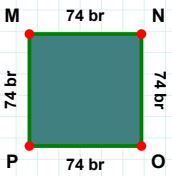
|AL| kaç cmdir?

- ☐ 56 cm  
☐ 62 cm  
☐ 61 cm



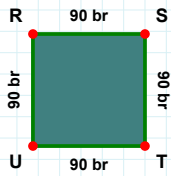
|DA| kaç brdir?

- ☐ 54 br  
☐ 43 br  
☐ 44 br



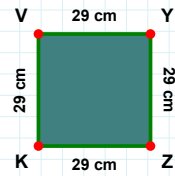
|MN| kaç brdir?

- ☐ 84 br  
☐ 69 br  
☐ 74 br



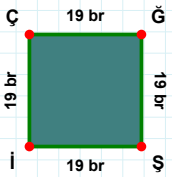
|YZ| kaç cmdir?

- ☐ 39 cm  
☐ 29 cm  
☐ 27 cm



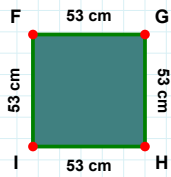
|ST| kaç brdir?

- ☐ 91 br  
☐ 89 br  
☐ 90 br



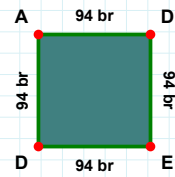
|FG| kaç cmdir?

- ☐ 55 cm  
☐ 53 cm  
☐ 48 cm



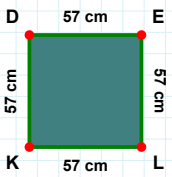
|DA| kaç brdir?

- ☐ 94 br  
☐ 92 br  
☐ 93 br



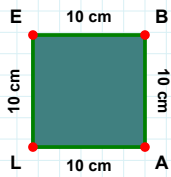
|Şİ| kaç brdir?

- ☐ 20 br  
☐ 29 br  
☐ 19 br



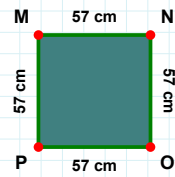
|PM| kaç cmdir?

- ☐ 57 cm  
☐ 59 cm  
☐ 60 cm



|DE| kaç cmdir?

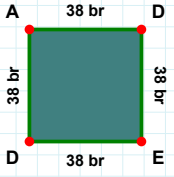
- ☐ 58 cm  
☐ 57 cm  
☐ 54 cm



|EB| kaç cmdir?

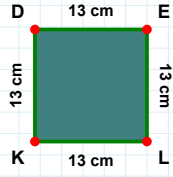
- ☐ 9 cm  
☐ 10 cm  
☐ 13 cm

**SORU:** Aşağıdaki şekillerde istenen kenarın kaç birim veya santimetre olduğunu bulunuz.



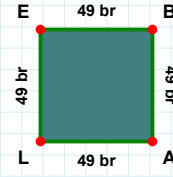
|EB| kaç brdir?

- ☐ 47 br  
☐ 44 br  
☐ 49 br



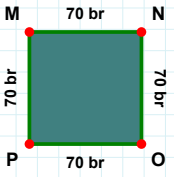
|DE| kaç brdir?

- ☐ 38 br  
☐ 36 br  
☐ 41 br



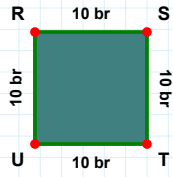
|EL| kaç cmdir?

- ☐ 23 cm  
☐ 3 cm  
☐ 13 cm



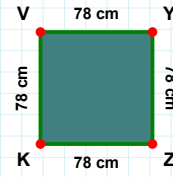
|YY| kaç cmdir?

- ☐ 77 cm  
☐ 79 cm  
☐ 78 cm



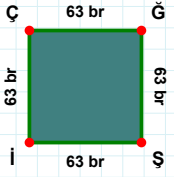
|TU| kaç brdir?

- ☐ 8 br  
☐ 10 br  
☐ 5 br



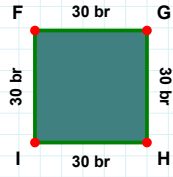
|OP| kaç brdir?

- ☐ 69 br  
☐ 70 br  
☐ 65 br



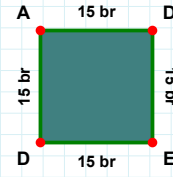
|FG| kaç brdir?

- ☐ 29 br  
☐ 30 br  
☐ 31 br



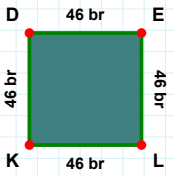
|ED| kaç brdir?

- ☐ 12 br  
☐ 15 br  
☐ 10 br



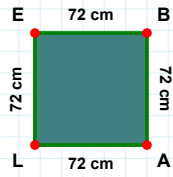
|ĞŞ| kaç brdir?

- ☐ 65 br  
☐ 66 br  
☐ 63 br



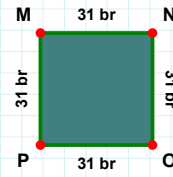
|EL| kaç brdir?

- ☐ 46 br  
☐ 43 br  
☐ 45 br



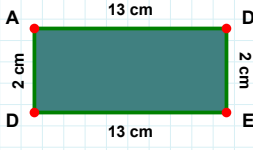
|MN| kaç brdir?

- ☐ 28 br  
☐ 30 br  
☐ 31 br



|LE| kaç cmdir?

- ☐ 72 cm  
☐ 82 cm  
☐ 73 cm

**SORU:** Aşağıdaki şekillerde istenen kenarın kaç birim veya santimetre olduğunu bulunuz.

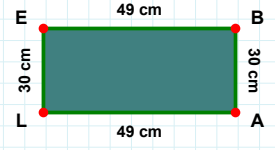
|AL| kaç cmdir?

- ☐ 39 cm  
☐ 49 cm  
☐ 48 cm



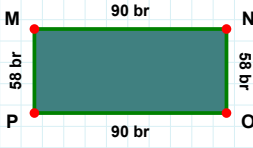
|DE| kaç cmdir?

- ☐ 1 cm  
☐ 5 cm  
☐ 2 cm



|DE| kaç brdir?

- ☐ 91 br  
☐ 86 br  
☐ 88 br



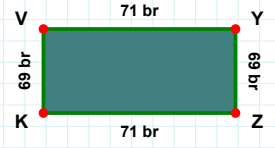
|YZ| kaç brdir?

- ☐ 67 br  
☐ 69 br  
☐ 74 br



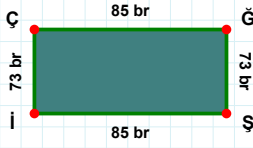
|TU| kaç brdir?

- ☐ 82 br  
☐ 84 br  
☐ 86 br



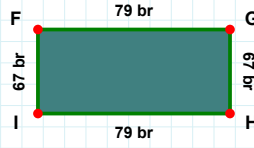
|PM| kaç brdir?

- ☐ 56 br  
☐ 59 br  
☐ 58 br



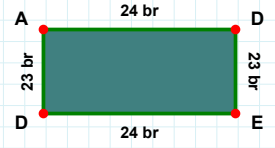
|Şİ| kaç brdir?

- ☐ 82 br  
☐ 87 br  
☐ 85 br



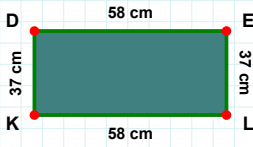
|FG| kaç brdir?

- ☐ 77 br  
☐ 79 br  
☐ 82 br



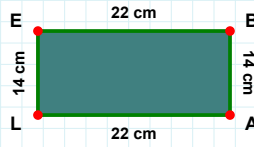
|DE| kaç brdir?

- ☐ 20 br  
☐ 23 br  
☐ 13 br



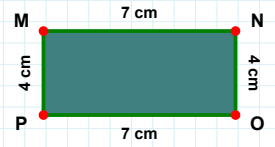
|MN| kaç cmdir?

- ☐ 2 cm  
☐ 7 cm  
☐ 8 cm



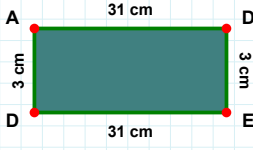
|EB| kaç cmdir?

- ☐ 24 cm  
☐ 20 cm  
☐ 22 cm



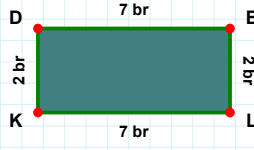
|EL| kaç cmdir?

- ☐ 37 cm  
☐ 39 cm  
☐ 40 cm

**SORU:** Aşağıdaki şekillerde istenen kenarın kaç birim veya santimetre olduğunu bulunuz.

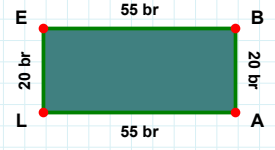
|EL| kaç brdir?

- ☐ 2 br  
☐ 1 br  
☐ 7 br



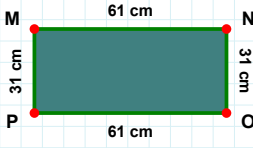
|ED| kaç cmdir?

- ☐ 34 cm  
☐ 31 cm  
☐ 33 cm



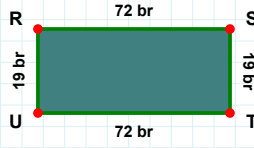
|BA| kaç brdir?

- ☐ 20 br  
☐ 22 br  
☐ 18 br



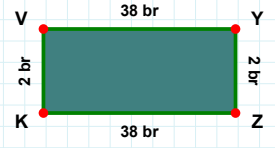
|OP| kaç cmdir?

- ☐ 60 cm  
☐ 61 cm  
☐ 71 cm



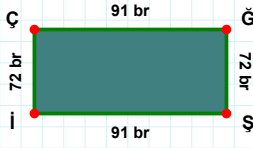
|KV| kaç brdir?

- ☐ 2 br  
☐ 3 br  
☐ 7 br



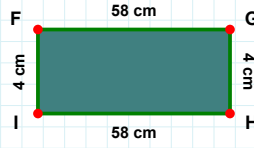
|UR| kaç brdir?

- ☐ 29 br  
☐ 19 br  
☐ 24 br



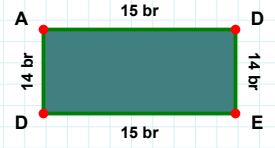
|HI| kaç cmdir?

- ☐ 60 cm  
☐ 58 cm  
☐ 53 cm



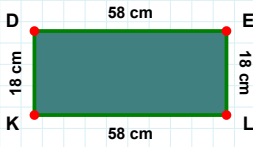
|AD| kaç brdir?

- ☐ 15 br  
☐ 17 br  
☐ 13 br



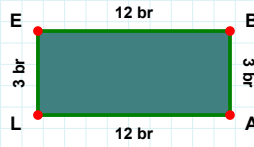
|Şİ| kaç brdir?

- ☐ 91 br  
☐ 94 br  
☐ 86 br



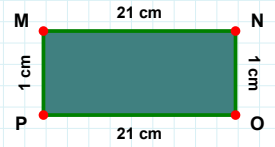
|EB| kaç brdir?

- ☐ 22 br  
☐ 12 br  
☐ 17 br



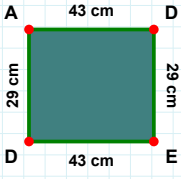
|MN| kaç cmdir?

- ☐ 22 cm  
☐ 20 cm  
☐ 21 cm



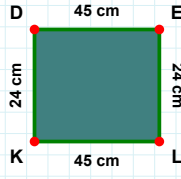
|EL| kaç cmdir?

- ☐ 18 cm  
☐ 20 cm  
☐ 15 cm

**SORU:** Aşağıdaki şekillerde istenen kenarın kaç birim veya santimetre olduğunu bulunuz.

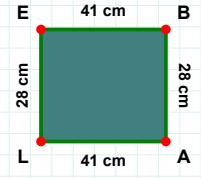
|LK| kaç cm'dir?

- ☐ 48 cm  
☐ 46 cm  
☐ 45 cm



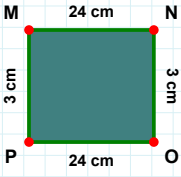
|LE| kaç cm'dir?

- ☐ 23 cm  
☐ 28 cm  
☐ 25 cm



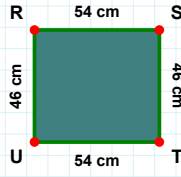
|DE| kaç cm'dir?

- ☐ 29 cm  
☐ 30 cm  
☐ 19 cm



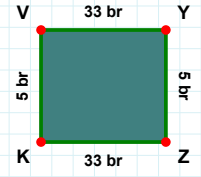
|ST| kaç cm'dir?

- ☐ 46 cm  
☐ 48 cm  
☐ 49 cm



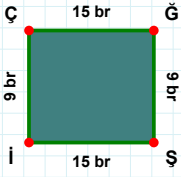
|OP| kaç cm'dir?

- ☐ 19 cm  
☐ 24 cm  
☐ 22 cm



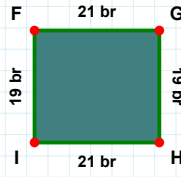
|KV| kaç br'dir?

- ☐ 4 br  
☐ 7 br  
☐ 5 br



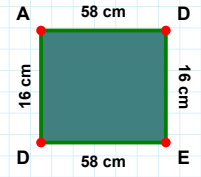
|AD| kaç cm'dir?

- ☐ 58 cm  
☐ 48 cm  
☐ 60 cm



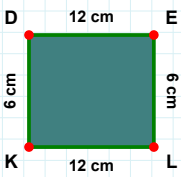
|Şİ| kaç br'dir?

- ☐ 15 br  
☐ 16 br  
☐ 18 br



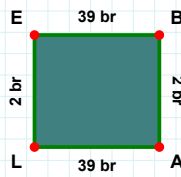
|GH| kaç br'dir?

- ☐ 18 br  
☐ 14 br  
☐ 19 br



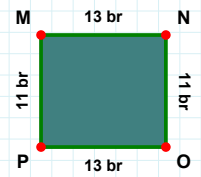
|NO| kaç br'dir?

- ☐ 14 br  
☐ 11 br  
☐ 21 br



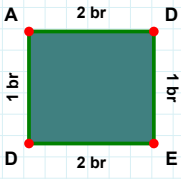
|LE| kaç br'dir?

- ☐ 2 br  
☐ 12 br  
☐ 5 br



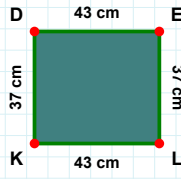
|LK| kaç cm'dir?

- ☐ 11 cm  
☐ 12 cm  
☐ 22 cm

**SORU:** Aşağıdaki şekillerde istenen kenarın kaç birim veya santimetre olduğunu bulunuz.

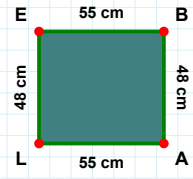
|EB| kaç cmdir?

- ☐ 55 cm  
☐ 58 cm  
☐ 60 cm



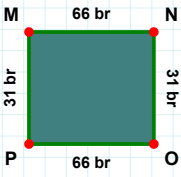
|AD| kaç brdir?

- ☐ 4 br  
☐ 2 br  
☐ 5 br



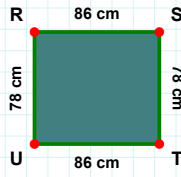
|KD| kaç cmdir?

- ☐ 40 cm  
☐ 37 cm  
☐ 35 cm



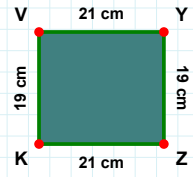
|ZK| kaç cmdir?

- ☐ 21 cm  
☐ 18 cm  
☐ 31 cm



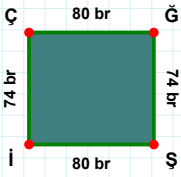
|RS| kaç cmdir?

- ☐ 86 cm  
☐ 83 cm  
☐ 96 cm



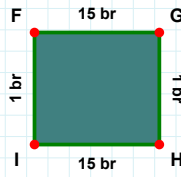
|PM| kaç brdir?

- ☐ 21 br  
☐ 28 br  
☐ 31 br



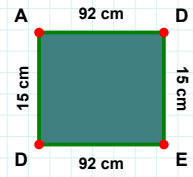
|FG| kaç brdir?

- ☐ 12 br  
☐ 15 br  
☐ 5 br



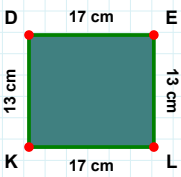
|DA| kaç cmdir?

- ☐ 16 cm  
☐ 15 cm  
☐ 5 cm



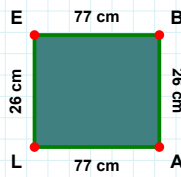
|ĞŞ| kaç brdir?

- ☐ 69 br  
☐ 74 br  
☐ 64 br



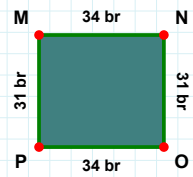
|LK| kaç cmdir?

- ☐ 17 cm  
☐ 20 cm  
☐ 7 cm



|PM| kaç brdir?

- ☐ 21 br  
☐ 31 br  
☐ 32 br

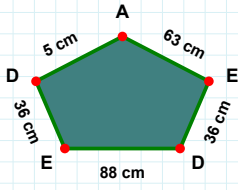


|LE| kaç cmdir?

- ☐ 28 cm  
☐ 31 cm  
☐ 26 cm

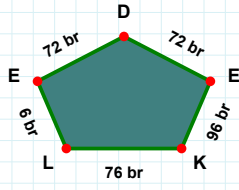


**SORU:** Aşağıdaki şekillerde istenen kenarın kaç birim veya santimetre olduğunu bulunuz.



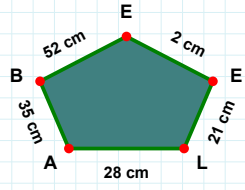
|LE| kaç cmdir?

- ☐ 26 cm  
☐ 21 cm  
☐ 20 cm



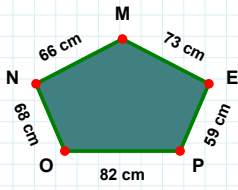
|LK| kaç brdir?

- ☐ 78 br  
☐ 76 br  
☐ 86 br



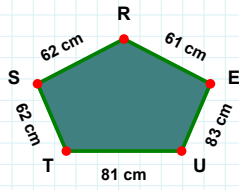
|AD| kaç cmdir?

- ☐ 5 cm  
☐ 6 cm  
☐ 7 cm



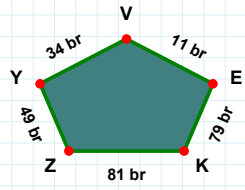
|YZ| kaç brdir?

- ☐ 51 br  
☐ 49 br  
☐ 48 br



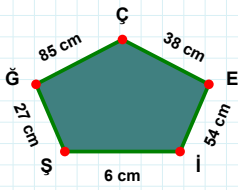
|NO| kaç cmdir?

- ☐ 68 cm  
☐ 65 cm  
☐ 70 cm



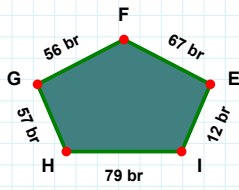
|TU| kaç cmdir?

- ☐ 71 cm  
☐ 81 cm  
☐ 84 cm



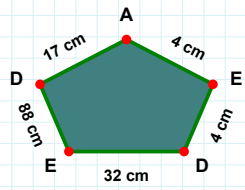
|EF| kaç brdir?

- ☐ 65 br  
☐ 67 br  
☐ 77 br



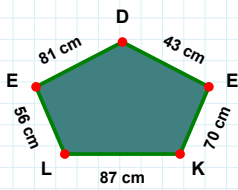
|ED| kaç cmdir?

- ☐ 31 cm  
☐ 27 cm  
☐ 32 cm



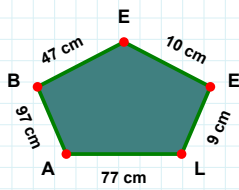
|EÇ| kaç cmdir?

- ☐ 36 cm  
☐ 38 cm  
☐ 37 cm



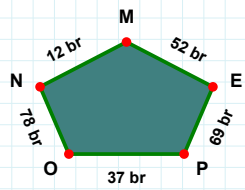
|EB| kaç cmdir?

- ☐ 46 cm  
☐ 45 cm  
☐ 47 cm



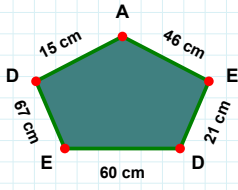
|EL| kaç cmdir?

- ☐ 46 cm  
☐ 55 cm  
☐ 56 cm



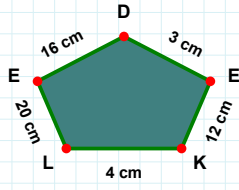
|OP| kaç brdir?

- ☐ 37 br  
☐ 35 br  
☐ 39 br

**SORU:** Aşağıdaki şekillerde istenen kenarın kaç birim veya santimetre olduğunu bulunuz.

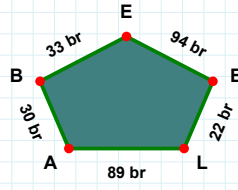
|ED| kaç cmdir?

- ☐ 65 cm  
☐ 60 cm  
☐ 50 cm



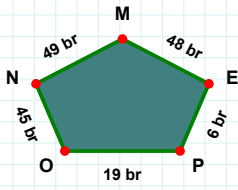
|AL| kaç brdir?

- ☐ 79 br  
☐ 89 br  
☐ 87 br



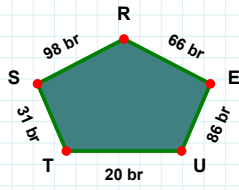
|LK| kaç cmdir?

- ☐ 2 cm  
☐ 1 cm  
☐ 4 cm



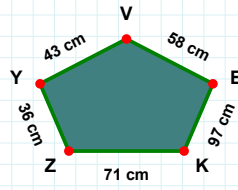
|TU| kaç brdir?

- ☐ 15 br  
☐ 20 br  
☐ 19 br



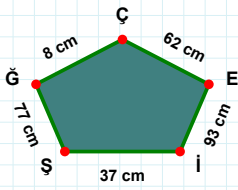
|ZK| kaç cmdir?

- ☐ 74 cm  
☐ 71 cm  
☐ 68 cm



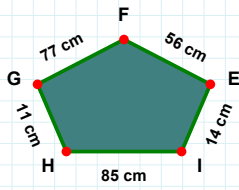
|PE| kaç brdir?

- ☐ 6 br  
☐ 5 br  
☐ 4 br



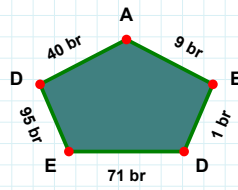
|ED| kaç brdir?

- ☐ 76 br  
☐ 71 br  
☐ 72 br



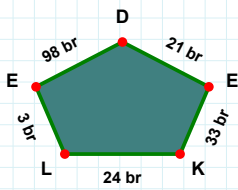
|ĞŞ| kaç cmdir?

- ☐ 77 cm  
☐ 79 cm  
☐ 72 cm



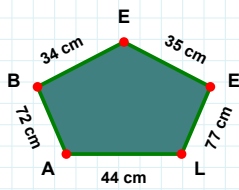
|FG| kaç cmdir?

- ☐ 77 cm  
☐ 75 cm  
☐ 67 cm



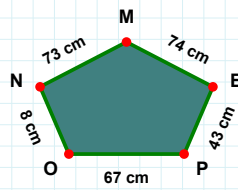
|EB| kaç cmdir?

- ☐ 44 cm  
☐ 34 cm  
☐ 24 cm



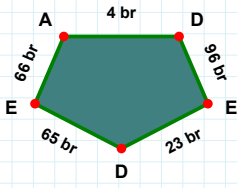
|KE| kaç brdir?

- ☐ 36 br  
☐ 31 br  
☐ 33 br



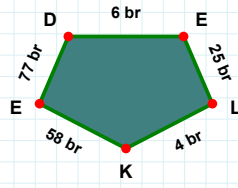
|OP| kaç cmdir?

- ☐ 70 cm  
☐ 67 cm  
☐ 69 cm

**SORU:** Aşağıdaki şekillerde istenen kenarın kaç birim veya santimetre olduğunu bulunuz.

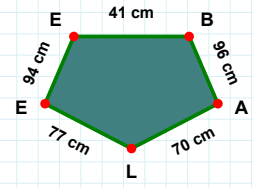
|EA| kaç brdir?

- ☐ 66 br  
☐ 76 br  
☐ 63 br



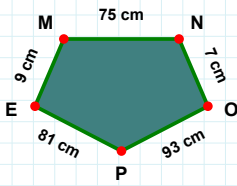
|LK| kaç brdir?

- ☐ 2 br  
☐ 4 br  
☐ 7 br



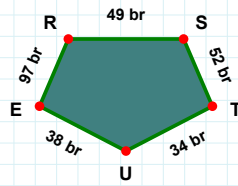
|BA| kaç cmdir?

- ☐ 96 cm  
☐ 91 cm  
☐ 99 cm



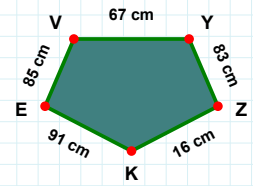
|NO| kaç cmdir?

- ☐ 2 cm  
☐ 6 cm  
☐ 7 cm



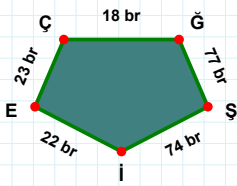
|RS| kaç brdir?

- ☐ 49 br  
☐ 54 br  
☐ 50 br



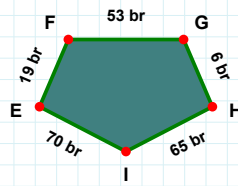
|EV| kaç cmdir?

- ☐ 82 cm  
☐ 85 cm  
☐ 87 cm



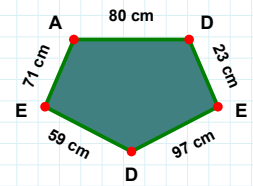
|EÇ| kaç brdir?

- ☐ 24 br  
☐ 22 br  
☐ 23 br



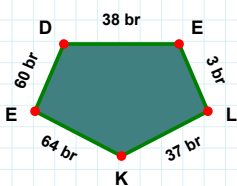
|DE| kaç cmdir?

- ☐ 20 cm  
☐ 33 cm  
☐ 23 cm



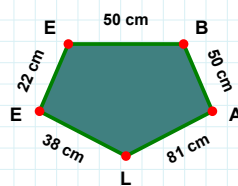
|FG| kaç brdir?

- ☐ 53 br  
☐ 58 br  
☐ 63 br



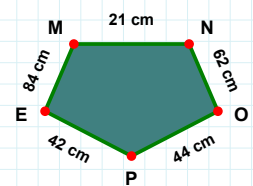
|LE| kaç cmdir?

- ☐ 35 cm  
☐ 41 cm  
☐ 38 cm



|LK| kaç brdir?

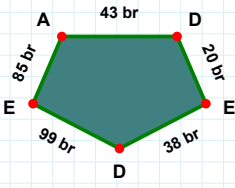
- ☐ 27 br  
☐ 36 br  
☐ 37 br



|MN| kaç cmdir?

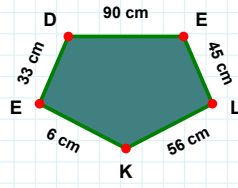
- ☐ 26 cm  
☐ 19 cm  
☐ 21 cm

**SORU:** Aşağıdaki şekillerde istenen kenarın kaç birim veya santimetre olduğunu bulunuz.



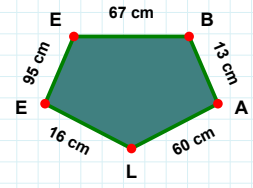
|EL| kaç cmdir?

- ☐ 45 cm  
☐ 50 cm  
☐ 42 cm



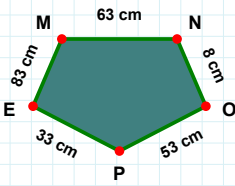
|LE| kaç cmdir?

- ☐ 13 cm  
☐ 14 cm  
☐ 16 cm



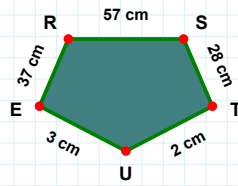
|ED| kaç brdir?

- ☐ 38 br  
☐ 39 br  
☐ 41 br



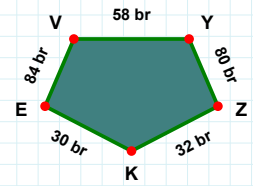
|NO| kaç cmdir?

- ☐ 5 cm  
☐ 8 cm  
☐ 9 cm



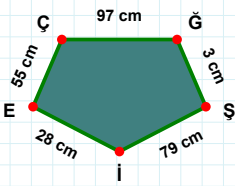
|YZ| kaç brdir?

- ☐ 83 br  
☐ 80 br  
☐ 75 br



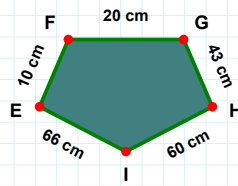
|ST| kaç cmdir?

- ☐ 38 cm  
☐ 28 cm  
☐ 27 cm



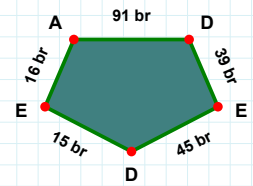
|ĞŞ| kaç cmdir?

- ☐ 8 cm  
☐ 5 cm  
☐ 3 cm



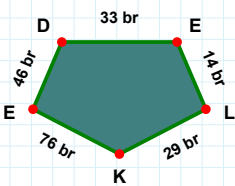
|EF| kaç cmdir?

- ☐ 20 cm  
☐ 15 cm  
☐ 10 cm



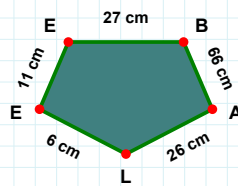
|AD| kaç brdir?

- ☐ 86 br  
☐ 91 br  
☐ 81 br



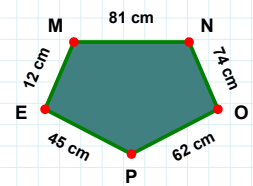
|KE| kaç brdir?

- ☐ 76 br  
☐ 71 br  
☐ 77 br



|PE| kaç cmdir?

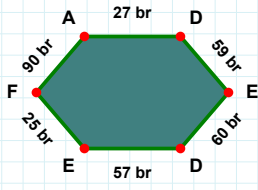
- ☐ 55 cm  
☐ 46 cm  
☐ 45 cm



|LE| kaç cmdir?

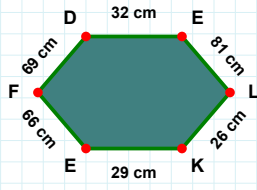
- ☐ 7 cm  
☐ 6 cm  
☐ 16 cm

**SORU:** Aşağıdaki şekillerde istenen kenarın kaç birim veya santimetre olduğunu bulunuz.



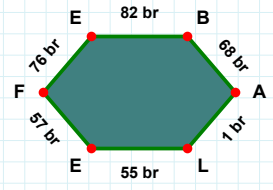
|LK| kaç cmdir?

- ☐ 36 cm  
☐ 27 cm  
☐ 26 cm



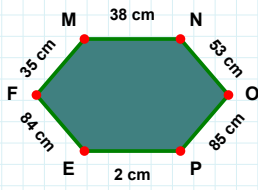
|FE| kaç brdir?

- ☐ 76 br  
☐ 78 br  
☐ 86 br



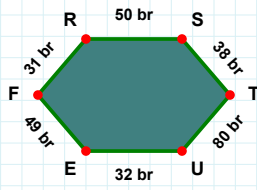
|ED| kaç brdir?

- ☐ 57 br  
☐ 61 br  
☐ 60 br



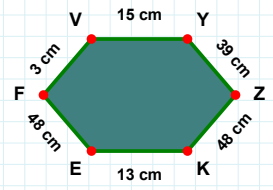
|FM| kaç cmdir?

- ☐ 35 cm  
☐ 40 cm  
☐ 45 cm



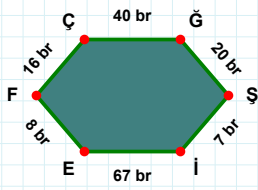
|UE| kaç brdir?

- ☐ 30 br  
☐ 31 br  
☐ 32 br



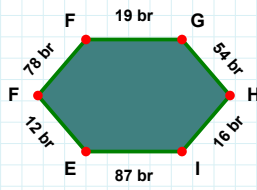
|VY| kaç cmdir?

- ☐ 15 cm  
☐ 20 cm  
☐ 25 cm



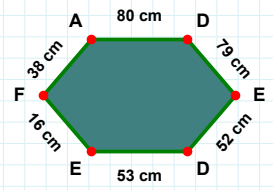
|ĞŞ| kaç brdir?

- ☐ 21 br  
☐ 20 br  
☐ 15 br



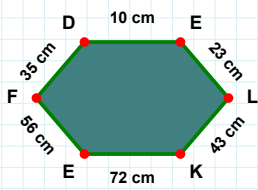
|AD| kaç cmdir?

- ☐ 85 cm  
☐ 80 cm  
☐ 90 cm



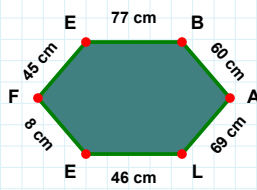
|GH| kaç brdir?

- ☐ 52 br  
☐ 56 br  
☐ 54 br



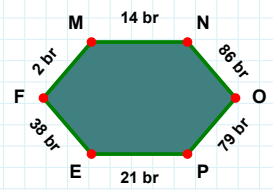
|EB| kaç cmdir?

- ☐ 76 cm  
☐ 77 cm  
☐ 74 cm



|OP| kaç brdir?

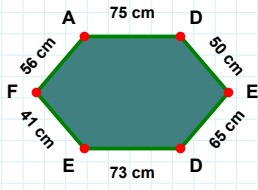
- ☐ 78 br  
☐ 79 br  
☐ 69 br



|EF| kaç cmdir?

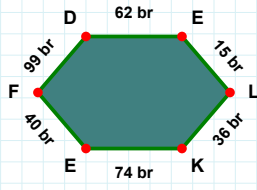
- ☐ 46 cm  
☐ 56 cm  
☐ 58 cm

**SORU:** Aşağıdaki şekillerde istenen kenarın kaç birim veya santimetre olduğunu bulunuz.



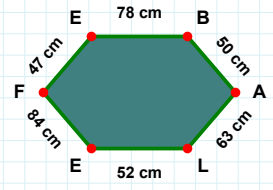
|EF| kaç cm'dir?

- ☐ 36 cm  
☐ 41 cm  
☐ 38 cm



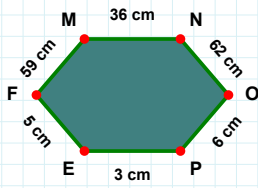
|LK| kaç br'dir?

- ☐ 36 br  
☐ 46 br  
☐ 39 br



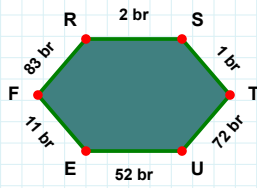
|EF| kaç cm'dir?

- ☐ 74 cm  
☐ 83 cm  
☐ 84 cm



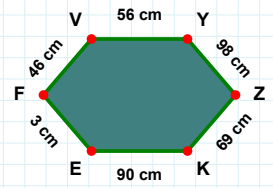
|KE| kaç cm'dir?

- ☐ 90 cm  
☐ 85 cm  
☐ 93 cm



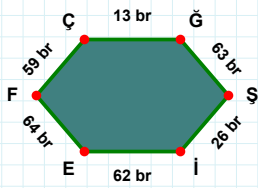
|NO| kaç cm'dir?

- ☐ 62 cm  
☐ 64 cm  
☐ 65 cm



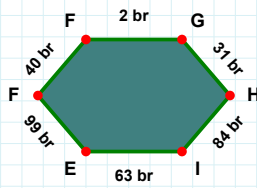
|UE| kaç br'dir?

- ☐ 52 br  
☐ 49 br  
☐ 51 br



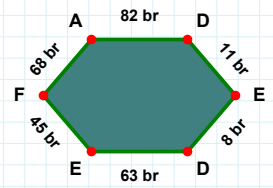
|FÇ| kaç br'dir?

- ☐ 64 br  
☐ 59 br  
☐ 69 br



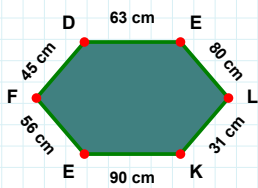
|İE| kaç br'dir?

- ☐ 73 br  
☐ 66 br  
☐ 63 br



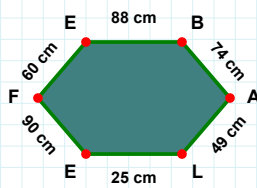
|AD| kaç br'dir?

- ☐ 87 br  
☐ 80 br  
☐ 82 br



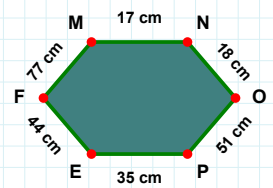
|EF| kaç cm'dir?

- ☐ 93 cm  
☐ 95 cm  
☐ 90 cm



|KE| kaç cm'dir?

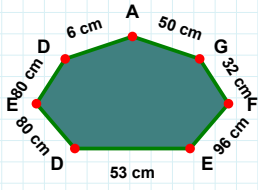
- ☐ 95 cm  
☐ 87 cm  
☐ 90 cm



|PE| kaç cm'dir?

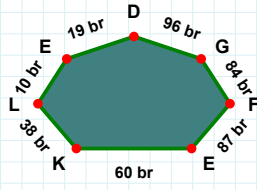
- ☐ 33 cm  
☐ 35 cm  
☐ 36 cm

**SORU:** Aşağıdaki şekillerde istenen kenarın kaç birim veya santimetre olduğunu bulunuz.



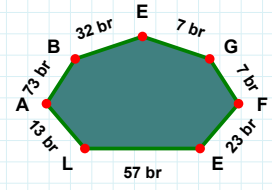
|FG| kaç brdir?

- ☐ 12 br  
☐ 7 br  
☐ 6 br



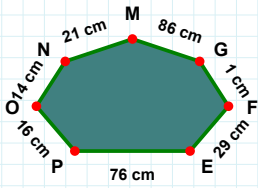
|DE| kaç cmdir?

- ☐ 80 cm  
☐ 83 cm  
☐ 75 cm



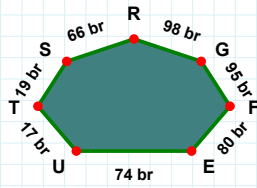
|KE| kaç brdir?

- ☐ 60 br  
☐ 70 br  
☐ 57 br



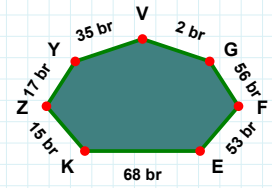
|FG| kaç brdir?

- ☐ 56 br  
☐ 55 br  
☐ 57 br



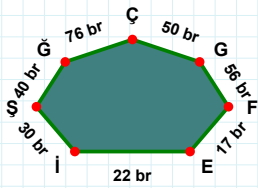
|GR| kaç brdir?

- ☐ 99 br  
☐ 96 br  
☐ 98 br



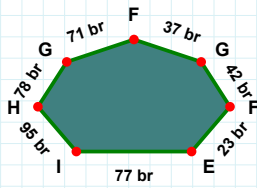
|EF| kaç cmdir?

- ☐ 34 cm  
☐ 39 cm  
☐ 29 cm



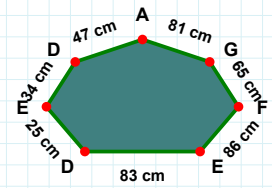
|GH| kaç brdir?

- ☐ 78 br  
☐ 76 br  
☐ 68 br



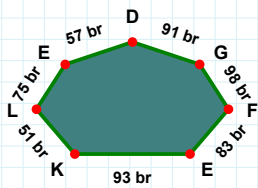
|Şİ| kaç brdir?

- ☐ 25 br  
☐ 30 br  
☐ 35 br



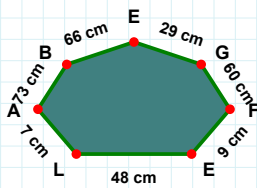
|FG| kaç cmdir?

- ☐ 70 cm  
☐ 65 cm  
☐ 75 cm



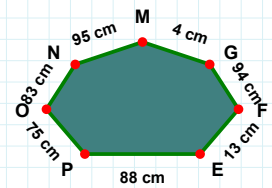
|EF| kaç brdir?

- ☐ 80 br  
☐ 81 br  
☐ 83 br



|EF| kaç cmdir?

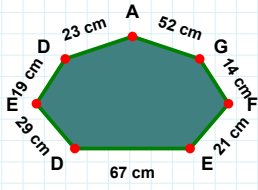
- ☐ 8 cm  
☐ 9 cm  
☐ 11 cm



|EF| kaç cmdir?

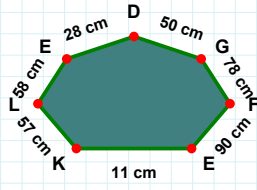
- ☐ 11 cm  
☐ 14 cm  
☐ 13 cm

**SORU:** Aşağıdaki şekillerde istenen kenarın kaç birim veya santimetre olduğunu bulunuz.



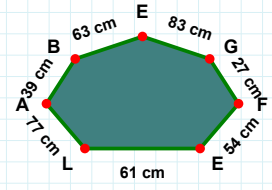
|EB| kaç cm'dir?

- ☐ 64 cm  
☐ 60 cm  
☐ 63 cm



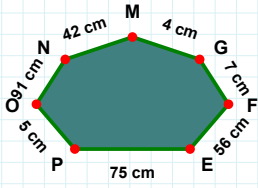
|GA| kaç cm'dir?

- ☐ 62 cm  
☐ 49 cm  
☐ 52 cm



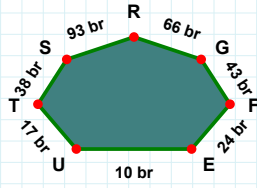
|EL| kaç cm'dir?

- ☐ 48 cm  
☐ 58 cm  
☐ 57 cm



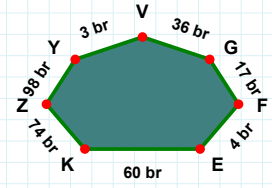
|YZ| kaç br'dir?

- ☐ 97 br  
☐ 88 br  
☐ 98 br



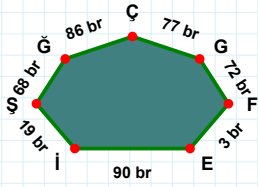
|GM| kaç cm'dir?

- ☐ 4 cm  
☐ 5 cm  
☐ 1 cm



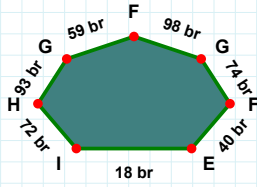
|UE| kaç br'dir?

- ☐ 5 br  
☐ 10 br  
☐ 13 br



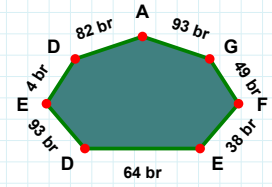
|EF| kaç br'dir?

- ☐ 13 br  
☐ 3 br  
☐ 5 br



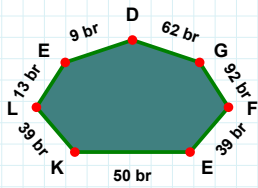
|GA| kaç br'dir?

- ☐ 90 br  
☐ 93 br  
☐ 95 br



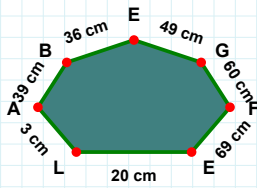
|GF| kaç br'dir?

- ☐ 93 br  
☐ 96 br  
☐ 98 br



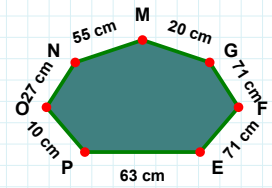
|DE| kaç br'dir?

- ☐ 12 br  
☐ 4 br  
☐ 9 br



|AL| kaç cm'dir?

- ☐ 8 cm  
☐ 4 cm  
☐ 3 cm

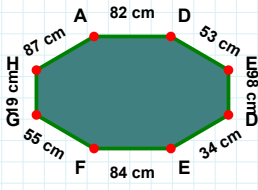


|MN| kaç cm'dir?

- ☐ 55 cm  
☐ 65 cm  
☐ 60 cm

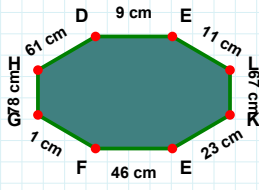


**SORU:** Aşağıdaki şekillerde istenen kenarın kaç birim veya santimetre olduğunu bulunuz.



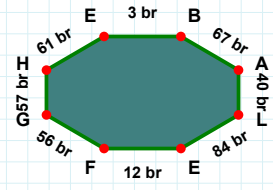
|HD| kaç cm'dir?

- ☐ 59 cm  
☐ 62 cm  
☐ 61 cm



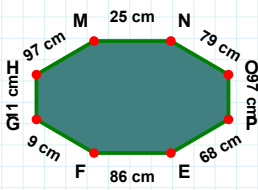
|EB| kaç br'dir?

- ☐ 2 br  
☐ 5 br  
☐ 3 br



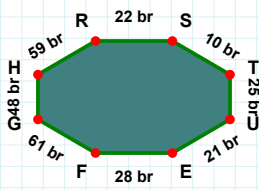
|DE| kaç cm'dir?

- ☐ 36 cm  
☐ 34 cm  
☐ 35 cm



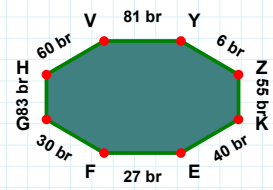
|MN| kaç cm'dir?

- ☐ 23 cm  
☐ 35 cm  
☐ 25 cm



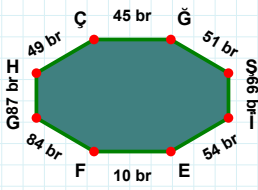
|UE| kaç br'dir?

- ☐ 31 br  
☐ 21 br  
☐ 20 br



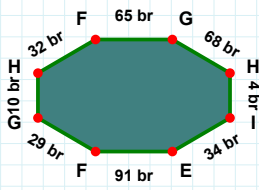
|ZK| kaç br'dir?

- ☐ 58 br  
☐ 55 br  
☐ 54 br



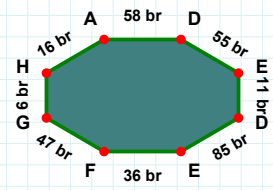
|HÇ| kaç br'dir?

- ☐ 59 br  
☐ 49 br  
☐ 47 br



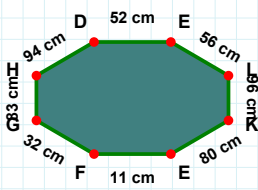
|IE| kaç br'dir?

- ☐ 44 br  
☐ 24 br  
☐ 34 br



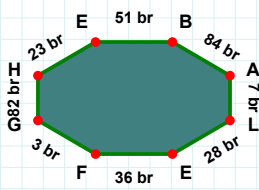
|EF| kaç br'dir?

- ☐ 41 br  
☐ 36 br  
☐ 46 br



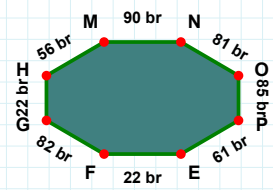
|KE| kaç cm'dir?

- ☐ 90 cm  
☐ 80 cm  
☐ 75 cm



|PE| kaç br'dir?

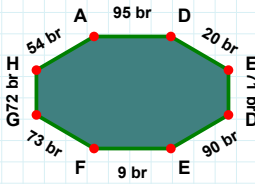
- ☐ 56 br  
☐ 61 br  
☐ 51 br



|HE| kaç br'dir?

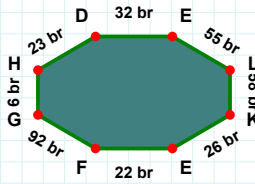
- ☐ 25 br  
☐ 23 br  
☐ 13 br

**SORU:** Aşağıdaki şekillerde istenen kenarın kaç birim veya santimetre olduğunu bulunuz.



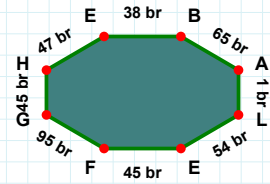
|EB| kaç brdir?

- ☐ 35 br  
☐ 48 br  
☐ 38 br



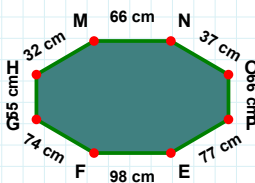
|HA| kaç brdir?

- ☐ 54 br  
☐ 52 br  
☐ 51 br



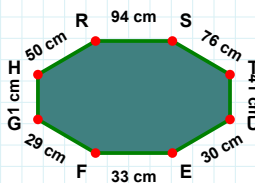
|FG| kaç brdir?

- ☐ 93 br  
☐ 92 br  
☐ 91 br



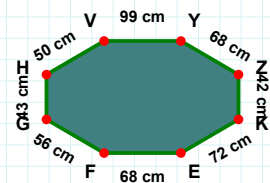
|PE| kaç cmdir?

- ☐ 80 cm  
☐ 77 cm  
☐ 76 cm



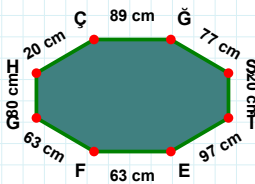
|KE| kaç cmdir?

- ☐ 71 cm  
☐ 72 cm  
☐ 69 cm



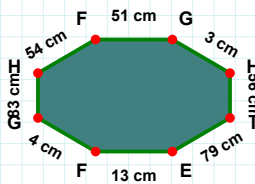
|RS| kaç cmdir?

- ☐ 96 cm  
☐ 94 cm  
☐ 89 cm



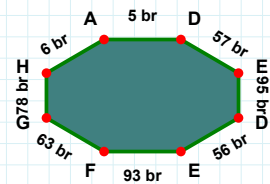
|FG| kaç cmdir?

- ☐ 51 cm  
☐ 46 cm  
☐ 49 cm



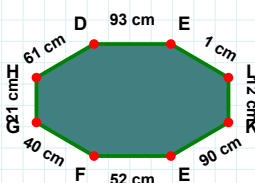
|EF| kaç brdir?

- ☐ 98 br  
☐ 93 br  
☐ 91 br



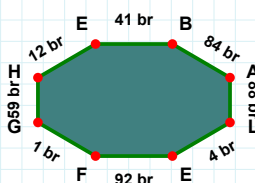
|ÇĞ| kaç cmdir?

- ☐ 91 cm  
☐ 88 cm  
☐ 89 cm



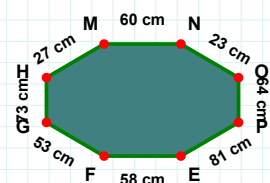
|LE| kaç brdir?

- ☐ 2 br  
☐ 3 br  
☐ 4 br



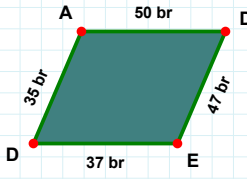
|LK| kaç cmdir?

- ☐ 12 cm  
☐ 11 cm  
☐ 10 cm



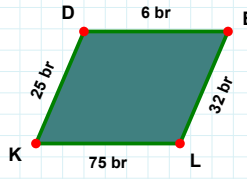
|GH| kaç cmdir?

- ☐ 74 cm  
☐ 63 cm  
☐ 73 cm

**SORU:** Aşağıdaki şekillerde istenen kenarın kaç birim veya santimetre olduğunu bulunuz.

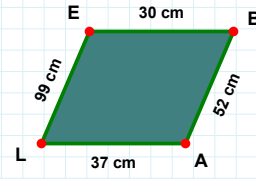
|LE| kaç cm'dir?

- ☐ 99 cm  
☐ 94 cm  
☐ 97 cm



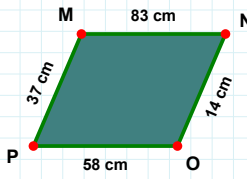
|EL| kaç br'dir?

- ☐ 29 br  
☐ 32 br  
☐ 27 br



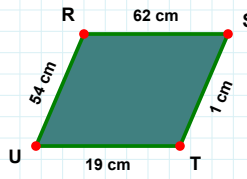
|ED| kaç br'dir?

- ☐ 37 br  
☐ 36 br  
☐ 38 br



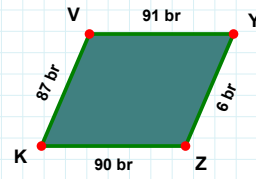
|VY| kaç br'dir?

- ☐ 89 br  
☐ 93 br  
☐ 91 br



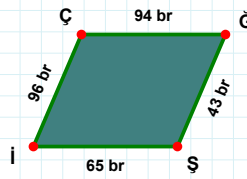
|TU| kaç cm'dir?

- ☐ 17 cm  
☐ 19 cm  
☐ 21 cm



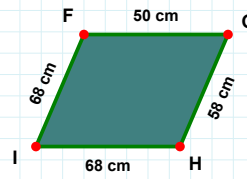
|MN| kaç cm'dir?

- ☐ 85 cm  
☐ 78 cm  
☐ 83 cm



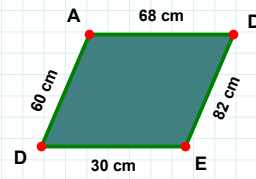
|Şİ| kaç br'dir?

- ☐ 42 br  
☐ 43 br  
☐ 41 br



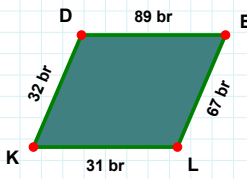
|GH| kaç cm'dir?

- ☐ 58 cm  
☐ 57 cm  
☐ 53 cm



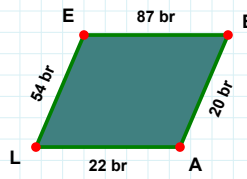
|DA| kaç cm'dir?

- ☐ 60 cm  
☐ 65 cm  
☐ 62 cm



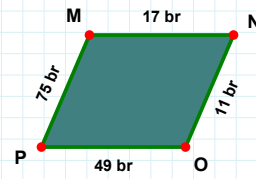
|MN| kaç br'dir?

- ☐ 17 br  
☐ 15 br  
☐ 18 br



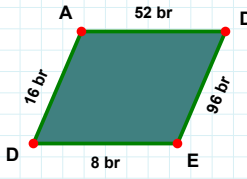
|KD| kaç br'dir?

- ☐ 33 br  
☐ 32 br  
☐ 34 br



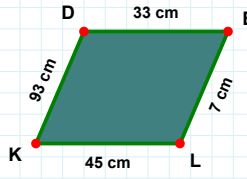
|BA| kaç br'dir?

- ☐ 15 br  
☐ 18 br  
☐ 20 br

**SORU:** Aşağıdaki şekillerde istenen kenarın kaç birim veya santimetre olduğunu bulunuz.

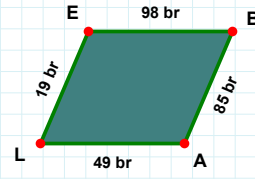
|KD| kaç cmdir?

- ☐ 90 cm  
☐ 93 cm  
☐ 96 cm



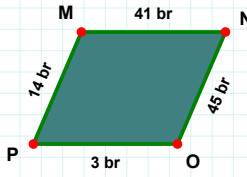
|DA| kaç brdir?

- ☐ 17 br  
☐ 16 br  
☐ 21 br



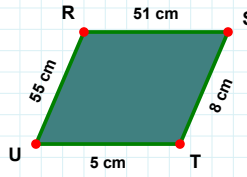
|BA| kaç brdir?

- ☐ 88 br  
☐ 80 br  
☐ 85 br



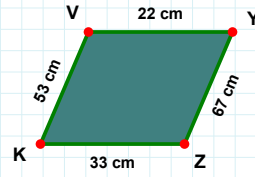
|RS| kaç cmdir?

- ☐ 51 cm  
☐ 41 cm  
☐ 50 cm



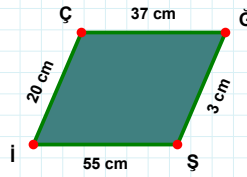
|NO| kaç brdir?

- ☐ 45 br  
☐ 44 br  
☐ 50 br



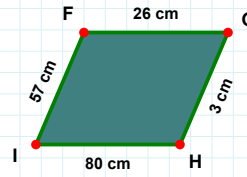
|VY| kaç cmdir?

- ☐ 17 cm  
☐ 25 cm  
☐ 22 cm



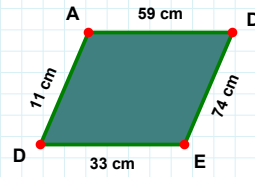
|FG| kaç cmdir?

- ☐ 23 cm  
☐ 27 cm  
☐ 26 cm



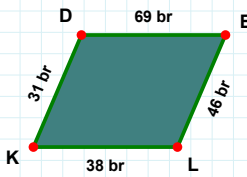
|Şİ| kaç cmdir?

- ☐ 55 cm  
☐ 60 cm  
☐ 50 cm



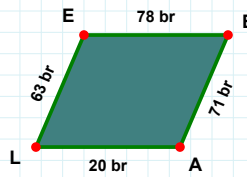
|AD| kaç cmdir?

- ☐ 58 cm  
☐ 59 cm  
☐ 56 cm



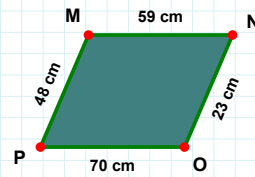
|PM| kaç cmdir?

- ☐ 49 cm  
☐ 48 cm  
☐ 58 cm



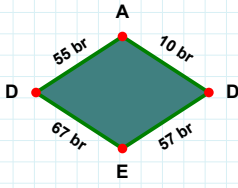
|KD| kaç brdir?

- ☐ 21 br  
☐ 31 br  
☐ 28 br



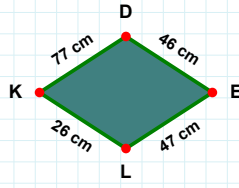
|LE| kaç brdir?

- ☐ 73 br  
☐ 63 br  
☐ 60 br

**SORU:** Aşağıdaki şekillerde istenen kenarın kaç birim veya santimetre olduğunu bulunuz.

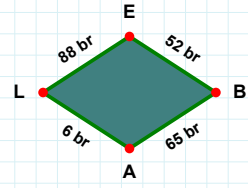
|LE| kaç brdir?

- ☐ 88 br  
☐ 90 br  
☐ 98 br



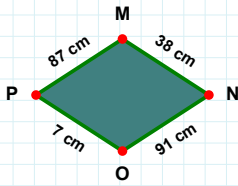
|KD| kaç cmdir?

- ☐ 79 cm  
☐ 82 cm  
☐ 77 cm



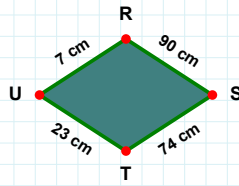
|ED| kaç brdir?

- ☐ 67 br  
☐ 70 br  
☐ 69 br



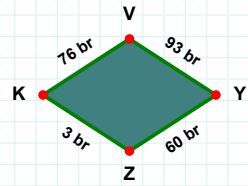
|OP| kaç cmdir?

- ☐ 6 cm  
☐ 7 cm  
☐ 4 cm



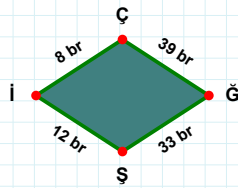
|VY| kaç brdir?

- ☐ 88 br  
☐ 93 br  
☐ 91 br



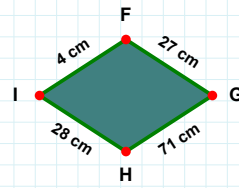
|ST| kaç cmdir?

- ☐ 79 cm  
☐ 84 cm  
☐ 74 cm



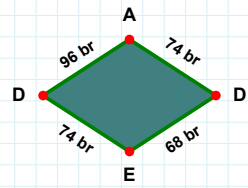
|HI| kaç cmdir?

- ☐ 18 cm  
☐ 28 cm  
☐ 30 cm



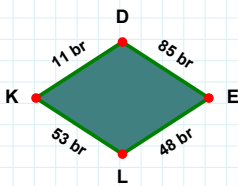
|DE| kaç brdir?

- ☐ 68 br  
☐ 65 br  
☐ 71 br



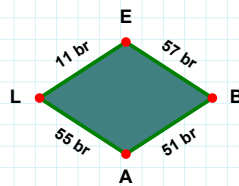
|Şİ| kaç brdir?

- ☐ 14 br  
☐ 15 br  
☐ 12 br



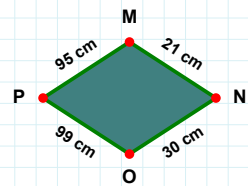
|OP| kaç cmdir?

- ☐ 97 cm  
☐ 89 cm  
☐ 99 cm



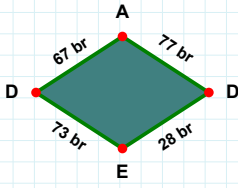
|EB| kaç brdir?

- ☐ 57 br  
☐ 62 br  
☐ 56 br



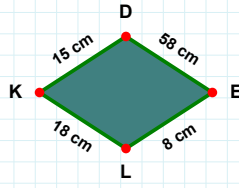
|KD| kaç brdir?

- ☐ 1 br  
☐ 10 br  
☐ 11 br

**SORU:** Aşağıdaki şekillerde istenen kenarın kaç birim veya santimetre olduğunu bulunuz.

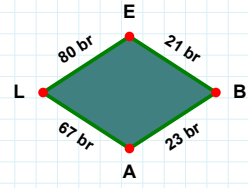
|AD| kaç brdir?

- ☐ 77 br  
☐ 76 br  
☐ 82 br



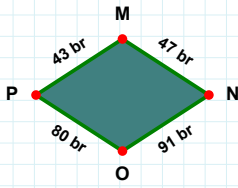
|LK| kaç cmdir?

- ☐ 15 cm  
☐ 21 cm  
☐ 18 cm



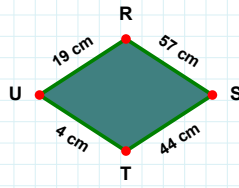
|BA| kaç brdir?

- ☐ 21 br  
☐ 20 br  
☐ 23 br



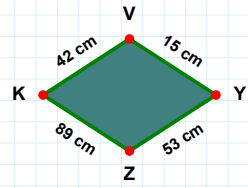
|YZ| kaç cmdir?

- ☐ 52 cm  
☐ 53 cm  
☐ 55 cm



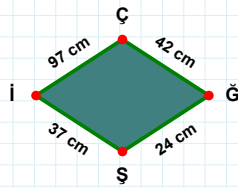
|OP| kaç brdir?

- ☐ 78 br  
☐ 80 br  
☐ 77 br



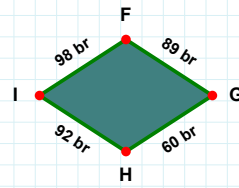
|ST| kaç cmdir?

- ☐ 42 cm  
☐ 44 cm  
☐ 54 cm



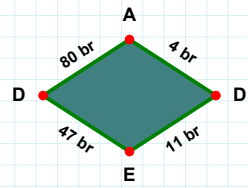
|Şİ| kaç cmdir?

- ☐ 40 cm  
☐ 37 cm  
☐ 38 cm



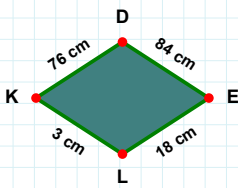
|DA| kaç brdir?

- ☐ 80 br  
☐ 85 br  
☐ 81 br



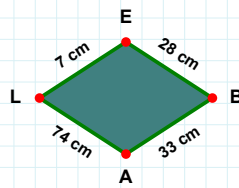
|İF| kaç brdir?

- ☐ 88 br  
☐ 97 br  
☐ 98 br



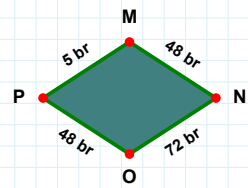
|MN| kaç brdir?

- ☐ 53 br  
☐ 46 br  
☐ 48 br



|EB| kaç cmdir?

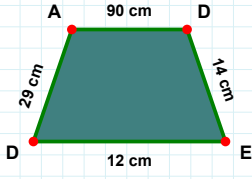
- ☐ 28 cm  
☐ 30 cm  
☐ 27 cm



|DE| kaç cmdir?

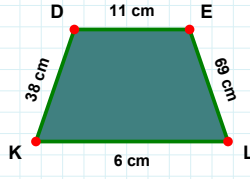
- ☐ 86 cm  
☐ 83 cm  
☐ 84 cm

**SORU:** Aşağıdaki şekillerde istenen kenarın kaç birim veya santimetre olduğunu bulunuz.



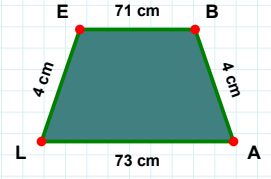
|AD| kaç cmdir?

- ☐ 95 cm  
☐ 89 cm  
☐ 90 cm



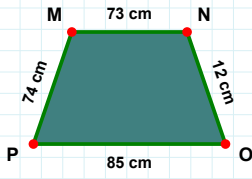
|KD| kaç cmdir?

- ☐ 38 cm  
☐ 33 cm  
☐ 39 cm



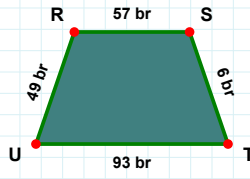
|LE| kaç cmdir?

- ☐ 4 cm  
☐ 14 cm  
☐ 5 cm



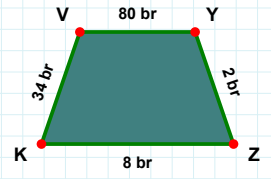
|PM| kaç cmdir?

- ☐ 74 cm  
☐ 76 cm  
☐ 84 cm



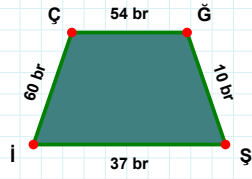
|VY| kaç brdir?

- ☐ 80 br  
☐ 78 br  
☐ 75 br



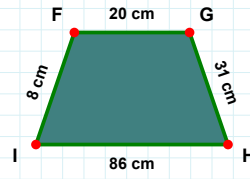
|ST| kaç brdir?

- ☐ 7 br  
☐ 16 br  
☐ 6 br



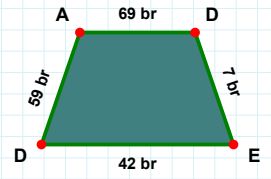
|İÇ| kaç brdir?

- ☐ 59 br  
☐ 61 br  
☐ 60 br



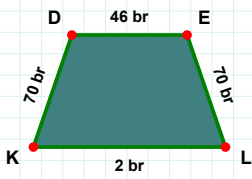
|ED| kaç brdir?

- ☐ 47 br  
☐ 52 br  
☐ 42 br



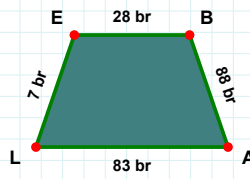
|FG| kaç cmdir?

- ☐ 20 cm  
☐ 18 cm  
☐ 15 cm



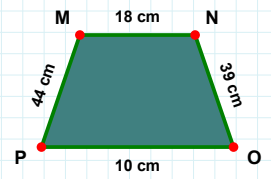
|BA| kaç brdir?

- ☐ 87 br  
☐ 88 br  
☐ 86 br



|EL| kaç brdir?

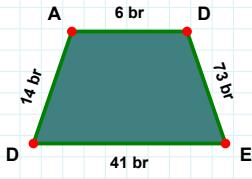
- ☐ 72 br  
☐ 69 br  
☐ 70 br



|MN| kaç cmdir?

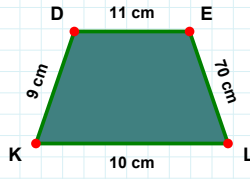
- ☐ 13 cm  
☐ 28 cm  
☐ 18 cm

**SORU:** Aşağıdaki şekillerde istenen kenarın kaç birim veya santimetre olduğunu bulunuz.



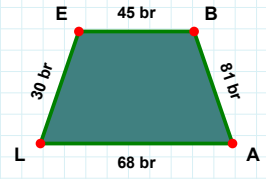
|EL| kaç cmdir?

- ☐ 80 cm  
☐ 70 cm  
☐ 69 cm



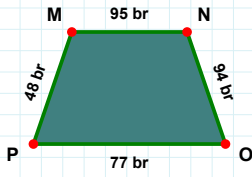
|DE| kaç brdir?

- ☐ 73 br  
☐ 83 br  
☐ 74 br



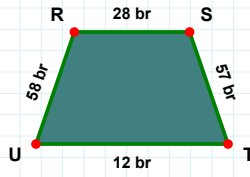
|BA| kaç brdir?

- ☐ 81 br  
☐ 76 br  
☐ 86 br



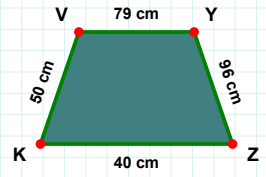
|MN| kaç brdir?

- ☐ 95 br  
☐ 94 br  
☐ 92 br



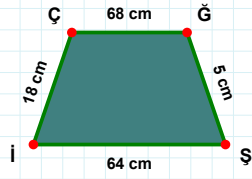
|ZK| kaç cmdir?

- ☐ 40 cm  
☐ 30 cm  
☐ 41 cm



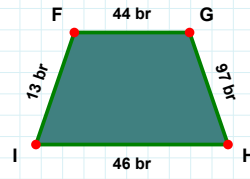
|TU| kaç brdir?

- ☐ 22 br  
☐ 14 br  
☐ 12 br



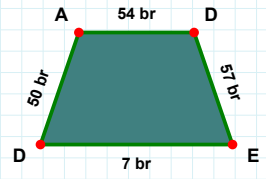
|AD| kaç brdir?

- ☐ 52 br  
☐ 64 br  
☐ 54 br



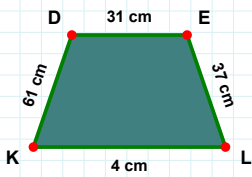
|ĞŞ| kaç cmdir?

- ☐ 5 cm  
☐ 2 cm  
☐ 6 cm



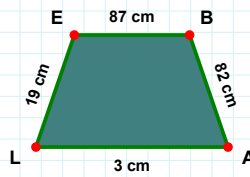
|HI| kaç brdir?

- ☐ 46 br  
☐ 43 br  
☐ 56 br



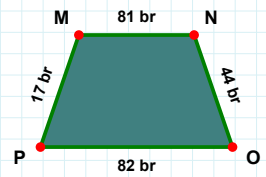
|OP| kaç brdir?

- ☐ 79 br  
☐ 82 br  
☐ 72 br



|BA| kaç cmdir?

- ☐ 79 cm  
☐ 72 cm  
☐ 82 cm

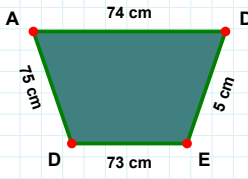


|DE| kaç cmdir?

- ☐ 31 cm  
☐ 30 cm  
☐ 41 cm

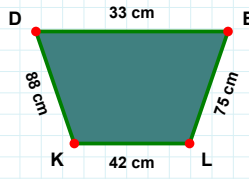


**SORU:** Aşağıdaki şekillerde istenen kenarın kaç birim veya santimetre olduğunu bulunuz.



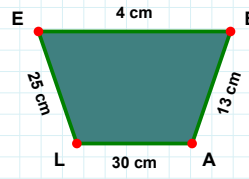
|BA| kaç cmdir?

- ☐ 11 cm  
☐ 13 cm  
☐ 16 cm



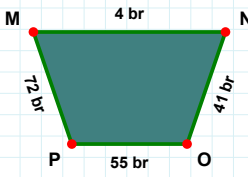
|LK| kaç cmdir?

- ☐ 40 cm  
☐ 44 cm  
☐ 42 cm



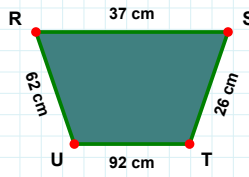
|AD| kaç cmdir?

- ☐ 74 cm  
☐ 73 cm  
☐ 71 cm



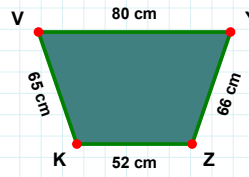
|VY| kaç cmdir?

- ☐ 80 cm  
☐ 82 cm  
☐ 75 cm



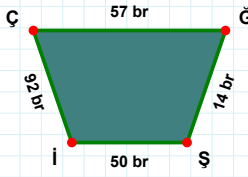
|TU| kaç cmdir?

- ☐ 92 cm  
☐ 90 cm  
☐ 82 cm



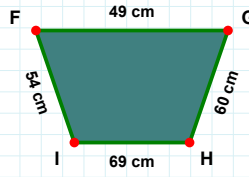
|OP| kaç brdir?

- ☐ 45 br  
☐ 57 br  
☐ 55 br



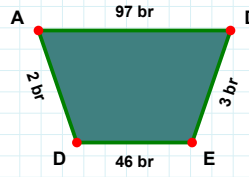
|İF| kaç cmdir?

- ☐ 53 cm  
☐ 56 cm  
☐ 54 cm



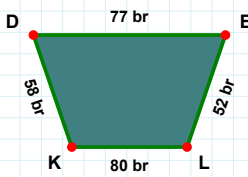
|ED| kaç brdir?

- ☐ 41 br  
☐ 43 br  
☐ 46 br



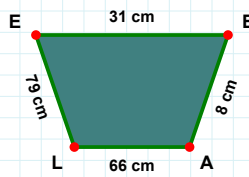
|ÇĞ| kaç brdir?

- ☐ 58 br  
☐ 57 br  
☐ 52 br



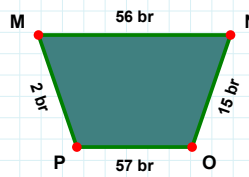
|DE| kaç brdir?

- ☐ 77 br  
☐ 67 br  
☐ 82 br



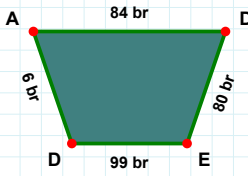
|PM| kaç brdir?

- ☐ 2 br  
☐ 7 br  
☐ 1 br



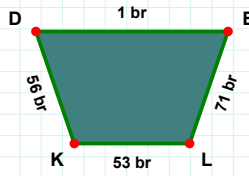
|EB| kaç cmdir?

- ☐ 26 cm  
☐ 31 cm  
☐ 34 cm

**SORU:** Aşağıdaki şekillerde istenen kenarın kaç birim veya santimetre olduğunu bulunuz.

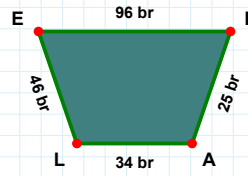
|AD| kaç brdir?

- ☐ 94 br  
☐ 79 br  
☐ 84 br



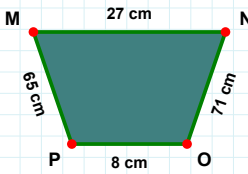
|DE| kaç brdir?

- ☐ 3 br  
☐ 11 br  
☐ 1 br



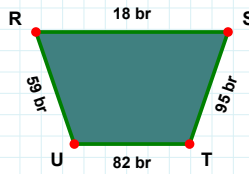
|AL| kaç brdir?

- ☐ 31 br  
☐ 39 br  
☐ 34 br



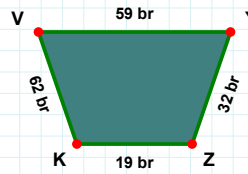
|KV| kaç brdir?

- ☐ 61 br  
☐ 62 br  
☐ 65 br



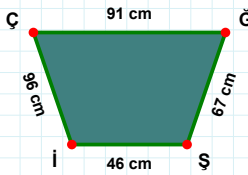
|TU| kaç brdir?

- ☐ 82 br  
☐ 72 br  
☐ 77 br



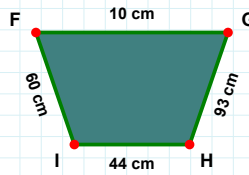
|NO| kaç cmdir?

- ☐ 66 cm  
☐ 71 cm  
☐ 61 cm



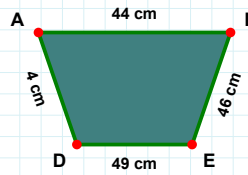
|GH| kaç cmdir?

- ☐ 93 cm  
☐ 96 cm  
☐ 90 cm



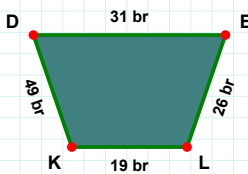
|ÇĞ| kaç cmdir?

- ☐ 91 cm  
☐ 81 cm  
☐ 94 cm



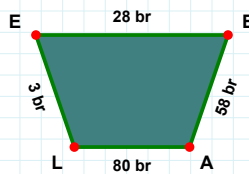
|ED| kaç cmdir?

- ☐ 54 cm  
☐ 49 cm  
☐ 46 cm



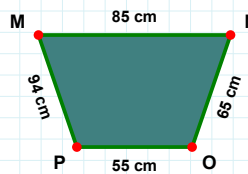
|MN| kaç cmdir?

- ☐ 80 cm  
☐ 86 cm  
☐ 85 cm



|KD| kaç brdir?

- ☐ 39 br  
☐ 49 br  
☐ 54 br



|EB| kaç brdir?

- ☐ 28 br  
☐ 31 br  
☐ 30 br

## SÜREÇ ODAKLI DEĞERLENDİRME ÖLÇEĞİ

Geliştirilmeli (0-109)	İyi (110-187)	Çok İyi (188-265)	Mükemmel (266-312)
<input type="checkbox"/>	<input type="checkbox"/>	<input type="checkbox"/>	<input type="checkbox"/>

Hazırlayan: .....

Bu bölüme sınıfınızın ilgili kazanıma yönelik genel durumuna ilişkin gözlem ve izlenimlerinizi, öğrencilerinizin bu kazanımla ilgili öğrenme eksikliklerini ve bu eksikliklerin giderilmesi amacıyla yaptığınız/yapmayı planladığınız faaliyetleri not edebilirsiniz.

No	Adı - Soyadı	Toplam Puan	Değerlendirme
1			
2			
3			
4			
5			
6			
7			
8			
9			
10			
11			
12			
13			
14			
15			
16			
17			
18			
19			
20			
21			
22			
23			
24			
25			
26			
27			
28			
29			
30			
31			
32			
33			
34			
35			

Hazırlayan: .....