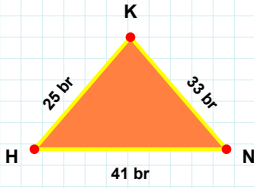
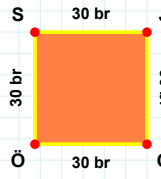


**SORU:** Aşağıdaki şekilleri inceleyiniz. Verilen kenar bilgisinin hangi şekle ait olduğunu işaretleyiniz.



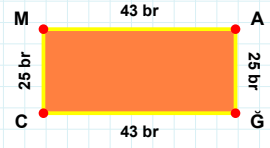
**[HÖ] kenarı hangi şeklin kenarıdır?**

- ☐ Kare  
☐ Üçgen  
☐ Dikdörtgen



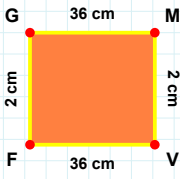
**[CM] kenarı hangi şeklin kenarıdır?**

- ☐ Dikdörtgen  
☐ Üçgen  
☐ Kare



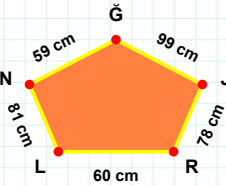
**[KH] kenarı hangi şeklin kenarıdır?**

- ☐ Dikdörtgen  
☐ Kare  
☐ Üçgen



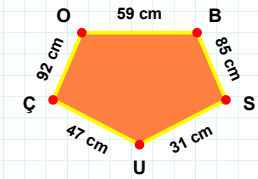
**60 cm hangi şeklin kenarıdır?**

- ☐ Dikey Dikdörtgen  
☐ Beşgen  
☐ Ters Beşgen



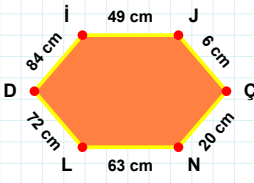
**[BS] kenarı hangi şeklin kenarıdır?**

- ☐ Ters Beşgen  
☐ Dikey Dikdörtgen  
☐ Beşgen



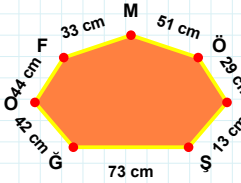
**[GM] kenarı hangi şeklin kenarıdır?**

- ☐ Ters Beşgen  
☐ Beşgen  
☐ Dikey Dikdörtgen



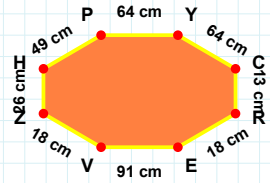
**[YC] kenarı hangi şeklin kenarıdır?**

- ☐ Altıgen  
☐ Yediggen  
☐ Sekizgen



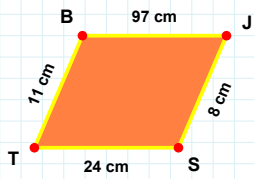
**[CN] kenarı hangi şeklin kenarıdır?**

- ☐ Sekizgen  
☐ Altıgen  
☐ Yediggen



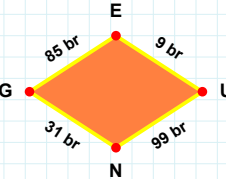
**29 cm hangi şeklin kenarıdır?**

- ☐ Yediggen  
☐ Altıgen  
☐ Sekizgen



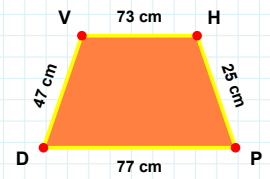
**9 br hangi şeklin kenarıdır?**

- ☐ Yamuk  
☐ Eşkenar Dörtgen  
☐ Paralelkenar



**[HP] kenarı hangi şeklin kenarıdır?**

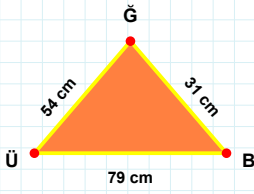
- ☐ Yamuk  
☐ Eşkenar Dörtgen  
☐ Paralelkenar



**[ST] kenarı hangi şeklin kenarıdır?**

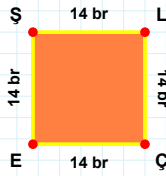
- ☐ Paralelkenar  
☐ Yamuk  
☐ Eşkenar Dörtgen

**SORU:** Aşağıdaki şekilleri inceleyiniz. Verilen kenar bilgisinin hangi şekle ait olduğunu işaretleyiniz.



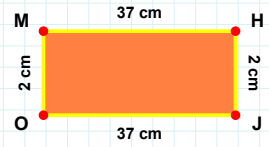
**[JO] kenarı hangi şeklin kenarıdır?**

- ☐ Dikdörtgen  
☐ Kare  
☐ Üçgen



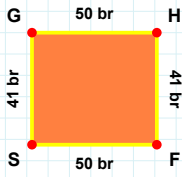
**[ÜB] kenarı hangi şeklin kenarıdır?**

- ☐ Dikdörtgen  
☐ Kare  
☐ Üçgen



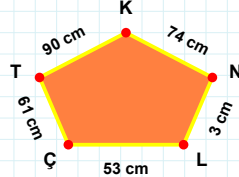
**[ÇE] kenarı hangi şeklin kenarıdır?**

- ☐ Dikdörtgen  
☐ Üçgen  
☐ Kare



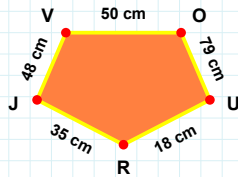
**[UR] kenarı hangi şeklin kenarıdır?**

- ☐ Ters Beşgen  
☐ Beşgen  
☐ Dikey Dikdörtgen



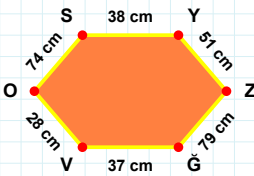
**[SG] kenarı hangi şeklin kenarıdır?**

- ☐ Dikey Dikdörtgen  
☐ Beşgen  
☐ Ters Beşgen



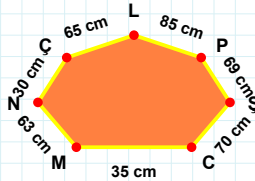
**3 cm hangi şeklin kenarıdır?**

- ☐ Beşgen  
☐ Dikey Dikdörtgen  
☐ Ters Beşgen



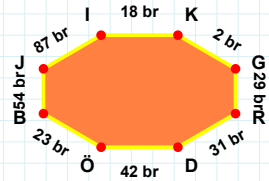
**35 cm hangi şeklin kenarıdır?**

- ☐ Yedigen  
☐ Sekizgen  
☐ Altıgen



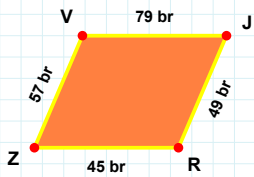
**[ÖB] kenarı hangi şeklin kenarıdır?**

- ☐ Sekizgen  
☐ Yedigen  
☐ Altıgen



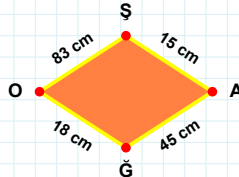
**[ZĞ] kenarı hangi şeklin kenarıdır?**

- ☐ Yedigen  
☐ Altıgen  
☐ Sekizgen



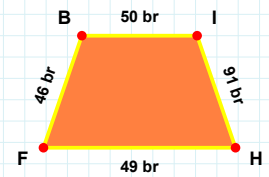
**[IH] kenarı hangi şeklin kenarıdır?**

- ☐ Eşkenar Dörtgen  
☐ Paralelkenar  
☐ Yamuk



**[ZV] kenarı hangi şeklin kenarıdır?**

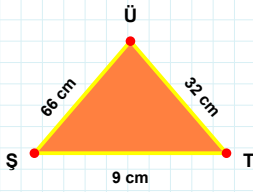
- ☐ Paralelkenar  
☐ Eşkenar Dörtgen  
☐ Yamuk



**83 cm hangi şeklin kenarıdır?**

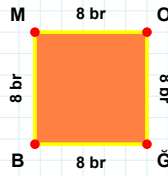
- ☐ Paralelkenar  
☐ Yamuk  
☐ Eşkenar Dörtgen

**SORU:** Aşağıdaki şekilleri inceleyiniz. Verilen kenar bilgisinin hangi şekle ait olduğunu işaretleyiniz.



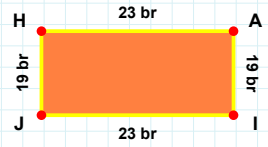
[AÜ] kenarı hangi şeklin kenarıdır?

- ☐ Üçgen  
☐ Kare  
☐ Dikdörtgen



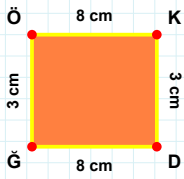
[ÜŞ] kenarı hangi şeklin kenarıdır?

- ☐ Dikdörtgen  
☐ Kare  
☐ Üçgen



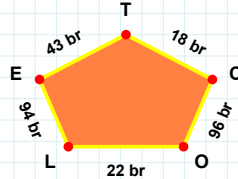
[MO] kenarı hangi şeklin kenarıdır?

- ☐ Üçgen  
☐ Dikdörtgen  
☐ Kare



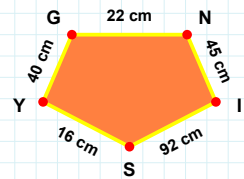
[İS] kenarı hangi şeklin kenarıdır?

- ☐ Dikey Dikdörtgen  
☐ Ters Beşgen  
☐ Beşgen



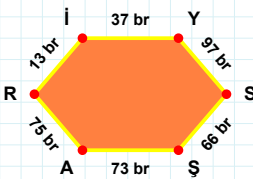
[GÖ] kenarı hangi şeklin kenarıdır?

- ☐ Dikey Dikdörtgen  
☐ Ters Beşgen  
☐ Beşgen



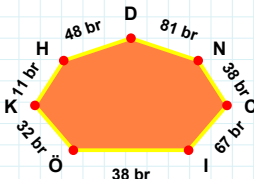
18 br hangi şeklin kenarıdır?

- ☐ Ters Beşgen  
☐ Beşgen  
☐ Dikey Dikdörtgen



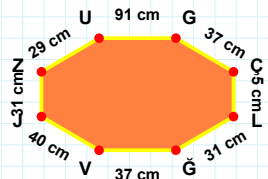
[LĞ] kenarı hangi şeklin kenarıdır?

- ☐ Altıgen  
☐ Yedigen  
☐ Sekizgen



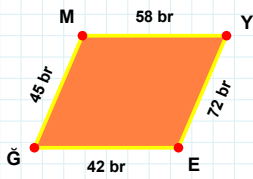
[ŞA] kenarı hangi şeklin kenarıdır?

- ☐ Sekizgen  
☐ Yedigen  
☐ Altıgen



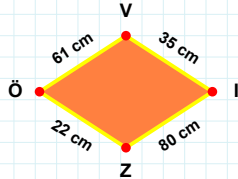
48 br hangi şeklin kenarıdır?

- ☐ Yedigen  
☐ Altıgen  
☐ Sekizgen



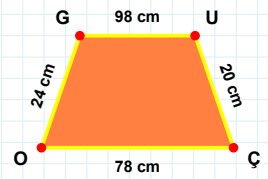
22 cm hangi şeklin kenarıdır?

- ☐ Eşkenar Dörtgen  
☐ Paralelkenar  
☐ Yamuk



[ÇO] kenarı hangi şeklin kenarıdır?

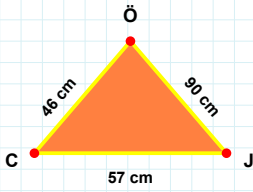
- ☐ Yamuk  
☐ Eşkenar Dörtgen  
☐ Paralelkenar



[YE] kenarı hangi şeklin kenarıdır?

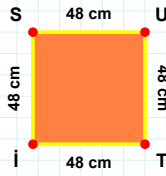
- ☐ Eşkenar Dörtgen  
☐ Paralelkenar  
☐ Yamuk

**SORU:** Aşağıdaki şekilleri inceleyiniz. Verilen kenar bilgisinin hangi şekle ait olduğunu işaretleyiniz.



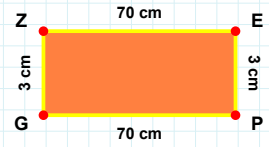
**|EP| kenarı hangi şeklin kenarıdır?**

- ☐ Üçgen  
☐ Kare  
☐ Dikdörtgen



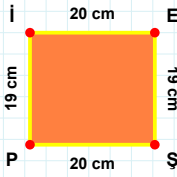
**|ÖC| kenarı hangi şeklin kenarıdır?**

- ☐ Kare  
☐ Üçgen  
☐ Dikdörtgen



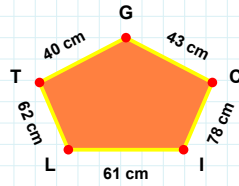
**|UT| kenarı hangi şeklin kenarıdır?**

- ☐ Kare  
☐ Dikdörtgen  
☐ Üçgen



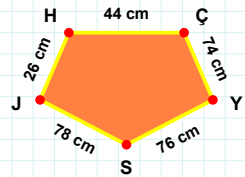
**61 cm hangi şeklin kenarıdır?**

- ☐ Ters Beşgen  
☐ Dikey Dikdörtgen  
☐ Beşgen



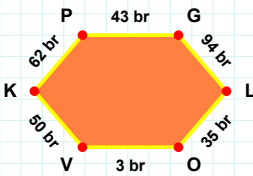
**|HÇ| kenarı hangi şeklin kenarıdır?**

- ☐ Dikey Dikdörtgen  
☐ Ters Beşgen  
☐ Beşgen



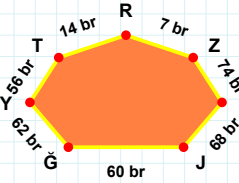
**|İE| kenarı hangi şeklin kenarıdır?**

- ☐ Beşgen  
☐ Ters Beşgen  
☐ Dikey Dikdörtgen



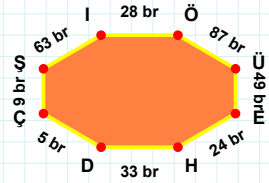
**60 br hangi şeklin kenarıdır?**

- ☐ Altıgen  
☐ Yedigen  
☐ Sekizgen



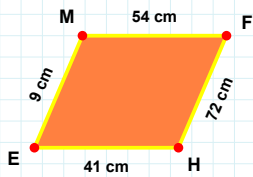
**|EH| kenarı hangi şeklin kenarıdır?**

- ☐ Sekizgen  
☐ Altıgen  
☐ Yedigen



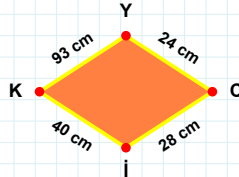
**|PG| kenarı hangi şeklin kenarıdır?**

- ☐ Sekizgen  
☐ Altıgen  
☐ Yedigen



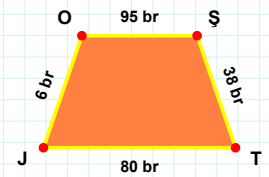
**93 cm hangi şeklin kenarıdır?**

- ☐ Yamuk  
☐ Paralelkenar  
☐ Eşkenar Dörtgen



**|JO| kenarı hangi şeklin kenarıdır?**

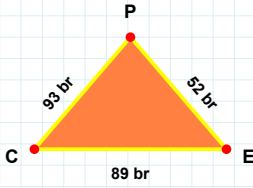
- ☐ Yamuk  
☐ Eşkenar Dörtgen  
☐ Paralelkenar



**|MF| kenarı hangi şeklin kenarıdır?**

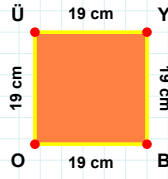
- ☐ Yamuk  
☐ Eşkenar Dörtgen  
☐ Paralelkenar

**SORU:** Aşağıdaki şekilleri inceleyiniz. Verilen kenar bilgisinin hangi şekle ait olduğunu işaretleyiniz.



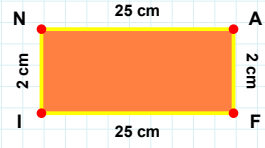
**[ÜY] kenarı hangi şeklin kenarıdır?**

- ☐ Üçgen  
☐ Kare  
☐ Dikdörtgen



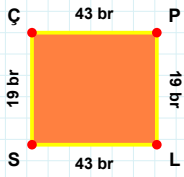
**[NA] kenarı hangi şeklin kenarıdır?**

- ☐ Üçgen  
☐ Dikdörtgen  
☐ Kare



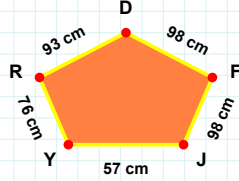
**[EP] kenarı hangi şeklin kenarıdır?**

- ☐ Kare  
☐ Üçgen  
☐ Dikdörtgen



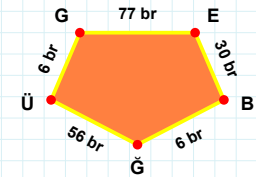
**76 cm hangi şeklin kenarıdır?**

- ☐ Beşgen  
☐ Ters Beşgen  
☐ Dikey Dikdörtgen



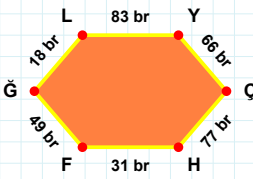
**[ÜG] kenarı hangi şeklin kenarıdır?**

- ☐ Beşgen  
☐ Ters Beşgen  
☐ Dikey Dikdörtgen



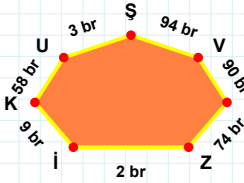
**[ÇP] kenarı hangi şeklin kenarıdır?**

- ☐ Beşgen  
☐ Dikey Dikdörtgen  
☐ Ters Beşgen



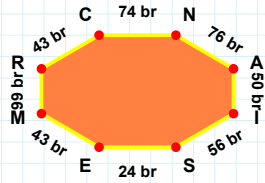
**[NA] kenarı hangi şeklin kenarıdır?**

- ☐ Altıgen  
☐ Sekizgen  
☐ Yedigen



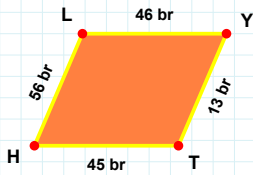
**[LY] kenarı hangi şeklin kenarıdır?**

- ☐ Altıgen  
☐ Sekizgen  
☐ Yedigen



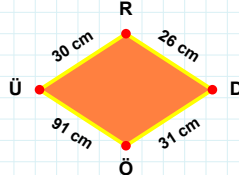
**94 br hangi şeklin kenarıdır?**

- ☐ Sekizgen  
☐ Yedigen  
☐ Altıgen



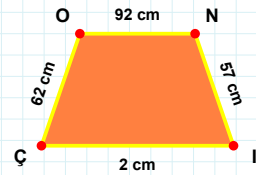
**[ÇO] kenarı hangi şeklin kenarıdır?**

- ☐ Eşkenar Dörtgen  
☐ Paralelkenar  
☐ Yamuk



**[HL] kenarı hangi şeklin kenarıdır?**

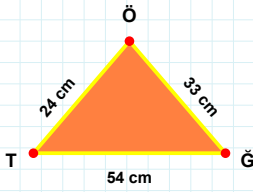
- ☐ Eşkenar Dörtgen  
☐ Yamuk  
☐ Paralelkenar



**30 cm hangi şeklin kenarıdır?**

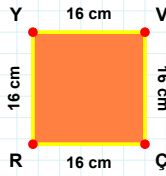
- ☐ Eşkenar Dörtgen  
☐ Yamuk  
☐ Paralelkenar

**SORU:** Aşağıdaki şekilleri inceleyiniz. Verilen kenar bilgisinin hangi şekle ait olduğunu işaretleyiniz.



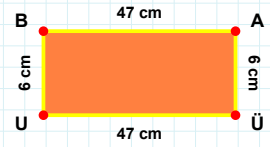
[AÜ] kenarı hangi şeklin kenarıdır?

- ☐ Dikdörtgen  
☐ Kare  
☐ Üçgen



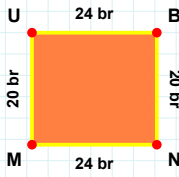
[ÖT] kenarı hangi şeklin kenarıdır?

- ☐ Üçgen  
☐ Kare  
☐ Dikdörtgen



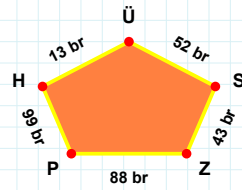
[VÇ] kenarı hangi şeklin kenarıdır?

- ☐ Dikdörtgen  
☐ Kare  
☐ Üçgen



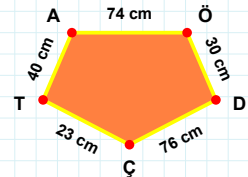
88 br hangi şeklin kenarıdır?

- ☐ Ters Beşgen  
☐ Dikey Dikdörtgen  
☐ Beşgen



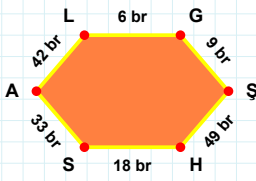
[AÖ] kenarı hangi şeklin kenarıdır?

- ☐ Ters Beşgen  
☐ Dikey Dikdörtgen  
☐ Beşgen



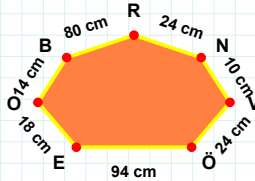
[BN] kenarı hangi şeklin kenarıdır?

- ☐ Dikey Dikdörtgen  
☐ Ters Beşgen  
☐ Beşgen



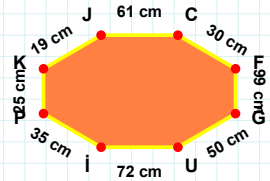
18 cm hangi şeklin kenarıdır?

- ☐ Sekizgen  
☐ Altıgen  
☐ Yediggen



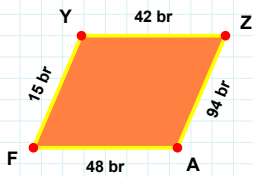
[KJ] kenarı hangi şeklin kenarıdır?

- ☐ Yediggen  
☐ Sekizgen  
☐ Altıgen



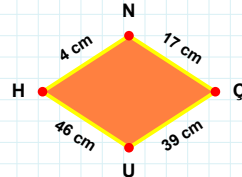
[AL] kenarı hangi şeklin kenarıdır?

- ☐ Yediggen  
☐ Altıgen  
☐ Sekizgen



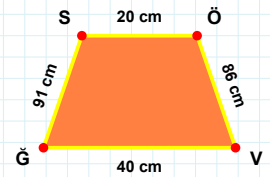
39 cm hangi şeklin kenarıdır?

- ☐ Paralelkenar  
☐ Yamuk  
☐ Eşkenar Dörtgen



[VĞ] kenarı hangi şeklin kenarıdır?

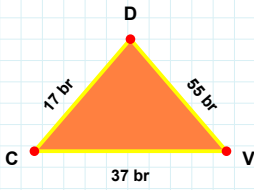
- ☐ Eşkenar Dörtgen  
☐ Yamuk  
☐ Paralelkenar



[ZA] kenarı hangi şeklin kenarıdır?

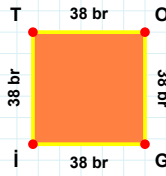
- ☐ Eşkenar Dörtgen  
☐ Yamuk  
☐ Paralelkenar

**SORU:** Aşağıdaki şekilleri inceleyiniz. Verilen kenar bilgisinin hangi şekle ait olduğunu işaretleyiniz.



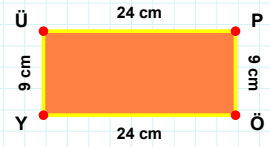
**[İT] kenarı hangi şeklin kenarıdır?**

- ☐ Kare  
☐ Üçgen  
☐ Dikdörtgen



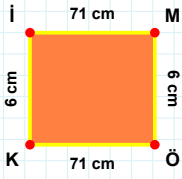
**[ÖY] kenarı hangi şeklin kenarıdır?**

- ☐ Kare  
☐ Üçgen  
☐ Dikdörtgen



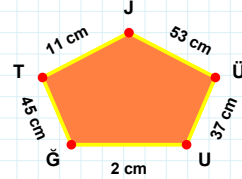
**[CV] kenarı hangi şeklin kenarıdır?**

- ☐ Kare  
☐ Üçgen  
☐ Dikdörtgen



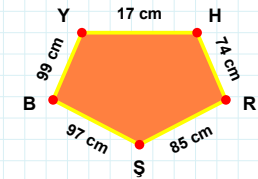
**11 cm hangi şeklin kenarıdır?**

- ☐ Dikey Dikdörtgen  
☐ Beşgen  
☐ Ters Beşgen



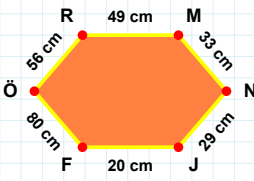
**[BY] kenarı hangi şeklin kenarıdır?**

- ☐ Beşgen  
☐ Ters Beşgen  
☐ Dikey Dikdörtgen



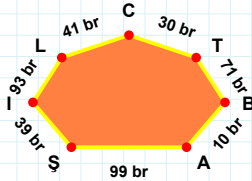
**[Kİ] kenarı hangi şeklin kenarıdır?**

- ☐ Beşgen  
☐ Ters Beşgen  
☐ Dikey Dikdörtgen



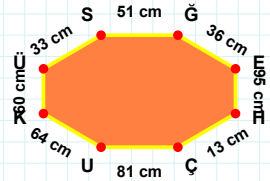
**[KÜ] kenarı hangi şeklin kenarıdır?**

- ☐ Sekizgen  
☐ Yediggen  
☐ Altıgen



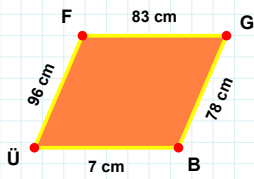
**[MN] kenarı hangi şeklin kenarıdır?**

- ☐ Yediggen  
☐ Sekizgen  
☐ Altıgen



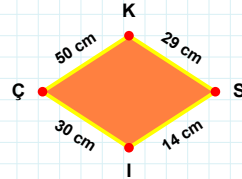
**39 br hangi şeklin kenarıdır?**

- ☐ Altıgen  
☐ Sekizgen  
☐ Yediggen



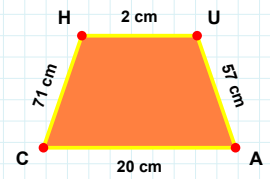
**50 cm hangi şeklin kenarıdır?**

- ☐ Yamuk  
☐ Paralelkenar  
☐ Eşkenar Dörtgen



**[UA] kenarı hangi şeklin kenarıdır?**

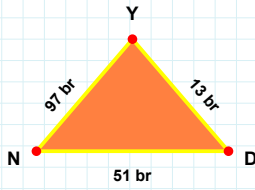
- ☐ Eşkenar Dörtgen  
☐ Yamuk  
☐ Paralelkenar



**[GB] kenarı hangi şeklin kenarıdır?**

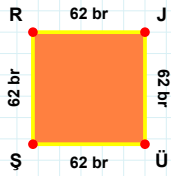
- ☐ Paralelkenar  
☐ Yamuk  
☐ Eşkenar Dörtgen

**SORU:** Aşağıdaki şekilleri inceleyiniz. Verilen kenar bilgisinin hangi şekle ait olduğunu işaretleyiniz.



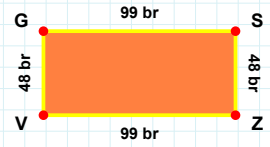
[RJ] kenarı hangi şeklin kenarıdır?

- ☐ Dikdörtgen  
☐ Kare  
☐ Üçgen



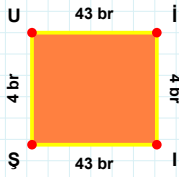
[VG] kenarı hangi şeklin kenarıdır?

- ☐ Kare  
☐ Dikdörtgen  
☐ Üçgen



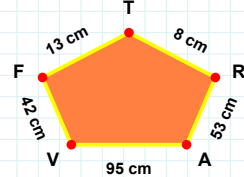
[YN] kenarı hangi şeklin kenarıdır?

- ☐ Üçgen  
☐ Dikdörtgen  
☐ Kare



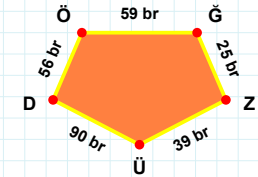
[ÜD] kenarı hangi şeklin kenarıdır?

- ☐ Beşgen  
☐ Dikey Dikdörtgen  
☐ Ters Beşgen



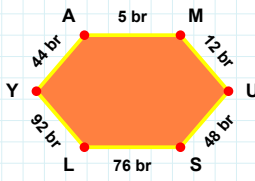
[İŞ] kenarı hangi şeklin kenarıdır?

- ☐ Dikey Dikdörtgen  
☐ Beşgen  
☐ Ters Beşgen



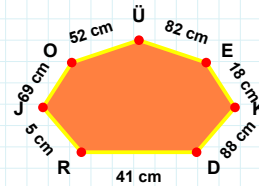
8 cm hangi şeklin kenarıdır?

- ☐ Dikey Dikdörtgen  
☐ Beşgen  
☐ Ters Beşgen



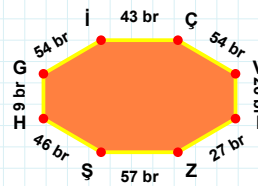
18 cm hangi şeklin kenarıdır?

- ☐ Altıgen  
☐ Yediggen  
☐ Sekizgen



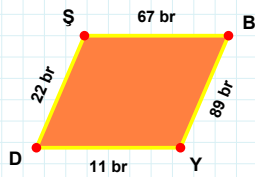
[ZŞ] kenarı hangi şeklin kenarıdır?

- ☐ Altıgen  
☐ Sekizgen  
☐ Yediggen



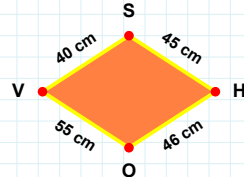
[LY] kenarı hangi şeklin kenarıdır?

- ☐ Sekizgen  
☐ Altıgen  
☐ Yediggen



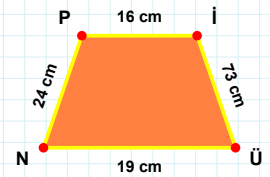
46 cm hangi şeklin kenarıdır?

- ☐ Paralelkenar  
☐ Eşkenar Dörtgen  
☐ Yamuk



[NP] kenarı hangi şeklin kenarıdır?

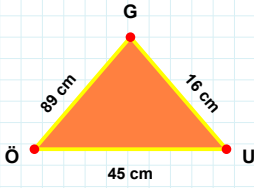
- ☐ Eşkenar Dörtgen  
☐ Paralelkenar  
☐ Yamuk



[BY] kenarı hangi şeklin kenarıdır?

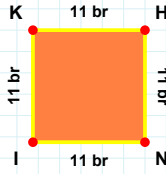
- ☐ Paralelkenar  
☐ Eşkenar Dörtgen  
☐ Yamuk

**SORU:** Aşağıdaki şekilleri inceleyiniz. Verilen kenar bilgisinin hangi şekle ait olduğunu işaretleyiniz.



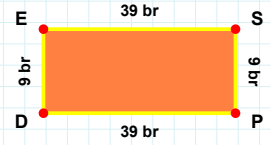
**[SP] kenarı hangi şeklin kenarıdır?**

- ☐ Dikdörtgen  
☐ Kare  
☐ Üçgen



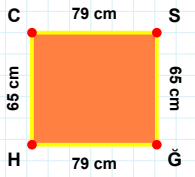
**[ÖÜ] kenarı hangi şeklin kenarıdır?**

- ☐ Dikdörtgen  
☐ Kare  
☐ Üçgen



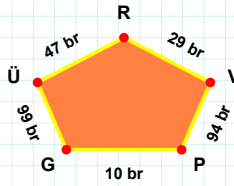
**[NI] kenarı hangi şeklin kenarıdır?**

- ☐ Dikdörtgen  
☐ Kare  
☐ Üçgen



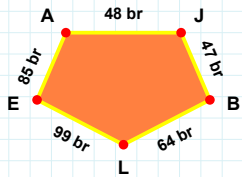
**29 br hangi şeklin kenarıdır?**

- ☐ Ters Beşgen  
☐ Dikey Dikdörtgen  
☐ Beşgen



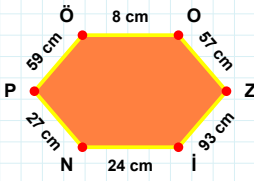
**[AJ] kenarı hangi şeklin kenarıdır?**

- ☐ Ters Beşgen  
☐ Dikey Dikdörtgen  
☐ Beşgen



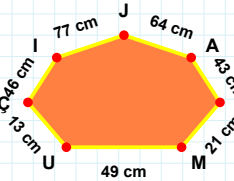
**[CS] kenarı hangi şeklin kenarıdır?**

- ☐ Beşgen  
☐ Dikey Dikdörtgen  
☐ Ters Beşgen



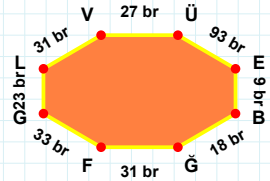
**13 cm hangi şeklin kenarıdır?**

- ☐ Yedigen  
☐ Altıgen  
☐ Sekizgen



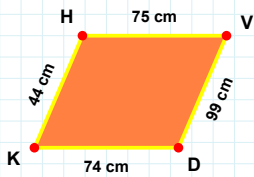
**[LV] kenarı hangi şeklin kenarıdır?**

- ☐ Yedigen  
☐ Sekizgen  
☐ Altıgen



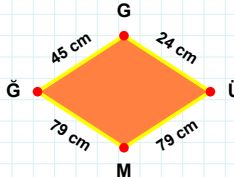
**[Zİ] kenarı hangi şeklin kenarıdır?**

- ☐ Altıgen  
☐ Yedigen  
☐ Sekizgen



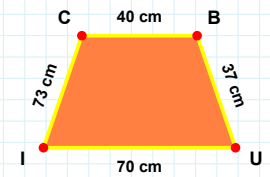
**[IC] kenarı hangi şeklin kenarıdır?**

- ☐ Paralelkenar  
☐ Yamuk  
☐ Eşkenar Dörtgen



**[DK] kenarı hangi şeklin kenarıdır?**

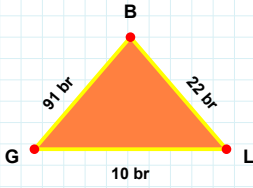
- ☐ Paralelkenar  
☐ Eşkenar Dörtgen  
☐ Yamuk



**24 cm hangi şeklin kenarıdır?**

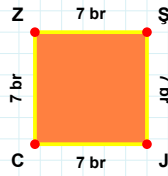
- ☐ Eşkenar Dörtgen  
☐ Paralelkenar  
☐ Yamuk

**SORU:** Aşağıdaki şekilleri inceleyiniz. Verilen kenar bilgisinin hangi şekle ait olduğunu işaretleyiniz.



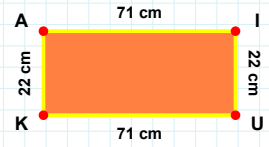
**[KA] kenarı hangi şeklin kenarıdır?**

- ☐ Dikdörtgen  
☐ Üçgen  
☐ Kare



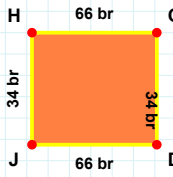
**[GL] kenarı hangi şeklin kenarıdır?**

- ☐ Dikdörtgen  
☐ Üçgen  
☐ Kare



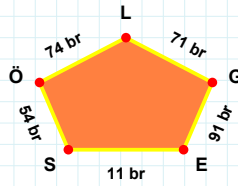
**[JC] kenarı hangi şeklin kenarıdır?**

- ☐ Dikdörtgen  
☐ Üçgen  
☐ Kare



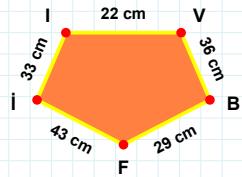
**11 br hangi şeklin kenarıdır?**

- ☐ Beşgen  
☐ Ters Beşgen  
☐ Dikey Dikdörtgen



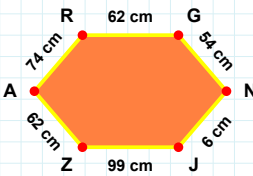
**[Fİ] kenarı hangi şeklin kenarıdır?**

- ☐ Ters Beşgen  
☐ Dikey Dikdörtgen  
☐ Beşgen



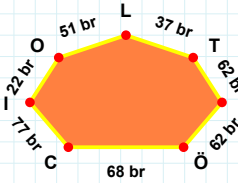
**[DJ] kenarı hangi şeklin kenarıdır?**

- ☐ Dikey Dikdörtgen  
☐ Ters Beşgen  
☐ Beşgen



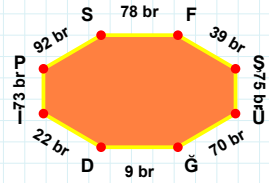
**37 br hangi şeklin kenarıdır?**

- ☐ Sekizgen  
☐ Altıgen  
☐ Yediggen



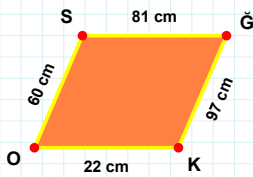
**[PS] kenarı hangi şeklin kenarıdır?**

- ☐ Yediggen  
☐ Altıgen  
☐ Sekizgen



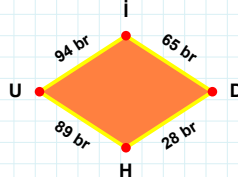
**[GN] kenarı hangi şeklin kenarıdır?**

- ☐ Yediggen  
☐ Altıgen  
☐ Sekizgen



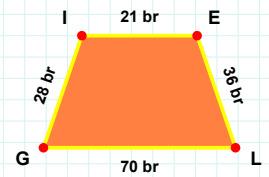
**[LG] kenarı hangi şeklin kenarıdır?**

- ☐ Yamuk  
☐ Paralelkenar  
☐ Eşkenar Dörtgen



**[ĞK] kenarı hangi şeklin kenarıdır?**

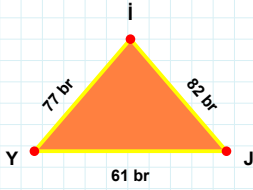
- ☐ Yamuk  
☐ Eşkenar Dörtgen  
☐ Paralelkenar



**94 br hangi şeklin kenarıdır?**

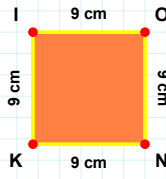
- ☐ Eşkenar Dörtgen  
☐ Paralelkenar  
☐ Yamuk

**SORU:** Aşağıdaki şekilleri inceleyiniz. Verilen kenar bilgisinin hangi şekle ait olduğunu işaretleyiniz.



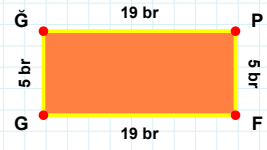
**[NK] kenarı hangi şeklin kenarıdır?**

- ☐ Dikdörtgen  
☐ Kare  
☐ Üçgen



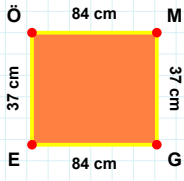
**[GĞ] kenarı hangi şeklin kenarıdır?**

- ☐ Üçgen  
☐ Dikdörtgen  
☐ Kare



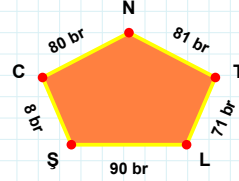
**[Jİ] kenarı hangi şeklin kenarıdır?**

- ☐ Kare  
☐ Dikdörtgen  
☐ Üçgen



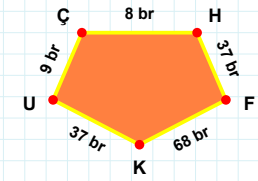
**90 br hangi şeklin kenarıdır?**

- ☐ Beşgen  
☐ Dikey Dikdörtgen  
☐ Ters Beşgen



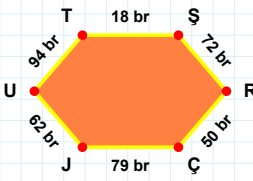
**[FK] kenarı hangi şeklin kenarıdır?**

- ☐ Beşgen  
☐ Ters Beşgen  
☐ Dikey Dikdörtgen



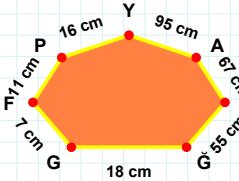
**[EÖ] kenarı hangi şeklin kenarıdır?**

- ☐ Dikey Dikdörtgen  
☐ Beşgen  
☐ Ters Beşgen



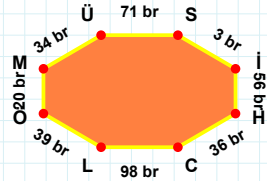
**[MÜ] kenarı hangi şeklin kenarıdır?**

- ☐ Altıgen  
☐ Sekizgen  
☐ Yedigen



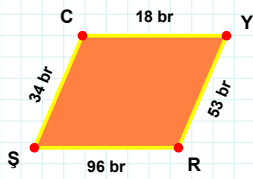
**[ÇJ] kenarı hangi şeklin kenarıdır?**

- ☐ Sekizgen  
☐ Altıgen  
☐ Yedigen



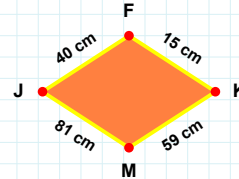
**95 cm hangi şeklin kenarıdır?**

- ☐ Altıgen  
☐ Sekizgen  
☐ Yedigen



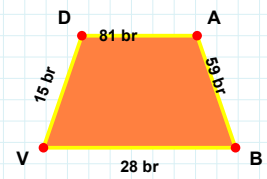
**15 cm hangi şeklin kenarıdır?**

- ☐ Paralelkenar  
☐ Yamuk  
☐ Eşkenar Dörtgen



**[DA] kenarı hangi şeklin kenarıdır?**

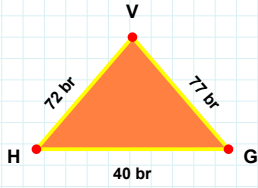
- ☐ Eşkenar Dörtgen  
☐ Paralelkenar  
☐ Yamuk



**[YR] kenarı hangi şeklin kenarıdır?**

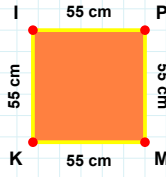
- ☐ Paralelkenar  
☐ Yamuk  
☐ Eşkenar Dörtgen

**SORU:** Aşağıdaki şekilleri inceleyiniz. Verilen kenar bilgisinin hangi şekle ait olduğunu işaretleyiniz.



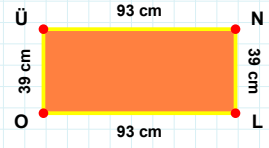
**[LO] kenarı hangi şeklin kenarıdır?**

- ☐ Kare  
☐ Dikdörtgen  
☐ Üçgen



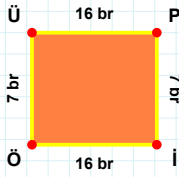
**[GV] kenarı hangi şeklin kenarıdır?**

- ☐ Dikdörtgen  
☐ Kare  
☐ Üçgen



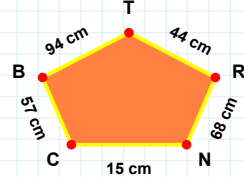
**[MK] kenarı hangi şeklin kenarıdır?**

- ☐ Dikdörtgen  
☐ Kare  
☐ Üçgen



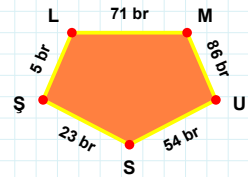
**[ŞŞ] kenarı hangi şeklin kenarıdır?**

- ☐ Beşgen  
☐ Dikey Dikdörtgen  
☐ Ters Beşgen



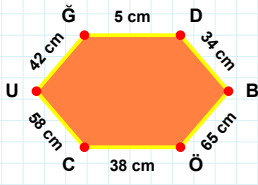
**[İÖ] kenarı hangi şeklin kenarıdır?**

- ☐ Dikey Dikdörtgen  
☐ Ters Beşgen  
☐ Beşgen



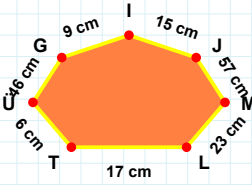
**68 cm hangi şeklin kenarıdır?**

- ☐ Dikey Dikdörtgen  
☐ Beşgen  
☐ Ters Beşgen



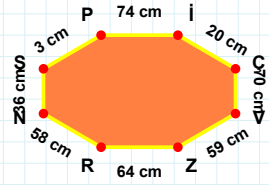
**[Pİ] kenarı hangi şeklin kenarıdır?**

- ☐ Yedigen  
☐ Sekizgen  
☐ Altıgen



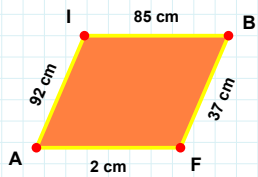
**[CÜ] kenarı hangi şeklin kenarıdır?**

- ☐ Altıgen  
☐ Sekizgen  
☐ Yedigen



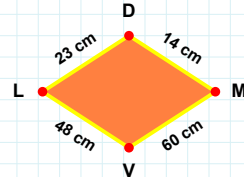
**57 cm hangi şeklin kenarıdır?**

- ☐ Altıgen  
☐ Sekizgen  
☐ Yedigen



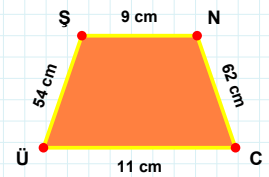
**[CÜ] kenarı hangi şeklin kenarıdır?**

- ☐ Paralelkenar  
☐ Yamuk  
☐ Eşkenar Dörtgen



**[İB] kenarı hangi şeklin kenarıdır?**

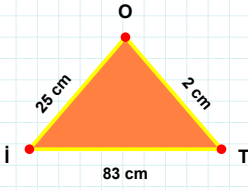
- ☐ Yamuk  
☐ Paralelkenar  
☐ Eşkenar Dörtgen



**23 cm hangi şeklin kenarıdır?**

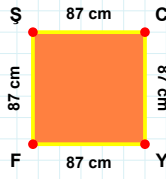
- ☐ Yamuk  
☐ Eşkenar Dörtgen  
☐ Paralelkenar

**SORU:** Aşağıdaki şekilleri inceleyiniz. Verilen kenar bilgisinin hangi şekle ait olduğunu işaretleyiniz.



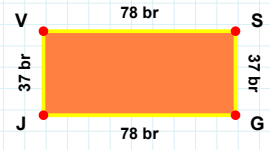
[FŞ] kenarı hangi şeklin kenarıdır?

- ☐ Üçgen  
☐ Kare  
☐ Dikdörtgen



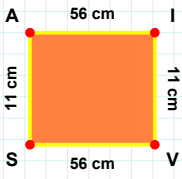
[VS] kenarı hangi şeklin kenarıdır?

- ☐ Üçgen  
☐ Dikdörtgen  
☐ Kare



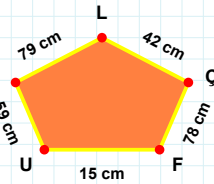
[TO] kenarı hangi şeklin kenarıdır?

- ☐ Dikdörtgen  
☐ Kare  
☐ Üçgen



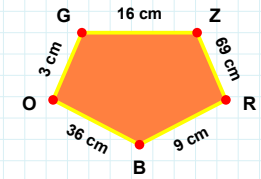
[ZR] kenarı hangi şeklin kenarıdır?

- ☐ Ters Beşgen  
☐ Dikey Dikdörtgen  
☐ Beşgen



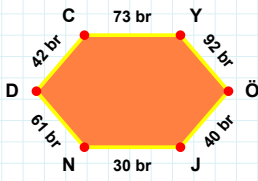
[SA] kenarı hangi şeklin kenarıdır?

- ☐ Beşgen  
☐ Dikey Dikdörtgen  
☐ Ters Beşgen



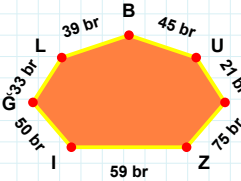
42 cm hangi şeklin kenarıdır?

- ☐ Ters Beşgen  
☐ Dikey Dikdörtgen  
☐ Beşgen



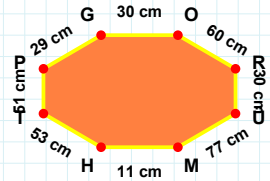
39 br hangi şeklin kenarıdır?

- ☐ Altıgen  
☐ Yediggen  
☐ Sekizgen



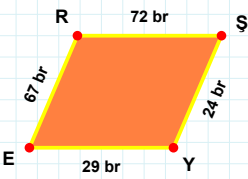
[TP] kenarı hangi şeklin kenarıdır?

- ☐ Altıgen  
☐ Yediggen  
☐ Sekizgen



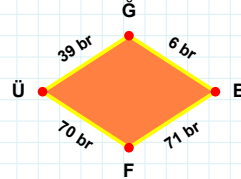
[DC] kenarı hangi şeklin kenarıdır?

- ☐ Yediggen  
☐ Sekizgen  
☐ Altıgen



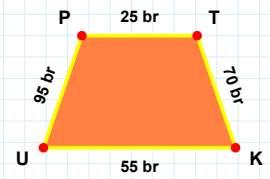
6 br hangi şeklin kenarıdır?

- ☐ Yamuk  
☐ Paralelkenar  
☐ Eşkenar Dörtgen



[UP] kenarı hangi şeklin kenarıdır?

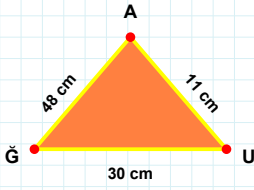
- ☐ Yamuk  
☐ Eşkenar Dörtgen  
☐ Paralelkenar



[YE] kenarı hangi şeklin kenarıdır?

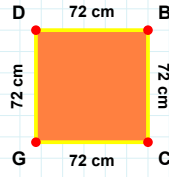
- ☐ Yamuk  
☐ Eşkenar Dörtgen  
☐ Paralelkenar

**SORU:** Aşağıdaki şekilleri inceleyiniz. Verilen kenar bilgisinin hangi şekle ait olduğunu işaretleyiniz.



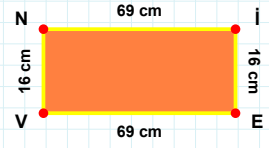
[VN] kenarı hangi şeklin kenarıdır?

- ☐ Üçgen  
☐ Dikdörtgen  
☐ Kare



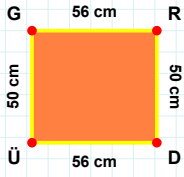
[AĞ] kenarı hangi şeklin kenarıdır?

- ☐ Kare  
☐ Dikdörtgen  
☐ Üçgen



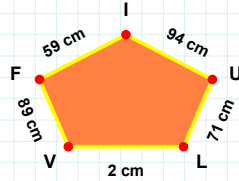
[CG] kenarı hangi şeklin kenarıdır?

- ☐ Kare  
☐ Dikdörtgen  
☐ Üçgen



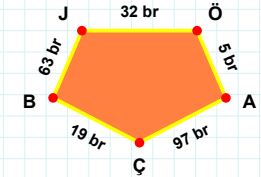
2 cm hangi şeklin kenarıdır?

- ☐ Ters Beşgen  
☐ Dikey Dikdörtgen  
☐ Beşgen



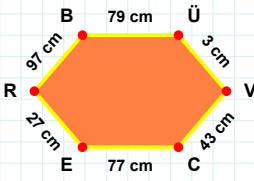
[BJ] kenarı hangi şeklin kenarıdır?

- ☐ Beşgen  
☐ Ters Beşgen  
☐ Dikey Dikdörtgen



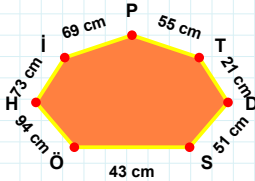
[RD] kenarı hangi şeklin kenarıdır?

- ☐ Beşgen  
☐ Dikey Dikdörtgen  
☐ Ters Beşgen



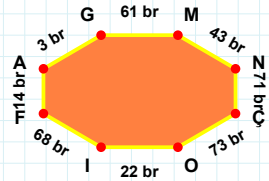
[OI] kenarı hangi şeklin kenarıdır?

- ☐ Yedigen  
☐ Sekizgen  
☐ Altıgen



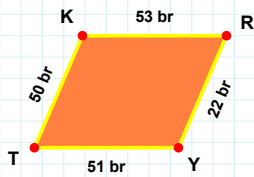
[ER] kenarı hangi şeklin kenarıdır?

- ☐ Altıgen  
☐ Yedigen  
☐ Sekizgen



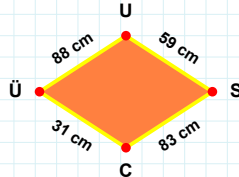
55 cm hangi şeklin kenarıdır?

- ☐ Yedigen  
☐ Sekizgen  
☐ Altıgen



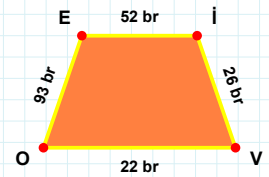
[OE] kenarı hangi şeklin kenarıdır?

- ☐ Paralelkenar  
☐ Eşkenar Dörtgen  
☐ Yamuk



[YT] kenarı hangi şeklin kenarıdır?

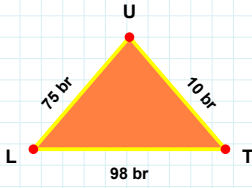
- ☐ Yamuk  
☐ Paralelkenar  
☐ Eşkenar Dörtgen



31 cm hangi şeklin kenarıdır?

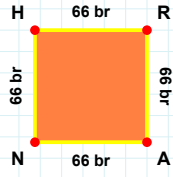
- ☐ Eşkenar Dörtgen  
☐ Paralelkenar  
☐ Yamuk

**SORU:** Aşağıdaki şekilleri inceleyiniz. Verilen kenar bilgisinin hangi şekle ait olduğunu işaretleyiniz.



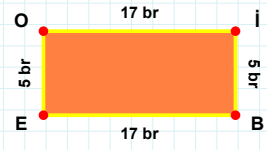
[ÖL] kenarı hangi şeklin kenarıdır?

- ☐ Kare  
☐ Dikdörtgen  
☐ Üçgen



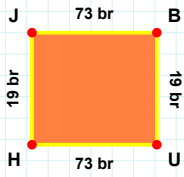
[TU] kenarı hangi şeklin kenarıdır?

- ☐ Üçgen  
☐ Dikdörtgen  
☐ Kare



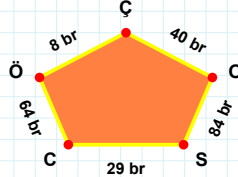
[NH] kenarı hangi şeklin kenarıdır?

- ☐ Kare  
☐ Dikdörtgen  
☐ Üçgen



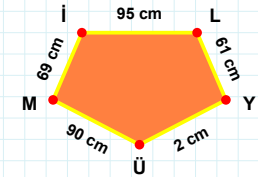
[Mİ] kenarı hangi şeklin kenarıdır?

- ☐ Ters Beşgen  
☐ Beşgen  
☐ Dikey Dikdörtgen



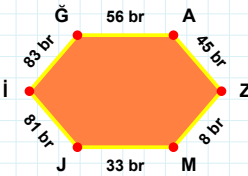
[BU] kenarı hangi şeklin kenarıdır?

- ☐ Dikey Dikdörtgen  
☐ Ters Beşgen  
☐ Beşgen



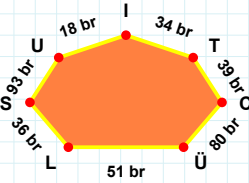
84 br hangi şeklin kenarıdır?

- ☐ Dikey Dikdörtgen  
☐ Ters Beşgen  
☐ Beşgen



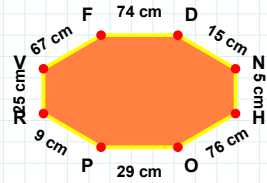
34 br hangi şeklin kenarıdır?

- ☐ Sekizgen  
☐ Altıgen  
☐ Yediggen



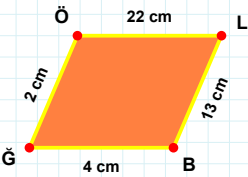
[DN] kenarı hangi şeklin kenarıdır?

- ☐ Yediggen  
☐ Altıgen  
☐ Sekizgen



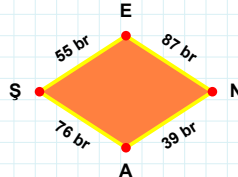
[ĞA] kenarı hangi şeklin kenarıdır?

- ☐ Altıgen  
☐ Yediggen  
☐ Sekizgen



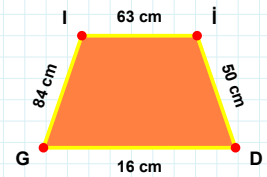
39 br hangi şeklin kenarıdır?

- ☐ Yamuk  
☐ Paralelkenar  
☐ Eşkenar Dörtgen



[İİ] kenarı hangi şeklin kenarıdır?

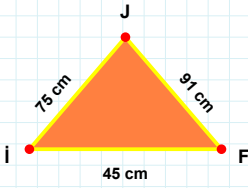
- ☐ Eşkenar Dörtgen  
☐ Paralelkenar  
☐ Yamuk



[ÖL] kenarı hangi şeklin kenarıdır?

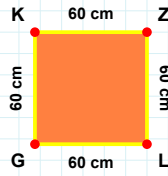
- ☐ Paralelkenar  
☐ Eşkenar Dörtgen  
☐ Yamuk

**SORU:** Aşağıdaki şekilleri inceleyiniz. Verilen kenar bilgisinin hangi şekle ait olduğunu işaretleyiniz.



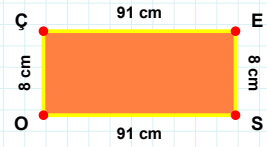
[KZ] kenarı hangi şeklin kenarıdır?

- ☐ Üçgen  
☐ Dikdörtgen  
☐ Kare



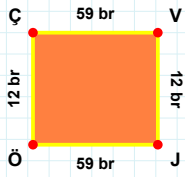
[ÇE] kenarı hangi şeklin kenarıdır?

- ☐ Üçgen  
☐ Kare  
☐ Dikdörtgen



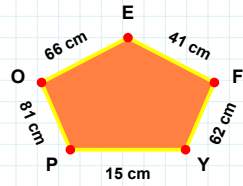
[FJ] kenarı hangi şeklin kenarıdır?

- ☐ Üçgen  
☐ Kare  
☐ Dikdörtgen



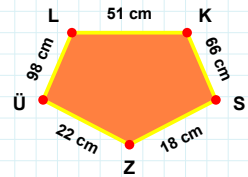
[ZÜ] kenarı hangi şeklin kenarıdır?

- ☐ Beşgen  
☐ Ters Beşgen  
☐ Dikey Dikdörtgen



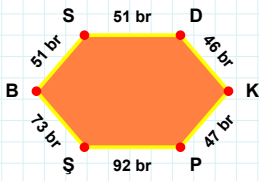
[ÇV] kenarı hangi şeklin kenarıdır?

- ☐ Dikey Dikdörtgen  
☐ Beşgen  
☐ Ters Beşgen



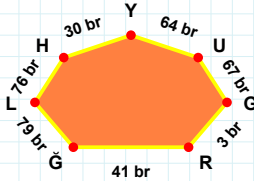
41 cm hangi şeklin kenarıdır?

- ☐ Dikey Dikdörtgen  
☐ Ters Beşgen  
☐ Beşgen



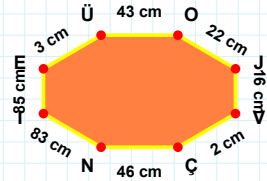
79 br hangi şeklin kenarıdır?

- ☐ Altıgen  
☐ Yedigen  
☐ Sekizgen



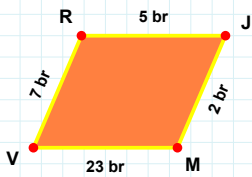
[ÇN] kenarı hangi şeklin kenarıdır?

- ☐ Yedigen  
☐ Altıgen  
☐ Sekizgen



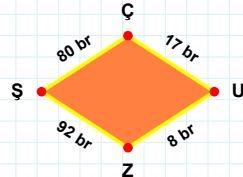
[KP] kenarı hangi şeklin kenarıdır?

- ☐ Altıgen  
☐ Yedigen  
☐ Sekizgen



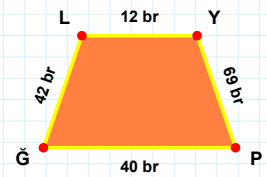
[PĞ] kenarı hangi şeklin kenarıdır?

- ☐ Paralelkenar  
☐ Yamuk  
☐ Eşkenar Dörtgen



[JM] kenarı hangi şeklin kenarıdır?

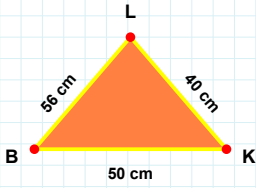
- ☐ Yamuk  
☐ Eşkenar Dörtgen  
☐ Paralelkenar



80 br hangi şeklin kenarıdır?

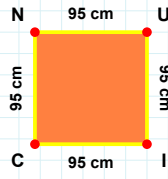
- ☐ Eşkenar Dörtgen  
☐ Yamuk  
☐ Paralelkenar

**SORU:** Aşağıdaki şekilleri inceleyiniz. Verilen kenar bilgisinin hangi şekle ait olduğunu işaretleyiniz.



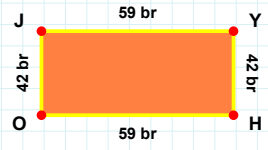
**[LC] kenarı hangi şeklin kenarıdır?**

- ☐ Kare  
☐ Üçgen  
☐ Dikdörtgen



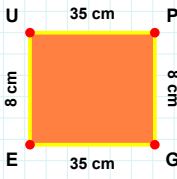
**[OJ] kenarı hangi şeklin kenarıdır?**

- ☐ Üçgen  
☐ Kare  
☐ Dikdörtgen



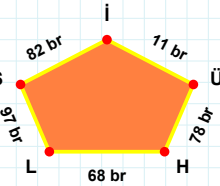
**[BK] kenarı hangi şeklin kenarıdır?**

- ☐ Dikdörtgen  
☐ Üçgen  
☐ Kare



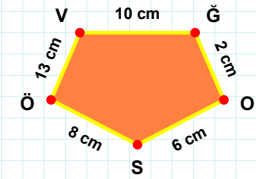
**[VG] kenarı hangi şeklin kenarıdır?**

- ☐ Ters Beşgen  
☐ Dikey Dikdörtgen  
☐ Beşgen



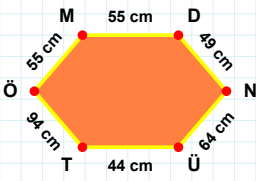
**[GE] kenarı hangi şeklin kenarıdır?**

- ☐ Ters Beşgen  
☐ Dikey Dikdörtgen  
☐ Beşgen



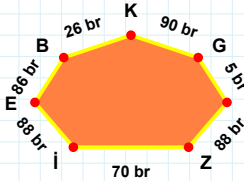
**68 br hangi şeklin kenarıdır?**

- ☐ Beşgen  
☐ Ters Beşgen  
☐ Dikey Dikdörtgen



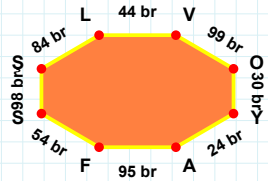
**86 br hangi şeklin kenarıdır?**

- ☐ Sekizgen  
☐ Yediggen  
☐ Altigen



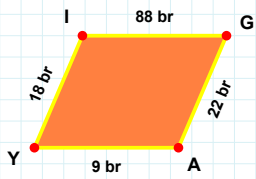
**[FS] kenarı hangi şeklin kenarıdır?**

- ☐ Yediggen  
☐ Altigen  
☐ Sekizgen



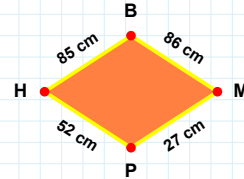
**[MD] kenarı hangi şeklin kenarıdır?**

- ☐ Altigen  
☐ Yediggen  
☐ Sekizgen



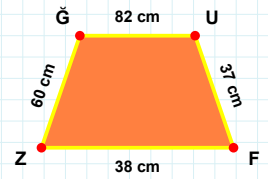
**[GU] kenarı hangi şeklin kenarıdır?**

- ☐ Eşkenar Dörtgen  
☐ Yamuk  
☐ Paralelkenar



**[AY] kenarı hangi şeklin kenarıdır?**

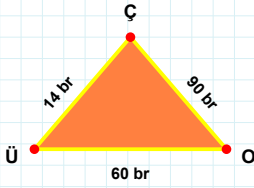
- ☐ Paralelkenar  
☐ Eşkenar Dörtgen  
☐ Yamuk



**85 cm hangi şeklin kenarıdır?**

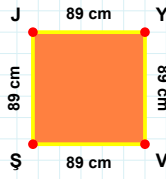
- ☐ Eşkenar Dörtgen  
☐ Paralelkenar  
☐ Yamuk

**SORU:** Aşağıdaki şekilleri inceleyiniz. Verilen kenar bilgisinin hangi şekle ait olduğunu işaretleyiniz.



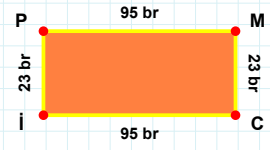
**[PM] kenarı hangi şeklin kenarıdır?**

- ☐ Dikdörtgen  
☐ Kare  
☐ Üçgen



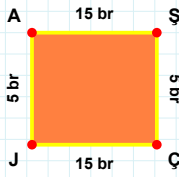
**[OÇ] kenarı hangi şeklin kenarıdır?**

- ☐ Kare  
☐ Üçgen  
☐ Dikdörtgen



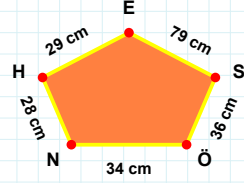
**[ŞJ] kenarı hangi şeklin kenarıdır?**

- ☐ Üçgen  
☐ Dikdörtgen  
☐ Kare



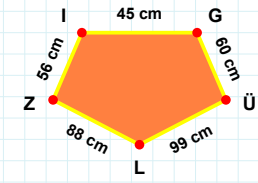
**29 cm hangi şeklin kenarıdır?**

- ☐ Ters Beşgen  
☐ Dikey Dikdörtgen  
☐ Beşgen



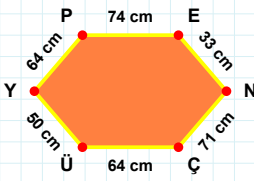
**[İG] kenarı hangi şeklin kenarıdır?**

- ☐ Ters Beşgen  
☐ Beşgen  
☐ Dikey Dikdörtgen



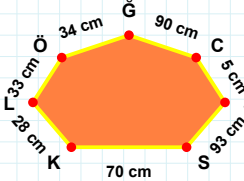
**[ÇJ] kenarı hangi şeklin kenarıdır?**

- ☐ Dikey Dikdörtgen  
☐ Ters Beşgen  
☐ Beşgen



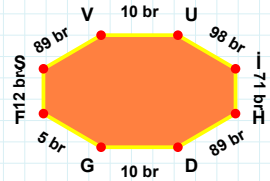
**5 cm hangi şeklin kenarıdır?**

- ☐ Sekizgen  
☐ Altıgen  
☐ Yediggen



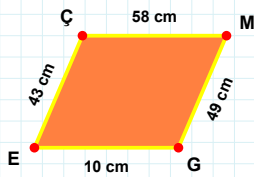
**[HD] kenarı hangi şeklin kenarıdır?**

- ☐ Altıgen  
☐ Yediggen  
☐ Sekizgen



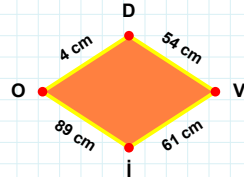
**[PE] kenarı hangi şeklin kenarıdır?**

- ☐ Altıgen  
☐ Sekizgen  
☐ Yediggen



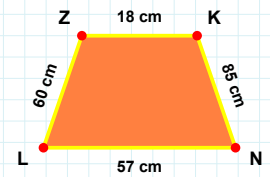
**[LZ] kenarı hangi şeklin kenarıdır?**

- ☐ Eşkenar Dörtgen  
☐ Paralelkenar  
☐ Yamuk



**[GE] kenarı hangi şeklin kenarıdır?**

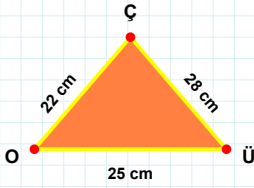
- ☐ Eşkenar Dörtgen  
☐ Yamuk  
☐ Paralelkenar



**4 cm hangi şeklin kenarıdır?**

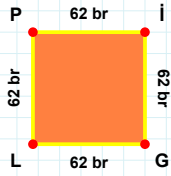
- ☐ Yamuk  
☐ Eşkenar Dörtgen  
☐ Paralelkenar

**SORU:** Aşağıdaki şekilleri inceleyiniz. Verilen kenar bilgisinin hangi şekle ait olduğunu işaretleyiniz.



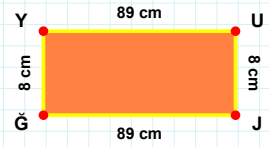
[GL] kenarı hangi şeklin kenarıdır?

- ☐ Kare  
☐ Dikdörtgen  
☐ Üçgen



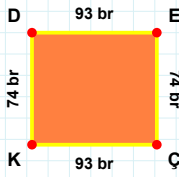
[JĞ] kenarı hangi şeklin kenarıdır?

- ☐ Üçgen  
☐ Dikdörtgen  
☐ Kare



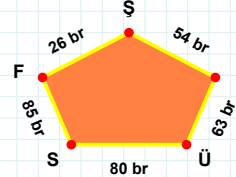
[ÇO] kenarı hangi şeklin kenarıdır?

- ☐ Dikdörtgen  
☐ Üçgen  
☐ Kare



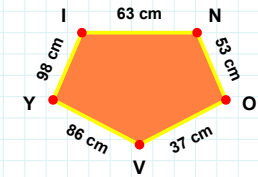
[Yİ] kenarı hangi şeklin kenarıdır?

- ☐ Beşgen  
☐ Ters Beşgen  
☐ Dikey Dikdörtgen



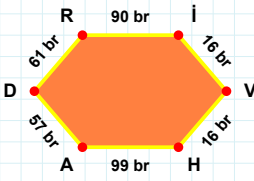
[ÇK] kenarı hangi şeklin kenarıdır?

- ☐ Beşgen  
☐ Dikey Dikdörtgen  
☐ Ters Beşgen



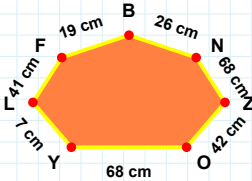
80 br hangi şeklin kenarıdır?

- ☐ Beşgen  
☐ Ters Beşgen  
☐ Dikey Dikdörtgen



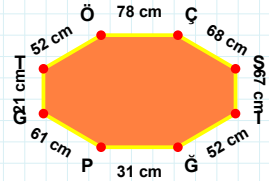
[İĞ] kenarı hangi şeklin kenarıdır?

- ☐ Sekizgen  
☐ Altıgen  
☐ Yediggen



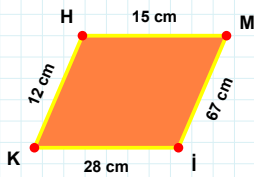
[AD] kenarı hangi şeklin kenarıdır?

- ☐ Yediggen  
☐ Sekizgen  
☐ Altıgen



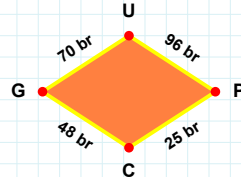
7 cm hangi şeklin kenarıdır?

- ☐ Altıgen  
☐ Yediggen  
☐ Sekizgen



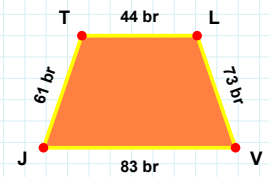
[VJ] kenarı hangi şeklin kenarıdır?

- ☐ Eşkenar Dörtgen  
☐ Yamuk  
☐ Paralelkenar



[HM] kenarı hangi şeklin kenarıdır?

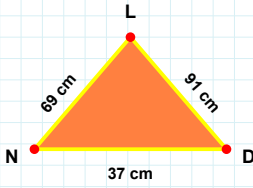
- ☐ Yamuk  
☐ Eşkenar Dörtgen  
☐ Paralelkenar



48 br hangi şeklin kenarıdır?

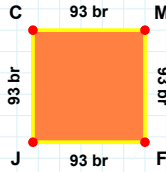
- ☐ Eşkenar Dörtgen  
☐ Paralelkenar  
☐ Yamuk

**SORU:** Aşağıdaki şekilleri inceleyiniz. Verilen kenar bilgisinin hangi şekle ait olduğunu işaretleyiniz.



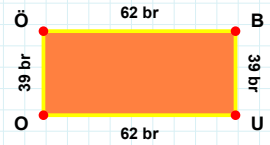
[FJ] kenarı hangi şeklin kenarıdır?

- ☐ Üçgen  
☐ Dikdörtgen  
☐ Kare



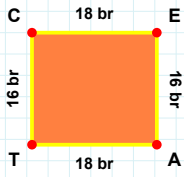
[UO] kenarı hangi şeklin kenarıdır?

- ☐ Dikdörtgen  
☐ Üçgen  
☐ Kare



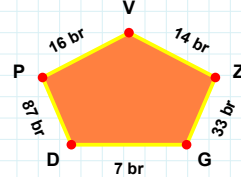
[ND] kenarı hangi şeklin kenarıdır?

- ☐ Üçgen  
☐ Dikdörtgen  
☐ Kare



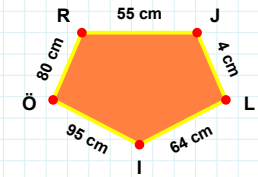
[RJ] kenarı hangi şeklin kenarıdır?

- ☐ Dikey Dikdörtgen  
☐ Beşgen  
☐ Ters Beşgen



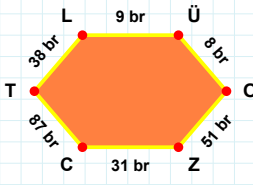
[TC] kenarı hangi şeklin kenarıdır?

- ☐ Ters Beşgen  
☐ Dikey Dikdörtgen  
☐ Beşgen



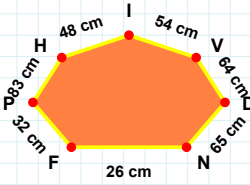
33 br hangi şeklin kenarıdır?

- ☐ Ters Beşgen  
☐ Beşgen  
☐ Dikey Dikdörtgen



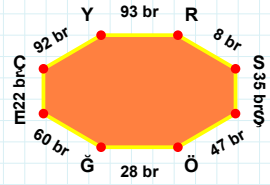
[ÇY] kenarı hangi şeklin kenarıdır?

- ☐ Altıgen  
☐ Sekizgen  
☐ Yediggen



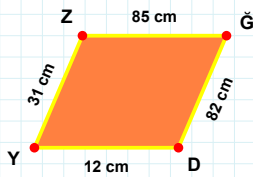
[ZC] kenarı hangi şeklin kenarıdır?

- ☐ Altıgen  
☐ Yediggen  
☐ Sekizgen



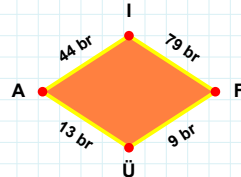
64 cm hangi şeklin kenarıdır?

- ☐ Altıgen  
☐ Yediggen  
☐ Sekizgen



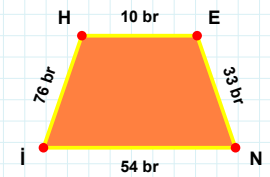
[Nİ] kenarı hangi şeklin kenarıdır?

- ☐ Paralelkenar  
☐ Eşkenar Dörtgen  
☐ Yamuk



[YZ] kenarı hangi şeklin kenarıdır?

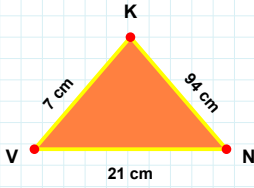
- ☐ Eşkenar Dörtgen  
☐ Paralelkenar  
☐ Yamuk



79 br hangi şeklin kenarıdır?

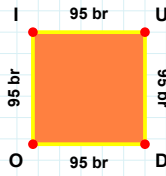
- ☐ Yamuk  
☐ Eşkenar Dörtgen  
☐ Paralelkenar

**SORU:** Aşağıdaki şekilleri inceleyiniz. Verilen kenar bilgisinin hangi şekle ait olduğunu işaretleyiniz.



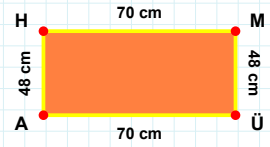
**[DO] kenarı hangi şeklin kenarıdır?**

- ☐ Dikdörtgen  
☐ Kare  
☐ Üçgen



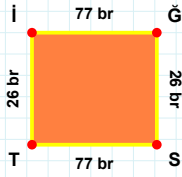
**[MÜ] kenarı hangi şeklin kenarıdır?**

- ☐ Üçgen  
☐ Dikdörtgen  
☐ Kare



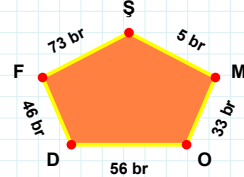
**[NK] kenarı hangi şeklin kenarıdır?**

- ☐ Dikdörtgen  
☐ Üçgen  
☐ Kare



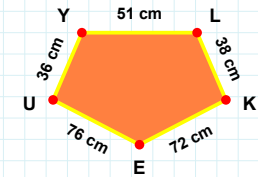
**[UY] kenarı hangi şeklin kenarıdır?**

- ☐ Ters Beşgen  
☐ Beşgen  
☐ Dikey Dikdörtgen



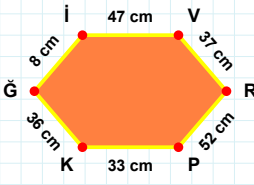
**[Tİ] kenarı hangi şeklin kenarıdır?**

- ☐ Dikey Dikdörtgen  
☐ Beşgen  
☐ Ters Beşgen



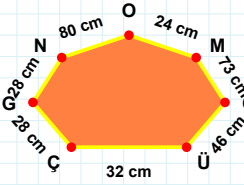
**46 br hangi şeklin kenarıdır?**

- ☐ Dikey Dikdörtgen  
☐ Beşgen  
☐ Ters Beşgen



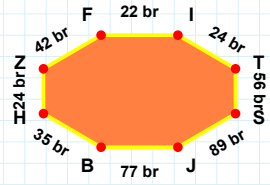
**[JB] kenarı hangi şeklin kenarıdır?**

- ☐ Yedigen  
☐ Altigen  
☐ Sekizgen



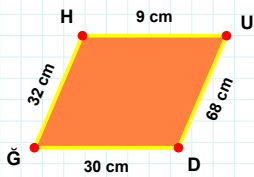
**[RP] kenarı hangi şeklin kenarıdır?**

- ☐ Sekizgen  
☐ Altigen  
☐ Yedigen



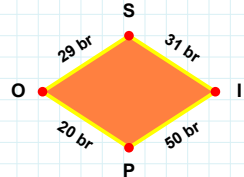
**32 cm hangi şeklin kenarıdır?**

- ☐ Altigen  
☐ Yedigen  
☐ Sekizgen



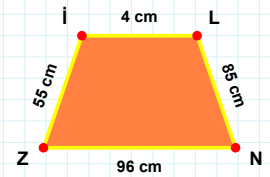
**[NZ] kenarı hangi şeklin kenarıdır?**

- ☐ Eşkenar Dörtgen  
☐ Paralelkenar  
☐ Yamuk



**[HU] kenarı hangi şeklin kenarıdır?**

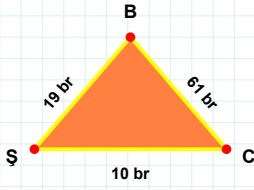
- ☐ Eşkenar Dörtgen  
☐ Yamuk  
☐ Paralelkenar



**29 br hangi şeklin kenarıdır?**

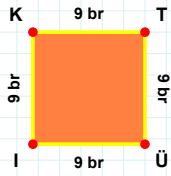
- ☐ Eşkenar Dörtgen  
☐ Yamuk  
☐ Paralelkenar

**SORU:** Aşağıdaki şekilleri inceleyiniz. Verilen kenar bilgisinin hangi şekle ait olduğunu işaretleyiniz.



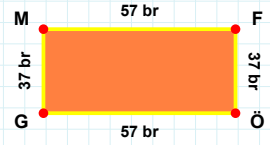
**|TÜ| kenarı hangi şeklin kenarıdır?**

- ☐ Üçgen  
☐ Kare  
☐ Dikdörtgen



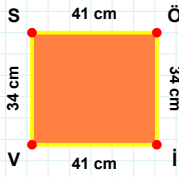
**|FÖ| kenarı hangi şeklin kenarıdır?**

- ☐ Üçgen  
☐ Dikdörtgen  
☐ Kare



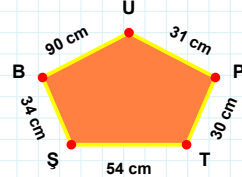
**|ŞC| kenarı hangi şeklin kenarıdır?**

- ☐ Kare  
☐ Dikdörtgen  
☐ Üçgen



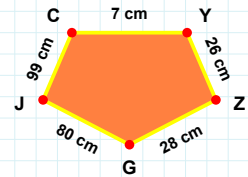
**|ZG| kenarı hangi şeklin kenarıdır?**

- ☐ Dikey Dikdörtgen  
☐ Ters Beşgen  
☐ Beşgen



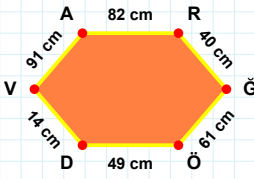
**|İV| kenarı hangi şeklin kenarıdır?**

- ☐ Ters Beşgen  
☐ Beşgen  
☐ Dikey Dikdörtgen



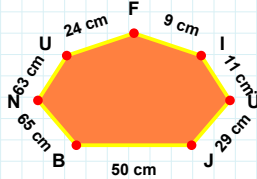
**31 cm hangi şeklin kenarıdır?**

- ☐ Ters Beşgen  
☐ Dikey Dikdörtgen  
☐ Beşgen



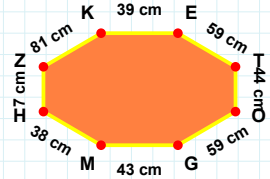
**|GM| kenarı hangi şeklin kenarıdır?**

- ☐ Sekizgen  
☐ Yediggen  
☐ Altıgen



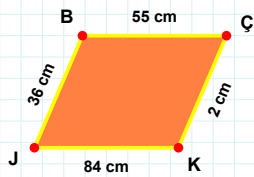
**|ĞÖ| kenarı hangi şeklin kenarıdır?**

- ☐ Sekizgen  
☐ Yediggen  
☐ Altıgen



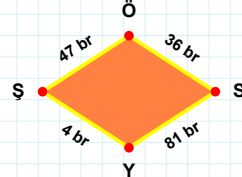
**65 cm hangi şeklin kenarıdır?**

- ☐ Altıgen  
☐ Yediggen  
☐ Sekizgen



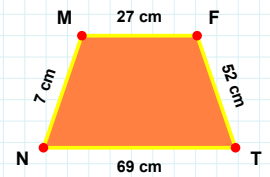
**47 br hangi şeklin kenarıdır?**

- ☐ Eşkenar Dörtgen  
☐ Paralelkenar  
☐ Yamuk



**|MF| kenarı hangi şeklin kenarıdır?**

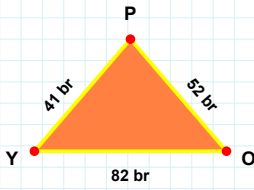
- ☐ Yamuk  
☐ Eşkenar Dörtgen  
☐ Paralelkenar



**|BÇ| kenarı hangi şeklin kenarıdır?**

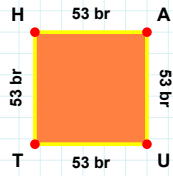
- ☐ Eşkenar Dörtgen  
☐ Yamuk  
☐ Paralelkenar

**SORU:** Aşağıdaki şekilleri inceleyiniz. Verilen kenar bilgisinin hangi şekle ait olduğunu işaretleyiniz.



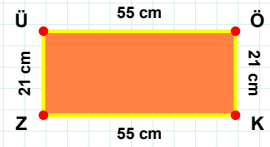
|ÜÖ| kenarı hangi şeklin kenarıdır?

- ☐ Dikdörtgen  
☐ Kare  
☐ Üçgen



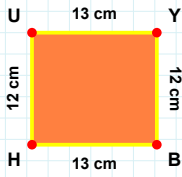
|PY| kenarı hangi şeklin kenarıdır?

- ☐ Dikdörtgen  
☐ Üçgen  
☐ Kare



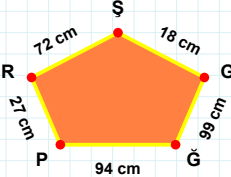
|AU| kenarı hangi şeklin kenarıdır?

- ☐ Dikdörtgen  
☐ Kare  
☐ Üçgen



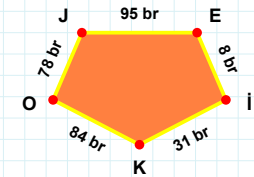
99 cm hangi şeklin kenarıdır?

- ☐ Beşgen  
☐ Ters Beşgen  
☐ Dikey Dikdörtgen



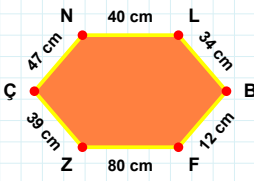
|İK| kenarı hangi şeklin kenarıdır?

- ☐ Beşgen  
☐ Dikey Dikdörtgen  
☐ Ters Beşgen



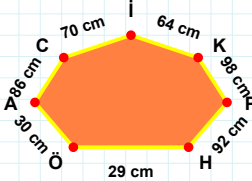
|HU| kenarı hangi şeklin kenarıdır?

- ☐ Ters Beşgen  
☐ Beşgen  
☐ Dikey Dikdörtgen



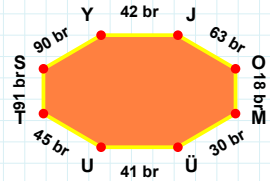
|MÜ| kenarı hangi şeklin kenarıdır?

- ☐ Sekizgen  
☐ Yediggen  
☐ Altıgen



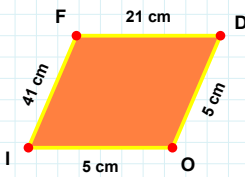
|LB| kenarı hangi şeklin kenarıdır?

- ☐ Sekizgen  
☐ Altıgen  
☐ Yediggen



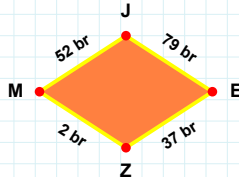
29 cm hangi şeklin kenarıdır?

- ☐ Sekizgen  
☐ Yediggen  
☐ Altıgen



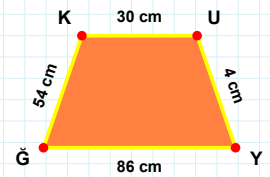
|KU| kenarı hangi şeklin kenarıdır?

- ☐ Eşkenar Dörtgen  
☐ Yamuk  
☐ Paralelkenar



|DO| kenarı hangi şeklin kenarıdır?

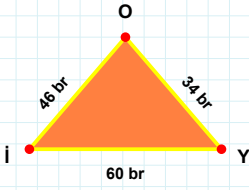
- ☐ Yamuk  
☐ Paralelkenar  
☐ Eşkenar Dörtgen



2 br hangi şeklin kenarıdır?

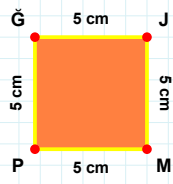
- ☐ Yamuk  
☐ Paralelkenar  
☐ Eşkenar Dörtgen

**SORU:** Aşağıdaki şekilleri inceleyiniz. Verilen kenar bilgisinin hangi şekle ait olduğunu işaretleyiniz.



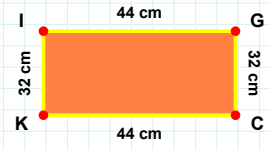
[GC] kenarı hangi şeklin kenarıdır?

- ☐ Üçgen  
☐ Kare  
☐ Dikdörtgen



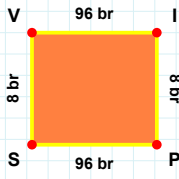
[JY] kenarı hangi şeklin kenarıdır?

- ☐ Dikdörtgen  
☐ Kare  
☐ Üçgen



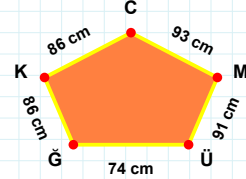
[GJ] kenarı hangi şeklin kenarıdır?

- ☐ Dikdörtgen  
☐ Kare  
☐ Üçgen



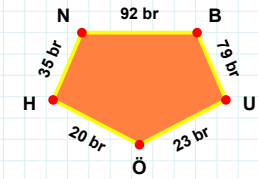
[NB] kenarı hangi şeklin kenarıdır?

- ☐ Ters Beşgen  
☐ Dikey Dikdörtgen  
☐ Beşgen



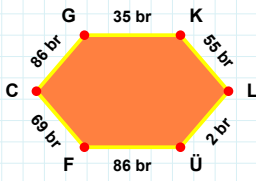
[VI] kenarı hangi şeklin kenarıdır?

- ☐ Ters Beşgen  
☐ Dikey Dikdörtgen  
☐ Beşgen



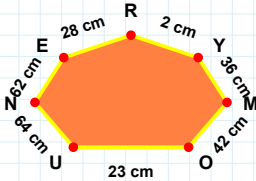
93 cm hangi şeklin kenarıdır?

- ☐ Dikey Dikdörtgen  
☐ Beşgen  
☐ Ters Beşgen



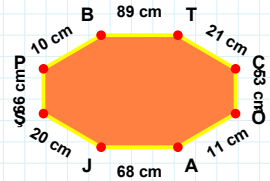
[TÇ] kenarı hangi şeklin kenarıdır?

- ☐ Yediggen  
☐ Sekizgen  
☐ Altıgen



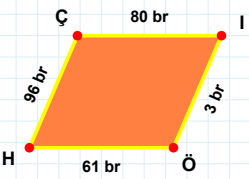
[GK] kenarı hangi şeklin kenarıdır?

- ☐ Sekizgen  
☐ Yediggen  
☐ Altıgen



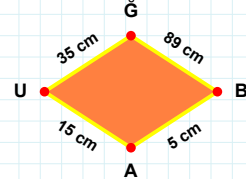
2 cm hangi şeklin kenarıdır?

- ☐ Altıgen  
☐ Yediggen  
☐ Sekizgen



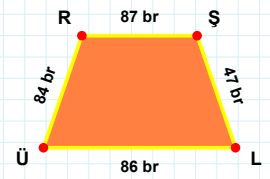
[RŞ] kenarı hangi şeklin kenarıdır?

- ☐ Yamuk  
☐ Paralelkenar  
☐ Eşkenar Dörtgen



[İÖ] kenarı hangi şeklin kenarıdır?

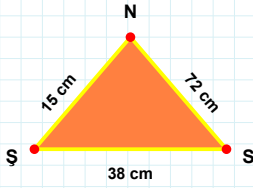
- ☐ Eşkenar Dörtgen  
☐ Yamuk  
☐ Paralelkenar



5 cm hangi şeklin kenarıdır?

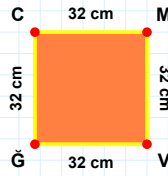
- ☐ Eşkenar Dörtgen  
☐ Paralelkenar  
☐ Yamuk

**SORU:** Aşağıdaki şekilleri inceleyiniz. Verilen kenar bilgisinin hangi şekle ait olduğunu işaretleyiniz.



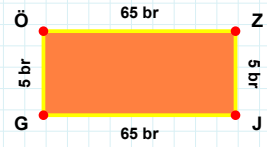
**[GC] kenarı hangi şeklin kenarıdır?**

- ☐ Üçgen  
☐ Dikdörtgen  
☐ Kare



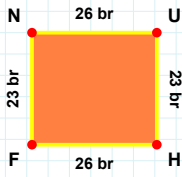
**[ZJ] kenarı hangi şeklin kenarıdır?**

- ☐ Üçgen  
☐ Dikdörtgen  
☐ Kare



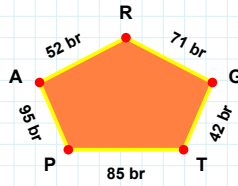
**[SS] kenarı hangi şeklin kenarıdır?**

- ☐ Üçgen  
☐ Kare  
☐ Dikdörtgen



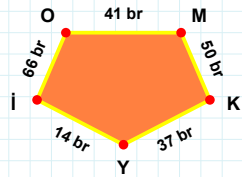
**[KY] kenarı hangi şeklin kenarıdır?**

- ☐ Dikey Dikdörtgen  
☐ Beşgen  
☐ Ters Beşgen



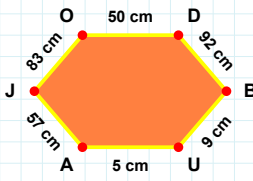
**[UH] kenarı hangi şeklin kenarıdır?**

- ☐ Ters Beşgen  
☐ Dikey Dikdörtgen  
☐ Beşgen



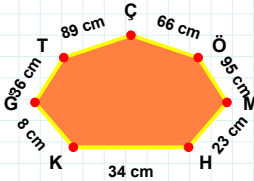
**52 br hangi şeklin kenarıdır?**

- ☐ Dikey Dikdörtgen  
☐ Beşgen  
☐ Ters Beşgen



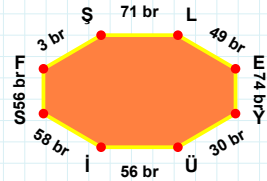
**[YÜ] kenarı hangi şeklin kenarıdır?**

- ☐ Yedigen  
☐ Altıgen  
☐ Sekizgen



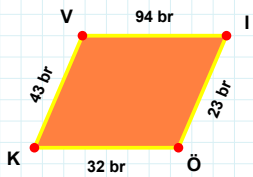
**[OD] kenarı hangi şeklin kenarıdır?**

- ☐ Yedigen  
☐ Sekizgen  
☐ Altıgen



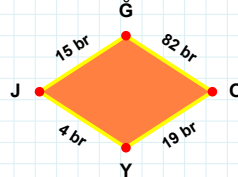
**8 cm hangi şeklin kenarıdır?**

- ☐ Sekizgen  
☐ Yedigen  
☐ Altıgen



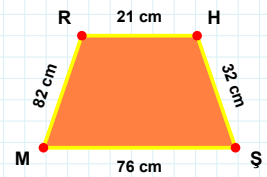
**4 br hangi şeklin kenarıdır?**

- ☐ Yamuk  
☐ Paralelkenar  
☐ Eşkenar Dörtgen



**[HŞ] kenarı hangi şeklin kenarıdır?**

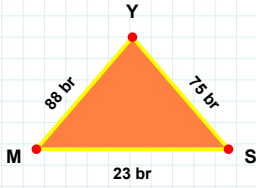
- ☐ Paralelkenar  
☐ Yamuk  
☐ Eşkenar Dörtgen



**[ÖK] kenarı hangi şeklin kenarıdır?**

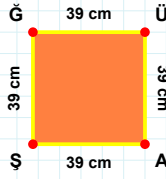
- ☐ Eşkenar Dörtgen  
☐ Yamuk  
☐ Paralelkenar

**SORU:** Aşağıdaki şekilleri inceleyiniz. Verilen kenar bilgisinin hangi şekle ait olduğunu işaretleyiniz.



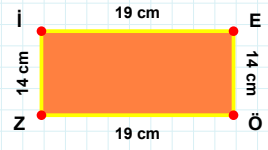
**[ŞĞ] kenarı hangi şeklin kenarıdır?**

- ☐ Dikdörtgen  
☐ Kare  
☐ Üçgen



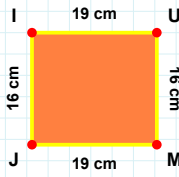
**[EÖ] kenarı hangi şeklin kenarıdır?**

- ☐ Kare  
☐ Dikdörtgen  
☐ Üçgen



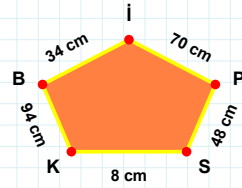
**[MS] kenarı hangi şeklin kenarıdır?**

- ☐ Kare  
☐ Dikdörtgen  
☐ Üçgen



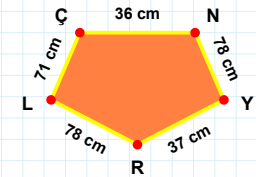
**70 cm hangi şeklin kenarıdır?**

- ☐ Beşgen  
☐ Dikey Dikdörtgen  
☐ Ters Beşgen



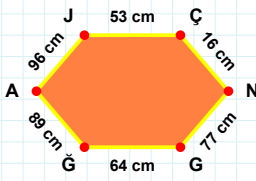
**[NY] kenarı hangi şeklin kenarıdır?**

- ☐ Dikey Dikdörtgen  
☐ Ters Beşgen  
☐ Beşgen



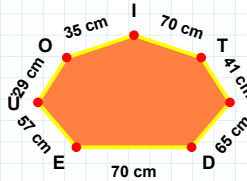
**[MJ] kenarı hangi şeklin kenarıdır?**

- ☐ Dikey Dikdörtgen  
☐ Ters Beşgen  
☐ Beşgen



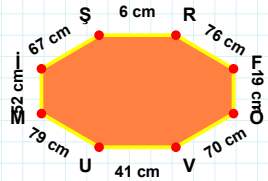
**57 cm hangi şeklin kenarıdır?**

- ☐ Sekizgen  
☐ Yediggen  
☐ Altıgen



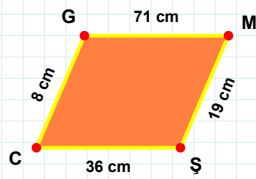
**[İŞ] kenarı hangi şeklin kenarıdır?**

- ☐ Sekizgen  
☐ Altıgen  
☐ Yediggen



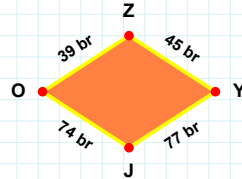
**[Ğİ] kenarı hangi şeklin kenarıdır?**

- ☐ Altıgen  
☐ Yediggen  
☐ Sekizgen



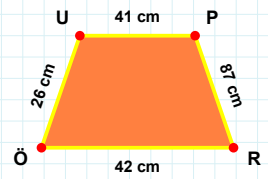
**39 br hangi şeklin kenarıdır?**

- ☐ Eşkenar Dörtgen  
☐ Yamuk  
☐ Paralelkenar



**[ÖÜ] kenarı hangi şeklin kenarıdır?**

- ☐ Eşkenar Dörtgen  
☐ Paralelkenar  
☐ Yamuk



**[MŞ] kenarı hangi şeklin kenarıdır?**

- ☐ Eşkenar Dörtgen  
☐ Paralelkenar  
☐ Yamuk

### SÜREÇ ODAKLI DEĞERLENDİRME ÖLÇEĞİ

Geliştirilmeli (0-109)	İyi (110-187)	Çok İyi (188-265)	Mükemmel (266-312)
<input type="checkbox"/>	<input type="checkbox"/>	<input type="checkbox"/>	<input type="checkbox"/>

Hazırlayan: .....

**Bu bölüme sınıfınızın ilgili kazanıma yönelik genel durumuna ilişkin gözlem ve izlenimlerinizi, öğrencilerinizin bu kazanımla ilgili öğrenme eksikliklerini ve bu eksikliklerin giderilmesi amacıyla yaptığınız/yapmayı planladığınız faaliyetleri not edebilirsiniz.**

No	Adı - Soyadı	Toplam Puan	Değerlendirme
1			
2			
3			
4			
5			
6			
7			
8			
9			
10			
11			
12			
13			
14			
15			
16			
17			
18			
19			
20			
21			
22			
23			
24			
25			
26			
27			
28			
29			
30			
31			
32			
33			
34			
35			

**Hazırlayan:** .....