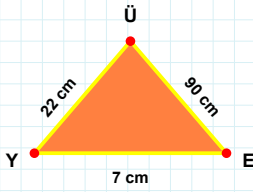
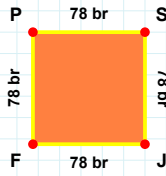


SORU: Aşağıdaki şekilleri inceleyiniz. Verilen kenar bilgisinin hangi şekle ait olduğunu işaretleyiniz.



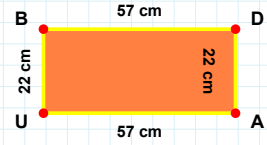
[AU] kenarı hangi şeklin kenarıdır?

- ☐ Kare
☐ Dikdörtgen
☐ Üçgen



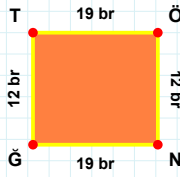
[YE] kenarı hangi şeklin kenarıdır?

- ☐ Üçgen
☐ Dikdörtgen
☐ Kare



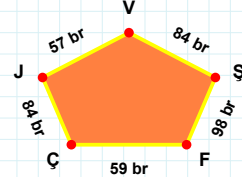
[FP] kenarı hangi şeklin kenarıdır?

- ☐ Kare
☐ Üçgen
☐ Dikdörtgen



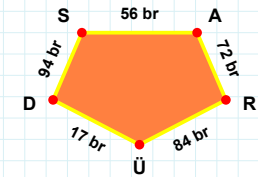
[SA] kenarı hangi şeklin kenarıdır?

- ☐ Ters Beşgen
☐ Dikey Dikdörtgen
☐ Beşgen



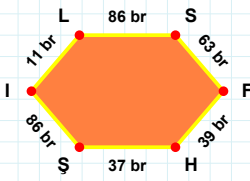
[NG] kenarı hangi şeklin kenarıdır?

- ☐ Beşgen
☐ Dikey Dikdörtgen
☐ Ters Beşgen



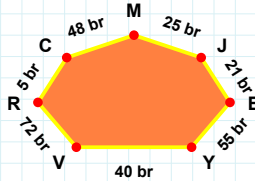
59 br hangi şeklin kenarıdır?

- ☐ Beşgen
☐ Ters Beşgen
☐ Dikey Dikdörtgen



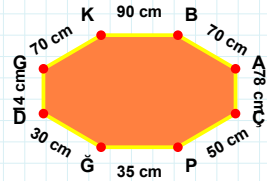
[KB] kenarı hangi şeklin kenarıdır?

- ☐ Sekizgen
☐ Altıgen
☐ Yediggen



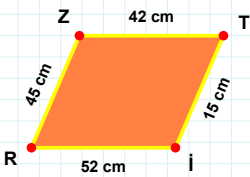
[FH] kenarı hangi şeklin kenarıdır?

- ☐ Yediggen
☐ Altıgen
☐ Sekizgen



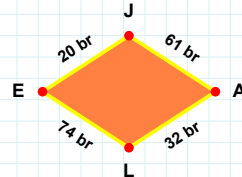
5 br hangi şeklin kenarıdır?

- ☐ Sekizgen
☐ Yediggen
☐ Altıgen



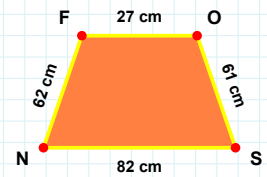
32 br hangi şeklin kenarıdır?

- ☐ Paralelkenar
☐ Yamuk
☐ Eşkenar Dörtgen



[SN] kenarı hangi şeklin kenarıdır?

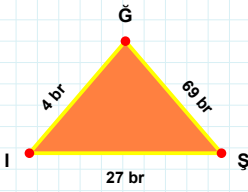
- ☐ Yamuk
☐ Eşkenar Dörtgen
☐ Paralelkenar



[RZ] kenarı hangi şeklin kenarıdır?

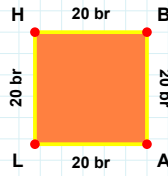
- ☐ Yamuk
☐ Eşkenar Dörtgen
☐ Paralelkenar

SORU: Aşağıdaki şekilleri inceleyiniz. Verilen kenar bilgisinin hangi şekle ait olduğunu işaretleyiniz.



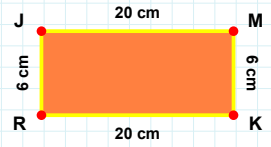
[KR] kenarı hangi şeklin kenarıdır?

- ☐ Üçgen
☐ Dikdörtgen
☐ Kare



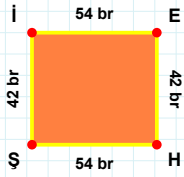
[ŞĞ] kenarı hangi şeklin kenarıdır?

- ☐ Dikdörtgen
☐ Üçgen
☐ Kare



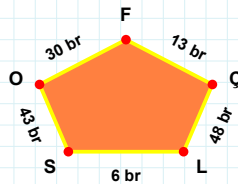
[LH] kenarı hangi şeklin kenarıdır?

- ☐ Üçgen
☐ Kare
☐ Dikdörtgen



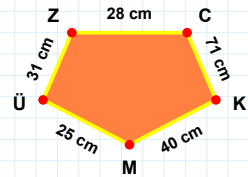
6 br hangi şeklin kenarıdır?

- ☐ Beşgen
☐ Dikey Dikdörtgen
☐ Ters Beşgen



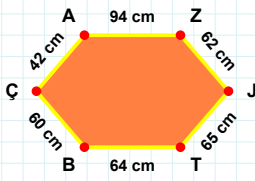
[ÜZ] kenarı hangi şeklin kenarıdır?

- ☐ Beşgen
☐ Ters Beşgen
☐ Dikey Dikdörtgen



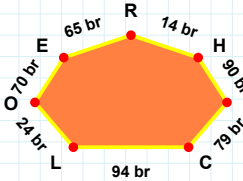
[İE] kenarı hangi şeklin kenarıdır?

- ☐ Dikey Dikdörtgen
☐ Beşgen
☐ Ters Beşgen



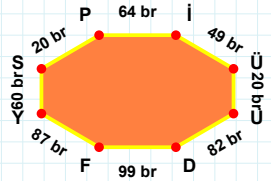
14 br hangi şeklin kenarıdır?

- ☐ Yedigen
☐ Sekizgen
☐ Altıgen



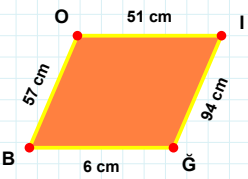
[ÜÜ] kenarı hangi şeklin kenarıdır?

- ☐ Altıgen
☐ Yedigen
☐ Sekizgen



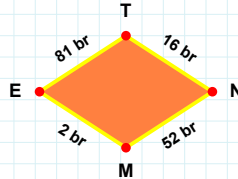
[TB] kenarı hangi şeklin kenarıdır?

- ☐ Yedigen
☐ Sekizgen
☐ Altıgen



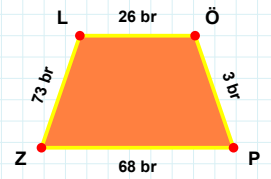
[ZL] kenarı hangi şeklin kenarıdır?

- ☐ Yamuk
☐ Paralelkenar
☐ Eşkenar Dörtgen



[ĞB] kenarı hangi şeklin kenarıdır?

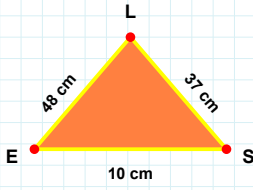
- ☐ Eşkenar Dörtgen
☐ Paralelkenar
☐ Yamuk



16 br hangi şeklin kenarıdır?

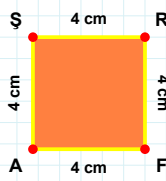
- ☐ Yamuk
☐ Paralelkenar
☐ Eşkenar Dörtgen

SORU: Aşağıdaki şekilleri inceleyiniz. Verilen kenar bilgisinin hangi şekle ait olduğunu işaretleyiniz.



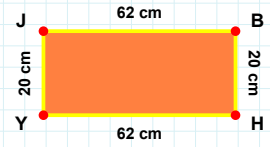
[HY] kenarı hangi şeklin kenarıdır?

- ☐ Dikdörtgen
☐ Üçgen
☐ Kare



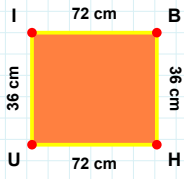
[LE] kenarı hangi şeklin kenarıdır?

- ☐ Üçgen
☐ Kare
☐ Dikdörtgen



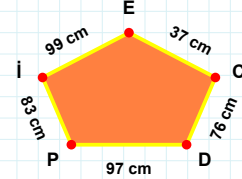
[RF] kenarı hangi şeklin kenarıdır?

- ☐ Kare
☐ Dikdörtgen
☐ Üçgen



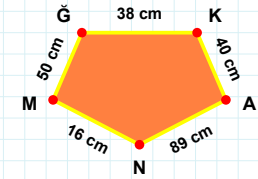
[KA] kenarı hangi şeklin kenarıdır?

- ☐ Ters Beşgen
☐ Dikey Dikdörtgen
☐ Beşgen



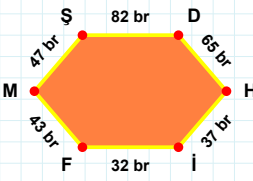
[UI] kenarı hangi şeklin kenarıdır?

- ☐ Beşgen
☐ Dikey Dikdörtgen
☐ Ters Beşgen



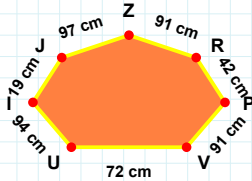
37 cm hangi şeklin kenarıdır?

- ☐ Ters Beşgen
☐ Beşgen
☐ Dikey Dikdörtgen



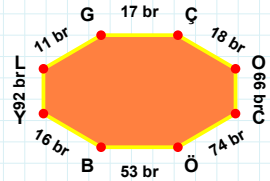
72 cm hangi şeklin kenarıdır?

- ☐ Sekizgen
☐ Yediggen
☐ Altigen



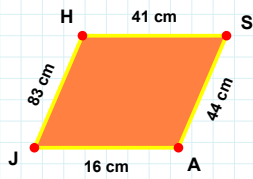
[YL] kenarı hangi şeklin kenarıdır?

- ☐ Sekizgen
☐ Altigen
☐ Yediggen



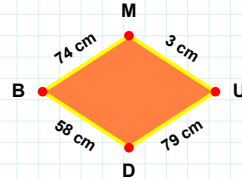
[SD] kenarı hangi şeklin kenarıdır?

- ☐ Altigen
☐ Yediggen
☐ Sekizgen



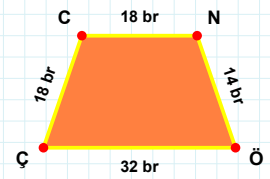
[ÖÇ] kenarı hangi şeklin kenarıdır?

- ☐ Paralelkenar
☐ Yamuk
☐ Eşkenar Dörtgen



[HS] kenarı hangi şeklin kenarıdır?

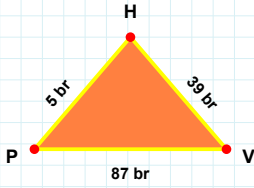
- ☐ Eşkenar Dörtgen
☐ Paralelkenar
☐ Yamuk



79 cm hangi şeklin kenarıdır?

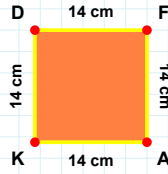
- ☐ Paralelkenar
☐ Yamuk
☐ Eşkenar Dörtgen

SORU: Aşağıdaki şekilleri inceleyiniz. Verilen kenar bilgisinin hangi şekle ait olduğunu işaretleyiniz.



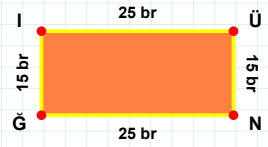
|IÜ| kenarı hangi şeklin kenarıdır?

- ☐ Dikdörtgen
☐ Kare
☐ Üçgen



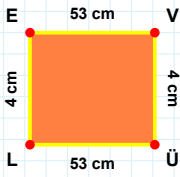
|HP| kenarı hangi şeklin kenarıdır?

- ☐ Kare
☐ Üçgen
☐ Dikdörtgen



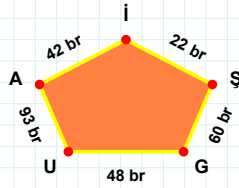
|DF| kenarı hangi şeklin kenarıdır?

- ☐ Dikdörtgen
☐ Üçgen
☐ Kare



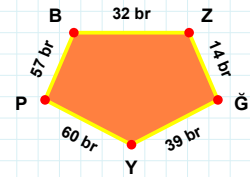
42 br hangi şeklin kenarıdır?

- ☐ Ters Beşgen
☐ Dikey Dikdörtgen
☐ Beşgen



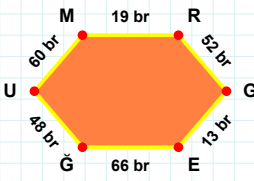
|GY| kenarı hangi şeklin kenarıdır?

- ☐ Ters Beşgen
☐ Beşgen
☐ Dikey Dikdörtgen



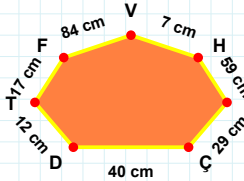
|VÜ| kenarı hangi şeklin kenarıdır?

- ☐ Ters Beşgen
☐ Beşgen
☐ Dikey Dikdörtgen



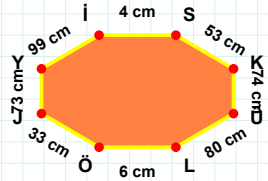
40 cm hangi şeklin kenarıdır?

- ☐ Sekizgen
☐ Yediggen
☐ Altıgen



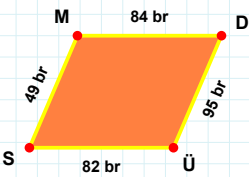
|KÜ| kenarı hangi şeklin kenarıdır?

- ☐ Altıgen
☐ Yediggen
☐ Sekizgen



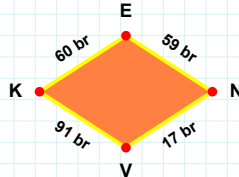
|MR| kenarı hangi şeklin kenarıdır?

- ☐ Yediggen
☐ Altıgen
☐ Sekizgen



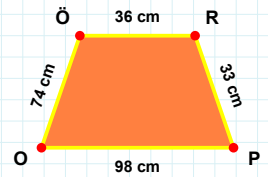
|RP| kenarı hangi şeklin kenarıdır?

- ☐ Eşkenar Dörtgen
☐ Paralelkenar
☐ Yamuk



|SM| kenarı hangi şeklin kenarıdır?

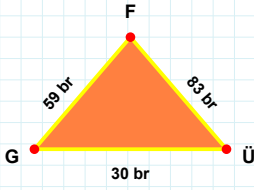
- ☐ Yamuk
☐ Paralelkenar
☐ Eşkenar Dörtgen



17 br hangi şeklin kenarıdır?

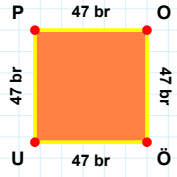
- ☐ Eşkenar Dörtgen
☐ Paralelkenar
☐ Yamuk

SORU: Aşağıdaki şekilleri inceleyiniz. Verilen kenar bilgisinin hangi şekle ait olduğunu işaretleyiniz.



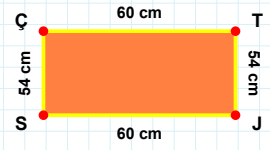
[UP] kenarı hangi şeklin kenarıdır?

- ☐ Üçgen
☐ Dikdörtgen
☐ Kare



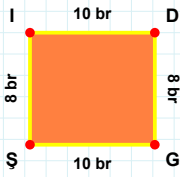
[SÇ] kenarı hangi şeklin kenarıdır?

- ☐ Dikdörtgen
☐ Kare
☐ Üçgen



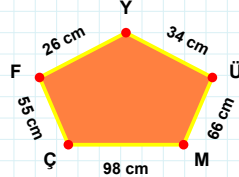
[FG] kenarı hangi şeklin kenarıdır?

- ☐ Kare
☐ Üçgen
☐ Dikdörtgen



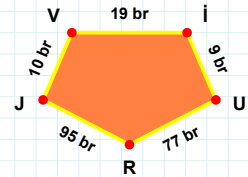
34 cm hangi şeklin kenarıdır?

- ☐ Ters Beşgen
☐ Dikey Dikdörtgen
☐ Beşgen



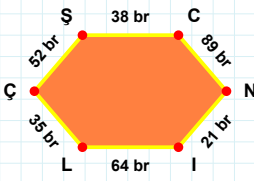
[UR] kenarı hangi şeklin kenarıdır?

- ☐ Ters Beşgen
☐ Beşgen
☐ Dikey Dikdörtgen



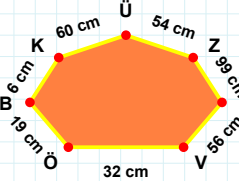
[Şİ] kenarı hangi şeklin kenarıdır?

- ☐ Dikey Dikdörtgen
☐ Ters Beşgen
☐ Beşgen



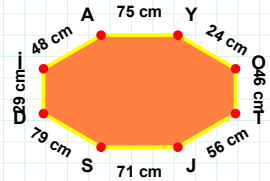
[JS] kenarı hangi şeklin kenarıdır?

- ☐ Yedigen
☐ Altigen
☐ Sekizgen



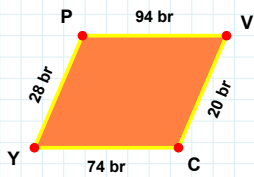
[LÇ] kenarı hangi şeklin kenarıdır?

- ☐ Sekizgen
☐ Yedigen
☐ Altigen



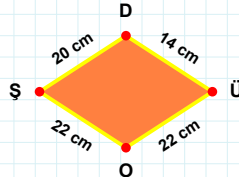
60 cm hangi şeklin kenarıdır?

- ☐ Altigen
☐ Sekizgen
☐ Yedigen



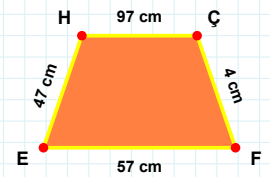
[FE] kenarı hangi şeklin kenarıdır?

- ☐ Yamuk
☐ Eşkenar Dörtgen
☐ Paralelkenar



[VC] kenarı hangi şeklin kenarıdır?

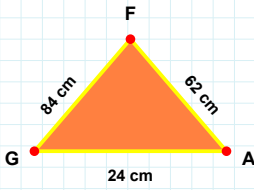
- ☐ Paralelkenar
☐ Eşkenar Dörtgen
☐ Yamuk



14 cm hangi şeklin kenarıdır?

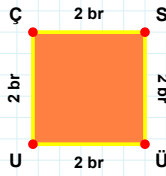
- ☐ Eşkenar Dörtgen
☐ Yamuk
☐ Paralelkenar

SORU: Aşağıdaki şekilleri inceleyiniz. Verilen kenar bilgisinin hangi şekle ait olduğunu işaretleyiniz.



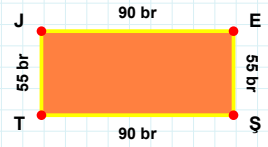
[ÇS] kenarı hangi şeklin kenarıdır?

- ☐ Üçgen
☐ Dikdörtgen
☐ Kare



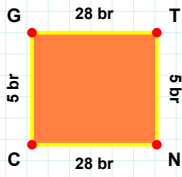
[ST] kenarı hangi şeklin kenarıdır?

- ☐ Üçgen
☐ Dikdörtgen
☐ Kare



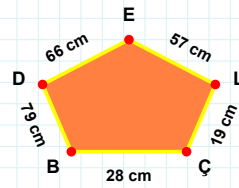
[AF] kenarı hangi şeklin kenarıdır?

- ☐ Üçgen
☐ Kare
☐ Dikdörtgen



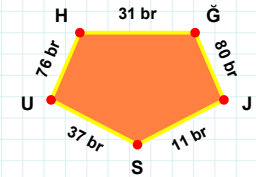
28 cm hangi şeklin kenarıdır?

- ☐ Beşgen
☐ Ters Beşgen
☐ Dikey Dikdörtgen



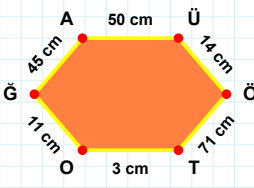
[JS] kenarı hangi şeklin kenarıdır?

- ☐ Ters Beşgen
☐ Beşgen
☐ Dikey Dikdörtgen



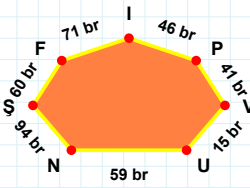
[GT] kenarı hangi şeklin kenarıdır?

- ☐ Ters Beşgen
☐ Dikey Dikdörtgen
☐ Beşgen



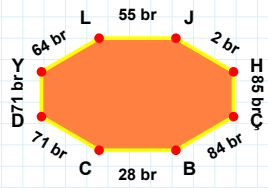
[YL] kenarı hangi şeklin kenarıdır?

- ☐ Sekizgen
☐ Yediggen
☐ Altıgen



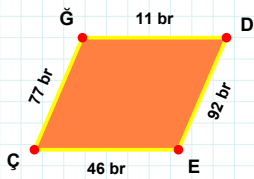
[ÖT] kenarı hangi şeklin kenarıdır?

- ☐ Yediggen
☐ Altıgen
☐ Sekizgen



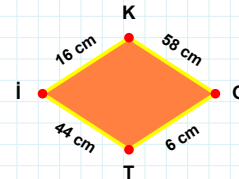
15 br hangi şeklin kenarıdır?

- ☐ Sekizgen
☐ Altıgen
☐ Yediggen



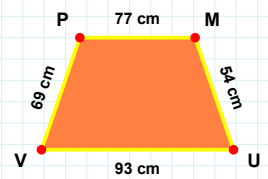
[MU] kenarı hangi şeklin kenarıdır?

- ☐ Eşkenar Dörtgen
☐ Yamuk
☐ Paralelkenar



[ÇĞ] kenarı hangi şeklin kenarıdır?

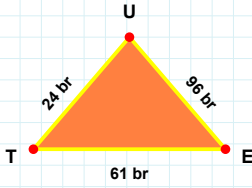
- ☐ Paralelkenar
☐ Yamuk
☐ Eşkenar Dörtgen



16 cm hangi şeklin kenarıdır?

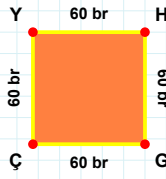
- ☐ Paralelkenar
☐ Eşkenar Dörtgen
☐ Yamuk

SORU: Aşağıdaki şekilleri inceleyiniz. Verilen kenar bilgisinin hangi şekle ait olduğunu işaretleyiniz.



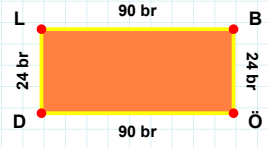
[LB] kenarı hangi şeklin kenarıdır?

- ☐ Üçgen
☐ Kare
☐ Dikdörtgen



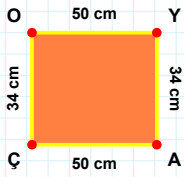
[TE] kenarı hangi şeklin kenarıdır?

- ☐ Üçgen
☐ Dikdörtgen
☐ Kare



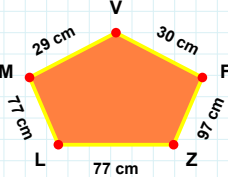
[HG] kenarı hangi şeklin kenarıdır?

- ☐ Kare
☐ Üçgen
☐ Dikdörtgen



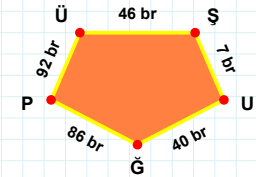
30 cm hangi şeklin kenarıdır?

- ☐ Beşgen
☐ Dikey Dikdörtgen
☐ Ters Beşgen



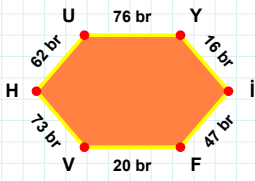
[ÜŞ] kenarı hangi şeklin kenarıdır?

- ☐ Ters Beşgen
☐ Dikey Dikdörtgen
☐ Beşgen



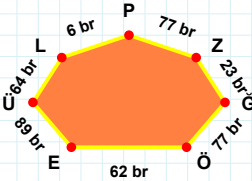
[OY] kenarı hangi şeklin kenarıdır?

- ☐ Dikey Dikdörtgen
☐ Ters Beşgen
☐ Beşgen



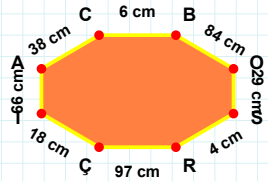
23 br hangi şeklin kenarıdır?

- ☐ Altıgen
☐ Yediggen
☐ Sekizgen



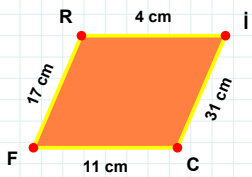
[IA] kenarı hangi şeklin kenarıdır?

- ☐ Sekizgen
☐ Yediggen
☐ Altıgen



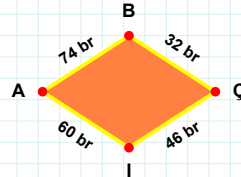
[FV] kenarı hangi şeklin kenarıdır?

- ☐ Altıgen
☐ Yediggen
☐ Sekizgen



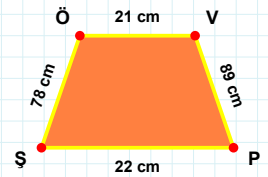
[ÖV] kenarı hangi şeklin kenarıdır?

- ☐ Eşkenar Dörtgen
☐ Paralelkenar
☐ Yamuk



[İC] kenarı hangi şeklin kenarıdır?

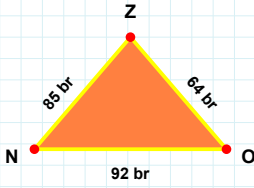
- ☐ Eşkenar Dörtgen
☐ Paralelkenar
☐ Yamuk



60 br hangi şeklin kenarıdır?

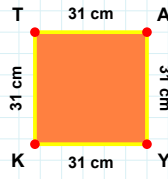
- ☐ Eşkenar Dörtgen
☐ Paralelkenar
☐ Yamuk

SORU: Aşağıdaki şekilleri inceleyiniz. Verilen kenar bilgisinin hangi şekle ait olduğunu işaretleyiniz.



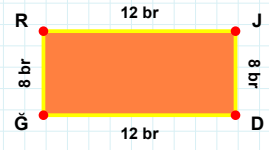
[DĞ] kenarı hangi şeklin kenarıdır?

- ☐ Üçgen
☐ Dikdörtgen
☐ Kare



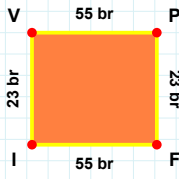
[NO] kenarı hangi şeklin kenarıdır?

- ☐ Kare
☐ Üçgen
☐ Dikdörtgen



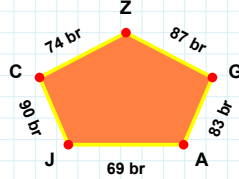
[KT] kenarı hangi şeklin kenarıdır?

- ☐ Kare
☐ Dikdörtgen
☐ Üçgen



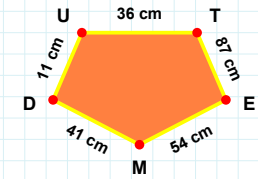
[TE] kenarı hangi şeklin kenarıdır?

- ☐ Dikey Dikdörtgen
☐ Beşgen
☐ Ters Beşgen



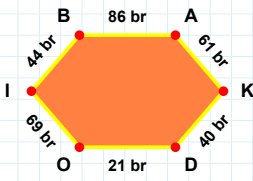
[VP] kenarı hangi şeklin kenarıdır?

- ☐ Beşgen
☐ Ters Beşgen
☐ Dikey Dikdörtgen



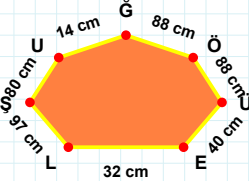
90 br hangi şeklin kenarıdır?

- ☐ Beşgen
☐ Dikey Dikdörtgen
☐ Ters Beşgen



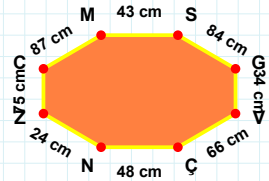
[ÇN] kenarı hangi şeklin kenarıdır?

- ☐ Altıgen
☐ Sekizgen
☐ Yediggen



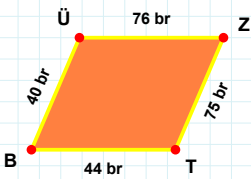
[KD] kenarı hangi şeklin kenarıdır?

- ☐ Yediggen
☐ Altıgen
☐ Sekizgen



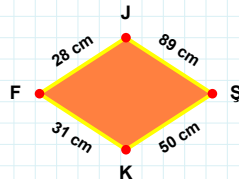
80 cm hangi şeklin kenarıdır?

- ☐ Altıgen
☐ Yediggen
☐ Sekizgen



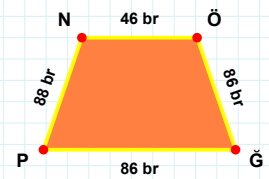
[NÖ] kenarı hangi şeklin kenarıdır?

- ☐ Paralelkenar
☐ Yamuk
☐ Eşkenar Dörtgen



[JÜ] kenarı hangi şeklin kenarıdır?

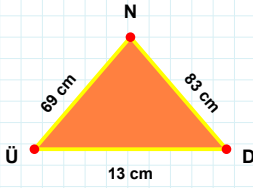
- ☐ Yamuk
☐ Paralelkenar
☐ Eşkenar Dörtgen



28 cm hangi şeklin kenarıdır?

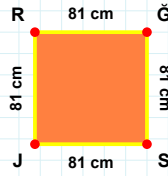
- ☐ Yamuk
☐ Eşkenar Dörtgen
☐ Paralelkenar

SORU: Aşağıdaki şekilleri inceleyiniz. Verilen kenar bilgisinin hangi şekle ait olduğunu işaretleyiniz.



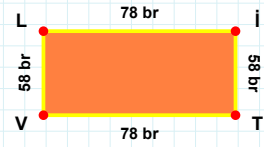
[ÜS] kenarı hangi şeklin kenarıdır?

- ☐ Üçgen
☐ Kare
☐ Dikdörtgen



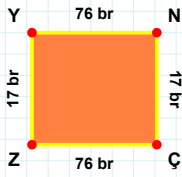
[TV] kenarı hangi şeklin kenarıdır?

- ☐ Kare
☐ Dikdörtgen
☐ Üçgen



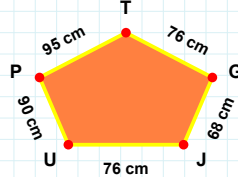
[DN] kenarı hangi şeklin kenarıdır?

- ☐ Dikdörtgen
☐ Üçgen
☐ Kare



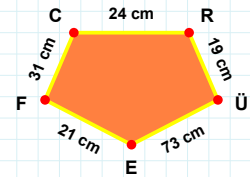
[RÜ] kenarı hangi şeklin kenarıdır?

- ☐ Ters Beşgen
☐ Dikey Dikdörtgen
☐ Beşgen



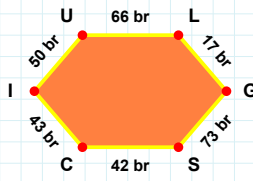
[ZY] kenarı hangi şeklin kenarıdır?

- ☐ Beşgen
☐ Ters Beşgen
☐ Dikey Dikdörtgen



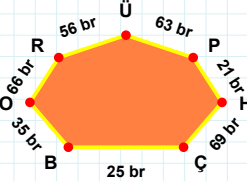
68 cm hangi şeklin kenarıdır?

- ☐ Beşgen
☐ Dikey Dikdörtgen
☐ Ters Beşgen



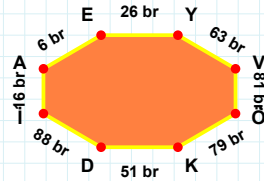
[AE] kenarı hangi şeklin kenarıdır?

- ☐ Altıgen
☐ Yediggen
☐ Sekizgen



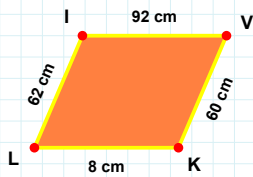
[IU] kenarı hangi şeklin kenarıdır?

- ☐ Altıgen
☐ Sekizgen
☐ Yediggen



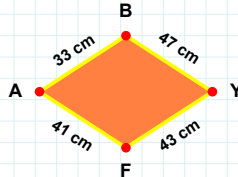
25 br hangi şeklin kenarıdır?

- ☐ Yediggen
☐ Sekizgen
☐ Altıgen



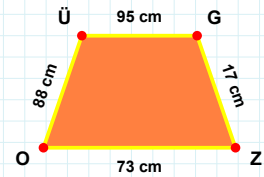
47 cm hangi şeklin kenarıdır?

- ☐ Paralelkenar
☐ Yamuk
☐ Eşkenar Dörtgen



[GZ] kenarı hangi şeklin kenarıdır?

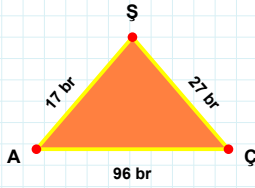
- ☐ Paralelkenar
☐ Yamuk
☐ Eşkenar Dörtgen



[İV] kenarı hangi şeklin kenarıdır?

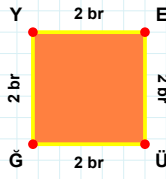
- ☐ Eşkenar Dörtgen
☐ Paralelkenar
☐ Yamuk

SORU: Aşağıdaki şekilleri inceleyiniz. Verilen kenar bilgisinin hangi şekle ait olduğunu işaretleyiniz.



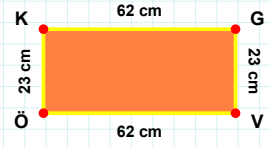
|EÜ| kenarı hangi şeklin kenarıdır?

- ☐ Dikdörtgen
☐ Kare
☐ Üçgen



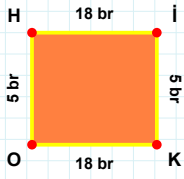
|KG| kenarı hangi şeklin kenarıdır?

- ☐ Üçgen
☐ Dikdörtgen
☐ Kare



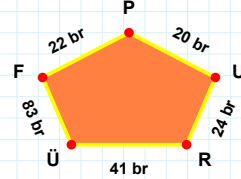
|AÇ| kenarı hangi şeklin kenarıdır?

- ☐ Dikdörtgen
☐ Üçgen
☐ Kare



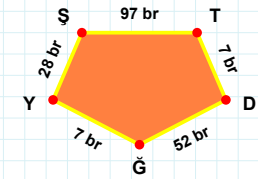
41 br hangi şeklin kenarıdır?

- ☐ Beşgen
☐ Dikey Dikdörtgen
☐ Ters Beşgen



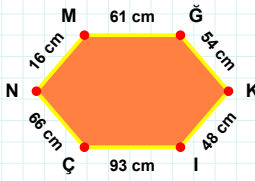
|YŞ| kenarı hangi şeklin kenarıdır?

- ☐ Ters Beşgen
☐ Dikey Dikdörtgen
☐ Beşgen



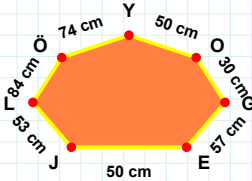
|KO| kenarı hangi şeklin kenarıdır?

- ☐ Ters Beşgen
☐ Beşgen
☐ Dikey Dikdörtgen



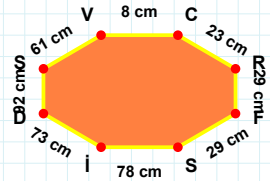
|DŞ| kenarı hangi şeklin kenarıdır?

- ☐ Altıgen
☐ Sekizgen
☐ Yediggen



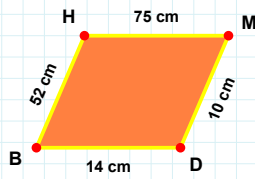
|İÇ| kenarı hangi şeklin kenarıdır?

- ☐ Altıgen
☐ Yediggen
☐ Sekizgen



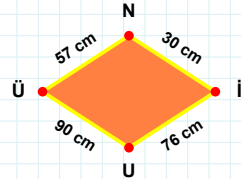
30 cm hangi şeklin kenarıdır?

- ☐ Yediggen
☐ Altıgen
☐ Sekizgen



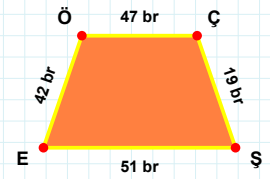
30 cm hangi şeklin kenarıdır?

- ☐ Eşkenar Dörtgen
☐ Paralelkenar
☐ Yamuk



|ŞE| kenarı hangi şeklin kenarıdır?

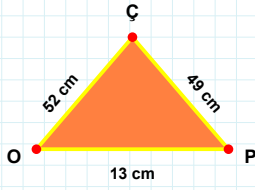
- ☐ Paralelkenar
☐ Eşkenar Dörtgen
☐ Yamuk



|HM| kenarı hangi şeklin kenarıdır?

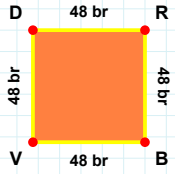
- ☐ Paralelkenar
☐ Eşkenar Dörtgen
☐ Yamuk

SORU: Aşağıdaki şekilleri inceleyiniz. Verilen kenar bilgisinin hangi şekle ait olduğunu işaretleyiniz.



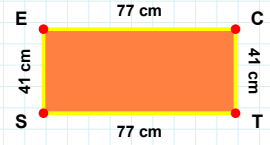
[DR] kenarı hangi şeklin kenarıdır?

- ☐ Dikdörtgen
☐ Üçgen
☐ Kare



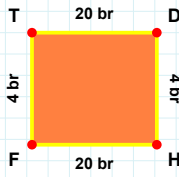
[EC] kenarı hangi şeklin kenarıdır?

- ☐ Dikdörtgen
☐ Kare
☐ Üçgen



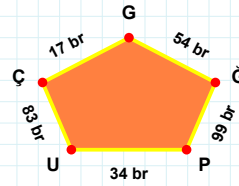
[PÇ] kenarı hangi şeklin kenarıdır?

- ☐ Üçgen
☐ Dikdörtgen
☐ Kare



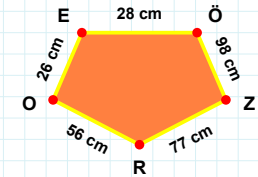
54 br hangi şeklin kenarıdır?

- ☐ Beşgen
☐ Dikey Dikdörtgen
☐ Ters Beşgen



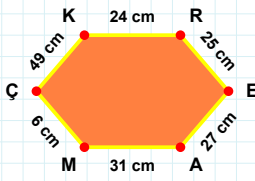
[RO] kenarı hangi şeklin kenarıdır?

- ☐ Dikey Dikdörtgen
☐ Beşgen
☐ Ters Beşgen



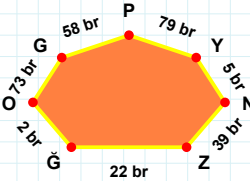
[FT] kenarı hangi şeklin kenarıdır?

- ☐ Beşgen
☐ Dikey Dikdörtgen
☐ Ters Beşgen



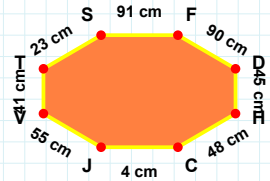
[TS] kenarı hangi şeklin kenarıdır?

- ☐ Altıgen
☐ Sekizgen
☐ Yediggen



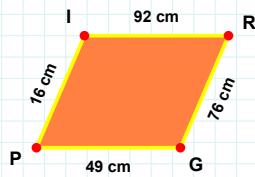
[EA] kenarı hangi şeklin kenarıdır?

- ☐ Sekizgen
☐ Yediggen
☐ Altıgen



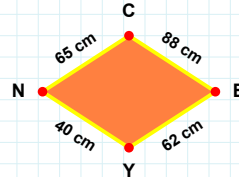
79 br hangi şeklin kenarıdır?

- ☐ Sekizgen
☐ Yediggen
☐ Altıgen



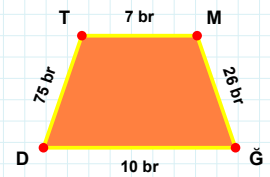
[DT] kenarı hangi şeklin kenarıdır?

- ☐ Paralelkenar
☐ Eşkenar Dörtgen
☐ Yamuk



[PI] kenarı hangi şeklin kenarıdır?

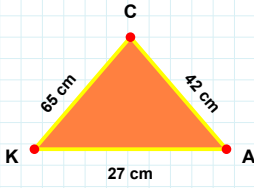
- ☐ Paralelkenar
☐ Yamuk
☐ Eşkenar Dörtgen



65 cm hangi şeklin kenarıdır?

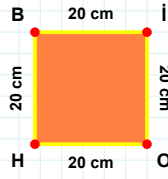
- ☐ Eşkenar Dörtgen
☐ Yamuk
☐ Paralelkenar

SORU: Aşağıdaki şekilleri inceleyiniz. Verilen kenar bilgisinin hangi şekle ait olduğunu işaretleyiniz.



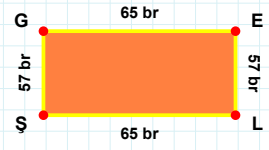
[EL] kenarı hangi şeklin kenarıdır?

- ☐ Kare
☐ Dikdörtgen
☐ Üçgen



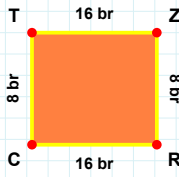
[CK] kenarı hangi şeklin kenarıdır?

- ☐ Dikdörtgen
☐ Kare
☐ Üçgen



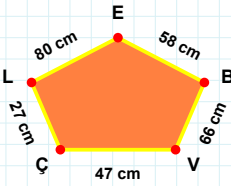
[OH] kenarı hangi şeklin kenarıdır?

- ☐ Kare
☐ Üçgen
☐ Dikdörtgen



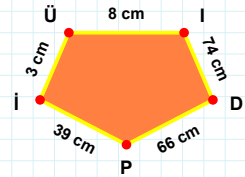
80 cm hangi şeklin kenarıdır?

- ☐ Beşgen
☐ Dikey Dikdörtgen
☐ Ters Beşgen



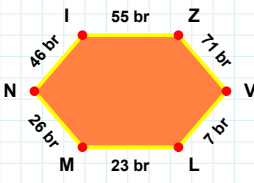
[DP] kenarı hangi şeklin kenarıdır?

- ☐ Beşgen
☐ Dikey Dikdörtgen
☐ Ters Beşgen



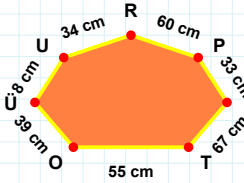
[ZR] kenarı hangi şeklin kenarıdır?

- ☐ Beşgen
☐ Dikey Dikdörtgen
☐ Ters Beşgen



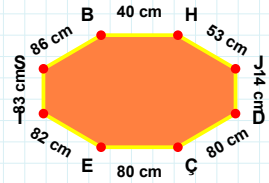
[BH] kenarı hangi şeklin kenarıdır?

- ☐ Altıgen
☐ Yediggen
☐ Sekizgen



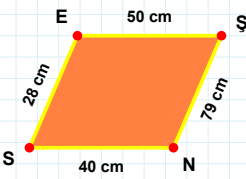
[IZ] kenarı hangi şeklin kenarıdır?

- ☐ Altıgen
☐ Sekizgen
☐ Yediggen



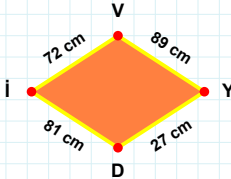
8 cm hangi şeklin kenarıdır?

- ☐ Sekizgen
☐ Altıgen
☐ Yediggen



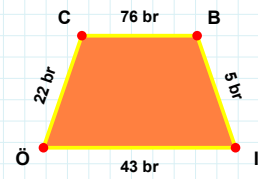
[İÖ] kenarı hangi şeklin kenarıdır?

- ☐ Paralelkenar
☐ Eşkenar Dörtgen
☐ Yamuk



[NS] kenarı hangi şeklin kenarıdır?

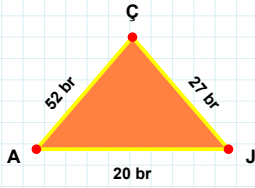
- ☐ Eşkenar Dörtgen
☐ Paralelkenar
☐ Yamuk



81 cm hangi şeklin kenarıdır?

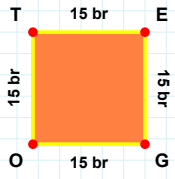
- ☐ Paralelkenar
☐ Eşkenar Dörtgen
☐ Yamuk

SORU: Aşağıdaki şekilleri inceleyiniz. Verilen kenar bilgisinin hangi şekle ait olduğunu işaretleyiniz.



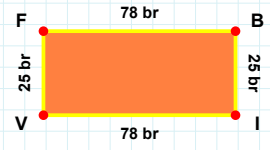
[TE] kenarı hangi şeklin kenarıdır?

- ☐ Üçgen
☐ Kare
☐ Dikdörtgen



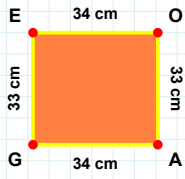
[VF] kenarı hangi şeklin kenarıdır?

- ☐ Dikdörtgen
☐ Kare
☐ Üçgen



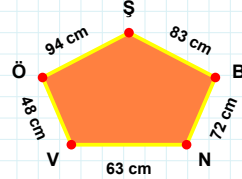
[AJ] kenarı hangi şeklin kenarıdır?

- ☐ Dikdörtgen
☐ Kare
☐ Üçgen



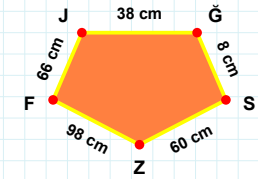
94 cm hangi şeklin kenarıdır?

- ☐ Beşgen
☐ Dikey Dikdörtgen
☐ Ters Beşgen



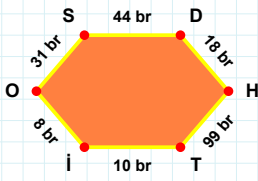
[JĞ] kenarı hangi şeklin kenarıdır?

- ☐ Beşgen
☐ Ters Beşgen
☐ Dikey Dikdörtgen



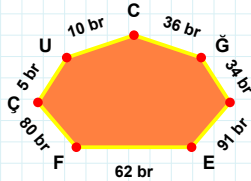
[AG] kenarı hangi şeklin kenarıdır?

- ☐ Dikey Dikdörtgen
☐ Beşgen
☐ Ters Beşgen



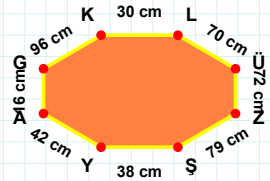
36 br hangi şeklin kenarıdır?

- ☐ Altıgen
☐ Yedigen
☐ Sekizgen



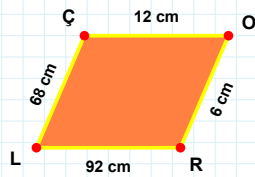
[YA] kenarı hangi şeklin kenarıdır?

- ☐ Yedigen
☐ Altıgen
☐ Sekizgen



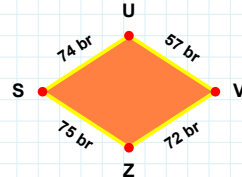
[OS] kenarı hangi şeklin kenarıdır?

- ☐ Sekizgen
☐ Altıgen
☐ Yedigen



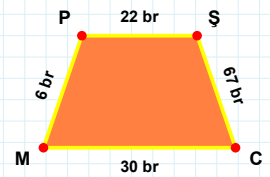
75 br hangi şeklin kenarıdır?

- ☐ Eşkenar Dörtgen
☐ Paralelkenar
☐ Yamuk



[PŞ] kenarı hangi şeklin kenarıdır?

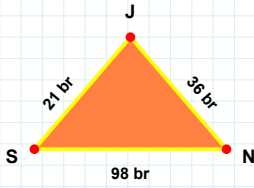
- ☐ Yamuk
☐ Paralelkenar
☐ Eşkenar Dörtgen



[OR] kenarı hangi şeklin kenarıdır?

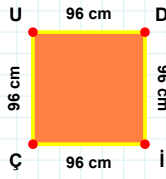
- ☐ Eşkenar Dörtgen
☐ Paralelkenar
☐ Yamuk

SORU: Aşağıdaki şekilleri inceleyiniz. Verilen kenar bilgisinin hangi şekle ait olduğunu işaretleyiniz.



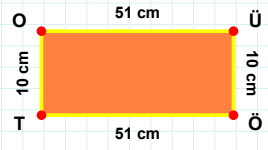
[ÇU] kenarı hangi şeklin kenarıdır?

- ☐ Kare
☐ Üçgen
☐ Dikdörtgen



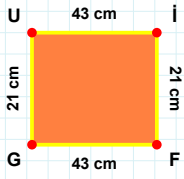
[ÖT] kenarı hangi şeklin kenarıdır?

- ☐ Kare
☐ Üçgen
☐ Dikdörtgen



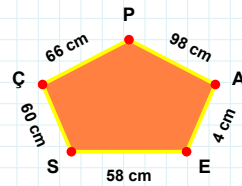
[JS] kenarı hangi şeklin kenarıdır?

- ☐ Dikdörtgen
☐ Kare
☐ Üçgen



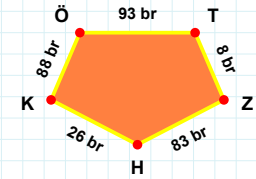
[TZ] kenarı hangi şeklin kenarıdır?

- ☐ Ters Beşgen
☐ Beşgen
☐ Dikey Dikdörtgen



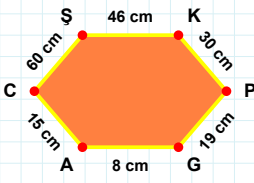
[Üİ] kenarı hangi şeklin kenarıdır?

- ☐ Ters Beşgen
☐ Beşgen
☐ Dikey Dikdörtgen



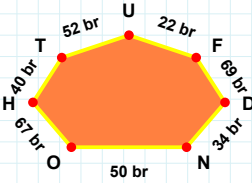
60 cm hangi şeklin kenarıdır?

- ☐ Ters Beşgen
☐ Dikey Dikdörtgen
☐ Beşgen



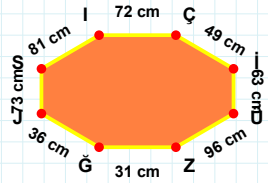
[Sİ] kenarı hangi şeklin kenarıdır?

- ☐ Sekizgen
☐ Altıgen
☐ Yedigen



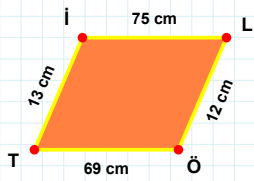
[GA] kenarı hangi şeklin kenarıdır?

- ☐ Altıgen
☐ Sekizgen
☐ Yedigen



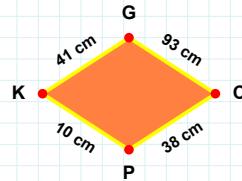
52 br hangi şeklin kenarıdır?

- ☐ Yedigen
☐ Altıgen
☐ Sekizgen



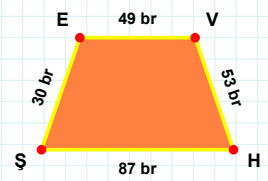
[HŞ] kenarı hangi şeklin kenarıdır?

- ☐ Yamuk
☐ Eşkenar Dörtgen
☐ Paralelkenar



[ÖT] kenarı hangi şeklin kenarıdır?

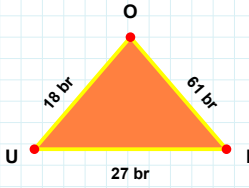
- ☐ Eşkenar Dörtgen
☐ Yamuk
☐ Paralelkenar



93 cm hangi şeklin kenarıdır?

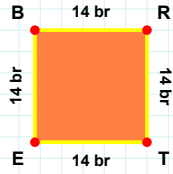
- ☐ Eşkenar Dörtgen
☐ Paralelkenar
☐ Yamuk

SORU: Aşağıdaki şekilleri inceleyiniz. Verilen kenar bilgisinin hangi şekle ait olduğunu işaretleyiniz.



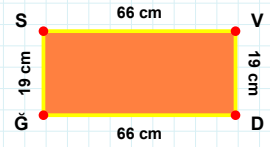
[EB] kenarı hangi şeklin kenarıdır?

- ☐ Kare
☐ Üçgen
☐ Dikdörtgen



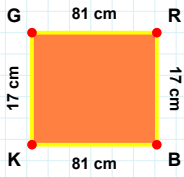
[DÖ] kenarı hangi şeklin kenarıdır?

- ☐ Üçgen
☐ Kare
☐ Dikdörtgen



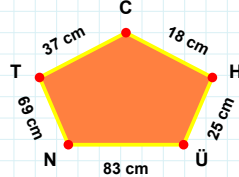
[UI] kenarı hangi şeklin kenarıdır?

- ☐ Üçgen
☐ Dikdörtgen
☐ Kare



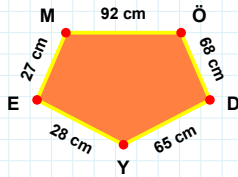
69 cm hangi şeklin kenarıdır?

- ☐ Dikey Dikdörtgen
☐ Beşgen
☐ Ters Beşgen



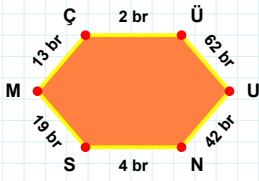
[YE] kenarı hangi şeklin kenarıdır?

- ☐ Dikey Dikdörtgen
☐ Beşgen
☐ Ters Beşgen



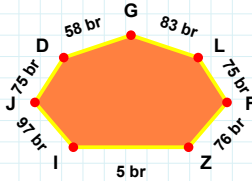
[RB] kenarı hangi şeklin kenarıdır?

- ☐ Dikey Dikdörtgen
☐ Beşgen
☐ Ters Beşgen



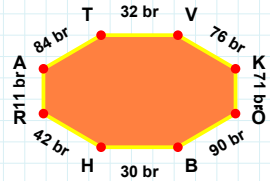
[RA] kenarı hangi şeklin kenarıdır?

- ☐ Sekizgen
☐ Altıgen
☐ Yediggen



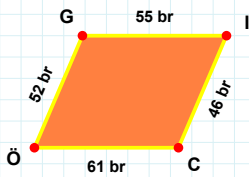
[MÇ] kenarı hangi şeklin kenarıdır?

- ☐ Yediggen
☐ Sekizgen
☐ Altıgen



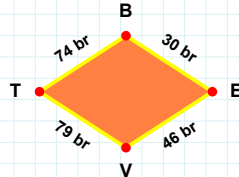
5 br hangi şeklin kenarıdır?

- ☐ Altıgen
☐ Sekizgen
☐ Yediggen



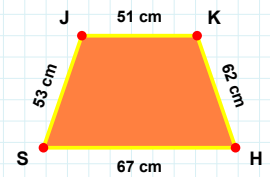
[HS] kenarı hangi şeklin kenarıdır?

- ☐ Yamuk
☐ Eşkenar Dörtgen
☐ Paralelkenar



[CÖ] kenarı hangi şeklin kenarıdır?

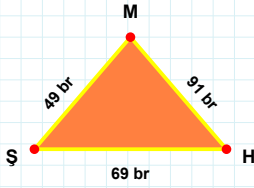
- ☐ Paralelkenar
☐ Yamuk
☐ Eşkenar Dörtgen



74 br hangi şeklin kenarıdır?

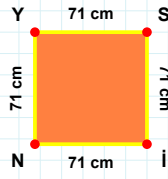
- ☐ Yamuk
☐ Eşkenar Dörtgen
☐ Paralelkenar

SORU: Aşağıdaki şekilleri inceleyiniz. Verilen kenar bilgisinin hangi şekle ait olduğunu işaretleyiniz.



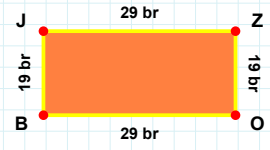
[YS] kenarı hangi şeklin kenarıdır?

- ☐ Dikdörtgen
☐ Üçgen
☐ Kare



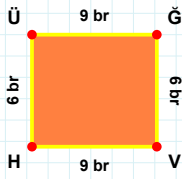
[ZO] kenarı hangi şeklin kenarıdır?

- ☐ Üçgen
☐ Dikdörtgen
☐ Kare



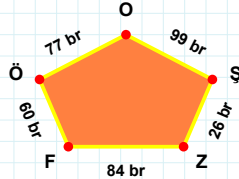
[MS] kenarı hangi şeklin kenarıdır?

- ☐ Kare
☐ Dikdörtgen
☐ Üçgen



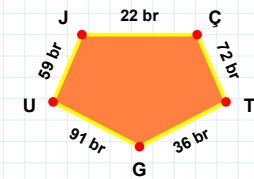
[GU] kenarı hangi şeklin kenarıdır?

- ☐ Ters Beşgen
☐ Dikey Dikdörtgen
☐ Beşgen



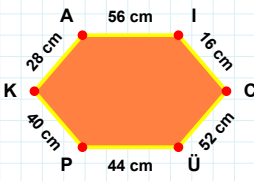
[HÜ] kenarı hangi şeklin kenarıdır?

- ☐ Ters Beşgen
☐ Dikey Dikdörtgen
☐ Beşgen



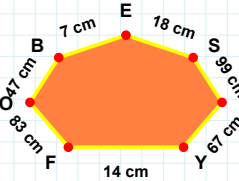
99 br hangi şeklin kenarıdır?

- ☐ Ters Beşgen
☐ Dikey Dikdörtgen
☐ Beşgen



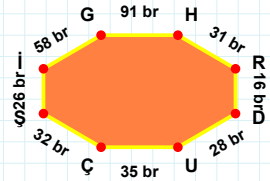
14 cm hangi şeklin kenarıdır?

- ☐ Altıgen
☐ Sekizgen
☐ Yedigen



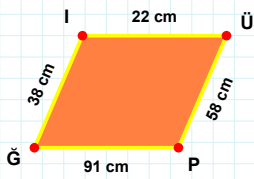
[DU] kenarı hangi şeklin kenarıdır?

- ☐ Altıgen
☐ Sekizgen
☐ Yedigen



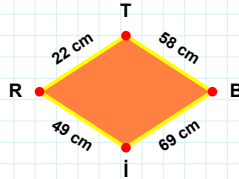
[PK] kenarı hangi şeklin kenarıdır?

- ☐ Yedigen
☐ Altıgen
☐ Sekizgen



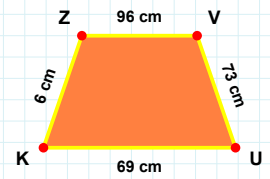
49 cm hangi şeklin kenarıdır?

- ☐ Paralelkenar
☐ Eşkenar Dörtgen
☐ Yamuk



[VU] kenarı hangi şeklin kenarıdır?

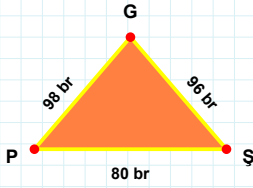
- ☐ Eşkenar Dörtgen
☐ Paralelkenar
☐ Yamuk



[PĞ] kenarı hangi şeklin kenarıdır?

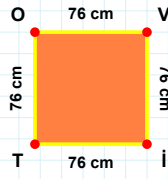
- ☐ Eşkenar Dörtgen
☐ Yamuk
☐ Paralelkenar

SORU: Aşağıdaki şekilleri inceleyiniz. Verilen kenar bilgisinin hangi şekle ait olduğunu işaretleyiniz.



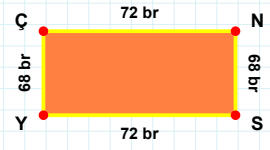
[OV] kenarı hangi şeklin kenarıdır?

- ☐ Üçgen
☐ Kare
☐ Dikdörtgen



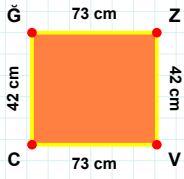
[SY] kenarı hangi şeklin kenarıdır?

- ☐ Dikdörtgen
☐ Kare
☐ Üçgen



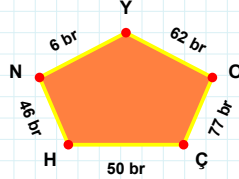
[GP] kenarı hangi şeklin kenarıdır?

- ☐ Kare
☐ Dikdörtgen
☐ Üçgen



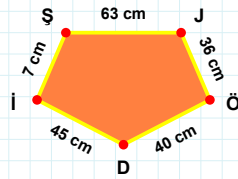
6 br hangi şeklin kenarıdır?

- ☐ Dikey Dikdörtgen
☐ Ters Beşgen
☐ Beşgen



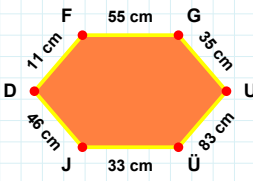
[ÖD] kenarı hangi şeklin kenarıdır?

- ☐ Beşgen
☐ Dikey Dikdörtgen
☐ Ters Beşgen



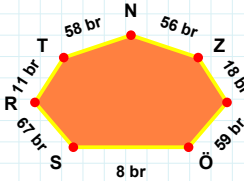
[CÖ] kenarı hangi şeklin kenarıdır?

- ☐ Dikey Dikdörtgen
☐ Ters Beşgen
☐ Beşgen



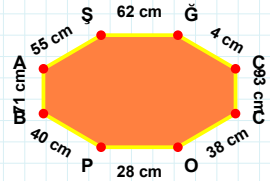
[PB] kenarı hangi şeklin kenarıdır?

- ☐ Sekizgen
☐ Altıgen
☐ Yedigen



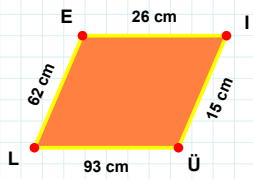
[GU] kenarı hangi şeklin kenarıdır?

- ☐ Sekizgen
☐ Altıgen
☐ Yedigen



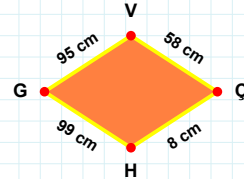
59 br hangi şeklin kenarıdır?

- ☐ Altıgen
☐ Sekizgen
☐ Yedigen



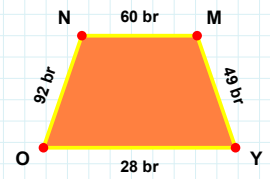
[NM] kenarı hangi şeklin kenarıdır?

- ☐ Yamuk
☐ Paralelkenar
☐ Eşkenar Dörtgen



[ÜL] kenarı hangi şeklin kenarıdır?

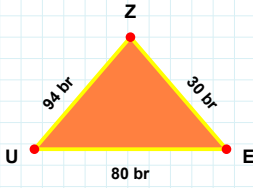
- ☐ Yamuk
☐ Eşkenar Dörtgen
☐ Paralelkenar



58 cm hangi şeklin kenarıdır?

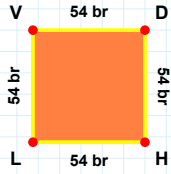
- ☐ Yamuk
☐ Eşkenar Dörtgen
☐ Paralelkenar

SORU: Aşağıdaki şekilleri inceleyiniz. Verilen kenar bilgisinin hangi şekle ait olduğunu işaretleyiniz.



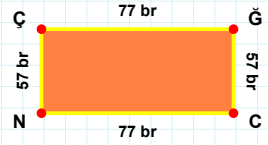
[VD] kenarı hangi şeklin kenarıdır?

- ☐ Üçgen
☐ Dikdörtgen
☐ Kare



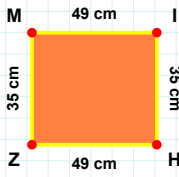
[ÇĞ] kenarı hangi şeklin kenarıdır?

- ☐ Dikdörtgen
☐ Üçgen
☐ Kare



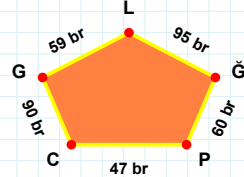
[ZU] kenarı hangi şeklin kenarıdır?

- ☐ Kare
☐ Üçgen
☐ Dikdörtgen



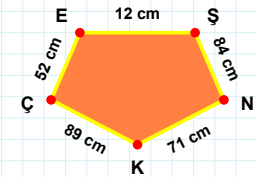
[KÇ] kenarı hangi şeklin kenarıdır?

- ☐ Dikey Dikdörtgen
☐ Ters Beşgen
☐ Beşgen



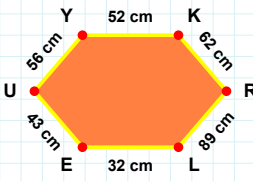
[MI] kenarı hangi şeklin kenarıdır?

- ☐ Ters Beşgen
☐ Dikey Dikdörtgen
☐ Beşgen



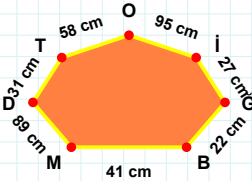
59 br hangi şeklin kenarıdır?

- ☐ Ters Beşgen
☐ Beşgen
☐ Dikey Dikdörtgen



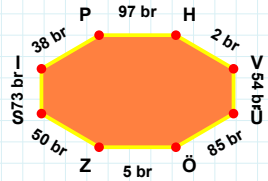
22 cm hangi şeklin kenarıdır?

- ☐ Sekizgen
☐ Yediggen
☐ Altıgen



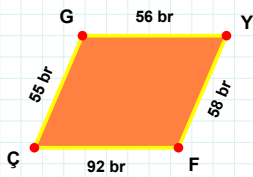
[ZS] kenarı hangi şeklin kenarıdır?

- ☐ Altıgen
☐ Yediggen
☐ Sekizgen



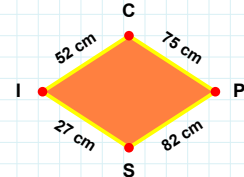
[YK] kenarı hangi şeklin kenarıdır?

- ☐ Sekizgen
☐ Yediggen
☐ Altıgen



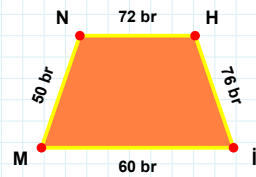
82 cm hangi şeklin kenarıdır?

- ☐ Paralelkenar
☐ Yamuk
☐ Eşkenar Dörtgen



[MN] kenarı hangi şeklin kenarıdır?

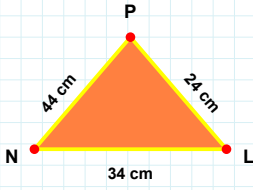
- ☐ Eşkenar Dörtgen
☐ Paralelkenar
☐ Yamuk



[YF] kenarı hangi şeklin kenarıdır?

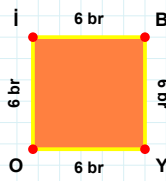
- ☐ Paralelkenar
☐ Eşkenar Dörtgen
☐ Yamuk

SORU: Aşağıdaki şekilleri inceleyiniz. Verilen kenar bilgisinin hangi şekle ait olduğunu işaretleyiniz.



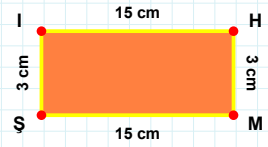
[BY] kenarı hangi şeklin kenarıdır?

- ☐ Dikdörtgen
☐ Kare
☐ Üçgen



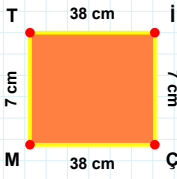
[HM] kenarı hangi şeklin kenarıdır?

- ☐ Üçgen
☐ Dikdörtgen
☐ Kare



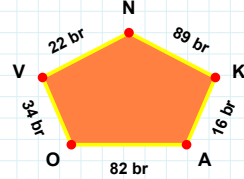
[NL] kenarı hangi şeklin kenarıdır?

- ☐ Kare
☐ Dikdörtgen
☐ Üçgen



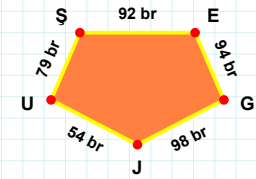
16 br hangi şeklin kenarıdır?

- ☐ Dikey Dikdörtgen
☐ Beşgen
☐ Ters Beşgen



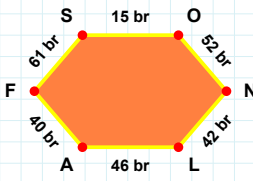
[JU] kenarı hangi şeklin kenarıdır?

- ☐ Dikey Dikdörtgen
☐ Ters Beşgen
☐ Beşgen



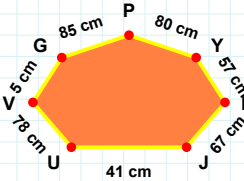
[MT] kenarı hangi şeklin kenarıdır?

- ☐ Beşgen
☐ Dikey Dikdörtgen
☐ Ters Beşgen



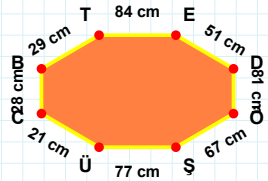
[BT] kenarı hangi şeklin kenarıdır?

- ☐ Sekizgen
☐ Yedigen
☐ Altıgen



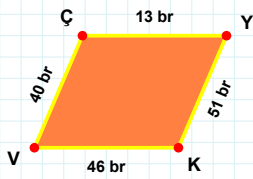
[LA] kenarı hangi şeklin kenarıdır?

- ☐ Sekizgen
☐ Altıgen
☐ Yedigen



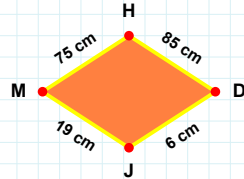
5 cm hangi şeklin kenarıdır?

- ☐ Altıgen
☐ Sekizgen
☐ Yedigen



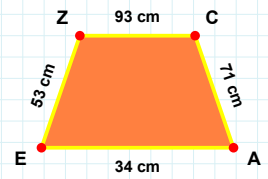
6 cm hangi şeklin kenarıdır?

- ☐ Yamuk
☐ Paralelkenar
☐ Eşkenar Dörtgen



[EZ] kenarı hangi şeklin kenarıdır?

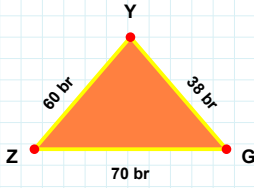
- ☐ Yamuk
☐ Eşkenar Dörtgen
☐ Paralelkenar



[ÇY] kenarı hangi şeklin kenarıdır?

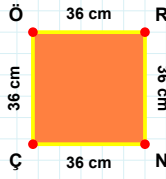
- ☐ Paralelkenar
☐ Eşkenar Dörtgen
☐ Yamuk

SORU: Aşağıdaki şekilleri inceleyiniz. Verilen kenar bilgisinin hangi şekle ait olduğunu işaretleyiniz.



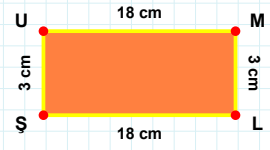
[RN] kenarı hangi şeklin kenarıdır?

- ☐ Dikdörtgen
☐ Üçgen
☐ Kare



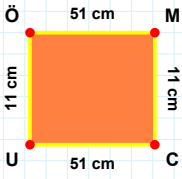
[ŞU] kenarı hangi şeklin kenarıdır?

- ☐ Kare
☐ Dikdörtgen
☐ Üçgen



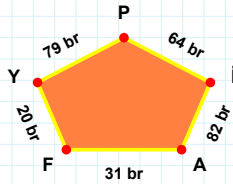
[YZ] kenarı hangi şeklin kenarıdır?

- ☐ Üçgen
☐ Dikdörtgen
☐ Kare



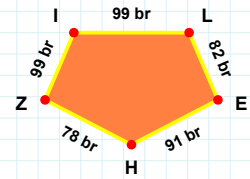
20 br hangi şeklin kenarıdır?

- ☐ Dikey Dikdörtgen
☐ Beşgen
☐ Ters Beşgen



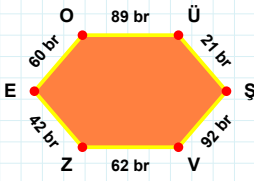
[HZ] kenarı hangi şeklin kenarıdır?

- ☐ Beşgen
☐ Dikey Dikdörtgen
☐ Ters Beşgen



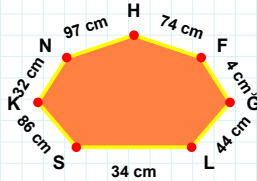
[ÖM] kenarı hangi şeklin kenarıdır?

- ☐ Beşgen
☐ Ters Beşgen
☐ Dikey Dikdörtgen



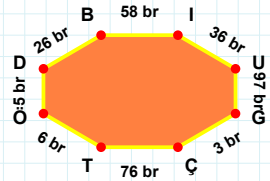
[ÇT] kenarı hangi şeklin kenarıdır?

- ☐ Altıgen
☐ Yedigen
☐ Sekizgen



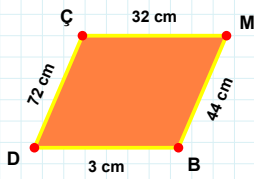
[ZE] kenarı hangi şeklin kenarıdır?

- ☐ Sekizgen
☐ Altıgen
☐ Yedigen



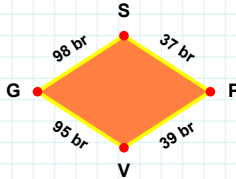
4 cm hangi şeklin kenarıdır?

- ☐ Yedigen
☐ Sekizgen
☐ Altıgen



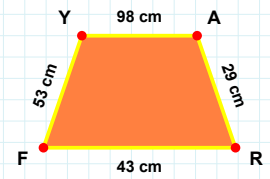
39 br hangi şeklin kenarıdır?

- ☐ Eşkenar Dörtgen
☐ Paralelkenar
☐ Yamuk



[RF] kenarı hangi şeklin kenarıdır?

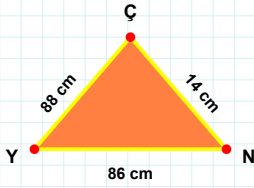
- ☐ Paralelkenar
☐ Eşkenar Dörtgen
☐ Yamuk



[BD] kenarı hangi şeklin kenarıdır?

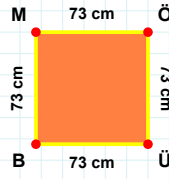
- ☐ Eşkenar Dörtgen
☐ Yamuk
☐ Paralelkenar

SORU: Aşağıdaki şekilleri inceleyiniz. Verilen kenar bilgisinin hangi şekle ait olduğunu işaretleyiniz.



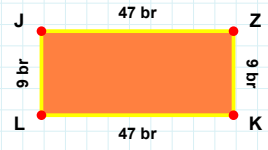
[YCN] kenarı hangi şeklin kenarıdır?

- ☐ Üçgen
☐ Dikdörtgen
☐ Kare



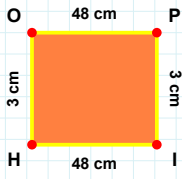
[MÖÜB] kenarı hangi şeklin kenarıdır?

- ☐ Dikdörtgen
☐ Üçgen
☐ Kare



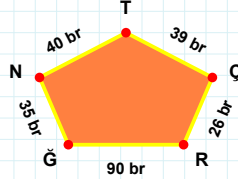
[JÖÜ] kenarı hangi şeklin kenarıdır?

- ☐ Dikdörtgen
☐ Üçgen
☐ Kare



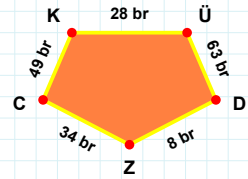
39 br hangi şeklin kenarıdır?

- ☐ Dikey Dikdörtgen
☐ Beşgen
☐ Ters Beşgen



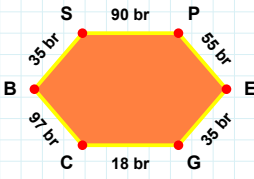
[DZ] kenarı hangi şeklin kenarıdır?

- ☐ Ters Beşgen
☐ Dikey Dikdörtgen
☐ Beşgen



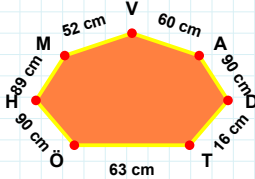
[PI] kenarı hangi şeklin kenarıdır?

- ☐ Beşgen
☐ Dikey Dikdörtgen
☐ Ters Beşgen



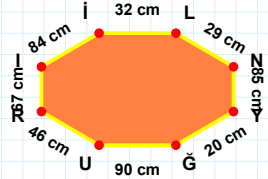
[NY] kenarı hangi şeklin kenarıdır?

- ☐ Sekizgen
☐ Altıgen
☐ Yediggen



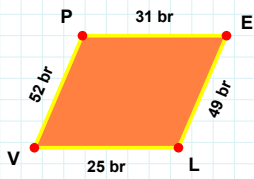
[SP] kenarı hangi şeklin kenarıdır?

- ☐ Yediggen
☐ Sekizgen
☐ Altıgen



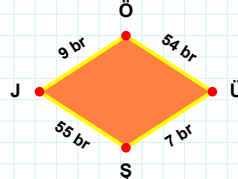
89 cm hangi şeklin kenarıdır?

- ☐ Yediggen
☐ Altıgen
☐ Sekizgen



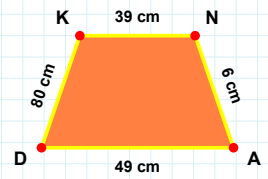
[DK] kenarı hangi şeklin kenarıdır?

- ☐ Eşkenar Dörtgen
☐ Paralelkenar
☐ Yamuk



[VP] kenarı hangi şeklin kenarıdır?

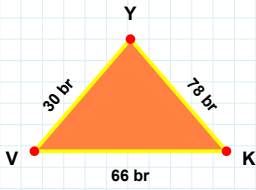
- ☐ Yamuk
☐ Eşkenar Dörtgen
☐ Paralelkenar



55 br hangi şeklin kenarıdır?

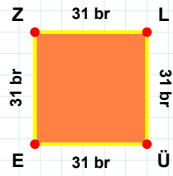
- ☐ Paralelkenar
☐ Eşkenar Dörtgen
☐ Yamuk

SORU: Aşağıdaki şekilleri inceleyiniz. Verilen kenar bilgisinin hangi şekle ait olduğunu işaretleyiniz.



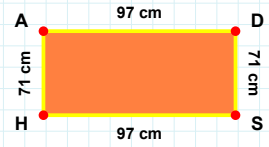
[ÜE] kenarı hangi şeklin kenarıdır?

- ☐ Dikdörtgen
☐ Üçgen
☐ Kare



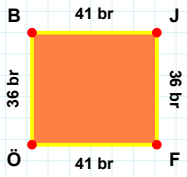
[AD] kenarı hangi şeklin kenarıdır?

- ☐ Kare
☐ Dikdörtgen
☐ Üçgen



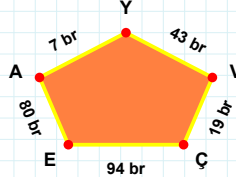
[VK] kenarı hangi şeklin kenarıdır?

- ☐ Üçgen
☐ Kare
☐ Dikdörtgen



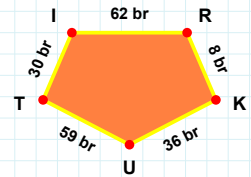
[RK] kenarı hangi şeklin kenarıdır?

- ☐ Dikey Dikdörtgen
☐ Beşgen
☐ Ters Beşgen



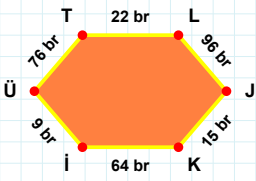
[FÖ] kenarı hangi şeklin kenarıdır?

- ☐ Ters Beşgen
☐ Dikey Dikdörtgen
☐ Beşgen



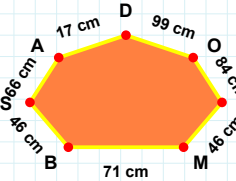
7 br hangi şeklin kenarıdır?

- ☐ Dikey Dikdörtgen
☐ Ters Beşgen
☐ Beşgen



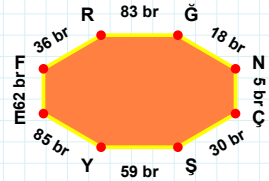
[YE] kenarı hangi şeklin kenarıdır?

- ☐ Altıgen
☐ Yedigen
☐ Sekizgen



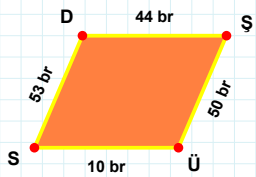
[ÜT] kenarı hangi şeklin kenarıdır?

- ☐ Sekizgen
☐ Altıgen
☐ Yedigen



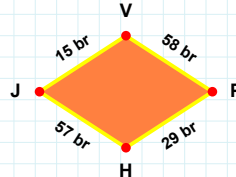
66 cm hangi şeklin kenarıdır?

- ☐ Yedigen
☐ Altıgen
☐ Sekizgen



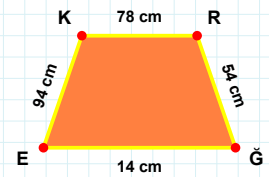
[EK] kenarı hangi şeklin kenarıdır?

- ☐ Yamuk
☐ Paralelkenar
☐ Eşkenar Dörtgen



[SD] kenarı hangi şeklin kenarıdır?

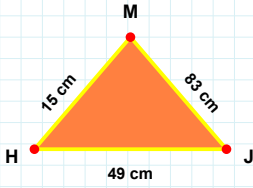
- ☐ Yamuk
☐ Paralelkenar
☐ Eşkenar Dörtgen



29 br hangi şeklin kenarıdır?

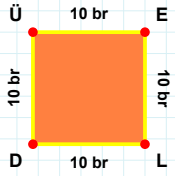
- ☐ Eşkenar Dörtgen
☐ Yamuk
☐ Paralelkenar

SORU: Aşağıdaki şekilleri inceleyiniz. Verilen kenar bilgisinin hangi şekle ait olduğunu işaretleyiniz.



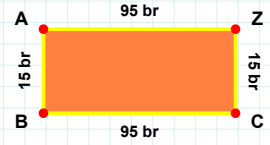
[BA] kenarı hangi şeklin kenarıdır?

- ☐ Kare
☐ Üçgen
☐ Dikdörtgen



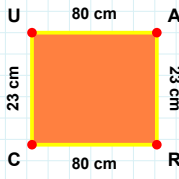
[JM] kenarı hangi şeklin kenarıdır?

- ☐ Üçgen
☐ Dikdörtgen
☐ Kare



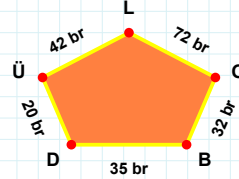
[LD] kenarı hangi şeklin kenarıdır?

- ☐ Kare
☐ Dikdörtgen
☐ Üçgen



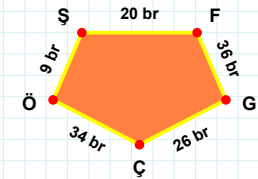
35 br hangi şeklin kenarıdır?

- ☐ Beşgen
☐ Dikey Dikdörtgen
☐ Ters Beşgen



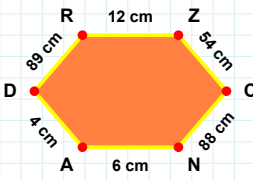
[ÖŞ] kenarı hangi şeklin kenarıdır?

- ☐ Beşgen
☐ Dikey Dikdörtgen
☐ Ters Beşgen



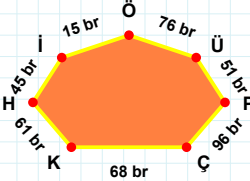
[RC] kenarı hangi şeklin kenarıdır?

- ☐ Dikey Dikdörtgen
☐ Beşgen
☐ Ters Beşgen



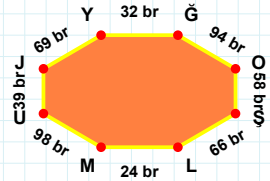
[LM] kenarı hangi şeklin kenarıdır?

- ☐ Yedigen
☐ Altıgen
☐ Sekizgen



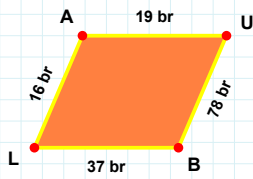
[AD] kenarı hangi şeklin kenarıdır?

- ☐ Yedigen
☐ Sekizgen
☐ Altıgen



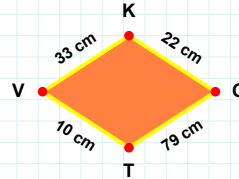
61 br hangi şeklin kenarıdır?

- ☐ Sekizgen
☐ Yedigen
☐ Altıgen



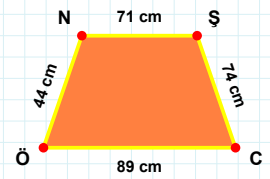
33 cm hangi şeklin kenarıdır?

- ☐ Eşkenar Dörtgen
☐ Yamuk
☐ Paralelkenar



[ŞC] kenarı hangi şeklin kenarıdır?

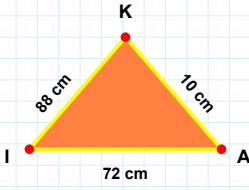
- ☐ Yamuk
☐ Eşkenar Dörtgen
☐ Paralelkenar



[UB] kenarı hangi şeklin kenarıdır?

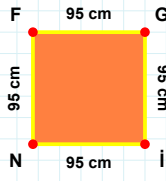
- ☐ Yamuk
☐ Eşkenar Dörtgen
☐ Paralelkenar

SORU: Aşağıdaki şekilleri inceleyiniz. Verilen kenar bilgisinin hangi şekle ait olduğunu işaretleyiniz.



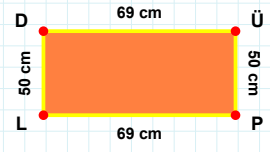
[GI] kenarı hangi şeklin kenarıdır?

- ☐ Kare
☐ Üçgen
☐ Dikdörtgen



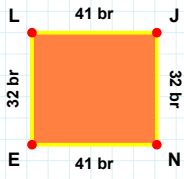
[DÜ] kenarı hangi şeklin kenarıdır?

- ☐ Dikdörtgen
☐ Kare
☐ Üçgen



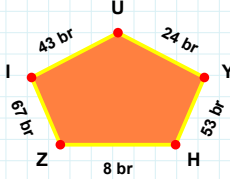
[KI] kenarı hangi şeklin kenarıdır?

- ☐ Üçgen
☐ Kare
☐ Dikdörtgen



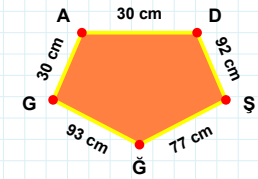
43 br hangi şeklin kenarıdır?

- ☐ Dikey Dikdörtgen
☐ Ters Beşgen
☐ Beşgen



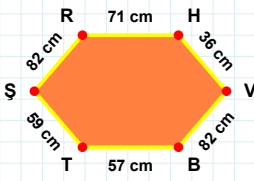
[GA] kenarı hangi şeklin kenarıdır?

- ☐ Ters Beşgen
☐ Dikey Dikdörtgen
☐ Beşgen



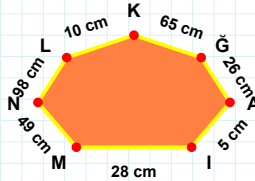
[JN] kenarı hangi şeklin kenarıdır?

- ☐ Dikey Dikdörtgen
☐ Ters Beşgen
☐ Beşgen



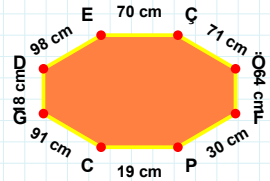
[ÇÖ] kenarı hangi şeklin kenarıdır?

- ☐ Sekizgen
☐ Altıgen
☐ Yediggen



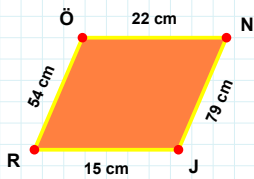
[VB] kenarı hangi şeklin kenarıdır?

- ☐ Yediggen
☐ Sekizgen
☐ Altıgen



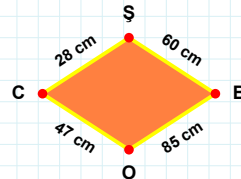
5 cm hangi şeklin kenarıdır?

- ☐ Altıgen
☐ Sekizgen
☐ Yediggen



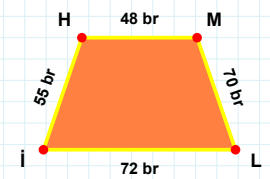
47 cm hangi şeklin kenarıdır?

- ☐ Yamuk
☐ Eşkenar Dörtgen
☐ Paralelkenar



[HM] kenarı hangi şeklin kenarıdır?

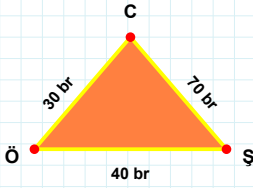
- ☐ Paralelkenar
☐ Eşkenar Dörtgen
☐ Yamuk



[ÖN] kenarı hangi şeklin kenarıdır?

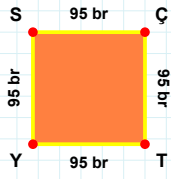
- ☐ Eşkenar Dörtgen
☐ Paralelkenar
☐ Yamuk

SORU: Aşağıdaki şekilleri inceleyiniz. Verilen kenar bilgisinin hangi şekle ait olduğunu işaretleyiniz.



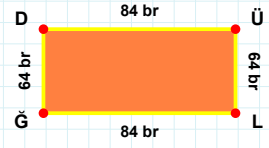
|ÖD| kenarı hangi şeklin kenarıdır?

- ☐ Üçgen
☐ Dikdörtgen
☐ Kare



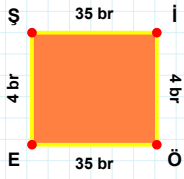
|ÖŞ| kenarı hangi şeklin kenarıdır?

- ☐ Dikdörtgen
☐ Kare
☐ Üçgen



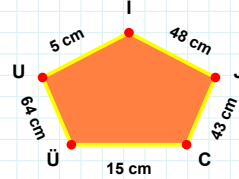
|SÇ| kenarı hangi şeklin kenarıdır?

- ☐ Dikdörtgen
☐ Kare
☐ Üçgen



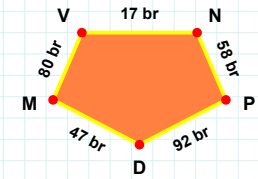
|PD| kenarı hangi şeklin kenarıdır?

- ☐ Beşgen
☐ Ters Beşgen
☐ Dikey Dikdörtgen



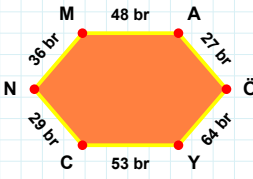
|Şİ| kenarı hangi şeklin kenarıdır?

- ☐ Beşgen
☐ Ters Beşgen
☐ Dikey Dikdörtgen



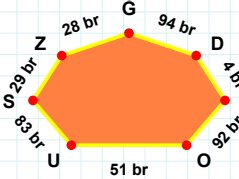
64 cm hangi şeklin kenarıdır?

- ☐ Beşgen
☐ Dikey Dikdörtgen
☐ Ters Beşgen



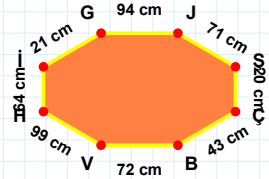
|BV| kenarı hangi şeklin kenarıdır?

- ☐ Yedigen
☐ Altıgen
☐ Sekizgen



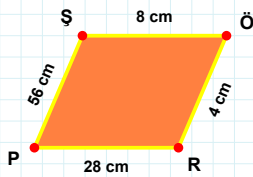
|AÖ| kenarı hangi şeklin kenarıdır?

- ☐ Sekizgen
☐ Altıgen
☐ Yedigen



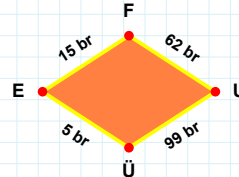
51 br hangi şeklin kenarıdır?

- ☐ Sekizgen
☐ Yedigen
☐ Altıgen



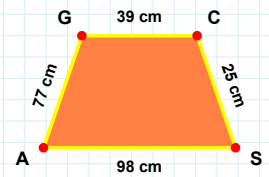
5 br hangi şeklin kenarıdır?

- ☐ Paralelkenar
☐ Eşkenar Dörtgen
☐ Yamuk



|SA| kenarı hangi şeklin kenarıdır?

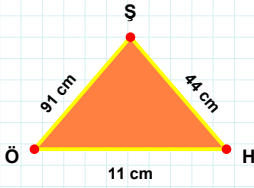
- ☐ Paralelkenar
☐ Yamuk
☐ Eşkenar Dörtgen



|RP| kenarı hangi şeklin kenarıdır?

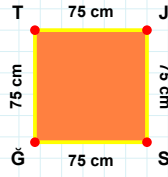
- ☐ Yamuk
☐ Eşkenar Dörtgen
☐ Paralelkenar

SORU: Aşağıdaki şekilleri inceleyiniz. Verilen kenar bilgisinin hangi şekle ait olduğunu işaretleyiniz.



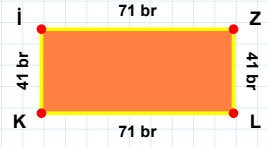
|ÖZ| kenarı hangi şeklin kenarıdır?

- ☐ Üçgen
☐ Kare
☐ Dikdörtgen



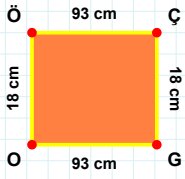
|ÖH| kenarı hangi şeklin kenarıdır?

- ☐ Kare
☐ Dikdörtgen
☐ Üçgen



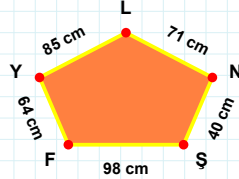
|SÖ| kenarı hangi şeklin kenarıdır?

- ☐ Dikdörtgen
☐ Kare
☐ Üçgen



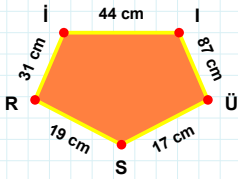
71 cm hangi şeklin kenarıdır?

- ☐ Beşgen
☐ Ters Beşgen
☐ Dikey Dikdörtgen



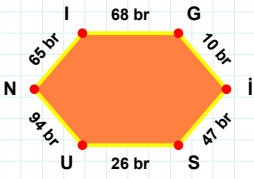
|Rİ| kenarı hangi şeklin kenarıdır?

- ☐ Beşgen
☐ Ters Beşgen
☐ Dikey Dikdörtgen



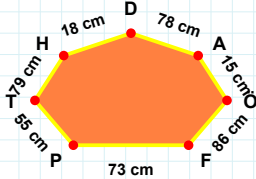
|ÖÖ| kenarı hangi şeklin kenarıdır?

- ☐ Ters Beşgen
☐ Dikey Dikdörtgen
☐ Beşgen



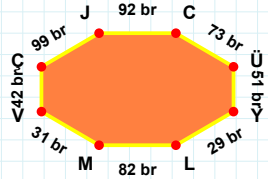
73 cm hangi şeklin kenarıdır?

- ☐ Yedigen
☐ Sekizgen
☐ Altıgen



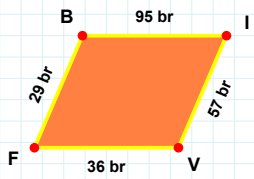
|CÜ| kenarı hangi şeklin kenarıdır?

- ☐ Yedigen
☐ Sekizgen
☐ Altıgen



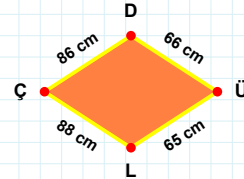
|İG| kenarı hangi şeklin kenarıdır?

- ☐ Sekizgen
☐ Altıgen
☐ Yedigen



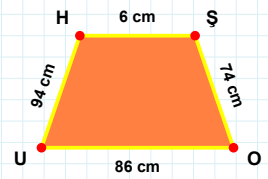
|ŞO| kenarı hangi şeklin kenarıdır?

- ☐ Eşkenar Dörtgen
☐ Yamuk
☐ Paralelkenar



|Bİ| kenarı hangi şeklin kenarıdır?

- ☐ Eşkenar Dörtgen
☐ Yamuk
☐ Paralelkenar



65 cm hangi şeklin kenarıdır?

- ☐ Paralelkenar
☐ Eşkenar Dörtgen
☐ Yamuk

SÜREÇ ODAKLI DEĞERLENDİRME ÖLÇEĞİ

Geliştirilmeli (0-109)	İyi (110-187)	Çok İyi (188-265)	Mükemmel (266-312)
<input type="checkbox"/>	<input type="checkbox"/>	<input type="checkbox"/>	<input type="checkbox"/>

Hazırlayan:

Bu bölüme sınıfınızın ilgili kazanıma yönelik genel durumuna ilişkin gözlem ve izlenimlerinizi, öğrencilerinizin bu kazanımla ilgili öğrenme eksikliklerini ve bu eksikliklerin giderilmesi amacıyla yaptığınız/yapmayı planladığınız faaliyetleri not edebilirsiniz.

No	Adı - Soyadı	Toplam Puan	Değerlendirme
1			
2			
3			
4			
5			
6			
7			
8			
9			
10			
11			
12			
13			
14			
15			
16			
17			
18			
19			
20			
21			
22			
23			
24			
25			
26			
27			
28			
29			
30			
31			
32			
33			
34			
35			

Hazırlayan: