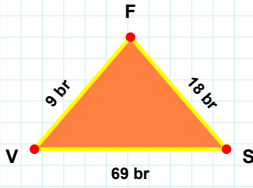
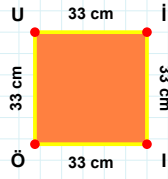


**SORU:** Aşağıdaki şekilleri inceleyiniz. Verilen kenar bilgisinin hangi şekle ait olduğunu işaretleyiniz.



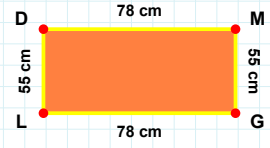
[GL] kenarı hangi şeklin kenarıdır?

- ☐ Kare  
☐ Dikdörtgen  
☐ Üçgen



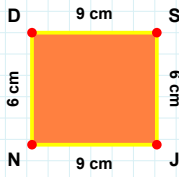
[SF] kenarı hangi şeklin kenarıdır?

- ☐ Dikdörtgen  
☐ Üçgen  
☐ Kare



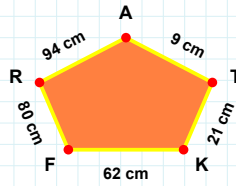
[İÖ] kenarı hangi şeklin kenarıdır?

- ☐ Kare  
☐ Üçgen  
☐ Dikdörtgen



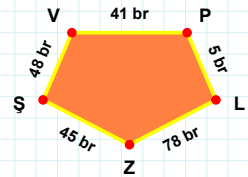
94 cm hangi şeklin kenarıdır?

- ☐ Ters Beşgen  
☐ Dikey Dikdörtgen  
☐ Beşgen



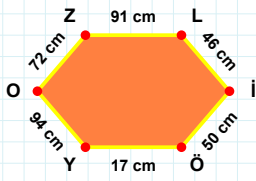
[SV] kenarı hangi şeklin kenarıdır?

- ☐ Ters Beşgen  
☐ Beşgen  
☐ Dikey Dikdörtgen



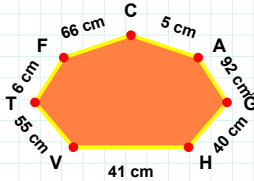
[ND] kenarı hangi şeklin kenarıdır?

- ☐ Dikey Dikdörtgen  
☐ Ters Beşgen  
☐ Beşgen



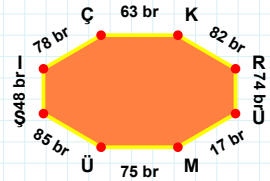
41 cm hangi şeklin kenarıdır?

- ☐ Sekizgen  
☐ Altıgen  
☐ Yedigen



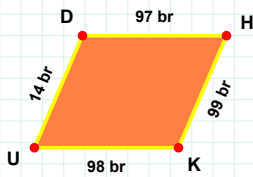
[Şİ] kenarı hangi şeklin kenarıdır?

- ☐ Sekizgen  
☐ Altıgen  
☐ Yedigen



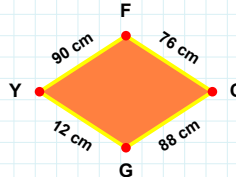
[İÖ] kenarı hangi şeklin kenarıdır?

- ☐ Sekizgen  
☐ Altıgen  
☐ Yedigen



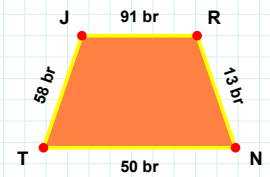
88 cm hangi şeklin kenarıdır?

- ☐ Eşkenar Dörtgen  
☐ Paralelkenar  
☐ Yamuk



[RN] kenarı hangi şeklin kenarıdır?

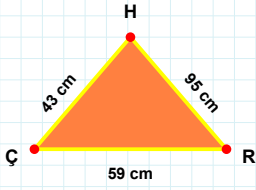
- ☐ Yamuk  
☐ Eşkenar Dörtgen  
☐ Paralelkenar



[HK] kenarı hangi şeklin kenarıdır?

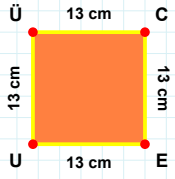
- ☐ Paralelkenar  
☐ Eşkenar Dörtgen  
☐ Yamuk

**SORU:** Aşağıdaki şekilleri inceleyiniz. Verilen kenar bilgisinin hangi şekle ait olduğunu işaretleyiniz.



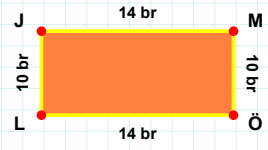
**[CE] kenarı hangi şeklin kenarıdır?**

- ☐ Kare  
☐ Dikdörtgen  
☐ Üçgen



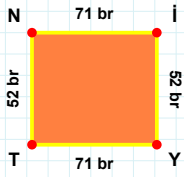
**[LJ] kenarı hangi şeklin kenarıdır?**

- ☐ Kare  
☐ Dikdörtgen  
☐ Üçgen



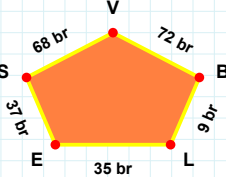
**[RH] kenarı hangi şeklin kenarıdır?**

- ☐ Üçgen  
☐ Kare  
☐ Dikdörtgen



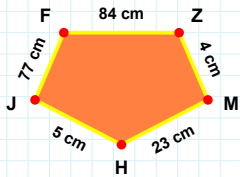
**68 br hangi şeklin kenarıdır?**

- ☐ Dikey Dikdörtgen  
☐ Beşgen  
☐ Ters Beşgen



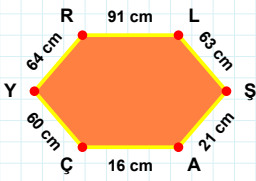
**[FZ] kenarı hangi şeklin kenarıdır?**

- ☐ Dikey Dikdörtgen  
☐ Ters Beşgen  
☐ Beşgen



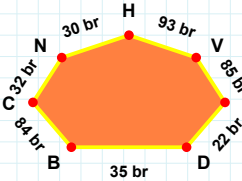
**[Nİ] kenarı hangi şeklin kenarıdır?**

- ☐ Beşgen  
☐ Dikey Dikdörtgen  
☐ Ters Beşgen



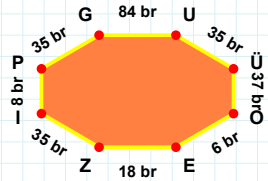
**[IP] kenarı hangi şeklin kenarıdır?**

- ☐ Yedigen  
☐ Altıgen  
☐ Sekizgen



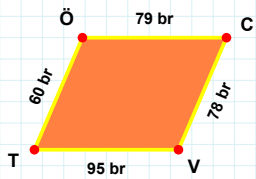
**[LS] kenarı hangi şeklin kenarıdır?**

- ☐ Yedigen  
☐ Altıgen  
☐ Sekizgen



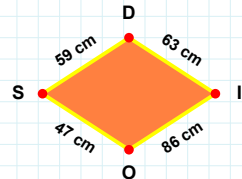
**85 br hangi şeklin kenarıdır?**

- ☐ Sekizgen  
☐ Yedigen  
☐ Altıgen



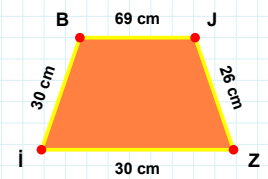
**[JZ] kenarı hangi şeklin kenarıdır?**

- ☐ Paralelkenar  
☐ Yamuk  
☐ Eşkenar Dörtgen



**[TÖ] kenarı hangi şeklin kenarıdır?**

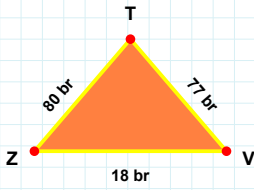
- ☐ Eşkenar Dörtgen  
☐ Paralelkenar  
☐ Yamuk



**59 cm hangi şeklin kenarıdır?**

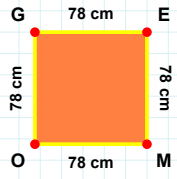
- ☐ Eşkenar Dörtgen  
☐ Yamuk  
☐ Paralelkenar

**SORU:** Aşağıdaki şekilleri inceleyiniz. Verilen kenar bilgisinin hangi şekle ait olduğunu işaretleyiniz.



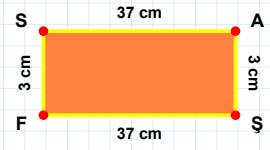
**[FS]** kenarı hangi şeklin kenarıdır?

- ☐ Üçgen  
☐ Kare  
☐ Dikdörtgen



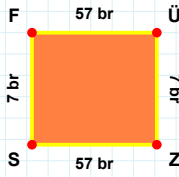
**[ZV]** kenarı hangi şeklin kenarıdır?

- ☐ Üçgen  
☐ Dikdörtgen  
☐ Kare



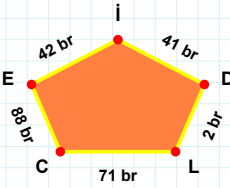
**[EM]** kenarı hangi şeklin kenarıdır?

- ☐ Dikdörtgen  
☐ Kare  
☐ Üçgen



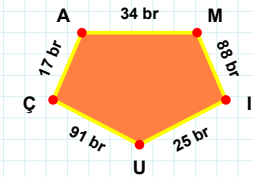
**[IU]** kenarı hangi şeklin kenarıdır?

- ☐ Dikey Dikdörtgen  
☐ Ters Beşgen  
☐ Beşgen



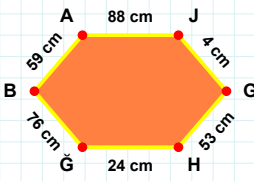
**[ÜZ]** kenarı hangi şeklin kenarıdır?

- ☐ Dikey Dikdörtgen  
☐ Ters Beşgen  
☐ Beşgen



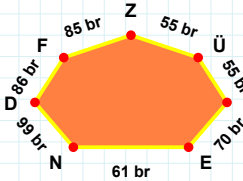
**71 br** hangi şeklin kenarıdır?

- ☐ Dikey Dikdörtgen  
☐ Beşgen  
☐ Ters Beşgen



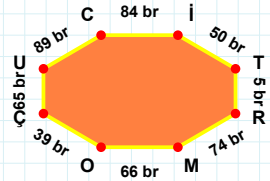
**85 br** hangi şeklin kenarıdır?

- ☐ Altıgen  
☐ Yediggen  
☐ Sekizgen



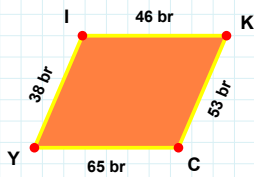
**[RM]** kenarı hangi şeklin kenarıdır?

- ☐ Sekizgen  
☐ Altıgen  
☐ Yediggen



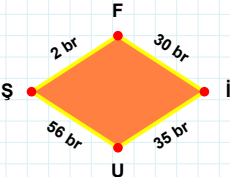
**[HG]** kenarı hangi şeklin kenarıdır?

- ☐ Altıgen  
☐ Sekizgen  
☐ Yediggen



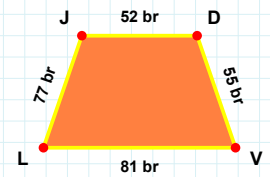
**2 br** hangi şeklin kenarıdır?

- ☐ Yamuk  
☐ Eşkenar Dörtgen  
☐ Paralelkenar



**[JD]** kenarı hangi şeklin kenarıdır?

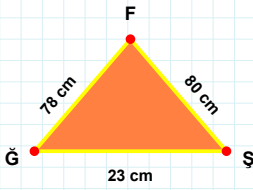
- ☐ Yamuk  
☐ Paralelkenar  
☐ Eşkenar Dörtgen



**[CY]** kenarı hangi şeklin kenarıdır?

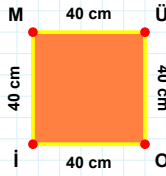
- ☐ Yamuk  
☐ Paralelkenar  
☐ Eşkenar Dörtgen

**SORU:** Aşağıdaki şekilleri inceleyiniz. Verilen kenar bilgisinin hangi şekle ait olduğunu işaretleyiniz.



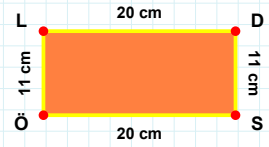
|Öİ| kenarı hangi şeklin kenarıdır?

- ☐ Kare  
☐ Üçgen  
☐ Dikdörtgen



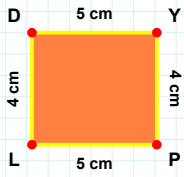
|DS| kenarı hangi şeklin kenarıdır?

- ☐ Üçgen  
☐ Dikdörtgen  
☐ Kare



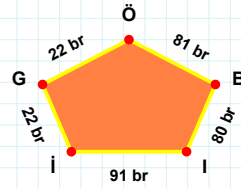
|ŞF| kenarı hangi şeklin kenarıdır?

- ☐ Kare  
☐ Üçgen  
☐ Dikdörtgen



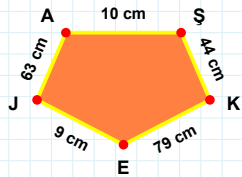
|JA| kenarı hangi şeklin kenarıdır?

- ☐ Beşgen  
☐ Dikey Dikdörtgen  
☐ Ters Beşgen



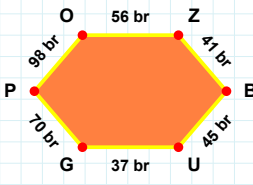
|LD| kenarı hangi şeklin kenarıdır?

- ☐ Ters Beşgen  
☐ Beşgen  
☐ Dikey Dikdörtgen



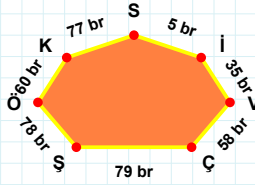
81 br hangi şeklin kenarıdır?

- ☐ Ters Beşgen  
☐ Beşgen  
☐ Dikey Dikdörtgen



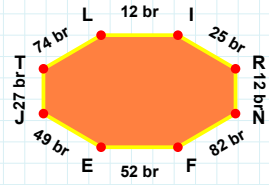
|FE| kenarı hangi şeklin kenarıdır?

- ☐ Sekizgen  
☐ Altıgen  
☐ Yedigen



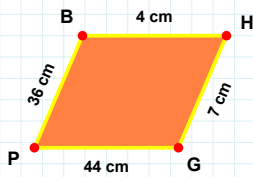
|OZ| kenarı hangi şeklin kenarıdır?

- ☐ Altıgen  
☐ Sekizgen  
☐ Yedigen



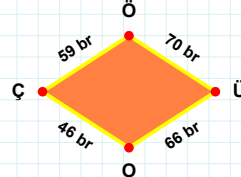
35 br hangi şeklin kenarıdır?

- ☐ Altıgen  
☐ Sekizgen  
☐ Yedigen



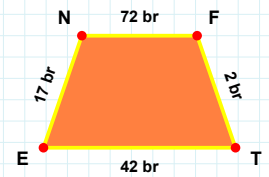
70 br hangi şeklin kenarıdır?

- ☐ Paralelkenar  
☐ Yamuk  
☐ Eşkenar Dörtgen



|FT| kenarı hangi şeklin kenarıdır?

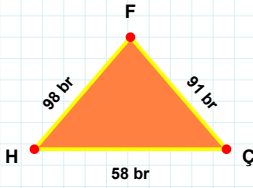
- ☐ Yamuk  
☐ Paralelkenar  
☐ Eşkenar Dörtgen



|BH| kenarı hangi şeklin kenarıdır?

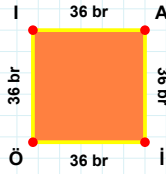
- ☐ Eşkenar Dörtgen  
☐ Yamuk  
☐ Paralelkenar

**SORU:** Aşağıdaki şekilleri inceleyiniz. Verilen kenar bilgisinin hangi şekle ait olduğunu işaretleyiniz.



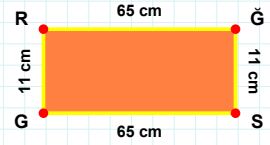
|ĞS| kenarı hangi şeklin kenarıdır?

- ☐ Kare  
☐ Üçgen  
☐ Dikdörtgen



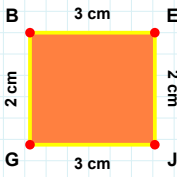
|FH| kenarı hangi şeklin kenarıdır?

- ☐ Dikdörtgen  
☐ Kare  
☐ Üçgen



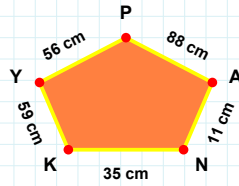
|Aİ| kenarı hangi şeklin kenarıdır?

- ☐ Kare  
☐ Üçgen  
☐ Dikdörtgen



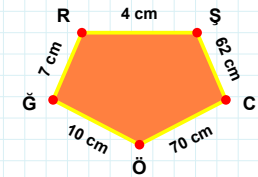
56 cm hangi şeklin kenarıdır?

- ☐ Ters Beşgen  
☐ Beşgen  
☐ Dikey Dikdörtgen



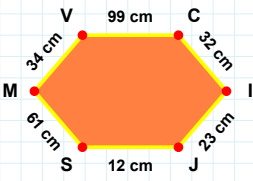
|ŞC| kenarı hangi şeklin kenarıdır?

- ☐ Dikey Dikdörtgen  
☐ Beşgen  
☐ Ters Beşgen



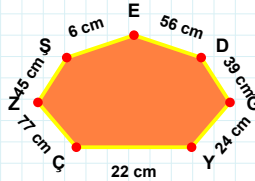
|EJ| kenarı hangi şeklin kenarıdır?

- ☐ Dikey Dikdörtgen  
☐ Beşgen  
☐ Ters Beşgen



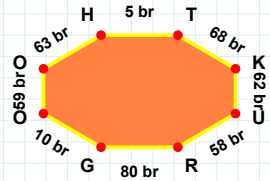
|OH| kenarı hangi şeklin kenarıdır?

- ☐ Altıgen  
☐ Yediggen  
☐ Sekizgen



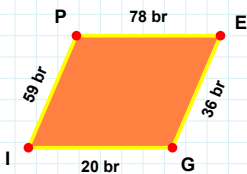
|IJ| kenarı hangi şeklin kenarıdır?

- ☐ Altıgen  
☐ Yediggen  
☐ Sekizgen



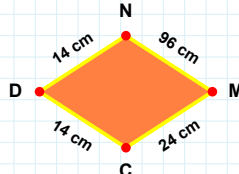
22 cm hangi şeklin kenarıdır?

- ☐ Yediggen  
☐ Altıgen  
☐ Sekizgen



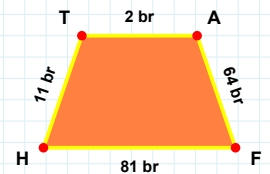
|AF| kenarı hangi şeklin kenarıdır?

- ☐ Paralelkenar  
☐ Yamuk  
☐ Eşkenar Dörtgen



|IP| kenarı hangi şeklin kenarıdır?

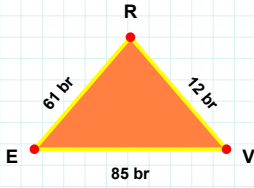
- ☐ Eşkenar Dörtgen  
☐ Paralelkenar  
☐ Yamuk



24 cm hangi şeklin kenarıdır?

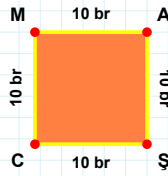
- ☐ Yamuk  
☐ Paralelkenar  
☐ Eşkenar Dörtgen

**SORU:** Aşağıdaki şekilleri inceleyiniz. Verilen kenar bilgisinin hangi şekle ait olduğunu işaretleyiniz.



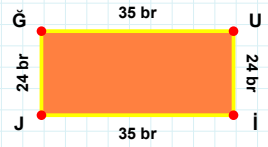
**[MA] kenarı hangi şeklin kenarıdır?**

- ☐ Dikdörtgen  
☐ Kare  
☐ Üçgen



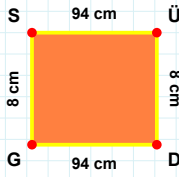
**[GÜ] kenarı hangi şeklin kenarıdır?**

- ☐ Dikdörtgen  
☐ Kare  
☐ Üçgen



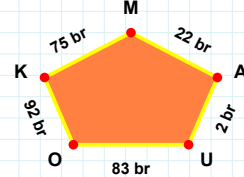
**[VR] kenarı hangi şeklin kenarıdır?**

- ☐ Üçgen  
☐ Kare  
☐ Dikdörtgen



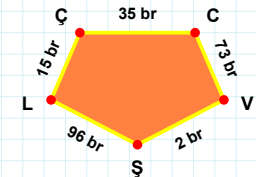
**[CV] kenarı hangi şeklin kenarıdır?**

- ☐ Dikey Dikdörtgen  
☐ Beşgen  
☐ Ters Beşgen



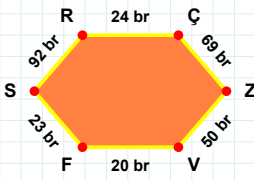
**[SÜ] kenarı hangi şeklin kenarıdır?**

- ☐ Beşgen  
☐ Dikey Dikdörtgen  
☐ Ters Beşgen



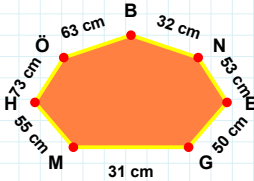
**92 br hangi şeklin kenarıdır?**

- ☐ Beşgen  
☐ Dikey Dikdörtgen  
☐ Ters Beşgen



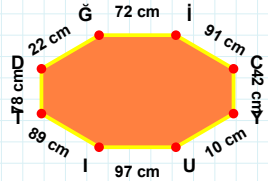
**31 cm hangi şeklin kenarıdır?**

- ☐ Altıgen  
☐ Yediggen  
☐ Sekizgen



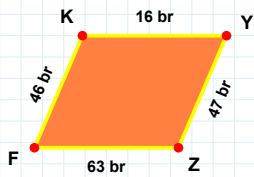
**[DŞ] kenarı hangi şeklin kenarıdır?**

- ☐ Yediggen  
☐ Sekizgen  
☐ Altıgen



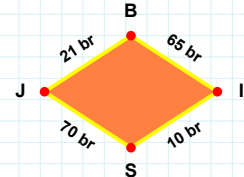
**[ÇZ] kenarı hangi şeklin kenarıdır?**

- ☐ Yediggen  
☐ Altıgen  
☐ Sekizgen



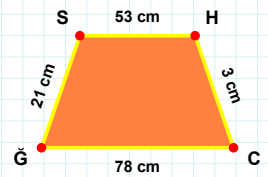
**[CŞ] kenarı hangi şeklin kenarıdır?**

- ☐ Eşkenar Dörtgen  
☐ Yamuk  
☐ Paralelkenar



**[ZF] kenarı hangi şeklin kenarıdır?**

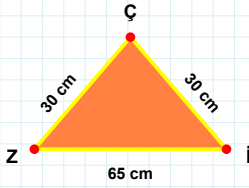
- ☐ Yamuk  
☐ Eşkenar Dörtgen  
☐ Paralelkenar



**70 br hangi şeklin kenarıdır?**

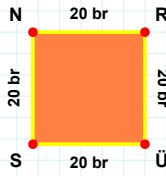
- ☐ Yamuk  
☐ Eşkenar Dörtgen  
☐ Paralelkenar

**SORU:** Aşağıdaki şekilleri inceleyiniz. Verilen kenar bilgisinin hangi şekle ait olduğunu işaretleyiniz.



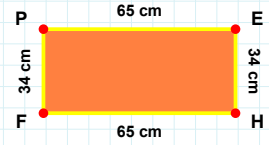
**[SN] kenarı hangi şeklin kenarıdır?**

- ☐ Üçgen  
☐ Kare  
☐ Dikdörtgen



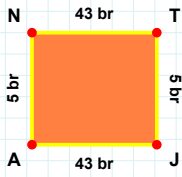
**[PE] kenarı hangi şeklin kenarıdır?**

- ☐ Kare  
☐ Üçgen  
☐ Dikdörtgen



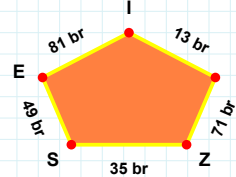
**[Zİ] kenarı hangi şeklin kenarıdır?**

- ☐ Dikdörtgen  
☐ Kare  
☐ Üçgen



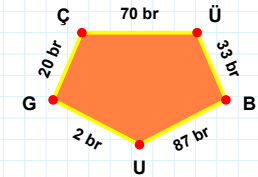
**71 br hangi şeklin kenarıdır?**

- ☐ Ters Beşgen  
☐ Dikey Dikdörtgen  
☐ Beşgen



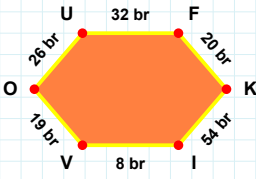
**[ÜB] kenarı hangi şeklin kenarıdır?**

- ☐ Dikey Dikdörtgen  
☐ Beşgen  
☐ Ters Beşgen



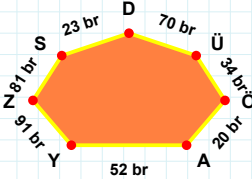
**[NT] kenarı hangi şeklin kenarıdır?**

- ☐ Dikey Dikdörtgen  
☐ Ters Beşgen  
☐ Beşgen



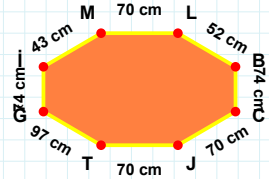
**[İM] kenarı hangi şeklin kenarıdır?**

- ☐ Sekizgen  
☐ Altıgen  
☐ Yediggen



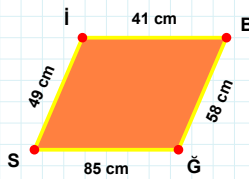
**[VO] kenarı hangi şeklin kenarıdır?**

- ☐ Yediggen  
☐ Sekizgen  
☐ Altıgen



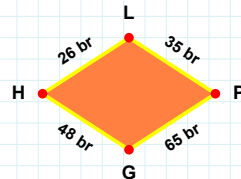
**81 br hangi şeklin kenarıdır?**

- ☐ Altıgen  
☐ Yediggen  
☐ Sekizgen



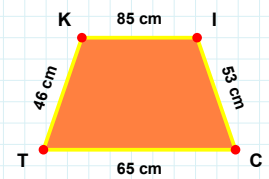
**35 br hangi şeklin kenarıdır?**

- ☐ Eşkenar Dörtgen  
☐ Paralelkenar  
☐ Yamuk



**[CT] kenarı hangi şeklin kenarıdır?**

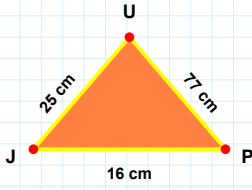
- ☐ Yamuk  
☐ Eşkenar Dörtgen  
☐ Paralelkenar



**[BĞ] kenarı hangi şeklin kenarıdır?**

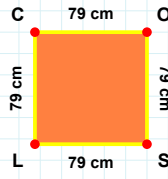
- ☐ Eşkenar Dörtgen  
☐ Paralelkenar  
☐ Yamuk

**SORU:** Aşağıdaki şekilleri inceleyiniz. Verilen kenar bilgisinin hangi şekle ait olduğunu işaretleyiniz.



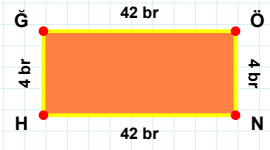
**[JÜ] kenarı hangi şeklin kenarıdır?**

- ☐ Dikdörtgen  
☐ Üçgen  
☐ Kare



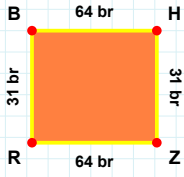
**[JP] kenarı hangi şeklin kenarıdır?**

- ☐ Üçgen  
☐ Dikdörtgen  
☐ Kare



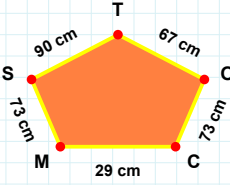
**[SL] kenarı hangi şeklin kenarıdır?**

- ☐ Dikdörtgen  
☐ Kare  
☐ Üçgen



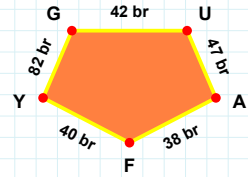
**[AF] kenarı hangi şeklin kenarıdır?**

- ☐ Beşgen  
☐ Ters Beşgen  
☐ Dikey Dikdörtgen



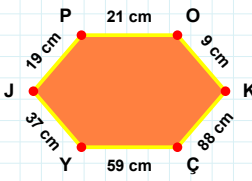
**[RB] kenarı hangi şeklin kenarıdır?**

- ☐ Dikey Dikdörtgen  
☐ Ters Beşgen  
☐ Beşgen



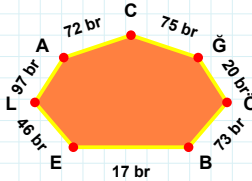
**29 cm hangi şeklin kenarıdır?**

- ☐ Dikey Dikdörtgen  
☐ Beşgen  
☐ Ters Beşgen



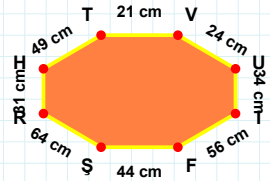
**[HT] kenarı hangi şeklin kenarıdır?**

- ☐ Yedigen  
☐ Altıgen  
☐ Sekizgen



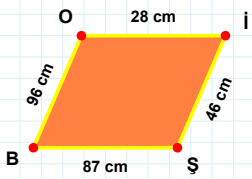
**[KÇ] kenarı hangi şeklin kenarıdır?**

- ☐ Yedigen  
☐ Altıgen  
☐ Sekizgen



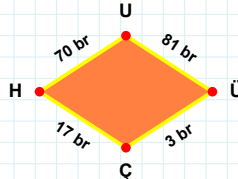
**75 br hangi şeklin kenarıdır?**

- ☐ Altıgen  
☐ Sekizgen  
☐ Yedigen



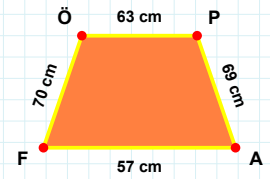
**[AF] kenarı hangi şeklin kenarıdır?**

- ☐ Eşkenar Dörtgen  
☐ Paralelkenar  
☐ Yamuk



**[Öİ] kenarı hangi şeklin kenarıdır?**

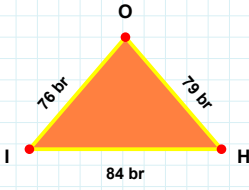
- ☐ Paralelkenar  
☐ Eşkenar Dörtgen  
☐ Yamuk



**70 br hangi şeklin kenarıdır?**

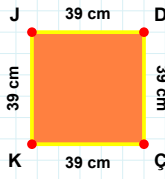
- ☐ Eşkenar Dörtgen  
☐ Paralelkenar  
☐ Yamuk

**SORU:** Aşağıdaki şekilleri inceleyiniz. Verilen kenar bilgisinin hangi şekle ait olduğunu işaretleyiniz.



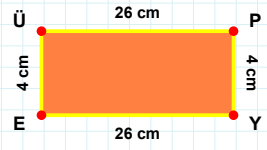
**[PY] kenarı hangi şeklin kenarıdır?**

- ☐ Üçgen  
☐ Dikdörtgen  
☐ Kare



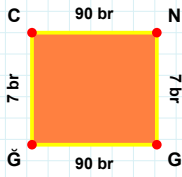
**[HO] kenarı hangi şeklin kenarıdır?**

- ☐ Dikdörtgen  
☐ Kare  
☐ Üçgen



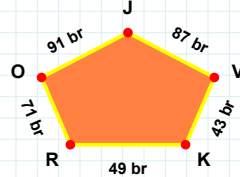
**[JD] kenarı hangi şeklin kenarıdır?**

- ☐ Kare  
☐ Üçgen  
☐ Dikdörtgen



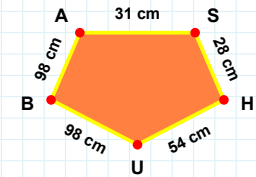
**49 br hangi şeklin kenarıdır?**

- ☐ Dikey Dikdörtgen  
☐ Beşgen  
☐ Ters Beşgen



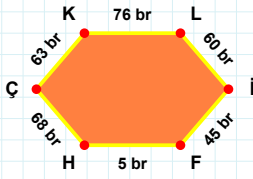
**[UB] kenarı hangi şeklin kenarıdır?**

- ☐ Beşgen  
☐ Ters Beşgen  
☐ Dikey Dikdörtgen



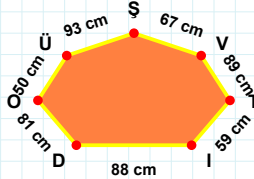
**[GĞ] kenarı hangi şeklin kenarıdır?**

- ☐ Dikey Dikdörtgen  
☐ Beşgen  
☐ Ters Beşgen



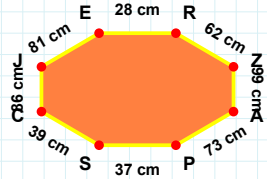
**[ER] kenarı hangi şeklin kenarıdır?**

- ☐ Sekizgen  
☐ Altıgen  
☐ Yedigen



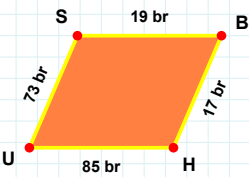
**[İF] kenarı hangi şeklin kenarıdır?**

- ☐ Sekizgen  
☐ Altıgen  
☐ Yedigen



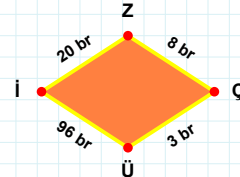
**59 cm hangi şeklin kenarıdır?**

- ☐ Yedigen  
☐ Sekizgen  
☐ Altıgen



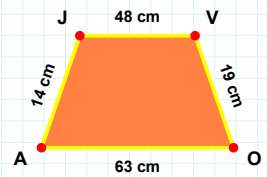
**[VO] kenarı hangi şeklin kenarıdır?**

- ☐ Paralelkenar  
☐ Yamuk  
☐ Eşkenar Dörtgen



**[US] kenarı hangi şeklin kenarıdır?**

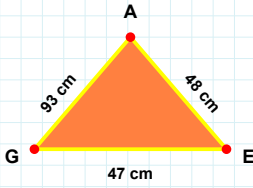
- ☐ Yamuk  
☐ Eşkenar Dörtgen  
☐ Paralelkenar



**3 br hangi şeklin kenarıdır?**

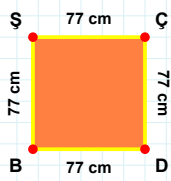
- ☐ Paralelkenar  
☐ Yamuk  
☐ Eşkenar Dörtgen

**SORU:** Aşağıdaki şekilleri inceleyiniz. Verilen kenar bilgisinin hangi şekle ait olduğunu işaretleyiniz.



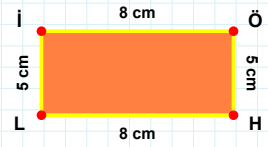
**|BŞ| kenarı hangi şeklin kenarıdır?**

- ☐ Dikdörtgen  
☐ Üçgen  
☐ Kare



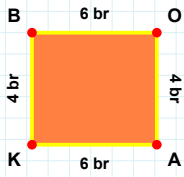
**|Lİ| kenarı hangi şeklin kenarıdır?**

- ☐ Dikdörtgen  
☐ Üçgen  
☐ Kare



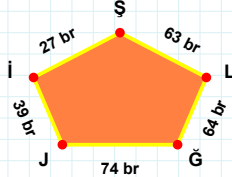
**|GE| kenarı hangi şeklin kenarıdır?**

- ☐ Üçgen  
☐ Kare  
☐ Dikdörtgen



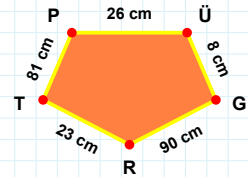
**27 br hangi şeklin kenarıdır?**

- ☐ Beşgen  
☐ Ters Beşgen  
☐ Dikey Dikdörtgen



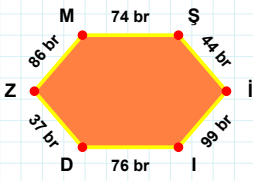
**|GR| kenarı hangi şeklin kenarıdır?**

- ☐ Beşgen  
☐ Ters Beşgen  
☐ Dikey Dikdörtgen



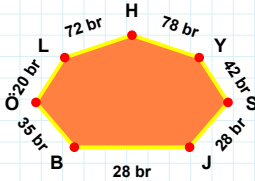
**|AK| kenarı hangi şeklin kenarıdır?**

- ☐ Dikey Dikdörtgen  
☐ Ters Beşgen  
☐ Beşgen



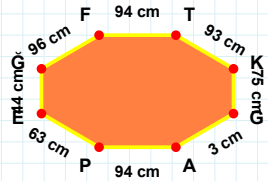
**78 br hangi şeklin kenarıdır?**

- ☐ Yedigen  
☐ Sekizgen  
☐ Altıgen



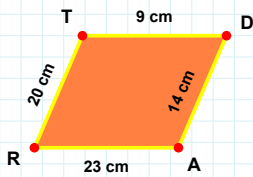
**|KG| kenarı hangi şeklin kenarıdır?**

- ☐ Altıgen  
☐ Yedigen  
☐ Sekizgen



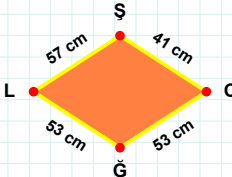
**|Şİ| kenarı hangi şeklin kenarıdır?**

- ☐ Sekizgen  
☐ Altıgen  
☐ Yedigen



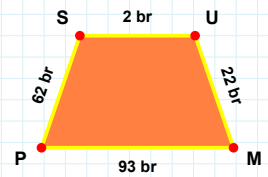
**41 cm hangi şeklin kenarıdır?**

- ☐ Paralelkenar  
☐ Yamuk  
☐ Eşkenar Dörtgen



**|MP| kenarı hangi şeklin kenarıdır?**

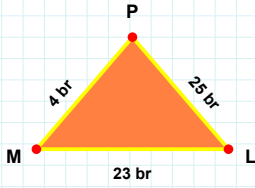
- ☐ Yamuk  
☐ Paralelkenar  
☐ Eşkenar Dörtgen



**|AR| kenarı hangi şeklin kenarıdır?**

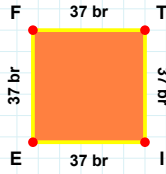
- ☐ Eşkenar Dörtgen  
☐ Paralelkenar  
☐ Yamuk

**SORU:** Aşağıdaki şekilleri inceleyiniz. Verilen kenar bilgisinin hangi şekle ait olduğunu işaretleyiniz.



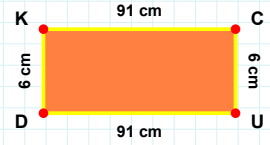
[EF] kenarı hangi şeklin kenarıdır?

- ☐ Üçgen  
☐ Dikdörtgen  
☐ Kare



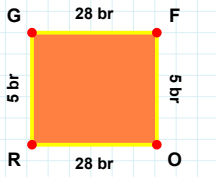
[UD] kenarı hangi şeklin kenarıdır?

- ☐ Kare  
☐ Üçgen  
☐ Dikdörtgen



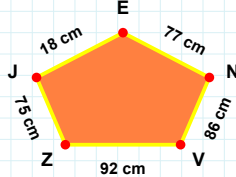
[PM] kenarı hangi şeklin kenarıdır?

- ☐ Kare  
☐ Üçgen  
☐ Dikdörtgen



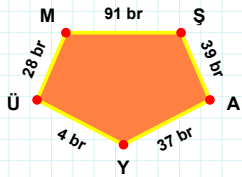
[AY] kenarı hangi şeklin kenarıdır?

- ☐ Dikey Dikdörtgen  
☐ Beşgen  
☐ Ters Beşgen



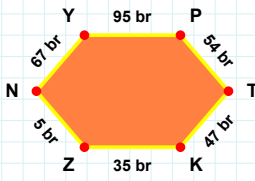
[FO] kenarı hangi şeklin kenarıdır?

- ☐ Ters Beşgen  
☐ Dikey Dikdörtgen  
☐ Beşgen



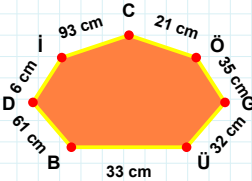
77 cm hangi şeklin kenarıdır?

- ☐ Beşgen  
☐ Ters Beşgen  
☐ Dikey Dikdörtgen



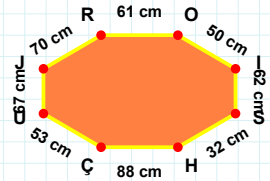
35 cm hangi şeklin kenarıdır?

- ☐ Yedigen  
☐ Altıgen  
☐ Sekizgen



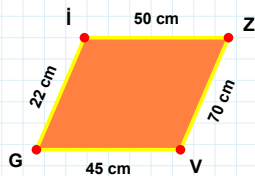
[SH] kenarı hangi şeklin kenarıdır?

- ☐ Yedigen  
☐ Sekizgen  
☐ Altıgen



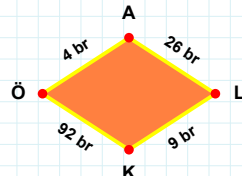
[YP] kenarı hangi şeklin kenarıdır?

- ☐ Yedigen  
☐ Sekizgen  
☐ Altıgen



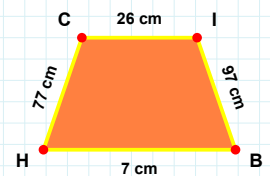
[BH] kenarı hangi şeklin kenarıdır?

- ☐ Yamuk  
☐ Paralelkenar  
☐ Eşkenar Dörtgen



[ZV] kenarı hangi şeklin kenarıdır?

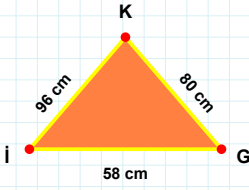
- ☐ Paralelkenar  
☐ Yamuk  
☐ Eşkenar Dörtgen



92 br hangi şeklin kenarıdır?

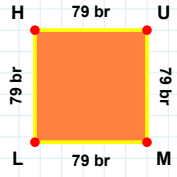
- ☐ Paralelkenar  
☐ Eşkenar Dörtgen  
☐ Yamuk

**SORU:** Aşağıdaki şekilleri inceleyiniz. Verilen kenar bilgisinin hangi şekle ait olduğunu işaretleyiniz.



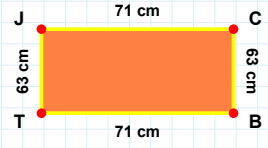
[TJ] kenarı hangi şeklin kenarıdır?

- ☐ Kare  
☐ Dikdörtgen  
☐ Üçgen



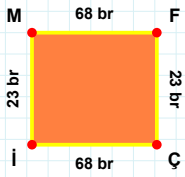
[JG] kenarı hangi şeklin kenarıdır?

- ☐ Üçgen  
☐ Dikdörtgen  
☐ Kare



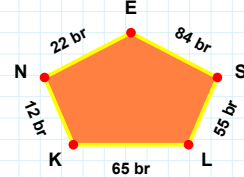
[UM] kenarı hangi şeklin kenarıdır?

- ☐ Kare  
☐ Dikdörtgen  
☐ Üçgen



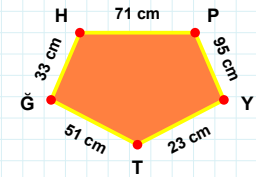
[HP] kenarı hangi şeklin kenarıdır?

- ☐ Beşgen  
☐ Dikey Dikdörtgen  
☐ Ters Beşgen



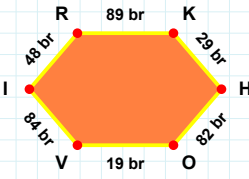
[İM] kenarı hangi şeklin kenarıdır?

- ☐ Ters Beşgen  
☐ Beşgen  
☐ Dikey Dikdörtgen



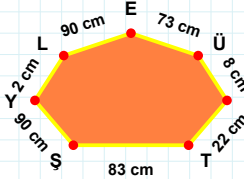
65 br hangi şeklin kenarıdır?

- ☐ Dikey Dikdörtgen  
☐ Ters Beşgen  
☐ Beşgen



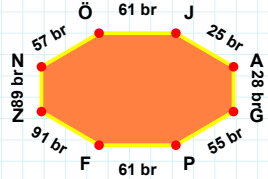
[ZN] kenarı hangi şeklin kenarıdır?

- ☐ Sekizgen  
☐ Yediggen  
☐ Altıgen



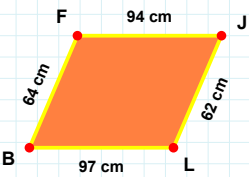
[OV] kenarı hangi şeklin kenarıdır?

- ☐ Altıgen  
☐ Yediggen  
☐ Sekizgen



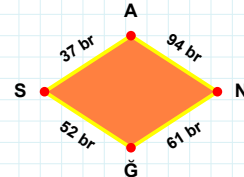
8 cm hangi şeklin kenarıdır?

- ☐ Altıgen  
☐ Yediggen  
☐ Sekizgen



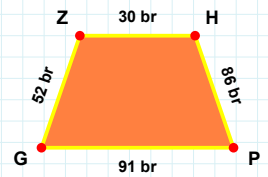
[ZH] kenarı hangi şeklin kenarıdır?

- ☐ Paralelkenar  
☐ Yamuk  
☐ Eşkenar Dörtgen



[JL] kenarı hangi şeklin kenarıdır?

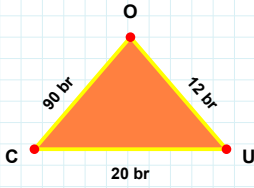
- ☐ Paralelkenar  
☐ Eşkenar Dörtgen  
☐ Yamuk



94 br hangi şeklin kenarıdır?

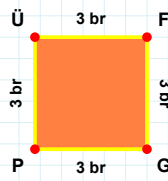
- ☐ Eşkenar Dörtgen  
☐ Yamuk  
☐ Paralelkenar

**SORU:** Aşağıdaki şekilleri inceleyiniz. Verilen kenar bilgisinin hangi şekle ait olduğunu işaretleyiniz.



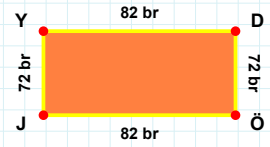
[ÜF] kenarı hangi şeklin kenarıdır?

- ☐ Üçgen  
☐ Dikdörtgen  
☐ Kare



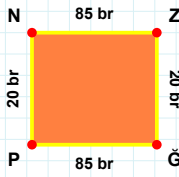
[JY] kenarı hangi şeklin kenarıdır?

- ☐ Üçgen  
☐ Dikdörtgen  
☐ Kare



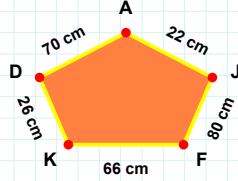
[UO] kenarı hangi şeklin kenarıdır?

- ☐ Üçgen  
☐ Kare  
☐ Dikdörtgen



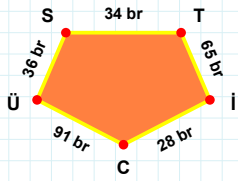
26 cm hangi şeklin kenarıdır?

- ☐ Beşgen  
☐ Dikey Dikdörtgen  
☐ Ters Beşgen



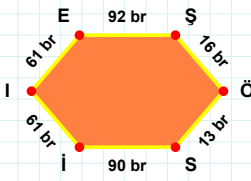
[ST] kenarı hangi şeklin kenarıdır?

- ☐ Ters Beşgen  
☐ Beşgen  
☐ Dikey Dikdörtgen



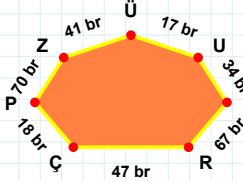
[NZ] kenarı hangi şeklin kenarıdır?

- ☐ Beşgen  
☐ Ters Beşgen  
☐ Dikey Dikdörtgen



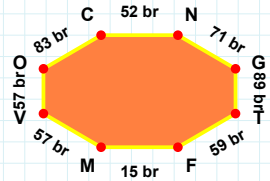
[MV] kenarı hangi şeklin kenarıdır?

- ☐ Altıgen  
☐ Yediggen  
☐ Sekizgen



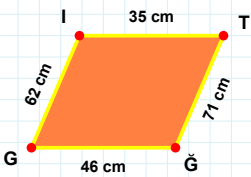
[İİ] kenarı hangi şeklin kenarıdır?

- ☐ Yediggen  
☐ Sekizgen  
☐ Altıgen



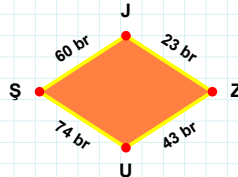
67 br hangi şeklin kenarıdır?

- ☐ Yediggen  
☐ Sekizgen  
☐ Altıgen



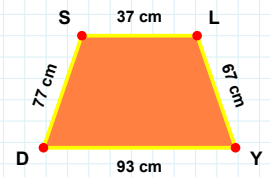
23 br hangi şeklin kenarıdır?

- ☐ Eşkenar Dörtgen  
☐ Paralelkenar  
☐ Yamuk



[DS] kenarı hangi şeklin kenarıdır?

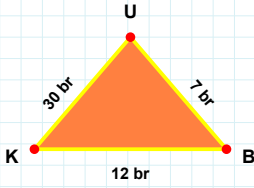
- ☐ Yamuk  
☐ Paralelkenar  
☐ Eşkenar Dörtgen



[GI] kenarı hangi şeklin kenarıdır?

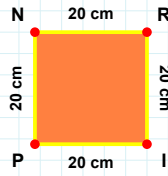
- ☐ Yamuk  
☐ Paralelkenar  
☐ Eşkenar Dörtgen

**SORU:** Aşağıdaki şekilleri inceleyiniz. Verilen kenar bilgisinin hangi şekle ait olduğunu işaretleyiniz.



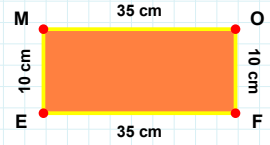
**[RI] kenarı hangi şeklin kenarıdır?**

- ☐ Kare  
☐ Dikdörtgen  
☐ Üçgen



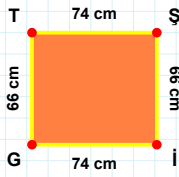
**[EM] kenarı hangi şeklin kenarıdır?**

- ☐ Üçgen  
☐ Kare  
☐ Dikdörtgen



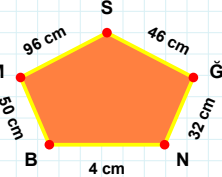
**[KB] kenarı hangi şeklin kenarıdır?**

- ☐ Üçgen  
☐ Kare  
☐ Dikdörtgen



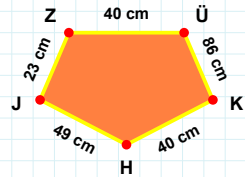
**96 cm hangi şeklin kenarıdır?**

- ☐ Ters Beşgen  
☐ Beşgen  
☐ Dikey Dikdörtgen



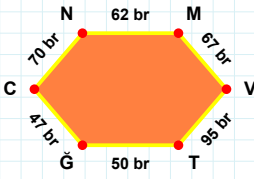
**[ZÜ] kenarı hangi şeklin kenarıdır?**

- ☐ Ters Beşgen  
☐ Beşgen  
☐ Dikey Dikdörtgen



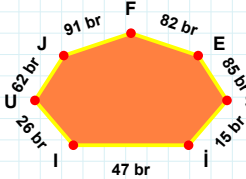
**[Şİ] kenarı hangi şeklin kenarıdır?**

- ☐ Beşgen  
☐ Dikey Dikdörtgen  
☐ Ters Beşgen



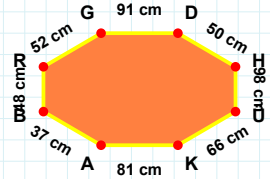
**91 br hangi şeklin kenarıdır?**

- ☐ Sekizgen  
☐ Yediggen  
☐ Altıgen



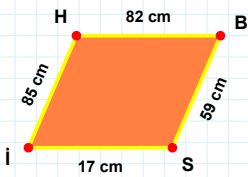
**[ÜK] kenarı hangi şeklin kenarıdır?**

- ☐ Yediggen  
☐ Altıgen  
☐ Sekizgen



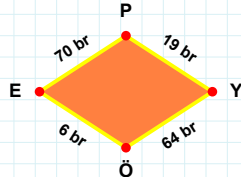
**[MV] kenarı hangi şeklin kenarıdır?**

- ☐ Yediggen  
☐ Altıgen  
☐ Sekizgen



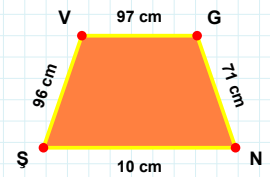
**64 br hangi şeklin kenarıdır?**

- ☐ Paralelkenar  
☐ Yamuk  
☐ Eşkenar Dörtgen



**[NS] kenarı hangi şeklin kenarıdır?**

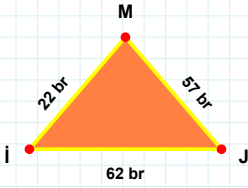
- ☐ Eşkenar Dörtgen  
☐ Yamuk  
☐ Paralelkenar



**[Sİ] kenarı hangi şeklin kenarıdır?**

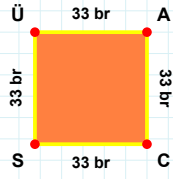
- ☐ Yamuk  
☐ Paralelkenar  
☐ Eşkenar Dörtgen

**SORU:** Aşağıdaki şekilleri inceleyiniz. Verilen kenar bilgisinin hangi şekle ait olduğunu işaretleyiniz.



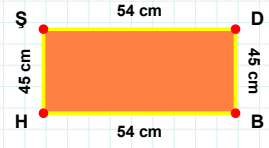
**[ÜA] kenarı hangi şeklin kenarıdır?**

- ☐ Kare  
☐ Üçgen  
☐ Dikdörtgen



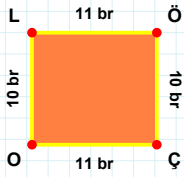
**[BH] kenarı hangi şeklin kenarıdır?**

- ☐ Üçgen  
☐ Dikdörtgen  
☐ Kare



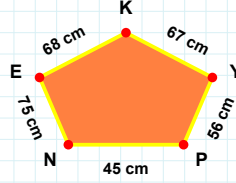
**[İM] kenarı hangi şeklin kenarıdır?**

- ☐ Kare  
☐ Dikdörtgen  
☐ Üçgen



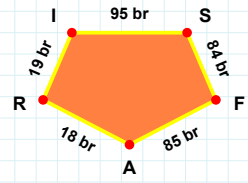
**[FA] kenarı hangi şeklin kenarıdır?**

- ☐ Beşgen  
☐ Dikey Dikdörtgen  
☐ Ters Beşgen



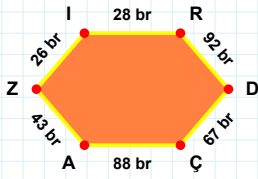
**[ÇO] kenarı hangi şeklin kenarıdır?**

- ☐ Ters Beşgen  
☐ Beşgen  
☐ Dikey Dikdörtgen



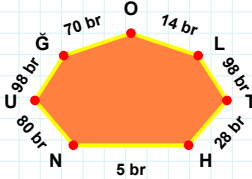
**68 cm hangi şeklin kenarıdır?**

- ☐ Dikey Dikdörtgen  
☐ Ters Beşgen  
☐ Beşgen



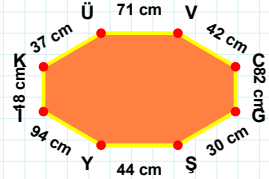
**80 br hangi şeklin kenarıdır?**

- ☐ Yedigen  
☐ Altıgen  
☐ Sekizgen



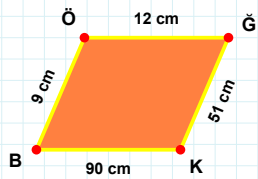
**[VC] kenarı hangi şeklin kenarıdır?**

- ☐ Altıgen  
☐ Sekizgen  
☐ Yedigen



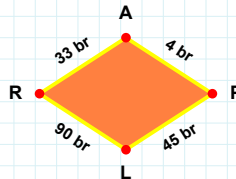
**[Zİ] kenarı hangi şeklin kenarıdır?**

- ☐ Sekizgen  
☐ Yedigen  
☐ Altıgen



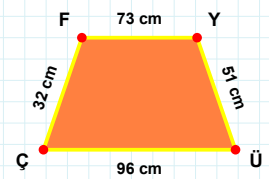
**[ÜÇ] kenarı hangi şeklin kenarıdır?**

- ☐ Paralelkenar  
☐ Eşkenar Dörtgen  
☐ Yamuk



**[ÇK] kenarı hangi şeklin kenarıdır?**

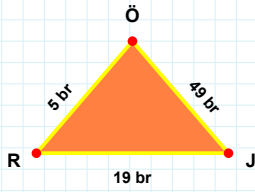
- ☐ Eşkenar Dörtgen  
☐ Paralelkenar  
☐ Yamuk



**45 br hangi şeklin kenarıdır?**

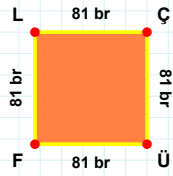
- ☐ Paralelkenar  
☐ Yamuk  
☐ Eşkenar Dörtgen

**SORU:** Aşağıdaki şekilleri inceleyiniz. Verilen kenar bilgisinin hangi şekle ait olduğunu işaretleyiniz.



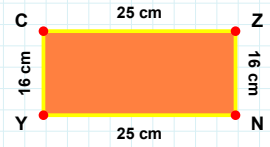
**[NY] kenarı hangi şeklin kenarıdır?**

- ☐ Dikdörtgen  
☐ Üçgen  
☐ Kare



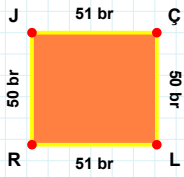
**[JÖ] kenarı hangi şeklin kenarıdır?**

- ☐ Üçgen  
☐ Dikdörtgen  
☐ Kare



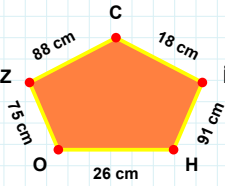
**[FL] kenarı hangi şeklin kenarıdır?**

- ☐ Kare  
☐ Dikdörtgen  
☐ Üçgen



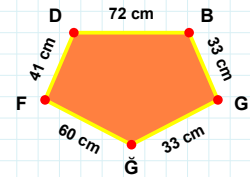
**[GF] kenarı hangi şeklin kenarıdır?**

- ☐ Dikey Dikdörtgen  
☐ Ters Beşgen  
☐ Beşgen



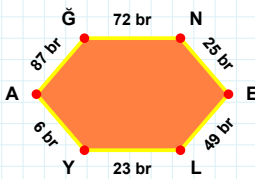
**[LR] kenarı hangi şeklin kenarıdır?**

- ☐ Dikey Dikdörtgen  
☐ Beşgen  
☐ Ters Beşgen



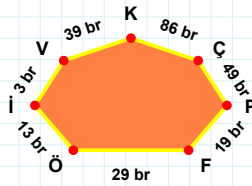
**18 cm hangi şeklin kenarıdır?**

- ☐ Dikey Dikdörtgen  
☐ Beşgen  
☐ Ters Beşgen



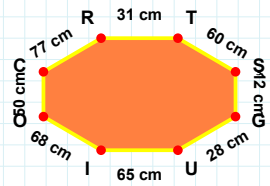
**[SG] kenarı hangi şeklin kenarıdır?**

- ☐ Altıgen  
☐ Yediggen  
☐ Sekizgen



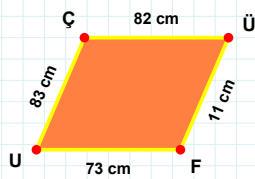
**[NE] kenarı hangi şeklin kenarıdır?**

- ☐ Altıgen  
☐ Yediggen  
☐ Sekizgen



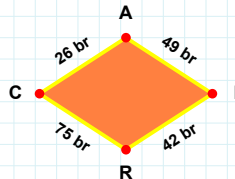
**29 br hangi şeklin kenarıdır?**

- ☐ Sekizgen  
☐ Altıgen  
☐ Yediggen



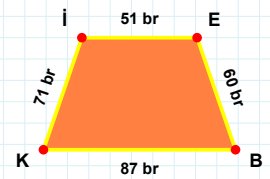
**75 br hangi şeklin kenarıdır?**

- ☐ Yamuk  
☐ Paralelkenar  
☐ Eşkenar Dörtgen



**[BK] kenarı hangi şeklin kenarıdır?**

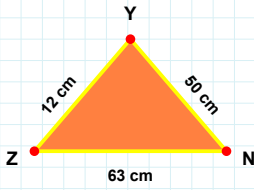
- ☐ Paralelkenar  
☐ Eşkenar Dörtgen  
☐ Yamuk



**[FU] kenarı hangi şeklin kenarıdır?**

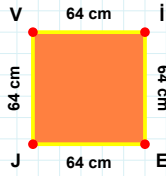
- ☐ Eşkenar Dörtgen  
☐ Paralelkenar  
☐ Yamuk

**SORU:** Aşağıdaki şekilleri inceleyiniz. Verilen kenar bilgisinin hangi şekle ait olduğunu işaretleyiniz.



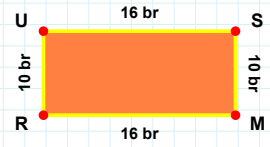
[US] kenarı hangi şeklin kenarıdır?

- ☐ Üçgen  
☐ Kare  
☐ Dikdörtgen



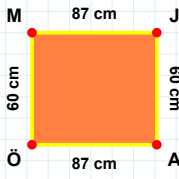
[YZ] kenarı hangi şeklin kenarıdır?

- ☐ Dikdörtgen  
☐ Kare  
☐ Üçgen



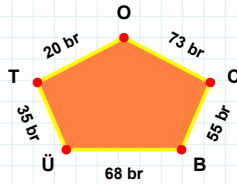
[VI] kenarı hangi şeklin kenarıdır?

- ☐ Dikdörtgen  
☐ Üçgen  
☐ Kare



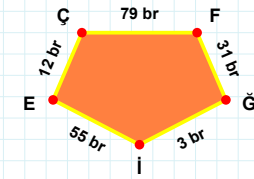
[İE] kenarı hangi şeklin kenarıdır?

- ☐ Beşgen  
☐ Dikey Dikdörtgen  
☐ Ters Beşgen



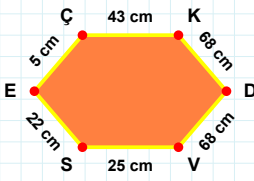
[MJ] kenarı hangi şeklin kenarıdır?

- ☐ Ters Beşgen  
☐ Dikey Dikdörtgen  
☐ Beşgen



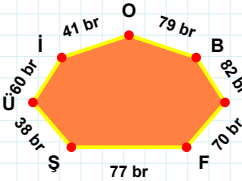
68 br hangi şeklin kenarıdır?

- ☐ Dikey Dikdörtgen  
☐ Beşgen  
☐ Ters Beşgen



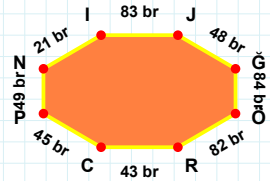
[IJ] kenarı hangi şeklin kenarıdır?

- ☐ Yedigen  
☐ Sekizgen  
☐ Altıgen



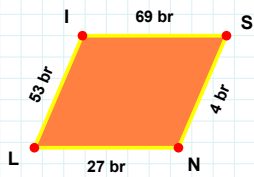
[DV] kenarı hangi şeklin kenarıdır?

- ☐ Sekizgen  
☐ Yedigen  
☐ Altıgen



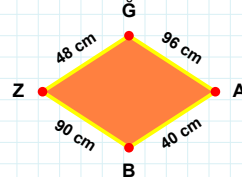
60 br hangi şeklin kenarıdır?

- ☐ Altıgen  
☐ Sekizgen  
☐ Yedigen



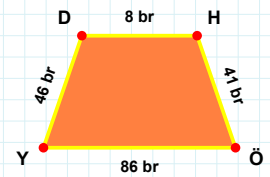
[HÖ] kenarı hangi şeklin kenarıdır?

- ☐ Eşkenar Dörtgen  
☐ Paralelkenar  
☐ Yamuk



[NL] kenarı hangi şeklin kenarıdır?

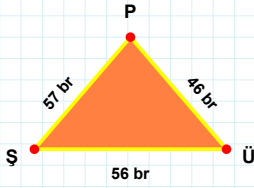
- ☐ Yamuk  
☐ Paralelkenar  
☐ Eşkenar Dörtgen



90 cm hangi şeklin kenarıdır?

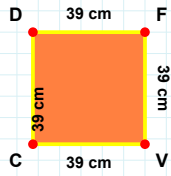
- ☐ Yamuk  
☐ Eşkenar Dörtgen  
☐ Paralelkenar

**SORU:** Aşağıdaki şekilleri inceleyiniz. Verilen kenar bilgisinin hangi şekle ait olduğunu işaretleyiniz.



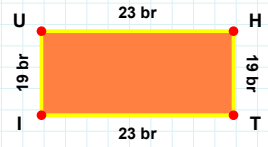
[Tİ] kenarı hangi şeklin kenarıdır?

- ☐ Üçgen  
☐ Dikdörtgen  
☐ Kare



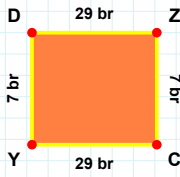
[ÜP] kenarı hangi şeklin kenarıdır?

- ☐ Dikdörtgen  
☐ Üçgen  
☐ Kare



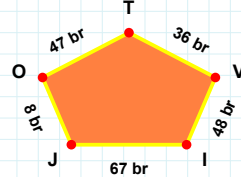
[VC] kenarı hangi şeklin kenarıdır?

- ☐ Dikdörtgen  
☐ Kare  
☐ Üçgen



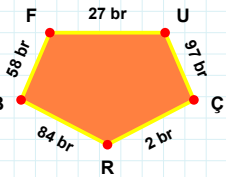
36 br hangi şeklin kenarıdır?

- ☐ Ters Beşgen  
☐ Dikey Dikdörtgen  
☐ Beşgen



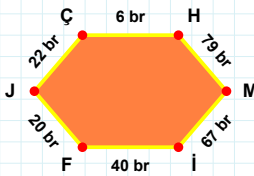
[ÇR] kenarı hangi şeklin kenarıdır?

- ☐ Ters Beşgen  
☐ Beşgen  
☐ Dikey Dikdörtgen



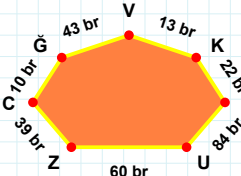
[CY] kenarı hangi şeklin kenarıdır?

- ☐ Beşgen  
☐ Ters Beşgen  
☐ Dikey Dikdörtgen



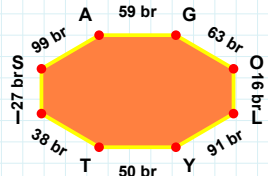
60 br hangi şeklin kenarıdır?

- ☐ Altıgen  
☐ Yedigen  
☐ Sekizgen



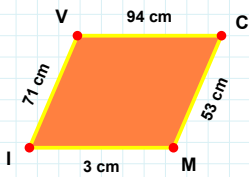
[LY] kenarı hangi şeklin kenarıdır?

- ☐ Sekizgen  
☐ Altıgen  
☐ Yedigen



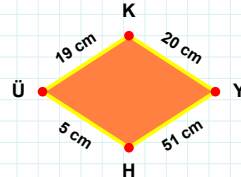
[ÇH] kenarı hangi şeklin kenarıdır?

- ☐ Yedigen  
☐ Altıgen  
☐ Sekizgen



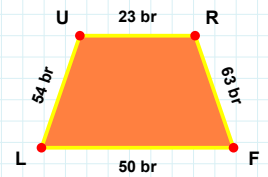
[UR] kenarı hangi şeklin kenarıdır?

- ☐ Paralelkenar  
☐ Yamuk  
☐ Eşkenar Dörtgen



[Mİ] kenarı hangi şeklin kenarıdır?

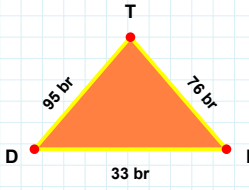
- ☐ Paralelkenar  
☐ Eşkenar Dörtgen  
☐ Yamuk



51 cm hangi şeklin kenarıdır?

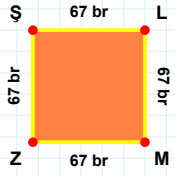
- ☐ Yamuk  
☐ Eşkenar Dörtgen  
☐ Paralelkenar

**SORU:** Aşağıdaki şekilleri inceleyiniz. Verilen kenar bilgisinin hangi şekle ait olduğunu işaretleyiniz.



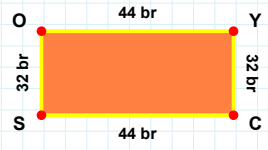
**|OI| kenarı hangi şeklin kenarıdır?**

- ☐ Kare  
☐ Üçgen  
☐ Dikdörtgen



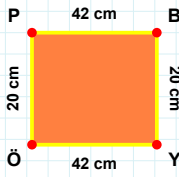
**|DI| kenarı hangi şeklin kenarıdır?**

- ☐ Üçgen  
☐ Dikdörtgen  
☐ Kare



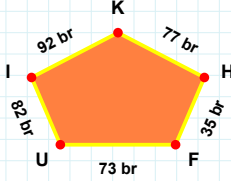
**|LM| kenarı hangi şeklin kenarıdır?**

- ☐ Üçgen  
☐ Dikdörtgen  
☐ Kare



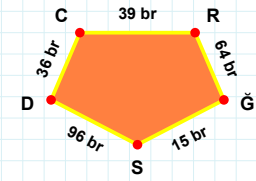
**|ÖS| kenarı hangi şeklin kenarıdır?**

- ☐ Ters Beşgen  
☐ Dikey Dikdörtgen  
☐ Beşgen



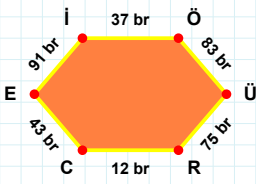
**|YÖ| kenarı hangi şeklin kenarıdır?**

- ☐ Ters Beşgen  
☐ Dikey Dikdörtgen  
☐ Beşgen



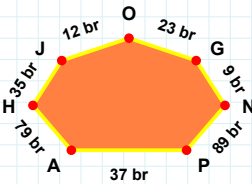
**73 br hangi şeklin kenarıdır?**

- ☐ Dikey Dikdörtgen  
☐ Beşgen  
☐ Ters Beşgen



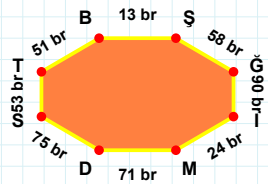
**79 br hangi şeklin kenarıdır?**

- ☐ Sekizgen  
☐ Yediggen  
☐ Altıgen



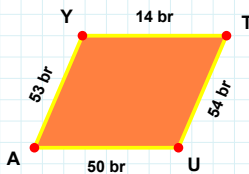
**|ST| kenarı hangi şeklin kenarıdır?**

- ☐ Yediggen  
☐ Altıgen  
☐ Sekizgen



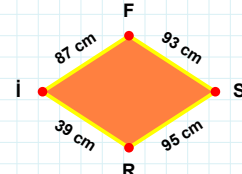
**|RC| kenarı hangi şeklin kenarıdır?**

- ☐ Yediggen  
☐ Sekizgen  
☐ Altıgen



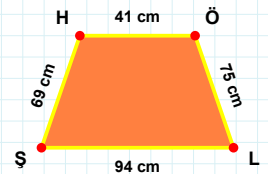
**|HÖ| kenarı hangi şeklin kenarıdır?**

- ☐ Paralelkenar  
☐ Yamuk  
☐ Eşkenar Dörtgen



**|UA| kenarı hangi şeklin kenarıdır?**

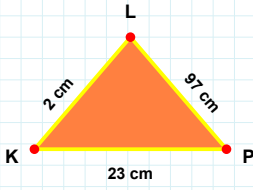
- ☐ Paralelkenar  
☐ Yamuk  
☐ Eşkenar Dörtgen



**95 cm hangi şeklin kenarıdır?**

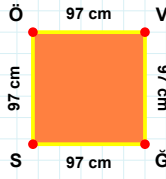
- ☐ Eşkenar Dörtgen  
☐ Paralelkenar  
☐ Yamuk

**SORU:** Aşağıdaki şekilleri inceleyiniz. Verilen kenar bilgisinin hangi şekle ait olduğunu işaretleyiniz.



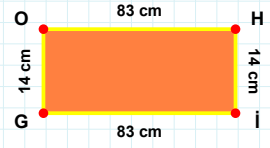
**[HL] kenarı hangi şeklin kenarıdır?**

- ☐ Kare  
☐ Üçgen  
☐ Dikdörtgen



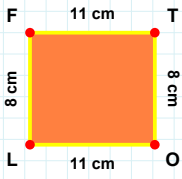
**[KP] kenarı hangi şeklin kenarıdır?**

- ☐ Dikdörtgen  
☐ Kare  
☐ Üçgen



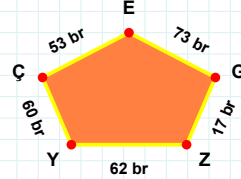
**[GS] kenarı hangi şeklin kenarıdır?**

- ☐ Kare  
☐ Dikdörtgen  
☐ Üçgen



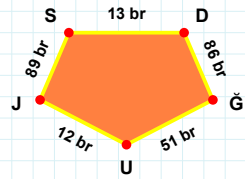
**73 br hangi şeklin kenarıdır?**

- ☐ Ters Beşgen  
☐ Dikey Dikdörtgen  
☐ Beşgen



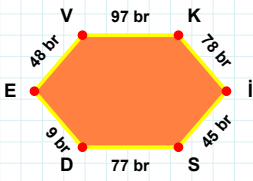
**[DĞ] kenarı hangi şeklin kenarıdır?**

- ☐ Dikey Dikdörtgen  
☐ Ters Beşgen  
☐ Beşgen



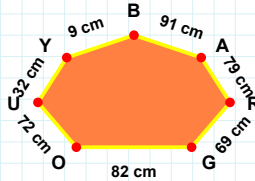
**[LF] kenarı hangi şeklin kenarıdır?**

- ☐ Ters Beşgen  
☐ Beşgen  
☐ Dikey Dikdörtgen



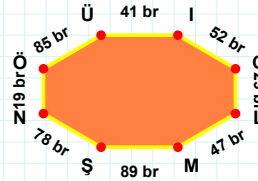
**[Üİ] kenarı hangi şeklin kenarıdır?**

- ☐ Yedigen  
☐ Sekizgen  
☐ Altıgen



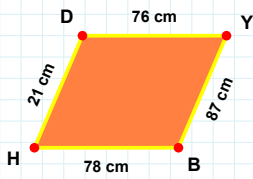
**[Kİ] kenarı hangi şeklin kenarıdır?**

- ☐ Altıgen  
☐ Yedigen  
☐ Sekizgen



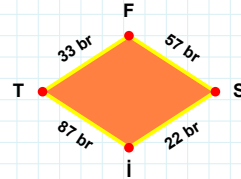
**72 cm hangi şeklin kenarıdır?**

- ☐ Yedigen  
☐ Altıgen  
☐ Sekizgen



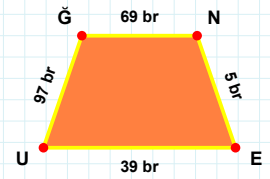
**[UĞ] kenarı hangi şeklin kenarıdır?**

- ☐ Eşkenar Dörtgen  
☐ Paralelkenar  
☐ Yamuk



**[HD] kenarı hangi şeklin kenarıdır?**

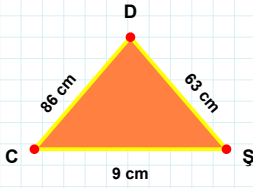
- ☐ Eşkenar Dörtgen  
☐ Paralelkenar  
☐ Yamuk



**22 br hangi şeklin kenarıdır?**

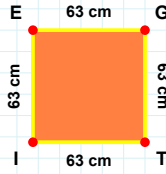
- ☐ Yamuk  
☐ Eşkenar Dörtgen  
☐ Paralelkenar

**SORU:** Aşağıdaki şekilleri inceleyiniz. Verilen kenar bilgisinin hangi şekle ait olduğunu işaretleyiniz.



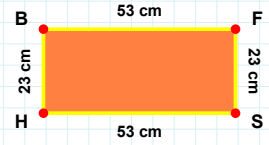
|BF| kenarı hangi şeklin kenarıdır?

- ☐ Dikdörtgen  
☐ Kare  
☐ Üçgen



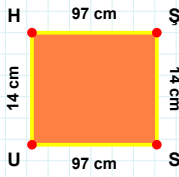
|DC| kenarı hangi şeklin kenarıdır?

- ☐ Kare  
☐ Üçgen  
☐ Dikdörtgen



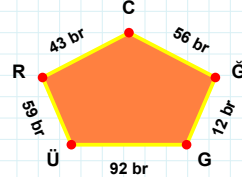
|GT| kenarı hangi şeklin kenarıdır?

- ☐ Üçgen  
☐ Kare  
☐ Dikdörtgen



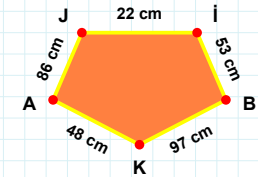
59 br hangi şeklin kenarıdır?

- ☐ Dikey Dikdörtgen  
☐ Beşgen  
☐ Ters Beşgen



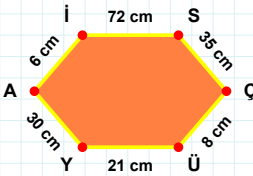
|Jİ| kenarı hangi şeklin kenarıdır?

- ☐ Beşgen  
☐ Ters Beşgen  
☐ Dikey Dikdörtgen



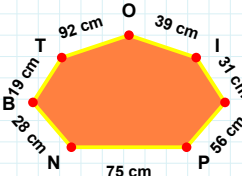
|HŞ| kenarı hangi şeklin kenarıdır?

- ☐ Beşgen  
☐ Ters Beşgen  
☐ Dikey Dikdörtgen



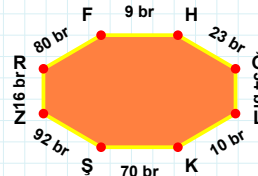
31 cm hangi şeklin kenarıdır?

- ☐ Sekizgen  
☐ Yedigen  
☐ Altıgen



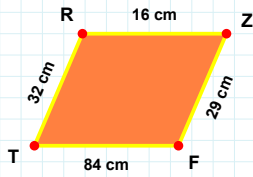
|HG| kenarı hangi şeklin kenarıdır?

- ☐ Sekizgen  
☐ Altıgen  
☐ Yedigen



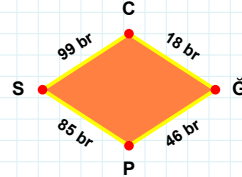
|ÇÜ| kenarı hangi şeklin kenarıdır?

- ☐ Sekizgen  
☐ Altıgen  
☐ Yedigen



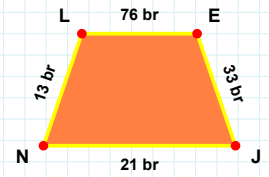
85 br hangi şeklin kenarıdır?

- ☐ Eşkenar Dörtgen  
☐ Yamuk  
☐ Paralelkenar



|LE| kenarı hangi şeklin kenarıdır?

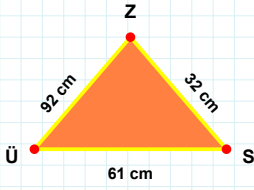
- ☐ Paralelkenar  
☐ Yamuk  
☐ Eşkenar Dörtgen



|FT| kenarı hangi şeklin kenarıdır?

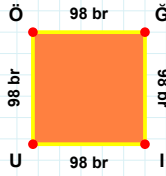
- ☐ Eşkenar Dörtgen  
☐ Yamuk  
☐ Paralelkenar

**SORU:** Aşağıdaki şekilleri inceleyiniz. Verilen kenar bilgisinin hangi şekle ait olduğunu işaretleyiniz.



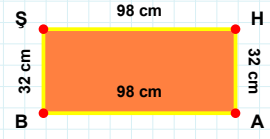
**[ŞH] kenarı hangi şeklin kenarıdır?**

- ☐ Üçgen  
☐ Kare  
☐ Dikdörtgen



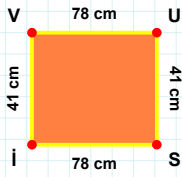
**[ÜS] kenarı hangi şeklin kenarıdır?**

- ☐ Kare  
☐ Üçgen  
☐ Dikdörtgen



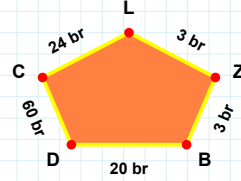
**[ÜÖ] kenarı hangi şeklin kenarıdır?**

- ☐ Dikdörtgen  
☐ Kare  
☐ Üçgen



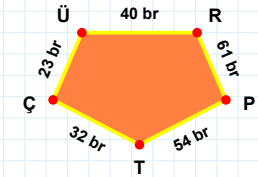
**[ÇÜ] kenarı hangi şeklin kenarıdır?**

- ☐ Dikey Dikdörtgen  
☐ Beşgen  
☐ Ters Beşgen



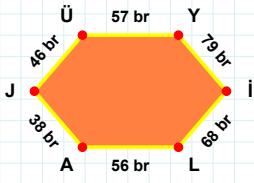
**[Şİ] kenarı hangi şeklin kenarıdır?**

- ☐ Dikey Dikdörtgen  
☐ Ters Beşgen  
☐ Beşgen



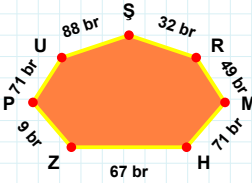
**24 br hangi şeklin kenarıdır?**

- ☐ Ters Beşgen  
☐ Dikey Dikdörtgen  
☐ Beşgen



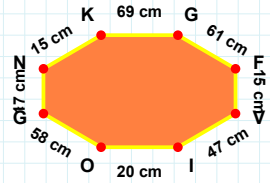
**[Vİ] kenarı hangi şeklin kenarıdır?**

- ☐ Altıgen  
☐ Yediggen  
☐ Sekizgen



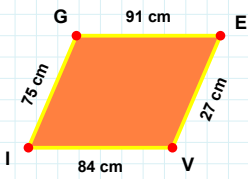
**[JÜ] kenarı hangi şeklin kenarıdır?**

- ☐ Sekizgen  
☐ Yediggen  
☐ Altıgen



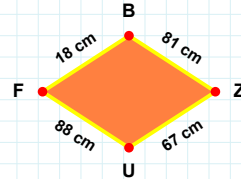
**32 br hangi şeklin kenarıdır?**

- ☐ Yediggen  
☐ Altıgen  
☐ Sekizgen



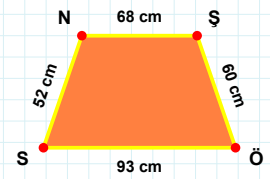
**81 cm hangi şeklin kenarıdır?**

- ☐ Yamuk  
☐ Paralelkenar  
☐ Eşkenar Dörtgen



**[NŞ] kenarı hangi şeklin kenarıdır?**

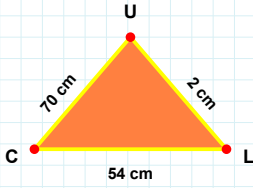
- ☐ Paralelkenar  
☐ Eşkenar Dörtgen  
☐ Yamuk



**[EV] kenarı hangi şeklin kenarıdır?**

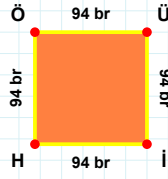
- ☐ Yamuk  
☐ Paralelkenar  
☐ Eşkenar Dörtgen

**SORU:** Aşağıdaki şekilleri inceleyiniz. Verilen kenar bilgisinin hangi şekle ait olduğunu işaretleyiniz.



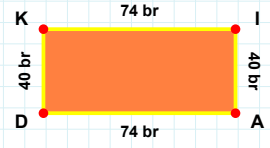
|ÜÜ| kenarı hangi şeklin kenarıdır?

- ☐ Dikdörtgen  
☐ Üçgen  
☐ Kare



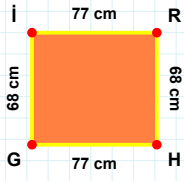
|Kİ| kenarı hangi şeklin kenarıdır?

- ☐ Dikdörtgen  
☐ Üçgen  
☐ Kare



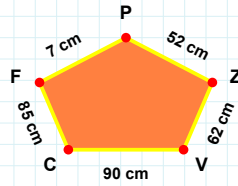
|LU| kenarı hangi şeklin kenarıdır?

- ☐ Kare  
☐ Dikdörtgen  
☐ Üçgen



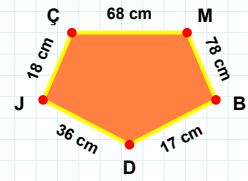
|JÇ| kenarı hangi şeklin kenarıdır?

- ☐ Beşgen  
☐ Dikey Dikdörtgen  
☐ Ters Beşgen



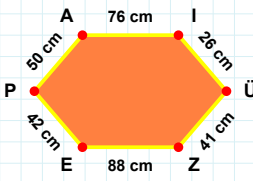
|HG| kenarı hangi şeklin kenarıdır?

- ☐ Dikey Dikdörtgen  
☐ Beşgen  
☐ Ters Beşgen



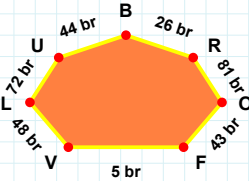
62 cm hangi şeklin kenarıdır?

- ☐ Dikey Dikdörtgen  
☐ Beşgen  
☐ Ters Beşgen



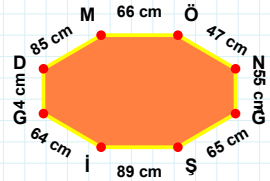
48 br hangi şeklin kenarıdır?

- ☐ Altıgen  
☐ Sekizgen  
☐ Yediggen



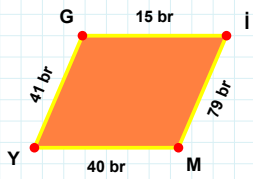
|ÖN| kenarı hangi şeklin kenarıdır?

- ☐ Sekizgen  
☐ Yediggen  
☐ Altıgen



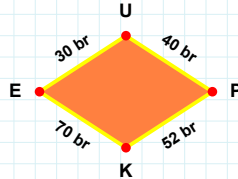
|EP| kenarı hangi şeklin kenarıdır?

- ☐ Yediggen  
☐ Sekizgen  
☐ Altıgen



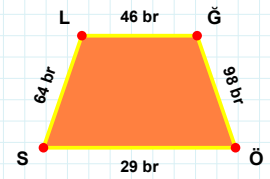
30 br hangi şeklin kenarıdır?

- ☐ Yamuk  
☐ Paralelkenar  
☐ Eşkenar Dörtgen



|ĞÖ| kenarı hangi şeklin kenarıdır?

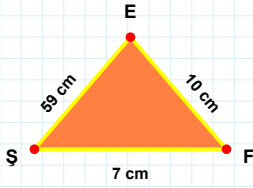
- ☐ Paralelkenar  
☐ Eşkenar Dörtgen  
☐ Yamuk



|MY| kenarı hangi şeklin kenarıdır?

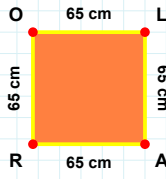
- ☐ Paralelkenar  
☐ Yamuk  
☐ Eşkenar Dörtgen

**SORU:** Aşağıdaki şekilleri inceleyiniz. Verilen kenar bilgisinin hangi şekle ait olduğunu işaretleyiniz.



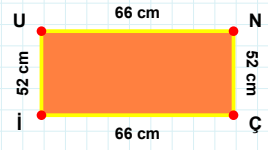
**[OL]** kenarı hangi şeklin kenarıdır?

- ☐ Kare  
☐ Üçgen  
☐ Dikdörtgen



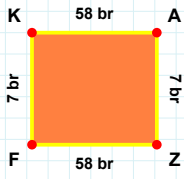
**[UN]** kenarı hangi şeklin kenarıdır?

- ☐ Üçgen  
☐ Kare  
☐ Dikdörtgen



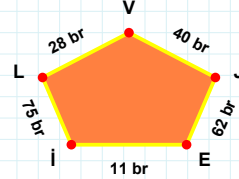
**[EŞ]** kenarı hangi şeklin kenarıdır?

- ☐ Üçgen  
☐ Kare  
☐ Dikdörtgen



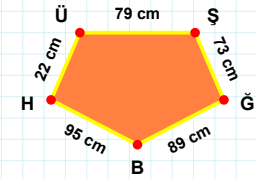
**11 br** hangi şeklin kenarıdır?

- ☐ Beşgen  
☐ Ters Beşgen  
☐ Dikey Dikdörtgen



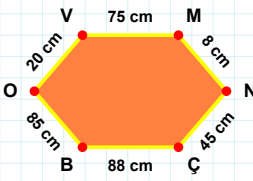
**[GB]** kenarı hangi şeklin kenarıdır?

- ☐ Ters Beşgen  
☐ Dikey Dikdörtgen  
☐ Beşgen



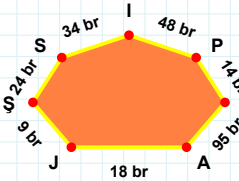
**[KA]** kenarı hangi şeklin kenarıdır?

- ☐ Beşgen  
☐ Ters Beşgen  
☐ Dikey Dikdörtgen



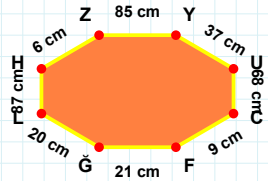
**[GL]** kenarı hangi şeklin kenarıdır?

- ☐ Yedigen  
☐ Altigen  
☐ Sekizgen



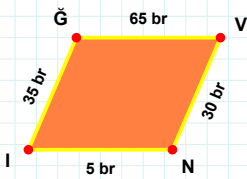
**[ÇB]** kenarı hangi şeklin kenarıdır?

- ☐ Altigen  
☐ Sekizgen  
☐ Yedigen



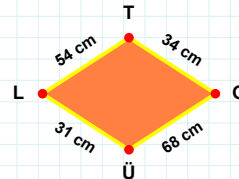
**48 br** hangi şeklin kenarıdır?

- ☐ Altigen  
☐ Yedigen  
☐ Sekizgen



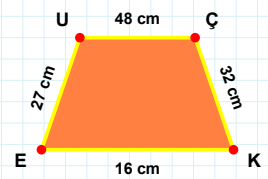
**[UÇ]** kenarı hangi şeklin kenarıdır?

- ☐ Yamuk  
☐ Paralelkenar  
☐ Eşkenar Dörtgen



**[NI]** kenarı hangi şeklin kenarıdır?

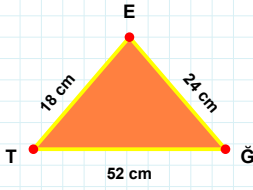
- ☐ Eşkenar Dörtgen  
☐ Yamuk  
☐ Paralelkenar



**68 cm** hangi şeklin kenarıdır?

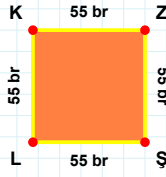
- ☐ Yamuk  
☐ Eşkenar Dörtgen  
☐ Paralelkenar

**SORU:** Aşağıdaki şekilleri inceleyiniz. Verilen kenar bilgisinin hangi şekle ait olduğunu işaretleyiniz.



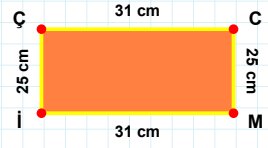
**[SL] kenarı hangi şeklin kenarıdır?**

- ☐ Üçgen  
☐ Kare  
☐ Dikdörtgen



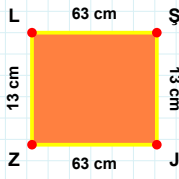
**[ML] kenarı hangi şeklin kenarıdır?**

- ☐ Kare  
☐ Dikdörtgen  
☐ Üçgen



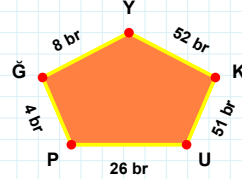
**[ET] kenarı hangi şeklin kenarıdır?**

- ☐ Üçgen  
☐ Dikdörtgen  
☐ Kare



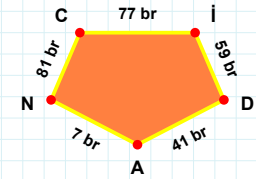
**4 br hangi şeklin kenarıdır?**

- ☐ Ters Beşgen  
☐ Dikey Dikdörtgen  
☐ Beşgen



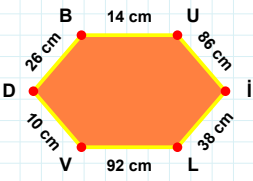
**[CI] kenarı hangi şeklin kenarıdır?**

- ☐ Beşgen  
☐ Dikey Dikdörtgen  
☐ Ters Beşgen



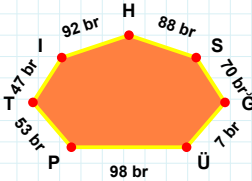
**[ZL] kenarı hangi şeklin kenarıdır?**

- ☐ Dikey Dikdörtgen  
☐ Ters Beşgen  
☐ Beşgen



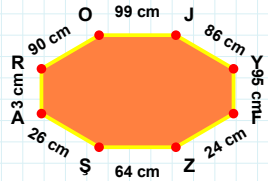
**98 br hangi şeklin kenarıdır?**

- ☐ Yedigen  
☐ Sekizgen  
☐ Altıgen



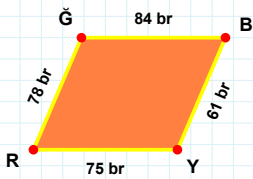
**[FZ] kenarı hangi şeklin kenarıdır?**

- ☐ Sekizgen  
☐ Altıgen  
☐ Yedigen



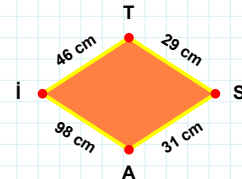
**[DB] kenarı hangi şeklin kenarıdır?**

- ☐ Sekizgen  
☐ Yedigen  
☐ Altıgen



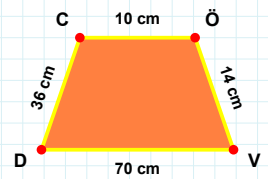
**98 cm hangi şeklin kenarıdır?**

- ☐ Eşkenar Dörtgen  
☐ Yamuk  
☐ Paralelkenar



**[ÖV] kenarı hangi şeklin kenarıdır?**

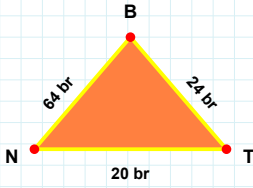
- ☐ Eşkenar Dörtgen  
☐ Yamuk  
☐ Paralelkenar



**[RG] kenarı hangi şeklin kenarıdır?**

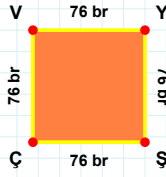
- ☐ Paralelkenar  
☐ Yamuk  
☐ Eşkenar Dörtgen

**SORU:** Aşağıdaki şekilleri inceleyiniz. Verilen kenar bilgisinin hangi şekle ait olduğunu işaretleyiniz.



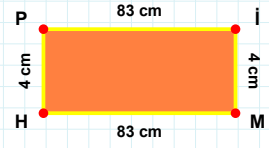
[ÇV] kenarı hangi şeklin kenarıdır?

- ☐ Dikdörtgen  
☐ Kare  
☐ Üçgen



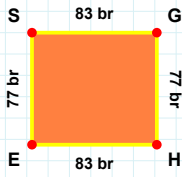
[HP] kenarı hangi şeklin kenarıdır?

- ☐ Kare  
☐ Dikdörtgen  
☐ Üçgen



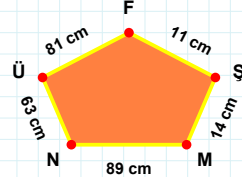
[TB] kenarı hangi şeklin kenarıdır?

- ☐ Üçgen  
☐ Kare  
☐ Dikdörtgen



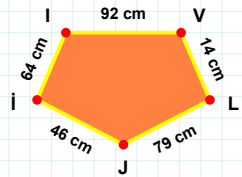
11 cm hangi şeklin kenarıdır?

- ☐ Beşgen  
☐ Dikey Dikdörtgen  
☐ Ters Beşgen



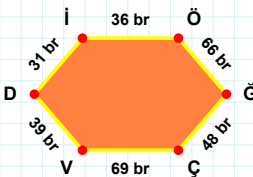
[İİ] kenarı hangi şeklin kenarıdır?

- ☐ Beşgen  
☐ Dikey Dikdörtgen  
☐ Ters Beşgen



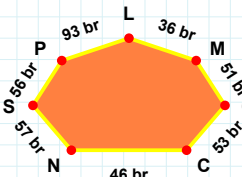
[ES] kenarı hangi şeklin kenarıdır?

- ☐ Beşgen  
☐ Ters Beşgen  
☐ Dikey Dikdörtgen



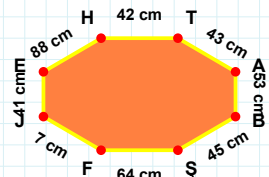
[BŞ] kenarı hangi şeklin kenarıdır?

- ☐ Sekizgen  
☐ Altıgen  
☐ Yediggen



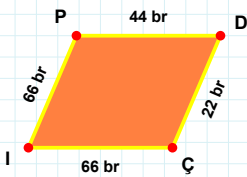
[ĞÇ] kenarı hangi şeklin kenarıdır?

- ☐ Sekizgen  
☐ Yediggen  
☐ Altıgen



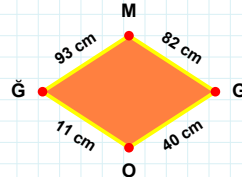
93 br hangi şeklin kenarıdır?

- ☐ Altıgen  
☐ Sekizgen  
☐ Yediggen



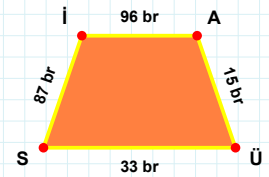
[Sİ] kenarı hangi şeklin kenarıdır?

- ☐ Eşkenar Dörtgen  
☐ Yamuk  
☐ Paralelkenar



[DÇ] kenarı hangi şeklin kenarıdır?

- ☐ Yamuk  
☐ Eşkenar Dörtgen  
☐ Paralelkenar



11 cm hangi şeklin kenarıdır?

- ☐ Eşkenar Dörtgen  
☐ Paralelkenar  
☐ Yamuk

### SÜREÇ ODAKLI DEĞERLENDİRME ÖLÇEĞİ

Geliştirilmeli (0-109)	İyi (110-187)	Çok İyi (188-265)	Mükemmel (266-312)
<input type="checkbox"/>	<input type="checkbox"/>	<input type="checkbox"/>	<input type="checkbox"/>

Hazırlayan: .....

**Bu bölüme sınıfınızın ilgili kazanıma yönelik genel durumuna ilişkin gözlem ve izlenimlerinizi, öğrencilerinizin bu kazanımla ilgili öğrenme eksikliklerini ve bu eksikliklerin giderilmesi amacıyla yaptığınız/yapmayı planladığınız faaliyetleri not edebilirsiniz.**

No	Adı - Soyadı	Toplam Puan	Değerlendirme
1			
2			
3			
4			
5			
6			
7			
8			
9			
10			
11			
12			
13			
14			
15			
16			
17			
18			
19			
20			
21			
22			
23			
24			
25			
26			
27			
28			
29			
30			
31			
32			
33			
34			
35			

**Hazırlayan:** .....