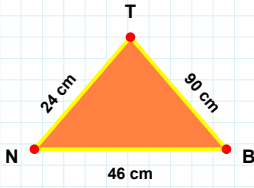
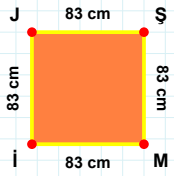


SORU: Aşağıdaki şekilleri inceleyiniz. Verilen kenar bilgisinin hangi şekle ait olduğunu işaretleyiniz.



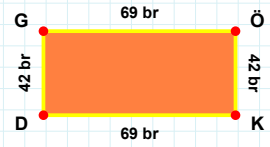
[Mİ] kenarı hangi şeklin kenarıdır?

- ☐ Dikdörtgen
☐ Üçgen
☐ Kare



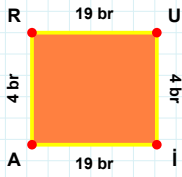
[KD] kenarı hangi şeklin kenarıdır?

- ☐ Dikdörtgen
☐ Kare
☐ Üçgen



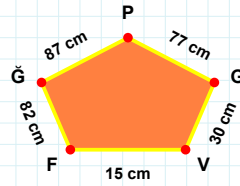
[TN] kenarı hangi şeklin kenarıdır?

- ☐ Üçgen
☐ Kare
☐ Dikdörtgen



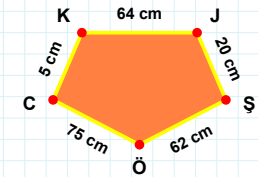
[CK] kenarı hangi şeklin kenarıdır?

- ☐ Beşgen
☐ Ters Beşgen
☐ Dikey Dikdörtgen



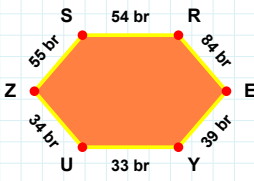
[Uİ] kenarı hangi şeklin kenarıdır?

- ☐ Beşgen
☐ Dikey Dikdörtgen
☐ Ters Beşgen



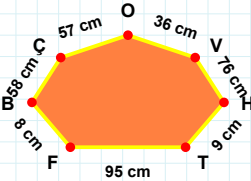
30 cm hangi şeklin kenarıdır?

- ☐ Dikey Dikdörtgen
☐ Beşgen
☐ Ters Beşgen



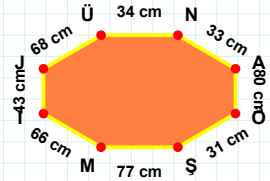
95 cm hangi şeklin kenarıdır?

- ☐ Altıgen
☐ Yediggen
☐ Sekizgen



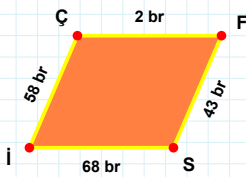
[ŞM] kenarı hangi şeklin kenarıdır?

- ☐ Sekizgen
☐ Yediggen
☐ Altıgen



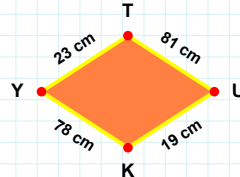
[ZS] kenarı hangi şeklin kenarıdır?

- ☐ Altıgen
☐ Yediggen
☐ Sekizgen



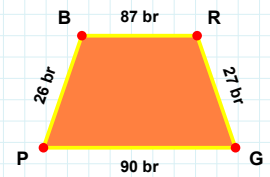
[PB] kenarı hangi şeklin kenarıdır?

- ☐ Yamuk
☐ Paralelkenar
☐ Eşkenar Dörtgen



[İÇ] kenarı hangi şeklin kenarıdır?

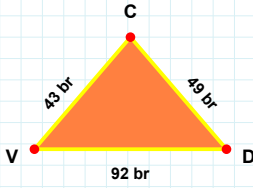
- ☐ Paralelkenar
☐ Yamuk
☐ Eşkenar Dörtgen



23 cm hangi şeklin kenarıdır?

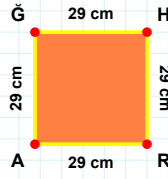
- ☐ Eşkenar Dörtgen
☐ Yamuk
☐ Paralelkenar

SORU: Aşağıdaki şekilleri inceleyiniz. Verilen kenar bilgisinin hangi şekle ait olduğunu işaretleyiniz.



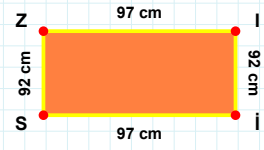
[SZ] kenarı hangi şeklin kenarıdır?

- ☐ Üçgen
☐ Dikdörtgen
☐ Kare



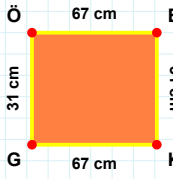
[VD] kenarı hangi şeklin kenarıdır?

- ☐ Dikdörtgen
☐ Kare
☐ Üçgen



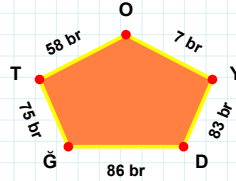
[AĞ] kenarı hangi şeklin kenarıdır?

- ☐ Dikdörtgen
☐ Kare
☐ Üçgen



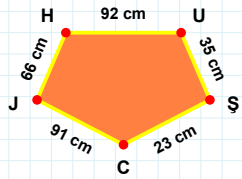
[UŞ] kenarı hangi şeklin kenarıdır?

- ☐ Dikey Dikdörtgen
☐ Beşgen
☐ Ters Beşgen



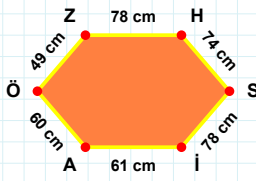
[KG] kenarı hangi şeklin kenarıdır?

- ☐ Ters Beşgen
☐ Beşgen
☐ Dikey Dikdörtgen



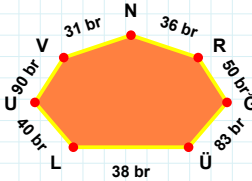
83 br hangi şeklin kenarıdır?

- ☐ Ters Beşgen
☐ Beşgen
☐ Dikey Dikdörtgen



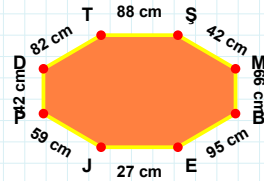
[DT] kenarı hangi şeklin kenarıdır?

- ☐ Altıgen
☐ Sekizgen
☐ Yedigen



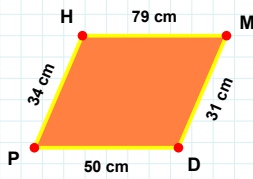
[ÖZ] kenarı hangi şeklin kenarıdır?

- ☐ Sekizgen
☐ Yedigen
☐ Altıgen



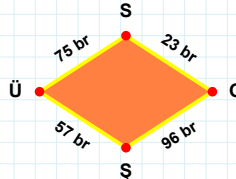
90 br hangi şeklin kenarıdır?

- ☐ Altıgen
☐ Sekizgen
☐ Yedigen



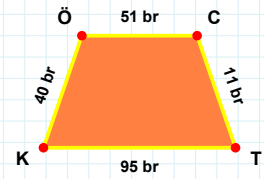
[CT] kenarı hangi şeklin kenarıdır?

- ☐ Paralelkenar
☐ Eşkenar Dörtgen
☐ Yamuk



[DP] kenarı hangi şeklin kenarıdır?

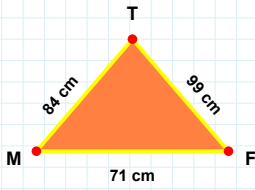
- ☐ Yamuk
☐ Paralelkenar
☐ Eşkenar Dörtgen



75 br hangi şeklin kenarıdır?

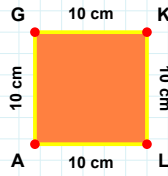
- ☐ Yamuk
☐ Paralelkenar
☐ Eşkenar Dörtgen

SORU: Aşağıdaki şekilleri inceleyiniz. Verilen kenar bilgisinin hangi şekle ait olduğunu işaretleyiniz.



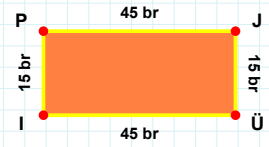
[PJ] kenarı hangi şeklin kenarıdır?

- ☐ Üçgen
☐ Dikdörtgen
☐ Kare



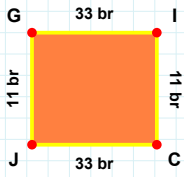
[MF] kenarı hangi şeklin kenarıdır?

- ☐ Kare
☐ Dikdörtgen
☐ Üçgen



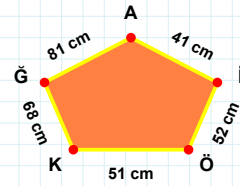
[AG] kenarı hangi şeklin kenarıdır?

- ☐ Üçgen
☐ Kare
☐ Dikdörtgen



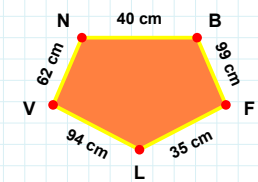
[BF] kenarı hangi şeklin kenarıdır?

- ☐ Beşgen
☐ Ters Beşgen
☐ Dikey Dikdörtgen



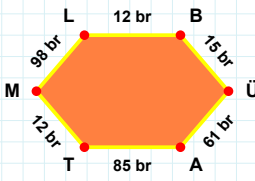
[GI] kenarı hangi şeklin kenarıdır?

- ☐ Dikey Dikdörtgen
☐ Ters Beşgen
☐ Beşgen



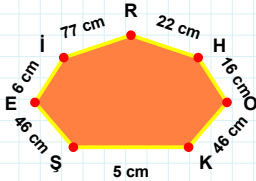
68 cm hangi şeklin kenarıdır?

- ☐ Beşgen
☐ Dikey Dikdörtgen
☐ Ters Beşgen



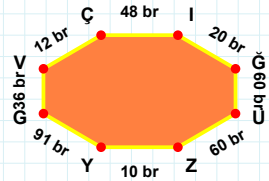
77 cm hangi şeklin kenarıdır?

- ☐ Altıgen
☐ Sekizgen
☐ Yedigen



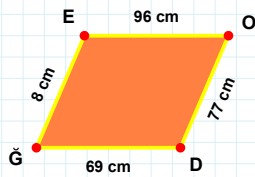
[GV] kenarı hangi şeklin kenarıdır?

- ☐ Sekizgen
☐ Altıgen
☐ Yedigen



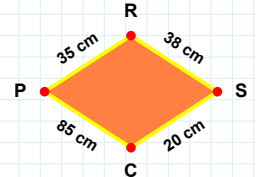
[TM] kenarı hangi şeklin kenarıdır?

- ☐ Yedigen
☐ Altıgen
☐ Sekizgen



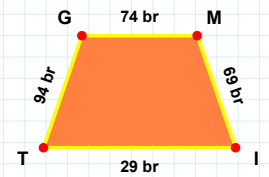
35 cm hangi şeklin kenarıdır?

- ☐ Eşkenar Dörtgen
☐ Yamuk
☐ Paralelkenar



[GM] kenarı hangi şeklin kenarıdır?

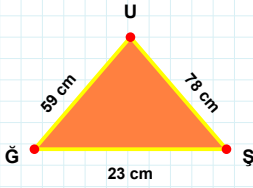
- ☐ Paralelkenar
☐ Yamuk
☐ Eşkenar Dörtgen



[OD] kenarı hangi şeklin kenarıdır?

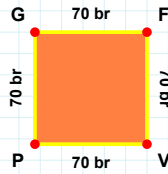
- ☐ Eşkenar Dörtgen
☐ Yamuk
☐ Paralelkenar

SORU: Aşağıdaki şekilleri inceleyiniz. Verilen kenar bilgisinin hangi şekle ait olduğunu işaretleyiniz.



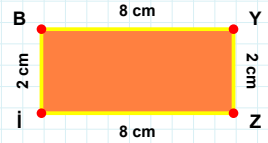
[VP] kenarı hangi şeklin kenarıdır?

- ☐ Üçgen
☐ Dikdörtgen
☐ Kare



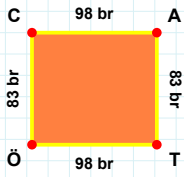
[BY] kenarı hangi şeklin kenarıdır?

- ☐ Üçgen
☐ Dikdörtgen
☐ Kare



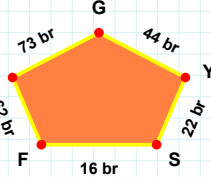
[UĞ] kenarı hangi şeklin kenarıdır?

- ☐ Üçgen
☐ Kare
☐ Dikdörtgen



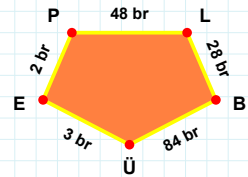
[PL] kenarı hangi şeklin kenarıdır?

- ☐ Dikey Dikdörtgen
☐ Ters Beşgen
☐ Beşgen



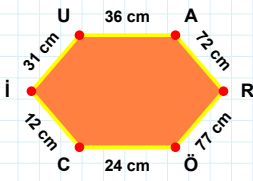
[CA] kenarı hangi şeklin kenarıdır?

- ☐ Dikey Dikdörtgen
☐ Ters Beşgen
☐ Beşgen



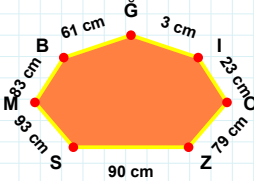
44 br hangi şeklin kenarıdır?

- ☐ Ters Beşgen
☐ Dikey Dikdörtgen
☐ Beşgen



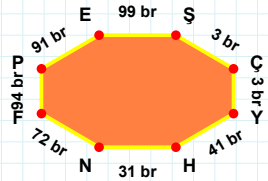
3 cm hangi şeklin kenarıdır?

- ☐ Sekizgen
☐ Yedigen
☐ Altigen



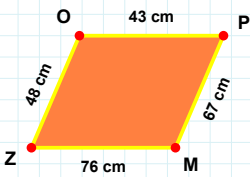
[NF] kenarı hangi şeklin kenarıdır?

- ☐ Sekizgen
☐ Altigen
☐ Yedigen



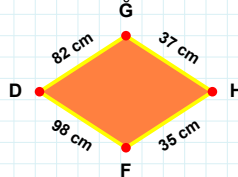
[UA] kenarı hangi şeklin kenarıdır?

- ☐ Sekizgen
☐ Yedigen
☐ Altigen



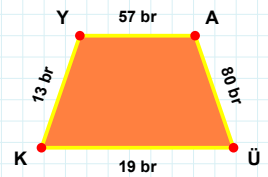
[ÜK] kenarı hangi şeklin kenarıdır?

- ☐ Paralelkenar
☐ Eşkenar Dörtgen
☐ Yamuk



[ZO] kenarı hangi şeklin kenarıdır?

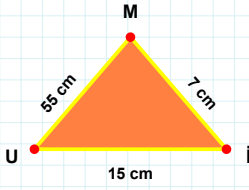
- ☐ Eşkenar Dörtgen
☐ Paralelkenar
☐ Yamuk



37 cm hangi şeklin kenarıdır?

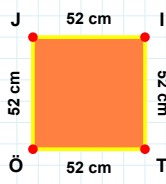
- ☐ Eşkenar Dörtgen
☐ Yamuk
☐ Paralelkenar

SORU: Aşağıdaki şekilleri inceleyiniz. Verilen kenar bilgisinin hangi şekle ait olduğunu işaretleyiniz.



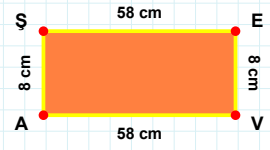
|EV| kenarı hangi şeklin kenarıdır?

- ☐ Dikdörtgen
☐ Üçgen
☐ Kare



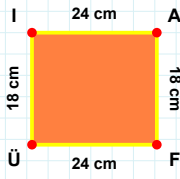
|JM| kenarı hangi şeklin kenarıdır?

- ☐ Kare
☐ Dikdörtgen
☐ Üçgen



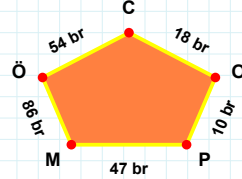
|IT| kenarı hangi şeklin kenarıdır?

- ☐ Kare
☐ Dikdörtgen
☐ Üçgen



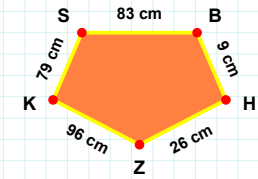
|SB| kenarı hangi şeklin kenarıdır?

- ☐ Beşgen
☐ Dikey Dikdörtgen
☐ Ters Beşgen



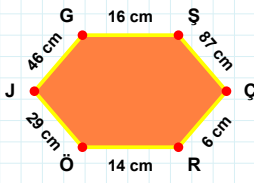
|ÜI| kenarı hangi şeklin kenarıdır?

- ☐ Dikey Dikdörtgen
☐ Ters Beşgen
☐ Beşgen



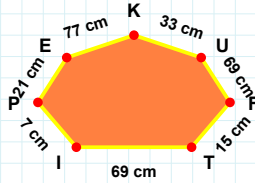
86 br hangi şeklin kenarıdır?

- ☐ Beşgen
☐ Dikey Dikdörtgen
☐ Ters Beşgen



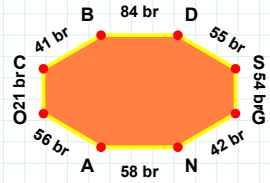
|AO| kenarı hangi şeklin kenarıdır?

- ☐ Sekizgen
☐ Altıgen
☐ Yedigen



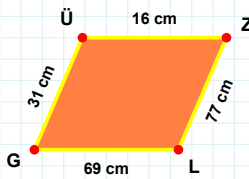
|GŞ| kenarı hangi şeklin kenarıdır?

- ☐ Sekizgen
☐ Altıgen
☐ Yedigen



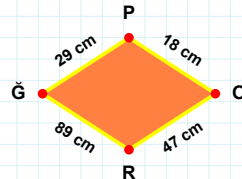
77 cm hangi şeklin kenarıdır?

- ☐ Sekizgen
☐ Yedigen
☐ Altıgen



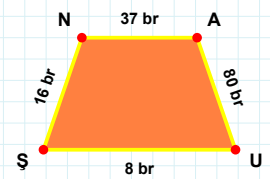
|UŞ| kenarı hangi şeklin kenarıdır?

- ☐ Paralelkenar
☐ Eşkenar Dörtgen
☐ Yamuk



|LG| kenarı hangi şeklin kenarıdır?

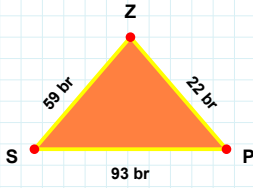
- ☐ Paralelkenar
☐ Eşkenar Dörtgen
☐ Yamuk



47 cm hangi şeklin kenarıdır?

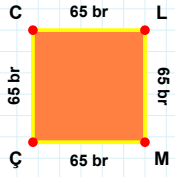
- ☐ Paralelkenar
☐ Yamuk
☐ Eşkenar Dörtgen

SORU: Aşağıdaki şekilleri inceleyiniz. Verilen kenar bilgisinin hangi şekle ait olduğunu işaretleyiniz.



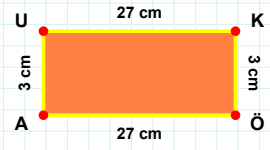
[KÖ] kenarı hangi şeklin kenarıdır?

- ☐ Üçgen
☐ Kare
☐ Dikdörtgen



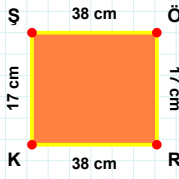
[SP] kenarı hangi şeklin kenarıdır?

- ☐ Dikdörtgen
☐ Üçgen
☐ Kare



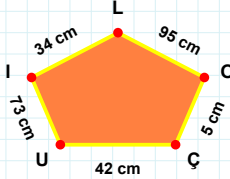
[MÇ] kenarı hangi şeklin kenarıdır?

- ☐ Üçgen
☐ Kare
☐ Dikdörtgen



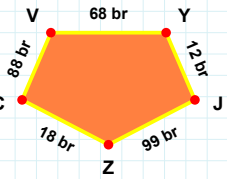
[CV] kenarı hangi şeklin kenarıdır?

- ☐ Dikey Dikdörtgen
☐ Ters Beşgen
☐ Beşgen



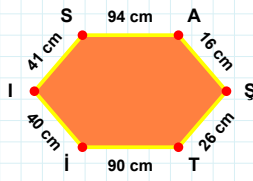
[SÖ] kenarı hangi şeklin kenarıdır?

- ☐ Dikey Dikdörtgen
☐ Ters Beşgen
☐ Beşgen



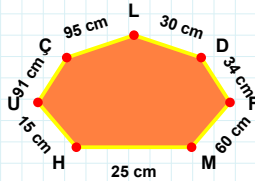
73 cm hangi şeklin kenarıdır?

- ☐ Beşgen
☐ Ters Beşgen
☐ Dikey Dikdörtgen



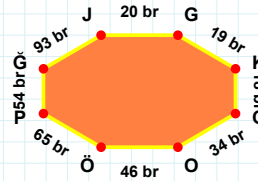
[JG] kenarı hangi şeklin kenarıdır?

- ☐ Sekizgen
☐ Altıgen
☐ Yediggen



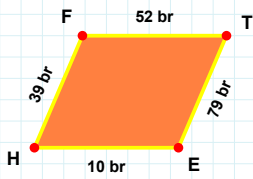
[SA] kenarı hangi şeklin kenarıdır?

- ☐ Altıgen
☐ Yediggen
☐ Sekizgen



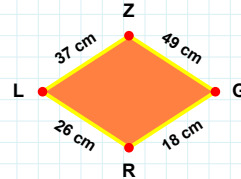
25 cm hangi şeklin kenarıdır?

- ☐ Altıgen
☐ Sekizgen
☐ Yediggen



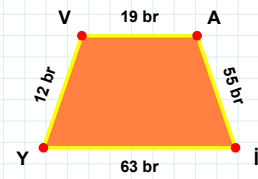
18 cm hangi şeklin kenarıdır?

- ☐ Eşkenar Dörtgen
☐ Yamuk
☐ Paralelkenar



[Aİ] kenarı hangi şeklin kenarıdır?

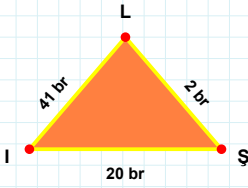
- ☐ Yamuk
☐ Paralelkenar
☐ Eşkenar Dörtgen



[TE] kenarı hangi şeklin kenarıdır?

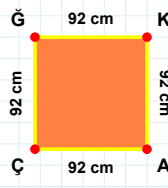
- ☐ Paralelkenar
☐ Yamuk
☐ Eşkenar Dörtgen

SORU: Aşağıdaki şekilleri inceleyiniz. Verilen kenar bilgisinin hangi şekle ait olduğunu işaretleyiniz.



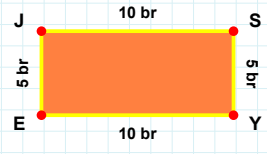
[YE] kenarı hangi şeklin kenarıdır?

- ☐ Kare
☐ Dikdörtgen
☐ Üçgen



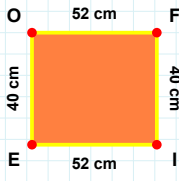
[LI] kenarı hangi şeklin kenarıdır?

- ☐ Kare
☐ Dikdörtgen
☐ Üçgen



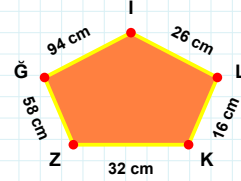
[AÇ] kenarı hangi şeklin kenarıdır?

- ☐ Dikdörtgen
☐ Üçgen
☐ Kare



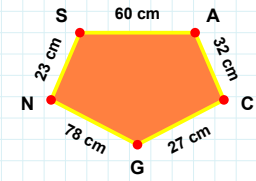
58 cm hangi şeklin kenarıdır?

- ☐ Dikey Dikdörtgen
☐ Beşgen
☐ Ters Beşgen



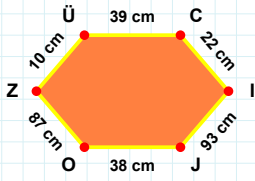
[NS] kenarı hangi şeklin kenarıdır?

- ☐ Ters Beşgen
☐ Beşgen
☐ Dikey Dikdörtgen



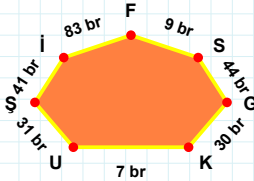
[FI] kenarı hangi şeklin kenarıdır?

- ☐ Beşgen
☐ Ters Beşgen
☐ Dikey Dikdörtgen



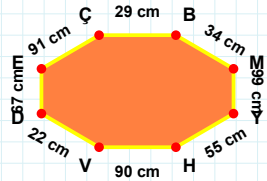
[MY] kenarı hangi şeklin kenarıdır?

- ☐ Sekizgen
☐ Altıgen
☐ Yediggen



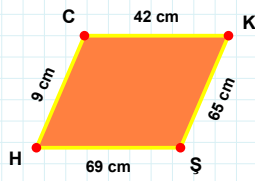
[JO] kenarı hangi şeklin kenarıdır?

- ☐ Sekizgen
☐ Yediggen
☐ Altıgen



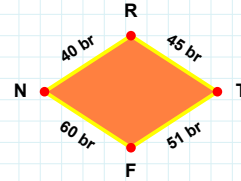
31 br hangi şeklin kenarıdır?

- ☐ Altıgen
☐ Sekizgen
☐ Yediggen



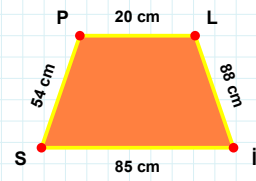
60 br hangi şeklin kenarıdır?

- ☐ Paralelkenar
☐ Eşkenar Dörtgen
☐ Yamuk



[İS] kenarı hangi şeklin kenarıdır?

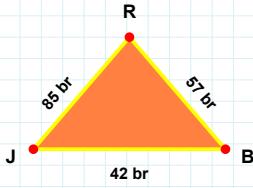
- ☐ Yamuk
☐ Eşkenar Dörtgen
☐ Paralelkenar



[KŞ] kenarı hangi şeklin kenarıdır?

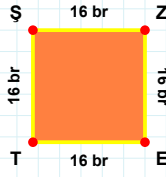
- ☐ Paralelkenar
☐ Yamuk
☐ Eşkenar Dörtgen

SORU: Aşağıdaki şekilleri inceleyiniz. Verilen kenar bilgisinin hangi şekle ait olduğunu işaretleyiniz.



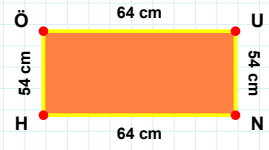
[NH] kenarı hangi şeklin kenarıdır?

- ☐ Kare
☐ Üçgen
☐ Dikdörtgen



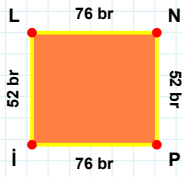
[BR] kenarı hangi şeklin kenarıdır?

- ☐ Üçgen
☐ Dikdörtgen
☐ Kare



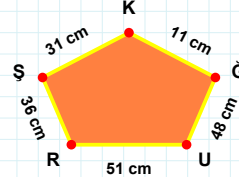
[SZ] kenarı hangi şeklin kenarıdır?

- ☐ Kare
☐ Üçgen
☐ Dikdörtgen



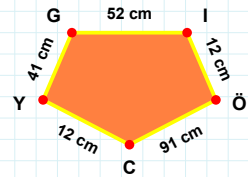
48 cm hangi şeklin kenarıdır?

- ☐ Beşgen
☐ Ters Beşgen
☐ Dikey Dikdörtgen



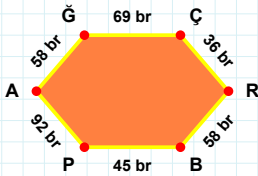
[İÖ] kenarı hangi şeklin kenarıdır?

- ☐ Dikey Dikdörtgen
☐ Beşgen
☐ Ters Beşgen



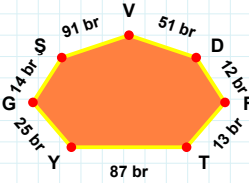
[İL] kenarı hangi şeklin kenarıdır?

- ☐ Ters Beşgen
☐ Beşgen
☐ Dikey Dikdörtgen



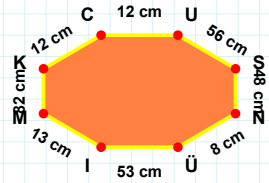
[US] kenarı hangi şeklin kenarıdır?

- ☐ Sekizgen
☐ Altıgen
☐ Yedigen



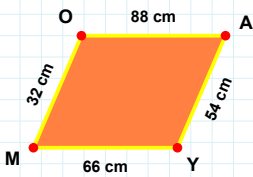
[BP] kenarı hangi şeklin kenarıdır?

- ☐ Sekizgen
☐ Altıgen
☐ Yedigen



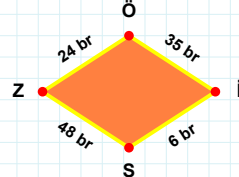
13 br hangi şeklin kenarıdır?

- ☐ Altıgen
☐ Sekizgen
☐ Yedigen



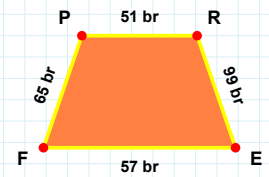
[RE] kenarı hangi şeklin kenarıdır?

- ☐ Yamuk
☐ Eşkenar Dörtgen
☐ Paralelkenar



[AY] kenarı hangi şeklin kenarıdır?

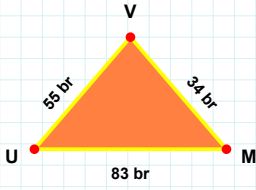
- ☐ Eşkenar Dörtgen
☐ Yamuk
☐ Paralelkenar



24 br hangi şeklin kenarıdır?

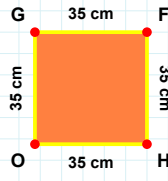
- ☐ Paralelkenar
☐ Eşkenar Dörtgen
☐ Yamuk

SORU: Aşağıdaki şekilleri inceleyiniz. Verilen kenar bilgisinin hangi şekle ait olduğunu işaretleyiniz.



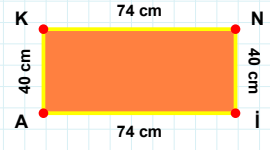
[HO] kenarı hangi şeklin kenarıdır?

- ☐ Dikdörtgen
☐ Üçgen
☐ Kare



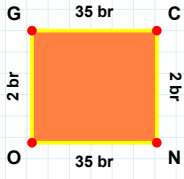
[NI] kenarı hangi şeklin kenarıdır?

- ☐ Dikdörtgen
☐ Kare
☐ Üçgen



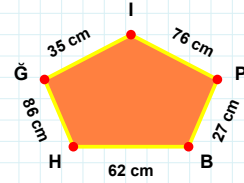
[UM] kenarı hangi şeklin kenarıdır?

- ☐ Üçgen
☐ Kare
☐ Dikdörtgen



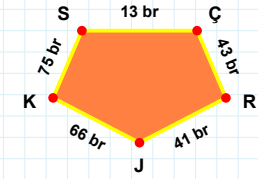
76 cm hangi şeklin kenarıdır?

- ☐ Dikey Dikdörtgen
☐ Beşgen
☐ Ters Beşgen



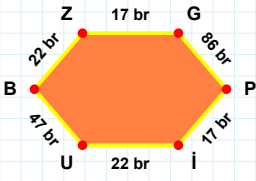
[ÇR] kenarı hangi şeklin kenarıdır?

- ☐ Dikey Dikdörtgen
☐ Beşgen
☐ Ters Beşgen



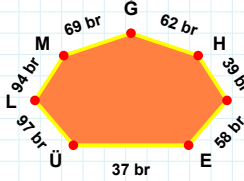
[CN] kenarı hangi şeklin kenarıdır?

- ☐ Dikey Dikdörtgen
☐ Beşgen
☐ Ters Beşgen



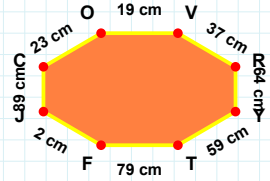
[VR] kenarı hangi şeklin kenarıdır?

- ☐ Yediggen
☐ Sekizgen
☐ Altigen



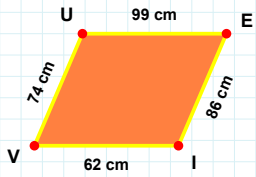
[PI] kenarı hangi şeklin kenarıdır?

- ☐ Sekizgen
☐ Yediggen
☐ Altigen



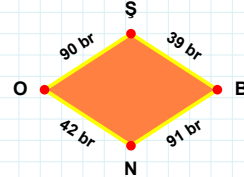
94 br hangi şeklin kenarıdır?

- ☐ Altigen
☐ Sekizgen
☐ Yediggen



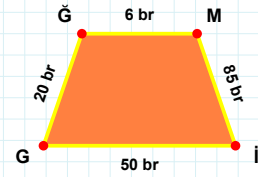
[IG] kenarı hangi şeklin kenarıdır?

- ☐ Paralelkenar
☐ Yamuk
☐ Eşkenar Dörtgen



[VU] kenarı hangi şeklin kenarıdır?

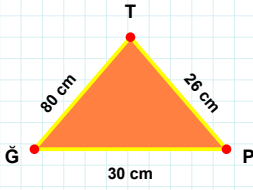
- ☐ Eşkenar Dörtgen
☐ Yamuk
☐ Paralelkenar



91 br hangi şeklin kenarıdır?

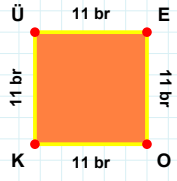
- ☐ Eşkenar Dörtgen
☐ Paralelkenar
☐ Yamuk

SORU: Aşağıdaki şekilleri inceleyiniz. Verilen kenar bilgisinin hangi şekle ait olduğunu işaretleyiniz.



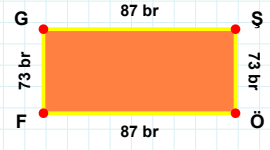
[ÖP] kenarı hangi şeklin kenarıdır?

- ☐ Kare
☐ Dikdörtgen
☐ Üçgen



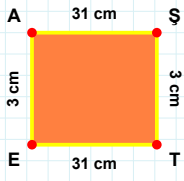
[GP] kenarı hangi şeklin kenarıdır?

- ☐ Üçgen
☐ Kare
☐ Dikdörtgen



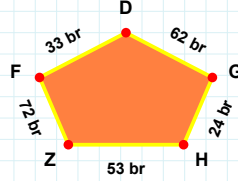
[EO] kenarı hangi şeklin kenarıdır?

- ☐ Üçgen
☐ Kare
☐ Dikdörtgen



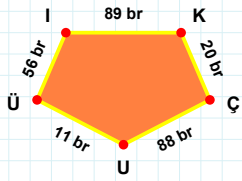
53 br hangi şeklin kenarıdır?

- ☐ Dikey Dikdörtgen
☐ Ters Beşgen
☐ Beşgen



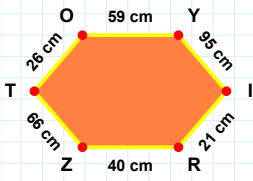
[GU] kenarı hangi şeklin kenarıdır?

- ☐ Beşgen
☐ Ters Beşgen
☐ Dikey Dikdörtgen



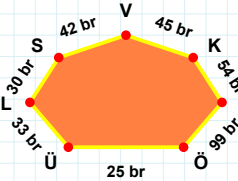
[TE] kenarı hangi şeklin kenarıdır?

- ☐ Beşgen
☐ Ters Beşgen
☐ Dikey Dikdörtgen



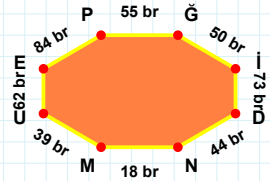
[DN] kenarı hangi şeklin kenarıdır?

- ☐ Sekizgen
☐ Yediggen
☐ Altıgen



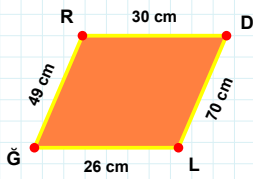
[RZ] kenarı hangi şeklin kenarıdır?

- ☐ Yediggen
☐ Sekizgen
☐ Altıgen



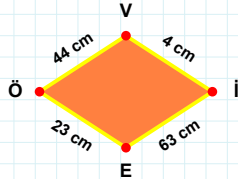
25 br hangi şeklin kenarıdır?

- ☐ Sekizgen
☐ Yediggen
☐ Altıgen



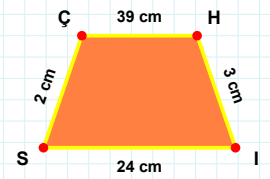
[CH] kenarı hangi şeklin kenarıdır?

- ☐ Yamuk
☐ Eşkenar Dörtgen
☐ Paralelkenar



[GR] kenarı hangi şeklin kenarıdır?

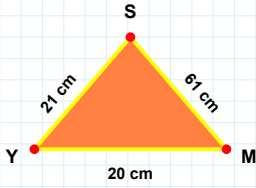
- ☐ Paralelkenar
☐ Yamuk
☐ Eşkenar Dörtgen



44 cm hangi şeklin kenarıdır?

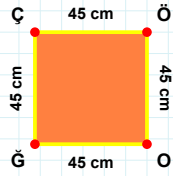
- ☐ Paralelkenar
☐ Eşkenar Dörtgen
☐ Yamuk

SORU: Aşağıdaki şekilleri inceleyiniz. Verilen kenar bilgisinin hangi şekle ait olduğunu işaretleyiniz.



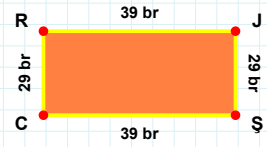
[YŞ] kenarı hangi şeklin kenarıdır?

- ☐ Kare
☐ Dikdörtgen
☐ Üçgen



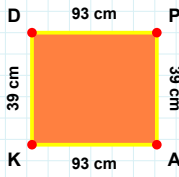
[YM] kenarı hangi şeklin kenarıdır?

- ☐ Kare
☐ Üçgen
☐ Dikdörtgen



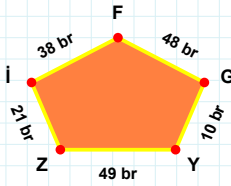
[ÖÖ] kenarı hangi şeklin kenarıdır?

- ☐ Dikdörtgen
☐ Üçgen
☐ Kare



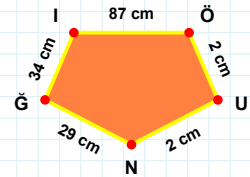
[ÖÜ] kenarı hangi şeklin kenarıdır?

- ☐ Beşgen
☐ Ters Beşgen
☐ Dikey Dikdörtgen



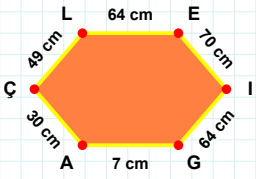
[AK] kenarı hangi şeklin kenarıdır?

- ☐ Ters Beşgen
☐ Dikey Dikdörtgen
☐ Beşgen



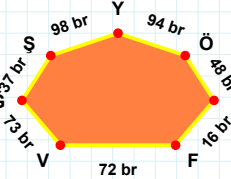
48 br hangi şeklin kenarıdır?

- ☐ Ters Beşgen
☐ Dikey Dikdörtgen
☐ Beşgen



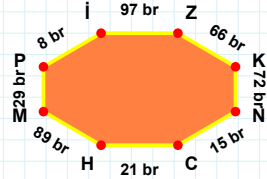
48 br hangi şeklin kenarıdır?

- ☐ Altıgen
☐ Sekizgen
☐ Yedigen



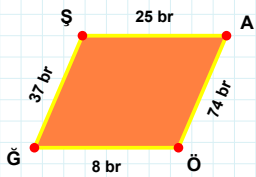
[HM] kenarı hangi şeklin kenarıdır?

- ☐ Altıgen
☐ Sekizgen
☐ Yedigen



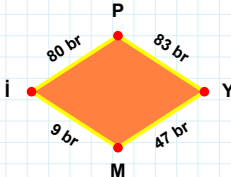
[İG] kenarı hangi şeklin kenarıdır?

- ☐ Sekizgen
☐ Yedigen
☐ Altıgen



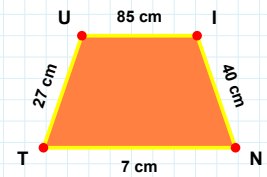
83 br hangi şeklin kenarıdır?

- ☐ Paralelkenar
☐ Yamuk
☐ Eşkenar Dörtgen



[İN] kenarı hangi şeklin kenarıdır?

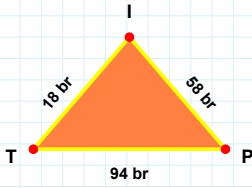
- ☐ Yamuk
☐ Paralelkenar
☐ Eşkenar Dörtgen



[AÖ] kenarı hangi şeklin kenarıdır?

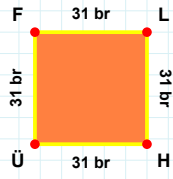
- ☐ Yamuk
☐ Eşkenar Dörtgen
☐ Paralelkenar

SORU: Aşağıdaki şekilleri inceleyiniz. Verilen kenar bilgisinin hangi şekle ait olduğunu işaretleyiniz.



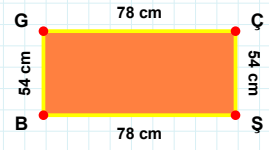
|ÇŞ| kenarı hangi şeklin kenarıdır?

- ☐ Kare
☐ Dikdörtgen
☐ Üçgen



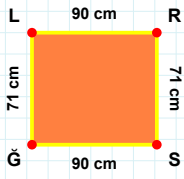
|PI| kenarı hangi şeklin kenarıdır?

- ☐ Kare
☐ Üçgen
☐ Dikdörtgen



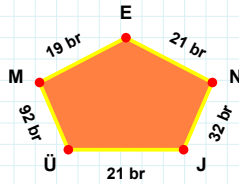
|HÜ| kenarı hangi şeklin kenarıdır?

- ☐ Üçgen
☐ Kare
☐ Dikdörtgen



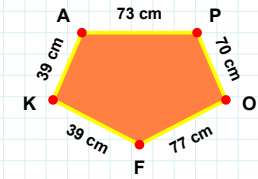
19 br hangi şeklin kenarıdır?

- ☐ Beşgen
☐ Dikey Dikdörtgen
☐ Ters Beşgen



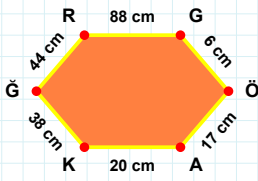
|OF| kenarı hangi şeklin kenarıdır?

- ☐ Beşgen
☐ Dikey Dikdörtgen
☐ Ters Beşgen



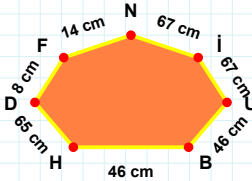
|RS| kenarı hangi şeklin kenarıdır?

- ☐ Beşgen
☐ Dikey Dikdörtgen
☐ Ters Beşgen



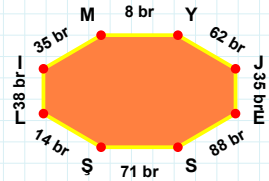
65 cm hangi şeklin kenarıdır?

- ☐ Sekizgen
☐ Altıgen
☐ Yediggen



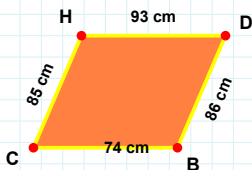
|YJ| kenarı hangi şeklin kenarıdır?

- ☐ Yediggen
☐ Altıgen
☐ Sekizgen



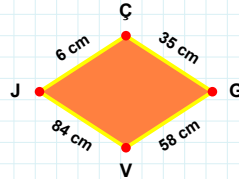
|KG| kenarı hangi şeklin kenarıdır?

- ☐ Yediggen
☐ Altıgen
☐ Sekizgen



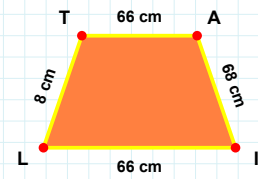
|IL| kenarı hangi şeklin kenarıdır?

- ☐ Eşkenar Dörtgen
☐ Yamuk
☐ Paralelkenar



|DB| kenarı hangi şeklin kenarıdır?

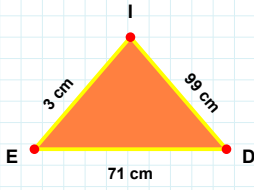
- ☐ Paralelkenar
☐ Yamuk
☐ Eşkenar Dörtgen



58 cm hangi şeklin kenarıdır?

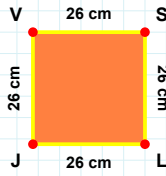
- ☐ Eşkenar Dörtgen
☐ Yamuk
☐ Paralelkenar

SORU: Aşağıdaki şekilleri inceleyiniz. Verilen kenar bilgisinin hangi şekle ait olduğunu işaretleyiniz.



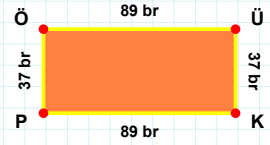
[PÖ] kenarı hangi şeklin kenarıdır?

- ☐ Üçgen
☐ Dikdörtgen
☐ Kare



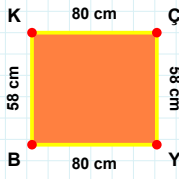
[ED] kenarı hangi şeklin kenarıdır?

- ☐ Kare
☐ Dikdörtgen
☐ Üçgen



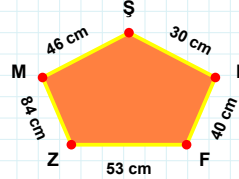
[JV] kenarı hangi şeklin kenarıdır?

- ☐ Üçgen
☐ Dikdörtgen
☐ Kare



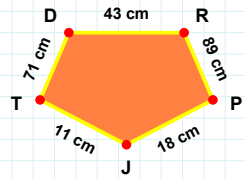
30 cm hangi şeklin kenarıdır?

- ☐ Dikey Dikdörtgen
☐ Ters Beşgen
☐ Beşgen



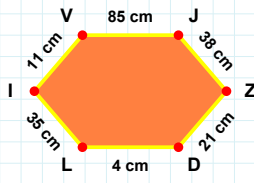
[JT] kenarı hangi şeklin kenarıdır?

- ☐ Dikey Dikdörtgen
☐ Beşgen
☐ Ters Beşgen



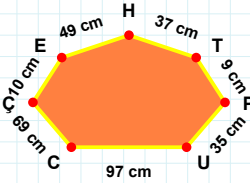
[ÇY] kenarı hangi şeklin kenarıdır?

- ☐ Ters Beşgen
☐ Beşgen
☐ Dikey Dikdörtgen



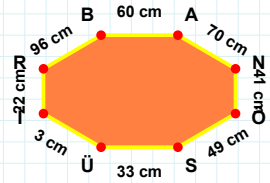
[İR] kenarı hangi şeklin kenarıdır?

- ☐ Yedigen
☐ Sekizgen
☐ Altıgen



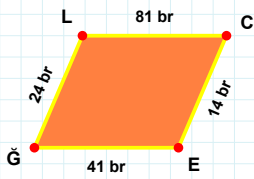
[DL] kenarı hangi şeklin kenarıdır?

- ☐ Altıgen
☐ Yedigen
☐ Sekizgen



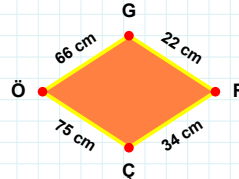
69 cm hangi şeklin kenarıdır?

- ☐ Sekizgen
☐ Yedigen
☐ Altıgen



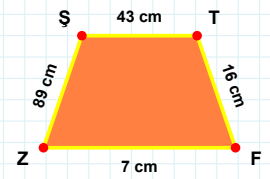
66 cm hangi şeklin kenarıdır?

- ☐ Yamuk
☐ Paralelkenar
☐ Eşkenar Dörtgen



[ŞT] kenarı hangi şeklin kenarıdır?

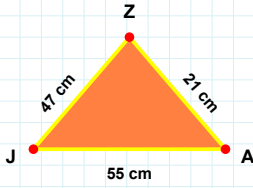
- ☐ Yamuk
☐ Eşkenar Dörtgen
☐ Paralelkenar



[EĞ] kenarı hangi şeklin kenarıdır?

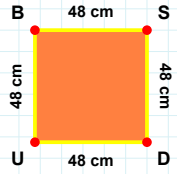
- ☐ Paralelkenar
☐ Eşkenar Dörtgen
☐ Yamuk

SORU: Aşağıdaki şekilleri inceleyiniz. Verilen kenar bilgisinin hangi şekle ait olduğunu işaretleyiniz.



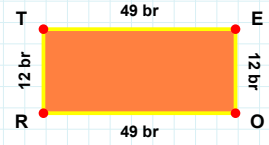
[UB] kenarı hangi şeklin kenarıdır?

- ☐ Kare
☐ Üçgen
☐ Dikdörtgen



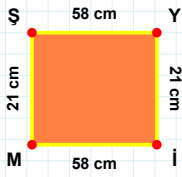
[OR] kenarı hangi şeklin kenarıdır?

- ☐ Kare
☐ Dikdörtgen
☐ Üçgen



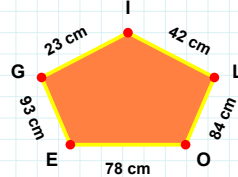
[JA] kenarı hangi şeklin kenarıdır?

- ☐ Üçgen
☐ Dikdörtgen
☐ Kare



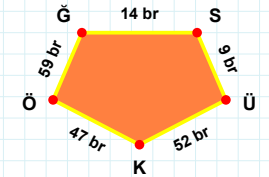
23 cm hangi şeklin kenarıdır?

- ☐ Ters Beşgen
☐ Dikey Dikdörtgen
☐ Beşgen



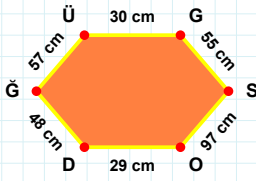
[KÖ] kenarı hangi şeklin kenarıdır?

- ☐ Dikey Dikdörtgen
☐ Ters Beşgen
☐ Beşgen



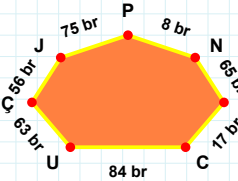
[MS] kenarı hangi şeklin kenarıdır?

- ☐ Beşgen
☐ Ters Beşgen
☐ Dikey Dikdörtgen



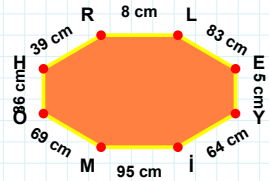
8 br hangi şeklin kenarıdır?

- ☐ Yedigen
☐ Sekizgen
☐ Altıgen



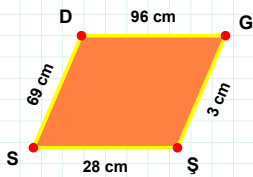
[HR] kenarı hangi şeklin kenarıdır?

- ☐ Yedigen
☐ Sekizgen
☐ Altıgen



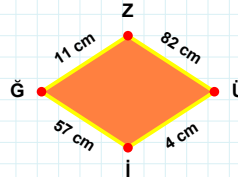
[Ü] kenarı hangi şeklin kenarıdır?

- ☐ Altıgen
☐ Sekizgen
☐ Yedigen



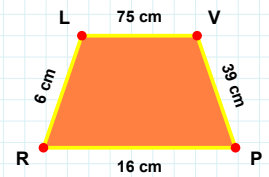
[LV] kenarı hangi şeklin kenarıdır?

- ☐ Paralelkenar
☐ Eşkenar Dörtgen
☐ Yamuk



[ŞS] kenarı hangi şeklin kenarıdır?

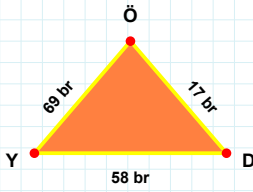
- ☐ Eşkenar Dörtgen
☐ Yamuk
☐ Paralelkenar



57 cm hangi şeklin kenarıdır?

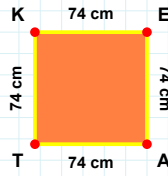
- ☐ Paralelkenar
☐ Eşkenar Dörtgen
☐ Yamuk

SORU: Aşağıdaki şekilleri inceleyiniz. Verilen kenar bilgisinin hangi şekle ait olduğunu işaretleyiniz.



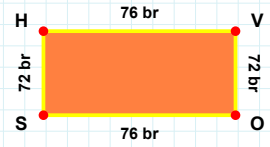
[SH] kenarı hangi şeklin kenarıdır?

- ☐ Üçgen
☐ Kare
☐ Dikdörtgen



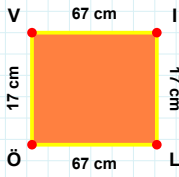
[YD] kenarı hangi şeklin kenarıdır?

- ☐ Kare
☐ Üçgen
☐ Dikdörtgen



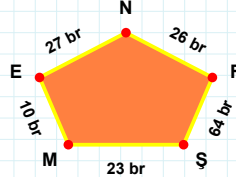
[AT] kenarı hangi şeklin kenarıdır?

- ☐ Dikdörtgen
☐ Üçgen
☐ Kare



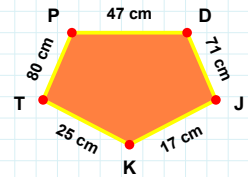
[JK] kenarı hangi şeklin kenarıdır?

- ☐ Ters Beşgen
☐ Dikey Dikdörtgen
☐ Beşgen



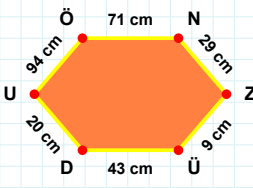
[İL] kenarı hangi şeklin kenarıdır?

- ☐ Ters Beşgen
☐ Dikey Dikdörtgen
☐ Beşgen



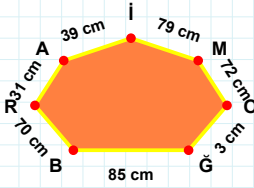
10 br hangi şeklin kenarıdır?

- ☐ Dikey Dikdörtgen
☐ Ters Beşgen
☐ Beşgen



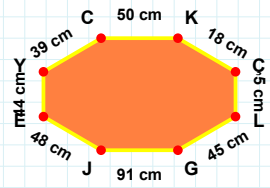
[CK] kenarı hangi şeklin kenarıdır?

- ☐ Sekizgen
☐ Yedigen
☐ Altıgen



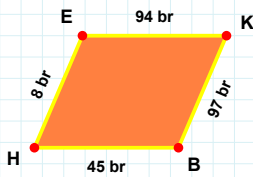
[ÜÖ] kenarı hangi şeklin kenarıdır?

- ☐ Sekizgen
☐ Yedigen
☐ Altıgen



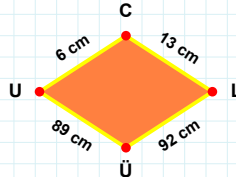
70 cm hangi şeklin kenarıdır?

- ☐ Yedigen
☐ Altıgen
☐ Sekizgen



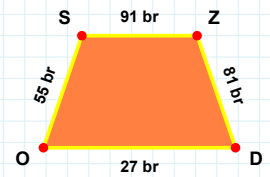
[ZD] kenarı hangi şeklin kenarıdır?

- ☐ Yamuk
☐ Eşkenar Dörtgen
☐ Paralelkenar



[HE] kenarı hangi şeklin kenarıdır?

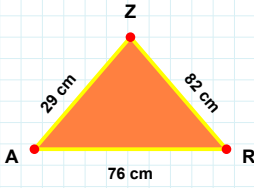
- ☐ Yamuk
☐ Eşkenar Dörtgen
☐ Paralelkenar



89 cm hangi şeklin kenarıdır?

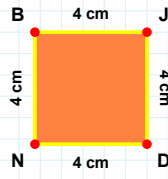
- ☐ Yamuk
☐ Paralelkenar
☐ Eşkenar Dörtgen

SORU: Aşağıdaki şekilleri inceleyiniz. Verilen kenar bilgisinin hangi şekle ait olduğunu işaretleyiniz.



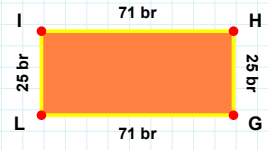
[JD] kenarı hangi şeklin kenarıdır?

- ☐ Kare
☐ Üçgen
☐ Dikdörtgen



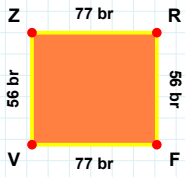
[JH] kenarı hangi şeklin kenarıdır?

- ☐ Dikdörtgen
☐ Üçgen
☐ Kare



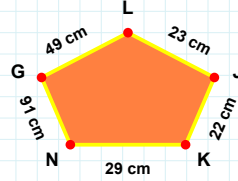
[RZ] kenarı hangi şeklin kenarıdır?

- ☐ Kare
☐ Dikdörtgen
☐ Üçgen



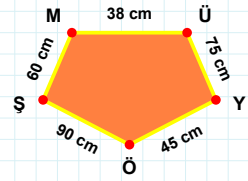
91 cm hangi şeklin kenarıdır?

- ☐ Ters Beşgen
☐ Dikey Dikdörtgen
☐ Beşgen



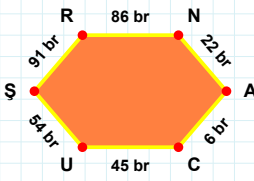
[ÜY] kenarı hangi şeklin kenarıdır?

- ☐ Beşgen
☐ Dikey Dikdörtgen
☐ Ters Beşgen



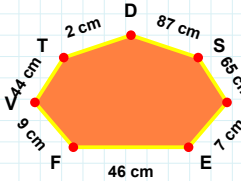
[ZR] kenarı hangi şeklin kenarıdır?

- ☐ Dikey Dikdörtgen
☐ Ters Beşgen
☐ Beşgen



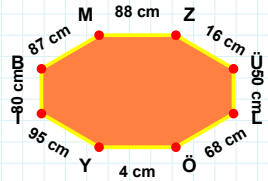
[LÖ] kenarı hangi şeklin kenarıdır?

- ☐ Sekizgen
☐ Altıgen
☐ Yedigen



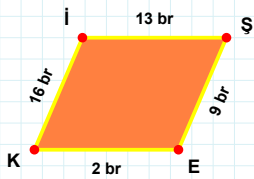
[SR] kenarı hangi şeklin kenarıdır?

- ☐ Yedigen
☐ Sekizgen
☐ Altıgen



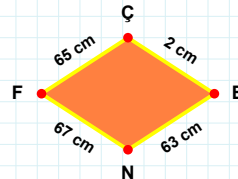
9 cm hangi şeklin kenarıdır?

- ☐ Sekizgen
☐ Yedigen
☐ Altıgen



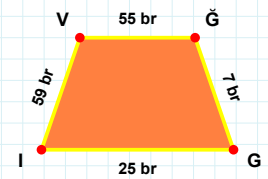
[VG] kenarı hangi şeklin kenarıdır?

- ☐ Yamuk
☐ Eşkenar Dörtgen
☐ Paralelkenar



[Kİ] kenarı hangi şeklin kenarıdır?

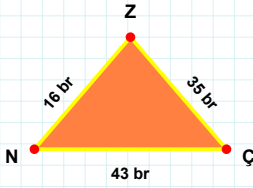
- ☐ Eşkenar Dörtgen
☐ Paralelkenar
☐ Yamuk



67 cm hangi şeklin kenarıdır?

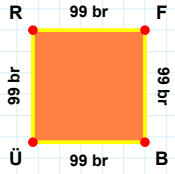
- ☐ Paralelkenar
☐ Yamuk
☐ Eşkenar Dörtgen

SORU: Aşağıdaki şekilleri inceleyiniz. Verilen kenar bilgisinin hangi şekle ait olduğunu işaretleyiniz.



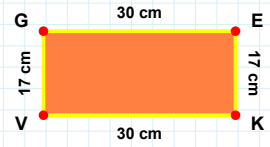
[ÜR] kenarı hangi şeklin kenarıdır?

- ☐ Dikdörtgen
☐ Kare
☐ Üçgen



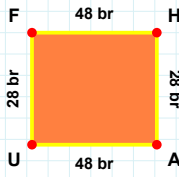
[KV] kenarı hangi şeklin kenarıdır?

- ☐ Üçgen
☐ Kare
☐ Dikdörtgen



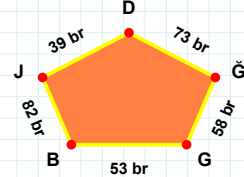
[ÇZ] kenarı hangi şeklin kenarıdır?

- ☐ Kare
☐ Dikdörtgen
☐ Üçgen



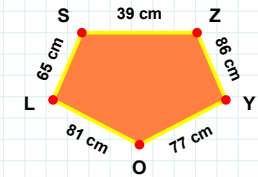
[OL] kenarı hangi şeklin kenarıdır?

- ☐ Dikey Dikdörtgen
☐ Ters Beşgen
☐ Beşgen



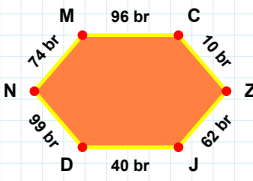
[AU] kenarı hangi şeklin kenarıdır?

- ☐ Beşgen
☐ Ters Beşgen
☐ Dikey Dikdörtgen



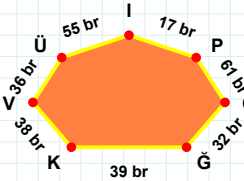
73 br hangi şeklin kenarıdır?

- ☐ Ters Beşgen
☐ Beşgen
☐ Dikey Dikdörtgen



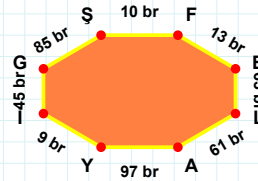
17 br hangi şeklin kenarıdır?

- ☐ Altıgen
☐ Sekizgen
☐ Yedigen



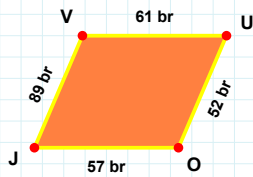
[Yİ] kenarı hangi şeklin kenarıdır?

- ☐ Altıgen
☐ Sekizgen
☐ Yedigen



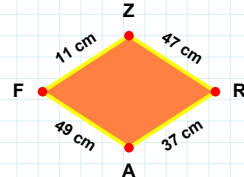
[ZJ] kenarı hangi şeklin kenarıdır?

- ☐ Altıgen
☐ Yedigen
☐ Sekizgen



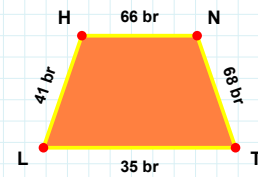
[LH] kenarı hangi şeklin kenarıdır?

- ☐ Yamuk
☐ Paralelkenar
☐ Eşkenar Dörtgen



[OJ] kenarı hangi şeklin kenarıdır?

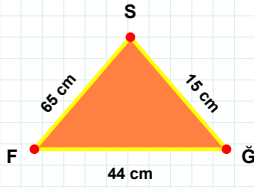
- ☐ Yamuk
☐ Eşkenar Dörtgen
☐ Paralelkenar



47 cm hangi şeklin kenarıdır?

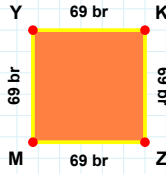
- ☐ Yamuk
☐ Paralelkenar
☐ Eşkenar Dörtgen

SORU: Aşağıdaki şekilleri inceleyiniz. Verilen kenar bilgisinin hangi şekle ait olduğunu işaretleyiniz.



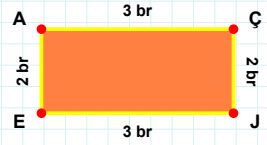
[JE] kenarı hangi şeklin kenarıdır?

- ☐ Dikdörtgen
☐ Üçgen
☐ Kare



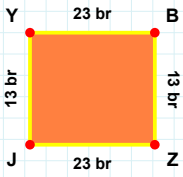
[ĞS] kenarı hangi şeklin kenarıdır?

- ☐ Üçgen
☐ Kare
☐ Dikdörtgen



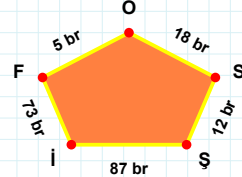
[YK] kenarı hangi şeklin kenarıdır?

- ☐ Kare
☐ Üçgen
☐ Dikdörtgen



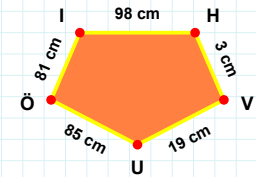
12 br hangi şeklin kenarıdır?

- ☐ Dikey Dikdörtgen
☐ Ters Beşgen
☐ Beşgen



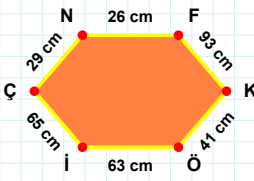
[Öİ] kenarı hangi şeklin kenarıdır?

- ☐ Beşgen
☐ Ters Beşgen
☐ Dikey Dikdörtgen



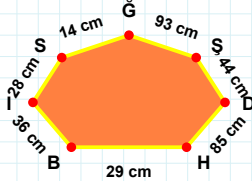
[JY] kenarı hangi şeklin kenarıdır?

- ☐ Ters Beşgen
☐ Dikey Dikdörtgen
☐ Beşgen



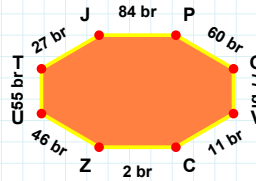
[GV] kenarı hangi şeklin kenarıdır?

- ☐ Sekizgen
☐ Altıgen
☐ Yediggen



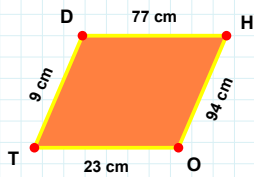
[ÇN] kenarı hangi şeklin kenarıdır?

- ☐ Sekizgen
☐ Altıgen
☐ Yediggen



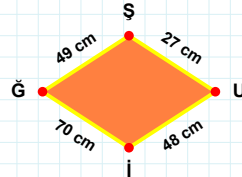
85 cm hangi şeklin kenarıdır?

- ☐ Altıgen
☐ Yediggen
☐ Sekizgen



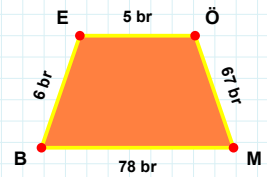
48 cm hangi şeklin kenarıdır?

- ☐ Eşkenar Dörtgen
☐ Paralelkenar
☐ Yamuk



[EÖ] kenarı hangi şeklin kenarıdır?

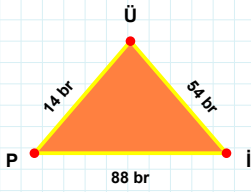
- ☐ Yamuk
☐ Paralelkenar
☐ Eşkenar Dörtgen



[HO] kenarı hangi şeklin kenarıdır?

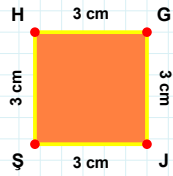
- ☐ Yamuk
☐ Paralelkenar
☐ Eşkenar Dörtgen

SORU: Aşağıdaki şekilleri inceleyiniz. Verilen kenar bilgisinin hangi şekle ait olduğunu işaretleyiniz.



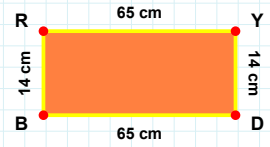
[YD] kenarı hangi şeklin kenarıdır?

- ☐ Kare
☐ Dikdörtgen
☐ Üçgen



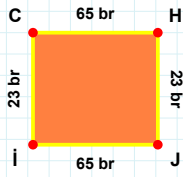
[PJ] kenarı hangi şeklin kenarıdır?

- ☐ Kare
☐ Üçgen
☐ Dikdörtgen



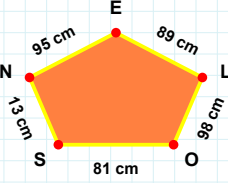
[GJ] kenarı hangi şeklin kenarıdır?

- ☐ Üçgen
☐ Kare
☐ Dikdörtgen



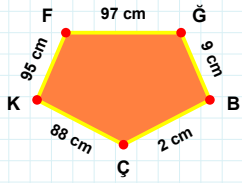
[ÇK] kenarı hangi şeklin kenarıdır?

- ☐ Beşgen
☐ Dikey Dikdörtgen
☐ Ters Beşgen



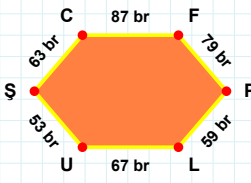
[HJ] kenarı hangi şeklin kenarıdır?

- ☐ Ters Beşgen
☐ Dikey Dikdörtgen
☐ Beşgen



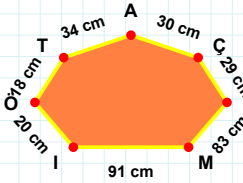
13 cm hangi şeklin kenarıdır?

- ☐ Dikey Dikdörtgen
☐ Ters Beşgen
☐ Beşgen



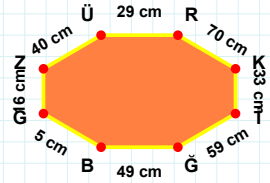
91 cm hangi şeklin kenarıdır?

- ☐ Yedigen
☐ Altıgen
☐ Sekizgen



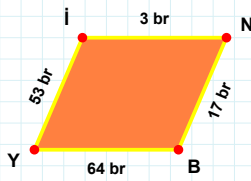
[ZÜ] kenarı hangi şeklin kenarıdır?

- ☐ Sekizgen
☐ Yedigen
☐ Altıgen



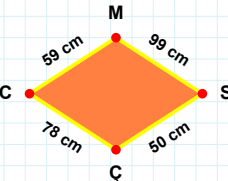
[FP] kenarı hangi şeklin kenarıdır?

- ☐ Sekizgen
☐ Altıgen
☐ Yedigen



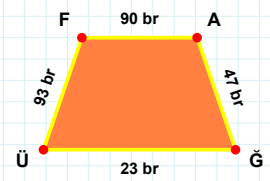
99 cm hangi şeklin kenarıdır?

- ☐ Paralelkenar
☐ Eşkenar Dörtgen
☐ Yamuk



[AĞ] kenarı hangi şeklin kenarıdır?

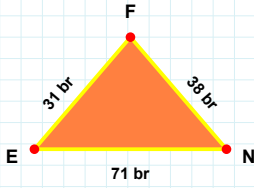
- ☐ Yamuk
☐ Paralelkenar
☐ Eşkenar Dörtgen



[İN] kenarı hangi şeklin kenarıdır?

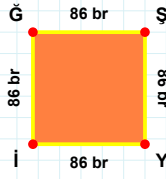
- ☐ Yamuk
☐ Paralelkenar
☐ Eşkenar Dörtgen

SORU: Aşağıdaki şekilleri inceleyiniz. Verilen kenar bilgisinin hangi şekle ait olduğunu işaretleyiniz.



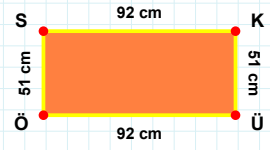
|ÜÖ| kenarı hangi şeklin kenarıdır?

- ☐ Kare
☐ Dikdörtgen
☐ Üçgen



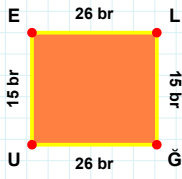
|EN| kenarı hangi şeklin kenarıdır?

- ☐ Üçgen
☐ Kare
☐ Dikdörtgen



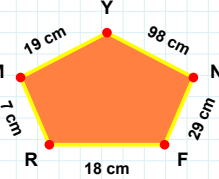
|ŞY| kenarı hangi şeklin kenarıdır?

- ☐ Kare
☐ Dikdörtgen
☐ Üçgen



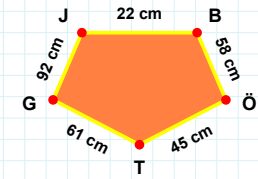
19 cm hangi şeklin kenarıdır?

- ☐ Dikey Dikdörtgen
☐ Ters Beşgen
☐ Beşgen



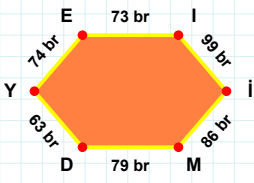
|JB| kenarı hangi şeklin kenarıdır?

- ☐ Beşgen
☐ Ters Beşgen
☐ Dikey Dikdörtgen



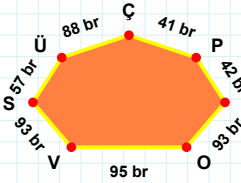
|ĞÜ| kenarı hangi şeklin kenarıdır?

- ☐ Ters Beşgen
☐ Dikey Dikdörtgen
☐ Beşgen



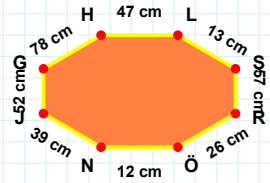
|RÖ| kenarı hangi şeklin kenarıdır?

- ☐ Sekizgen
☐ Altıgen
☐ Yediggen



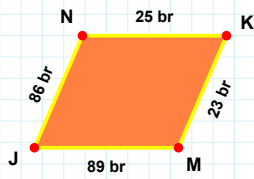
|YE| kenarı hangi şeklin kenarıdır?

- ☐ Sekizgen
☐ Yediggen
☐ Altıgen



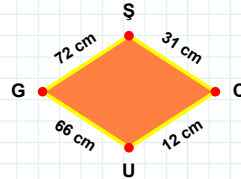
57 br hangi şeklin kenarıdır?

- ☐ Yediggen
☐ Sekizgen
☐ Altıgen



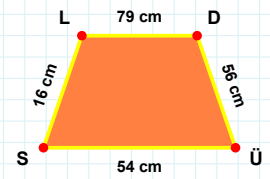
66 cm hangi şeklin kenarıdır?

- ☐ Eşkenar Dörtgen
☐ Paralelkenar
☐ Yamuk



|DÜ| kenarı hangi şeklin kenarıdır?

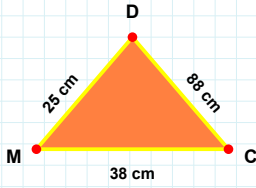
- ☐ Eşkenar Dörtgen
☐ Yamuk
☐ Paralelkenar



|KM| kenarı hangi şeklin kenarıdır?

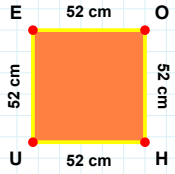
- ☐ Paralelkenar
☐ Yamuk
☐ Eşkenar Dörtgen

SORU: Aşağıdaki şekilleri inceleyiniz. Verilen kenar bilgisinin hangi şekle ait olduğunu işaretleyiniz.



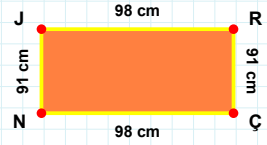
[UE] kenarı hangi şeklin kenarıdır?

- ☐ Kare
☐ Üçgen
☐ Dikdörtgen



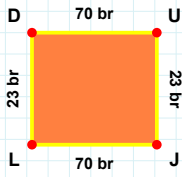
[ÇN] kenarı hangi şeklin kenarıdır?

- ☐ Kare
☐ Dikdörtgen
☐ Üçgen



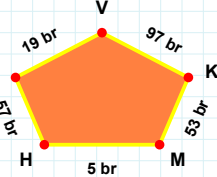
[DM] kenarı hangi şeklin kenarıdır?

- ☐ Dikdörtgen
☐ Üçgen
☐ Kare



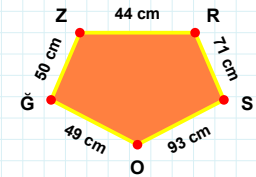
[OĞ] kenarı hangi şeklin kenarıdır?

- ☐ Beşgen
☐ Ters Beşgen
☐ Dikey Dikdörtgen



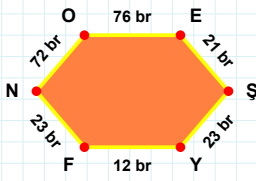
[DU] kenarı hangi şeklin kenarıdır?

- ☐ Beşgen
☐ Ters Beşgen
☐ Dikey Dikdörtgen



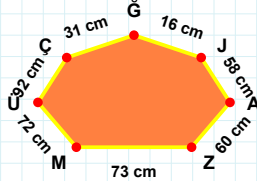
53 br hangi şeklin kenarıdır?

- ☐ Dikey Dikdörtgen
☐ Ters Beşgen
☐ Beşgen



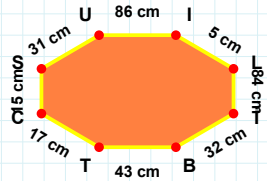
16 cm hangi şeklin kenarıdır?

- ☐ Yedigen
☐ Sekizgen
☐ Altıgen



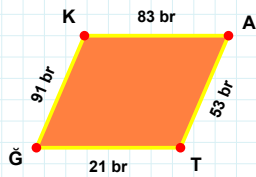
[CS] kenarı hangi şeklin kenarıdır?

- ☐ Yedigen
☐ Altıgen
☐ Sekizgen



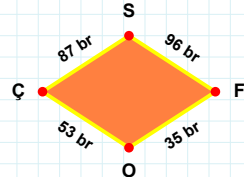
[EŞ] kenarı hangi şeklin kenarıdır?

- ☐ Altıgen
☐ Sekizgen
☐ Yedigen



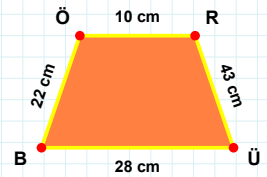
96 br hangi şeklin kenarıdır?

- ☐ Yamuk
☐ Paralelkenar
☐ Eşkenar Dörtgen



[ÜB] kenarı hangi şeklin kenarıdır?

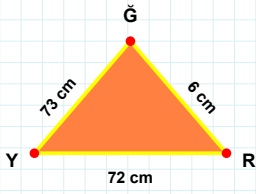
- ☐ Eşkenar Dörtgen
☐ Paralelkenar
☐ Yamuk



[ĞK] kenarı hangi şeklin kenarıdır?

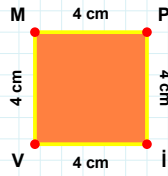
- ☐ Yamuk
☐ Paralelkenar
☐ Eşkenar Dörtgen

SORU: Aşağıdaki şekilleri inceleyiniz. Verilen kenar bilgisinin hangi şekle ait olduğunu işaretleyiniz.



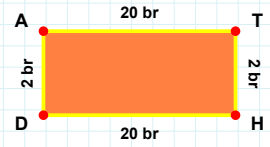
[MP] kenarı hangi şeklin kenarıdır?

- ☐ Kare
☐ Üçgen
☐ Dikdörtgen



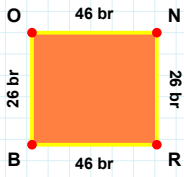
[TH] kenarı hangi şeklin kenarıdır?

- ☐ Dikdörtgen
☐ Üçgen
☐ Kare



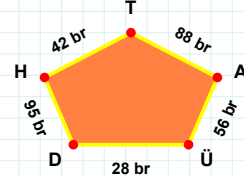
[YR] kenarı hangi şeklin kenarıdır?

- ☐ Dikdörtgen
☐ Kare
☐ Üçgen



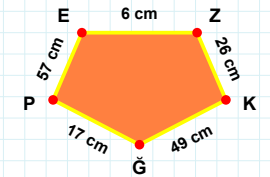
56 br hangi şeklin kenarıdır?

- ☐ Beşgen
☐ Dikey Dikdörtgen
☐ Ters Beşgen



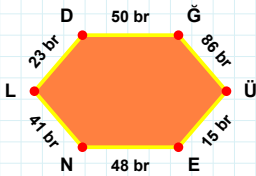
[GP] kenarı hangi şeklin kenarıdır?

- ☐ Beşgen
☐ Dikey Dikdörtgen
☐ Ters Beşgen



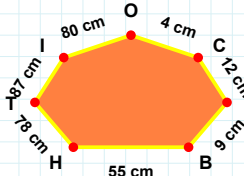
[RB] kenarı hangi şeklin kenarıdır?

- ☐ Beşgen
☐ Ters Beşgen
☐ Dikey Dikdörtgen



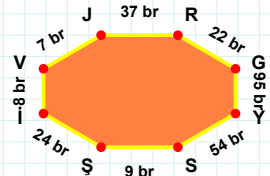
[JR] kenarı hangi şeklin kenarıdır?

- ☐ Yedigen
☐ Sekizgen
☐ Altigen



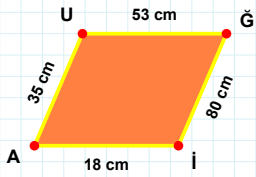
[ÜE] kenarı hangi şeklin kenarıdır?

- ☐ Altigen
☐ Sekizgen
☐ Yedigen



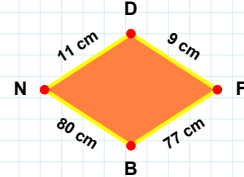
87 cm hangi şeklin kenarıdır?

- ☐ Sekizgen
☐ Yedigen
☐ Altigen



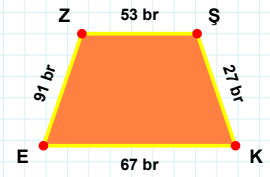
11 cm hangi şeklin kenarıdır?

- ☐ Yamuk
☐ Paralelkenar
☐ Eşkenar Dörtgen



[KE] kenarı hangi şeklin kenarıdır?

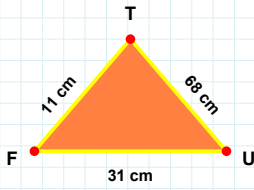
- ☐ Eşkenar Dörtgen
☐ Yamuk
☐ Paralelkenar



[AU] kenarı hangi şeklin kenarıdır?

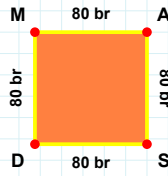
- ☐ Paralelkenar
☐ Yamuk
☐ Eşkenar Dörtgen

SORU: Aşağıdaki şekilleri inceleyiniz. Verilen kenar bilgisinin hangi şekle ait olduğunu işaretleyiniz.



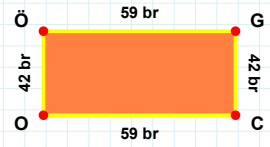
[CO] kenarı hangi şeklin kenarıdır?

- ☐ Üçgen
☐ Kare
☐ Dikdörtgen



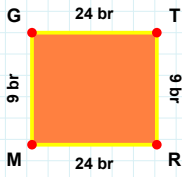
[TF] kenarı hangi şeklin kenarıdır?

- ☐ Dikdörtgen
☐ Kare
☐ Üçgen



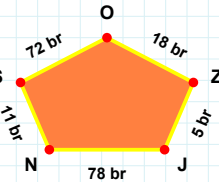
[AS] kenarı hangi şeklin kenarıdır?

- ☐ Üçgen
☐ Kare
☐ Dikdörtgen



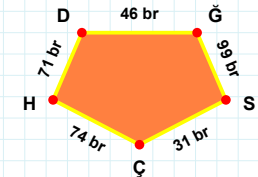
18 br hangi şeklin kenarıdır?

- ☐ Dikey Dikdörtgen
☐ Beşgen
☐ Ters Beşgen



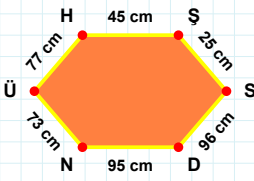
[SÇ] kenarı hangi şeklin kenarıdır?

- ☐ Ters Beşgen
☐ Dikey Dikdörtgen
☐ Beşgen



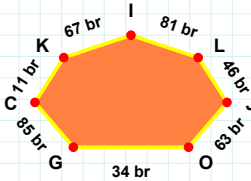
[GT] kenarı hangi şeklin kenarıdır?

- ☐ Ters Beşgen
☐ Beşgen
☐ Dikey Dikdörtgen



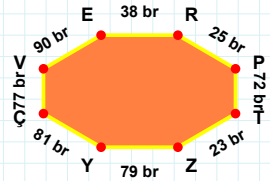
[ÇV] kenarı hangi şeklin kenarıdır?

- ☐ Sekizgen
☐ Yedigen
☐ Altıgen



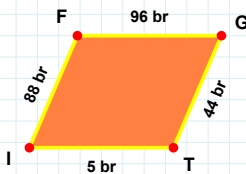
[ÜH] kenarı hangi şeklin kenarıdır?

- ☐ Altıgen
☐ Sekizgen
☐ Yedigen



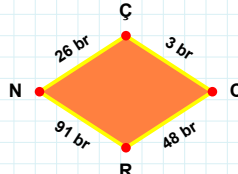
67 br hangi şeklin kenarıdır?

- ☐ Sekizgen
☐ Altıgen
☐ Yedigen



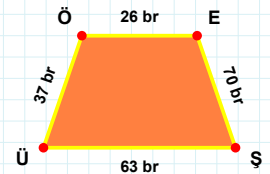
48 br hangi şeklin kenarıdır?

- ☐ Eşkenar Dörtgen
☐ Paralelkenar
☐ Yamuk



[ÜÖ] kenarı hangi şeklin kenarıdır?

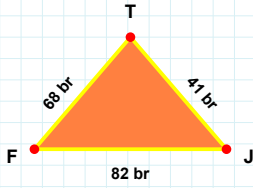
- ☐ Eşkenar Dörtgen
☐ Paralelkenar
☐ Yamuk



[FG] kenarı hangi şeklin kenarıdır?

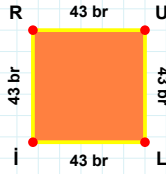
- ☐ Paralelkenar
☐ Eşkenar Dörtgen
☐ Yamuk

SORU: Aşağıdaki şekilleri inceleyiniz. Verilen kenar bilgisinin hangi şekle ait olduğunu işaretleyiniz.



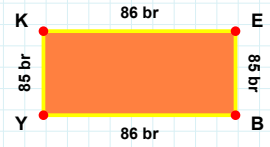
|Lİ| kenarı hangi şeklin kenarıdır?

- ☐ Kare
☐ Üçgen
☐ Dikdörtgen



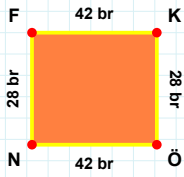
|KE| kenarı hangi şeklin kenarıdır?

- ☐ Kare
☐ Dikdörtgen
☐ Üçgen



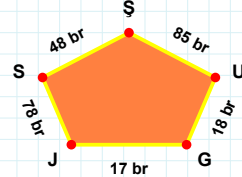
|FJ| kenarı hangi şeklin kenarıdır?

- ☐ Üçgen
☐ Dikdörtgen
☐ Kare



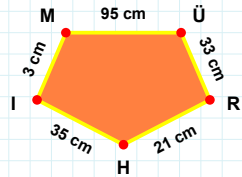
48 br hangi şeklin kenarıdır?

- ☐ Dikey Dikdörtgen
☐ Ters Beşgen
☐ Beşgen



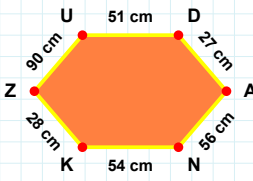
|HI| kenarı hangi şeklin kenarıdır?

- ☐ Dikey Dikdörtgen
☐ Beşgen
☐ Ters Beşgen



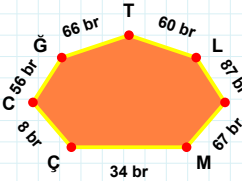
|NF| kenarı hangi şeklin kenarıdır?

- ☐ Dikey Dikdörtgen
☐ Ters Beşgen
☐ Beşgen



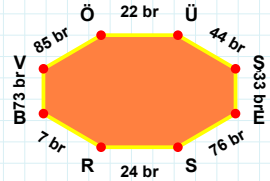
87 br hangi şeklin kenarıdır?

- ☐ Yedigen
☐ Altigen
☐ Sekizgen



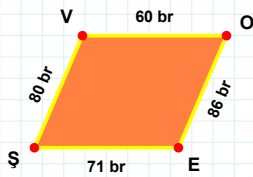
|VÖ| kenarı hangi şeklin kenarıdır?

- ☐ Yedigen
☐ Altigen
☐ Sekizgen



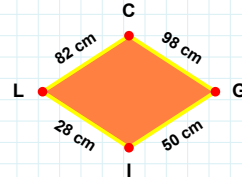
|KZ| kenarı hangi şeklin kenarıdır?

- ☐ Sekizgen
☐ Altigen
☐ Yedigen



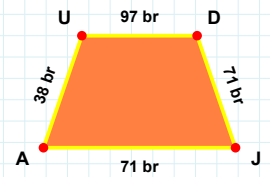
82 cm hangi şeklin kenarıdır?

- ☐ Yamuk
☐ Eşkenar Dörtgen
☐ Paralelkenar



|JA| kenarı hangi şeklin kenarıdır?

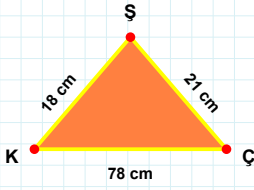
- ☐ Yamuk
☐ Eşkenar Dörtgen
☐ Paralelkenar



|VO| kenarı hangi şeklin kenarıdır?

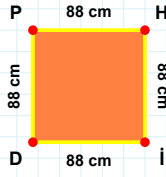
- ☐ Yamuk
☐ Eşkenar Dörtgen
☐ Paralelkenar

SORU: Aşağıdaki şekilleri inceleyiniz. Verilen kenar bilgisinin hangi şekle ait olduğunu işaretleyiniz.



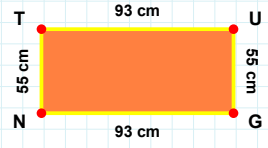
[GN] kenarı hangi şeklin kenarıdır?

- ☐ Dikdörtgen
☐ Üçgen
☐ Kare



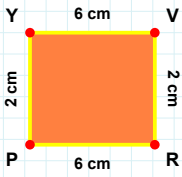
[ŞK] kenarı hangi şeklin kenarıdır?

- ☐ Kare
☐ Dikdörtgen
☐ Üçgen



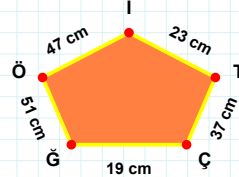
[PH] kenarı hangi şeklin kenarıdır?

- ☐ Kare
☐ Dikdörtgen
☐ Üçgen



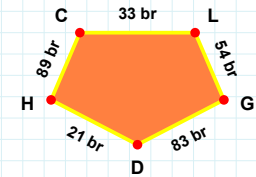
[DH] kenarı hangi şeklin kenarıdır?

- ☐ Ters Beşgen
☐ Dikey Dikdörtgen
☐ Beşgen



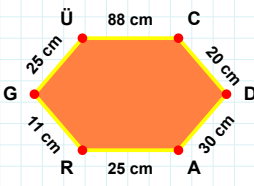
[VR] kenarı hangi şeklin kenarıdır?

- ☐ Ters Beşgen
☐ Beşgen
☐ Dikey Dikdörtgen



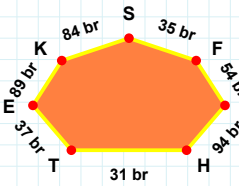
37 cm hangi şeklin kenarıdır?

- ☐ Dikey Dikdörtgen
☐ Beşgen
☐ Ters Beşgen



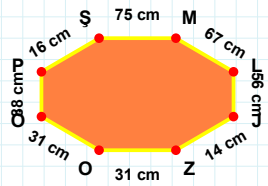
54 br hangi şeklin kenarıdır?

- ☐ Sekizgen
☐ Yedigen
☐ Altigen



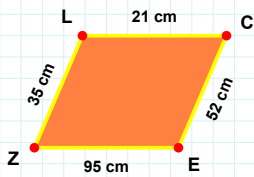
[JZ] kenarı hangi şeklin kenarıdır?

- ☐ Yedigen
☐ Altigen
☐ Sekizgen



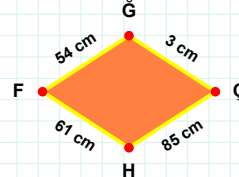
[CD] kenarı hangi şeklin kenarıdır?

- ☐ Yedigen
☐ Altigen
☐ Sekizgen



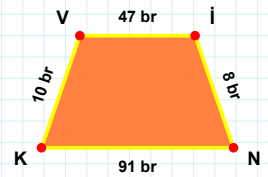
61 cm hangi şeklin kenarıdır?

- ☐ Yamuk
☐ Eşkenar Dörtgen
☐ Paralelkenar



[KV] kenarı hangi şeklin kenarıdır?

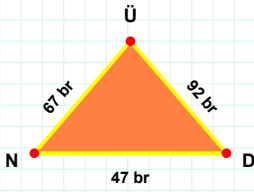
- ☐ Yamuk
☐ Eşkenar Dörtgen
☐ Paralelkenar



[CE] kenarı hangi şeklin kenarıdır?

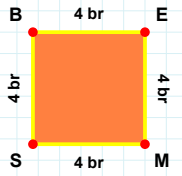
- ☐ Paralelkenar
☐ Eşkenar Dörtgen
☐ Yamuk

SORU: Aşağıdaki şekilleri inceleyiniz. Verilen kenar bilgisinin hangi şekle ait olduğunu işaretleyiniz.



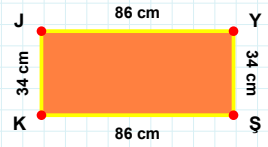
[YŞ] kenarı hangi şeklin kenarıdır?

- ☐ Kare
☐ Dikdörtgen
☐ Üçgen



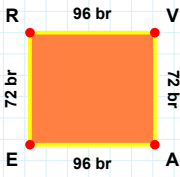
[ND] kenarı hangi şeklin kenarıdır?

- ☐ Kare
☐ Dikdörtgen
☐ Üçgen



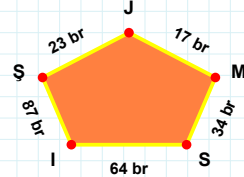
[EM] kenarı hangi şeklin kenarıdır?

- ☐ Üçgen
☐ Kare
☐ Dikdörtgen



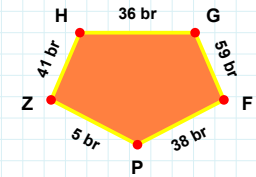
[HG] kenarı hangi şeklin kenarıdır?

- ☐ Ters Beşgen
☐ Dikey Dikdörtgen
☐ Beşgen



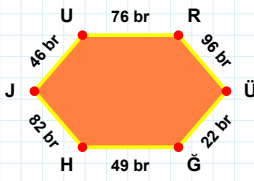
[ER] kenarı hangi şeklin kenarıdır?

- ☐ Beşgen
☐ Dikey Dikdörtgen
☐ Ters Beşgen



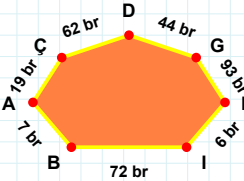
23 br hangi şeklin kenarıdır?

- ☐ Beşgen
☐ Ters Beşgen
☐ Dikey Dikdörtgen



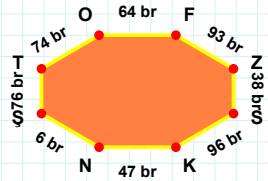
44 br hangi şeklin kenarıdır?

- ☐ Sekizgen
☐ Altıgen
☐ Yediggen



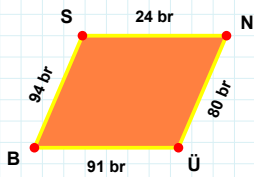
[KN] kenarı hangi şeklin kenarıdır?

- ☐ Altıgen
☐ Yediggen
☐ Sekizgen



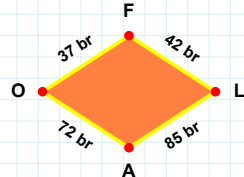
[GH] kenarı hangi şeklin kenarıdır?

- ☐ Yediggen
☐ Sekizgen
☐ Altıgen



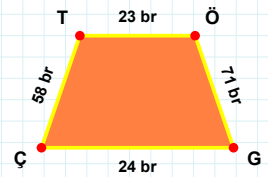
[ÖG] kenarı hangi şeklin kenarıdır?

- ☐ Yamuk
☐ Eşkenar Dörtgen
☐ Paralelkenar



[NÜ] kenarı hangi şeklin kenarıdır?

- ☐ Yamuk
☐ Paralelkenar
☐ Eşkenar Dörtgen



42 br hangi şeklin kenarıdır?

- ☐ Paralelkenar
☐ Yamuk
☐ Eşkenar Dörtgen

SÜREÇ ODAKLI DEĞERLENDİRME ÖLÇEĞİ

Geliştirilmeli (0-109)	İyi (110-187)	Çok İyi (188-265)	Mükemmel (266-312)
<input type="checkbox"/>	<input type="checkbox"/>	<input type="checkbox"/>	<input type="checkbox"/>

Hazırlayan:

Bu bölüme sınıfınızın ilgili kazanıma yönelik genel durumuna ilişkin gözlem ve izlenimlerinizi, öğrencilerinizin bu kazanımla ilgili öğrenme eksikliklerini ve bu eksikliklerin giderilmesi amacıyla yaptığınız/yapmayı planladığınız faaliyetleri not edebilirsiniz.

No	Adı - Soyadı	Toplam Puan	Değerlendirme
1			
2			
3			
4			
5			
6			
7			
8			
9			
10			
11			
12			
13			
14			
15			
16			
17			
18			
19			
20			
21			
22			
23			
24			
25			
26			
27			
28			
29			
30			
31			
32			
33			
34			
35			

Hazırlayan: