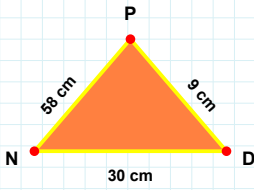
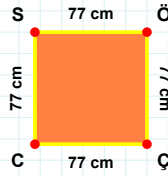


SORU: Aşağıdaki şekilleri inceleyiniz. Verilen kenar bilgisinin hangi şekle ait olduğunu işaretleyiniz.



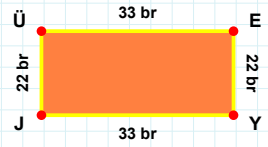
[EY] kenarı hangi şeklin kenarıdır?

- ☐ Üçgen
☐ Dikdörtgen
☐ Kare



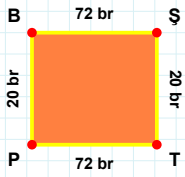
[ND] kenarı hangi şeklin kenarıdır?

- ☐ Üçgen
☐ Kare
☐ Dikdörtgen



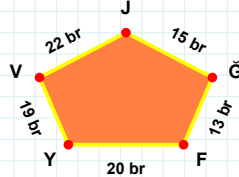
[ÖÇ] kenarı hangi şeklin kenarıdır?

- ☐ Dikdörtgen
☐ Kare
☐ Üçgen



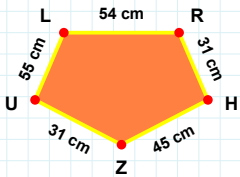
13 br hangi şeklin kenarıdır?

- ☐ Beşgen
☐ Dikey Dikdörtgen
☐ Ters Beşgen



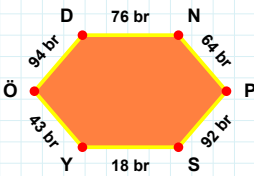
[HZ] kenarı hangi şeklin kenarıdır?

- ☐ Beşgen
☐ Dikey Dikdörtgen
☐ Ters Beşgen



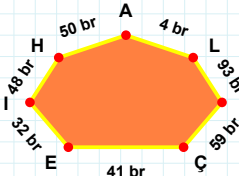
[BŞ] kenarı hangi şeklin kenarıdır?

- ☐ Beşgen
☐ Dikey Dikdörtgen
☐ Ters Beşgen



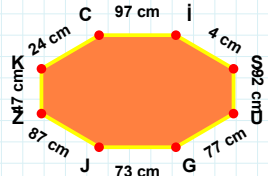
[ŞU] kenarı hangi şeklin kenarıdır?

- ☐ Yedigen
☐ Altıgen
☐ Sekizgen



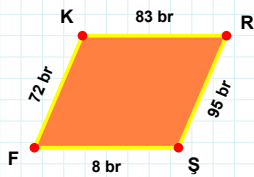
[YÖ] kenarı hangi şeklin kenarıdır?

- ☐ Sekizgen
☐ Yedigen
☐ Altıgen



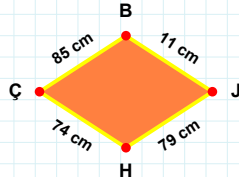
93 br hangi şeklin kenarıdır?

- ☐ Yedigen
☐ Altıgen
☐ Sekizgen



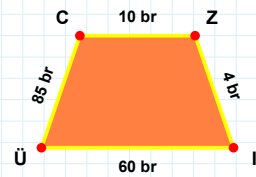
11 cm hangi şeklin kenarıdır?

- ☐ Yamuk
☐ Paralelkenar
☐ Eşkenar Dörtgen



[Ü] kenarı hangi şeklin kenarıdır?

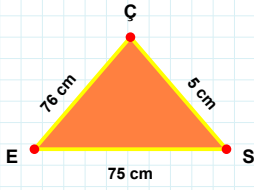
- ☐ Yamuk
☐ Paralelkenar
☐ Eşkenar Dörtgen



[FK] kenarı hangi şeklin kenarıdır?

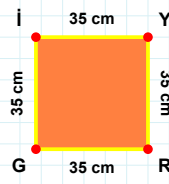
- ☐ Yamuk
☐ Paralelkenar
☐ Eşkenar Dörtgen

SORU: Aşağıdaki şekilleri inceleyiniz. Verilen kenar bilgisinin hangi şekle ait olduğunu işaretleyiniz.



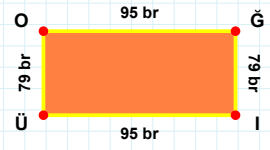
|Ğİ| kenarı hangi şeklin kenarıdır?

- ☐ Dikdörtgen
☐ Kare
☐ Üçgen



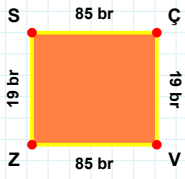
|SÇ| kenarı hangi şeklin kenarıdır?

- ☐ Üçgen
☐ Dikdörtgen
☐ Kare



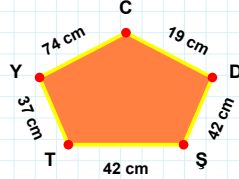
|Gİ| kenarı hangi şeklin kenarıdır?

- ☐ Kare
☐ Dikdörtgen
☐ Üçgen



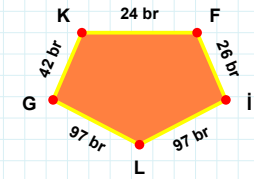
19 cm hangi şeklin kenarıdır?

- ☐ Dikey Dikdörtgen
☐ Ters Beşgen
☐ Beşgen



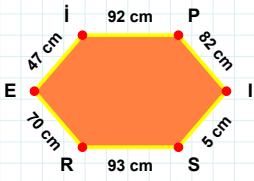
|LG| kenarı hangi şeklin kenarıdır?

- ☐ Ters Beşgen
☐ Beşgen
☐ Dikey Dikdörtgen



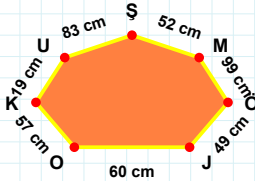
|ZS| kenarı hangi şeklin kenarıdır?

- ☐ Dikey Dikdörtgen
☐ Ters Beşgen
☐ Beşgen



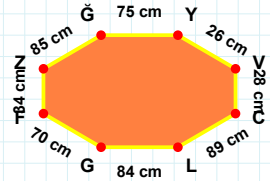
99 cm hangi şeklin kenarıdır?

- ☐ Altıgen
☐ Yediggen
☐ Sekizgen



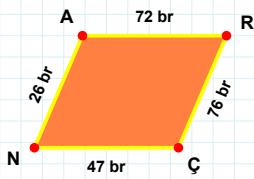
|LG| kenarı hangi şeklin kenarıdır?

- ☐ Sekizgen
☐ Yediggen
☐ Altıgen



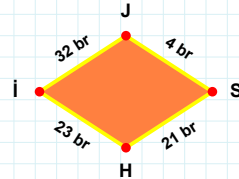
|İS| kenarı hangi şeklin kenarıdır?

- ☐ Altıgen
☐ Sekizgen
☐ Yediggen



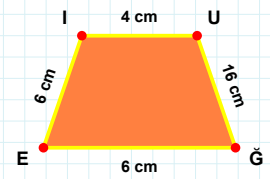
32 br hangi şeklin kenarıdır?

- ☐ Paralelkenar
☐ Yamuk
☐ Eşkenar Dörtgen



|EI| kenarı hangi şeklin kenarıdır?

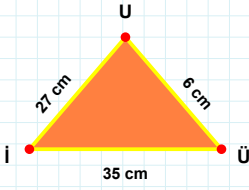
- ☐ Paralelkenar
☐ Eşkenar Dörtgen
☐ Yamuk



|NA| kenarı hangi şeklin kenarıdır?

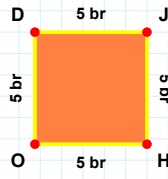
- ☐ Yamuk
☐ Eşkenar Dörtgen
☐ Paralelkenar

SORU: Aşağıdaki şekilleri inceleyiniz. Verilen kenar bilgisinin hangi şekle ait olduğunu işaretleyiniz.



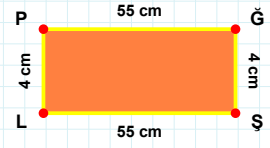
[PĞ] kenarı hangi şeklin kenarıdır?

- ☐ Dikdörtgen
☐ Üçgen
☐ Kare



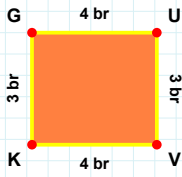
[İÜ] kenarı hangi şeklin kenarıdır?

- ☐ Üçgen
☐ Kare
☐ Dikdörtgen



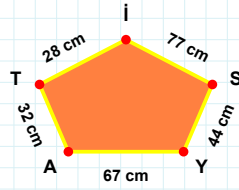
[JH] kenarı hangi şeklin kenarıdır?

- ☐ Üçgen
☐ Kare
☐ Dikdörtgen



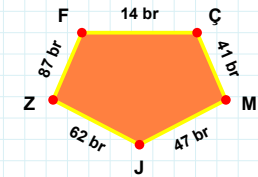
28 cm hangi şeklin kenarıdır?

- ☐ Beşgen
☐ Dikey Dikdörtgen
☐ Ters Beşgen



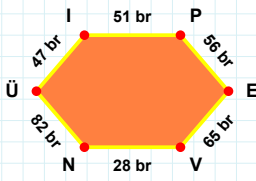
[ÇM] kenarı hangi şeklin kenarıdır?

- ☐ Dikey Dikdörtgen
☐ Beşgen
☐ Ters Beşgen



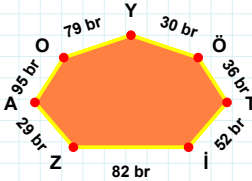
[UV] kenarı hangi şeklin kenarıdır?

- ☐ Ters Beşgen
☐ Dikey Dikdörtgen
☐ Beşgen



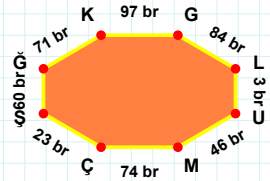
52 br hangi şeklin kenarıdır?

- ☐ Sekizgen
☐ Altıgen
☐ Yedigen



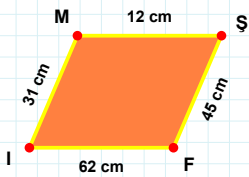
[GL] kenarı hangi şeklin kenarıdır?

- ☐ Sekizgen
☐ Altıgen
☐ Yedigen



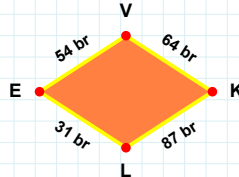
[PE] kenarı hangi şeklin kenarıdır?

- ☐ Sekizgen
☐ Yedigen
☐ Altıgen



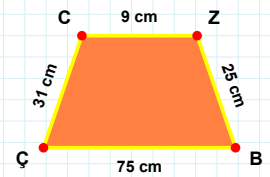
54 br hangi şeklin kenarıdır?

- ☐ Eşkenar Dörtgen
☐ Paralelkenar
☐ Yamuk



[BÇ] kenarı hangi şeklin kenarıdır?

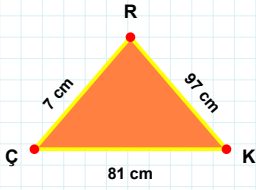
- ☐ Paralelkenar
☐ Eşkenar Dörtgen
☐ Yamuk



[MŞ] kenarı hangi şeklin kenarıdır?

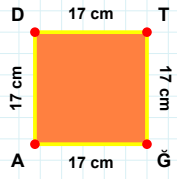
- ☐ Yamuk
☐ Paralelkenar
☐ Eşkenar Dörtgen

SORU: Aşağıdaki şekilleri inceleyiniz. Verilen kenar bilgisinin hangi şekle ait olduğunu işaretleyiniz.



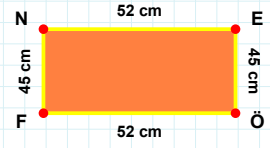
[FN] kenarı hangi şeklin kenarıdır?

- ☐ Kare
☐ Üçgen
☐ Dikdörtgen



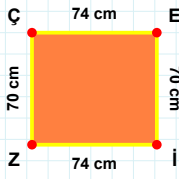
[ÇK] kenarı hangi şeklin kenarıdır?

- ☐ Kare
☐ Dikdörtgen
☐ Üçgen



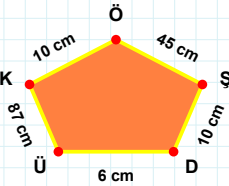
[TĞ] kenarı hangi şeklin kenarıdır?

- ☐ Dikdörtgen
☐ Üçgen
☐ Kare



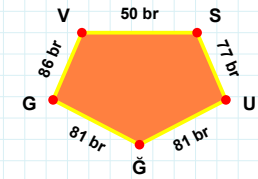
45 cm hangi şeklin kenarıdır?

- ☐ Beşgen
☐ Ters Beşgen
☐ Dikey Dikdörtgen



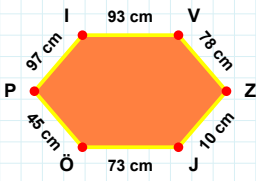
[SU] kenarı hangi şeklin kenarıdır?

- ☐ Beşgen
☐ Dikey Dikdörtgen
☐ Ters Beşgen



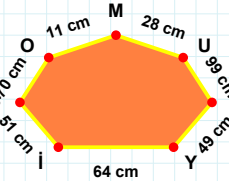
[ZÇ] kenarı hangi şeklin kenarıdır?

- ☐ Ters Beşgen
☐ Beşgen
☐ Dikey Dikdörtgen



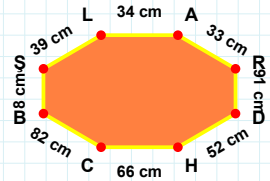
28 cm hangi şeklin kenarıdır?

- ☐ Yedigen
☐ Sekizgen
☐ Altıgen



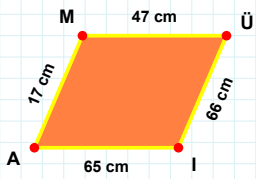
[ŞL] kenarı hangi şeklin kenarıdır?

- ☐ Altıgen
☐ Yedigen
☐ Sekizgen



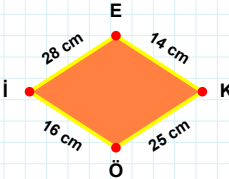
[JÖ] kenarı hangi şeklin kenarıdır?

- ☐ Yedigen
☐ Sekizgen
☐ Altıgen



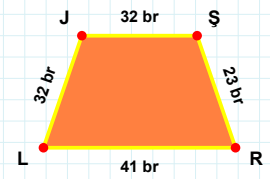
[JŞ] kenarı hangi şeklin kenarıdır?

- ☐ Eşkenar Dörtgen
☐ Paralelkenar
☐ Yamuk



[IA] kenarı hangi şeklin kenarıdır?

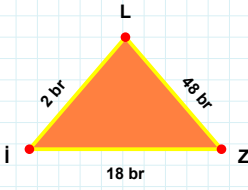
- ☐ Yamuk
☐ Eşkenar Dörtgen
☐ Paralelkenar



28 cm hangi şeklin kenarıdır?

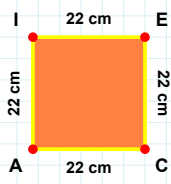
- ☐ Eşkenar Dörtgen
☐ Paralelkenar
☐ Yamuk

SORU: Aşağıdaki şekilleri inceleyiniz. Verilen kenar bilgisinin hangi şekle ait olduğunu işaretleyiniz.



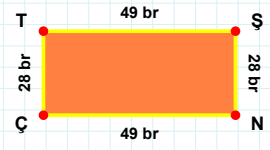
[Lİ] kenarı hangi şeklin kenarıdır?

- ☐ Üçgen
☐ Kare
☐ Dikdörtgen



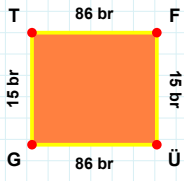
[İN] kenarı hangi şeklin kenarıdır?

- ☐ Dikdörtgen
☐ Kare
☐ Üçgen



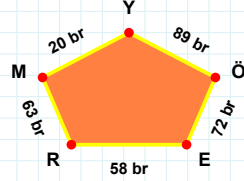
[İZ] kenarı hangi şeklin kenarıdır?

- ☐ Üçgen
☐ Dikdörtgen
☐ Kare



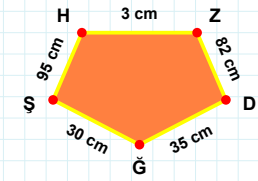
[ZD] kenarı hangi şeklin kenarıdır?

- ☐ Ters Beşgen
☐ Dikey Dikdörtgen
☐ Beşgen



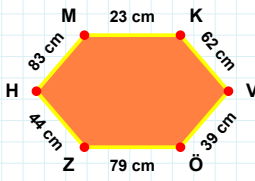
[ÜG] kenarı hangi şeklin kenarıdır?

- ☐ Dikey Dikdörtgen
☐ Ters Beşgen
☐ Beşgen



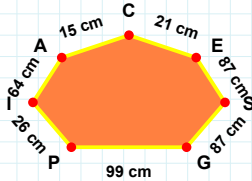
58 br hangi şeklin kenarıdır?

- ☐ Beşgen
☐ Ters Beşgen
☐ Dikey Dikdörtgen



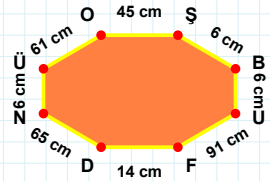
64 cm hangi şeklin kenarıdır?

- ☐ Sekizgen
☐ Altıgen
☐ Yediggen



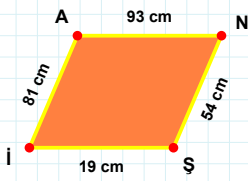
[UF] kenarı hangi şeklin kenarıdır?

- ☐ Altıgen
☐ Yediggen
☐ Sekizgen



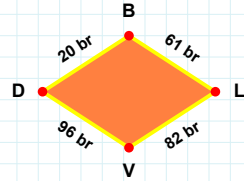
[ÖZ] kenarı hangi şeklin kenarıdır?

- ☐ Altıgen
☐ Sekizgen
☐ Yediggen



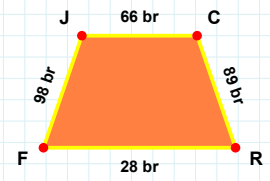
[RF] kenarı hangi şeklin kenarıdır?

- ☐ Paralelkenar
☐ Eşkenar Dörtgen
☐ Yamuk



[NŞ] kenarı hangi şeklin kenarıdır?

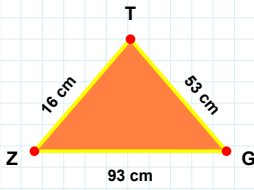
- ☐ Yamuk
☐ Eşkenar Dörtgen
☐ Paralelkenar



96 br hangi şeklin kenarıdır?

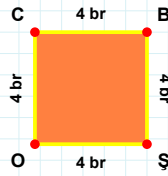
- ☐ Eşkenar Dörtgen
☐ Yamuk
☐ Paralelkenar

SORU: Aşağıdaki şekilleri inceleyiniz. Verilen kenar bilgisinin hangi şekle ait olduğunu işaretleyiniz.



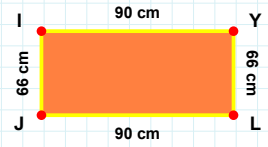
[IY] kenarı hangi şeklin kenarıdır?

- ☐ Üçgen
☐ Dikdörtgen
☐ Kare



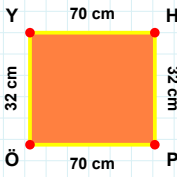
[GT] kenarı hangi şeklin kenarıdır?

- ☐ Üçgen
☐ Kare
☐ Dikdörtgen



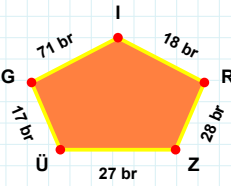
[CB] kenarı hangi şeklin kenarıdır?

- ☐ Üçgen
☐ Dikdörtgen
☐ Kare



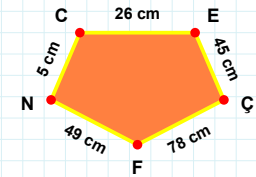
[ÇF] kenarı hangi şeklin kenarıdır?

- ☐ Beşgen
☐ Dikey Dikdörtgen
☐ Ters Beşgen



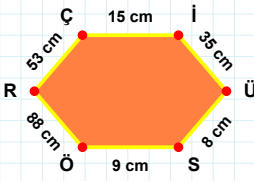
[ÖY] kenarı hangi şeklin kenarıdır?

- ☐ Ters Beşgen
☐ Dikey Dikdörtgen
☐ Beşgen



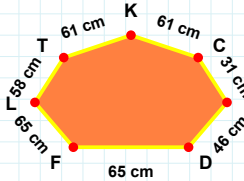
27 br hangi şeklin kenarıdır?

- ☐ Dikey Dikdörtgen
☐ Ters Beşgen
☐ Beşgen



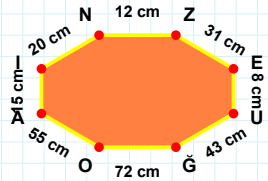
[OA] kenarı hangi şeklin kenarıdır?

- ☐ Altıgen
☐ Yedigen
☐ Sekizgen



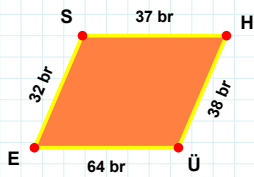
[Çİ] kenarı hangi şeklin kenarıdır?

- ☐ Sekizgen
☐ Altıgen
☐ Yedigen



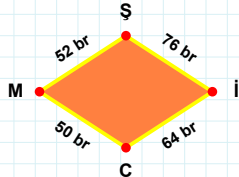
58 cm hangi şeklin kenarıdır?

- ☐ Sekizgen
☐ Yedigen
☐ Altıgen



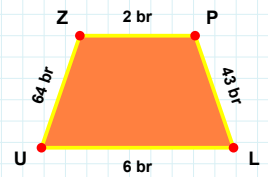
[LU] kenarı hangi şeklin kenarıdır?

- ☐ Yamuk
☐ Paralelkenar
☐ Eşkenar Dörtgen



[ES] kenarı hangi şeklin kenarıdır?

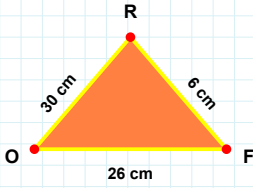
- ☐ Paralelkenar
☐ Yamuk
☐ Eşkenar Dörtgen



50 br hangi şeklin kenarıdır?

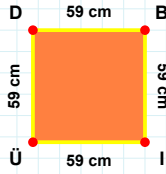
- ☐ Eşkenar Dörtgen
☐ Paralelkenar
☐ Yamuk

SORU: Aşağıdaki şekilleri inceleyiniz. Verilen kenar bilgisinin hangi şekle ait olduğunu işaretleyiniz.



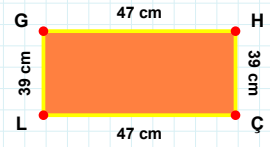
[ÇL] kenarı hangi şeklin kenarıdır?

- ☐ Dikdörtgen
☐ Kare
☐ Üçgen



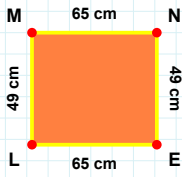
[OF] kenarı hangi şeklin kenarıdır?

- ☐ Kare
☐ Dikdörtgen
☐ Üçgen



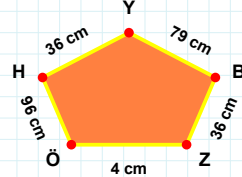
[ÜD] kenarı hangi şeklin kenarıdır?

- ☐ Kare
☐ Üçgen
☐ Dikdörtgen



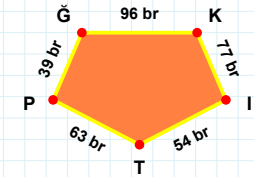
96 cm hangi şeklin kenarıdır?

- ☐ Beşgen
☐ Ters Beşgen
☐ Dikey Dikdörtgen



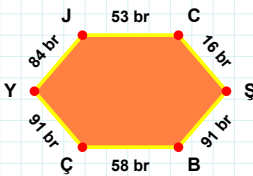
[KI] kenarı hangi şeklin kenarıdır?

- ☐ Ters Beşgen
☐ Beşgen
☐ Dikey Dikdörtgen



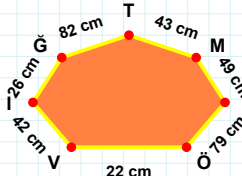
[MN] kenarı hangi şeklin kenarıdır?

- ☐ Ters Beşgen
☐ Dikey Dikdörtgen
☐ Beşgen



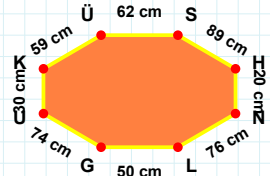
[KÜ] kenarı hangi şeklin kenarıdır?

- ☐ Altıgen
☐ Yediggen
☐ Sekizgen



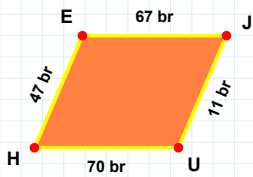
[ÇY] kenarı hangi şeklin kenarıdır?

- ☐ Sekizgen
☐ Yediggen
☐ Altıgen



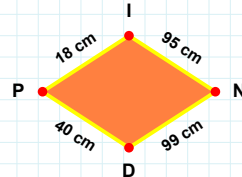
26 cm hangi şeklin kenarıdır?

- ☐ Yediggen
☐ Altıgen
☐ Sekizgen



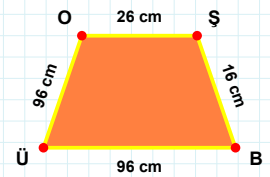
[ÜO] kenarı hangi şeklin kenarıdır?

- ☐ Yamuk
☐ Eşkenar Dörtgen
☐ Paralelkenar



[UH] kenarı hangi şeklin kenarıdır?

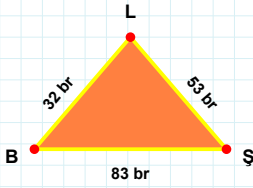
- ☐ Paralelkenar
☐ Eşkenar Dörtgen
☐ Yamuk



95 cm hangi şeklin kenarıdır?

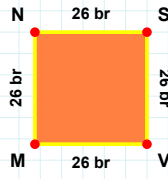
- ☐ Paralelkenar
☐ Yamuk
☐ Eşkenar Dörtgen

SORU: Aşağıdaki şekilleri inceleyiniz. Verilen kenar bilgisinin hangi şekle ait olduğunu işaretleyiniz.



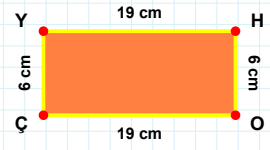
[SV] kenarı hangi şeklin kenarıdır?

- ☐ Dikdörtgen
☐ Üçgen
☐ Kare



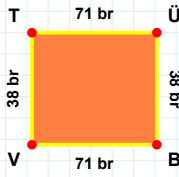
[HO] kenarı hangi şeklin kenarıdır?

- ☐ Kare
☐ Üçgen
☐ Dikdörtgen



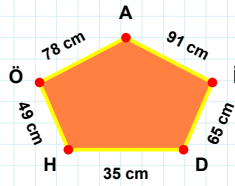
[LB] kenarı hangi şeklin kenarıdır?

- ☐ Dikdörtgen
☐ Kare
☐ Üçgen



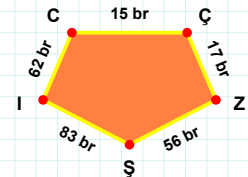
35 cm hangi şeklin kenarıdır?

- ☐ Ters Beşgen
☐ Beşgen
☐ Dikey Dikdörtgen



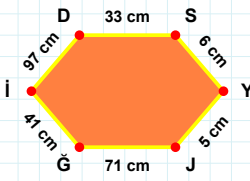
[IC] kenarı hangi şeklin kenarıdır?

- ☐ Ters Beşgen
☐ Dikey Dikdörtgen
☐ Beşgen



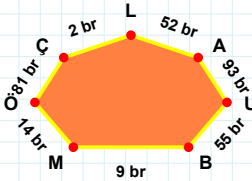
[ÜB] kenarı hangi şeklin kenarıdır?

- ☐ Dikey Dikdörtgen
☐ Beşgen
☐ Ters Beşgen



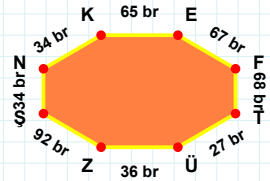
[FT] kenarı hangi şeklin kenarıdır?

- ☐ Sekizgen
☐ Yediggen
☐ Altıgen



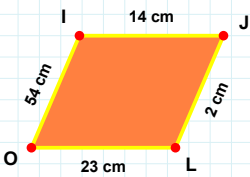
[YJ] kenarı hangi şeklin kenarıdır?

- ☐ Yediggen
☐ Sekizgen
☐ Altıgen



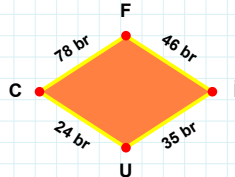
93 br hangi şeklin kenarıdır?

- ☐ Yediggen
☐ Sekizgen
☐ Altıgen



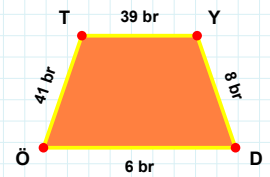
[YD] kenarı hangi şeklin kenarıdır?

- ☐ Eşkenar Dörtgen
☐ Paralelkenar
☐ Yamuk



[LO] kenarı hangi şeklin kenarıdır?

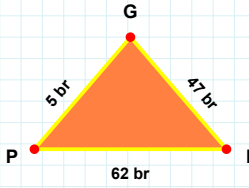
- ☐ Paralelkenar
☐ Yamuk
☐ Eşkenar Dörtgen



35 br hangi şeklin kenarıdır?

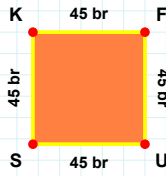
- ☐ Yamuk
☐ Eşkenar Dörtgen
☐ Paralelkenar

SORU: Aşağıdaki şekilleri inceleyiniz. Verilen kenar bilgisinin hangi şekle ait olduğunu işaretleyiniz.



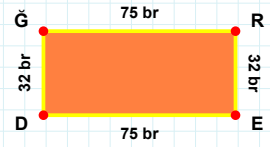
[SK] kenarı hangi şeklin kenarıdır?

- ☐ Dikdörtgen
☐ Kare
☐ Üçgen



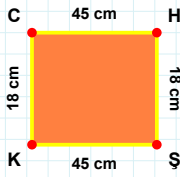
[ED] kenarı hangi şeklin kenarıdır?

- ☐ Dikdörtgen
☐ Kare
☐ Üçgen



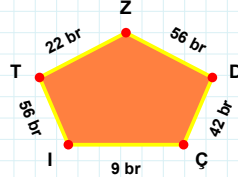
[GP] kenarı hangi şeklin kenarıdır?

- ☐ Kare
☐ Üçgen
☐ Dikdörtgen



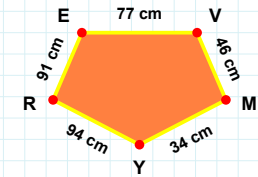
[RE] kenarı hangi şeklin kenarıdır?

- ☐ Dikey Dikdörtgen
☐ Beşgen
☐ Ters Beşgen



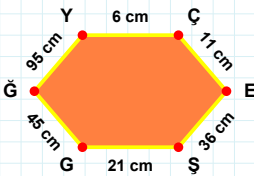
[KC] kenarı hangi şeklin kenarıdır?

- ☐ Dikey Dikdörtgen
☐ Ters Beşgen
☐ Beşgen



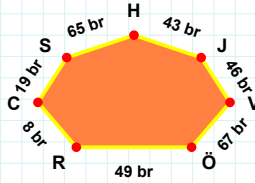
9 br hangi şeklin kenarıdır?

- ☐ Dikey Dikdörtgen
☐ Beşgen
☐ Ters Beşgen



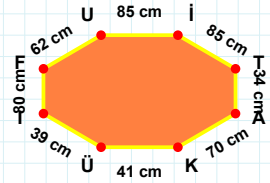
67 br hangi şeklin kenarıdır?

- ☐ Altıgen
☐ Sekizgen
☐ Yedigen



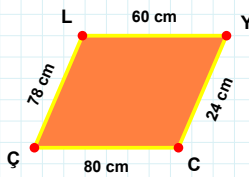
[IF] kenarı hangi şeklin kenarıdır?

- ☐ Sekizgen
☐ Altıgen
☐ Yedigen



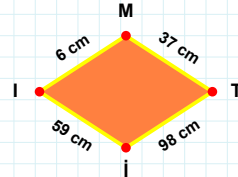
[ÇE] kenarı hangi şeklin kenarıdır?

- ☐ Sekizgen
☐ Yedigen
☐ Altıgen



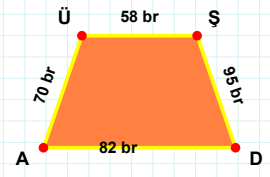
[AÜ] kenarı hangi şeklin kenarıdır?

- ☐ Paralelkenar
☐ Eşkenar Dörtgen
☐ Yamuk



[LY] kenarı hangi şeklin kenarıdır?

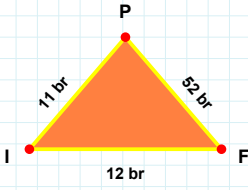
- ☐ Eşkenar Dörtgen
☐ Yamuk
☐ Paralelkenar



98 cm hangi şeklin kenarıdır?

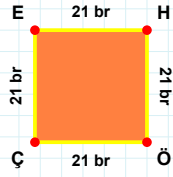
- ☐ Paralelkenar
☐ Eşkenar Dörtgen
☐ Yamuk

SORU: Aşağıdaki şekilleri inceleyiniz. Verilen kenar bilgisinin hangi şekle ait olduğunu işaretleyiniz.



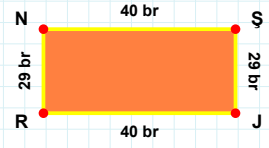
[JR] kenarı hangi şeklin kenarıdır?

- ☐ Kare
☐ Dikdörtgen
☐ Üçgen



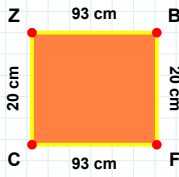
[FP] kenarı hangi şeklin kenarıdır?

- ☐ Üçgen
☐ Dikdörtgen
☐ Kare



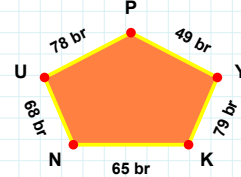
[ÇE] kenarı hangi şeklin kenarıdır?

- ☐ Üçgen
☐ Kare
☐ Dikdörtgen



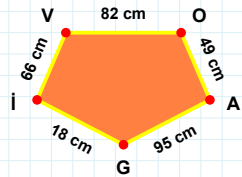
79 br hangi şeklin kenarıdır?

- ☐ Dikey Dikdörtgen
☐ Beşgen
☐ Ters Beşgen



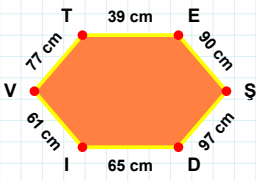
[AG] kenarı hangi şeklin kenarıdır?

- ☐ Ters Beşgen
☐ Dikey Dikdörtgen
☐ Beşgen



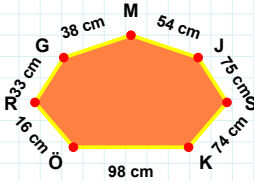
[BF] kenarı hangi şeklin kenarıdır?

- ☐ Dikey Dikdörtgen
☐ Beşgen
☐ Ters Beşgen



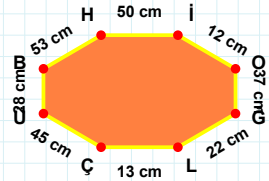
38 cm hangi şeklin kenarıdır?

- ☐ Sekizgen
☐ Altıgen
☐ Yedigen



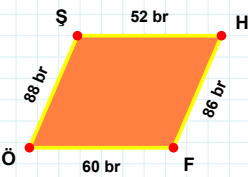
[OG] kenarı hangi şeklin kenarıdır?

- ☐ Sekizgen
☐ Yedigen
☐ Altıgen



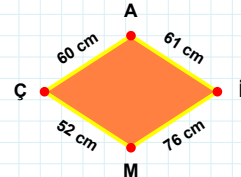
[VT] kenarı hangi şeklin kenarıdır?

- ☐ Yedigen
☐ Altıgen
☐ Sekizgen



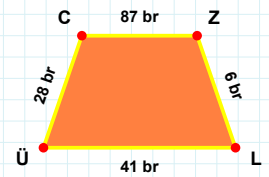
[ZL] kenarı hangi şeklin kenarıdır?

- ☐ Paralelkenar
☐ Yamuk
☐ Eşkenar Dörtgen



[SH] kenarı hangi şeklin kenarıdır?

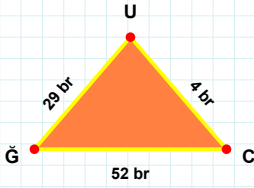
- ☐ Eşkenar Dörtgen
☐ Paralelkenar
☐ Yamuk



52 cm hangi şeklin kenarıdır?

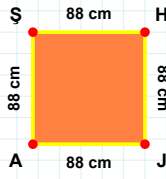
- ☐ Eşkenar Dörtgen
☐ Yamuk
☐ Paralelkenar

SORU: Aşağıdaki şekilleri inceleyiniz. Verilen kenar bilgisinin hangi şekle ait olduğunu işaretleyiniz.



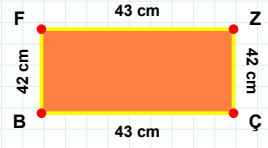
[AŞ] kenarı hangi şeklin kenarıdır?

- ☐ Kare
☐ Üçgen
☐ Dikdörtgen



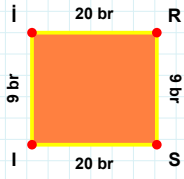
[BF] kenarı hangi şeklin kenarıdır?

- ☐ Dikdörtgen
☐ Kare
☐ Üçgen



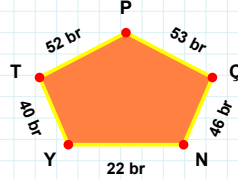
[CU] kenarı hangi şeklin kenarıdır?

- ☐ Üçgen
☐ Kare
☐ Dikdörtgen



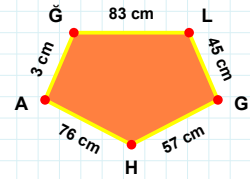
22 br hangi şeklin kenarıdır?

- ☐ Ters Beşgen
☐ Dikey Dikdörtgen
☐ Beşgen



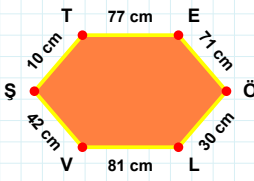
[LG] kenarı hangi şeklin kenarıdır?

- ☐ Dikey Dikdörtgen
☐ Ters Beşgen
☐ Beşgen



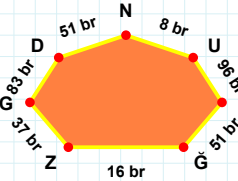
[SI] kenarı hangi şeklin kenarıdır?

- ☐ Beşgen
☐ Ters Beşgen
☐ Dikey Dikdörtgen



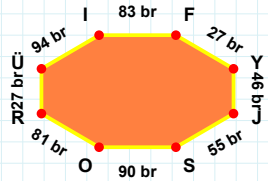
[Üİ] kenarı hangi şeklin kenarıdır?

- ☐ Altıgen
☐ Yediggen
☐ Sekizgen



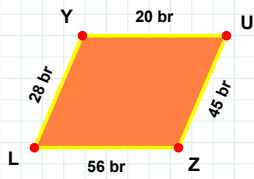
[VŞ] kenarı hangi şeklin kenarıdır?

- ☐ Sekizgen
☐ Altıgen
☐ Yediggen



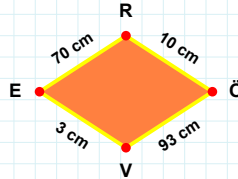
16 br hangi şeklin kenarıdır?

- ☐ Altıgen
☐ Sekizgen
☐ Yediggen



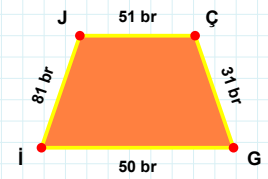
[İJ] kenarı hangi şeklin kenarıdır?

- ☐ Yamuk
☐ Paralelkenar
☐ Eşkenar Dörtgen



[UZ] kenarı hangi şeklin kenarıdır?

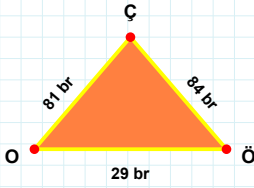
- ☐ Eşkenar Dörtgen
☐ Yamuk
☐ Paralelkenar



93 cm hangi şeklin kenarıdır?

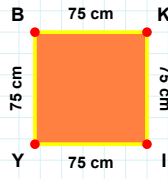
- ☐ Yamuk
☐ Paralelkenar
☐ Eşkenar Dörtgen

SORU: Aşağıdaki şekilleri inceleyiniz. Verilen kenar bilgisinin hangi şekle ait olduğunu işaretleyiniz.



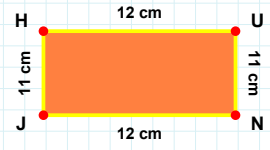
[HU] kenarı hangi şeklin kenarıdır?

- ☐ Üçgen
☐ Dikdörtgen
☐ Kare



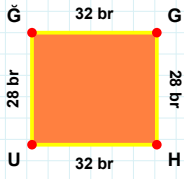
[OÖ] kenarı hangi şeklin kenarıdır?

- ☐ Üçgen
☐ Kare
☐ Dikdörtgen



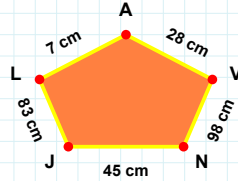
[YB] kenarı hangi şeklin kenarıdır?

- ☐ Dikdörtgen
☐ Üçgen
☐ Kare



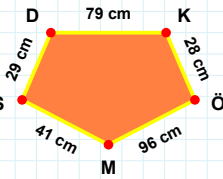
83 cm hangi şeklin kenarıdır?

- ☐ Ters Beşgen
☐ Beşgen
☐ Dikey Dikdörtgen



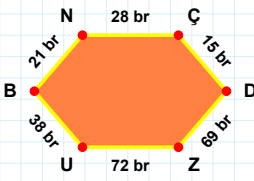
[KÖ] kenarı hangi şeklin kenarıdır?

- ☐ Beşgen
☐ Ters Beşgen
☐ Dikey Dikdörtgen



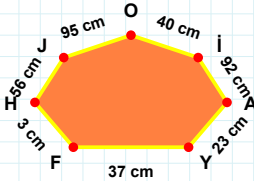
[GH] kenarı hangi şeklin kenarıdır?

- ☐ Ters Beşgen
☐ Beşgen
☐ Dikey Dikdörtgen



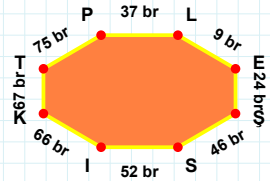
[EŞ] kenarı hangi şeklin kenarıdır?

- ☐ Altıgen
☐ Yedigen
☐ Sekizgen



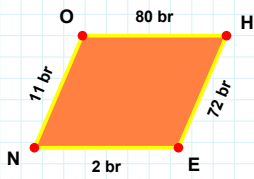
[ÇD] kenarı hangi şeklin kenarıdır?

- ☐ Yedigen
☐ Altıgen
☐ Sekizgen



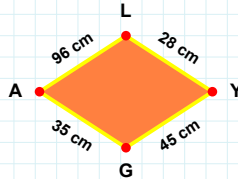
95 cm hangi şeklin kenarıdır?

- ☐ Yedigen
☐ Altıgen
☐ Sekizgen



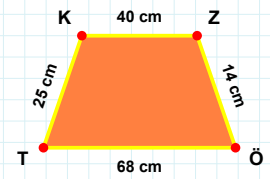
[TK] kenarı hangi şeklin kenarıdır?

- ☐ Yamuk
☐ Eşkenar Dörtgen
☐ Paralelkenar



[NO] kenarı hangi şeklin kenarıdır?

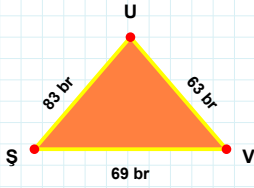
- ☐ Yamuk
☐ Paralelkenar
☐ Eşkenar Dörtgen



35 cm hangi şeklin kenarıdır?

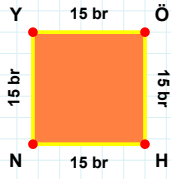
- ☐ Paralelkenar
☐ Eşkenar Dörtgen
☐ Yamuk

SORU: Aşağıdaki şekilleri inceleyiniz. Verilen kenar bilgisinin hangi şekle ait olduğunu işaretleyiniz.



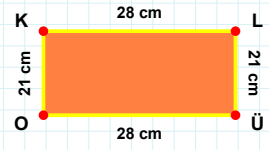
[KL] kenarı hangi şeklin kenarıdır?

- ☐ Dikdörtgen
☐ Üçgen
☐ Kare



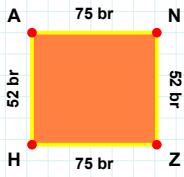
[SV] kenarı hangi şeklin kenarıdır?

- ☐ Dikdörtgen
☐ Kare
☐ Üçgen



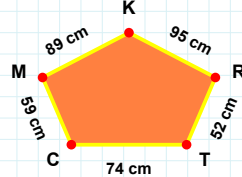
[ÖH] kenarı hangi şeklin kenarıdır?

- ☐ Kare
☐ Dikdörtgen
☐ Üçgen



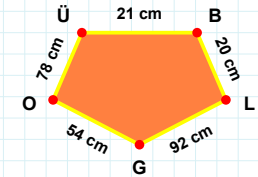
59 cm hangi şeklin kenarıdır?

- ☐ Dikey Dikdörtgen
☐ Beşgen
☐ Ters Beşgen



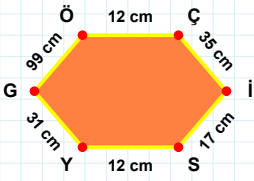
[ÜB] kenarı hangi şeklin kenarıdır?

- ☐ Dikey Dikdörtgen
☐ Ters Beşgen
☐ Beşgen



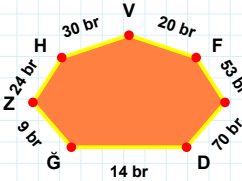
[AN] kenarı hangi şeklin kenarıdır?

- ☐ Beşgen
☐ Dikey Dikdörtgen
☐ Ters Beşgen



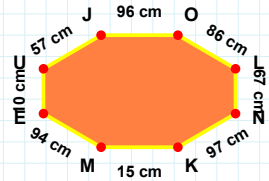
14 br hangi şeklin kenarıdır?

- ☐ Altıgen
☐ Yediggen
☐ Sekizgen



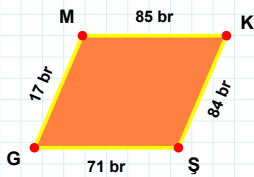
[NK] kenarı hangi şeklin kenarıdır?

- ☐ Sekizgen
☐ Yediggen
☐ Altıgen



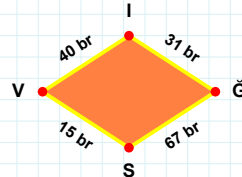
[ÖÇ] kenarı hangi şeklin kenarıdır?

- ☐ Yediggen
☐ Altıgen
☐ Sekizgen



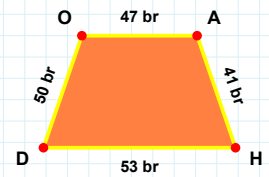
[HD] kenarı hangi şeklin kenarıdır?

- ☐ Eşkenar Dörtgen
☐ Yamuk
☐ Paralelkenar



[ŞG] kenarı hangi şeklin kenarıdır?

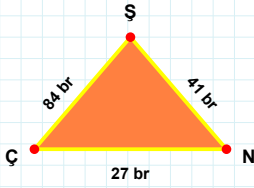
- ☐ Yamuk
☐ Paralelkenar
☐ Eşkenar Dörtgen



31 br hangi şeklin kenarıdır?

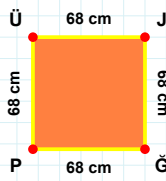
- ☐ Yamuk
☐ Eşkenar Dörtgen
☐ Paralelkenar

SORU: Aşağıdaki şekilleri inceleyiniz. Verilen kenar bilgisinin hangi şekle ait olduğunu işaretleyiniz.



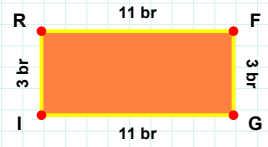
|ÇŞ| kenarı hangi şeklin kenarıdır?

- ☐ Kare
☐ Üçgen
☐ Dikdörtgen



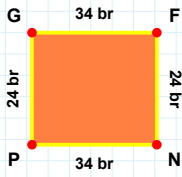
|JŞ| kenarı hangi şeklin kenarıdır?

- ☐ Üçgen
☐ Kare
☐ Dikdörtgen



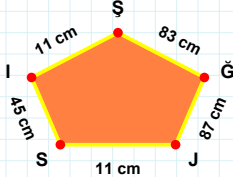
|NS| kenarı hangi şeklin kenarıdır?

- ☐ Dikdörtgen
☐ Üçgen
☐ Kare



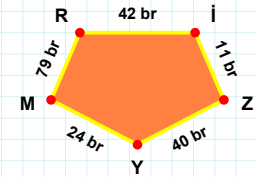
83 cm hangi şeklin kenarıdır?

- ☐ Ters Beşgen
☐ Dikey Dikdörtgen
☐ Beşgen



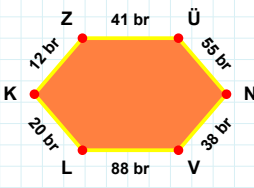
|MR| kenarı hangi şeklin kenarıdır?

- ☐ Beşgen
☐ Ters Beşgen
☐ Dikey Dikdörtgen



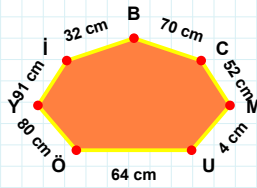
|NP| kenarı hangi şeklin kenarıdır?

- ☐ Ters Beşgen
☐ Beşgen
☐ Dikey Dikdörtgen



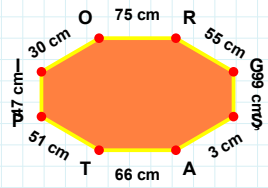
91 cm hangi şeklin kenarıdır?

- ☐ Sekizgen
☐ Altıgen
☐ Yedigen



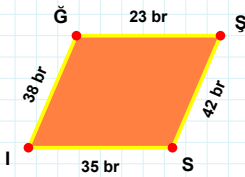
|AT| kenarı hangi şeklin kenarıdır?

- ☐ Sekizgen
☐ Yedigen
☐ Altıgen



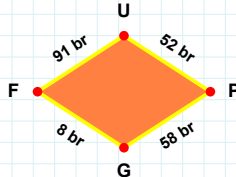
|LK| kenarı hangi şeklin kenarıdır?

- ☐ Yedigen
☐ Altıgen
☐ Sekizgen



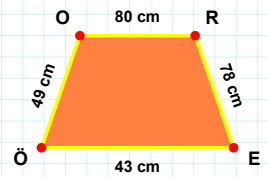
58 br hangi şeklin kenarıdır?

- ☐ Eşkenar Dörtgen
☐ Paralelkenar
☐ Yamuk



|EÖ| kenarı hangi şeklin kenarıdır?

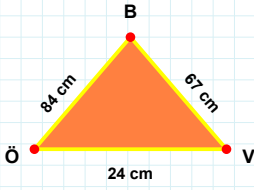
- ☐ Yamuk
☐ Eşkenar Dörtgen
☐ Paralelkenar



|ĞŞ| kenarı hangi şeklin kenarıdır?

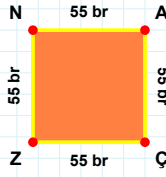
- ☐ Yamuk
☐ Paralelkenar
☐ Eşkenar Dörtgen

SORU: Aşağıdaki şekilleri inceleyiniz. Verilen kenar bilgisinin hangi şekle ait olduğunu işaretleyiniz.



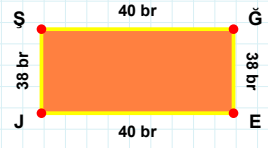
|BÖ| kenarı hangi şeklin kenarıdır?

- ☐ Kare
☐ Üçgen
☐ Dikdörtgen



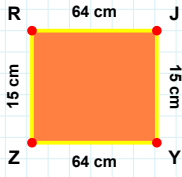
|ÖV| kenarı hangi şeklin kenarıdır?

- ☐ Dikdörtgen
☐ Üçgen
☐ Kare



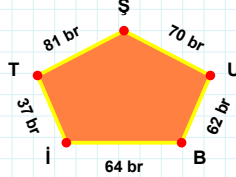
|AÇ| kenarı hangi şeklin kenarıdır?

- ☐ Üçgen
☐ Dikdörtgen
☐ Kare



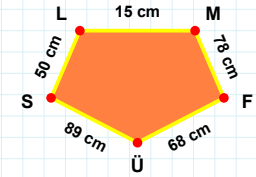
70 br hangi şeklin kenarıdır?

- ☐ Ters Beşgen
☐ Beşgen
☐ Dikey Dikdörtgen



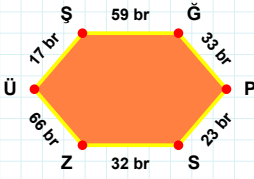
|ÜS| kenarı hangi şeklin kenarıdır?

- ☐ Ters Beşgen
☐ Dikey Dikdörtgen
☐ Beşgen



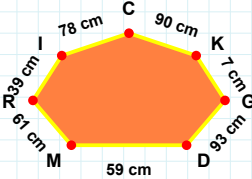
|ZR| kenarı hangi şeklin kenarıdır?

- ☐ Dikey Dikdörtgen
☐ Beşgen
☐ Ters Beşgen



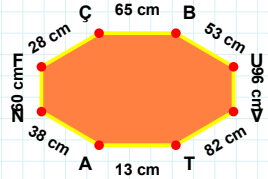
61 cm hangi şeklin kenarıdır?

- ☐ Altıgen
☐ Sekizgen
☐ Yedigen



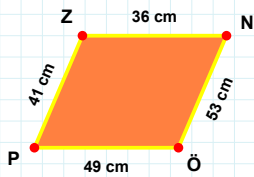
|UV| kenarı hangi şeklin kenarıdır?

- ☐ Yedigen
☐ Sekizgen
☐ Altıgen



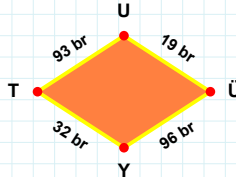
|SZ| kenarı hangi şeklin kenarıdır?

- ☐ Yedigen
☐ Altıgen
☐ Sekizgen



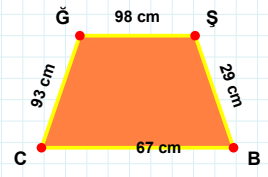
93 br hangi şeklin kenarıdır?

- ☐ Eşkenar Dörtgen
☐ Paralelkenar
☐ Yamuk



|BC| kenarı hangi şeklin kenarıdır?

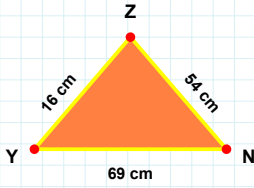
- ☐ Paralelkenar
☐ Yamuk
☐ Eşkenar Dörtgen



|ZN| kenarı hangi şeklin kenarıdır?

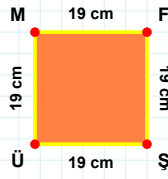
- ☐ Paralelkenar
☐ Yamuk
☐ Eşkenar Dörtgen

SORU: Aşağıdaki şekilleri inceleyiniz. Verilen kenar bilgisinin hangi şekle ait olduğunu işaretleyiniz.



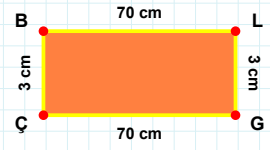
[LG] kenarı hangi şeklin kenarıdır?

- ☐ Dikdörtgen
☐ Üçgen
☐ Kare



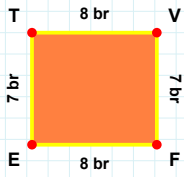
[NZ] kenarı hangi şeklin kenarıdır?

- ☐ Kare
☐ Dikdörtgen
☐ Üçgen



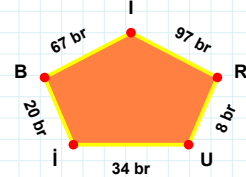
[ÜM] kenarı hangi şeklin kenarıdır?

- ☐ Üçgen
☐ Kare
☐ Dikdörtgen



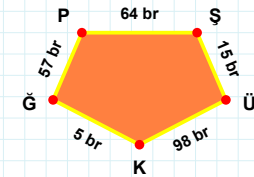
[ŞÜ] kenarı hangi şeklin kenarıdır?

- ☐ Dikey Dikdörtgen
☐ Beşgen
☐ Ters Beşgen



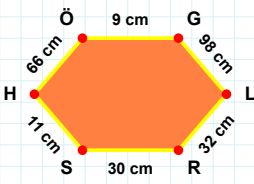
[FE] kenarı hangi şeklin kenarıdır?

- ☐ Beşgen
☐ Ters Beşgen
☐ Dikey Dikdörtgen



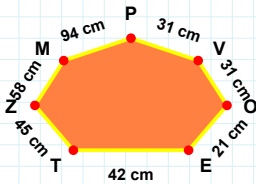
34 br hangi şeklin kenarıdır?

- ☐ Dikey Dikdörtgen
☐ Ters Beşgen
☐ Beşgen



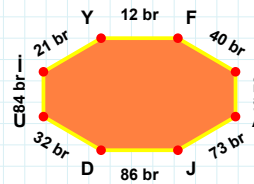
21 cm hangi şeklin kenarıdır?

- ☐ Yedigen
☐ Altigen
☐ Sekizgen



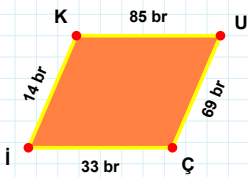
[FI] kenarı hangi şeklin kenarıdır?

- ☐ Sekizgen
☐ Yedigen
☐ Altigen



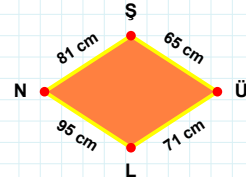
[HÖ] kenarı hangi şeklin kenarıdır?

- ☐ Yedigen
☐ Sekizgen
☐ Altigen



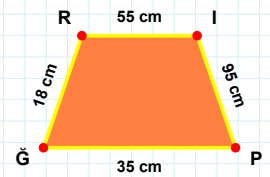
[PĞ] kenarı hangi şeklin kenarıdır?

- ☐ Paralelkenar
☐ Eşkenar Dörtgen
☐ Yamuk



[UÇ] kenarı hangi şeklin kenarıdır?

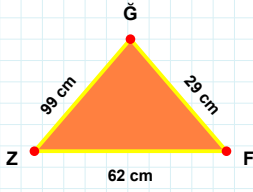
- ☐ Paralelkenar
☐ Yamuk
☐ Eşkenar Dörtgen



71 cm hangi şeklin kenarıdır?

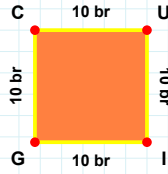
- ☐ Paralelkenar
☐ Eşkenar Dörtgen
☐ Yamuk

SORU: Aşağıdaki şekilleri inceleyiniz. Verilen kenar bilgisinin hangi şekle ait olduğunu işaretleyiniz.



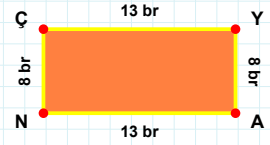
[ZG] kenarı hangi şeklin kenarıdır?

- ☐ Dikdörtgen
☐ Üçgen
☐ Kare



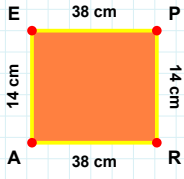
[NC] kenarı hangi şeklin kenarıdır?

- ☐ Üçgen
☐ Dikdörtgen
☐ Kare



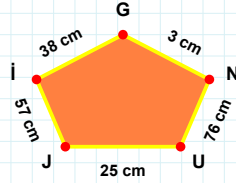
[GZ] kenarı hangi şeklin kenarıdır?

- ☐ Dikdörtgen
☐ Üçgen
☐ Kare



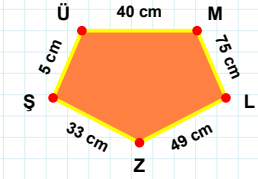
[ZŞ] kenarı hangi şeklin kenarıdır?

- ☐ Ters Beşgen
☐ Beşgen
☐ Dikey Dikdörtgen



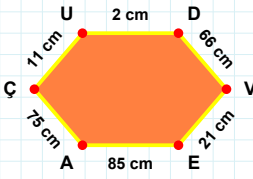
[RA] kenarı hangi şeklin kenarıdır?

- ☐ Ters Beşgen
☐ Beşgen
☐ Dikey Dikdörtgen



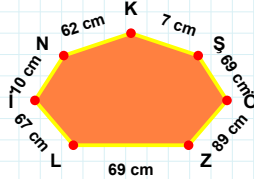
76 cm hangi şeklin kenarıdır?

- ☐ Ters Beşgen
☐ Dikey Dikdörtgen
☐ Beşgen



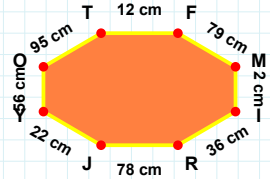
7 cm hangi şeklin kenarıdır?

- ☐ Yedigen
☐ Sekizgen
☐ Altigen



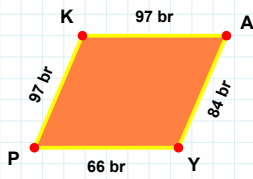
[RJ] kenarı hangi şeklin kenarıdır?

- ☐ Altigen
☐ Sekizgen
☐ Yedigen



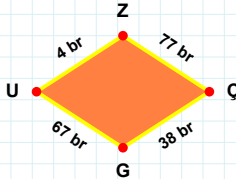
[VE] kenarı hangi şeklin kenarıdır?

- ☐ Yedigen
☐ Sekizgen
☐ Altigen



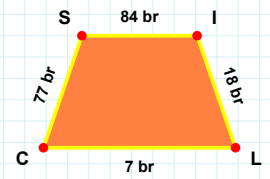
[SI] kenarı hangi şeklin kenarıdır?

- ☐ Yamuk
☐ Eşkenar Dörtgen
☐ Paralelkenar



[AY] kenarı hangi şeklin kenarıdır?

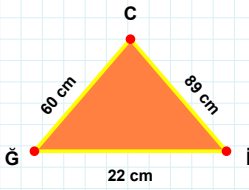
- ☐ Yamuk
☐ Eşkenar Dörtgen
☐ Paralelkenar



67 br hangi şeklin kenarıdır?

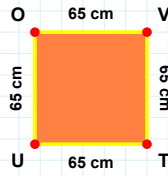
- ☐ Paralelkenar
☐ Eşkenar Dörtgen
☐ Yamuk

SORU: Aşağıdaki şekilleri inceleyiniz. Verilen kenar bilgisinin hangi şekle ait olduğunu işaretleyiniz.



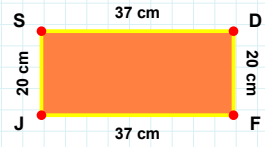
[SD] kenarı hangi şeklin kenarıdır?

- ☐ Üçgen
☐ Dikdörtgen
☐ Kare



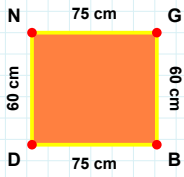
[Ğİ] kenarı hangi şeklin kenarıdır?

- ☐ Üçgen
☐ Kare
☐ Dikdörtgen



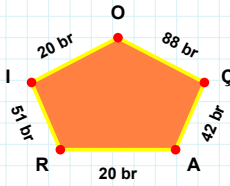
[TU] kenarı hangi şeklin kenarıdır?

- ☐ Dikdörtgen
☐ Üçgen
☐ Kare



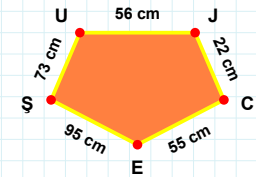
42 br hangi şeklin kenarıdır?

- ☐ Ters Beşgen
☐ Dikey Dikdörtgen
☐ Beşgen



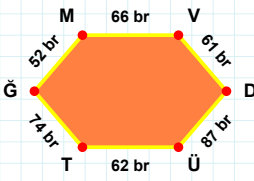
[JC] kenarı hangi şeklin kenarıdır?

- ☐ Ters Beşgen
☐ Beşgen
☐ Dikey Dikdörtgen



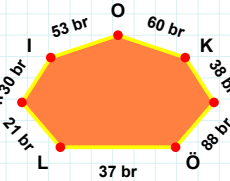
[GB] kenarı hangi şeklin kenarıdır?

- ☐ Ters Beşgen
☐ Beşgen
☐ Dikey Dikdörtgen



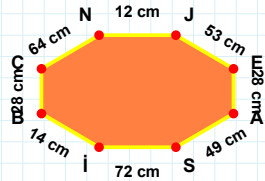
21 br hangi şeklin kenarıdır?

- ☐ Yediggen
☐ Sekizgen
☐ Altıgen



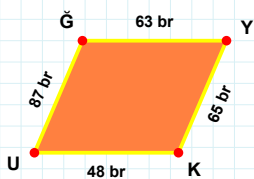
[JE] kenarı hangi şeklin kenarıdır?

- ☐ Sekizgen
☐ Yediggen
☐ Altıgen



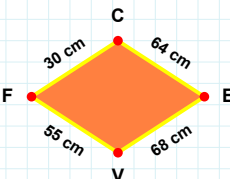
[TG] kenarı hangi şeklin kenarıdır?

- ☐ Altıgen
☐ Yediggen
☐ Sekizgen



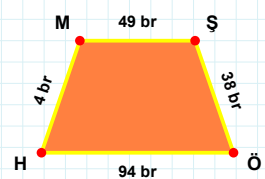
[HM] kenarı hangi şeklin kenarıdır?

- ☐ Paralelkenar
☐ Yamuk
☐ Eşkenar Dörtgen



[UĞ] kenarı hangi şeklin kenarıdır?

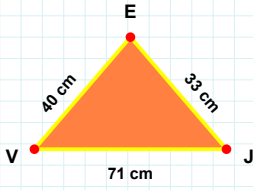
- ☐ Eşkenar Dörtgen
☐ Yamuk
☐ Paralelkenar



30 cm hangi şeklin kenarıdır?

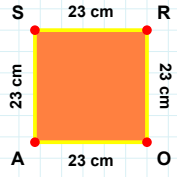
- ☐ Paralelkenar
☐ Yamuk
☐ Eşkenar Dörtgen

SORU: Aşağıdaki şekilleri inceleyiniz. Verilen kenar bilgisinin hangi şekle ait olduğunu işaretleyiniz.



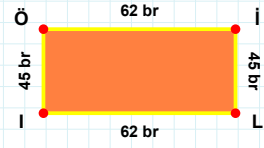
|İÖ| kenarı hangi şeklin kenarıdır?

- ☐ Üçgen
☐ Dikdörtgen
☐ Kare



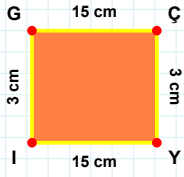
|VJ| kenarı hangi şeklin kenarıdır?

- ☐ Üçgen
☐ Dikdörtgen
☐ Kare



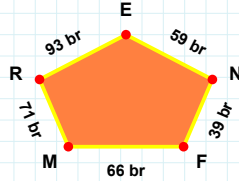
|SR| kenarı hangi şeklin kenarıdır?

- ☐ Dikdörtgen
☐ Kare
☐ Üçgen



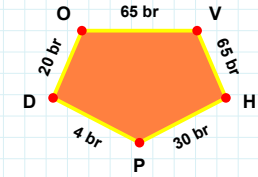
|HP| kenarı hangi şeklin kenarıdır?

- ☐ Ters Beşgen
☐ Dikey Dikdörtgen
☐ Beşgen



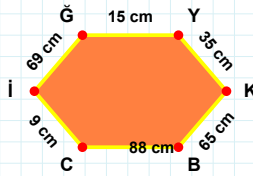
|GÇ| kenarı hangi şeklin kenarıdır?

- ☐ Ters Beşgen
☐ Beşgen
☐ Dikey Dikdörtgen



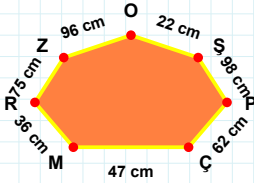
93 br hangi şeklin kenarıdır?

- ☐ Dikey Dikdörtgen
☐ Beşgen
☐ Ters Beşgen



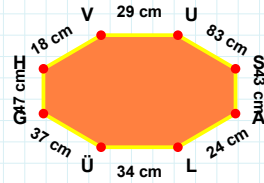
|GH| kenarı hangi şeklin kenarıdır?

- ☐ Altıgen
☐ Sekizgen
☐ Yediggen



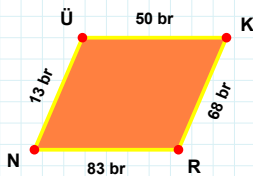
|İĞ| kenarı hangi şeklin kenarıdır?

- ☐ Yediggen
☐ Altıgen
☐ Sekizgen



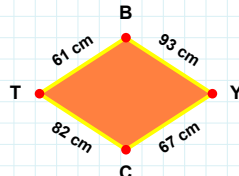
22 cm hangi şeklin kenarıdır?

- ☐ Sekizgen
☐ Yediggen
☐ Altıgen



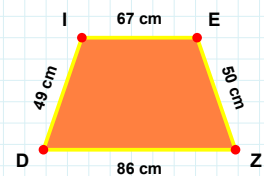
|DI| kenarı hangi şeklin kenarıdır?

- ☐ Eşkenar Dörtgen
☐ Paralelkenar
☐ Yamuk



|NÜ| kenarı hangi şeklin kenarıdır?

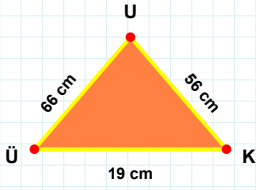
- ☐ Yamuk
☐ Eşkenar Dörtgen
☐ Paralelkenar



61 cm hangi şeklin kenarıdır?

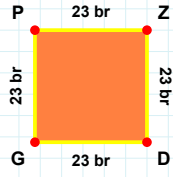
- ☐ Yamuk
☐ Eşkenar Dörtgen
☐ Paralelkenar

SORU: Aşağıdaki şekilleri inceleyiniz. Verilen kenar bilgisinin hangi şekle ait olduğunu işaretleyiniz.



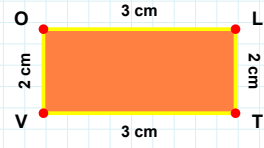
[TV] kenarı hangi şeklin kenarıdır?

- ☐ Üçgen
☐ Kare
☐ Dikdörtgen



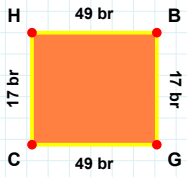
[UÜ] kenarı hangi şeklin kenarıdır?

- ☐ Üçgen
☐ Dikdörtgen
☐ Kare



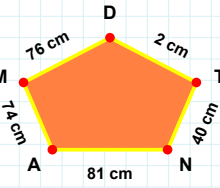
[PZ] kenarı hangi şeklin kenarıdır?

- ☐ Üçgen
☐ Kare
☐ Dikdörtgen



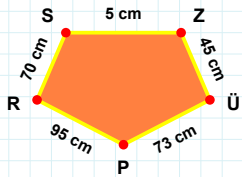
40 cm hangi şeklin kenarıdır?

- ☐ Beşgen
☐ Ters Beşgen
☐ Dikey Dikdörtgen



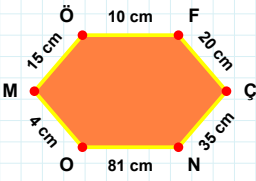
[RS] kenarı hangi şeklin kenarıdır?

- ☐ Dikey Dikdörtgen
☐ Ters Beşgen
☐ Beşgen



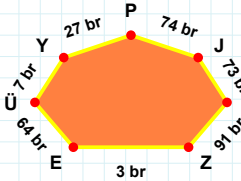
[BG] kenarı hangi şeklin kenarıdır?

- ☐ Ters Beşgen
☐ Dikey Dikdörtgen
☐ Beşgen



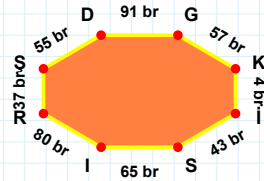
73 br hangi şeklin kenarıdır?

- ☐ Sekizgen
☐ Yediggen
☐ Altıgen



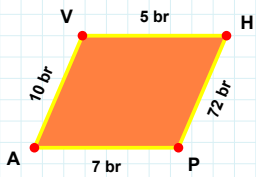
[IR] kenarı hangi şeklin kenarıdır?

- ☐ Altıgen
☐ Yediggen
☐ Sekizgen



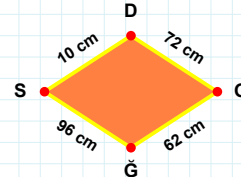
[NO] kenarı hangi şeklin kenarıdır?

- ☐ Yediggen
☐ Sekizgen
☐ Altıgen



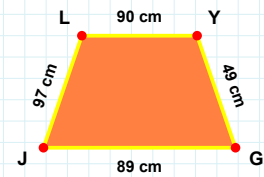
62 cm hangi şeklin kenarıdır?

- ☐ Paralelkenar
☐ Eşkenar Dörtgen
☐ Yamuk



[JL] kenarı hangi şeklin kenarıdır?

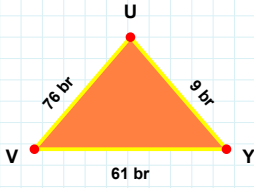
- ☐ Paralelkenar
☐ Eşkenar Dörtgen
☐ Yamuk



[PA] kenarı hangi şeklin kenarıdır?

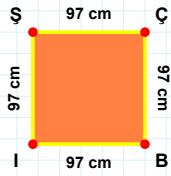
- ☐ Yamuk
☐ Paralelkenar
☐ Eşkenar Dörtgen

SORU: Aşağıdaki şekilleri inceleyiniz. Verilen kenar bilgisinin hangi şekle ait olduğunu işaretleyiniz.



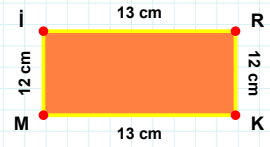
[UR] kenarı hangi şeklin kenarıdır?

- ☐ Kare
☐ Üçgen
☐ Dikdörtgen



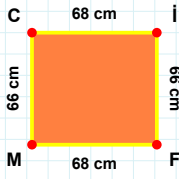
[UV] kenarı hangi şeklin kenarıdır?

- ☐ Üçgen
☐ Kare
☐ Dikdörtgen



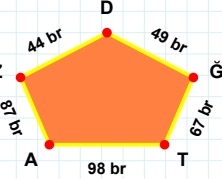
[BI] kenarı hangi şeklin kenarıdır?

- ☐ Üçgen
☐ Dikdörtgen
☐ Kare



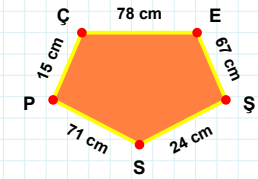
[SS] kenarı hangi şeklin kenarıdır?

- ☐ Dikey Dikdörtgen
☐ Ters Beşgen
☐ Beşgen



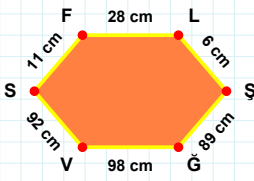
[İF] kenarı hangi şeklin kenarıdır?

- ☐ Dikey Dikdörtgen
☐ Ters Beşgen
☐ Beşgen



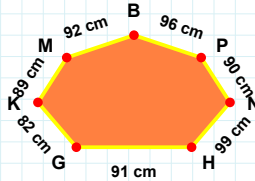
49 br hangi şeklin kenarıdır?

- ☐ Beşgen
☐ Dikey Dikdörtgen
☐ Ters Beşgen



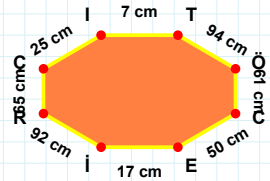
91 cm hangi şeklin kenarıdır?

- ☐ Sekizgen
☐ Altıgen
☐ Yediggen



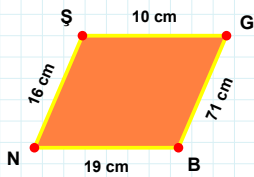
[Eİ] kenarı hangi şeklin kenarıdır?

- ☐ Altıgen
☐ Yediggen
☐ Sekizgen



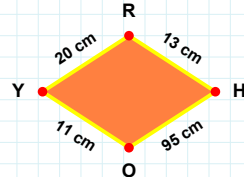
[ŞĞ] kenarı hangi şeklin kenarıdır?

- ☐ Yediggen
☐ Altıgen
☐ Sekizgen



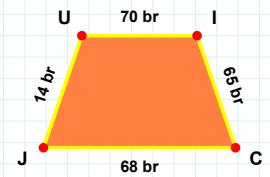
[CJ] kenarı hangi şeklin kenarıdır?

- ☐ Eşkenar Dörtgen
☐ Yamuk
☐ Paralelkenar



[BN] kenarı hangi şeklin kenarıdır?

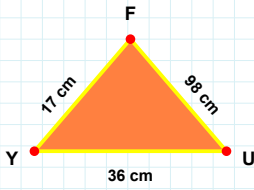
- ☐ Eşkenar Dörtgen
☐ Paralelkenar
☐ Yamuk



11 cm hangi şeklin kenarıdır?

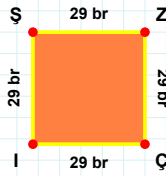
- ☐ Eşkenar Dörtgen
☐ Yamuk
☐ Paralelkenar

SORU: Aşağıdaki şekilleri inceleyiniz. Verilen kenar bilgisinin hangi şekle ait olduğunu işaretleyiniz.



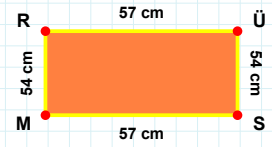
|İŞ| kenarı hangi şeklin kenarıdır?

- ☐ Kare
☐ Dikdörtgen
☐ Üçgen



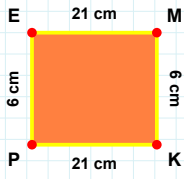
|RÜ| kenarı hangi şeklin kenarıdır?

- ☐ Üçgen
☐ Kare
☐ Dikdörtgen



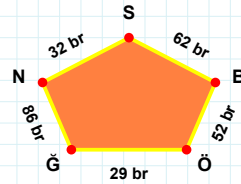
|YU| kenarı hangi şeklin kenarıdır?

- ☐ Kare
☐ Dikdörtgen
☐ Üçgen



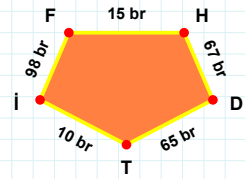
|HD| kenarı hangi şeklin kenarıdır?

- ☐ Ters Beşgen
☐ Beşgen
☐ Dikey Dikdörtgen



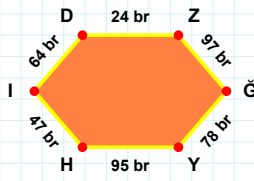
|PE| kenarı hangi şeklin kenarıdır?

- ☐ Dikey Dikdörtgen
☐ Beşgen
☐ Ters Beşgen



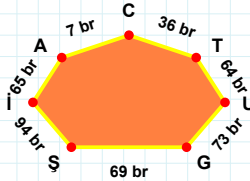
62 br hangi şeklin kenarıdır?

- ☐ Beşgen
☐ Ters Beşgen
☐ Dikey Dikdörtgen



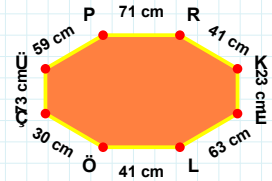
65 br hangi şeklin kenarıdır?

- ☐ Sekizgen
☐ Yediggen
☐ Altıgen



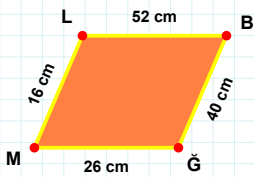
|EL| kenarı hangi şeklin kenarıdır?

- ☐ Yediggen
☐ Sekizgen
☐ Altıgen



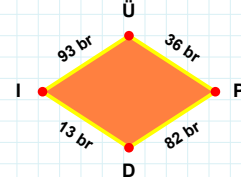
|ZĞ| kenarı hangi şeklin kenarıdır?

- ☐ Altıgen
☐ Yediggen
☐ Sekizgen



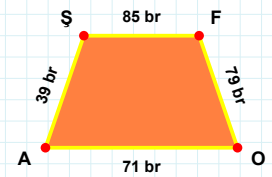
36 br hangi şeklin kenarıdır?

- ☐ Paralelkenar
☐ Eşkenar Dörtgen
☐ Yamuk



|AŞ| kenarı hangi şeklin kenarıdır?

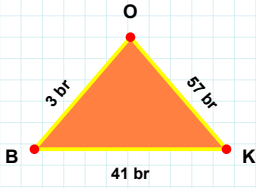
- ☐ Yamuk
☐ Paralelkenar
☐ Eşkenar Dörtgen



|ML| kenarı hangi şeklin kenarıdır?

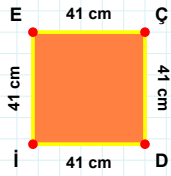
- ☐ Yamuk
☐ Eşkenar Dörtgen
☐ Paralelkenar

SORU: Aşağıdaki şekilleri inceleyiniz. Verilen kenar bilgisinin hangi şekle ait olduğunu işaretleyiniz.



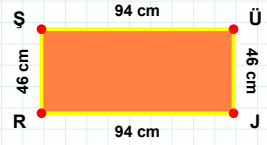
|OE| kenarı hangi şeklin kenarıdır?

- ☐ Dikdörtgen
☐ Kare
☐ Üçgen



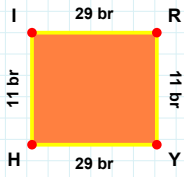
|RE| kenarı hangi şeklin kenarıdır?

- ☐ Kare
☐ Dikdörtgen
☐ Üçgen



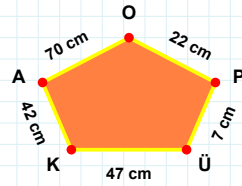
|OB| kenarı hangi şeklin kenarıdır?

- ☐ Üçgen
☐ Dikdörtgen
☐ Kare



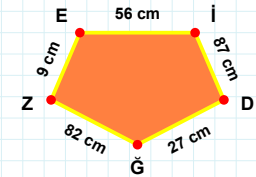
47 cm hangi şeklin kenarıdır?

- ☐ Ters Beşgen
☐ Dikey Dikdörtgen
☐ Beşgen



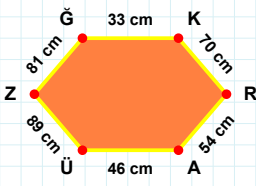
|ID| kenarı hangi şeklin kenarıdır?

- ☐ Dikey Dikdörtgen
☐ Beşgen
☐ Ters Beşgen



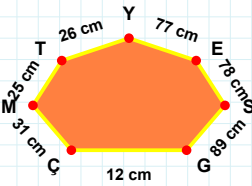
|YH| kenarı hangi şeklin kenarıdır?

- ☐ Dikey Dikdörtgen
☐ Beşgen
☐ Ters Beşgen



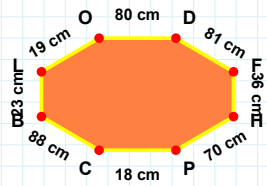
|DF| kenarı hangi şeklin kenarıdır?

- ☐ Altıgen
☐ Sekizgen
☐ Yedigen



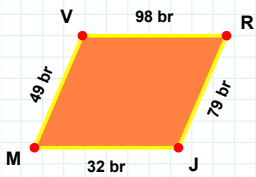
|AÜ| kenarı hangi şeklin kenarıdır?

- ☐ Altıgen
☐ Sekizgen
☐ Yedigen



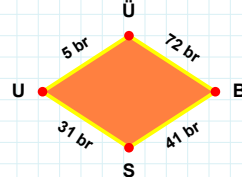
78 cm hangi şeklin kenarıdır?

- ☐ Sekizgen
☐ Altıgen
☐ Yedigen



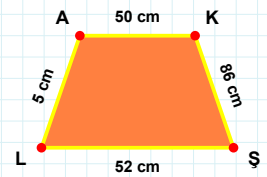
31 br hangi şeklin kenarıdır?

- ☐ Eşkenar Dörtgen
☐ Paralelkenar
☐ Yamuk



|AK| kenarı hangi şeklin kenarıdır?

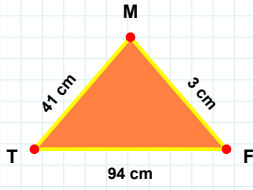
- ☐ Eşkenar Dörtgen
☐ Yamuk
☐ Paralelkenar



|RJ| kenarı hangi şeklin kenarıdır?

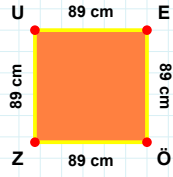
- ☐ Yamuk
☐ Paralelkenar
☐ Eşkenar Dörtgen

SORU: Aşağıdaki şekilleri inceleyiniz. Verilen kenar bilgisinin hangi şekle ait olduğunu işaretleyiniz.



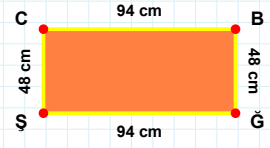
[UE] kenarı hangi şeklin kenarıdır?

- ☐ Üçgen
☐ Kare
☐ Dikdörtgen



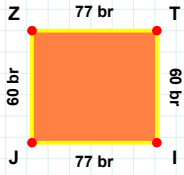
[ĞŞ] kenarı hangi şeklin kenarıdır?

- ☐ Dikdörtgen
☐ Üçgen
☐ Kare



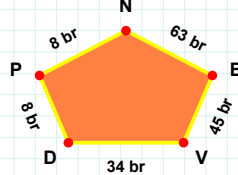
[TF] kenarı hangi şeklin kenarıdır?

- ☐ Dikdörtgen
☐ Kare
☐ Üçgen



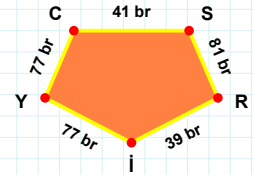
[YC] kenarı hangi şeklin kenarıdır?

- ☐ Ters Beşgen
☐ Beşgen
☐ Dikey Dikdörtgen



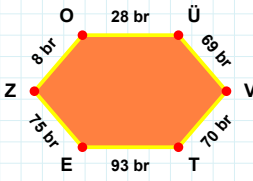
[TI] kenarı hangi şeklin kenarıdır?

- ☐ Ters Beşgen
☐ Dikey Dikdörtgen
☐ Beşgen



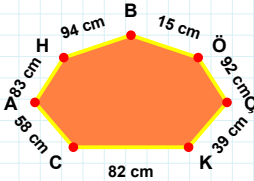
45 br hangi şeklin kenarıdır?

- ☐ Ters Beşgen
☐ Dikey Dikdörtgen
☐ Beşgen



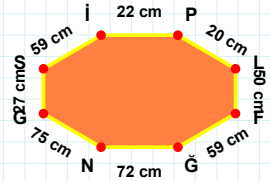
58 cm hangi şeklin kenarıdır?

- ☐ Yediggen
☐ Sekizgen
☐ Altıgen



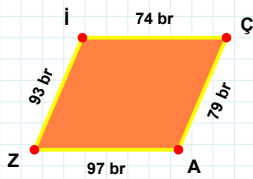
[PL] kenarı hangi şeklin kenarıdır?

- ☐ Sekizgen
☐ Yediggen
☐ Altıgen



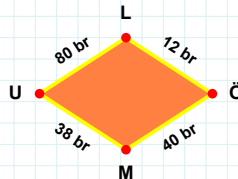
[VT] kenarı hangi şeklin kenarıdır?

- ☐ Altıgen
☐ Sekizgen
☐ Yediggen



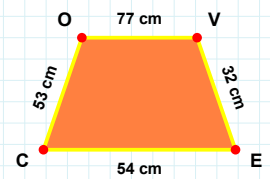
80 br hangi şeklin kenarıdır?

- ☐ Yamuk
☐ Paralelkenar
☐ Eşkenar Dörtgen



[VE] kenarı hangi şeklin kenarıdır?

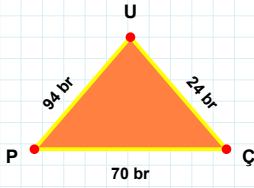
- ☐ Eşkenar Dörtgen
☐ Yamuk
☐ Paralelkenar



[AZ] kenarı hangi şeklin kenarıdır?

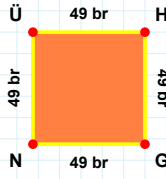
- ☐ Eşkenar Dörtgen
☐ Paralelkenar
☐ Yamuk

SORU: Aşağıdaki şekilleri inceleyiniz. Verilen kenar bilgisinin hangi şekle ait olduğunu işaretleyiniz.



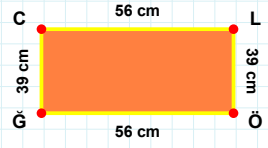
[CL] kenarı hangi şeklin kenarıdır?

- ☐ Dikdörtgen
☐ Kare
☐ Üçgen



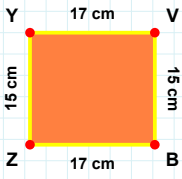
[ÇU] kenarı hangi şeklin kenarıdır?

- ☐ Üçgen
☐ Kare
☐ Dikdörtgen



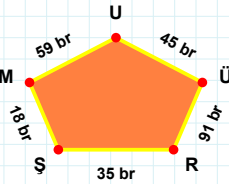
[NÜ] kenarı hangi şeklin kenarıdır?

- ☐ Dikdörtgen
☐ Kare
☐ Üçgen



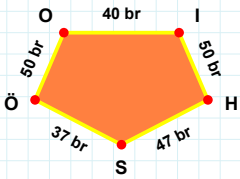
45 br hangi şeklin kenarıdır?

- ☐ Beşgen
☐ Dikey Dikdörtgen
☐ Ters Beşgen



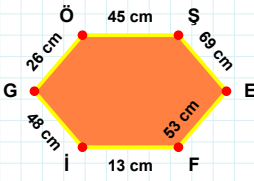
[SÖ] kenarı hangi şeklin kenarıdır?

- ☐ Dikey Dikdörtgen
☐ Ters Beşgen
☐ Beşgen



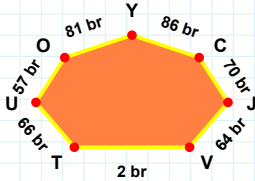
[VB] kenarı hangi şeklin kenarıdır?

- ☐ Dikey Dikdörtgen
☐ Ters Beşgen
☐ Beşgen



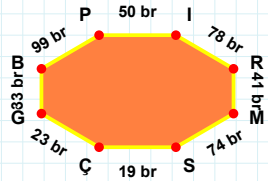
81 br hangi şeklin kenarıdır?

- ☐ Sekizgen
☐ Altıgen
☐ Yediggen



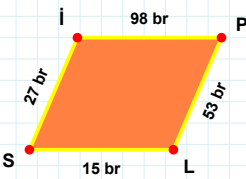
[MS] kenarı hangi şeklin kenarıdır?

- ☐ Yediggen
☐ Altıgen
☐ Sekizgen



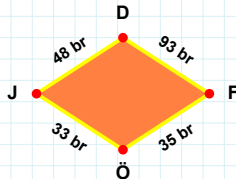
[SE] kenarı hangi şeklin kenarıdır?

- ☐ Altıgen
☐ Yediggen
☐ Sekizgen



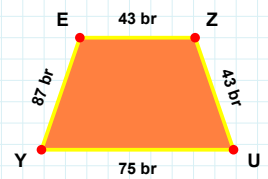
93 br hangi şeklin kenarıdır?

- ☐ Eşkenar Dörtgen
☐ Yamuk
☐ Paralelkenar



[EZ] kenarı hangi şeklin kenarıdır?

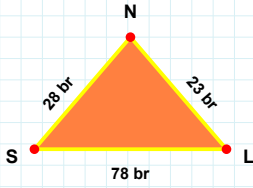
- ☐ Eşkenar Dörtgen
☐ Yamuk
☐ Paralelkenar



[Sİ] kenarı hangi şeklin kenarıdır?

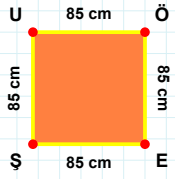
- ☐ Eşkenar Dörtgen
☐ Yamuk
☐ Paralelkenar

SORU: Aşağıdaki şekilleri inceleyiniz. Verilen kenar bilgisinin hangi şekle ait olduğunu işaretleyiniz.



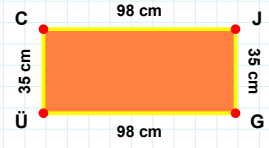
[JG] kenarı hangi şeklin kenarıdır?

- ☐ Üçgen
☐ Kare
☐ Dikdörtgen



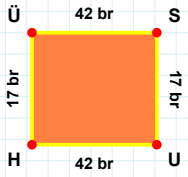
[LN] kenarı hangi şeklin kenarıdır?

- ☐ Dikdörtgen
☐ Üçgen
☐ Kare



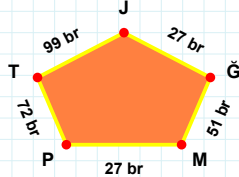
[EŞ] kenarı hangi şeklin kenarıdır?

- ☐ Üçgen
☐ Dikdörtgen
☐ Kare



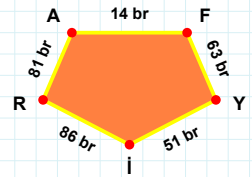
72 br hangi şeklin kenarıdır?

- ☐ Beşgen
☐ Dikey Dikdörtgen
☐ Ters Beşgen



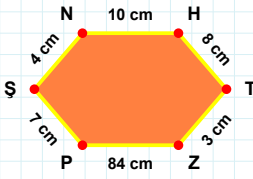
[İR] kenarı hangi şeklin kenarıdır?

- ☐ Ters Beşgen
☐ Beşgen
☐ Dikey Dikdörtgen



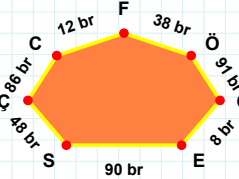
[ÜS] kenarı hangi şeklin kenarıdır?

- ☐ Dikey Dikdörtgen
☐ Ters Beşgen
☐ Beşgen



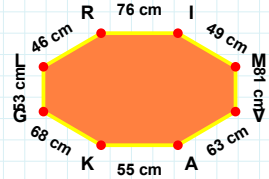
[VA] kenarı hangi şeklin kenarıdır?

- ☐ Yedigen
☐ Sekizgen
☐ Altıgen



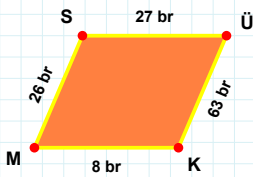
[PŞ] kenarı hangi şeklin kenarıdır?

- ☐ Sekizgen
☐ Yedigen
☐ Altıgen



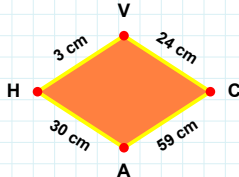
86 br hangi şeklin kenarıdır?

- ☐ Yedigen
☐ Sekizgen
☐ Altıgen



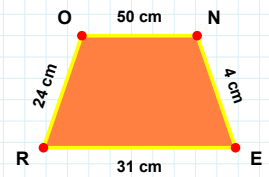
[ER] kenarı hangi şeklin kenarıdır?

- ☐ Eşkenar Dörtgen
☐ Yamuk
☐ Paralelkenar



[KM] kenarı hangi şeklin kenarıdır?

- ☐ Yamuk
☐ Paralelkenar
☐ Eşkenar Dörtgen



30 cm hangi şeklin kenarıdır?

- ☐ Yamuk
☐ Paralelkenar
☐ Eşkenar Dörtgen

SÜREÇ ODAKLI DEĞERLENDİRME ÖLÇEĞİ

Geliştirilmeli (0-109)	İyi (110-187)	Çok İyi (188-265)	Mükemmel (266-312)
<input type="checkbox"/>	<input type="checkbox"/>	<input type="checkbox"/>	<input type="checkbox"/>

Hazırlayan:

Bu bölüme sınıfınızın ilgili kazanıma yönelik genel durumuna ilişkin gözlem ve izlenimlerinizi, öğrencilerinizin bu kazanımla ilgili öğrenme eksikliklerini ve bu eksikliklerin giderilmesi amacıyla yaptığınız/yapmayı planladığınız faaliyetleri not edebilirsiniz.

No	Adı - Soyadı	Toplam Puan	Değerlendirme
1			
2			
3			
4			
5			
6			
7			
8			
9			
10			
11			
12			
13			
14			
15			
16			
17			
18			
19			
20			
21			
22			
23			
24			
25			
26			
27			
28			
29			
30			
31			
32			
33			
34			
35			

Hazırlayan: