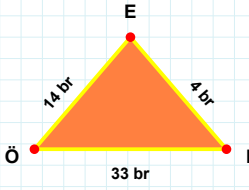
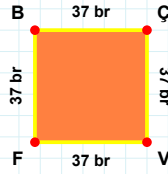


**SORU:** Aşağıdaki şekilleri inceleyiniz. Verilen kenar bilgisinin hangi şekle ait olduğunu işaretleyiniz.



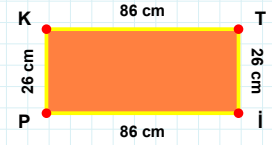
**|İP| kenarı hangi şeklin kenarıdır?**

- ☐ Üçgen  
☐ Kare  
☐ Dikdörtgen



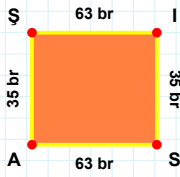
**|EÖ| kenarı hangi şeklin kenarıdır?**

- ☐ Üçgen  
☐ Dikdörtgen  
☐ Kare



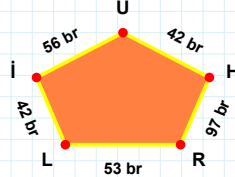
**|VF| kenarı hangi şeklin kenarıdır?**

- ☐ Dikdörtgen  
☐ Üçgen  
☐ Kare



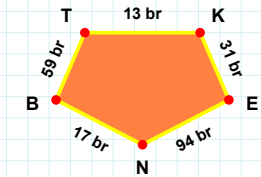
**56 br hangi şeklin kenarıdır?**

- ☐ Beşgen  
☐ Ters Beşgen  
☐ Dikey Dikdörtgen



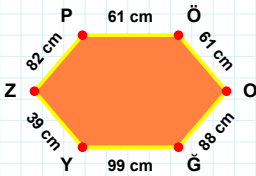
**|NB| kenarı hangi şeklin kenarıdır?**

- ☐ Dikey Dikdörtgen  
☐ Beşgen  
☐ Ters Beşgen



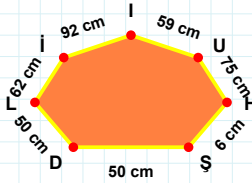
**|SA| kenarı hangi şeklin kenarıdır?**

- ☐ Beşgen  
☐ Dikey Dikdörtgen  
☐ Ters Beşgen



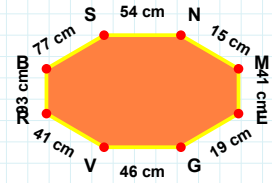
**92 cm hangi şeklin kenarıdır?**

- ☐ Yedigen  
☐ Sekizgen  
☐ Altıgen



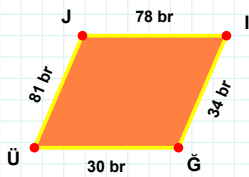
**|SN| kenarı hangi şeklin kenarıdır?**

- ☐ Yedigen  
☐ Altıgen  
☐ Sekizgen



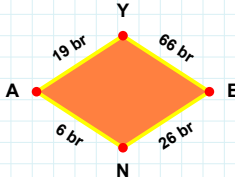
**|ZP| kenarı hangi şeklin kenarıdır?**

- ☐ Yedigen  
☐ Altıgen  
☐ Sekizgen



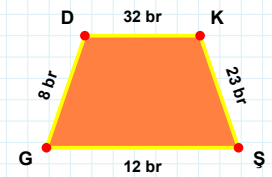
**|DK| kenarı hangi şeklin kenarıdır?**

- ☐ Paralelkenar  
☐ Yamuk  
☐ Eşkenar Dörtgen



**|İĞ| kenarı hangi şeklin kenarıdır?**

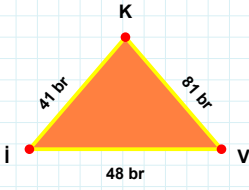
- ☐ Paralelkenar  
☐ Eşkenar Dörtgen  
☐ Yamuk



**26 br hangi şeklin kenarıdır?**

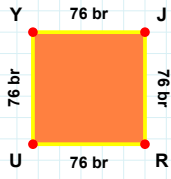
- ☐ Paralelkenar  
☐ Eşkenar Dörtgen  
☐ Yamuk

**SORU:** Aşağıdaki şekilleri inceleyiniz. Verilen kenar bilgisinin hangi şekle ait olduğunu işaretleyiniz.



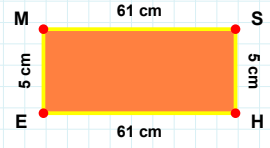
**[MS] kenarı hangi şeklin kenarıdır?**

- ☐ Kare  
☐ Dikdörtgen  
☐ Üçgen



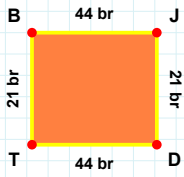
**[Kİ] kenarı hangi şeklin kenarıdır?**

- ☐ Üçgen  
☐ Kare  
☐ Dikdörtgen



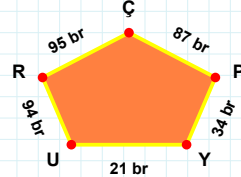
**[RU] kenarı hangi şeklin kenarıdır?**

- ☐ Dikdörtgen  
☐ Üçgen  
☐ Kare



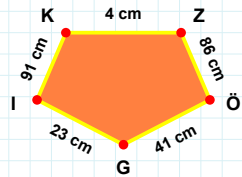
**87 br hangi şeklin kenarıdır?**

- ☐ Dikey Dikdörtgen  
☐ Beşgen  
☐ Ters Beşgen



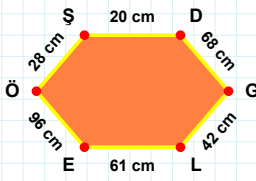
**[Gİ] kenarı hangi şeklin kenarıdır?**

- ☐ Ters Beşgen  
☐ Beşgen  
☐ Dikey Dikdörtgen



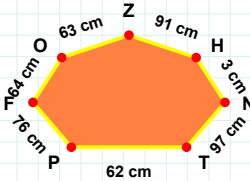
**[JD] kenarı hangi şeklin kenarıdır?**

- ☐ Beşgen  
☐ Dikey Dikdörtgen  
☐ Ters Beşgen



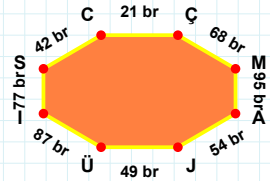
**[MA] kenarı hangi şeklin kenarıdır?**

- ☐ Yedigen  
☐ Altigen  
☐ Sekizgen



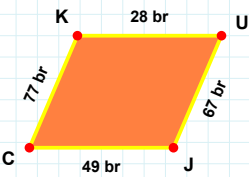
**[DG] kenarı hangi şeklin kenarıdır?**

- ☐ Altigen  
☐ Yedigen  
☐ Sekizgen



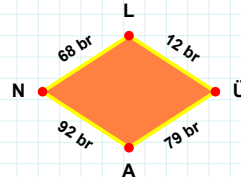
**3 cm hangi şeklin kenarıdır?**

- ☐ Altigen  
☐ Yedigen  
☐ Sekizgen



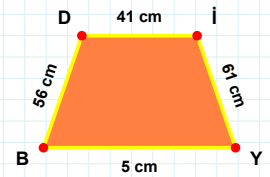
**[BD] kenarı hangi şeklin kenarıdır?**

- ☐ Yamuk  
☐ Paralelkenar  
☐ Eşkenar Dörtgen



**[KU] kenarı hangi şeklin kenarıdır?**

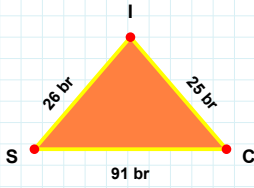
- ☐ Yamuk  
☐ Eşkenar Dörtgen  
☐ Paralelkenar



**12 br hangi şeklin kenarıdır?**

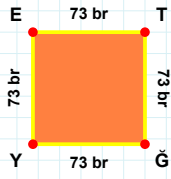
- ☐ Eşkenar Dörtgen  
☐ Paralelkenar  
☐ Yamuk

**SORU:** Aşağıdaki şekilleri inceleyiniz. Verilen kenar bilgisinin hangi şekle ait olduğunu işaretleyiniz.



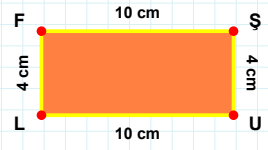
[İŞ] kenarı hangi şeklin kenarıdır?

- ☐ Üçgen  
☐ Dikdörtgen  
☐ Kare



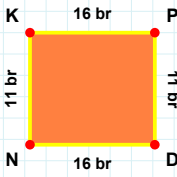
[İŞ] kenarı hangi şeklin kenarıdır?

- ☐ Üçgen  
☐ Dikdörtgen  
☐ Kare



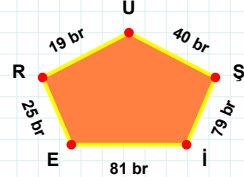
[ET] kenarı hangi şeklin kenarıdır?

- ☐ Üçgen  
☐ Dikdörtgen  
☐ Kare



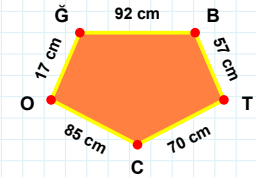
[İŞ] kenarı hangi şeklin kenarıdır?

- ☐ Dikey Dikdörtgen  
☐ Ters Beşgen  
☐ Beşgen



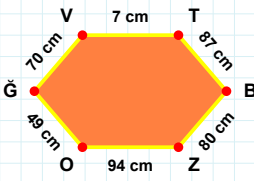
[İŞ] kenarı hangi şeklin kenarıdır?

- ☐ Beşgen  
☐ Ters Beşgen  
☐ Dikey Dikdörtgen



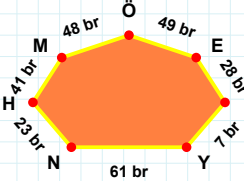
79 br hangi şeklin kenarıdır?

- ☐ Beşgen  
☐ Dikey Dikdörtgen  
☐ Ters Beşgen



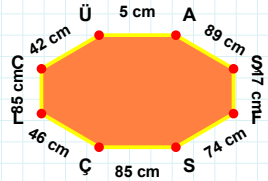
23 br hangi şeklin kenarıdır?

- ☐ Yediggen  
☐ Sekizgen  
☐ Altıgen



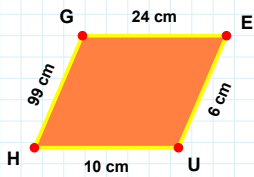
[İŞ] kenarı hangi şeklin kenarıdır?

- ☐ Altıgen  
☐ Yediggen  
☐ Sekizgen



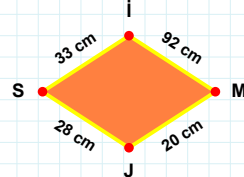
[ZO] kenarı hangi şeklin kenarıdır?

- ☐ Altıgen  
☐ Yediggen  
☐ Sekizgen



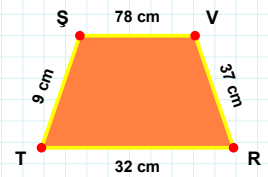
[VR] kenarı hangi şeklin kenarıdır?

- ☐ Paralelkenar  
☐ Yamuk  
☐ Eşkenar Dörtgen



[İŞ] kenarı hangi şeklin kenarıdır?

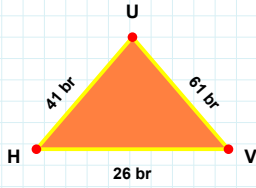
- ☐ Paralelkenar  
☐ Yamuk  
☐ Eşkenar Dörtgen



28 cm hangi şeklin kenarıdır?

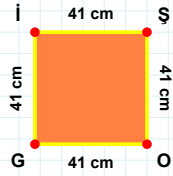
- ☐ Yamuk  
☐ Eşkenar Dörtgen  
☐ Paralelkenar

**SORU:** Aşağıdaki şekilleri inceleyiniz. Verilen kenar bilgisinin hangi şekle ait olduğunu işaretleyiniz.



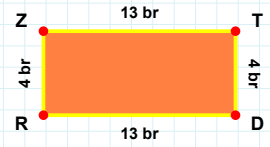
[RZ] kenarı hangi şeklin kenarıdır?

- ☐ Kare  
☐ Üçgen  
☐ Dikdörtgen



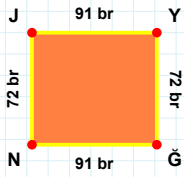
[HV] kenarı hangi şeklin kenarıdır?

- ☐ Üçgen  
☐ Kare  
☐ Dikdörtgen



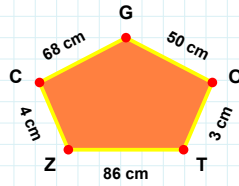
[OG] kenarı hangi şeklin kenarıdır?

- ☐ Dikdörtgen  
☐ Kare  
☐ Üçgen



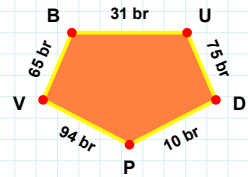
[BU] kenarı hangi şeklin kenarıdır?

- ☐ Beşgen  
☐ Ters Beşgen  
☐ Dikey Dikdörtgen



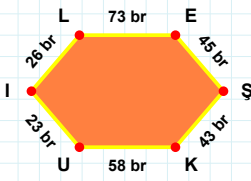
[YĞ] kenarı hangi şeklin kenarıdır?

- ☐ Dikey Dikdörtgen  
☐ Ters Beşgen  
☐ Beşgen



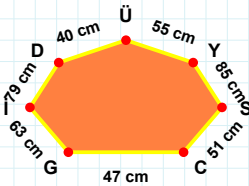
4 cm hangi şeklin kenarıdır?

- ☐ Beşgen  
☐ Dikey Dikdörtgen  
☐ Ters Beşgen



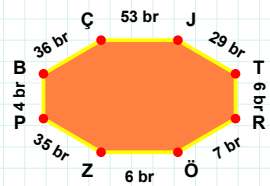
55 cm hangi şeklin kenarıdır?

- ☐ Altıgen  
☐ Yediggen  
☐ Sekizgen



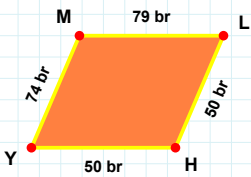
[ÇJ] kenarı hangi şeklin kenarıdır?

- ☐ Altıgen  
☐ Sekizgen  
☐ Yediggen



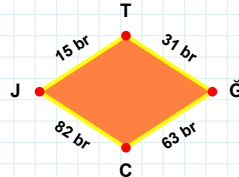
[ŞK] kenarı hangi şeklin kenarıdır?

- ☐ Altıgen  
☐ Yediggen  
☐ Sekizgen



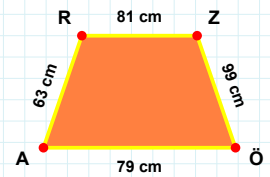
[AR] kenarı hangi şeklin kenarıdır?

- ☐ Yamuk  
☐ Eşkenar Dörtgen  
☐ Paralelkenar



[YM] kenarı hangi şeklin kenarıdır?

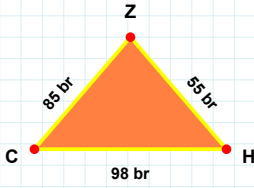
- ☐ Yamuk  
☐ Paralelkenar  
☐ Eşkenar Dörtgen



31 br hangi şeklin kenarıdır?

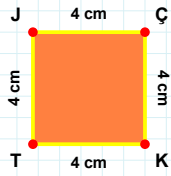
- ☐ Yamuk  
☐ Paralelkenar  
☐ Eşkenar Dörtgen

**SORU:** Aşağıdaki şekilleri inceleyiniz. Verilen kenar bilgisinin hangi şekle ait olduğunu işaretleyiniz.



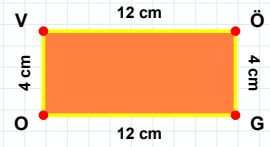
**|OV| kenarı hangi şeklin kenarıdır?**

- ☐ Dikdörtgen  
☐ Kare  
☐ Üçgen



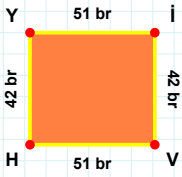
**|CH| kenarı hangi şeklin kenarıdır?**

- ☐ Kare  
☐ Dikdörtgen  
☐ Üçgen



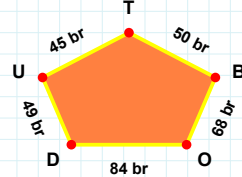
**|JÇ| kenarı hangi şeklin kenarıdır?**

- ☐ Kare  
☐ Dikdörtgen  
☐ Üçgen



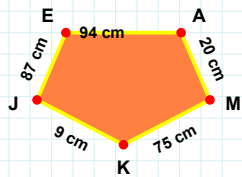
**|KJ| kenarı hangi şeklin kenarıdır?**

- ☐ Dikey Dikdörtgen  
☐ Beşgen  
☐ Ters Beşgen



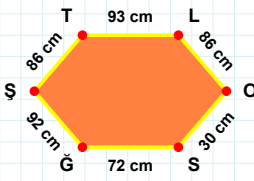
**|VH| kenarı hangi şeklin kenarıdır?**

- ☐ Ters Beşgen  
☐ Beşgen  
☐ Dikey Dikdörtgen



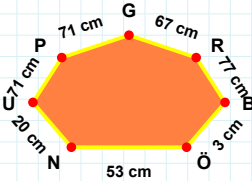
**49 br hangi şeklin kenarıdır?**

- ☐ Beşgen  
☐ Dikey Dikdörtgen  
☐ Ters Beşgen



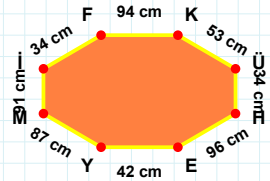
**3 cm hangi şeklin kenarıdır?**

- ☐ Altıgen  
☐ Sekizgen  
☐ Yedigen



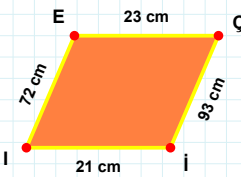
**|MI| kenarı hangi şeklin kenarıdır?**

- ☐ Yedigen  
☐ Sekizgen  
☐ Altıgen



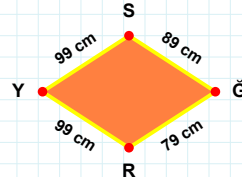
**|ST| kenarı hangi şeklin kenarıdır?**

- ☐ Altıgen  
☐ Yedigen  
☐ Sekizgen



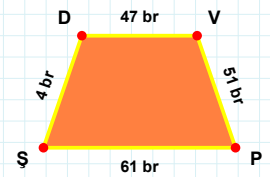
**89 cm hangi şeklin kenarıdır?**

- ☐ Paralelkenar  
☐ Yamuk  
☐ Eşkenar Dörtgen



**|VP| kenarı hangi şeklin kenarıdır?**

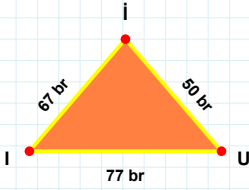
- ☐ Paralelkenar  
☐ Eşkenar Dörtgen  
☐ Yamuk



**|EÇ| kenarı hangi şeklin kenarıdır?**

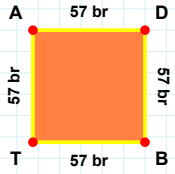
- ☐ Paralelkenar  
☐ Eşkenar Dörtgen  
☐ Yamuk

**SORU:** Aşağıdaki şekilleri inceleyiniz. Verilen kenar bilgisinin hangi şekle ait olduğunu işaretleyiniz.



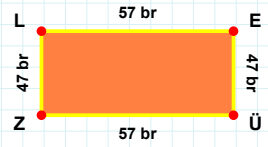
**[LE]** kenarı hangi şeklin kenarıdır?

- ☐ Üçgen  
☐ Dikdörtgen  
☐ Kare



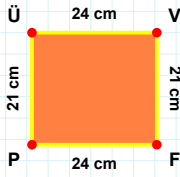
**[II]** kenarı hangi şeklin kenarıdır?

- ☐ Dikdörtgen  
☐ Kare  
☐ Üçgen



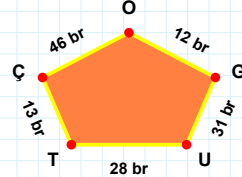
**[TA]** kenarı hangi şeklin kenarıdır?

- ☐ Kare  
☐ Dikdörtgen  
☐ Üçgen



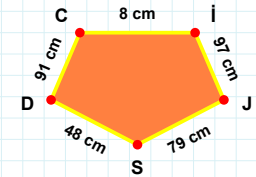
**28 br** hangi şeklin kenarıdır?

- ☐ Beşgen  
☐ Ters Beşgen  
☐ Dikey Dikdörtgen



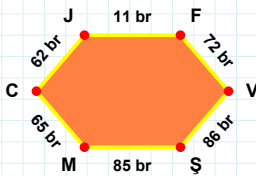
**[CI]** kenarı hangi şeklin kenarıdır?

- ☐ Dikey Dikdörtgen  
☐ Beşgen  
☐ Ters Beşgen



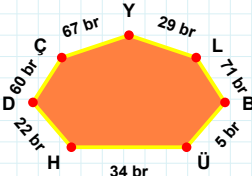
**[PÜ]** kenarı hangi şeklin kenarıdır?

- ☐ Beşgen  
☐ Dikey Dikdörtgen  
☐ Ters Beşgen



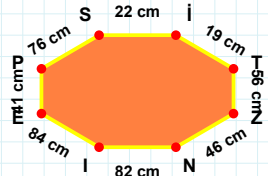
**[ZN]** kenarı hangi şeklin kenarıdır?

- ☐ Altıgen  
☐ Sekizgen  
☐ Yedigen



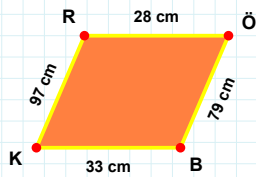
**[MC]** kenarı hangi şeklin kenarıdır?

- ☐ Altıgen  
☐ Sekizgen  
☐ Yedigen



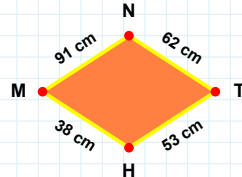
**60 br** hangi şeklin kenarıdır?

- ☐ Yedigen  
☐ Sekizgen  
☐ Altıgen



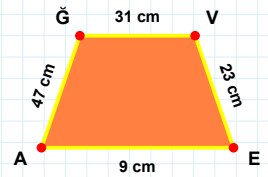
**91 cm** hangi şeklin kenarıdır?

- ☐ Paralelkenar  
☐ Yamuk  
☐ Eşkenar Dörtgen



**[GV]** kenarı hangi şeklin kenarıdır?

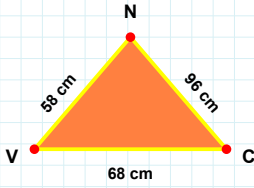
- ☐ Paralelkenar  
☐ Yamuk  
☐ Eşkenar Dörtgen



**[RÖ]** kenarı hangi şeklin kenarıdır?

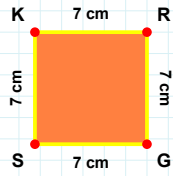
- ☐ Paralelkenar  
☐ Yamuk  
☐ Eşkenar Dörtgen

**SORU:** Aşağıdaki şekilleri inceleyiniz. Verilen kenar bilgisinin hangi şekle ait olduğunu işaretleyiniz.



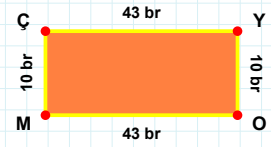
**[MÇ] kenarı hangi şeklin kenarıdır?**

- ☐ Kare  
☐ Üçgen  
☐ Dikdörtgen



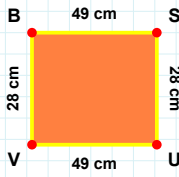
**[NV] kenarı hangi şeklin kenarıdır?**

- ☐ Kare  
☐ Dikdörtgen  
☐ Üçgen



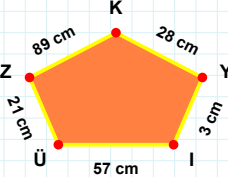
**[SK] kenarı hangi şeklin kenarıdır?**

- ☐ Üçgen  
☐ Dikdörtgen  
☐ Kare



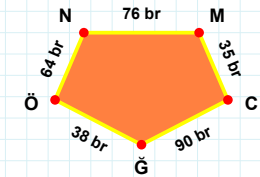
**57 cm hangi şeklin kenarıdır?**

- ☐ Dikey Dikdörtgen  
☐ Beşgen  
☐ Ters Beşgen



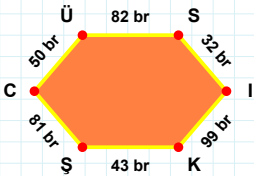
**[ÖN] kenarı hangi şeklin kenarıdır?**

- ☐ Beşgen  
☐ Dikey Dikdörtgen  
☐ Ters Beşgen



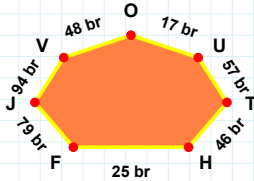
**[VB] kenarı hangi şeklin kenarıdır?**

- ☐ Dikey Dikdörtgen  
☐ Beşgen  
☐ Ters Beşgen



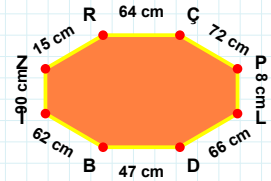
**17 br hangi şeklin kenarıdır?**

- ☐ Sekizgen  
☐ Yediggen  
☐ Altıgen



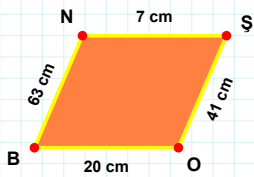
**[PL] kenarı hangi şeklin kenarıdır?**

- ☐ Sekizgen  
☐ Altıgen  
☐ Yediggen



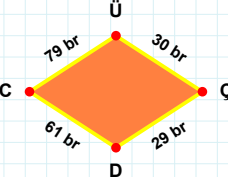
**[ŞC] kenarı hangi şeklin kenarıdır?**

- ☐ Altıgen  
☐ Sekizgen  
☐ Yediggen



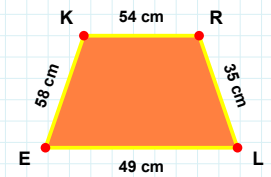
**29 br hangi şeklin kenarıdır?**

- ☐ Paralelkenar  
☐ Yamuk  
☐ Eşkenar Dörtgen



**[LE] kenarı hangi şeklin kenarıdır?**

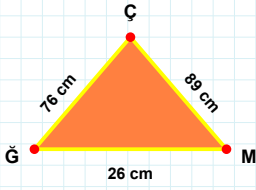
- ☐ Paralelkenar  
☐ Yamuk  
☐ Eşkenar Dörtgen



**[ŞO] kenarı hangi şeklin kenarıdır?**

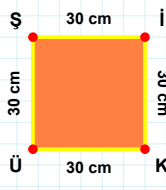
- ☐ Eşkenar Dörtgen  
☐ Paralelkenar  
☐ Yamuk

**SORU:** Aşağıdaki şekilleri inceleyiniz. Verilen kenar bilgisinin hangi şekle ait olduğunu işaretleyiniz.



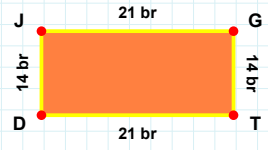
**[Şİ] kenarı hangi şeklin kenarıdır?**

- ☐ Kare  
☐ Dikdörtgen  
☐ Üçgen



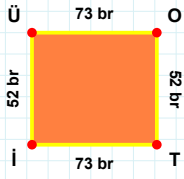
**[JG] kenarı hangi şeklin kenarıdır?**

- ☐ Dikdörtgen  
☐ Üçgen  
☐ Kare



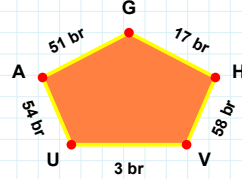
**[MÇ] kenarı hangi şeklin kenarıdır?**

- ☐ Üçgen  
☐ Kare  
☐ Dikdörtgen



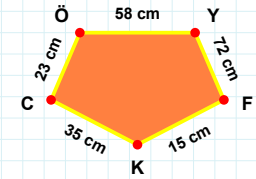
**[KC] kenarı hangi şeklin kenarıdır?**

- ☐ Beşgen  
☐ Ters Beşgen  
☐ Dikey Dikdörtgen



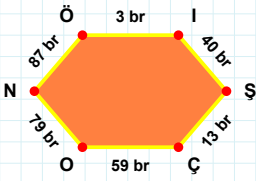
**[OT] kenarı hangi şeklin kenarıdır?**

- ☐ Dikey Dikdörtgen  
☐ Ters Beşgen  
☐ Beşgen



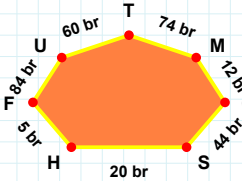
**51 br hangi şeklin kenarıdır?**

- ☐ Dikey Dikdörtgen  
☐ Beşgen  
☐ Ters Beşgen



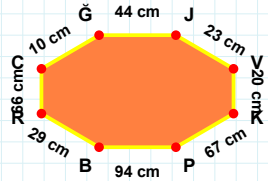
**60 br hangi şeklin kenarıdır?**

- ☐ Sekizgen  
☐ Altıgen  
☐ Yedigen



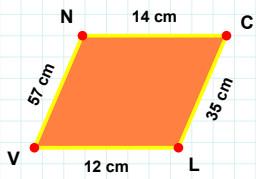
**[ĞJ] kenarı hangi şeklin kenarıdır?**

- ☐ Sekizgen  
☐ Yedigen  
☐ Altıgen



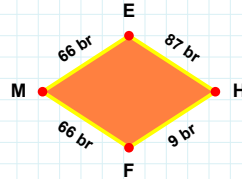
**[İŞ] kenarı hangi şeklin kenarıdır?**

- ☐ Altıgen  
☐ Yedigen  
☐ Sekizgen



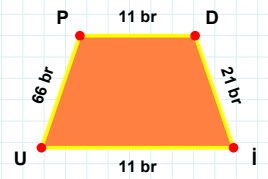
**[UP] kenarı hangi şeklin kenarıdır?**

- ☐ Paralelkenar  
☐ Yamuk  
☐ Eşkenar Dörtgen



**[CL] kenarı hangi şeklin kenarıdır?**

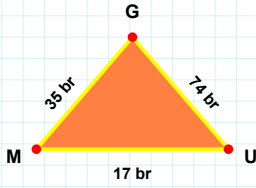
- ☐ Yamuk  
☐ Eşkenar Dörtgen  
☐ Paralelkenar



**87 br hangi şeklin kenarıdır?**

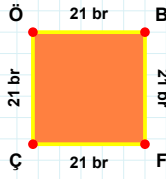
- ☐ Eşkenar Dörtgen  
☐ Paralelkenar  
☐ Yamuk

**SORU:** Aşağıdaki şekilleri inceleyiniz. Verilen kenar bilgisinin hangi şekle ait olduğunu işaretleyiniz.



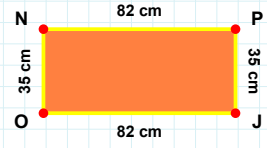
[FÇ] kenarı hangi şeklin kenarıdır?

- ☐ Üçgen  
☐ Kare  
☐ Dikdörtgen



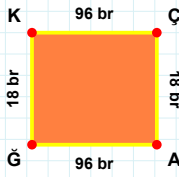
[PJ] kenarı hangi şeklin kenarıdır?

- ☐ Kare  
☐ Üçgen  
☐ Dikdörtgen



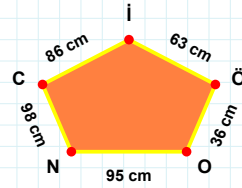
[GM] kenarı hangi şeklin kenarıdır?

- ☐ Dikdörtgen  
☐ Üçgen  
☐ Kare



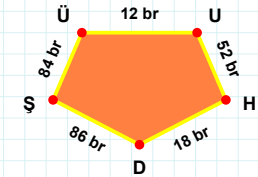
36 cm hangi şeklin kenarıdır?

- ☐ Dikey Dikdörtgen  
☐ Beşgen  
☐ Ters Beşgen



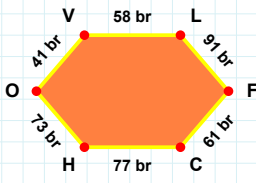
[UH] kenarı hangi şeklin kenarıdır?

- ☐ Ters Beşgen  
☐ Beşgen  
☐ Dikey Dikdörtgen



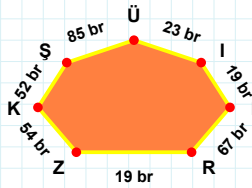
[ÖK] kenarı hangi şeklin kenarıdır?

- ☐ Beşgen  
☐ Dikey Dikdörtgen  
☐ Ters Beşgen



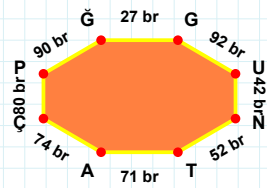
[NT] kenarı hangi şeklin kenarıdır?

- ☐ Yedigen  
☐ Altigen  
☐ Sekizgen



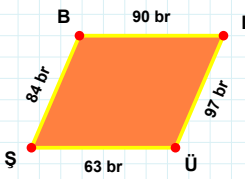
[HO] kenarı hangi şeklin kenarıdır?

- ☐ Yedigen  
☐ Altigen  
☐ Sekizgen



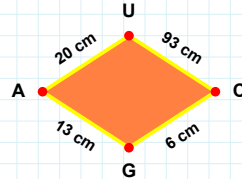
23 br hangi şeklin kenarıdır?

- ☐ Sekizgen  
☐ Altigen  
☐ Yedigen



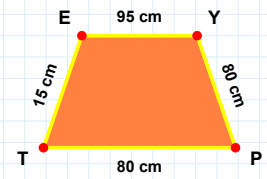
13 cm hangi şeklin kenarıdır?

- ☐ Paralelkenar  
☐ Yamuk  
☐ Eşkenar Dörtgen



[YP] kenarı hangi şeklin kenarıdır?

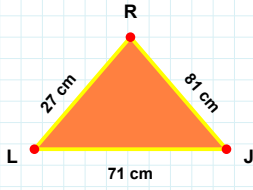
- ☐ Yamuk  
☐ Paralelkenar  
☐ Eşkenar Dörtgen



[ŞB] kenarı hangi şeklin kenarıdır?

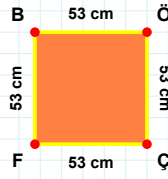
- ☐ Eşkenar Dörtgen  
☐ Yamuk  
☐ Paralelkenar

**SORU:** Aşağıdaki şekilleri inceleyiniz. Verilen kenar bilgisinin hangi şekle ait olduğunu işaretleyiniz.



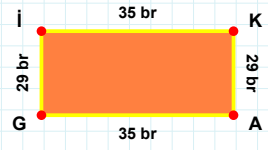
**|BÖ| kenarı hangi şeklin kenarıdır?**

- ☐ Üçgen  
☐ Dikdörtgen  
☐ Kare



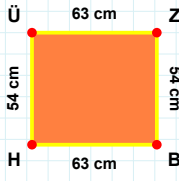
**|KA| kenarı hangi şeklin kenarıdır?**

- ☐ Dikdörtgen  
☐ Kare  
☐ Üçgen



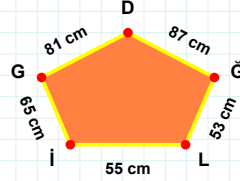
**|JR| kenarı hangi şeklin kenarıdır?**

- ☐ Kare  
☐ Üçgen  
☐ Dikdörtgen



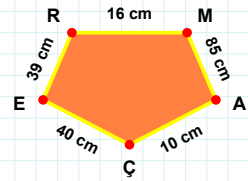
**55 cm hangi şeklin kenarıdır?**

- ☐ Ters Beşgen  
☐ Beşgen  
☐ Dikey Dikdörtgen



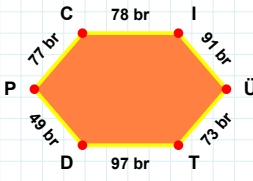
**|AÇ| kenarı hangi şeklin kenarıdır?**

- ☐ Beşgen  
☐ Ters Beşgen  
☐ Dikey Dikdörtgen



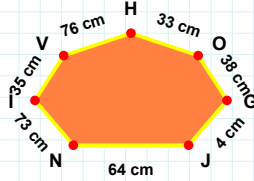
**|BH| kenarı hangi şeklin kenarıdır?**

- ☐ Ters Beşgen  
☐ Dikey Dikdörtgen  
☐ Beşgen



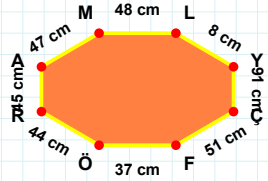
**|ÇF| kenarı hangi şeklin kenarıdır?**

- ☐ Altıgen  
☐ Sekizgen  
☐ Yediggen



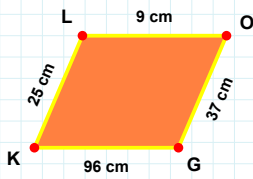
**|DP| kenarı hangi şeklin kenarıdır?**

- ☐ Altıgen  
☐ Yediggen  
☐ Sekizgen



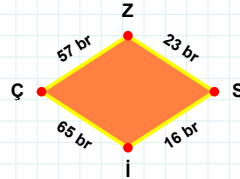
**38 cm hangi şeklin kenarıdır?**

- ☐ Sekizgen  
☐ Yediggen  
☐ Altıgen



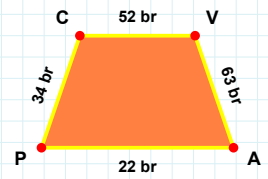
**23 br hangi şeklin kenarıdır?**

- ☐ Paralelkenar  
☐ Yamuk  
☐ Eşkenar Dörtgen



**|CV| kenarı hangi şeklin kenarıdır?**

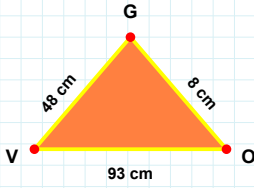
- ☐ Yamuk  
☐ Eşkenar Dörtgen  
☐ Paralelkenar



**|KL| kenarı hangi şeklin kenarıdır?**

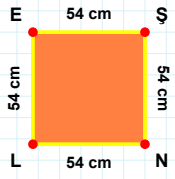
- ☐ Yamuk  
☐ Eşkenar Dörtgen  
☐ Paralelkenar

**SORU:** Aşağıdaki şekilleri inceleyiniz. Verilen kenar bilgisinin hangi şekle ait olduğunu işaretleyiniz.



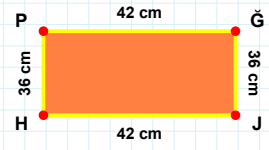
[NL] kenarı hangi şeklin kenarıdır?

- ☐ Üçgen  
☐ Dikdörtgen  
☐ Kare



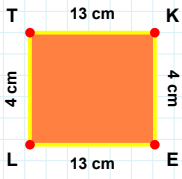
[JH] kenarı hangi şeklin kenarıdır?

- ☐ Üçgen  
☐ Dikdörtgen  
☐ Kare



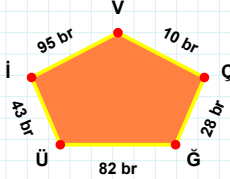
[VO] kenarı hangi şeklin kenarıdır?

- ☐ Dikdörtgen  
☐ Kare  
☐ Üçgen



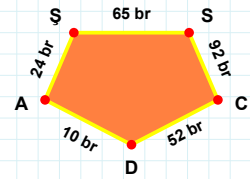
[DA] kenarı hangi şeklin kenarıdır?

- ☐ Dikey Dikdörtgen  
☐ Ters Beşgen  
☐ Beşgen



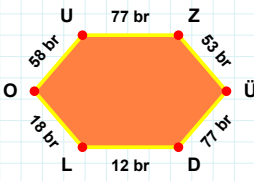
[TK] kenarı hangi şeklin kenarıdır?

- ☐ Dikey Dikdörtgen  
☐ Beşgen  
☐ Ters Beşgen



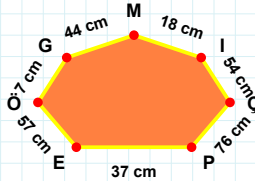
43 br hangi şeklin kenarıdır?

- ☐ Dikey Dikdörtgen  
☐ Ters Beşgen  
☐ Beşgen



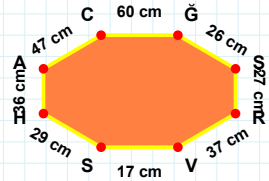
44 cm hangi şeklin kenarıdır?

- ☐ Sekizgen  
☐ Yediggen  
☐ Altıgen



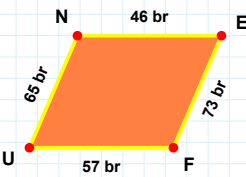
[SH] kenarı hangi şeklin kenarıdır?

- ☐ Yediggen  
☐ Sekizgen  
☐ Altıgen



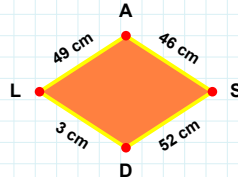
[DL] kenarı hangi şeklin kenarıdır?

- ☐ Yediggen  
☐ Sekizgen  
☐ Altıgen



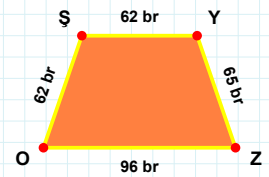
52 cm hangi şeklin kenarıdır?

- ☐ Yamuk  
☐ Paralelkenar  
☐ Eşkenar Dörtgen



[OŞ] kenarı hangi şeklin kenarıdır?

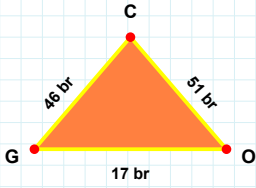
- ☐ Eşkenar Dörtgen  
☐ Yamuk  
☐ Paralelkenar



[NE] kenarı hangi şeklin kenarıdır?

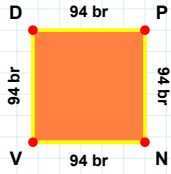
- ☐ Paralelkenar  
☐ Eşkenar Dörtgen  
☐ Yamuk

**SORU:** Aşağıdaki şekilleri inceleyiniz. Verilen kenar bilgisinin hangi şekle ait olduğunu işaretleyiniz.



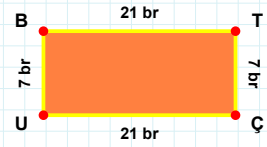
[UB] kenarı hangi şeklin kenarıdır?

- ☐ Kare  
☐ Üçgen  
☐ Dikdörtgen



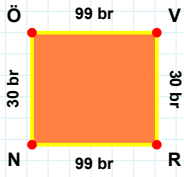
[OC] kenarı hangi şeklin kenarıdır?

- ☐ Üçgen  
☐ Dikdörtgen  
☐ Kare



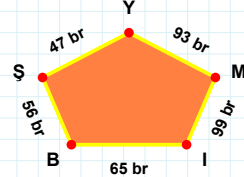
[DP] kenarı hangi şeklin kenarıdır?

- ☐ Dikdörtgen  
☐ Üçgen  
☐ Kare



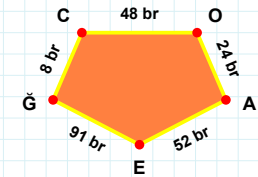
47 br hangi şeklin kenarıdır?

- ☐ Ters Beşgen  
☐ Beşgen  
☐ Dikey Dikdörtgen



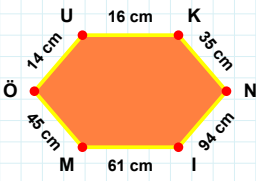
[GC] kenarı hangi şeklin kenarıdır?

- ☐ Dikey Dikdörtgen  
☐ Beşgen  
☐ Ters Beşgen



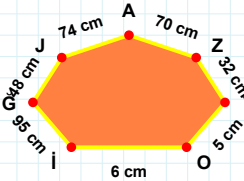
[NÖ] kenarı hangi şeklin kenarıdır?

- ☐ Dikey Dikdörtgen  
☐ Ters Beşgen  
☐ Beşgen



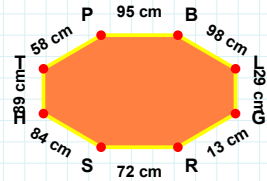
[PB] kenarı hangi şeklin kenarıdır?

- ☐ Yedigen  
☐ Altıgen  
☐ Sekizgen



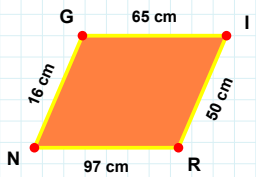
[ÖU] kenarı hangi şeklin kenarıdır?

- ☐ Altıgen  
☐ Sekizgen  
☐ Yedigen



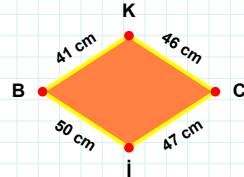
32 cm hangi şeklin kenarıdır?

- ☐ Yedigen  
☐ Altıgen  
☐ Sekizgen



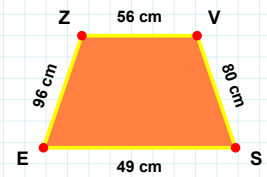
46 cm hangi şeklin kenarıdır?

- ☐ Eşkenar Dörtgen  
☐ Yamuk  
☐ Paralelkenar



[VS] kenarı hangi şeklin kenarıdır?

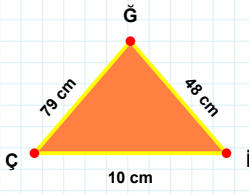
- ☐ Yamuk  
☐ Eşkenar Dörtgen  
☐ Paralelkenar



[IR] kenarı hangi şeklin kenarıdır?

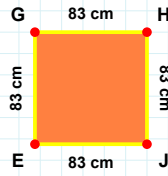
- ☐ Paralelkenar  
☐ Yamuk  
☐ Eşkenar Dörtgen

**SORU:** Aşağıdaki şekilleri inceleyiniz. Verilen kenar bilgisinin hangi şekle ait olduğunu işaretleyiniz.



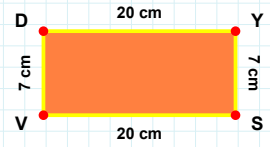
[HJ] kenarı hangi şeklin kenarıdır?

- ☐ Kare  
☐ Dikdörtgen  
☐ Üçgen



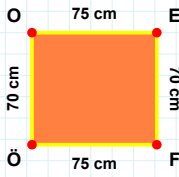
[VD] kenarı hangi şeklin kenarıdır?

- ☐ Dikdörtgen  
☐ Üçgen  
☐ Kare



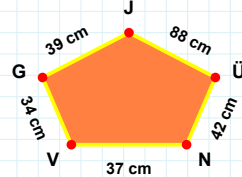
[Çİ] kenarı hangi şeklin kenarıdır?

- ☐ Kare  
☐ Üçgen  
☐ Dikdörtgen



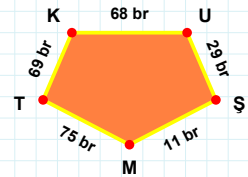
42 cm hangi şeklin kenarıdır?

- ☐ Dikey Dikdörtgen  
☐ Ters Beşgen  
☐ Beşgen



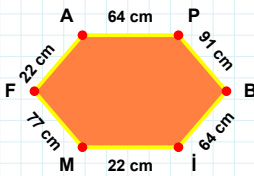
[TK] kenarı hangi şeklin kenarıdır?

- ☐ Dikey Dikdörtgen  
☐ Beşgen  
☐ Ters Beşgen



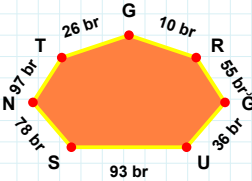
[ÖÖ] kenarı hangi şeklin kenarıdır?

- ☐ Beşgen  
☐ Ters Beşgen  
☐ Dikey Dikdörtgen



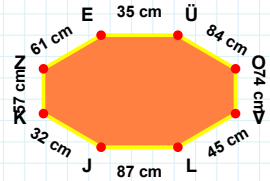
78 br hangi şeklin kenarıdır?

- ☐ Altıgen  
☐ Yediggen  
☐ Sekizgen



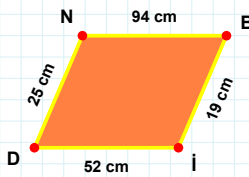
[LJ] kenarı hangi şeklin kenarıdır?

- ☐ Altıgen  
☐ Sekizgen  
☐ Yediggen



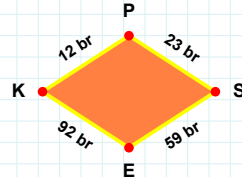
[PB] kenarı hangi şeklin kenarıdır?

- ☐ Yediggen  
☐ Altıgen  
☐ Sekizgen



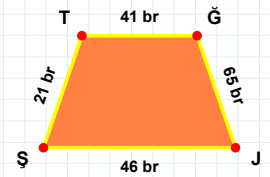
92 br hangi şeklin kenarıdır?

- ☐ Eşkenar Dörtgen  
☐ Yamuk  
☐ Paralelkenar



[TĞ] kenarı hangi şeklin kenarıdır?

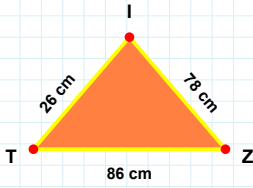
- ☐ Eşkenar Dörtgen  
☐ Paralelkenar  
☐ Yamuk



[İD] kenarı hangi şeklin kenarıdır?

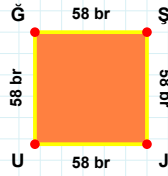
- ☐ Paralelkenar  
☐ Eşkenar Dörtgen  
☐ Yamuk

**SORU:** Aşağıdaki şekilleri inceleyiniz. Verilen kenar bilgisinin hangi şekle ait olduğunu işaretleyiniz.



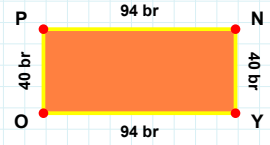
[JU] kenarı hangi şeklin kenarıdır?

- ☐ Kare  
☐ Üçgen  
☐ Dikdörtgen



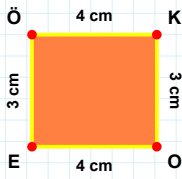
[YO] kenarı hangi şeklin kenarıdır?

- ☐ Üçgen  
☐ Dikdörtgen  
☐ Kare



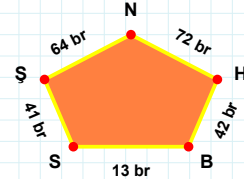
[ZI] kenarı hangi şeklin kenarıdır?

- ☐ Kare  
☐ Dikdörtgen  
☐ Üçgen



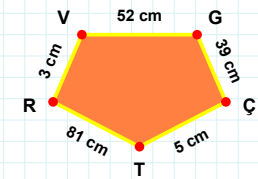
72 br hangi şeklin kenarıdır?

- ☐ Beşgen  
☐ Dikey Dikdörtgen  
☐ Ters Beşgen



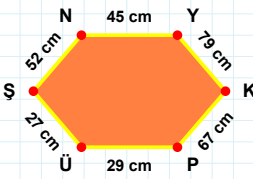
[TR] kenarı hangi şeklin kenarıdır?

- ☐ Dikey Dikdörtgen  
☐ Beşgen  
☐ Ters Beşgen



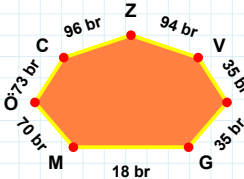
[OE] kenarı hangi şeklin kenarıdır?

- ☐ Ters Beşgen  
☐ Dikey Dikdörtgen  
☐ Beşgen



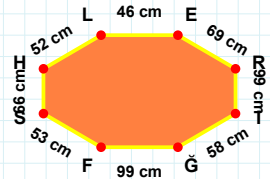
18 br hangi şeklin kenarıdır?

- ☐ Sekizgen  
☐ Altıgen  
☐ Yedigen



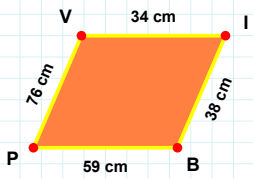
[SH] kenarı hangi şeklin kenarıdır?

- ☐ Yedigen  
☐ Sekizgen  
☐ Altıgen



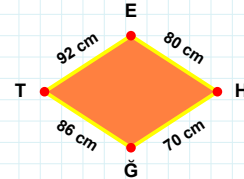
[PÜ] kenarı hangi şeklin kenarıdır?

- ☐ Yedigen  
☐ Altıgen  
☐ Sekizgen



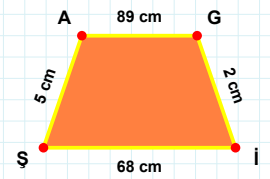
[İŞ] kenarı hangi şeklin kenarıdır?

- ☐ Paralelkenar  
☐ Eşkenar Dörtgen  
☐ Yamuk



[VI] kenarı hangi şeklin kenarıdır?

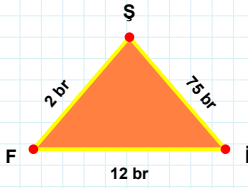
- ☐ Eşkenar Dörtgen  
☐ Yamuk  
☐ Paralelkenar



92 cm hangi şeklin kenarıdır?

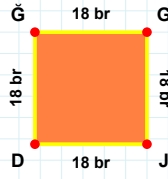
- ☐ Eşkenar Dörtgen  
☐ Paralelkenar  
☐ Yamuk

**SORU:** Aşağıdaki şekilleri inceleyiniz. Verilen kenar bilgisinin hangi şekle ait olduğunu işaretleyiniz.



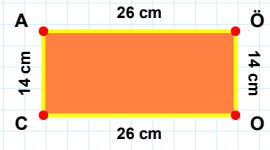
**[Şİ] kenarı hangi şeklin kenarıdır?**

- ☐ Dikdörtgen  
☐ Kare  
☐ Üçgen



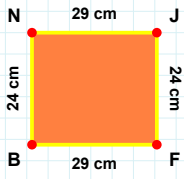
**[ÖJ] kenarı hangi şeklin kenarıdır?**

- ☐ Dikdörtgen  
☐ Kare  
☐ Üçgen



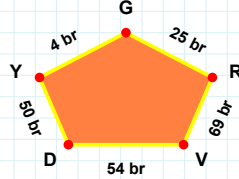
**[ŞF] kenarı hangi şeklin kenarıdır?**

- ☐ Dikdörtgen  
☐ Kare  
☐ Üçgen



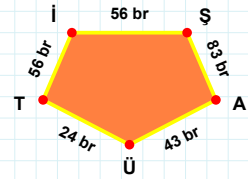
**50 br hangi şeklin kenarıdır?**

- ☐ Ters Beşgen  
☐ Dikey Dikdörtgen  
☐ Beşgen



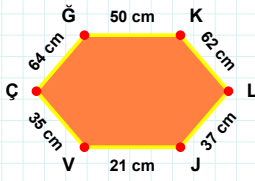
**[AÜ] kenarı hangi şeklin kenarıdır?**

- ☐ Ters Beşgen  
☐ Dikey Dikdörtgen  
☐ Beşgen



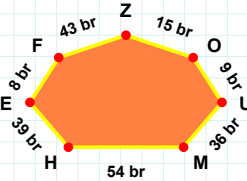
**[FB] kenarı hangi şeklin kenarıdır?**

- ☐ Dikey Dikdörtgen  
☐ Ters Beşgen  
☐ Beşgen



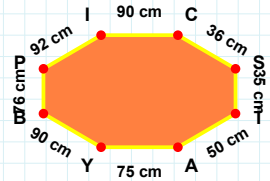
**[IC] kenarı hangi şeklin kenarıdır?**

- ☐ Sekizgen  
☐ Yediggen  
☐ Altıgen



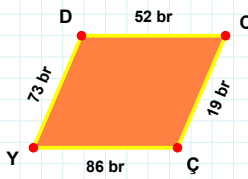
**[KL] kenarı hangi şeklin kenarıdır?**

- ☐ Yediggen  
☐ Sekizgen  
☐ Altıgen



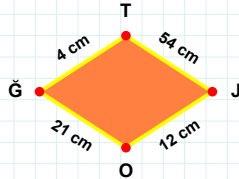
**43 br hangi şeklin kenarıdır?**

- ☐ Sekizgen  
☐ Yediggen  
☐ Altıgen



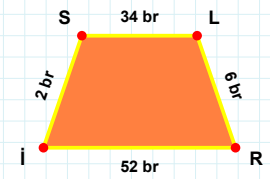
**4 cm hangi şeklin kenarıdır?**

- ☐ Eşkenar Dörtgen  
☐ Paralelkenar  
☐ Yamuk



**[İS] kenarı hangi şeklin kenarıdır?**

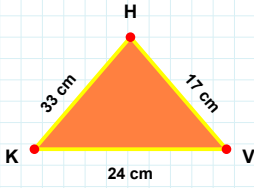
- ☐ Eşkenar Dörtgen  
☐ Paralelkenar  
☐ Yamuk



**[ÇY] kenarı hangi şeklin kenarıdır?**

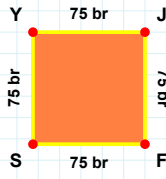
- ☐ Paralelkenar  
☐ Yamuk  
☐ Eşkenar Dörtgen

**SORU:** Aşağıdaki şekilleri inceleyiniz. Verilen kenar bilgisinin hangi şekle ait olduğunu işaretleyiniz.



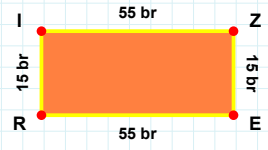
**[ZE] kenarı hangi şeklin kenarıdır?**

- ☐ Üçgen  
☐ Dikdörtgen  
☐ Kare



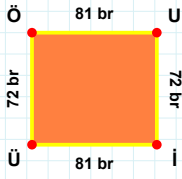
**[KV] kenarı hangi şeklin kenarıdır?**

- ☐ Üçgen  
☐ Kare  
☐ Dikdörtgen



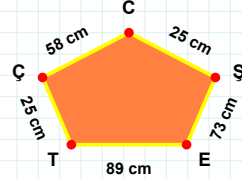
**[FS] kenarı hangi şeklin kenarıdır?**

- ☐ Dikdörtgen  
☐ Kare  
☐ Üçgen



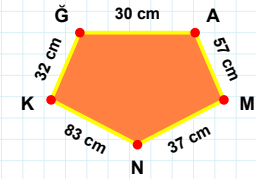
**[NK] kenarı hangi şeklin kenarıdır?**

- ☐ Ters Beşgen  
☐ Dikey Dikdörtgen  
☐ Beşgen



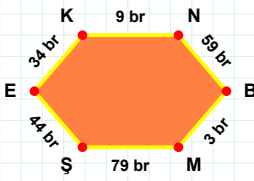
**[ÖU] kenarı hangi şeklin kenarıdır?**

- ☐ Dikey Dikdörtgen  
☐ Ters Beşgen  
☐ Beşgen



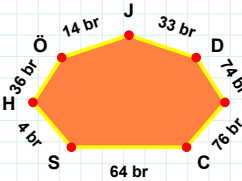
**89 cm hangi şeklin kenarıdır?**

- ☐ Beşgen  
☐ Dikey Dikdörtgen  
☐ Ters Beşgen



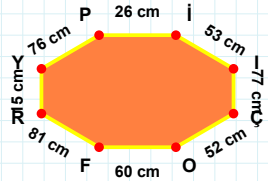
**[FR] kenarı hangi şeklin kenarıdır?**

- ☐ Altıgen  
☐ Sekizgen  
☐ Yediggen



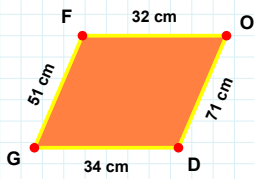
**[EK] kenarı hangi şeklin kenarıdır?**

- ☐ Yediggen  
☐ Altıgen  
☐ Sekizgen



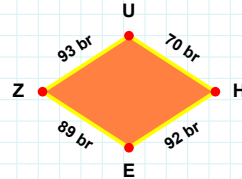
**14 br hangi şeklin kenarıdır?**

- ☐ Yediggen  
☐ Sekizgen  
☐ Altıgen



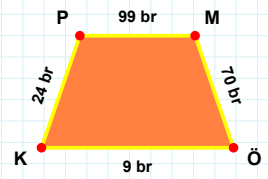
**[ÖK] kenarı hangi şeklin kenarıdır?**

- ☐ Eşkenar Dörtgen  
☐ Yamuk  
☐ Paralelkenar



**[GF] kenarı hangi şeklin kenarıdır?**

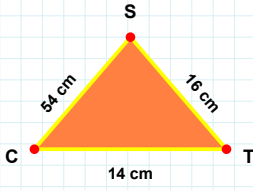
- ☐ Yamuk  
☐ Paralelkenar  
☐ Eşkenar Dörtgen



**89 br hangi şeklin kenarıdır?**

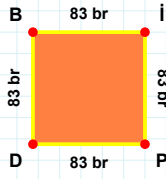
- ☐ Yamuk  
☐ Paralelkenar  
☐ Eşkenar Dörtgen

**SORU:** Aşağıdaki şekilleri inceleyiniz. Verilen kenar bilgisinin hangi şekle ait olduğunu işaretleyiniz.



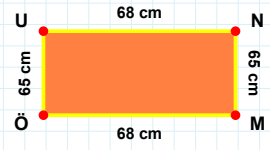
**[BI] kenarı hangi şeklin kenarıdır?**

- ☐ Üçgen  
☐ Dikdörtgen  
☐ Kare



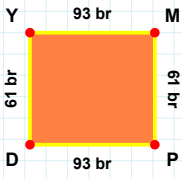
**[UN] kenarı hangi şeklin kenarıdır?**

- ☐ Dikdörtgen  
☐ Üçgen  
☐ Kare



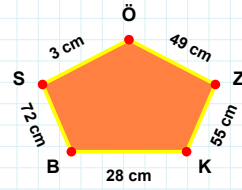
**[SC] kenarı hangi şeklin kenarıdır?**

- ☐ Üçgen  
☐ Dikdörtgen  
☐ Kare



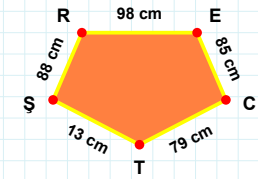
**[TŞ] kenarı hangi şeklin kenarıdır?**

- ☐ Dikey Dikdörtgen  
☐ Ters Beşgen  
☐ Beşgen



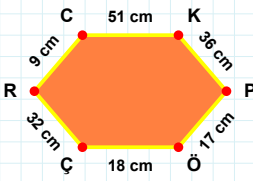
**[MP] kenarı hangi şeklin kenarıdır?**

- ☐ Beşgen  
☐ Dikey Dikdörtgen  
☐ Ters Beşgen



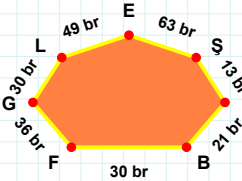
**49 cm hangi şeklin kenarıdır?**

- ☐ Beşgen  
☐ Ters Beşgen  
☐ Dikey Dikdörtgen



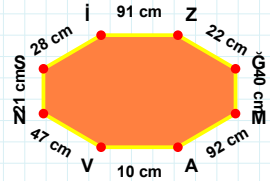
**63 br hangi şeklin kenarıdır?**

- ☐ Yedigen  
☐ Altıgen  
☐ Sekizgen



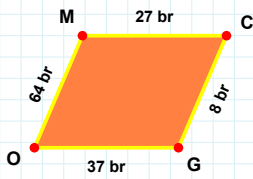
**[MA] kenarı hangi şeklin kenarıdır?**

- ☐ Sekizgen  
☐ Yedigen  
☐ Altıgen



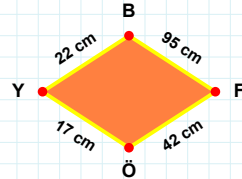
**[CK] kenarı hangi şeklin kenarıdır?**

- ☐ Sekizgen  
☐ Altıgen  
☐ Yedigen



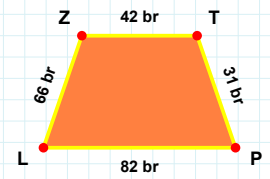
**[ZT] kenarı hangi şeklin kenarıdır?**

- ☐ Yamuk  
☐ Paralelkenar  
☐ Eşkenar Dörtgen



**[CG] kenarı hangi şeklin kenarıdır?**

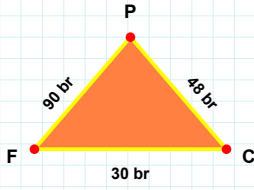
- ☐ Paralelkenar  
☐ Eşkenar Dörtgen  
☐ Yamuk



**95 cm hangi şeklin kenarıdır?**

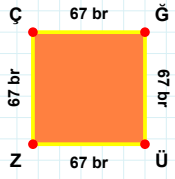
- ☐ Paralelkenar  
☐ Yamuk  
☐ Eşkenar Dörtgen

**SORU:** Aşağıdaki şekilleri inceleyiniz. Verilen kenar bilgisinin hangi şekle ait olduğunu işaretleyiniz.



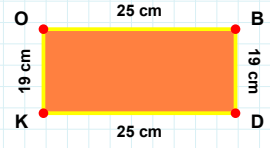
**[ÜZ] kenarı hangi şeklin kenarıdır?**

- ☐ Üçgen  
☐ Dikdörtgen  
☐ Kare



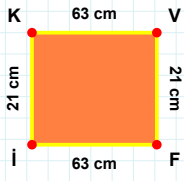
**[BD] kenarı hangi şeklin kenarıdır?**

- ☐ Kare  
☐ Üçgen  
☐ Dikdörtgen



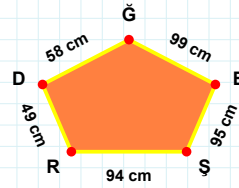
**[CP] kenarı hangi şeklin kenarıdır?**

- ☐ Üçgen  
☐ Kare  
☐ Dikdörtgen



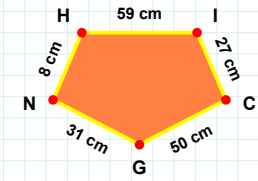
**58 cm hangi şeklin kenarıdır?**

- ☐ Beşgen  
☐ Dikey Dikdörtgen  
☐ Ters Beşgen



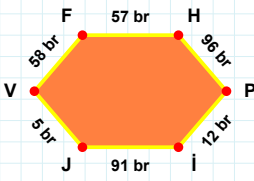
**[NH] kenarı hangi şeklin kenarıdır?**

- ☐ Ters Beşgen  
☐ Beşgen  
☐ Dikey Dikdörtgen



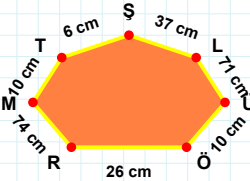
**[Fİ] kenarı hangi şeklin kenarıdır?**

- ☐ Dikey Dikdörtgen  
☐ Ters Beşgen  
☐ Beşgen



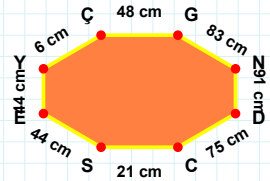
**26 cm hangi şeklin kenarıdır?**

- ☐ Sekizgen  
☐ Altıgen  
☐ Yedigen



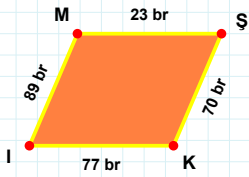
**[ND] kenarı hangi şeklin kenarıdır?**

- ☐ Altıgen  
☐ Sekizgen  
☐ Yedigen



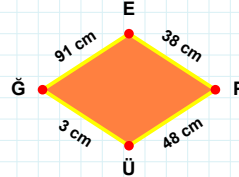
**[HP] kenarı hangi şeklin kenarıdır?**

- ☐ Altıgen  
☐ Sekizgen  
☐ Yedigen



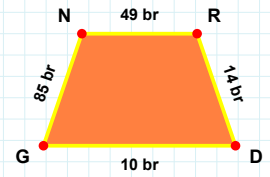
**[RD] kenarı hangi şeklin kenarıdır?**

- ☐ Yamuk  
☐ Paralelkenar  
☐ Eşkenar Dörtgen



**[MŞ] kenarı hangi şeklin kenarıdır?**

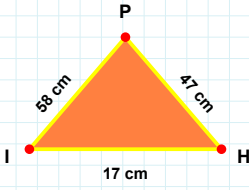
- ☐ Eşkenar Dörtgen  
☐ Yamuk  
☐ Paralelkenar



**91 cm hangi şeklin kenarıdır?**

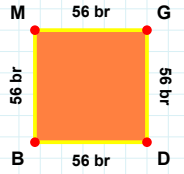
- ☐ Yamuk  
☐ Paralelkenar  
☐ Eşkenar Dörtgen

**SORU:** Aşağıdaki şekilleri inceleyiniz. Verilen kenar bilgisinin hangi şekle ait olduğunu işaretleyiniz.



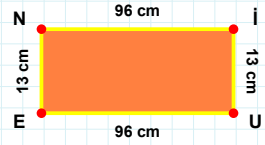
[UE] kenarı hangi şeklin kenarıdır?

- ☐ Dikdörtgen  
☐ Üçgen  
☐ Kare



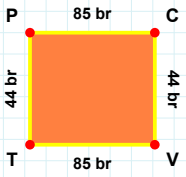
[PI] kenarı hangi şeklin kenarıdır?

- ☐ Üçgen  
☐ Kare  
☐ Dikdörtgen



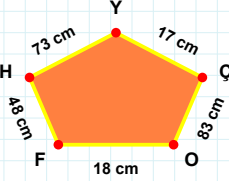
[DB] kenarı hangi şeklin kenarıdır?

- ☐ Üçgen  
☐ Dikdörtgen  
☐ Kare



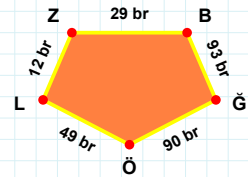
[BĞ] kenarı hangi şeklin kenarıdır?

- ☐ Beşgen  
☐ Dikey Dikdörtgen  
☐ Ters Beşgen



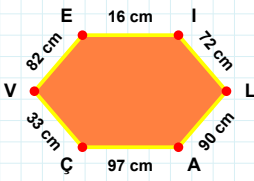
[TP] kenarı hangi şeklin kenarıdır?

- ☐ Dikey Dikdörtgen  
☐ Ters Beşgen  
☐ Beşgen



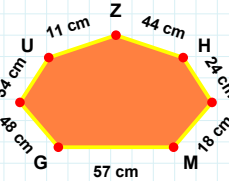
17 cm hangi şeklin kenarıdır?

- ☐ Beşgen  
☐ Ters Beşgen  
☐ Dikey Dikdörtgen



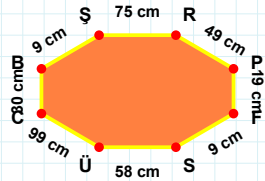
57 cm hangi şeklin kenarıdır?

- ☐ Altıgen  
☐ Sekizgen  
☐ Yedigen



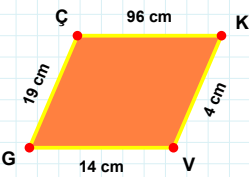
[CB] kenarı hangi şeklin kenarıdır?

- ☐ Yedigen  
☐ Altıgen  
☐ Sekizgen



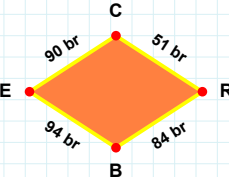
[VE] kenarı hangi şeklin kenarıdır?

- ☐ Altıgen  
☐ Yedigen  
☐ Sekizgen



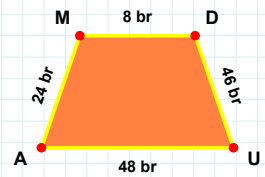
[DU] kenarı hangi şeklin kenarıdır?

- ☐ Paralelkenar  
☐ Eşkenar Dörtgen  
☐ Yamuk



[VG] kenarı hangi şeklin kenarıdır?

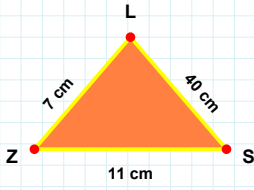
- ☐ Paralelkenar  
☐ Yamuk  
☐ Eşkenar Dörtgen



51 br hangi şeklin kenarıdır?

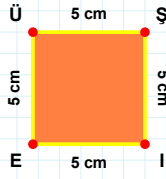
- ☐ Paralelkenar  
☐ Yamuk  
☐ Eşkenar Dörtgen

**SORU:** Aşağıdaki şekilleri inceleyiniz. Verilen kenar bilgisinin hangi şekle ait olduğunu işaretleyiniz.



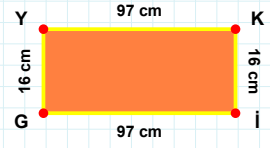
**[LE] kenarı hangi şeklin kenarıdır?**

- ☐ Üçgen  
☐ Kare  
☐ Dikdörtgen



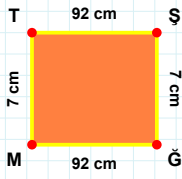
**[GY] kenarı hangi şeklin kenarıdır?**

- ☐ Kare  
☐ Dikdörtgen  
☐ Üçgen



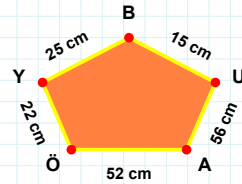
**[ZS] kenarı hangi şeklin kenarıdır?**

- ☐ Üçgen  
☐ Kare  
☐ Dikdörtgen



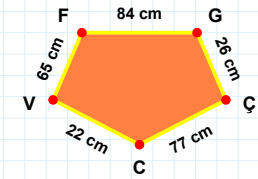
**15 cm hangi şeklin kenarıdır?**

- ☐ Dikey Dikdörtgen  
☐ Beşgen  
☐ Ters Beşgen



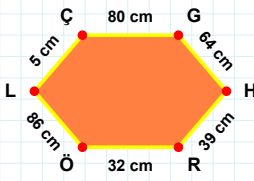
**[ÇC] kenarı hangi şeklin kenarıdır?**

- ☐ Beşgen  
☐ Dikey Dikdörtgen  
☐ Ters Beşgen



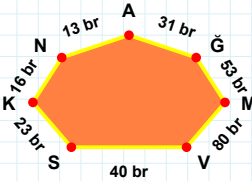
**[MT] kenarı hangi şeklin kenarıdır?**

- ☐ Beşgen  
☐ Ters Beşgen  
☐ Dikey Dikdörtgen



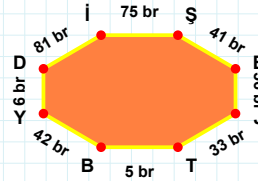
**16 br hangi şeklin kenarıdır?**

- ☐ Altıgen  
☐ Yedigen  
☐ Sekizgen



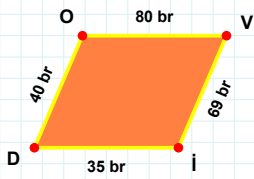
**[TB] kenarı hangi şeklin kenarıdır?**

- ☐ Yedigen  
☐ Altıgen  
☐ Sekizgen



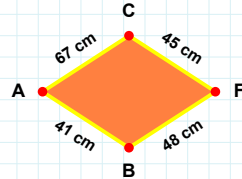
**[GH] kenarı hangi şeklin kenarıdır?**

- ☐ Sekizgen  
☐ Altıgen  
☐ Yedigen



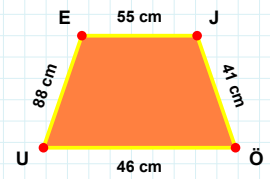
**[EJ] kenarı hangi şeklin kenarıdır?**

- ☐ Eşkenar Dörtgen  
☐ Paralelkenar  
☐ Yamuk



**[DO] kenarı hangi şeklin kenarıdır?**

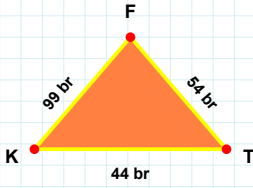
- ☐ Paralelkenar  
☐ Yamuk  
☐ Eşkenar Dörtgen



**67 cm hangi şeklin kenarıdır?**

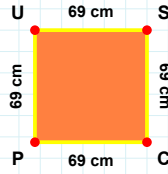
- ☐ Eşkenar Dörtgen  
☐ Paralelkenar  
☐ Yamuk

**SORU:** Aşağıdaki şekilleri inceleyiniz. Verilen kenar bilgisinin hangi şekle ait olduğunu işaretleyiniz.



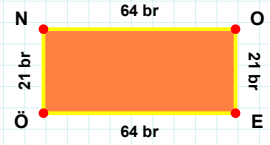
[ÖN] kenarı hangi şeklin kenarıdır?

- ☐ Üçgen  
☐ Kare  
☐ Dikdörtgen



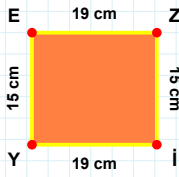
[FK] kenarı hangi şeklin kenarıdır?

- ☐ Üçgen  
☐ Dikdörtgen  
☐ Kare



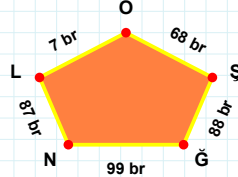
[CP] kenarı hangi şeklin kenarıdır?

- ☐ Üçgen  
☐ Dikdörtgen  
☐ Kare



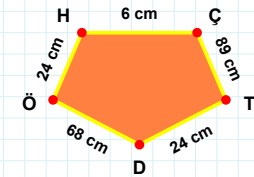
88 br hangi şeklin kenarıdır?

- ☐ Dikey Dikdörtgen  
☐ Beşgen  
☐ Ters Beşgen



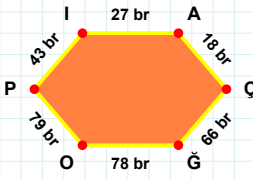
[HÇ] kenarı hangi şeklin kenarıdır?

- ☐ Dikey Dikdörtgen  
☐ Ters Beşgen  
☐ Beşgen



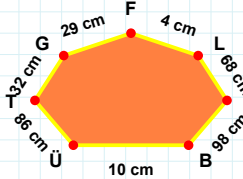
[YE] kenarı hangi şeklin kenarıdır?

- ☐ Beşgen  
☐ Ters Beşgen  
☐ Dikey Dikdörtgen



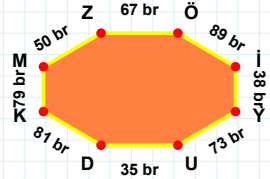
[MZ] kenarı hangi şeklin kenarıdır?

- ☐ Sekizgen  
☐ Altıgen  
☐ Yediggen



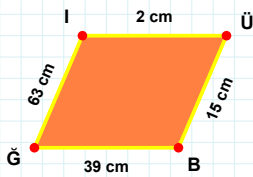
[IA] kenarı hangi şeklin kenarıdır?

- ☐ Yediggen  
☐ Sekizgen  
☐ Altıgen



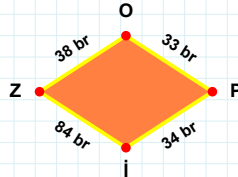
68 cm hangi şeklin kenarıdır?

- ☐ Yediggen  
☐ Sekizgen  
☐ Altıgen



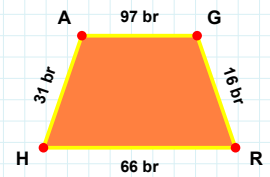
33 br hangi şeklin kenarıdır?

- ☐ Eşkenar Dörtgen  
☐ Paralelkenar  
☐ Yamuk



[GR] kenarı hangi şeklin kenarıdır?

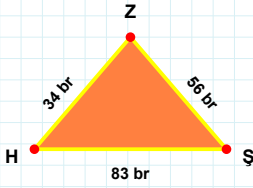
- ☐ Eşkenar Dörtgen  
☐ Paralelkenar  
☐ Yamuk



[BĞ] kenarı hangi şeklin kenarıdır?

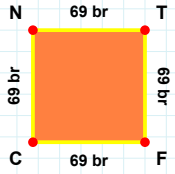
- ☐ Yamuk  
☐ Paralelkenar  
☐ Eşkenar Dörtgen

**SORU:** Aşağıdaki şekilleri inceleyiniz. Verilen kenar bilgisinin hangi şekle ait olduğunu işaretleyiniz.



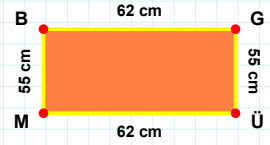
**[BG] kenarı hangi şeklin kenarıdır?**

- ☐ Kare  
☐ Dikdörtgen  
☐ Üçgen



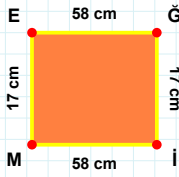
**[ZH] kenarı hangi şeklin kenarıdır?**

- ☐ Üçgen  
☐ Kare  
☐ Dikdörtgen



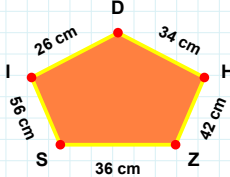
**[FC] kenarı hangi şeklin kenarıdır?**

- ☐ Üçgen  
☐ Kare  
☐ Dikdörtgen



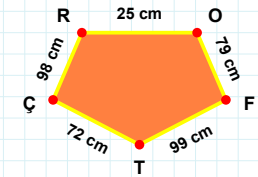
**[RO] kenarı hangi şeklin kenarıdır?**

- ☐ Ters Beşgen  
☐ Beşgen  
☐ Dikey Dikdörtgen



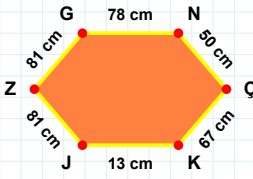
**[İM] kenarı hangi şeklin kenarıdır?**

- ☐ Beşgen  
☐ Ters Beşgen  
☐ Dikey Dikdörtgen



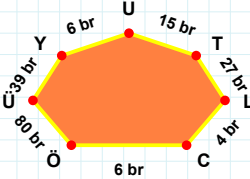
**42 cm hangi şeklin kenarıdır?**

- ☐ Ters Beşgen  
☐ Beşgen  
☐ Dikey Dikdörtgen



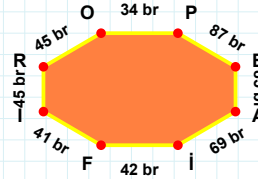
**[Fİ] kenarı hangi şeklin kenarıdır?**

- ☐ Sekizgen  
☐ Yediggen  
☐ Altıgen



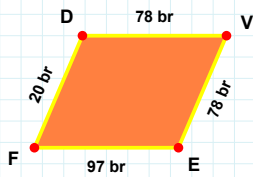
**[ÇK] kenarı hangi şeklin kenarıdır?**

- ☐ Yediggen  
☐ Sekizgen  
☐ Altıgen



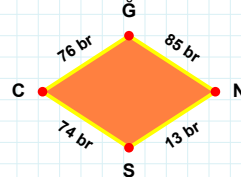
**27 br hangi şeklin kenarıdır?**

- ☐ Altıgen  
☐ Sekizgen  
☐ Yediggen



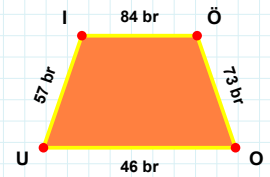
**74 br hangi şeklin kenarıdır?**

- ☐ Yamuk  
☐ Paralelkenar  
☐ Eşkenar Dörtgen



**[ÖÖ] kenarı hangi şeklin kenarıdır?**

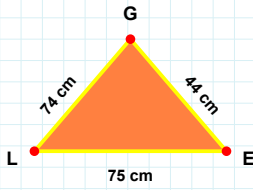
- ☐ Yamuk  
☐ Paralelkenar  
☐ Eşkenar Dörtgen



**[FD] kenarı hangi şeklin kenarıdır?**

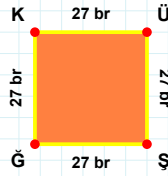
- ☐ Paralelkenar  
☐ Yamuk  
☐ Eşkenar Dörtgen

**SORU:** Aşağıdaki şekilleri inceleyiniz. Verilen kenar bilgisinin hangi şekle ait olduğunu işaretleyiniz.



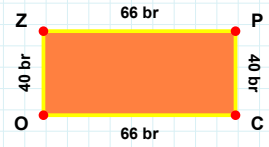
**[OZ] kenarı hangi şeklin kenarıdır?**

- ☐ Dikdörtgen  
☐ Üçgen  
☐ Kare



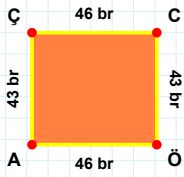
**[LE] kenarı hangi şeklin kenarıdır?**

- ☐ Dikdörtgen  
☐ Kare  
☐ Üçgen



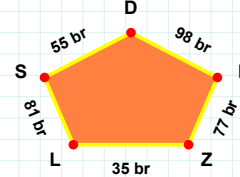
**[ÜŞ] kenarı hangi şeklin kenarıdır?**

- ☐ Kare  
☐ Üçgen  
☐ Dikdörtgen



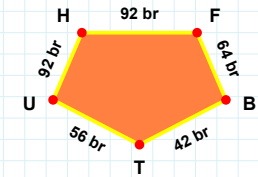
**[UH] kenarı hangi şeklin kenarıdır?**

- ☐ Dikey Dikdörtgen  
☐ Ters Beşgen  
☐ Beşgen



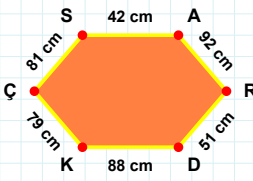
**[AÇ] kenarı hangi şeklin kenarıdır?**

- ☐ Ters Beşgen  
☐ Dikey Dikdörtgen  
☐ Beşgen



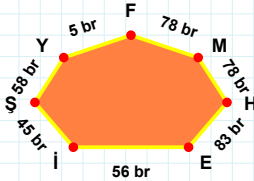
**81 br hangi şeklin kenarıdır?**

- ☐ Dikey Dikdörtgen  
☐ Beşgen  
☐ Ters Beşgen



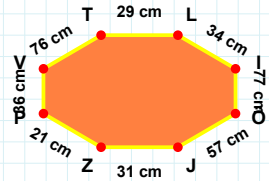
**58 br hangi şeklin kenarıdır?**

- ☐ Yedigen  
☐ Sekizgen  
☐ Altıgen



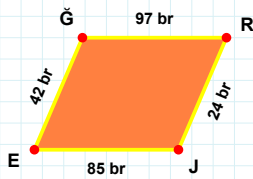
**[LI] kenarı hangi şeklin kenarıdır?**

- ☐ Altıgen  
☐ Yedigen  
☐ Sekizgen



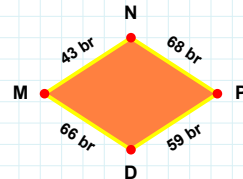
**[KÇ] kenarı hangi şeklin kenarıdır?**

- ☐ Yedigen  
☐ Sekizgen  
☐ Altıgen



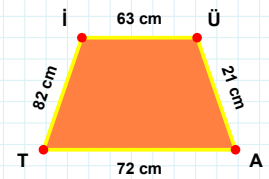
**[AT] kenarı hangi şeklin kenarıdır?**

- ☐ Paralelkenar  
☐ Eşkenar Dörtgen  
☐ Yamuk



**[JE] kenarı hangi şeklin kenarıdır?**

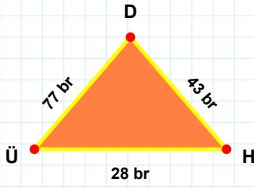
- ☐ Paralelkenar  
☐ Eşkenar Dörtgen  
☐ Yamuk



**66 br hangi şeklin kenarıdır?**

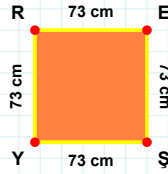
- ☐ Paralelkenar  
☐ Yamuk  
☐ Eşkenar Dörtgen

**SORU:** Aşağıdaki şekilleri inceleyiniz. Verilen kenar bilgisinin hangi şekle ait olduğunu işaretleyiniz.



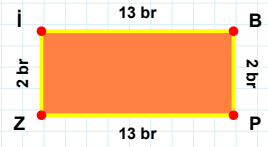
**|EŞ| kenarı hangi şeklin kenarıdır?**

- ☐ Dikdörtgen  
☐ Üçgen  
☐ Kare



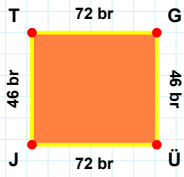
**|Zİ| kenarı hangi şeklin kenarıdır?**

- ☐ Kare  
☐ Dikdörtgen  
☐ Üçgen



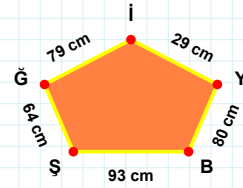
**|DÜ| kenarı hangi şeklin kenarıdır?**

- ☐ Dikdörtgen  
☐ Üçgen  
☐ Kare



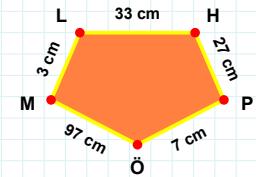
**64 cm hangi şeklin kenarıdır?**

- ☐ Ters Beşgen  
☐ Dikey Dikdörtgen  
☐ Beşgen



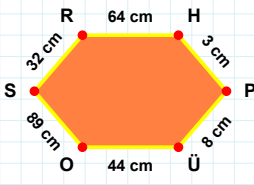
**|ÖM| kenarı hangi şeklin kenarıdır?**

- ☐ Dikey Dikdörtgen  
☐ Beşgen  
☐ Ters Beşgen



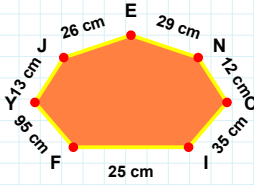
**|GÜ| kenarı hangi şeklin kenarıdır?**

- ☐ Beşgen  
☐ Dikey Dikdörtgen  
☐ Ters Beşgen



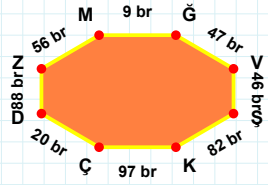
**95 cm hangi şeklin kenarıdır?**

- ☐ Yedigen  
☐ Altıgen  
☐ Sekizgen



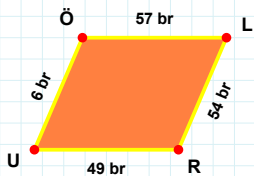
**|ZM| kenarı hangi şeklin kenarıdır?**

- ☐ Sekizgen  
☐ Yedigen  
☐ Altıgen



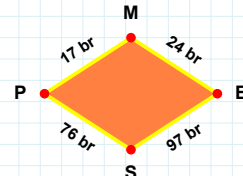
**|OS| kenarı hangi şeklin kenarıdır?**

- ☐ Yedigen  
☐ Altıgen  
☐ Sekizgen



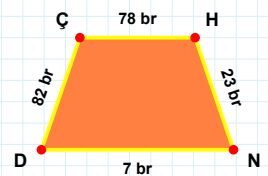
**|ÇH| kenarı hangi şeklin kenarıdır?**

- ☐ Yamuk  
☐ Eşkenar Dörtgen  
☐ Paralelkenar



**|RU| kenarı hangi şeklin kenarıdır?**

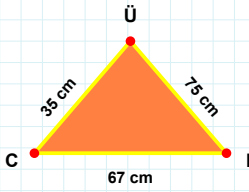
- ☐ Yamuk  
☐ Eşkenar Dörtgen  
☐ Paralelkenar



**24 br hangi şeklin kenarıdır?**

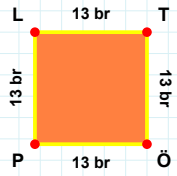
- ☐ Yamuk  
☐ Eşkenar Dörtgen  
☐ Paralelkenar

**SORU:** Aşağıdaki şekilleri inceleyiniz. Verilen kenar bilgisinin hangi şekle ait olduğunu işaretleyiniz.



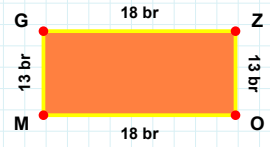
|GZ| kenarı hangi şeklin kenarıdır?

- ☐ Üçgen  
☐ Kare  
☐ Dikdörtgen



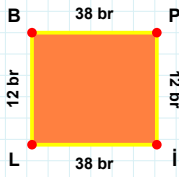
|CI| kenarı hangi şeklin kenarıdır?

- ☐ Kare  
☐ Dikdörtgen  
☐ Üçgen



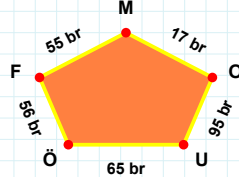
|ÖP| kenarı hangi şeklin kenarıdır?

- ☐ Dikdörtgen  
☐ Üçgen  
☐ Kare



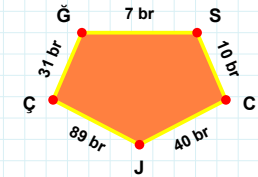
95 br hangi şeklin kenarıdır?

- ☐ Ters Beşgen  
☐ Beşgen  
☐ Dikey Dikdörtgen



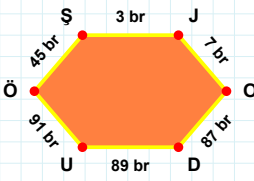
|JÇ| kenarı hangi şeklin kenarıdır?

- ☐ Beşgen  
☐ Dikey Dikdörtgen  
☐ Ters Beşgen



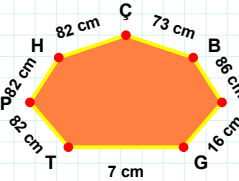
|BP| kenarı hangi şeklin kenarıdır?

- ☐ Ters Beşgen  
☐ Beşgen  
☐ Dikey Dikdörtgen



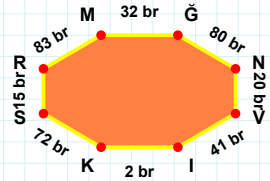
86 cm hangi şeklin kenarıdır?

- ☐ Altıgen  
☐ Yediggen  
☐ Sekizgen



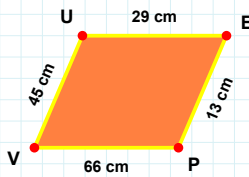
|GN| kenarı hangi şeklin kenarıdır?

- ☐ Yediggen  
☐ Sekizgen  
☐ Altıgen



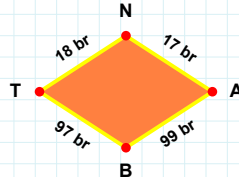
|SJ| kenarı hangi şeklin kenarıdır?

- ☐ Altıgen  
☐ Yediggen  
☐ Sekizgen



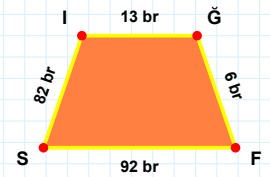
|İĞ| kenarı hangi şeklin kenarıdır?

- ☐ Yamuk  
☐ Paralelkenar  
☐ Eşkenar Dörtgen



|VU| kenarı hangi şeklin kenarıdır?

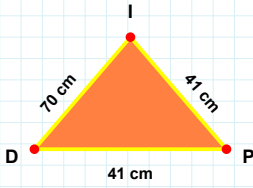
- ☐ Eşkenar Dörtgen  
☐ Yamuk  
☐ Paralelkenar



99 br hangi şeklin kenarıdır?

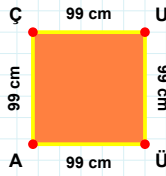
- ☐ Yamuk  
☐ Paralelkenar  
☐ Eşkenar Dörtgen

**SORU:** Aşağıdaki şekilleri inceleyiniz. Verilen kenar bilgisinin hangi şekle ait olduğunu işaretleyiniz.



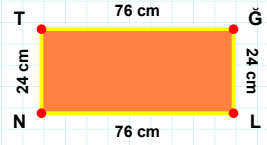
**[İĞ] kenarı hangi şeklin kenarıdır?**

- ☐ Kare  
☐ Dikdörtgen  
☐ Üçgen



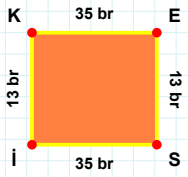
**[PI] kenarı hangi şeklin kenarıdır?**

- ☐ Üçgen  
☐ Kare  
☐ Dikdörtgen



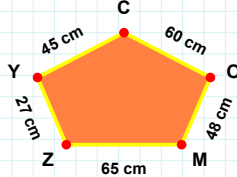
**[ÇÜ] kenarı hangi şeklin kenarıdır?**

- ☐ Kare  
☐ Dikdörtgen  
☐ Üçgen



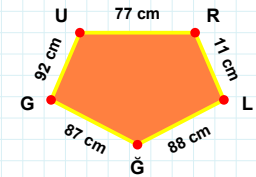
**[İĞ] kenarı hangi şeklin kenarıdır?**

- ☐ Dikey Dikdörtgen  
☐ Ters Beşgen  
☐ Beşgen



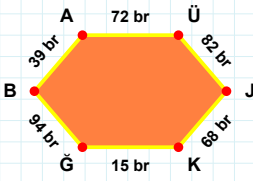
**[KE] kenarı hangi şeklin kenarıdır?**

- ☐ Dikey Dikdörtgen  
☐ Ters Beşgen  
☐ Beşgen



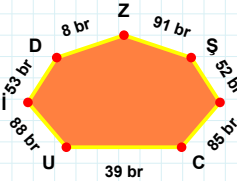
**65 cm hangi şeklin kenarıdır?**

- ☐ Dikey Dikdörtgen  
☐ Beşgen  
☐ Ters Beşgen



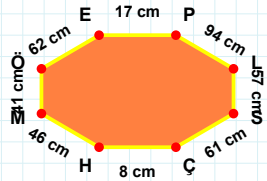
**[ÇH] kenarı hangi şeklin kenarıdır?**

- ☐ Altıgen  
☐ Sekizgen  
☐ Yedigen



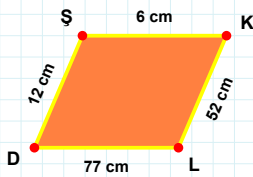
**[İGB] kenarı hangi şeklin kenarıdır?**

- ☐ Yedigen  
☐ Altıgen  
☐ Sekizgen



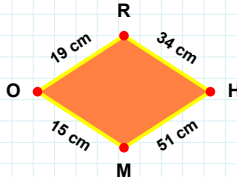
**52 br hangi şeklin kenarıdır?**

- ☐ Yedigen  
☐ Sekizgen  
☐ Altıgen



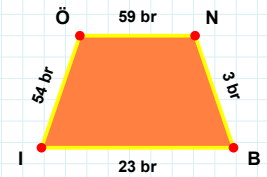
**[İÖ] kenarı hangi şeklin kenarıdır?**

- ☐ Eşkenar Dörtgen  
☐ Paralelkenar  
☐ Yamuk



**[LD] kenarı hangi şeklin kenarıdır?**

- ☐ Yamuk  
☐ Eşkenar Dörtgen  
☐ Paralelkenar



**34 cm hangi şeklin kenarıdır?**

- ☐ Paralelkenar  
☐ Yamuk  
☐ Eşkenar Dörtgen

### SÜREÇ ODAKLI DEĞERLENDİRME ÖLÇEĞİ

Geliştirilmeli (0-109)	İyi (110-187)	Çok İyi (188-265)	Mükemmel (266-312)
<input type="checkbox"/>	<input type="checkbox"/>	<input type="checkbox"/>	<input type="checkbox"/>

Hazırlayan: .....

**Bu bölüme sınıfınızın ilgili kazanıma yönelik genel durumuna ilişkin gözlem ve izlenimlerinizi, öğrencilerinizin bu kazanımla ilgili öğrenme eksikliklerini ve bu eksikliklerin giderilmesi amacıyla yaptığınız/yapmayı planladığınız faaliyetleri not edebilirsiniz.**

No	Adı - Soyadı	Toplam Puan	Değerlendirme
1			
2			
3			
4			
5			
6			
7			
8			
9			
10			
11			
12			
13			
14			
15			
16			
17			
18			
19			
20			
21			
22			
23			
24			
25			
26			
27			
28			
29			
30			
31			
32			
33			
34			
35			

**Hazırlayan:** .....