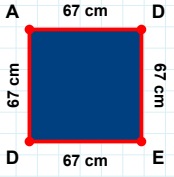
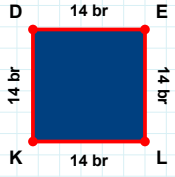


SORU: Aşağıdaki şekillerde istenen kenarın kaç birim veya santimetre olduğunu bulunuz.



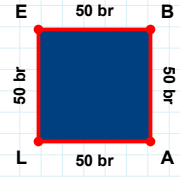
|KD| kaç brdir?

- ☐ 16 br
☐ 11 br
☐ 14 br



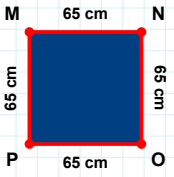
|DA| kaç cmdir?

- ☐ 67 cm
☐ 65 cm
☐ 57 cm



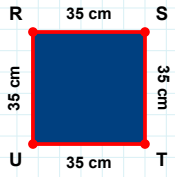
|AL| kaç brdir?

- ☐ 51 br
☐ 50 br
☐ 40 br



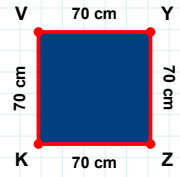
|PM| kaç cmdir?

- ☐ 75 cm
☐ 60 cm
☐ 65 cm



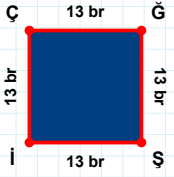
|ZK| kaç cmdir?

- ☐ 67 cm
☐ 73 cm
☐ 70 cm



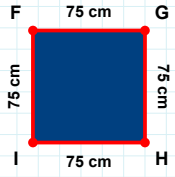
|ST| kaç cmdir?

- ☐ 40 cm
☐ 35 cm
☐ 45 cm



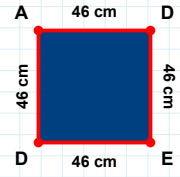
|ÇĞ| kaç brdir?

- ☐ 18 br
☐ 13 br
☐ 16 br



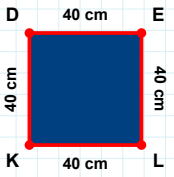
|Hİ| kaç cmdir?

- ☐ 70 cm
☐ 75 cm
☐ 73 cm



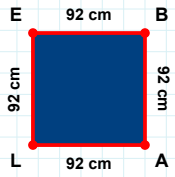
|AD| kaç cmdir?

- ☐ 43 cm
☐ 46 cm
☐ 45 cm



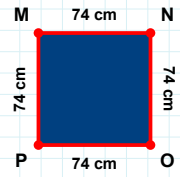
|LK| kaç cmdir?

- ☐ 40 cm
☐ 37 cm
☐ 39 cm



|OP| kaç cmdir?

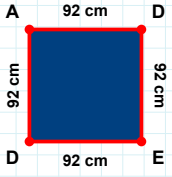
- ☐ 69 cm
☐ 74 cm
☐ 77 cm



|BA| kaç cmdir?

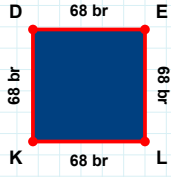
- ☐ 92 cm
☐ 91 cm
☐ 93 cm

SORU: Aşağıdaki şekillerde istenen kenarın kaç birim veya santimetre olduğunu bulunuz.



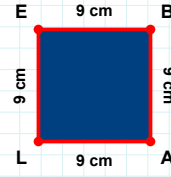
|ED| kaç cmdir?

- ☐ 92 cm
☐ 95 cm
☐ 87 cm



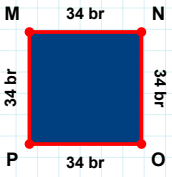
|LK| kaç brdir?

- ☐ 68 br
☐ 70 br
☐ 73 br



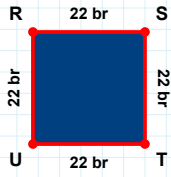
|EB| kaç cmdir?

- ☐ 8 cm
☐ 11 cm
☐ 9 cm



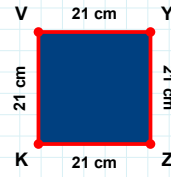
|OP| kaç brdir?

- ☐ 33 br
☐ 34 br
☐ 36 br



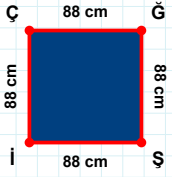
|RS| kaç brdir?

- ☐ 22 br
☐ 32 br
☐ 12 br



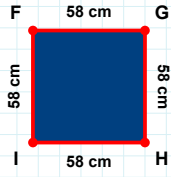
|ZK| kaç cmdir?

- ☐ 11 cm
☐ 19 cm
☐ 21 cm



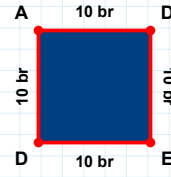
|İD| kaç brdir?

- ☐ 10 br
☐ 11 br
☐ 15 br



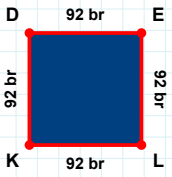
|GH| kaç cmdir?

- ☐ 58 cm
☐ 63 cm
☐ 68 cm



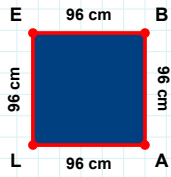
|Şİ| kaç cmdir?

- ☐ 88 cm
☐ 83 cm
☐ 91 cm



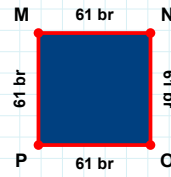
|LE| kaç cmdir?

- ☐ 96 cm
☐ 93 cm
☐ 95 cm



|LE| kaç brdir?

- ☐ 95 br
☐ 94 br
☐ 92 br



|NO| kaç brdir?

- ☐ 61 br
☐ 62 br
☐ 63 br

SÜREÇ ODAKLI DEĞERLENDİRME ÖLÇEĞİ

Doğru Sayısı: / 24

Öğretmen ilgili kutucuğu işaretler.

Geliştirilmeli (0-8)

İyi (9-14)

Çok İyi (15-20)

Mükemmel (21-24)



Hazırlayan:

Bu bölüme sınıfınızın ilgili kazanıma yönelik genel durumuna ilişkin gözlem ve izlenimlerinizi, öğrencilerinizin bu kazanımla ilgili öğrenme eksikliklerini ve bu eksikliklerin giderilmesi amacıyla yaptığınız/yapmayı planladığınız faaliyetleri not edebilirsiniz.

No	Adı - Soyadı	Toplam Puan	Değerlendirme
1			
2			
3			
4			
5			
6			
7			
8			
9			
10			
11			
12			
13			
14			
15			
16			
17			
18			
19			
20			
21			
22			
23			
24			
25			
26			
27			
28			
29			
30			
31			
32			
33			
34			
35			

Hazırlayan: