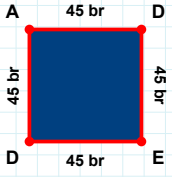
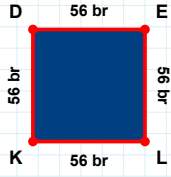


SORU: Aşağıdaki şekillerde istenen kenarın kaç birim veya santimetre olduğunu bulunuz.



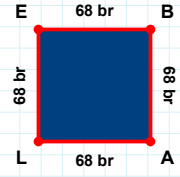
|DA| kaç brdir?

- ☐ 35 br
☐ 46 br
☐ 45 br



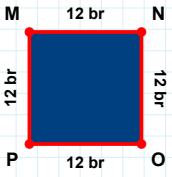
|LK| kaç brdir?

- ☐ 59 br
☐ 56 br
☐ 58 br



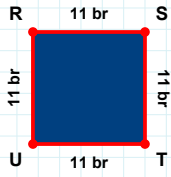
|BA| kaç brdir?

- ☐ 63 br
☐ 68 br
☐ 70 br



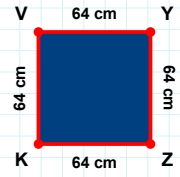
|OP| kaç brdir?

- ☐ 12 br
☐ 14 br
☐ 15 br



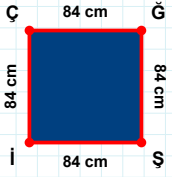
|KV| kaç cmdir?

- ☐ 69 cm
☐ 64 cm
☐ 65 cm



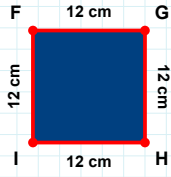
|TU| kaç brdir?

- ☐ 16 br
☐ 11 br
☐ 13 br



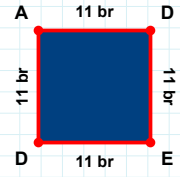
|İÇ| kaç cmdir?

- ☐ 86 cm
☐ 74 cm
☐ 84 cm



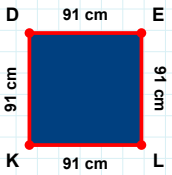
|FG| kaç cmdir?

- ☐ 9 cm
☐ 12 cm
☐ 14 cm



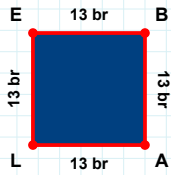
|DA| kaç brdir?

- ☐ 21 br
☐ 8 br
☐ 11 br



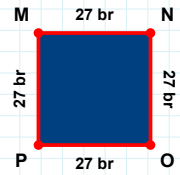
|OP| kaç brdir?

- ☐ 25 br
☐ 24 br
☐ 27 br



|DE| kaç cmdir?

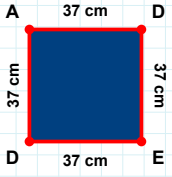
- ☐ 91 cm
☐ 96 cm
☐ 92 cm



|LE| kaç brdir?

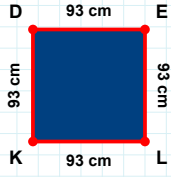
- ☐ 14 br
☐ 13 br
☐ 23 br

SORU: Aşağıdaki şekillerde istenen kenarın kaç birim veya santimetre olduğunu bulunuz.



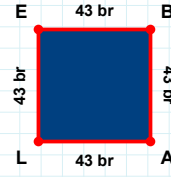
|LK| kaç cmdir?

- ☐ 90 cm
☐ 93 cm
☐ 94 cm



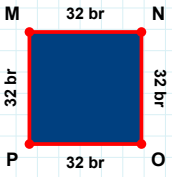
|DE| kaç cmdir?

- ☐ 40 cm
☐ 37 cm
☐ 35 cm



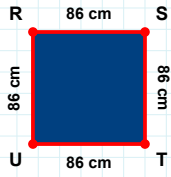
|BA| kaç brdir?

- ☐ 44 br
☐ 53 br
☐ 43 br



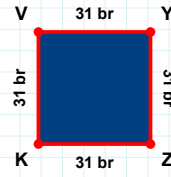
|YY| kaç brdir?

- ☐ 36 br
☐ 32 br
☐ 31 br



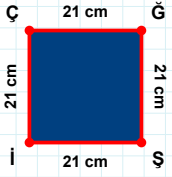
|OP| kaç brdir?

- ☐ 31 br
☐ 32 br
☐ 33 br



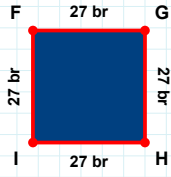
|ST| kaç cmdir?

- ☐ 88 cm
☐ 81 cm
☐ 86 cm



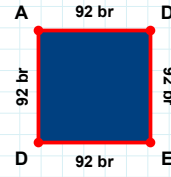
|AD| kaç brdir?

- ☐ 94 br
☐ 92 br
☐ 87 br



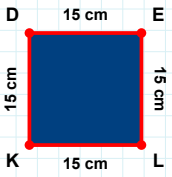
|HI| kaç brdir?

- ☐ 30 br
☐ 27 br
☐ 32 br



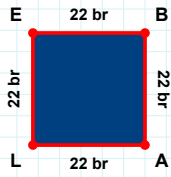
|ÇĞ| kaç cmdir?

- ☐ 16 cm
☐ 23 cm
☐ 21 cm



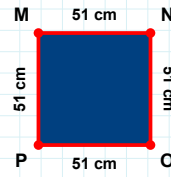
|MN| kaç cmdir?

- ☐ 46 cm
☐ 51 cm
☐ 52 cm



|EL| kaç cmdir?

- ☐ 15 cm
☐ 13 cm
☐ 17 cm



|EB| kaç brdir?

- ☐ 22 br
☐ 24 br
☐ 19 br

SÜREÇ ODAKLI DEĞERLENDİRME ÖLÇEĞİ

Doğru Sayısı: / 24

Öğretmen ilgili kutucuğu işaretler.

Geliştirilmeli (0-8)

İyi (9-14)

Çok İyi (15-20)

Mükemmel (21-24)



Hazırlayan:

Bu bölüme sınıfınızın ilgili kazanıma yönelik genel durumuna ilişkin gözlem ve izlenimlerinizi, öğrencilerinizin bu kazanımla ilgili öğrenme eksikliklerini ve bu eksikliklerin giderilmesi amacıyla yaptığınız/yapmayı planladığınız faaliyetleri not edebilirsiniz.

No	Adı - Soyadı	Toplam Puan	Değerlendirme
1			
2			
3			
4			
5			
6			
7			
8			
9			
10			
11			
12			
13			
14			
15			
16			
17			
18			
19			
20			
21			
22			
23			
24			
25			
26			
27			
28			
29			
30			
31			
32			
33			
34			
35			

Hazırlayan: