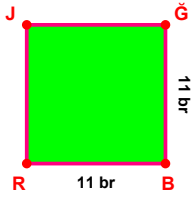
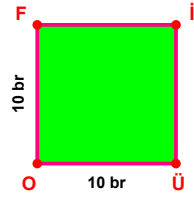


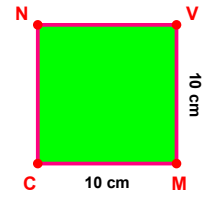
SORU: Aşağıdaki şekillerde verilen, kenar uzunlukları farklarını bulunuz.



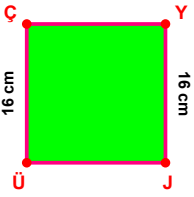
$$|BR| - |\check{G}B| = \dots\dots$$



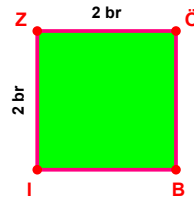
$$|\check{U}O| - |OF| = \dots\dots$$



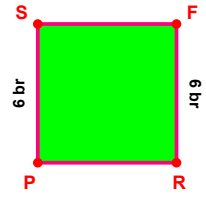
$$|MC| - |VM| = \dots\dots$$



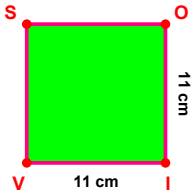
$$|\check{U}\check{C}| - |YJ| = \dots\dots$$



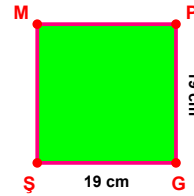
$$|IZ| - |Z\check{O}| = \dots\dots$$



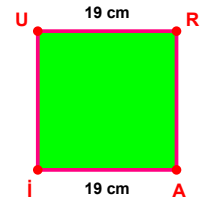
$$|PS| - |FR| = \dots\dots$$



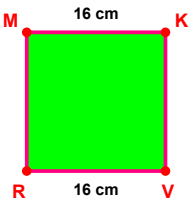
$$|OI| - |IV| = \dots\dots$$



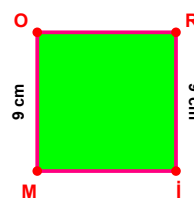
$$|PG| - |GŞ| = \dots\dots$$



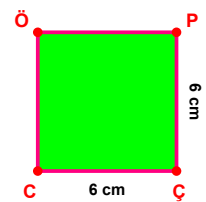
$$|UR| - |Aİ| = \dots\dots$$



$$|VR| - |MK| = \dots\dots$$

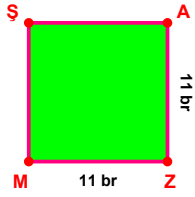


$$|Rİ| - |MO| = \dots\dots$$

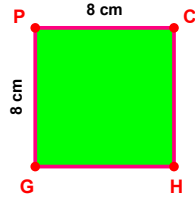


$$|P\check{C}| - |\check{C}C| = \dots\dots$$

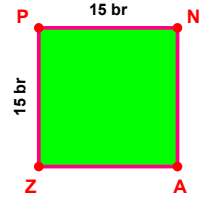
SORU: Aşağıdaki şekillerde verilen, kenar uzunlukları farklarını bulunuz.



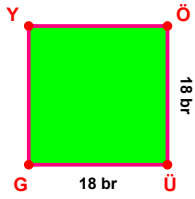
$$|ZM| - |AZ| = \dots\dots$$



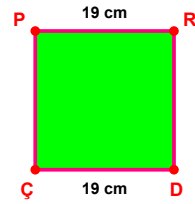
$$|PC| - |GP| = \dots\dots$$



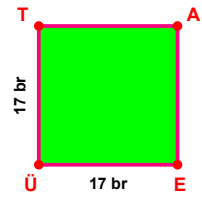
$$|ZP| - |PN| = \dots\dots$$



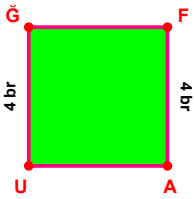
$$|ÜG| - |ÖÜ| = \dots\dots$$



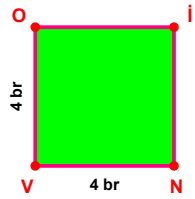
$$|DÇ| - |PR| = \dots\dots$$



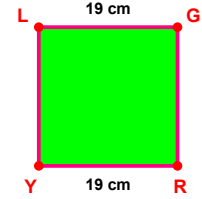
$$|ÜT| - |EÜ| = \dots\dots$$



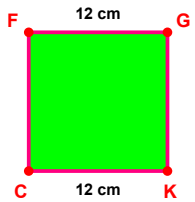
$$|UĞ| - |FA| = \dots\dots$$



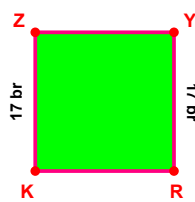
$$|NV| - |VO| = \dots\dots$$



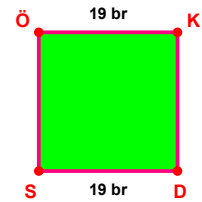
$$|LG| - |RY| = \dots\dots$$



$$|KC| - |FG| = \dots\dots$$



$$|YR| - |KZ| = \dots\dots$$



$$|ÖK| - |DS| = \dots\dots$$

SÜREÇ ODAKLI DEĞERLENDİRME ÖLÇEĞİ

Doğru Sayısı: / 24

Öğretmen ilgili kutucuğu işaretler.

Geliştirilmeli (0-8)

İyi (9-14)

Çok İyi (15-20)

Mükemmel (21-24)

☐
☐
☐
☐

Hazırlayan:

Bu bölüme sınıfınızın ilgili kazanıma yönelik genel durumuna ilişkin gözlem ve izlenimlerinizi, öğrencilerinizin bu kazanımla ilgili öğrenme eksikliklerini ve bu eksikliklerin giderilmesi amacıyla yaptığınız/yapmayı planladığınız faaliyetleri not edebilirsiniz.

No	Adı - Soyadı	Toplam Puan	Değerlendirme
1			
2			
3			
4			
5			
6			
7			
8			
9			
10			
11			
12			
13			
14			
15			
16			
17			
18			
19			
20			
21			
22			
23			
24			
25			
26			
27			
28			
29			
30			
31			
32			
33			
34			
35			

Hazırlayan: