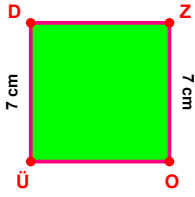
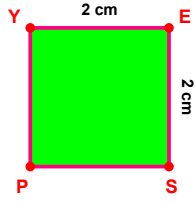


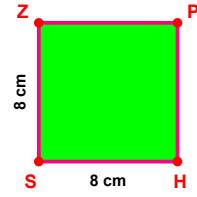
SORU: Aşağıdaki şekillerde verilen, kenar uzunlukları farklarını bulunuz.



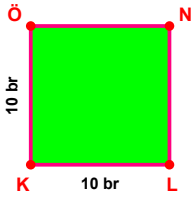
$$|ÜD| - |ZO| = \dots\dots\dots$$



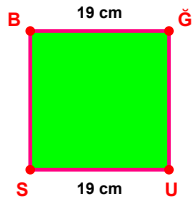
$$|ES| - |YE| = \dots\dots\dots$$



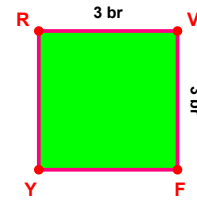
$$|HS| - |SZ| = \dots\dots\dots$$



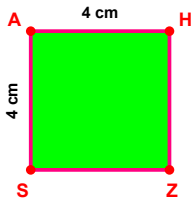
$$|KÖ| - |LK| = \dots\dots\dots$$



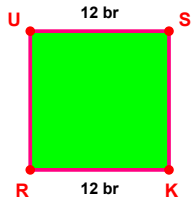
$$|BĞ| - |US| = \dots\dots\dots$$



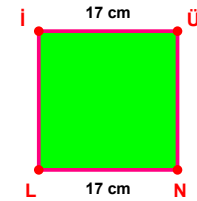
$$|RV| - |VF| = \dots\dots\dots$$



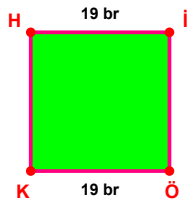
$$|SA| - |AH| = \dots\dots\dots$$



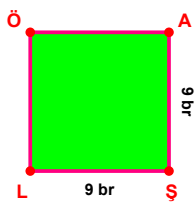
$$|US| - |KR| = \dots\dots\dots$$



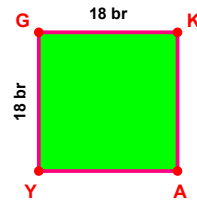
$$|NL| - |İÜ| = \dots\dots\dots$$



$$|Hİ| - |ÖK| = \dots\dots\dots$$

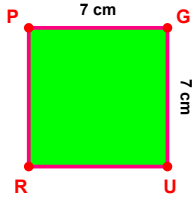


$$|ŞL| - |AŞ| = \dots\dots\dots$$

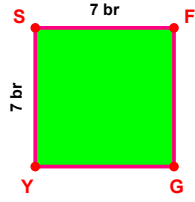


$$|GK| - |YG| = \dots\dots\dots$$

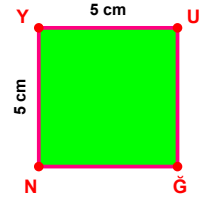
SORU: Aşağıdaki şekillerde verilen, kenar uzunlukları farklarını bulunuz.



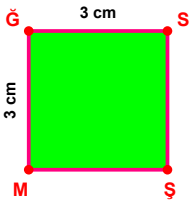
$$|GU| - |PG| = \dots\dots$$



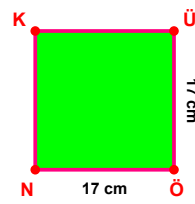
$$|YS| - |SF| = \dots\dots$$



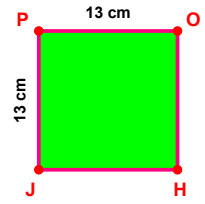
$$|YU| - |NY| = \dots\dots$$



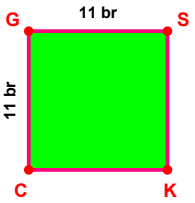
$$|MG| - |GS| = \dots\dots$$



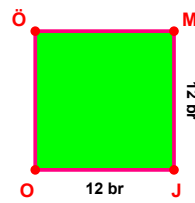
$$|ÖN| - |ÜÖ| = \dots\dots$$



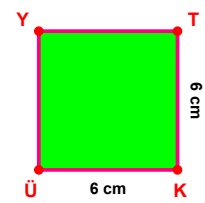
$$|PO| - |JP| = \dots\dots$$



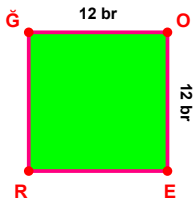
$$|GS| - |CG| = \dots\dots$$



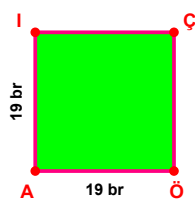
$$|JO| - |MJ| = \dots\dots$$



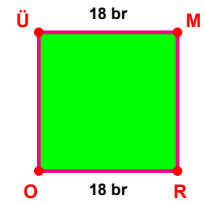
$$|KÜ| - |TK| = \dots\dots$$



$$|GO| - |OE| = \dots\dots$$



$$|ÖA| - |AI| = \dots\dots$$



$$|RO| - |ÜM| = \dots\dots$$

SÜREÇ ODAKLI DEĞERLENDİRME ÖLÇEĞİ

Doğru Sayısı: / 24

Öğretmen ilgili kutucuğu işaretler.

Geliştirilmeli (0-8)

İyi (9-14)

Çok İyi (15-20)

Mükemmel (21-24)



Hazırlayan:

Bu bölüme sınıfınızın ilgili kazanıma yönelik genel durumuna ilişkin gözlem ve izlenimlerinizi, öğrencilerinizin bu kazanımla ilgili öğrenme eksikliklerini ve bu eksikliklerin giderilmesi amacıyla yaptığınız/yapmayı planladığınız faaliyetleri not edebilirsiniz.

No	Adı - Soyadı	Toplam Puan	Değerlendirme
1			
2			
3			
4			
5			
6			
7			
8			
9			
10			
11			
12			
13			
14			
15			
16			
17			
18			
19			
20			
21			
22			
23			
24			
25			
26			
27			
28			
29			
30			
31			
32			
33			
34			
35			

Hazırlayan: