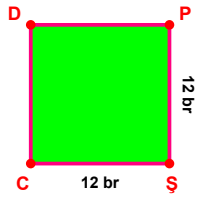
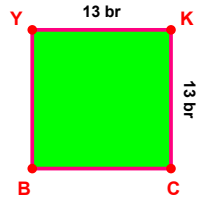


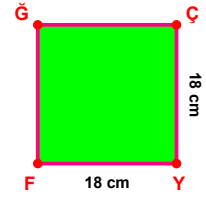
SORU: Aşağıdaki şekillerde verilen, kenar uzunlukları farklarını bulunuz.



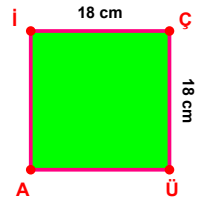
$$|ŞC| - |PS| = \dots\dots$$



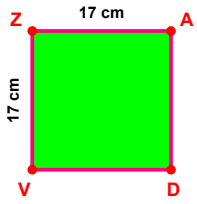
$$|KC| - |YK| = \dots\dots$$



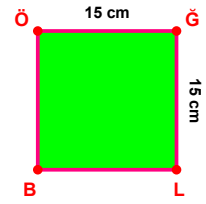
$$|YF| - |ÇY| = \dots\dots$$



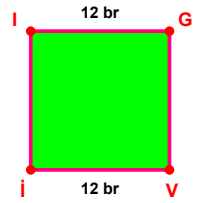
$$|İÇ| - |ÇÜ| = \dots\dots$$



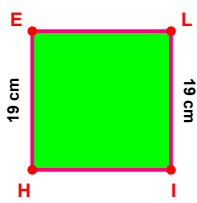
$$|VZ| - |ZA| = \dots\dots$$



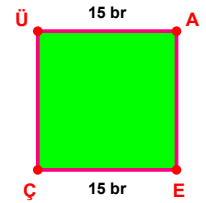
$$|ÖĞ| - |ĞL| = \dots\dots$$



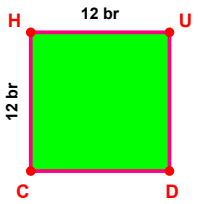
$$|İİ| - |İG| = \dots\dots$$



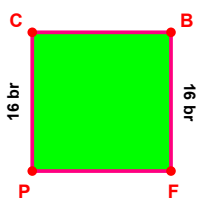
$$|LI| - |HE| = \dots\dots$$



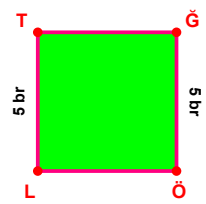
$$|EÇ| - |ÜA| = \dots\dots$$



$$|HU| - |CH| = \dots\dots$$

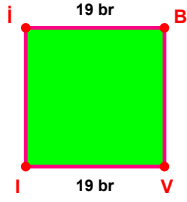


$$|PC| - |BF| = \dots\dots$$

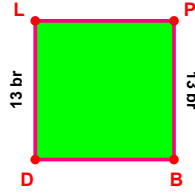


$$|LT| - |ĞÖ| = \dots\dots$$

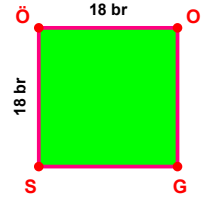
SORU: Aşağıdaki şekillerde verilen, kenar uzunlukları farklarını bulunuz.



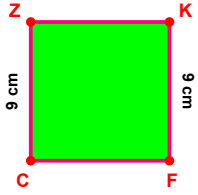
$$|IB| - |IV| = \dots\dots$$



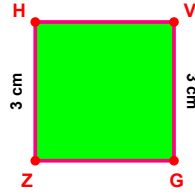
$$|PB| - |DL| = \dots\dots$$



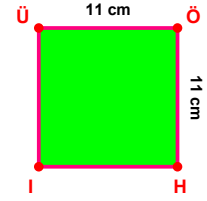
$$|SÖ| - |ÖO| = \dots\dots$$



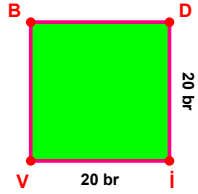
$$|KF| - |CZ| = \dots\dots$$



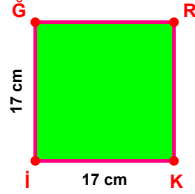
$$|VG| - |ZH| = \dots\dots$$



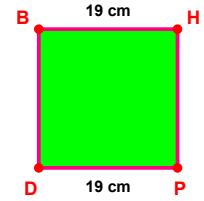
$$|ÖH| - |ÜÖ| = \dots\dots$$



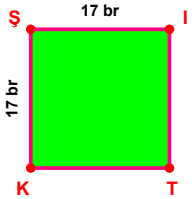
$$|DV| - |Vİ| = \dots\dots$$



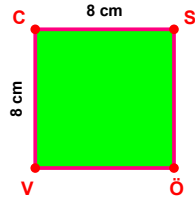
$$|İĞ| - |İK| = \dots\dots$$



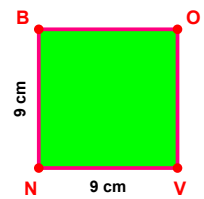
$$|BH| - |DP| = \dots\dots$$



$$|Sİ| - |KS| = \dots\dots$$



$$|VC| - |CS| = \dots\dots$$



$$|VN| - |NB| = \dots\dots$$

SÜREÇ ODAKLI DEĞERLENDİRME ÖLÇEĞİ

Doğru Sayısı: / 24

Öğretmen ilgili kutucuğu işaretler.

Geliştirilmeli (0-8)

İyi (9-14)

Çok İyi (15-20)

Mükemmel (21-24)

☐
☐
☐
☐

Hazırlayan:

Bu bölüme sınıfınızın ilgili kazanıma yönelik genel durumuna ilişkin gözlem ve izlenimlerinizi, öğrencilerinizin bu kazanımla ilgili öğrenme eksikliklerini ve bu eksikliklerin giderilmesi amacıyla yaptığınız/yapmayı planladığınız faaliyetleri not edebilirsiniz.

No	Adı - Soyadı	Toplam Puan	Değerlendirme
1			
2			
3			
4			
5			
6			
7			
8			
9			
10			
11			
12			
13			
14			
15			
16			
17			
18			
19			
20			
21			
22			
23			
24			
25			
26			
27			
28			
29			
30			
31			
32			
33			
34			
35			

Hazırlayan: