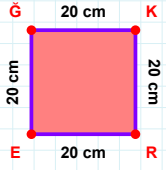
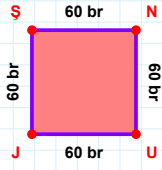


SORU: Aşağıdaki geometrik şekillerle ilgili soruları cevaplayınız.

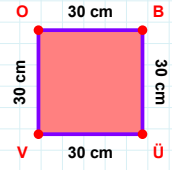
$|RE| + |GK| = \dots$

Cevap: cm



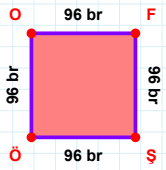
$|JS| + |SN| = \dots$

Cevap: br



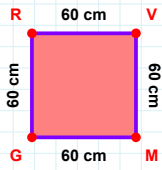
30 cm hangi kenara aittir?

- ☐ OÜ kenarı
☐ VO kenarı
☐ OB kenarı



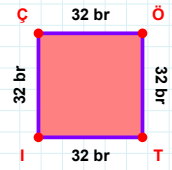
96 br hangi kenara aittir?

Kenar:



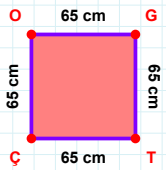
60 cm hangi kenara aittir?

Kenar:



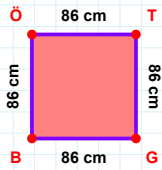
$|TI| + |İÇ| = \dots$

Cevap: br



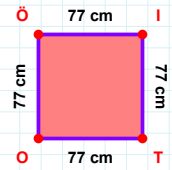
65 cm hangi kenara aittir?

- ☐ OG kenarı
☐ ÇO kenarı
☐ TO kenarı



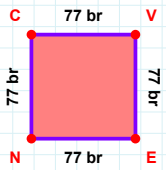
|BÖ| kaç cm'dir?

- ☐ 85 cm
☐ 86 cm
☐ 87 cm



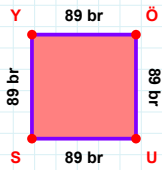
77 cm hangi kenara aittir?

Kenar:



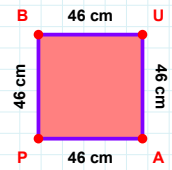
|CV| kaç br'dir?

- ☐ 76 br
☐ 77 br
☐ 78 br



$|ÖU| + |SY| = \dots$

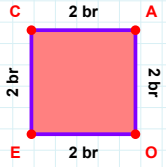
Cevap: br



46 cm hangi kenara aittir?

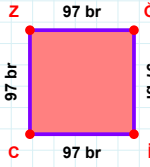
Kenar:

SORU: Aşağıdaki geometrik şekillerle ilgili soruları cevaplayınız.



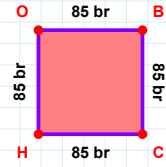
2 br hangi kenara aittir?

Kenar:



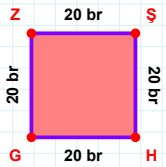
97 br hangi kenara aittir?

Kenar:



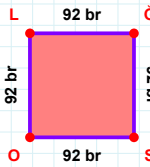
$|HO| + |BC| = \dots$

Cevap: br



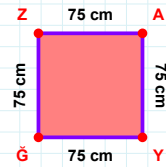
20 br hangi kenara aittir?

Kenar:



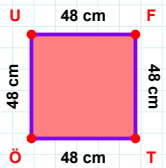
$|GS|$ kaç brdir?

- ☐ 91 br
☐ 92 br
☐ 93 br



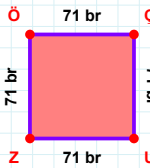
75 cm hangi kenara aittir?

Kenar:



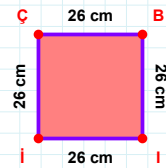
48 cm hangi kenara aittir?

Kenar:



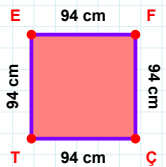
$|ÇU|$ kaç brdir?

- ☐ 70 br
☐ 71 br
☐ 72 br



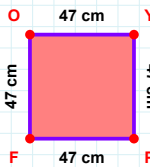
$|İÇ|$ kaç cmdir?

- ☐ 25 cm
☐ 26 cm
☐ 27 cm



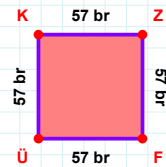
94 cm hangi kenara aittir?

Kenar:



47 cm hangi kenara aittir?

- ☐ FY kenarı
☐ FO kenarı
☐ PF kenarı



57 br hangi kenara aittir?

Kenar:

SÜREÇ ODAKLI DEĞERLENDİRME ÖLÇEĞİ

Doğru Sayısı: / 24

Öğretmen ilgili kutucuğu işaretler.

Geliştirilmeli (0-8)

İyi (9-14)

Çok İyi (15-20)

Mükemmel (21-24)

☐
☐
☐
☐

Hazırlayan:

Bu bölüme sınıfınızın ilgili kazanıma yönelik genel durumuna ilişkin gözlem ve izlenimlerinizi, öğrencilerinizin bu kazanımla ilgili öğrenme eksikliklerini ve bu eksikliklerin giderilmesi amacıyla yaptığınız/yapmayı planladığınız faaliyetleri not edebilirsiniz.

No	Adı - Soyadı	Toplam Puan	Değerlendirme
1			
2			
3			
4			
5			
6			
7			
8			
9			
10			
11			
12			
13			
14			
15			
16			
17			
18			
19			
20			
21			
22			
23			
24			
25			
26			
27			
28			
29			
30			
31			
32			
33			
34			
35			

Hazırlayan: