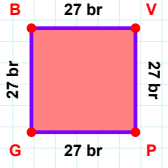
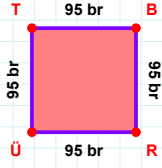


**SORU:** Aşağıdaki geometrik şekillerle ilgili soruları cevaplayınız.

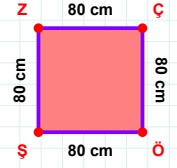
27 br hangi kenara aittir?

- ☐ PG kenarı  
☐ VP kenarı  
☐ PB kenarı



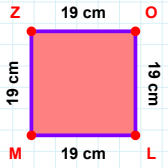
95 br hangi kenara aittir?

Kenar: .....

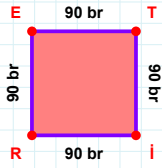


80 cm hangi kenara aittir?

Kenar: .....

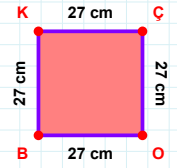
 $|OL| + |MZ| = \dots$ 

Cevap: ..... cm

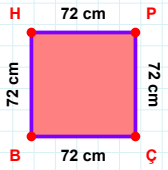


90 br hangi kenara aittir?

- ☐ ET kenarı  
☐ Tİ kenarı  
☐ TR kenarı

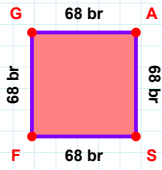
 $|KÇ| + |ÇO| = \dots$ 

Cevap: ..... cm



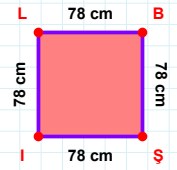
72 cm hangi kenara aittir?

- ☐ PÇ kenarı  
☐ ÇH kenarı  
☐ ÇB kenarı



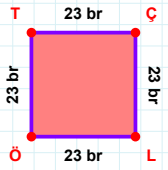
68 br hangi kenara aittir?

- ☐ AF kenarı  
☐ AS kenarı  
☐ GA kenarı



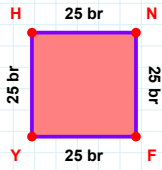
78 cm hangi kenara aittir?

- ☐ Bİ kenarı  
☐ BŞ kenarı  
☐ Şİ kenarı

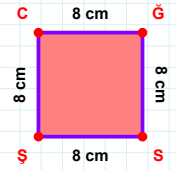


23 br hangi kenara aittir?

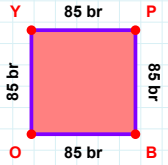
Kenar: .....

 $|YH| + |HN| = \dots$ 

Cevap: ..... br

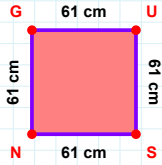
 $|ŞC| + |CĞ| = \dots$ 

Cevap: ..... cm

**SORU:** Aşağıdaki geometrik şekillerle ilgili soruları cevaplayınız.

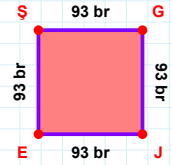
85 br hangi kenara aittir?

- ☐ PB kenarı  
☐ YP kenarı  
☐ OP kenarı



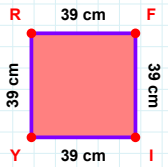
61 cm hangi kenara aittir?

Kenar: .....



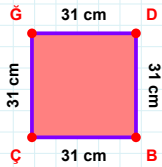
93 br hangi kenara aittir?

- ☐ GJ kenarı  
☐ JE kenarı  
☐ ŞJ kenarı



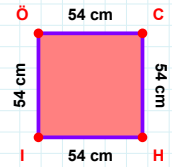
|RF| kaç cm'dir?

- ☐ 38 cm  
☐ 39 cm  
☐ 40 cm



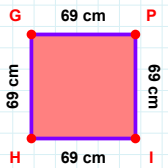
31 cm hangi kenara aittir?

- ☐ DB kenarı  
☐ GD kenarı  
☐ ÇD kenarı



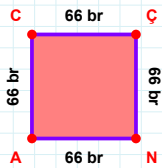
|HI| + |ÖC| = ....

Cevap: ..... cm



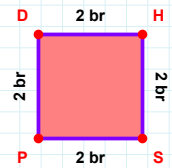
|PI| + |GP| = ....

Cevap: ..... cm



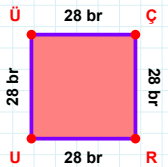
|NA| kaç br'dir?

- ☐ 65 br  
☐ 66 br  
☐ 67 br



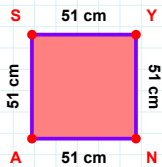
2 br hangi kenara aittir?

Kenar: .....



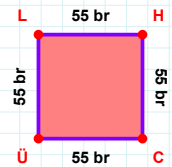
|ÇR| kaç br'dir?

- ☐ 27 br  
☐ 28 br  
☐ 29 br



|AS| + |NA| = ....

Cevap: ..... cm



|HC| kaç br'dir?

- ☐ 54 br  
☐ 55 br  
☐ 56 br

## SÜREÇ ODAKLI DEĞERLENDİRME ÖLÇEĞİ

Doğru Sayısı: ..... / 24

Öğretmen ilgili kutucuğu işaretler.

Geliştirilmeli (0-8)

İyi (9-14)

Çok İyi (15-20)

Mükemmel (21-24)

☐☐☐☐

Hazırlayan: .....

Bu bölüme sınıfınızın ilgili kazanıma yönelik genel durumuna ilişkin gözlem ve izlenimlerinizi, öğrencilerinizin bu kazanımla ilgili öğrenme eksikliklerini ve bu eksikliklerin giderilmesi amacıyla yaptığınız/yapmayı planladığınız faaliyetleri not edebilirsiniz.

No	Adı - Soyadı	Toplam Puan	Değerlendirme
1			
2			
3			
4			
5			
6			
7			
8			
9			
10			
11			
12			
13			
14			
15			
16			
17			
18			
19			
20			
21			
22			
23			
24			
25			
26			
27			
28			
29			
30			
31			
32			
33			
34			
35			

Hazırlayan: .....