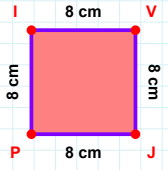
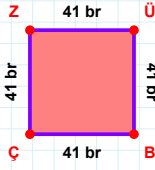


SORU: Aşağıdaki geometrik şekillerle ilgili soruları cevaplayınız.

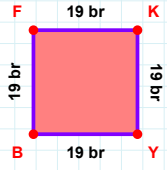
8 cm hangi kenara aittir?

- ☐ PI kenarı
☐ JI kenarı
☐ JP kenarı



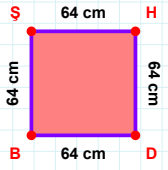
41 br hangi kenara aittir?

- ☐ BZ kenarı
☐ BÇ kenarı
☐ ZÜ kenarı



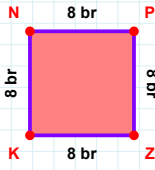
19 br hangi kenara aittir?

Kenar:



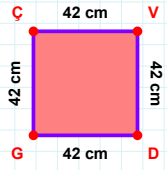
|HD| kaç cm'dir?

- ☐ 63 cm
☐ 64 cm
☐ 65 cm



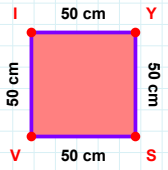
8 br hangi kenara aittir?

Kenar:



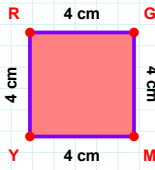
42 cm hangi kenara aittir?

- ☐ GÇ kenarı
☐ DG kenarı
☐ GV kenarı



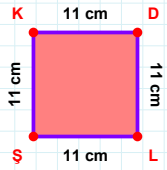
|YS| + |IY| =

Cevap: cm



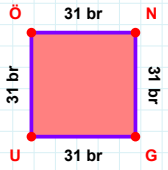
4 cm hangi kenara aittir?

- ☐ MR kenarı
☐ YR kenarı
☐ RG kenarı



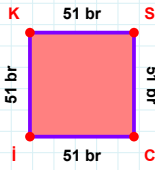
|KD| kaç cm'dir?

- ☐ 10 cm
☐ 11 cm
☐ 12 cm



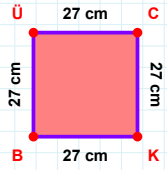
31 br hangi kenara aittir?

- ☐ ÖG kenarı
☐ ÖN kenarı
☐ UÖ kenarı



|SC| + |KS| =

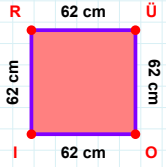
Cevap: br



|BÜ| kaç cm'dir?

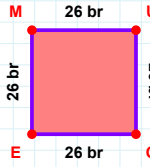
- ☐ 26 cm
☐ 27 cm
☐ 28 cm

SORU: Aşağıdaki geometrik şekillerle ilgili soruları cevaplayınız.



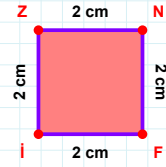
|RÜ| kaç cm'dir?

- ☐ 61 cm
☐ 62 cm
☐ 63 cm



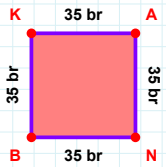
26 br hangi kenara aittir?

Kenar:



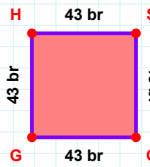
2 cm hangi kenara aittir?

- ☐ ZN kenarı
☐ NF kenarı
☐ Nİ kenarı



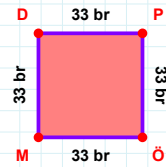
35 br hangi kenara aittir?

- ☐ KN kenarı
☐ AN kenarı
☐ KA kenarı



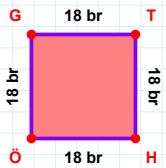
|CG| kaç br'dir?

- ☐ 42 br
☐ 43 br
☐ 44 br



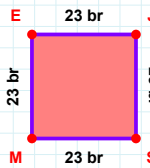
|PÖ| + |ÖM| =

Cevap: br



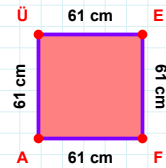
|ÖG| + |HÖ| =

Cevap: br



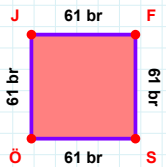
|SM| + |JS| =

Cevap: br



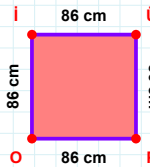
61 cm hangi kenara aittir?

- ☐ ÜE kenarı
☐ AE kenarı
☐ AÜ kenarı



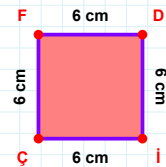
|JF| kaç br'dir?

- ☐ 60 br
☐ 61 br
☐ 62 br



86 cm hangi kenara aittir?

- ☐ PO kenarı
☐ İP kenarı
☐ Oİ kenarı



|ÇF| kaç cm'dir?

- ☐ 5 cm
☐ 6 cm
☐ 7 cm

SÜREÇ ODAKLI DEĞERLENDİRME ÖLÇEĞİ

Doğru Sayısı: / 24

Öğretmen ilgili kutucuğu işaretler.

Geliştirilmeli (0-8)

İyi (9-14)

Çok İyi (15-20)

Mükemmel (21-24)

☐
☐
☐
☐

Hazırlayan:

Bu bölüme sınıfınızın ilgili kazanıma yönelik genel durumuna ilişkin gözlem ve izlenimlerinizi, öğrencilerinizin bu kazanımla ilgili öğrenme eksikliklerini ve bu eksikliklerin giderilmesi amacıyla yaptığınız/yapmayı planladığınız faaliyetleri not edebilirsiniz.

No	Adı - Soyadı	Toplam Puan	Değerlendirme
1			
2			
3			
4			
5			
6			
7			
8			
9			
10			
11			
12			
13			
14			
15			
16			
17			
18			
19			
20			
21			
22			
23			
24			
25			
26			
27			
28			
29			
30			
31			
32			
33			
34			
35			

Hazırlayan: