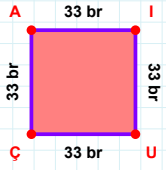
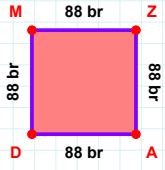


SORU: Aşağıdaki geometrik şekillerle ilgili soruları cevaplayınız.

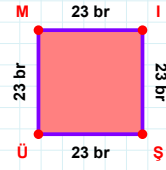
|ÇA| kaç brdir?

- ☐ 32 br
☐ 33 br
☐ 34 br



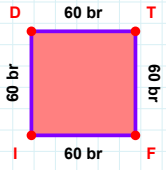
88 br hangi kenara aittir?

Kenar:



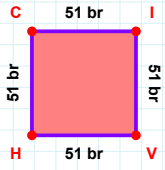
23 br hangi kenara aittir?

- ☐ MI kenarı
☐ İŞ kenarı
☐ ÜŞ kenarı
☐ MÜ kenarı



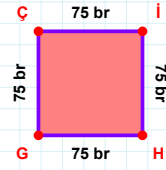
|TF| + |FI| =

Cevap: br



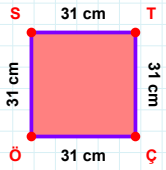
|CI| kaç brdir?

- ☐ 50 br
☐ 51 br
☐ 52 br



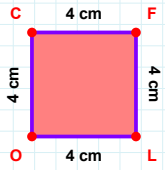
75 br hangi kenara aittir?

Kenar:



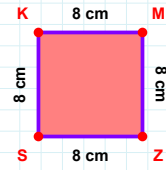
|ST| + |ÇÖ| =

Cevap: cm



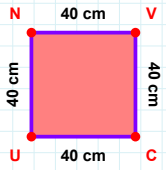
|LO| + |OC| =

Cevap: cm



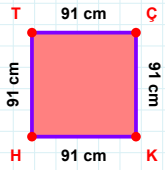
8 cm hangi kenara aittir?

Kenar:



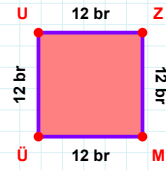
40 cm hangi kenara aittir?

- ☐ UN kenarı
☐ NC kenarı
☐ CU kenarı



|HT| + |TC| =

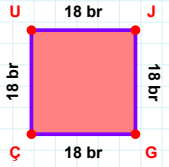
Cevap: cm



|MÜ| + |ÜU| =

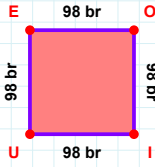
Cevap: br

SORU: Aşağıdaki geometrik şekillerle ilgili soruları cevaplayınız.



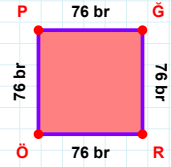
18 br hangi kenara aittir?

- ☐ UG kenarı
☐ UJ kenarı
☐ JG kenarı



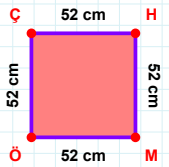
98 br hangi kenara aittir?

Kenar:



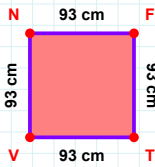
|PÖ| kaç brdir?

- ☐ 75 br
☐ 76 br
☐ 77 br



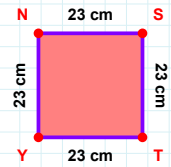
|ÇH| + |MÖ| =

Cevap: cm



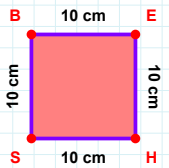
93 cm hangi kenara aittir?

- ☐ FT kenarı
☐ NF kenarı
☐ TN kenarı



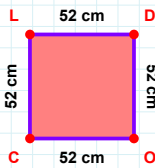
23 cm hangi kenara aittir?

- ☐ NS kenarı
☐ YN kenarı
☐ TN kenarı



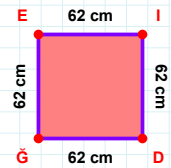
|BE| kaç cm'dir?

- ☐ 9 cm
☐ 10 cm
☐ 11 cm



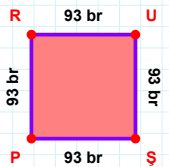
52 cm hangi kenara aittir?

Kenar:



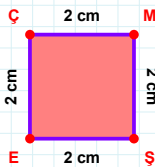
62 cm hangi kenara aittir?

Kenar:



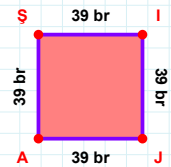
93 br hangi kenara aittir?

- ☐ RŞ kenarı
☐ RU kenarı
☐ PR kenarı



|ÇM| kaç cm'dir?

- ☐ 1 cm
☐ 2 cm
☐ 3 cm



39 br hangi kenara aittir?

- ☐ İA kenarı
☐ İJ kenarı
☐ Şİ kenarı

SÜREÇ ODAKLI DEĞERLENDİRME ÖLÇEĞİ

Doğru Sayısı: / 24

Öğretmen ilgili kutucuğu işaretler.

Geliştirilmeli (0-8)

İyi (9-14)

Çok İyi (15-20)

Mükemmel (21-24)

☐☐☐☐

Hazırlayan:

Bu bölüme sınıfınızın ilgili kazanıma yönelik genel durumuna ilişkin gözlem ve izlenimlerinizi, öğrencilerinizin bu kazanımla ilgili öğrenme eksikliklerini ve bu eksikliklerin giderilmesi amacıyla yaptığınız/yapmayı planladığınız faaliyetleri not edebilirsiniz.

No	Adı - Soyadı	Toplam Puan	Değerlendirme
1			
2			
3			
4			
5			
6			
7			
8			
9			
10			
11			
12			
13			
14			
15			
16			
17			
18			
19			
20			
21			
22			
23			
24			
25			
26			
27			
28			
29			
30			
31			
32			
33			
34			
35			

Hazırlayan: