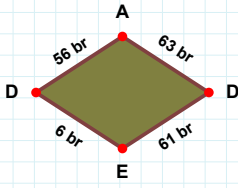
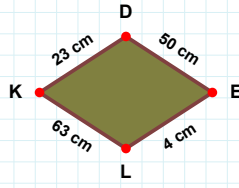
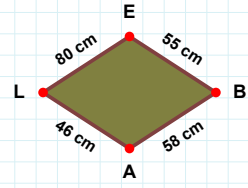


**SORU:** Aşağıdaki şekillerde istenen kenarın kaç birim veya santimetre olduğunu bulunuz.**|BA| kaç cmdir?**

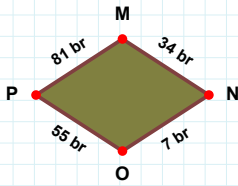
- ☐ 56 cm  
☐ 61 cm  
☐ 58 cm

**|AD| kaç brdir?**

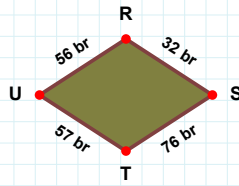
- ☐ 73 br  
☐ 68 br  
☐ 63 br

**|LK| kaç cmdir?**

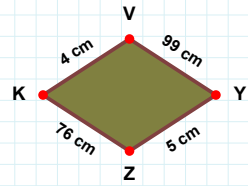
- ☐ 63 cm  
☐ 68 cm  
☐ 66 cm

**|OP| kaç brdir?**

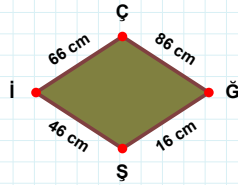
- ☐ 55 br  
☐ 60 br  
☐ 50 br

**|TU| kaç brdir?**

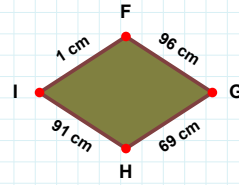
- ☐ 57 br  
☐ 54 br  
☐ 67 br

**|VY| kaç cmdir?**

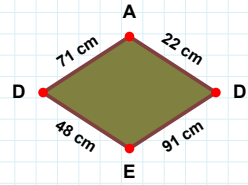
- ☐ 99 cm  
☐ 97 cm  
☐ 96 cm

**|FG| kaç cmdir?**

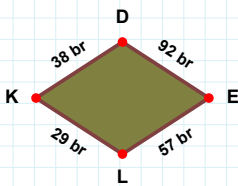
- ☐ 86 cm  
☐ 96 cm  
☐ 94 cm

**|AD| kaç cmdir?**

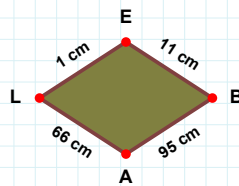
- ☐ 22 cm  
☐ 25 cm  
☐ 12 cm

**|Şİ| kaç cmdir?**

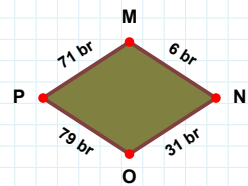
- ☐ 43 cm  
☐ 46 cm  
☐ 48 cm

**|BA| kaç cmdir?**

- ☐ 92 cm  
☐ 95 cm  
☐ 96 cm

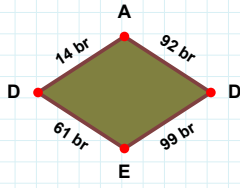
**|DE| kaç brdir?**

- ☐ 97 br  
☐ 87 br  
☐ 92 br

**|OP| kaç brdir?**

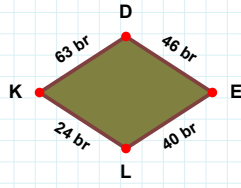
- ☐ 80 br  
☐ 79 br  
☐ 82 br

SORU: Aşağıdaki şekillerde istenen kenarın kaç birim veya santimetre olduğunu bulunuz.



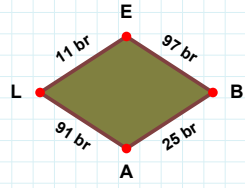
|LE| kaç brdir?

- ☐ 9 br  
☐ 11 br  
☐ 14 br



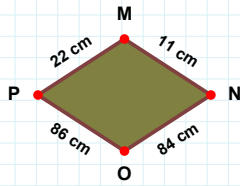
|KD| kaç brdir?

- ☐ 63 br  
☐ 61 br  
☐ 58 br



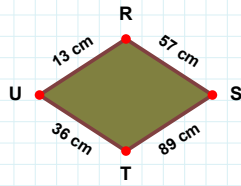
|ED| kaç brdir?

- ☐ 60 br  
☐ 61 br  
☐ 59 br



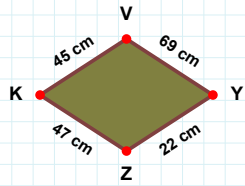
|ZK| kaç cmdir?

- ☐ 45 cm  
☐ 44 cm  
☐ 47 cm



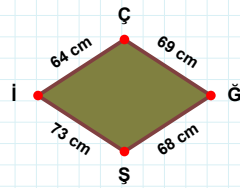
|MN| kaç cmdir?

- ☐ 11 cm  
☐ 12 cm  
☐ 1 cm



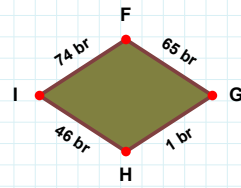
|UR| kaç cmdir?

- ☐ 13 cm  
☐ 12 cm  
☐ 18 cm



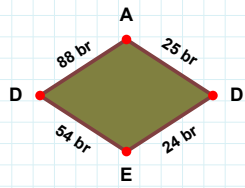
|ÇĞ| kaç cmdir?

- ☐ 67 cm  
☐ 59 cm  
☐ 69 cm



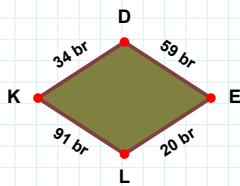
|GH| kaç brdir?

- ☐ 4 br  
☐ 1 br  
☐ 11 br



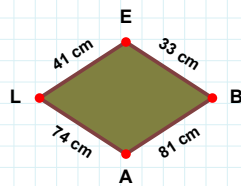
|DA| kaç brdir?

- ☐ 91 br  
☐ 88 br  
☐ 98 br



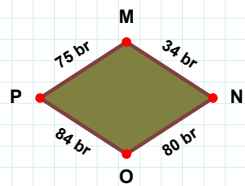
|EL| kaç brdir?

- ☐ 18 br  
☐ 20 br  
☐ 19 br



|AL| kaç cmdir?

- ☐ 75 cm  
☐ 74 cm  
☐ 77 cm



|OP| kaç brdir?

- ☐ 81 br  
☐ 89 br  
☐ 84 br

## SÜREÇ ODAKLI DEĞERLENDİRME ÖLÇEĞİ

Doğru Sayısı: ..... / 24

Öğretmen ilgili kutucuğu işaretler.

Geliştirilmeli (0-8)

İyi (9-14)

Çok İyi (15-20)

Mükemmel (21-24)

☐
☐
☐
☐

Hazırlayan: .....

Bu bölüme sınıfınızın ilgili kazanıma yönelik genel durumuna ilişkin gözlem ve izlenimlerinizi, öğrencilerinizin bu kazanımla ilgili öğrenme eksikliklerini ve bu eksikliklerin giderilmesi amacıyla yaptığınız/yapmayı planladığınız faaliyetleri not edebilirsiniz.

No	Adı - Soyadı	Toplam Puan	Değerlendirme
1			
2			
3			
4			
5			
6			
7			
8			
9			
10			
11			
12			
13			
14			
15			
16			
17			
18			
19			
20			
21			
22			
23			
24			
25			
26			
27			
28			
29			
30			
31			
32			
33			
34			
35			

Hazırlayan: .....