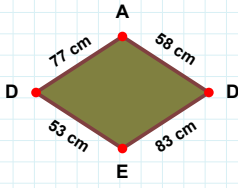
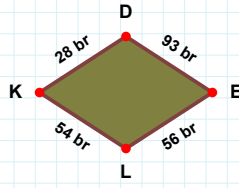


**SORU:** Aşağıdaki şekillerde istenen kenarın kaç birim veya santimetre olduğunu bulunuz.

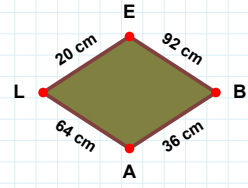
|EB| kaç cmdir?

- ☐ 95 cm  
☐ 97 cm  
☐ 92 cm



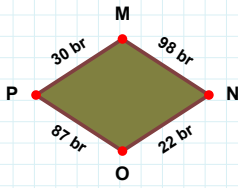
|DE| kaç cmdir?

- ☐ 93 cm  
☐ 83 cm  
☐ 78 cm



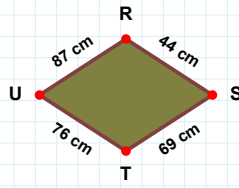
|KD| kaç brdir?

- ☐ 29 br  
☐ 26 br  
☐ 28 br



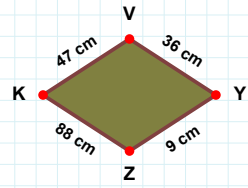
|RS| kaç cmdir?

- ☐ 43 cm  
☐ 47 cm  
☐ 44 cm



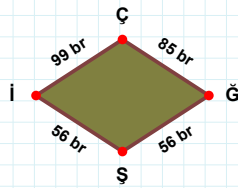
|OP| kaç brdir?

- ☐ 86 br  
☐ 87 br  
☐ 92 br



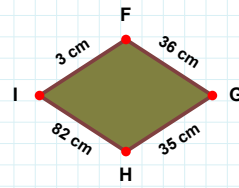
|KV| kaç cmdir?

- ☐ 50 cm  
☐ 45 cm  
☐ 47 cm



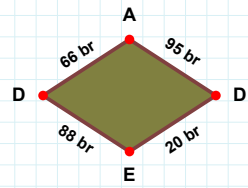
|FG| kaç cmdir?

- ☐ 31 cm  
☐ 39 cm  
☐ 36 cm



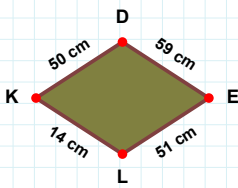
|DE| kaç brdir?

- ☐ 20 br  
☐ 15 br  
☐ 30 br



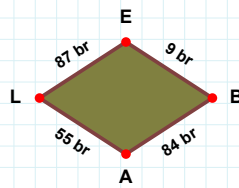
|İÇ| kaç brdir?

- ☐ 99 br  
☐ 89 br  
☐ 96 br



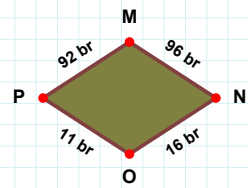
|LE| kaç brdir?

- ☐ 97 br  
☐ 87 br  
☐ 86 br



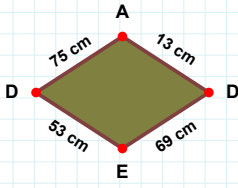
|EL| kaç cmdir?

- ☐ 61 cm  
☐ 51 cm  
☐ 54 cm



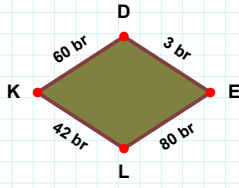
|OP| kaç brdir?

- ☐ 10 br  
☐ 6 br  
☐ 11 br

**SORU:** Aşağıdaki şekillerde istenen kenarın kaç birim veya santimetre olduğunu bulunuz.

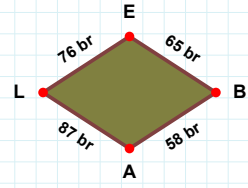
|BA| kaç brdir?

- ☐ 53 br  
☐ 58 br  
☐ 48 br



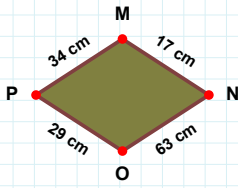
|DE| kaç brdir?

- ☐ 3 br  
☐ 2 br  
☐ 8 br



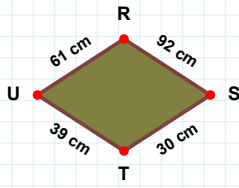
|DE| kaç cmdir?

- ☐ 72 cm  
☐ 69 cm  
☐ 67 cm



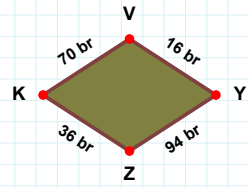
|YY| kaç brdir?

- ☐ 16 br  
☐ 26 br  
☐ 17 br



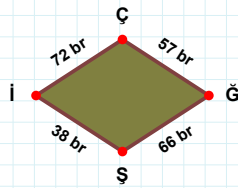
|OP| kaç cmdir?

- ☐ 32 cm  
☐ 29 cm  
☐ 24 cm



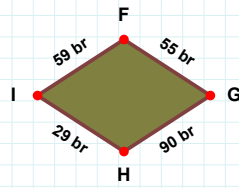
|UR| kaç cmdir?

- ☐ 71 cm  
☐ 61 cm  
☐ 63 cm



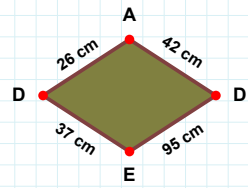
|GH| kaç brdir?

- ☐ 87 br  
☐ 90 br  
☐ 91 br



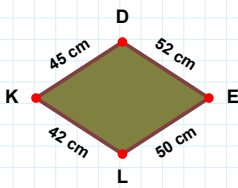
|DA| kaç cmdir?

- ☐ 31 cm  
☐ 23 cm  
☐ 26 cm



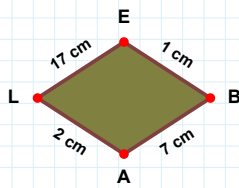
|İÇ| kaç brdir?

- ☐ 72 br  
☐ 62 br  
☐ 70 br



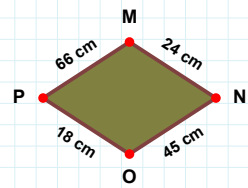
|MN| kaç cmdir?

- ☐ 24 cm  
☐ 25 cm  
☐ 19 cm



|AL| kaç cmdir?

- ☐ 5 cm  
☐ 2 cm  
☐ 3 cm



|LK| kaç cmdir?

- ☐ 45 cm  
☐ 42 cm  
☐ 47 cm

## SÜREÇ ODAKLI DEĞERLENDİRME ÖLÇEĞİ

Doğru Sayısı: ..... / 24

Öğretmen ilgili kutucuğu işaretler.

Geliştirilmeli (0-8)

İyi (9-14)

Çok İyi (15-20)

Mükemmel (21-24)

☐☐☐☐

Hazırlayan: .....

Bu bölüme sınıfınızın ilgili kazanıma yönelik genel durumuna ilişkin gözlem ve izlenimlerinizi, öğrencilerinizin bu kazanımla ilgili öğrenme eksikliklerini ve bu eksikliklerin giderilmesi amacıyla yaptığınız/yapmayı planladığınız faaliyetleri not edebilirsiniz.

No	Adı - Soyadı	Toplam Puan	Değerlendirme
1			
2			
3			
4			
5			
6			
7			
8			
9			
10			
11			
12			
13			
14			
15			
16			
17			
18			
19			
20			
21			
22			
23			
24			
25			
26			
27			
28			
29			
30			
31			
32			
33			
34			
35			

Hazırlayan: .....