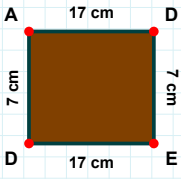
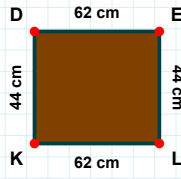


**SORU:** Aşağıdaki şekillerde istenen kenarın kaç birim veya santimetre olduğunu bulunuz.

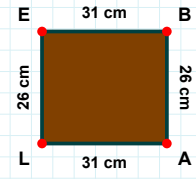
|ED| kaç cmdir?

- ☐ 7 cm  
☐ 19 cm  
☐ 17 cm



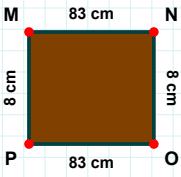
|BA| kaç cmdir?

- ☐ 26 cm  
☐ 36 cm  
☐ 31 cm



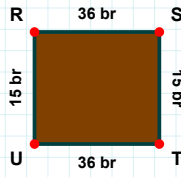
|DE| kaç cmdir?

- ☐ 61 cm  
☐ 62 cm  
☐ 67 cm



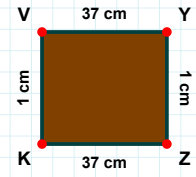
|MN| kaç cmdir?

- ☐ 83 cm  
☐ 73 cm  
☐ 86 cm



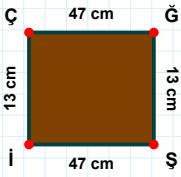
|UR| kaç brdir?

- ☐ 18 br  
☐ 15 br  
☐ 10 br



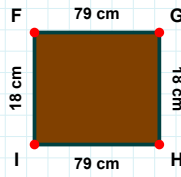
|VY| kaç cmdir?

- ☐ 35 cm  
☐ 37 cm  
☐ 32 cm



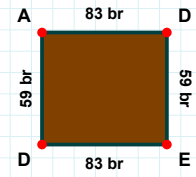
|ED| kaç brdir?

- ☐ 83 br  
☐ 85 br  
☐ 81 br



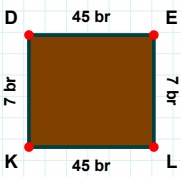
|FG| kaç cmdir?

- ☐ 79 cm  
☐ 78 cm  
☐ 76 cm



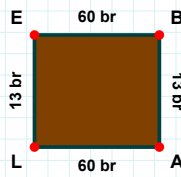
|ĞŞ| kaç cmdir?

- ☐ 15 cm  
☐ 13 cm  
☐ 16 cm



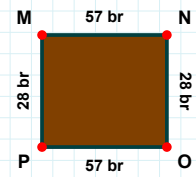
|LE| kaç brdir?

- ☐ 13 br  
☐ 10 br  
☐ 23 br



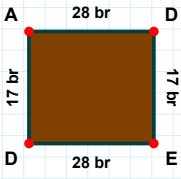
|KD| kaç brdir?

- ☐ 7 br  
☐ 6 br  
☐ 4 br



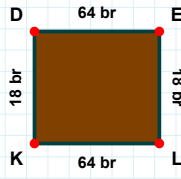
|OP| kaç brdir?

- ☐ 57 br  
☐ 58 br  
☐ 67 br

**SORU:** Aşağıdaki şekillerde istenen kenarın kaç birim veya santimetre olduğunu bulunuz.

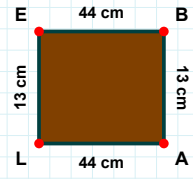
|LE| kaç cmdir?

- ☐ 14 cm  
☐ 12 cm  
☐ 13 cm



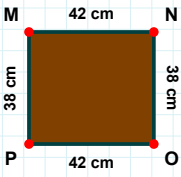
|DE| kaç brdir?

- ☐ 74 br  
☐ 64 br  
☐ 54 br



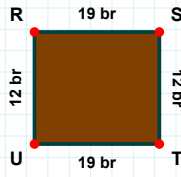
|DA| kaç brdir?

- ☐ 17 br  
☐ 27 br  
☐ 22 br



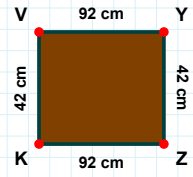
|TU| kaç brdir?

- ☐ 21 br  
☐ 20 br  
☐ 19 br



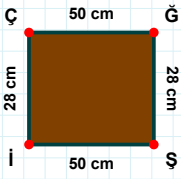
|NO| kaç cmdir?

- ☐ 38 cm  
☐ 37 cm  
☐ 33 cm



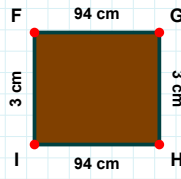
|YZ| kaç cmdir?

- ☐ 45 cm  
☐ 37 cm  
☐ 42 cm



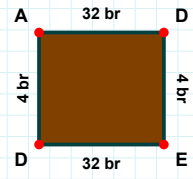
|HI| kaç cmdir?

- ☐ 92 cm  
☐ 94 cm  
☐ 89 cm



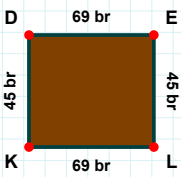
|ÇĞ| kaç cmdir?

- ☐ 52 cm  
☐ 50 cm  
☐ 48 cm



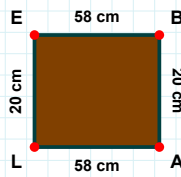
|DA| kaç brdir?

- ☐ 14 br  
☐ 4 br  
☐ 3 br



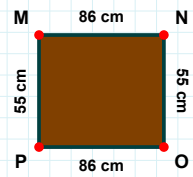
|OP| kaç cmdir?

- ☐ 89 cm  
☐ 86 cm  
☐ 81 cm



|BA| kaç cmdir?

- ☐ 15 cm  
☐ 30 cm  
☐ 20 cm



|EL| kaç brdir?

- ☐ 42 br  
☐ 45 br  
☐ 43 br

## SÜREÇ ODAKLI DEĞERLENDİRME ÖLÇEĞİ

Doğru Sayısı: ..... / 24

Öğretmen ilgili kutucuğu işaretler.

Geliştirilmeli (0-8)

İyi (9-14)

Çok İyi (15-20)

Mükemmel (21-24)

☐
☐
☐
☐

Hazırlayan: .....

Bu bölüme sınıfınızın ilgili kazanıma yönelik genel durumuna ilişkin gözlem ve izlenimlerinizi, öğrencilerinizin bu kazanımla ilgili öğrenme eksikliklerini ve bu eksikliklerin giderilmesi amacıyla yaptığınız/yapmayı planladığınız faaliyetleri not edebilirsiniz.

No	Adı - Soyadı	Toplam Puan	Değerlendirme
1			
2			
3			
4			
5			
6			
7			
8			
9			
10			
11			
12			
13			
14			
15			
16			
17			
18			
19			
20			
21			
22			
23			
24			
25			
26			
27			
28			
29			
30			
31			
32			
33			
34			
35			

Hazırlayan: .....