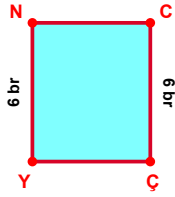
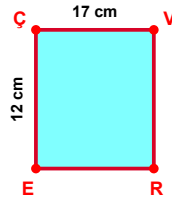


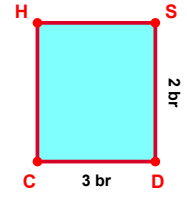
SORU: Aşağıdaki şekillerde verilen, kenar uzunlukları farklarını bulunuz.



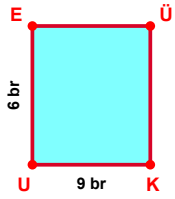
$$|YN| - |CÇ| = \dots\dots\dots$$



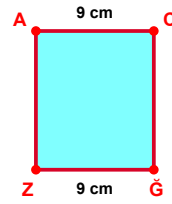
$$|ÇV| - |EÇ| = \dots\dots\dots$$



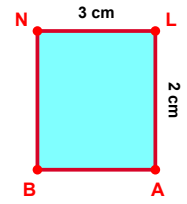
$$|DC| - |SD| = \dots\dots\dots$$



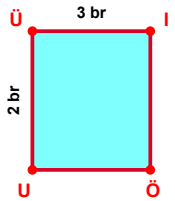
$$|KU| - |UE| = \dots\dots\dots$$



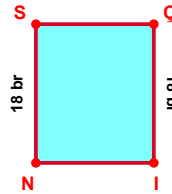
$$|ĞZ| - |AC| = \dots\dots\dots$$



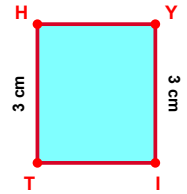
$$|NL| - |LA| = \dots\dots\dots$$



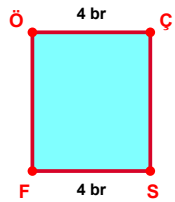
$$|Üİ| - |UÜ| = \dots\dots\dots$$



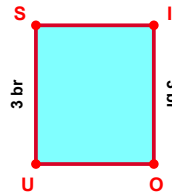
$$|NS| - |Çİ| = \dots\dots\dots$$



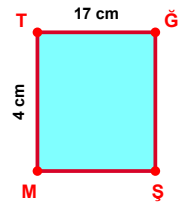
$$|TH| - |Yİ| = \dots\dots\dots$$



$$|SF| - |ÖÇ| = \dots\dots\dots$$

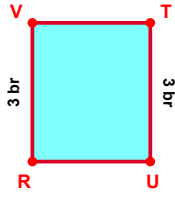


$$|İO| - |US| = \dots\dots\dots$$

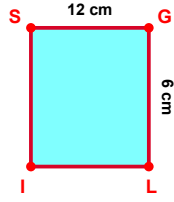


$$|TĞ| - |MT| = \dots\dots\dots$$

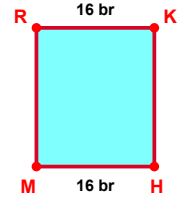
SORU: Aşağıdaki şekillerde verilen, kenar uzunlukları farklarını bulunuz.



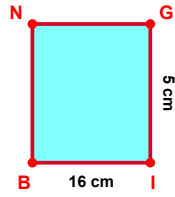
$$|TU| - |RV| = \dots\dots\dots$$



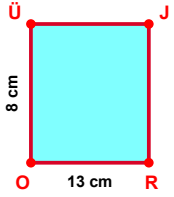
$$|SG| - |GL| = \dots\dots\dots$$



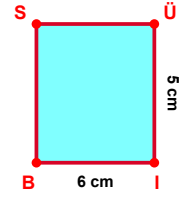
$$|HM| - |RK| = \dots\dots\dots$$



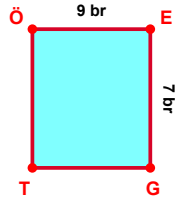
$$|IB| - |GI| = \dots\dots\dots$$



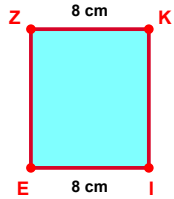
$$|RO| - |OÜ| = \dots\dots\dots$$



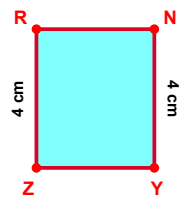
$$|IB| - |ÜI| = \dots\dots\dots$$



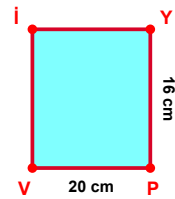
$$|ÖE| - |EG| = \dots\dots\dots$$



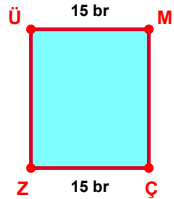
$$|IE| - |ZK| = \dots\dots\dots$$



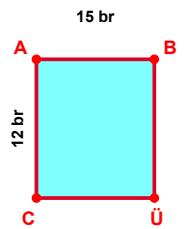
$$|NY| - |ZR| = \dots\dots\dots$$



$$|PV| - |YP| = \dots\dots\dots$$



$$|ÜM| - |ÇZ| = \dots\dots\dots$$



$$|AB| - |CA| = \dots\dots\dots$$

## SÜREÇ ODAKLI DEĞERLENDİRME ÖLÇEĞİ

Doğru Sayısı: ..... / 24

Öğretmen ilgili kutucuğu işaretler.

Geliştirilmeli (0-8)

İyi (9-14)

Çok İyi (15-20)

Mükemmel (21-24)

☐
☐
☐
☐

Hazırlayan: .....

Bu bölüme sınıfınızın ilgili kazanıma yönelik genel durumuna ilişkin gözlem ve izlenimlerinizi, öğrencilerinizin bu kazanımla ilgili öğrenme eksikliklerini ve bu eksikliklerin giderilmesi amacıyla yaptığınız/yapmayı planladığınız faaliyetleri not edebilirsiniz.

No	Adı - Soyadı	Toplam Puan	Değerlendirme
1			
2			
3			
4			
5			
6			
7			
8			
9			
10			
11			
12			
13			
14			
15			
16			
17			
18			
19			
20			
21			
22			
23			
24			
25			
26			
27			
28			
29			
30			
31			
32			
33			
34			
35			

Hazırlayan: ..... ..