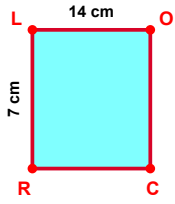
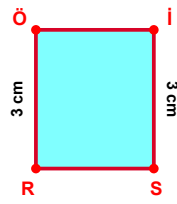


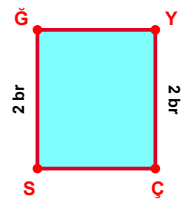
SORU: Aşağıdaki şekillerde verilen, kenar uzunlukları farklarını bulunuz.



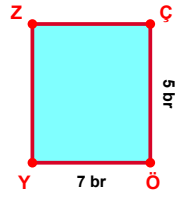
$$|LO| - |RL| = \dots\dots\dots$$



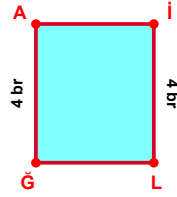
$$|RÖ| - |İS| = \dots\dots\dots$$



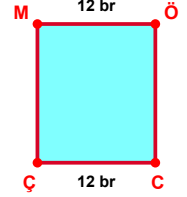
$$|YÇ| - |SĞ| = \dots\dots\dots$$



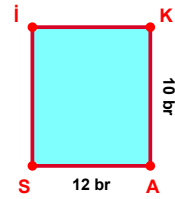
$$|ÖY| - |ÇÖ| = \dots\dots\dots$$



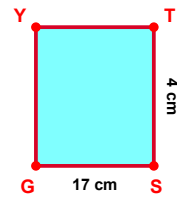
$$|İL| - |ĞA| = \dots\dots\dots$$



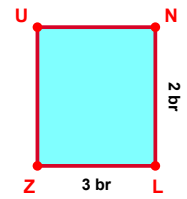
$$|MÖ| - |CC| = \dots\dots\dots$$



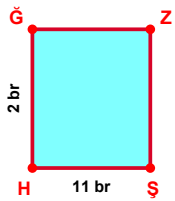
$$|AS| - |KA| = \dots\dots\dots$$



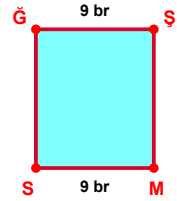
$$|SG| - |TS| = \dots\dots\dots$$



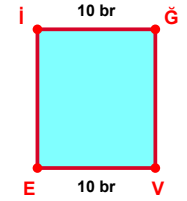
$$|LZ| - |NL| = \dots\dots\dots$$



$$|ŞH| - |HĞ| = \dots\dots\dots$$

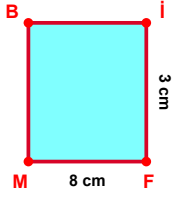


$$|MS| - |ĞŞ| = \dots\dots\dots$$

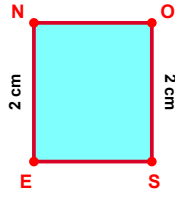


$$|VE| - |İĞ| = \dots\dots\dots$$

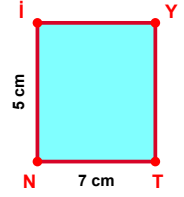
SORU: Aşağıdaki şekillerde verilen, kenar uzunlukları farklarını bulunuz.



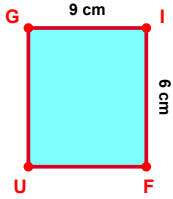
$$|FM| - |iF| = \dots\dots\dots$$



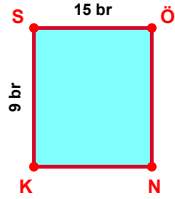
$$|EN| - |OS| = \dots\dots\dots$$



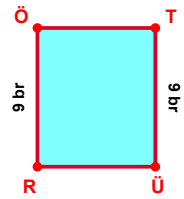
$$|TN| - |Ni| = \dots\dots\dots$$



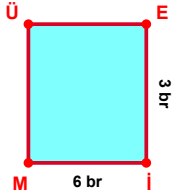
$$|Gi| - |iF| = \dots\dots\dots$$



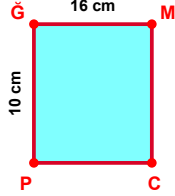
$$|SÖ| - |KS| = \dots\dots\dots$$



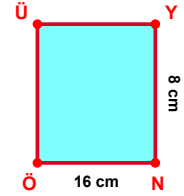
$$|TÜ| - |RÖ| = \dots\dots\dots$$



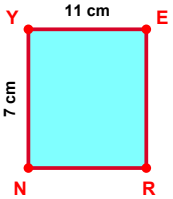
$$|iM| - |Ei| = \dots\dots\dots$$



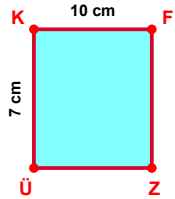
$$|ĞM| - |PĞ| = \dots\dots\dots$$



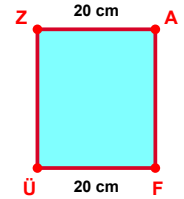
$$|NÖ| - |YN| = \dots\dots\dots$$



$$|YE| - |NY| = \dots\dots\dots$$



$$|KF| - |ÜK| = \dots\dots\dots$$



$$|FÜ| - |ZA| = \dots\dots\dots$$

SÜREÇ ODAKLI DEĞERLENDİRME ÖLÇEĞİ

Doğru Sayısı: / 24

Öğretmen ilgili kutucuğu işaretler.

Geliştirilmeli (0-8)

İyi (9-14)

Çok İyi (15-20)

Mükemmel (21-24)

☐
☐
☐
☐

Hazırlayan:

Bu bölüme sınıfınızın ilgili kazanıma yönelik genel durumuna ilişkin gözlem ve izlenimlerinizi, öğrencilerinizin bu kazanımla ilgili öğrenme eksikliklerini ve bu eksikliklerin giderilmesi amacıyla yaptığınız/yapmayı planladığınız faaliyetleri not edebilirsiniz.

No	Adı - Soyadı	Toplam Puan	Değerlendirme
1			
2			
3			
4			
5			
6			
7			
8			
9			
10			
11			
12			
13			
14			
15			
16			
17			
18			
19			
20			
21			
22			
23			
24			
25			
26			
27			
28			
29			
30			
31			
32			
33			
34			
35			

Hazırlayan: