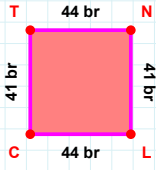
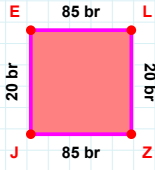


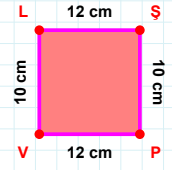
**SORU:** Aşağıdaki geometrik şekillerle ilgili soruları cevaplayınız.

41 br hangi kenara aittir?

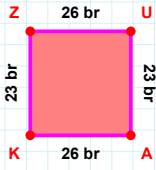
Kenar: .....

 $|LZ|$  kaç brdir?

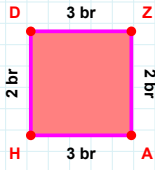
- ☐ 19 br  
☐ 20 br  
☐ 21 br

 $|LS| + |SP| = \dots$ 

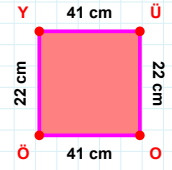
Cevap: ..... cm

 $|KZ| + |ZU| = \dots$ 

Cevap: ..... br

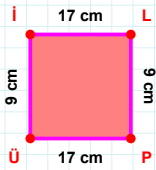
 $|AH| + |HD| = \dots$ 

Cevap: ..... br

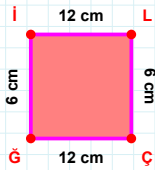


22 cm hangi kenara aittir?

Kenar: .....

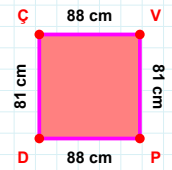
 $|İL|$  kaç cmdir?

- ☐ 16 cm  
☐ 17 cm  
☐ 18 cm

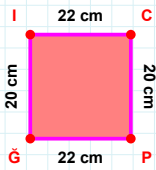


12 cm hangi kenara aittir?

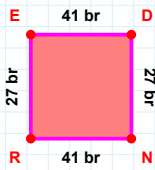
Kenar: .....

 $|VP|$  kaç cmdir?

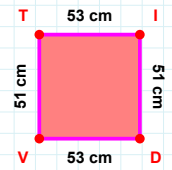
- ☐ 80 cm  
☐ 81 cm  
☐ 82 cm

 $|Ğİ|$  kaç cmdir?

- ☐ 19 cm  
☐ 20 cm  
☐ 21 cm

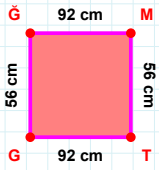
 $|NR| + |DN| = \dots$ 

Cevap: ..... br

 $|TI| + |DV| = \dots$ 

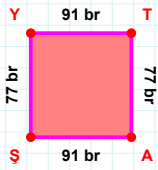
Cevap: ..... cm

SORU: Aşağıdaki geometrik şekillerle ilgili soruları cevaplayınız.



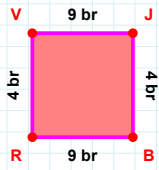
56 cm hangi kenara aittir?

- ☐ TG kenarı  
☐ GM kenarı  
☐ GT kenarı

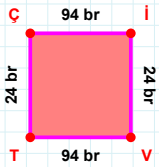


77 br hangi kenara aittir?

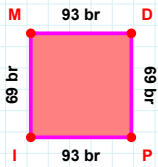
- ☐ AY kenarı  
☐ YT kenarı  
☐ ŞY kenarı

 $|VJ| + |BR| = \dots$ 

Cevap: ..... br

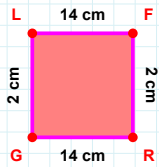
 $|TÇ|$  kaç brdir?

- ☐ 23 br  
☐ 24 br  
☐ 25 br



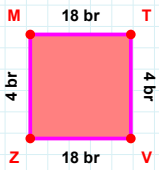
69 br hangi kenara aittir?

Kenar: .....



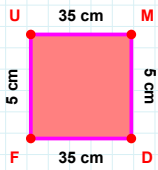
2 cm hangi kenara aittir?

- ☐ FR kenarı  
☐ LR kenarı  
☐ LF kenarı

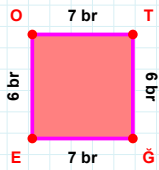


4 br hangi kenara aittir?

- ☐ VZ kenarı  
☐ TV kenarı  
☐ VM kenarı

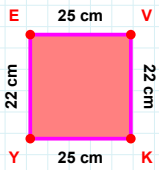
 $|UM| + |MD| = \dots$ 

Cevap: ..... cm

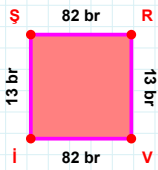


6 br hangi kenara aittir?

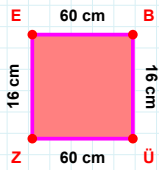
Kenar: .....

 $|KY|$  kaç cmdir?

- ☐ 24 cm  
☐ 25 cm  
☐ 26 cm

 $|İV|$  kaç brdir?

- ☐ 81 br  
☐ 82 br  
☐ 83 br

 $|ZE|$  kaç cmdir?

- ☐ 15 cm  
☐ 16 cm  
☐ 17 cm

## SÜREÇ ODAKLI DEĞERLENDİRME ÖLÇEĞİ

Doğru Sayısı: ..... / 24

Öğretmen ilgili kutucuğu işaretler.

Geliştirilmeli (0-8)

İyi (9-14)

Çok İyi (15-20)

Mükemmel (21-24)

☐☐☐☐

Hazırlayan: .....

Bu bölüme sınıfınızın ilgili kazanıma yönelik genel durumuna ilişkin gözlem ve izlenimlerinizi, öğrencilerinizin bu kazanımla ilgili öğrenme eksikliklerini ve bu eksikliklerin giderilmesi amacıyla yaptığınız/yapmayı planladığınız faaliyetleri not edebilirsiniz.

No	Adı - Soyadı	Toplam Puan	Değerlendirme
1			
2			
3			
4			
5			
6			
7			
8			
9			
10			
11			
12			
13			
14			
15			
16			
17			
18			
19			
20			
21			
22			
23			
24			
25			
26			
27			
28			
29			
30			
31			
32			
33			
34			
35			

Hazırlayan: .....