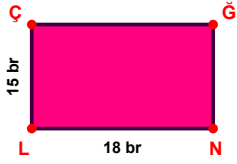


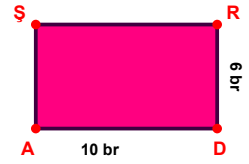
SORU: Aşağıdaki şekillerde verilen, kenar uzunlukları farklarını bulunuz.



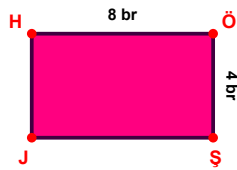
$$|NL| - |LÇ| = \dots\dots\dots$$



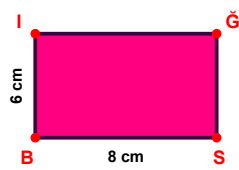
$$|PO| - |TU| = \dots\dots\dots$$



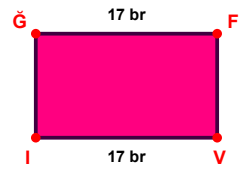
$$|DA| - |RD| = \dots\dots\dots$$



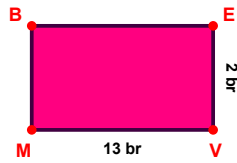
$$|HÖ| - |ÖŞ| = \dots\dots\dots$$



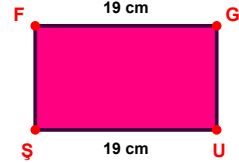
$$|SB| - |BI| = \dots\dots\dots$$



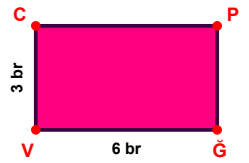
$$|ĞF| - |VI| = \dots\dots\dots$$



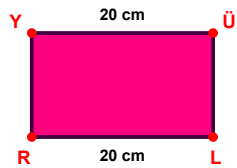
$$|VM| - |EV| = \dots\dots\dots$$



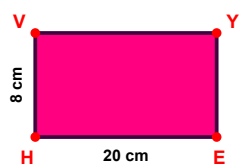
$$|US| - |FG| = \dots\dots\dots$$



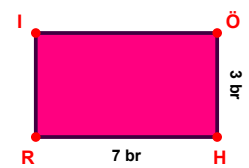
$$|ĞV| - |VC| = \dots\dots\dots$$



$$|LR| - |YÜ| = \dots\dots\dots$$

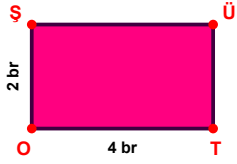


$$|EH| - |HV| = \dots\dots\dots$$

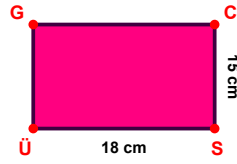


$$|HR| - |ÖH| = \dots\dots\dots$$

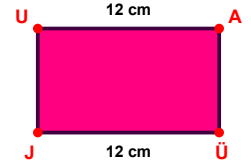
SORU: Aşağıdaki şekillerde verilen, kenar uzunlukları farklarını bulunuz.



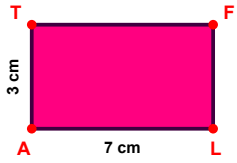
$$|TO| - |OS| = \dots\dots\dots$$



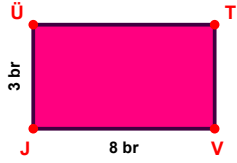
$$|SÜ| - |CS| = \dots\dots\dots$$



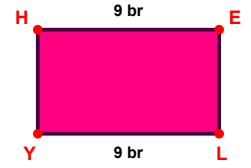
$$|UA| - |ÜJ| = \dots\dots\dots$$



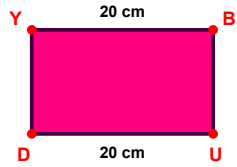
$$|LA| - |AT| = \dots\dots\dots$$



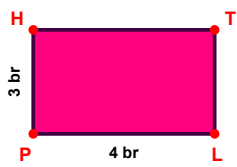
$$|VJ| - |JÜ| = \dots\dots\dots$$



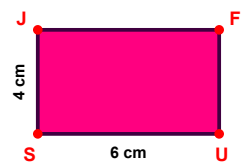
$$|LY| - |HE| = \dots\dots\dots$$



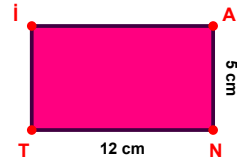
$$|UD| - |YB| = \dots\dots\dots$$



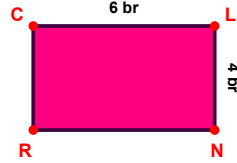
$$|LP| - |PH| = \dots\dots\dots$$



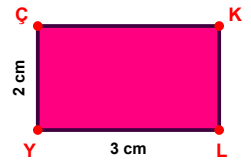
$$|US| - |SJ| = \dots\dots\dots$$



$$|NT| - |AN| = \dots\dots\dots$$



$$|CL| - |LN| = \dots\dots\dots$$



$$|LY| - |YÇ| = \dots\dots\dots$$

SÜREÇ ODAKLI DEĞERLENDİRME ÖLÇEĞİ

Doğru Sayısı: / 24

Öğretmen ilgili kutucuğu işaretler.

Geliştirilmeli (0-8)

İyi (9-14)

Çok İyi (15-20)

Mükemmel (21-24)

☐
☐
☐
☐

Hazırlayan:

Bu bölüme sınıfınızın ilgili kazanıma yönelik genel durumuna ilişkin gözlem ve izlenimlerinizi, öğrencilerinizin bu kazanımla ilgili öğrenme eksikliklerini ve bu eksikliklerin giderilmesi amacıyla yaptığınız/yapmayı planladığınız faaliyetleri not edebilirsiniz.

No	Adı - Soyadı	Toplam Puan	Değerlendirme
1			
2			
3			
4			
5			
6			
7			
8			
9			
10			
11			
12			
13			
14			
15			
16			
17			
18			
19			
20			
21			
22			
23			
24			
25			
26			
27			
28			
29			
30			
31			
32			
33			
34			
35			

Hazırlayan: