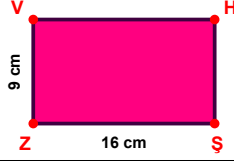



SORU: Aşağıdaki şekillerde verilen, kenar uzunlukları farklarını bulunuz.



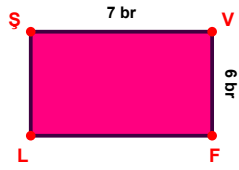
$$|SA| - |MG| = \dots\dots$$



$$|SZ| - |ZV| = \dots\dots$$



$$|ÖS| - |SM| = \dots\dots$$



$$|ŞV| - |VF| = \dots\dots$$



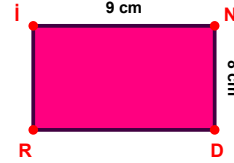
$$|PF| - |SN| = \dots\dots$$



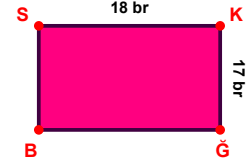
$$|ÇE| - |OL| = \dots\dots$$



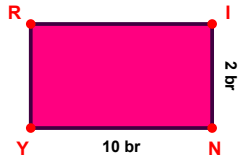
$$|TF| - |DĞ| = \dots\dots$$



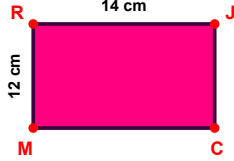
$$|İN| - |ND| = \dots\dots$$




$$|SK| - |KĞ| = \dots\dots$$



$$|NY| - |İN| = \dots\dots$$

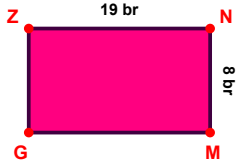


$$|RJ| - |MR| = \dots\dots$$

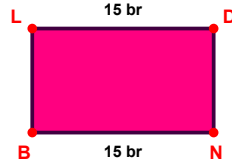


$$|LB| - |KL| = \dots\dots$$

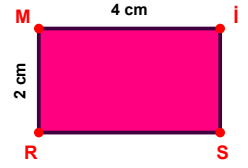
SORU: Aşağıdaki şekillerde verilen, kenar uzunlukları farklarını bulunuz.



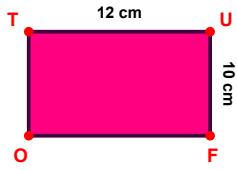
$$|ZN| - |NM| = \dots\dots\dots$$



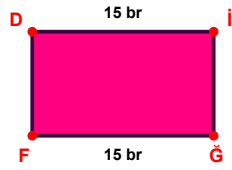
$$|LD| - |NB| = \dots\dots\dots$$



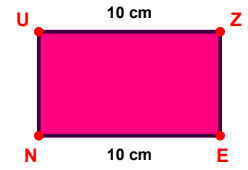
$$|Mi| - |RM| = \dots\dots\dots$$



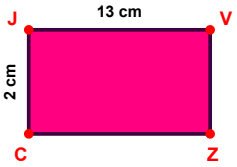
$$|TU| - |UF| = \dots\dots\dots$$



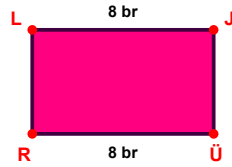
$$|iG| - |Di| = \dots\dots\dots$$



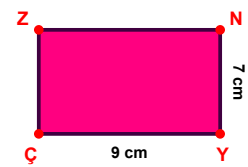
$$|UZ| - |EN| = \dots\dots\dots$$



$$|JV| - |CJ| = \dots\dots\dots$$



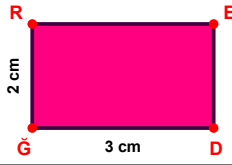
$$|ÜR| - |LJ| = \dots\dots\dots$$



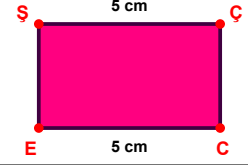
$$|YÇ| - |NY| = \dots\dots\dots$$



$$|FK| - |CV| = \dots\dots\dots$$



$$|DĞ| - |GR| = \dots\dots\dots$$



$$|ŞÇ| - |CE| = \dots\dots\dots$$

SÜREÇ ODAKLI DEĞERLENDİRME ÖLÇEĞİ

Doğru Sayısı: / 24

Öğretmen ilgili kutucuğu işaretler.

Geliştirilmeli (0-8)

İyi (9-14)

Çok İyi (15-20)

Mükemmel (21-24)

☐
☐
☐
☐

Hazırlayan:

Bu bölüme sınıfınızın ilgili kazanıma yönelik genel durumuna ilişkin gözlem ve izlenimlerinizi, öğrencilerinizin bu kazanımla ilgili öğrenme eksikliklerini ve bu eksikliklerin giderilmesi amacıyla yaptığınız/yapmayı planladığınız faaliyetleri not edebilirsiniz.

| No | Adı - Soyadı | Toplam Puan | Değerlendirme |
|----|--------------|-------------|---------------|
| 1 | | | |
| 2 | | | |
| 3 | | | |
| 4 | | | |
| 5 | | | |
| 6 | | | |
| 7 | | | |
| 8 | | | |
| 9 | | | |
| 10 | | | |
| 11 | | | |
| 12 | | | |
| 13 | | | |
| 14 | | | |
| 15 | | | |
| 16 | | | |
| 17 | | | |
| 18 | | | |
| 19 | | | |
| 20 | | | |
| 21 | | | |
| 22 | | | |
| 23 | | | |
| 24 | | | |
| 25 | | | |
| 26 | | | |
| 27 | | | |
| 28 | | | |
| 29 | | | |
| 30 | | | |
| 31 | | | |
| 32 | | | |
| 33 | | | |
| 34 | | | |
| 35 | | | |

Hazırlayan: