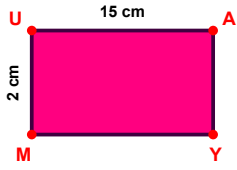
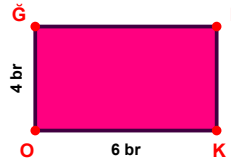


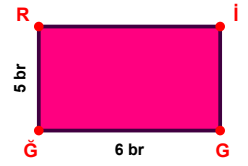
SORU: Aşağıdaki şekillerde verilen, kenar uzunlukları farklarını bulunuz.



$$|UA| - |MU| = \dots\dots$$



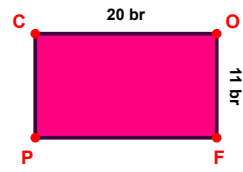
$$|KO| - |OĞ| = \dots\dots$$



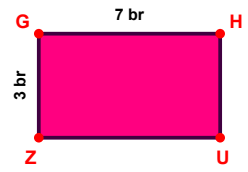
$$|GĞ| - |ĞR| = \dots\dots$$



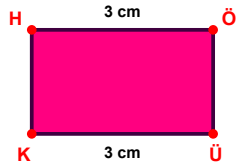
$$|PB| - |SĞ| = \dots\dots$$



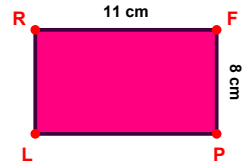
$$|CO| - |OF| = \dots\dots$$




$$|GH| - |ZG| = \dots\dots$$



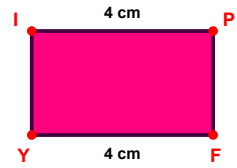
$$|ÜK| - |HÖ| = \dots\dots$$



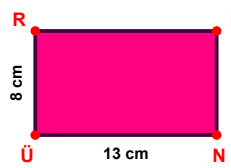
$$|RF| - |FP| = \dots\dots$$



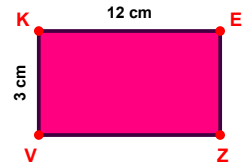
$$|Eİ| - |TG| = \dots\dots$$



$$|İP| - |FY| = \dots\dots$$

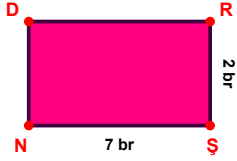


$$|NÜ| - |ÜR| = \dots\dots$$

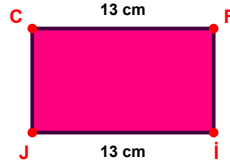


$$|KE| - |VK| = \dots\dots$$

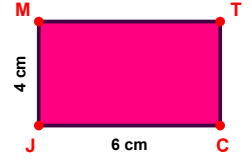
SORU: Aşağıdaki şekillerde verilen, kenar uzunlukları farklarını bulunuz.



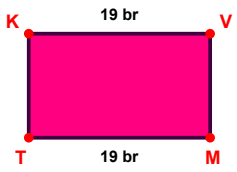
$$|SN| - |RS| = \dots\dots$$



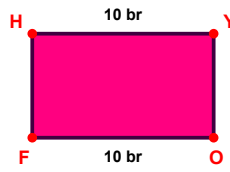
$$|CF| - |JI| = \dots\dots$$



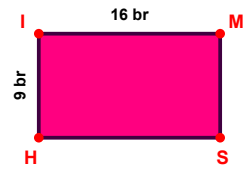
$$|CJ| - |JM| = \dots\dots$$



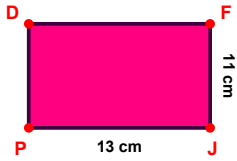
$$|KV| - |MT| = \dots\dots$$



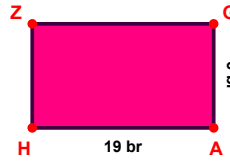
$$|HY| - |OF| = \dots\dots$$



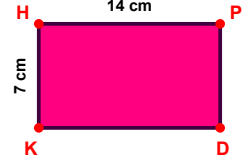
$$|IM| - |HI| = \dots\dots$$



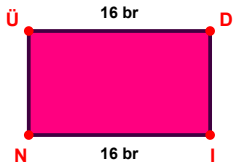
$$|JP| - |FJ| = \dots\dots$$



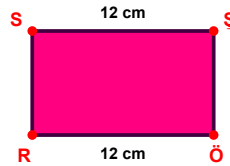
$$|AH| - |GA| = \dots\dots$$



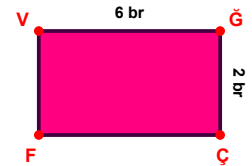
$$|HP| - |KH| = \dots\dots$$



$$|ÜD| - |IN| = \dots\dots$$



$$|SŞ| - |ÖR| = \dots\dots$$



$$|VĞ| - |ĞÇ| = \dots\dots$$

SÜREÇ ODAKLI DEĞERLENDİRME ÖLÇEĞİ

Doğru Sayısı: / 24

Öğretmen ilgili kutucuğu işaretler.

Geliştirilmeli (0-8)

İyi (9-14)

Çok İyi (15-20)

Mükemmel (21-24)

☐
☐
☐
☐

Hazırlayan:

Bu bölüme sınıfınızın ilgili kazanıma yönelik genel durumuna ilişkin gözlem ve izlenimlerinizi, öğrencilerinizin bu kazanımla ilgili öğrenme eksikliklerini ve bu eksikliklerin giderilmesi amacıyla yaptığınız/yapmayı planladığınız faaliyetleri not edebilirsiniz.

No	Adı - Soyadı	Toplam Puan	Değerlendirme
1			
2			
3			
4			
5			
6			
7			
8			
9			
10			
11			
12			
13			
14			
15			
16			
17			
18			
19			
20			
21			
22			
23			
24			
25			
26			
27			
28			
29			
30			
31			
32			
33			
34			
35			

Hazırlayan: