

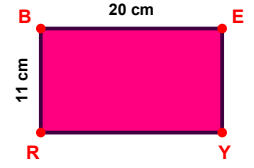
SORU: Aşağıdaki şekillerde verilen, kenar uzunlukları farklarını bulunuz.



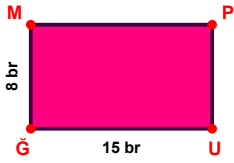
$$|MT| - |CH| = \dots\dots\dots$$



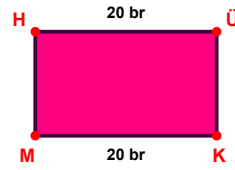
$$|BS| - |GV| = \dots\dots\dots$$



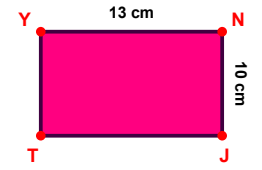
$$|BE| - |RB| = \dots\dots\dots$$



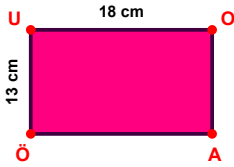
$$|UG| - |GM| = \dots\dots\dots$$



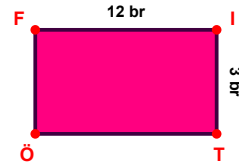
$$|HÜ| - |KM| = \dots\dots\dots$$



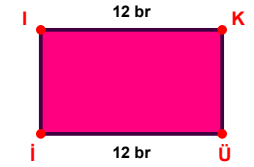
$$|YN| - |NJ| = \dots\dots\dots$$



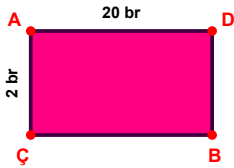
$$|UO| - |ÖU| = \dots\dots\dots$$



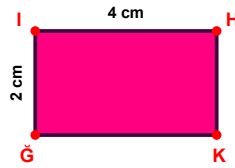
$$|FI| - |IT| = \dots\dots\dots$$



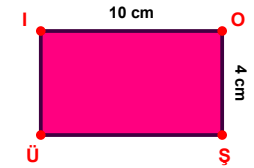
$$|IK| - |Üİ| = \dots\dots\dots$$



$$|AD| - |ÇA| = \dots\dots\dots$$

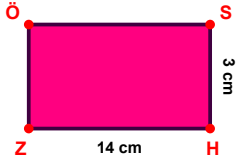


$$|IH| - |Ğİ| = \dots\dots\dots$$

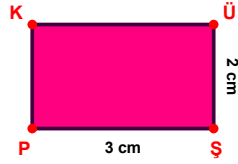


$$|IO| - |OŞ| = \dots\dots\dots$$

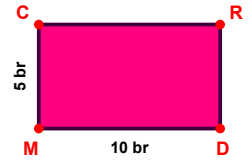
SORU: Aşağıdaki şekillerde verilen, kenar uzunlukları farklarını bulunuz.



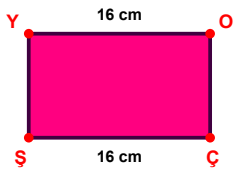
$$|HZ| - |SH| = \dots\dots\dots$$



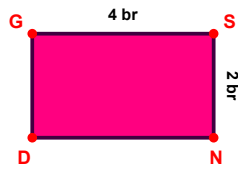
$$|ŞP| - |ÜŞ| = \dots\dots\dots$$



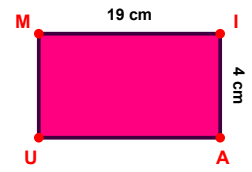
$$|DM| - |MC| = \dots\dots\dots$$



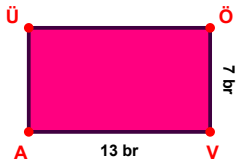
$$|ÇŞ| - |YO| = \dots\dots\dots$$



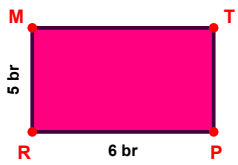
$$|GS| - |SN| = \dots\dots\dots$$



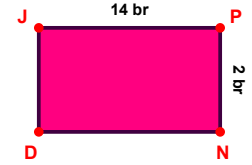
$$|MI| - |IA| = \dots\dots\dots$$



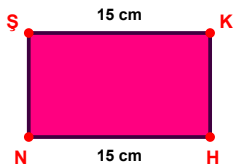
$$|VA| - |ÖV| = \dots\dots\dots$$



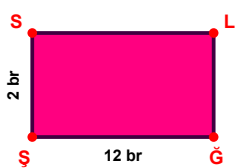
$$|PR| - |RM| = \dots\dots\dots$$




$$|JP| - |PN| = \dots\dots\dots$$



$$|HN| - |ŞK| = \dots\dots\dots$$



$$|ĞŞ| - |ŞS| = \dots\dots\dots$$



$$|ÖC| - |KL| = \dots\dots\dots$$

SÜREÇ ODAKLI DEĞERLENDİRME ÖLÇEĞİ

Doğru Sayısı: / 24

Öğretmen ilgili kutucuğu işaretler.

Geliştirilmeli (0-8)

İyi (9-14)

Çok İyi (15-20)

Mükemmel (21-24)

☐
☐
☐
☐

Hazırlayan:

Bu bölüme sınıfınızın ilgili kazanıma yönelik genel durumuna ilişkin gözlem ve izlenimlerinizi, öğrencilerinizin bu kazanımla ilgili öğrenme eksikliklerini ve bu eksikliklerin giderilmesi amacıyla yaptığınız/yapmayı planladığınız faaliyetleri not edebilirsiniz.

No	Adı - Soyadı	Toplam Puan	Değerlendirme
1			
2			
3			
4			
5			
6			
7			
8			
9			
10			
11			
12			
13			
14			
15			
16			
17			
18			
19			
20			
21			
22			
23			
24			
25			
26			
27			
28			
29			
30			
31			
32			
33			
34			
35			

Hazırlayan: