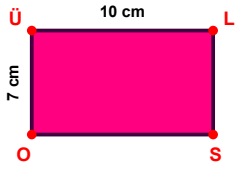
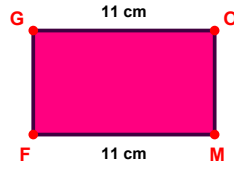


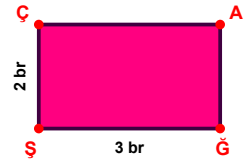
SORU: Aşağıdaki şekillerde verilen, kenar uzunlukları farklarını bulunuz.



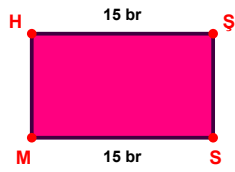
$$|ÜL| - |OÜ| = \dots\dots\dots$$




$$|GO| - |MF| = \dots\dots\dots$$



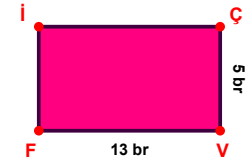
$$|ĞŞ| - |ŞÇ| = \dots\dots\dots$$



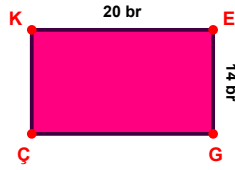
$$|SM| - |HS| = \dots\dots\dots$$



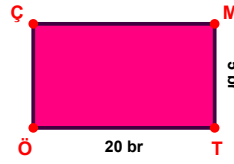
$$|UD| - |HR| = \dots\dots\dots$$



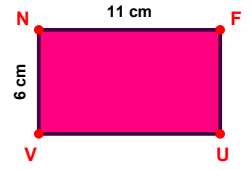
$$|VF| - |ÇV| = \dots\dots\dots$$



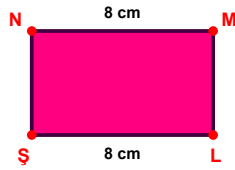
$$|KE| - |EG| = \dots\dots\dots$$



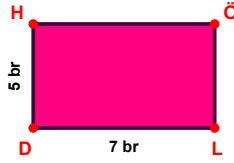
$$|TÖ| - |MT| = \dots\dots\dots$$



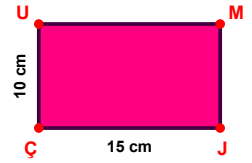
$$|NF| - |VN| = \dots\dots\dots$$



$$|NM| - |LŞ| = \dots\dots\dots$$

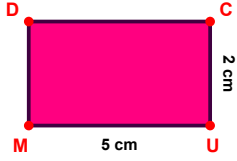


$$|LD| - |DH| = \dots\dots\dots$$

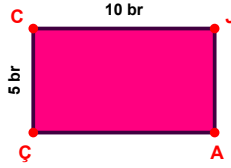


$$|JÇ| - |ÇU| = \dots\dots\dots$$

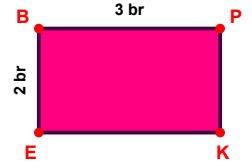
SORU: Aşağıdaki şekillerde verilen, kenar uzunlukları farklarını bulunuz.



$$|UM| - |CU| = \dots\dots\dots$$



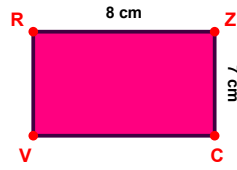
$$|CJ| - |ÇC| = \dots\dots\dots$$



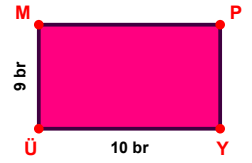
$$|BP| - |EB| = \dots\dots\dots$$



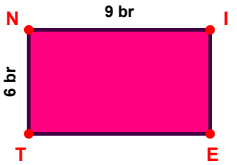
$$|İL| - |ĞJ| = \dots\dots\dots$$



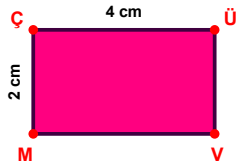
$$|RZ| - |ZC| = \dots\dots\dots$$



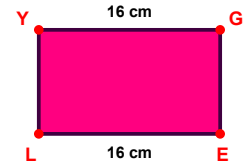
$$|YÜ| - |ÜM| = \dots\dots\dots$$



$$|NI| - |TN| = \dots\dots\dots$$



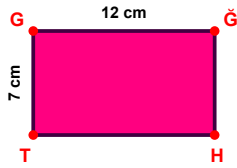
$$|ÇÜ| - |MÇ| = \dots\dots\dots$$



$$|YG| - |EL| = \dots\dots\dots$$



$$|YÇ| - |VE| = \dots\dots\dots$$



$$|ĞĞ| - |TG| = \dots\dots\dots$$



$$|DĞ| - |CG| = \dots\dots\dots$$

SÜREÇ ODAKLI DEĞERLENDİRME ÖLÇEĞİ

Doğru Sayısı: / 24

Öğretmen ilgili kutucuğu işaretler.

Geliştirilmeli (0-8)

İyi (9-14)

Çok İyi (15-20)

Mükemmel (21-24)

☐
☐
☐
☐

Hazırlayan:

Bu bölüme sınıfınızın ilgili kazanıma yönelik genel durumuna ilişkin gözlem ve izlenimlerinizi, öğrencilerinizin bu kazanımla ilgili öğrenme eksikliklerini ve bu eksikliklerin giderilmesi amacıyla yaptığınız/yapmayı planladığınız faaliyetleri not edebilirsiniz.

No	Adı - Soyadı	Toplam Puan	Değerlendirme
1			
2			
3			
4			
5			
6			
7			
8			
9			
10			
11			
12			
13			
14			
15			
16			
17			
18			
19			
20			
21			
22			
23			
24			
25			
26			
27			
28			
29			
30			
31			
32			
33			
34			
35			

Hazırlayan: