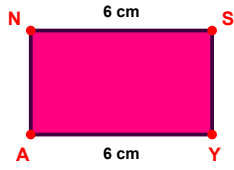
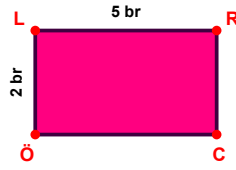


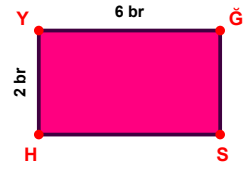
SORU: Aşağıdaki şekillerde verilen, kenar uzunlukları farklarını bulunuz.



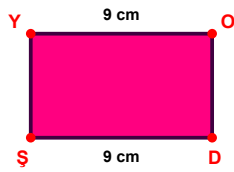
$$|NS| - |YA| = \dots\dots\dots$$



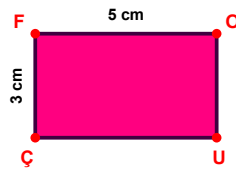
$$|LR| - |ÖL| = \dots\dots\dots$$



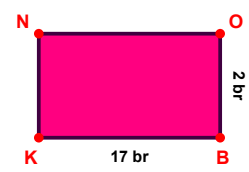
$$|YĞ| - |HY| = \dots\dots\dots$$



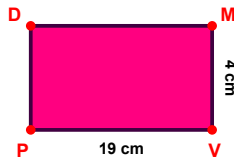
$$|YO| - |DŞ| = \dots\dots\dots$$




$$|FO| - |ÇF| = \dots\dots\dots$$



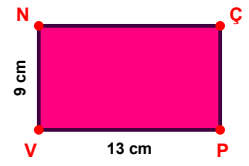
$$|BK| - |OB| = \dots\dots\dots$$



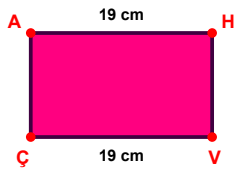
$$|VP| - |MV| = \dots\dots\dots$$



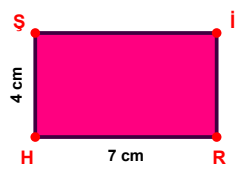
$$|TZ| - |FP| = \dots\dots\dots$$



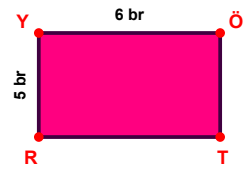
$$|PV| - |VN| = \dots\dots\dots$$



$$|AH| - |VÇ| = \dots\dots\dots$$

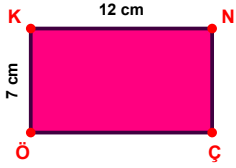


$$|RH| - |HŞ| = \dots\dots\dots$$

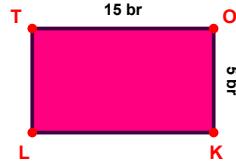


$$|YÖ| - |RY| = \dots\dots\dots$$

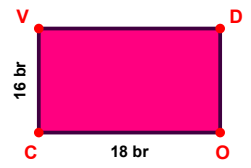
SORU: Aşağıdaki şekillerde verilen, kenar uzunlukları farklarını bulunuz.



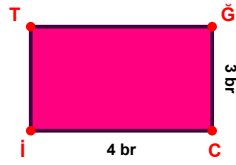
$$|KN| - |ÖK| = \dots\dots$$



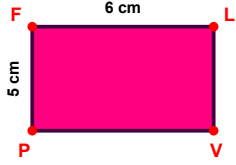
$$|TO| - |OK| = \dots\dots$$



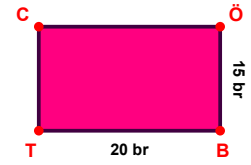
$$|OC| - |CV| = \dots\dots$$




$$|Cİ| - |ĞC| = \dots\dots$$



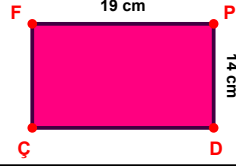
$$|FL| - |PF| = \dots\dots$$



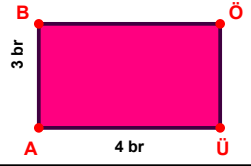
$$|BT| - |ÖB| = \dots\dots$$



$$|FÖ| - |RP| = \dots\dots$$



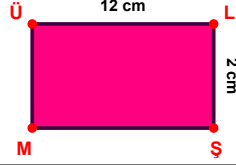
$$|FP| - |PD| = \dots\dots$$



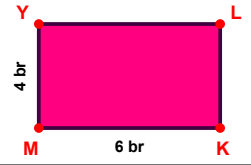
$$|ÜA| - |AB| = \dots\dots$$



$$|PT| - |VY| = \dots\dots$$



$$|ÜL| - |LS| = \dots\dots$$



$$|KM| - |MY| = \dots\dots$$

SÜREÇ ODAKLI DEĞERLENDİRME ÖLÇEĞİ

Doğru Sayısı: / 24

Öğretmen ilgili kutucuğu işaretler.

Geliştirilmeli (0-8)

İyi (9-14)

Çok İyi (15-20)

Mükemmel (21-24)

☐
☐
☐
☐

Hazırlayan:

Bu bölüme sınıfınızın ilgili kazanıma yönelik genel durumuna ilişkin gözlem ve izlenimlerinizi, öğrencilerinizin bu kazanımla ilgili öğrenme eksikliklerini ve bu eksikliklerin giderilmesi amacıyla yaptığınız/yapmayı planladığınız faaliyetleri not edebilirsiniz.

No	Adı - Soyadı	Toplam Puan	Değerlendirme
1			
2			
3			
4			
5			
6			
7			
8			
9			
10			
11			
12			
13			
14			
15			
16			
17			
18			
19			
20			
21			
22			
23			
24			
25			
26			
27			
28			
29			
30			
31			
32			
33			
34			
35			

Hazırlayan: