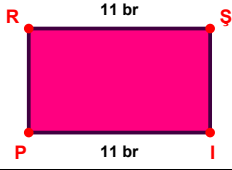
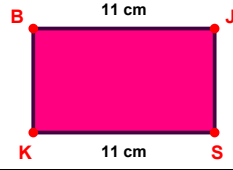


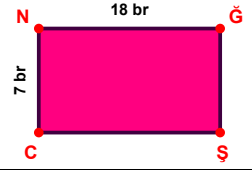
**SORU:** Aşağıdaki şekillerde verilen, kenar uzunlukları farklarını bulunuz.



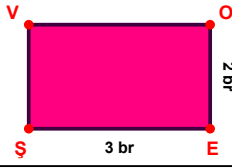
$$|IP| - |RS| = \dots\dots$$



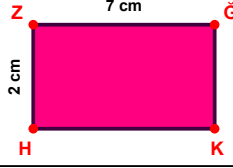
$$|SK| - |BJ| = \dots\dots$$



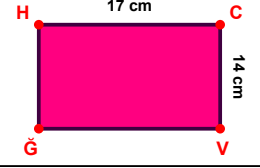
$$|NĞ| - |CN| = \dots\dots$$



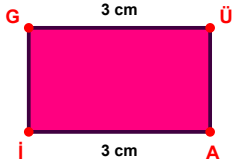
$$|EŞ| - |OE| = \dots\dots$$



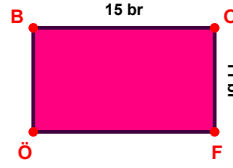
$$|ZĞ| - |HZ| = \dots\dots$$



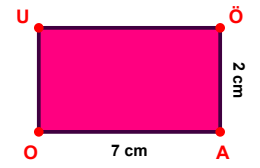
$$|HC| - |CV| = \dots\dots$$



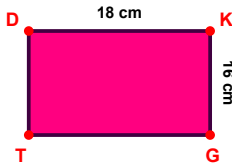
$$|AI| - |GÜ| = \dots\dots$$



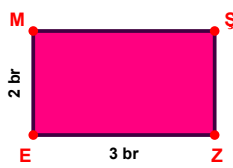
$$|BO| - |OF| = \dots\dots$$



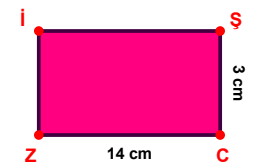
$$|AO| - |ÖA| = \dots\dots$$



$$|DK| - |KG| = \dots\dots$$

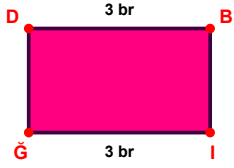


$$|ZE| - |EM| = \dots\dots$$

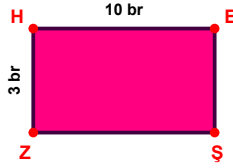


$$|CZ| - |ŞC| = \dots\dots$$

**SORU:** Aşağıdaki şekillerde verilen, kenar uzunlukları farklarını bulunuz.



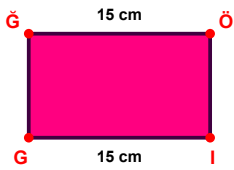
$$|DB| - |GI| = \dots\dots$$




$$|HE| - |ZH| = \dots\dots$$



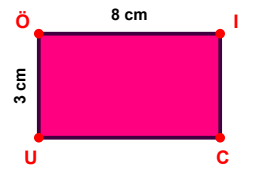
$$|OH| - |FE| = \dots\dots$$



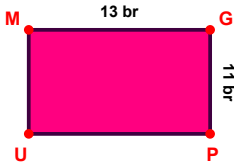
$$|GI| - |GO| = \dots\dots$$




$$|SI| - |CG| = \dots\dots$$



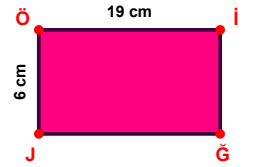
$$|OI| - |UC| = \dots\dots$$



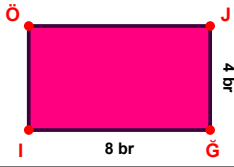
$$|MG| - |GP| = \dots\dots$$



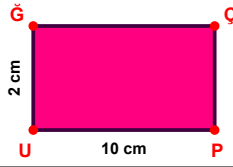
$$|RO| - |FN| = \dots\dots$$



$$|Oi| - |JO| = \dots\dots$$



$$|GI| - |JG| = \dots\dots$$



$$|PU| - |UG| = \dots\dots$$



$$|ÜS| - |TP| = \dots\dots$$

## SÜREÇ ODAKLI DEĞERLENDİRME ÖLÇEĞİ

Doğru Sayısı: ..... / 24

Öğretmen ilgili kutucuğu işaretler.

Geliştirilmeli (0-8)

İyi (9-14)

Çok İyi (15-20)

Mükemmel (21-24)

☐
☐
☐
☐

Hazırlayan: .....

Bu bölüme sınıfınızın ilgili kazanıma yönelik genel durumuna ilişkin gözlem ve izlenimlerinizi, öğrencilerinizin bu kazanımla ilgili öğrenme eksikliklerini ve bu eksikliklerin giderilmesi amacıyla yaptığınız/yapmayı planladığınız faaliyetleri not edebilirsiniz.

No	Adı - Soyadı	Toplam Puan	Değerlendirme
1			
2			
3			
4			
5			
6			
7			
8			
9			
10			
11			
12			
13			
14			
15			
16			
17			
18			
19			
20			
21			
22			
23			
24			
25			
26			
27			
28			
29			
30			
31			
32			
33			
34			
35			

Hazırlayan: ..... ..