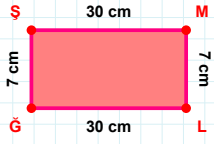
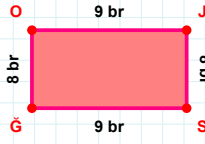


SORU: Aşağıdaki geometrik şekillerle ilgili soruları cevaplayınız.



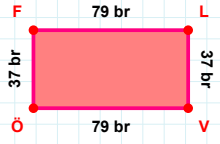
$$|SM| + |ML| = \dots$$

Cevap: cm



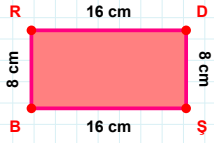
$$|JS| + |SG| = \dots$$

Cevap: br



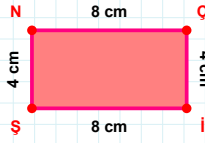
37 br hangi kenara aittir?

Kenar:



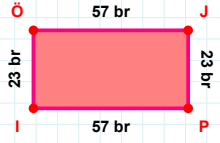
16 cm hangi kenara aittir?

Kenar:



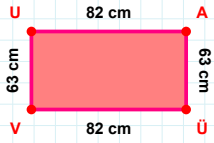
4 cm hangi kenara aittir?

Kenar:



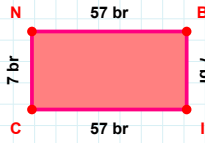
57 br hangi kenara aittir?

Kenar:



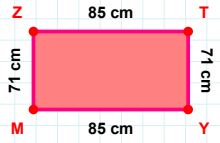
|UA| kaç cm'dir?

- ☐ 81 cm
☐ 82 cm
☐ 83 cm



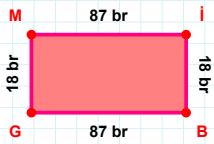
57 br hangi kenara aittir?

Kenar:



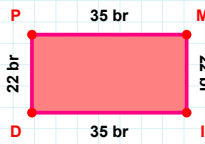
$$|MZ| + |ZT| = \dots$$

Cevap: cm



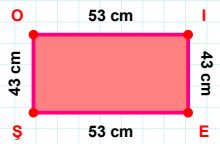
18 br hangi kenara aittir?

Kenar:



|ID| kaç br'dir?

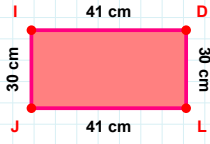
- ☐ 34 br
☐ 35 br
☐ 36 br



|OI| kaç cm'dir?

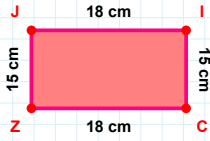
- ☐ 52 cm
☐ 53 cm
☐ 54 cm

SORU: Aşağıdaki geometrik şekillerle ilgili soruları cevaplayınız.

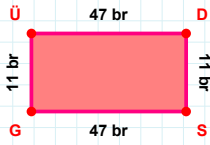


41 cm hangi kenara aittir?

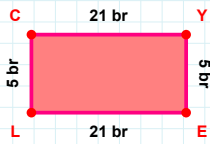
Kenar:

 $|ZJ| + |JI| = \dots$

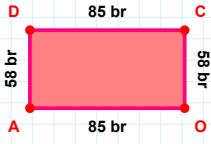
Cevap: cm

 $|DS| + |SG| = \dots$

Cevap: br

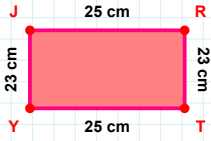
 $|EL| + |LC| = \dots$

Cevap: br



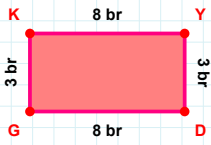
85 br hangi kenara aittir?

Kenar:



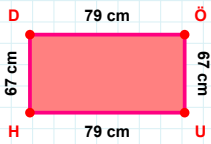
25 cm hangi kenara aittir?

Kenar:

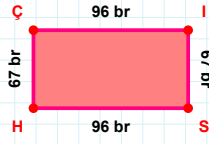


3 br hangi kenara aittir?

Kenar:

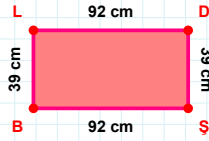
 $|ÖU|$ kaç cm'dir?

- ☐ 66 cm
☐ 67 cm
☐ 68 cm



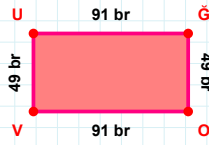
67 br hangi kenara aittir?

Kenar:



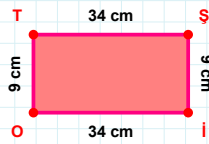
92 cm hangi kenara aittir?

Kenar:



49 br hangi kenara aittir?

- ☐ UĞ kenarı
☐ OV kenarı
☐ UO kenarı

 $|OT|$ kaç cm'dir?

- ☐ 8 cm
☐ 9 cm
☐ 10 cm

SÜREÇ ODAKLI DEĞERLENDİRME ÖLÇEĞİ

Doğru Sayısı: / 24

Öğretmen ilgili kutucuğu işaretler.

Geliştirilmeli (0-8)

İyi (9-14)

Çok İyi (15-20)

Mükemmel (21-24)

☐☐☐☐

Hazırlayan:

Bu bölüme sınıfınızın ilgili kazanıma yönelik genel durumuna ilişkin gözlem ve izlenimlerinizi, öğrencilerinizin bu kazanımla ilgili öğrenme eksikliklerini ve bu eksikliklerin giderilmesi amacıyla yaptığınız/yapmayı planladığınız faaliyetleri not edebilirsiniz.

No	Adı - Soyadı	Toplam Puan	Değerlendirme
1			
2			
3			
4			
5			
6			
7			
8			
9			
10			
11			
12			
13			
14			
15			
16			
17			
18			
19			
20			
21			
22			
23			
24			
25			
26			
27			
28			
29			
30			
31			
32			
33			
34			
35			

Hazırlayan: