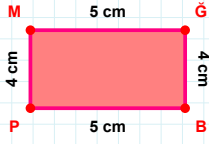
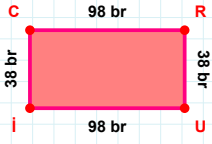


SORU: Aşağıdaki geometrik şekillerle ilgili soruları cevaplayınız.



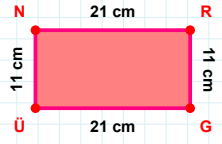
|MG| kaç cm'dir?

- ☐ 4 cm
☐ 5 cm
☐ 6 cm



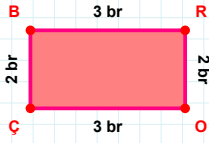
38 br hangi kenara aittir?

- ☐ CR kenarı
☐ İR kenarı
☐ İC kenarı



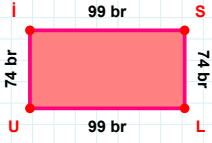
|RG| kaç cm'dir?

- ☐ 10 cm
☐ 11 cm
☐ 12 cm



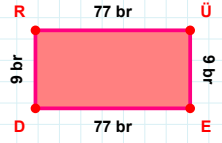
2 br hangi kenara aittir?

- ☐ ÇB kenarı
☐ OB kenarı
☐ BR kenarı



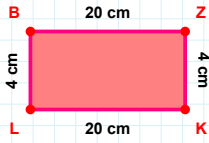
|İS| kaç br'dir?

- ☐ 98 br
☐ 99 br
☐ 100 br



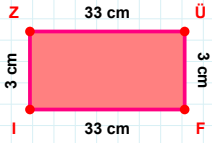
|RÜ| + |ED| =

Cevap: br



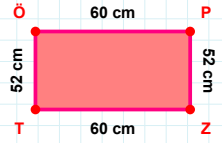
|LB| kaç cm'dir?

- ☐ 3 cm
☐ 4 cm
☐ 5 cm



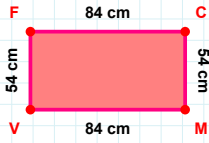
|IZ| kaç cm'dir?

- ☐ 2 cm
☐ 3 cm
☐ 4 cm



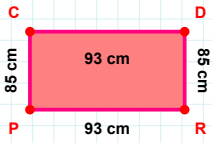
|PZ| + |TÖ| =

Cevap: cm



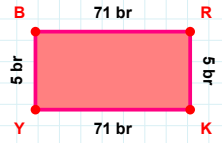
54 cm hangi kenara aittir?

- ☐ VF kenarı
☐ MV kenarı
☐ VC kenarı



85 cm hangi kenara aittir?

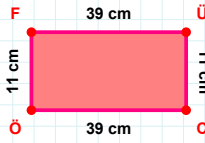
- ☐ CR kenarı
☐ PC kenarı
☐ DR kenarı



71 br hangi kenara aittir?

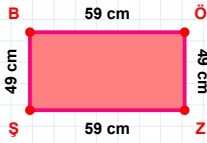
Kenar:

SORU: Aşağıdaki geometrik şekillerle ilgili soruları cevaplayınız.

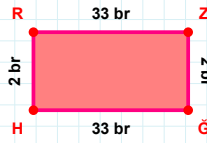


11 cm hangi kenara aittir?

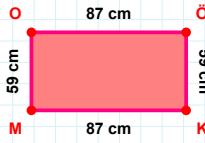
- ☐ ÜÖ kenarı
☐ ÜC kenarı
☐ FÜ kenarı

 $|ZŞ| + |ÖZ| = \dots$

Cevap: cm

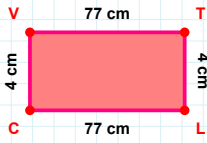
 $|RZ|$ kaç brdir?

- ☐ 32 br
☐ 33 br
☐ 34 br

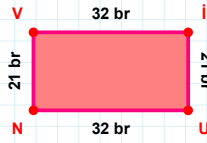


87 cm hangi kenara aittir?

Kenar:

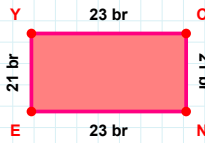
 $|LC|$ kaç cmdir?

- ☐ 76 cm
☐ 77 cm
☐ 78 cm



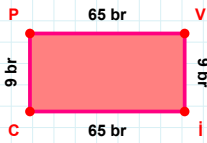
32 br hangi kenara aittir?

Kenar:

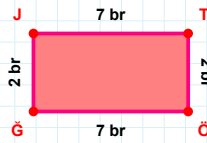


21 br hangi kenara aittir?

- ☐ NY kenarı
☐ CN kenarı
☐ YC kenarı

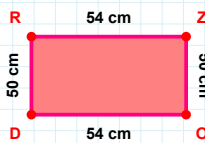
 $|CP|$ kaç brdir?

- ☐ 8 br
☐ 9 br
☐ 10 br



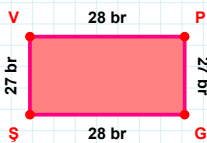
2 br hangi kenara aittir?

- ☐ ÖG kenarı
☐ GJ kenarı
☐ TG kenarı



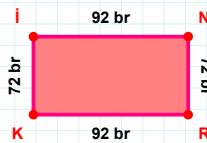
54 cm hangi kenara aittir?

Kenar:



27 br hangi kenara aittir?

- ☐ VG kenarı
☐ GŞ kenarı
☐ ŞV kenarı

 $|RK| + |İN| = \dots$

Cevap: br

SÜREÇ ODAKLI DEĞERLENDİRME ÖLÇEĞİ

Doğru Sayısı: / 24

Öğretmen ilgili kutucuğu işaretler.

Geliştirilmeli (0-8)

İyi (9-14)

Çok İyi (15-20)

Mükemmel (21-24)

☐☐☐☐

Hazırlayan:

Bu bölüme sınıfınızın ilgili kazanıma yönelik genel durumuna ilişkin gözlem ve izlenimlerinizi, öğrencilerinizin bu kazanımla ilgili öğrenme eksikliklerini ve bu eksikliklerin giderilmesi amacıyla yaptığınız/yapmayı planladığınız faaliyetleri not edebilirsiniz.

No	Adı - Soyadı	Toplam Puan	Değerlendirme
1			
2			
3			
4			
5			
6			
7			
8			
9			
10			
11			
12			
13			
14			
15			
16			
17			
18			
19			
20			
21			
22			
23			
24			
25			
26			
27			
28			
29			
30			
31			
32			
33			
34			
35			

Hazırlayan: