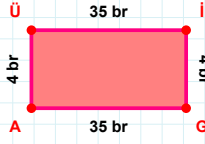
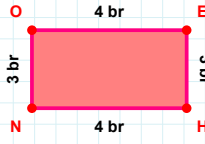


SORU: Aşağıdaki geometrik şekillerle ilgili soruları cevaplayınız.



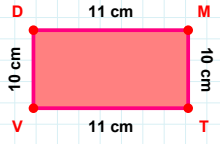
|Üİ| kaç brdir?

- ☐ 34 br
☐ 35 br
☐ 36 br



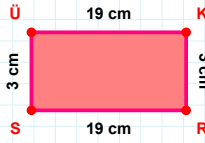
3 br hangi kenara aittir?

- ☐ HN kenarı
☐ OE kenarı
☐ HO kenarı



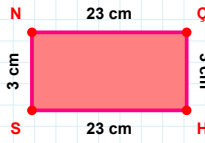
10 cm hangi kenara aittir?

- ☐ VM kenarı
☐ TV kenarı
☐ MT kenarı



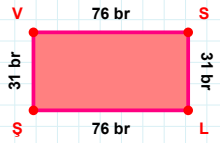
3 cm hangi kenara aittir?

- ☐ KS kenarı
☐ ÜK kenarı
☐ RS kenarı



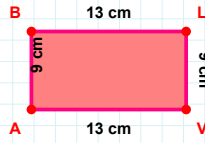
|SN| + |ÇH| =

Cevap: cm



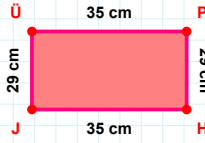
|LŞ| kaç brdir?

- ☐ 75 br
☐ 76 br
☐ 77 br



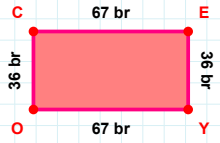
|AB| + |LV| =

Cevap: cm



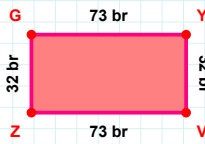
|PH| kaç cmdir?

- ☐ 28 cm
☐ 29 cm
☐ 30 cm



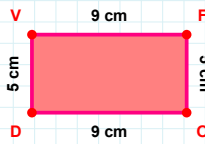
67 br hangi kenara aittir?

Kenar:



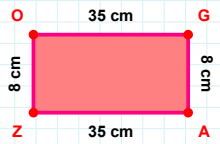
|GY| + |VZ| =

Cevap: br



9 cm hangi kenara aittir?

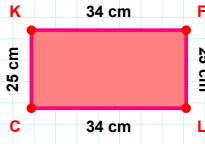
Kenar:



8 cm hangi kenara aittir?

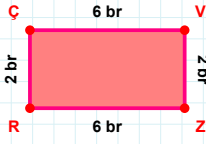
- ☐ GZ kenarı
☐ AZ kenarı
☐ GA kenarı

SORU: Aşağıdaki geometrik şekillerle ilgili soruları cevaplayınız.



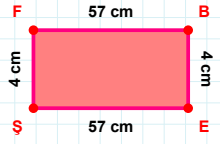
$|KF| + |FL| = \dots$

Cevap: cm



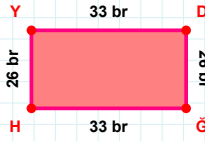
2 br hangi kenara aittir?

Kenar:



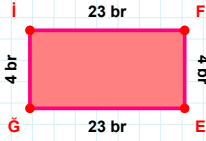
4 cm hangi kenara aittir?

Kenar:



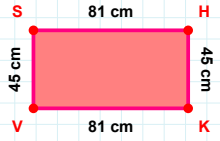
33 br hangi kenara aittir?

Kenar:



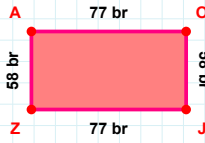
$|İĞ| + |EĞ| = \dots$

Cevap: br



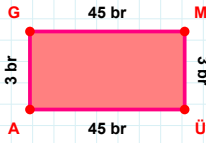
$|VS| + |SH| = \dots$

Cevap: cm



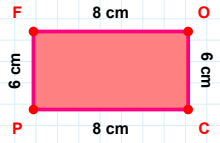
58 br hangi kenara aittir?

- ☐ JZ kenarı
☐ AO kenarı
☐ JA kenarı



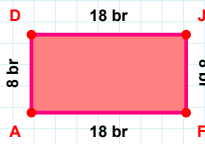
3 br hangi kenara aittir?

- ☐ MÜ kenarı
☐ ÜG kenarı
☐ GM kenarı



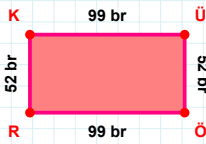
$|CP| + |OC| = \dots$

Cevap: cm



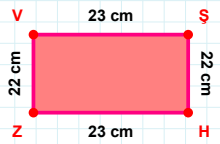
$|AD| + |JF| = \dots$

Cevap: br



$|ÖR| + |ÜÖ| = \dots$

Cevap: br



|VS| kaç cm'dir?

- ☐ 22 cm
☐ 23 cm
☐ 24 cm

SÜREÇ ODAKLI DEĞERLENDİRME ÖLÇEĞİ

Doğru Sayısı: / 24

Öğretmen ilgili kutucuğu işaretler.

Geliştirilmeli (0-8)

İyi (9-14)

Çok İyi (15-20)

Mükemmel (21-24)

☐
☐
☐
☐

Hazırlayan:

Bu bölüme sınıfınızın ilgili kazanıma yönelik genel durumuna ilişkin gözlem ve izlenimlerinizi, öğrencilerinizin bu kazanımla ilgili öğrenme eksikliklerini ve bu eksikliklerin giderilmesi amacıyla yaptığınız/yapmayı planladığınız faaliyetleri not edebilirsiniz.

No	Adı - Soyadı	Toplam Puan	Değerlendirme
1			
2			
3			
4			
5			
6			
7			
8			
9			
10			
11			
12			
13			
14			
15			
16			
17			
18			
19			
20			
21			
22			
23			
24			
25			
26			
27			
28			
29			
30			
31			
32			
33			
34			
35			

Hazırlayan: