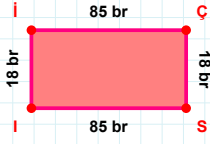
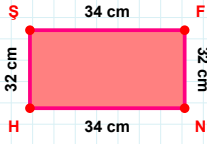


SORU: Aşağıdaki geometrik şekillerle ilgili soruları cevaplayınız.



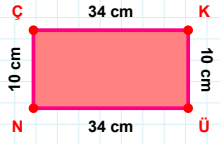
|ÇS| kaç brdir?

- ☐ 17 br
☐ 18 br
☐ 19 br



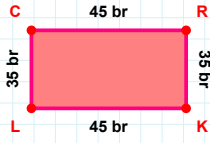
32 cm hangi kenara aittir?

- ☐ HF kenarı
☐ HŞ kenarı
☐ FN kenarı



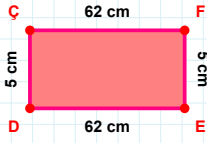
|KÜ| kaç cmdir?

- ☐ 9 cm
☐ 10 cm
☐ 11 cm



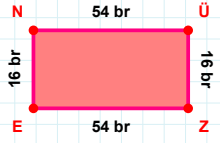
45 br hangi kenara aittir?

Kenar:



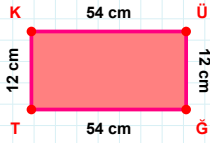
5 cm hangi kenara aittir?

- ☐ FD kenarı
☐ ED kenarı
☐ DÇ kenarı



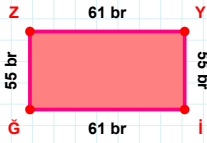
16 br hangi kenara aittir?

- ☐ EÜ kenarı
☐ ÜZ kenarı
☐ EN kenarı



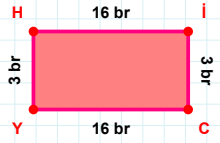
54 cm hangi kenara aittir?

Kenar:



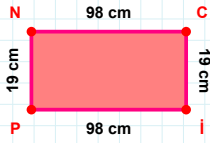
55 br hangi kenara aittir?

Kenar:



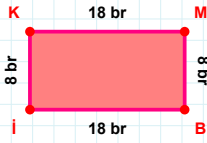
3 br hangi kenara aittir?

Kenar:



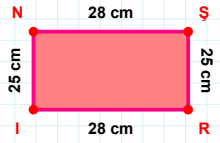
19 cm hangi kenara aittir?

- ☐ Nİ kenarı
☐ İP kenarı
☐ NC kenarı



8 br hangi kenara aittir?

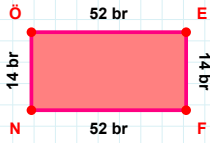
- ☐ MB kenarı
☐ Bİ kenarı
☐ Mİ kenarı



28 cm hangi kenara aittir?

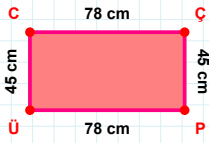
Kenar:

SORU: Aşağıdaki geometrik şekillerle ilgili soruları cevaplayınız.



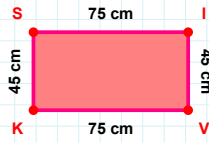
$$|ÖE| + |EF| = \dots$$

Cevap: br



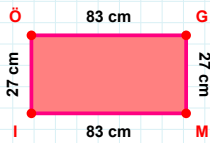
78 cm hangi kenara aittir?

Kenar:



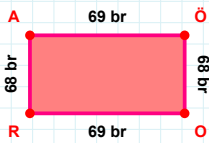
$$|VK| + |IV| = \dots$$

Cevap: cm



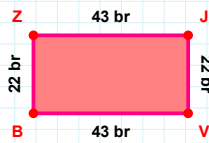
27 cm hangi kenara aittir?

- ☐ GM kenarı
☐ GI kenarı
☐ ÖG kenarı



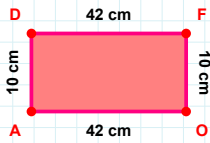
68 br hangi kenara aittir?

- ☐ AÖ kenarı
☐ OR kenarı
☐ RÖ kenarı



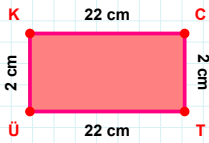
22 br hangi kenara aittir?

- ☐ VB kenarı
☐ JV kenarı
☐ ZV kenarı



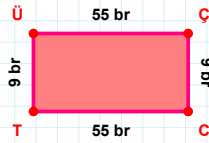
$$|OA| + |AD| = \dots$$

Cevap: cm



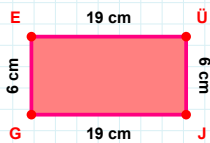
$$|ÜK| + |TÜ| = \dots$$

Cevap: cm



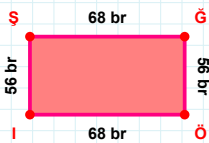
9 br hangi kenara aittir?

- ☐ ÜÇ kenarı
☐ CT kenarı
☐ CÜ kenarı



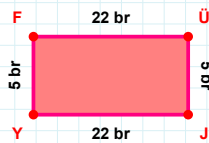
$$|GE| + |EÜ| = \dots$$

Cevap: cm



68 br hangi kenara aittir?

Kenar:



5 br hangi kenara aittir?

- ☐ YF kenarı
☐ ÜJ kenarı
☐ FJ kenarı

SÜREÇ ODAKLI DEĞERLENDİRME ÖLÇEĞİ

Doğru Sayısı: / 24

Öğretmen ilgili kutucuğu işaretler.

Geliştirilmeli (0-8)

İyi (9-14)

Çok İyi (15-20)

Mükemmel (21-24)

☐
☐
☐
☐

Hazırlayan:

Bu bölüme sınıfınızın ilgili kazanıma yönelik genel durumuna ilişkin gözlem ve izlenimlerinizi, öğrencilerinizin bu kazanımla ilgili öğrenme eksikliklerini ve bu eksikliklerin giderilmesi amacıyla yaptığınız/yapmayı planladığınız faaliyetleri not edebilirsiniz.

No	Adı - Soyadı	Toplam Puan	Değerlendirme
1			
2			
3			
4			
5			
6			
7			
8			
9			
10			
11			
12			
13			
14			
15			
16			
17			
18			
19			
20			
21			
22			
23			
24			
25			
26			
27			
28			
29			
30			
31			
32			
33			
34			
35			

Hazırlayan: