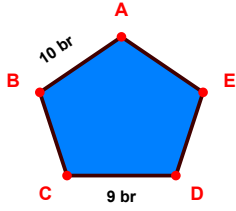
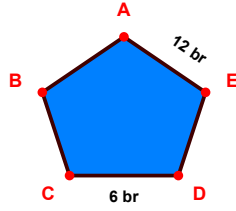


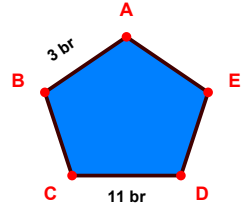
SORU: Aşağıdaki şekillerde verilen kenar uzunluklarının toplamını bulunuz.



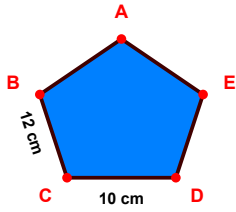
$$|CD| + |AB| = \dots$$



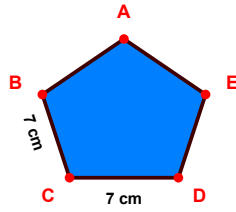
$$|CD| + |EA| = \dots$$



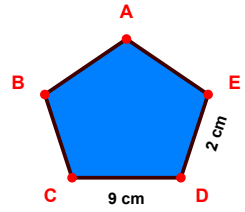
$$|CD| + |AB| = \dots$$



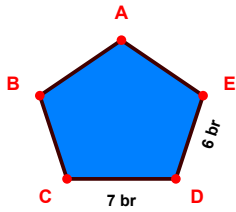
$$|CD| + |BC| = \dots$$



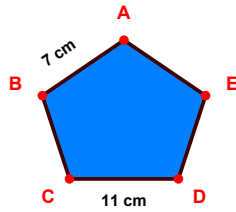
$$|CD| + |BC| = \dots$$



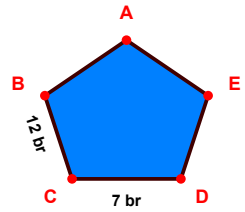
$$|CD| + |DE| = \dots$$



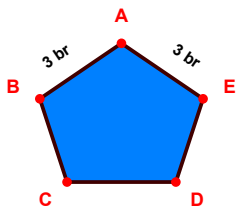
$$|DE| + |CD| = \dots$$



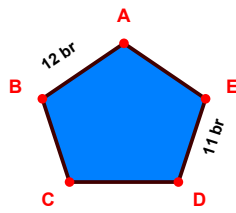
$$|CD| + |AB| = \dots$$



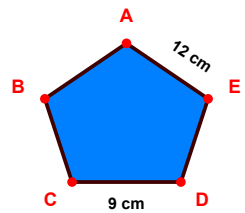
$$|BC| + |CD| = \dots$$



$$|EA| + |AB| = \dots$$

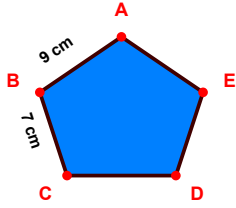


$$|DE| + |AB| = \dots$$

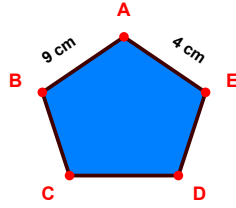


$$|EA| + |CD| = \dots$$

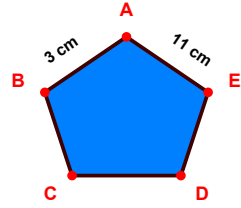
SORU: Aşağıdaki şekillerde verilen kenar uzunluklarının toplamını bulunuz.



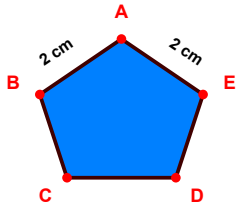
$$|BC| + |AB| = \dots$$



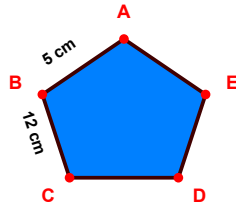
$$|EA| + |AB| = \dots$$



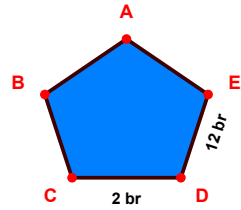
$$|EA| + |AB| = \dots$$



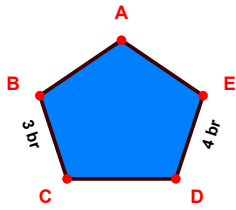
$$|AB| + |EA| = \dots$$



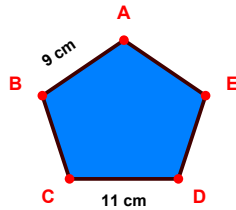
$$|BC| + |AB| = \dots$$



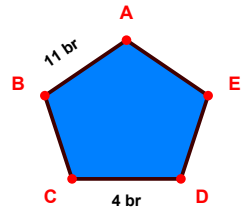
$$|DE| + |CD| = \dots$$



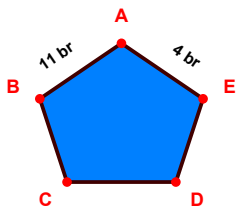
$$|BC| + |DE| = \dots$$



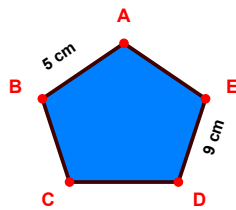
$$|CD| + |AB| = \dots$$



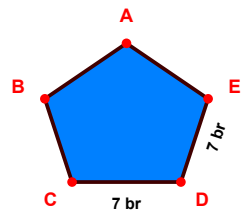
$$|AB| + |CD| = \dots$$



$$|EA| + |AB| = \dots$$



$$|AB| + |DE| = \dots$$



$$|DE| + |CD| = \dots$$

SÜREÇ ODAKLI DEĞERLENDİRME ÖLÇEĞİ

Doğru Sayısı: / 24

Öğretmen ilgili kutucuğu işaretler.

Geliştirilmeli (0-8)

İyi (9-14)

Çok İyi (15-20)

Mükemmel (21-24)

☐
☐
☐
☐

Hazırlayan: Şeyhmus Öğretmen

Bu bölüme sınıfınızın ilgili kazanıma yönelik genel durumuna ilişkin gözlem ve izlenimlerinizi, öğrencilerinizin bu kazanımla ilgili öğrenme eksikliklerini ve bu eksikliklerin giderilmesi amacıyla yaptığınız/yapmayı planladığınız faaliyetleri not edebilirsiniz.

| No | Adı - Soyadı | Toplam Puan | Değerlendirme |
|----|--------------|-------------|---------------|
| 1 | | | |
| 2 | | | |
| 3 | | | |
| 4 | | | |
| 5 | | | |
| 6 | | | |
| 7 | | | |
| 8 | | | |
| 9 | | | |
| 10 | | | |
| 11 | | | |
| 12 | | | |
| 13 | | | |
| 14 | | | |
| 15 | | | |
| 16 | | | |
| 17 | | | |
| 18 | | | |
| 19 | | | |
| 20 | | | |
| 21 | | | |
| 22 | | | |
| 23 | | | |
| 24 | | | |
| 25 | | | |
| 26 | | | |
| 27 | | | |
| 28 | | | |
| 29 | | | |
| 30 | | | |
| 31 | | | |
| 32 | | | |
| 33 | | | |
| 34 | | | |
| 35 | | | |

Hazırlayan: Şeyhmus Öğretmen