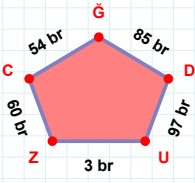
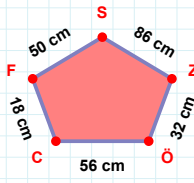


**SORU:** Aşağıdaki geometrik şekillerle ilgili soruları cevaplayınız.

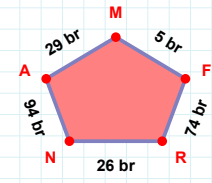
54 br hangi kenara aittir?

Kenar: .....



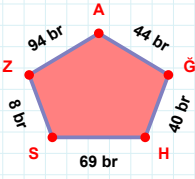
86 cm hangi kenara aittir?

- ☐ ÖS kenarı  
☐ SF kenarı  
☐ FC kenarı



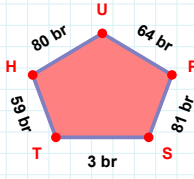
|RF| kaç brdir?

- ☐ 73 br  
☐ 74 br  
☐ 75 br



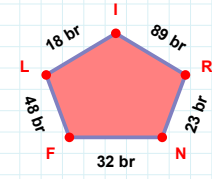
|SH| kaç brdir?

- ☐ 68 br  
☐ 69 br  
☐ 70 br



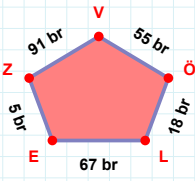
|PU| kaç brdir?

- ☐ 63 br  
☐ 64 br  
☐ 65 br



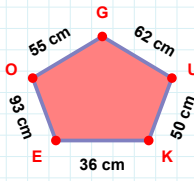
89 br hangi kenara aittir?

- ☐ FN kenarı  
☐ NL kenarı  
☐ IL kenarı



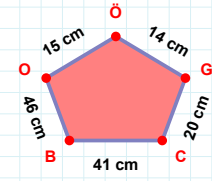
|ZE| kaç brdir?

- ☐ 4 br  
☐ 5 br  
☐ 6 br



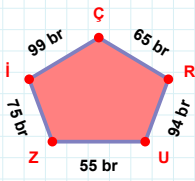
62 cm hangi kenara aittir?

- ☐ KU kenarı  
☐ GO kenarı  
☐ OK kenarı



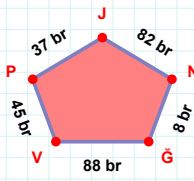
14 cm hangi kenara aittir?

- ☐ OG kenarı  
☐ CG kenarı  
☐ BC kenarı



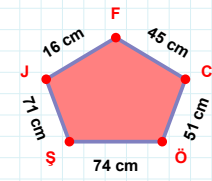
|RÇ| + |ZU| = ....

Cevap: ..... br



|JP| kaç brdir?

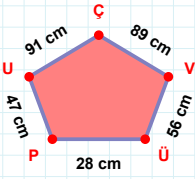
- ☐ 36 br  
☐ 37 br  
☐ 38 br



45 cm hangi kenara aittir?

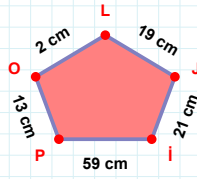
- ☐ JŞ kenarı  
☐ ÖJ kenarı  
☐ ÖC kenarı

**SORU:** Aşağıdaki geometrik şekillerle ilgili soruları cevaplayınız.



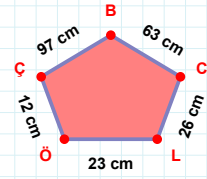
89 cm hangi kenara aittir?

- ☐ ÜV kenarı  
☐ PV kenarı  
☐ ÇU kenarı



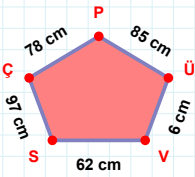
19 cm hangi kenara aittir?

- ☐ OP kenarı  
☐ Pİ kenarı  
☐ İL kenarı



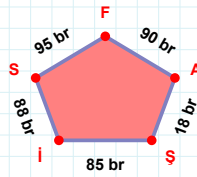
$|CB| + |ÇÖ| = \dots$

Cevap: ..... cm



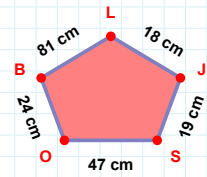
85 cm hangi kenara aittir?

- ☐ VÜ kenarı  
☐ PÇ kenarı  
☐ SP kenarı



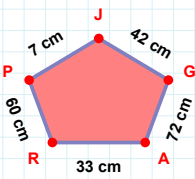
90 br hangi kenara aittir?

- ☐ FS kenarı  
☐ AF kenarı  
☐ ŞS kenarı



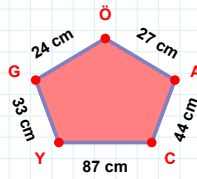
81 cm hangi kenara aittir?

Kenar: .....



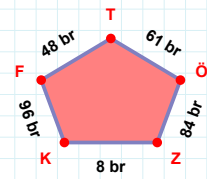
$|RA| + |PR| = \dots$

Cevap: ..... cm



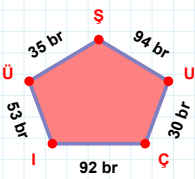
$|GY| + |YC| = \dots$

Cevap: ..... cm



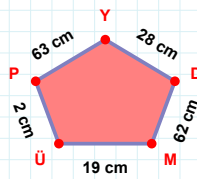
96 br hangi kenara aittir?

Kenar: .....



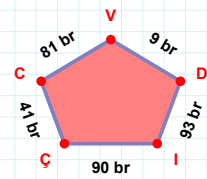
$|ŞÜ|$  kaç brdir?

- ☐ 34 br  
☐ 35 br  
☐ 36 br



28 cm hangi kenara aittir?

Kenar: .....



41 br hangi kenara aittir?

Kenar: .....

### SÜREÇ ODAKLI DEĞERLENDİRME ÖLÇEĞİ

Doğru Sayısı: ..... / 24

Öğretmen ilgili kutucuğu işaretler.

Geliştirilmeli (0-8)

İyi (9-14)

Çok İyi (15-20)

Mükemmel (21-24)

☐
☐
☐
☐

Hazırlayan: .....

**Bu bölüme sınıfınızın ilgili kazanıma yönelik genel durumuna ilişkin gözlem ve izlenimlerinizi, öğrencilerinizin bu kazanımla ilgili öğrenme eksikliklerini ve bu eksikliklerin giderilmesi amacıyla yaptığınız/yapmayı planladığınız faaliyetleri not edebilirsiniz.**

No	Adı - Soyadı	Toplam Puan	Değerlendirme
1			
2			
3			
4			
5			
6			
7			
8			
9			
10			
11			
12			
13			
14			
15			
16			
17			
18			
19			
20			
21			
22			
23			
24			
25			
26			
27			
28			
29			
30			
31			
32			
33			
34			
35			

Hazırlayan: ..... ..