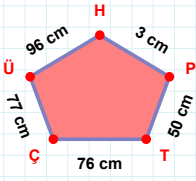
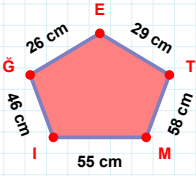


SORU: Aşağıdaki geometrik şekillerle ilgili soruları cevaplayınız.

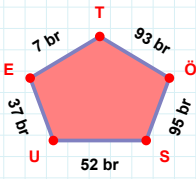
3 cm hangi kenara aittir?

Kenar:



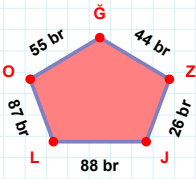
29 cm hangi kenara aittir?

- ☐ EI kenarı
☐ TE kenarı
☐ IM kenarı

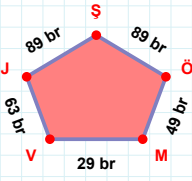


37 br hangi kenara aittir?

Kenar:

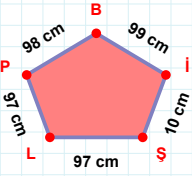
 $|OL| + |JZ| = \dots$

Cevap: br

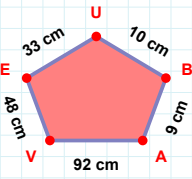


63 br hangi kenara aittir?

Kenar:

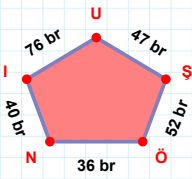
 $|LŞ| + |İB| = \dots$

Cevap: cm



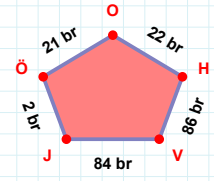
10 cm hangi kenara aittir?

Kenar:



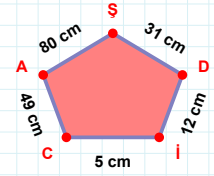
47 br hangi kenara aittir?

- ☐ ŞU kenarı
☐ İN kenarı
☐ ŞN kenarı



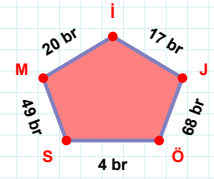
21 br hangi kenara aittir?

Kenar:

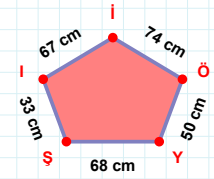


31 cm hangi kenara aittir?

- ☐ İA kenarı
☐ AC kenarı
☐ ŞA kenarı

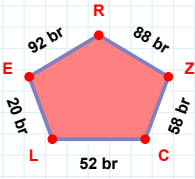
 $|İM| + |Jİ| = \dots$

Cevap: br

 $|Öİ|$ kaç cm'dir?

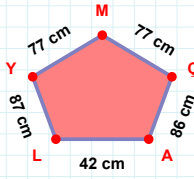
- ☐ 73 cm
☐ 74 cm
☐ 75 cm

SORU: Aşağıdaki geometrik şekillerle ilgili soruları cevaplayınız.



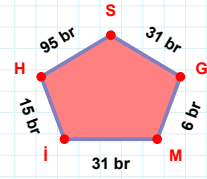
88 br hangi kenara aittir?

- ☐ RE kenarı
☐ LR kenarı
☐ EL kenarı



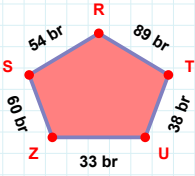
|ÇM| kaç cm'dir?

- ☐ 76 cm
☐ 77 cm
☐ 78 cm



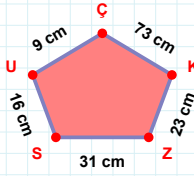
31 br hangi kenara aittir?

Kenar:



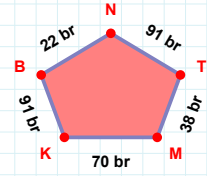
|ZU| kaç br'dir?

- ☐ 32 br
☐ 33 br
☐ 34 br



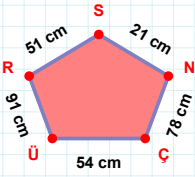
|US| kaç cm'dir?

- ☐ 15 cm
☐ 16 cm
☐ 17 cm



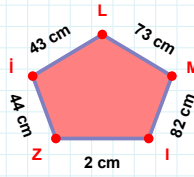
91 br hangi kenara aittir?

- ☐ KM kenarı
☐ KN kenarı
☐ MT kenarı



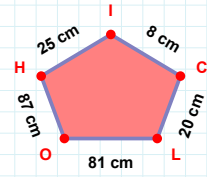
|ÇN| kaç cm'dir?

- ☐ 77 cm
☐ 78 cm
☐ 79 cm



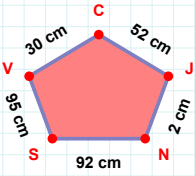
|ZI| kaç cm'dir?

- ☐ 1 cm
☐ 2 cm
☐ 3 cm



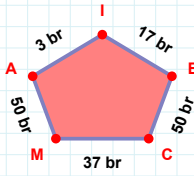
|LC| + |HO| =

Cevap: cm



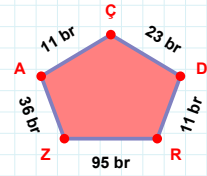
52 cm hangi kenara aittir?

- ☐ VS kenarı
☐ CN kenarı
☐ JC kenarı



37 br hangi kenara aittir?

Kenar:



23 br hangi kenara aittir?

- ☐ ZR kenarı
☐ ZÇ kenarı
☐ ÇA kenarı

SÜREÇ ODAKLI DEĞERLENDİRME ÖLÇEĞİ

Doğru Sayısı: / 24

Öğretmen ilgili kutucuğu işaretler.

Geliştirilmeli (0-8)

İyi (9-14)

Çok İyi (15-20)

Mükemmel (21-24)

☐
☐
☐
☐

Hazırlayan:

Bu bölüme sınıfınızın ilgili kazanıma yönelik genel durumuna ilişkin gözlem ve izlenimlerinizi, öğrencilerinizin bu kazanımla ilgili öğrenme eksikliklerini ve bu eksikliklerin giderilmesi amacıyla yaptığınız/yapmayı planladığınız faaliyetleri not edebilirsiniz.

No	Adı - Soyadı	Toplam Puan	Değerlendirme
1			
2			
3			
4			
5			
6			
7			
8			
9			
10			
11			
12			
13			
14			
15			
16			
17			
18			
19			
20			
21			
22			
23			
24			
25			
26			
27			
28			
29			
30			
31			
32			
33			
34			
35			

Hazırlayan: