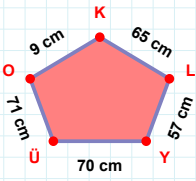
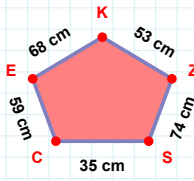
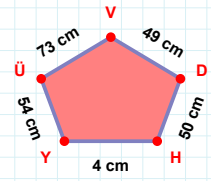


SORU: Aşağıdaki geometrik şekillerle ilgili soruları cevaplayınız.**|OÜ| kaç cmdir?**

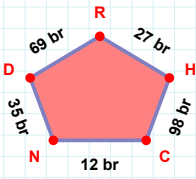
- ☐ 70 cm
☐ 71 cm
☐ 72 cm

**53 cm hangi kenara aittir?**

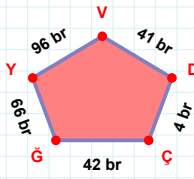
Kenar:

**|ÜY| + |DV| =**

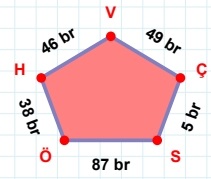
Cevap: cm

**|NC| kaç brdir?**

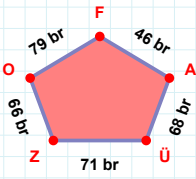
- ☐ 11 br
☐ 12 br
☐ 13 br

**96 br hangi kenara aittir?**

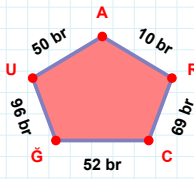
Kenar:

**|ÖS| kaç brdir?**

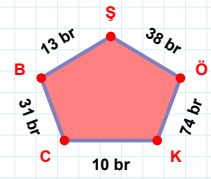
- ☐ 86 br
☐ 87 br
☐ 88 br

**|OZ| + |ÜA| =**

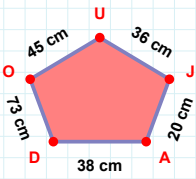
Cevap: br

**|RA| kaç brdir?**

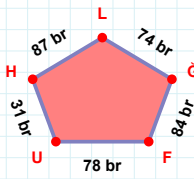
- ☐ 9 br
☐ 10 br
☐ 11 br

**38 br hangi kenara aittir?**

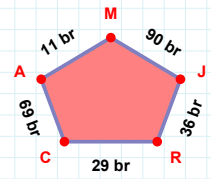
- ☐ ÖS kenarı
☐ KB kenarı
☐ BC kenarı

**38 cm hangi kenara aittir?**

Kenar:

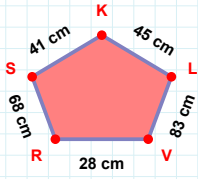
**78 br hangi kenara aittir?**

Kenar:

**11 br hangi kenara aittir?**

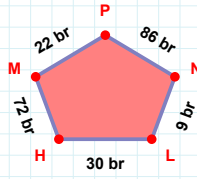
Kenar:

SORU: Aşağıdaki geometrik şekillerle ilgili soruları cevaplayınız.



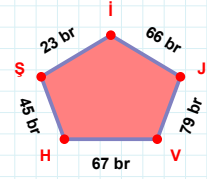
|SR| + |RV| =

Cevap: cm



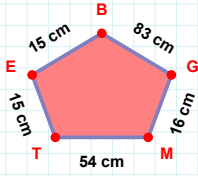
86 br hangi kenara aittir?

- ☐ HP kenarı
☐ PM kenarı
☐ HL kenarı



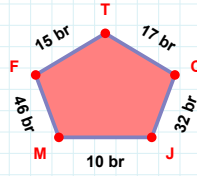
|İS| kaç brdir?

- ☐ 22 br
☐ 23 br
☐ 24 br



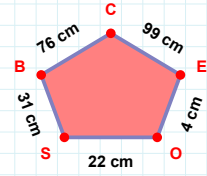
|GB| + |TM| =

Cevap: cm



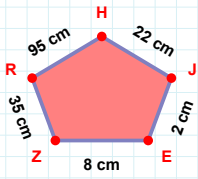
17 br hangi kenara aittir?

- ☐ FM kenarı
☐ JF kenarı
☐ CT kenarı



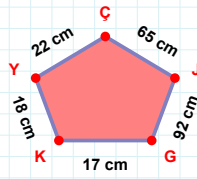
99 cm hangi kenara aittir?

- ☐ EC kenarı
☐ SO kenarı
☐ OB kenarı



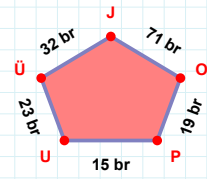
22 cm hangi kenara aittir?

- ☐ RZ kenarı
☐ EJ kenarı
☐ RJ kenarı



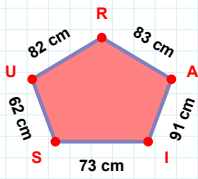
|GJ| kaç cm'dir?

- ☐ 91 cm
☐ 92 cm
☐ 93 cm



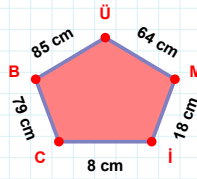
71 br hangi kenara aittir?

- ☐ OJ kenarı
☐ ÜU kenarı
☐ OU kenarı



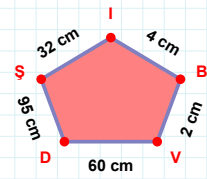
91 cm hangi kenara aittir?

Kenar:



64 cm hangi kenara aittir?

- ☐ CM kenarı
☐ BC kenarı
☐ Cİ kenarı



95 cm hangi kenara aittir?

Kenar:

SÜREÇ ODAKLI DEĞERLENDİRME ÖLÇEĞİ

Doğru Sayısı: / 24

Öğretmen ilgili kutucuğu işaretler.

Geliştirilmeli (0-8)

İyi (9-14)

Çok İyi (15-20)

Mükemmel (21-24)

☐☐☐☐

Hazırlayan:

Bu bölüme sınıfınızın ilgili kazanıma yönelik genel durumuna ilişkin gözlem ve izlenimlerinizi, öğrencilerinizin bu kazanımla ilgili öğrenme eksikliklerini ve bu eksikliklerin giderilmesi amacıyla yaptığınız/yapmayı planladığınız faaliyetleri not edebilirsiniz.

No	Adı - Soyadı	Toplam Puan	Değerlendirme
1			
2			
3			
4			
5			
6			
7			
8			
9			
10			
11			
12			
13			
14			
15			
16			
17			
18			
19			
20			
21			
22			
23			
24			
25			
26			
27			
28			
29			
30			
31			
32			
33			
34			
35			

Hazırlayan: