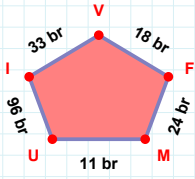
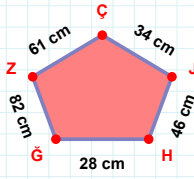


SORU: Aşağıdaki geometrik şekillerle ilgili soruları cevaplayınız.

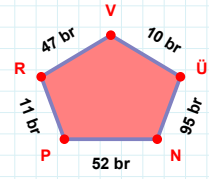
18 br hangi kenara aittir?

- ☐ FV kenarı
☐ VI kenarı
☐ UV kenarı



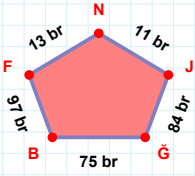
82 cm hangi kenara aittir?

Kenar:



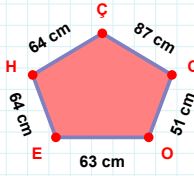
10 br hangi kenara aittir?

Kenar:



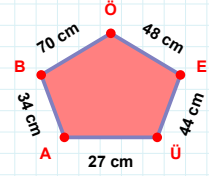
|BĞ| kaç brdir?

- ☐ 74 br
☐ 75 br
☐ 76 br



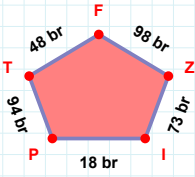
64 cm hangi kenara aittir?

Kenar:



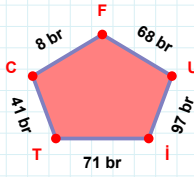
70 cm hangi kenara aittir?

Kenar:



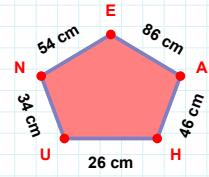
18 br hangi kenara aittir?

Kenar:



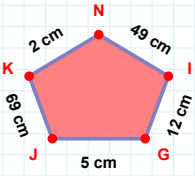
|FC| kaç brdir?

- ☐ 7 br
☐ 8 br
☐ 9 br



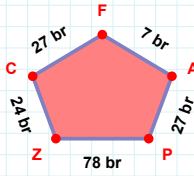
86 cm hangi kenara aittir?

- ☐ UH kenarı
☐ EN kenarı
☐ NA kenarı



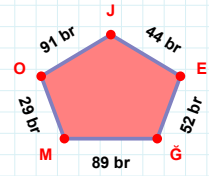
|NK| + |JG| =

Cevap: cm



27 br hangi kenara aittir?

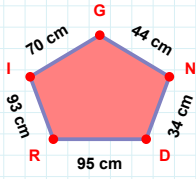
Kenar:



44 br hangi kenara aittir?

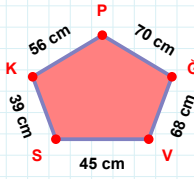
- ☐ JO kenarı
☐ GE kenarı
☐ GO kenarı

SORU: Aşağıdaki geometrik şekillerle ilgili soruları cevaplayınız.



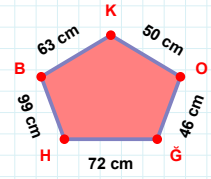
44 cm hangi kenara aittir?

- ☐ GD kenarı
☐ IR kenarı
☐ DN kenarı



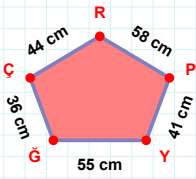
68 cm hangi kenara aittir?

Kenar:



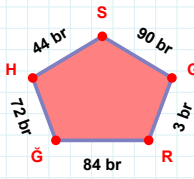
$|OK| + |GO| = \dots$

Cevap: cm



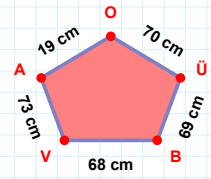
$|YP|$ kaç cm'dir?

- ☐ 40 cm
☐ 41 cm
☐ 42 cm



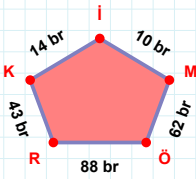
3 br hangi kenara aittir?

Kenar:



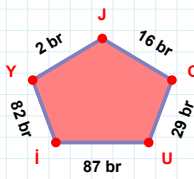
70 cm hangi kenara aittir?

Kenar:



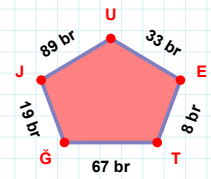
88 br hangi kenara aittir?

Kenar:



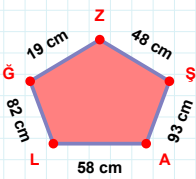
16 br hangi kenara aittir?

- ☐ CJ kenarı
☐ UJ kenarı
☐ Yİ kenarı



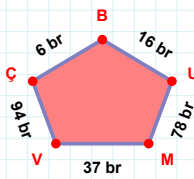
33 br hangi kenara aittir?

Kenar:



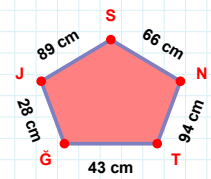
$|SZ|$ kaç cm'dir?

- ☐ 47 cm
☐ 48 cm
☐ 49 cm



$|MU|$ kaç br'dir?

- ☐ 77 br
☐ 78 br
☐ 79 br



$|GT| + |SJ| = \dots$

Cevap: cm

SÜREÇ ODAKLI DEĞERLENDİRME ÖLÇEĞİ

Doğru Sayısı: / 24

Öğretmen ilgili kutucuğu işaretler.

Geliştirilmeli (0-8)

İyi (9-14)

Çok İyi (15-20)

Mükemmel (21-24)

☐
☐
☐
☐

Hazırlayan:

Bu bölüme sınıfınızın ilgili kazanıma yönelik genel durumuna ilişkin gözlem ve izlenimlerinizi, öğrencilerinizin bu kazanımla ilgili öğrenme eksikliklerini ve bu eksikliklerin giderilmesi amacıyla yaptığınız/yapmayı planladığınız faaliyetleri not edebilirsiniz.

No	Adı - Soyadı	Toplam Puan	Değerlendirme
1			
2			
3			
4			
5			
6			
7			
8			
9			
10			
11			
12			
13			
14			
15			
16			
17			
18			
19			
20			
21			
22			
23			
24			
25			
26			
27			
28			
29			
30			
31			
32			
33			
34			
35			

Hazırlayan: