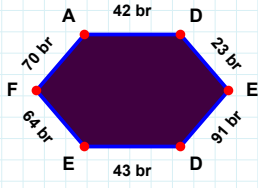
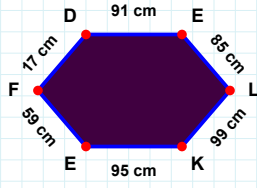


**SORU:** Aşağıdaki şekillerde istenen kenarın kaç birim veya santimetre olduğunu bulunuz.



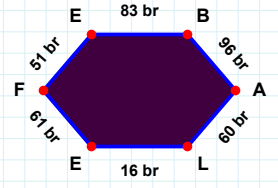
|EB| kaç brdir?

- ☐ 83 br  
☐ 73 br  
☐ 81 br



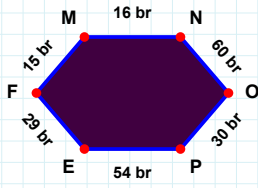
|KE| kaç cmdir?

- ☐ 95 cm  
☐ 93 cm  
☐ 90 cm



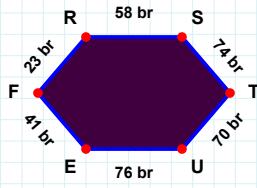
|EF| kaç brdir?

- ☐ 64 br  
☐ 62 br  
☐ 67 br



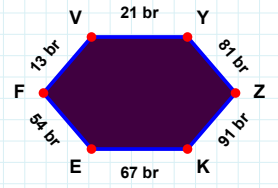
|FM| kaç brdir?

- ☐ 15 br  
☐ 25 br  
☐ 17 br



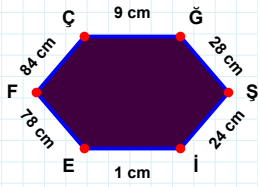
|FV| kaç brdir?

- ☐ 13 br  
☐ 12 br  
☐ 16 br



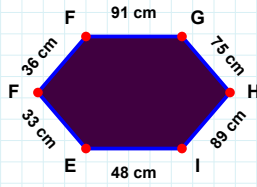
|EF| kaç brdir?

- ☐ 42 br  
☐ 51 br  
☐ 41 br



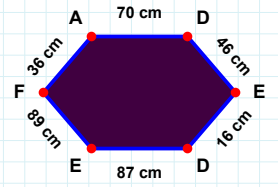
|GH| kaç cmdir?

- ☐ 73 cm  
☐ 72 cm  
☐ 75 cm



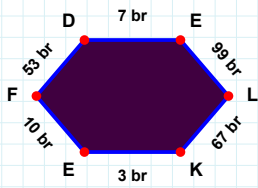
|EF| kaç cmdir?

- ☐ 83 cm  
☐ 81 cm  
☐ 78 cm



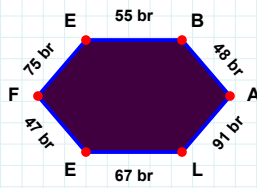
|AD| kaç cmdir?

- ☐ 60 cm  
☐ 70 cm  
☐ 72 cm



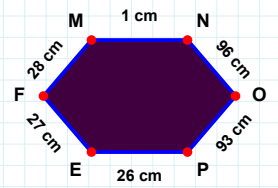
|FM| kaç cmdir?

- ☐ 31 cm  
☐ 25 cm  
☐ 28 cm



|EF| kaç brdir?

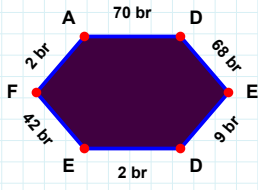
- ☐ 10 br  
☐ 15 br  
☐ 9 br



|BA| kaç brdir?

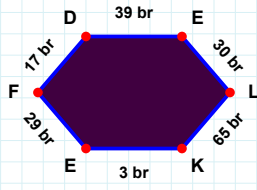
- ☐ 38 br  
☐ 48 br  
☐ 49 br

**SORU:** Aşağıdaki şekillerde istenen kenarın kaç birim veya santimetre olduğunu bulunuz.



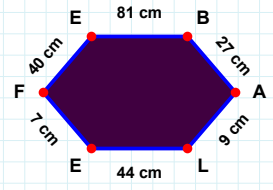
|LE| kaç cmdir?

- ☐ 43 cm  
☐ 54 cm  
☐ 44 cm



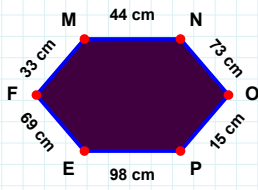
|AD| kaç brdir?

- ☐ 67 br  
☐ 70 br  
☐ 72 br



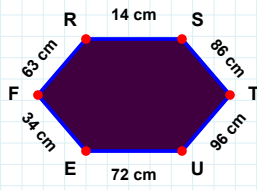
|LK| kaç brdir?

- ☐ 65 br  
☐ 55 br  
☐ 75 br



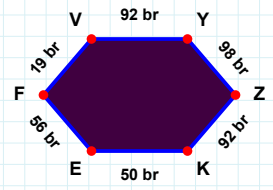
|ST| kaç cmdir?

- ☐ 96 cm  
☐ 86 cm  
☐ 84 cm



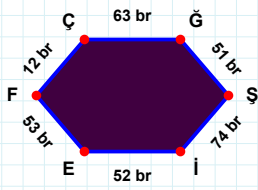
|OP| kaç cmdir?

- ☐ 18 cm  
☐ 10 cm  
☐ 15 cm



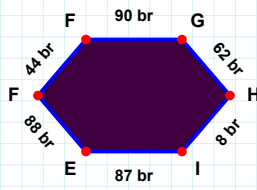
|FV| kaç brdir?

- ☐ 22 br  
☐ 29 br  
☐ 19 br



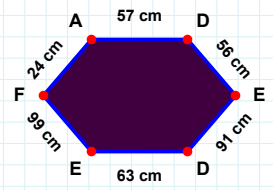
|ĞŞ| kaç brdir?

- ☐ 49 br  
☐ 61 br  
☐ 51 br



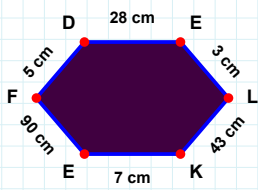
|DE| kaç cmdir?

- ☐ 56 cm  
☐ 59 cm  
☐ 58 cm



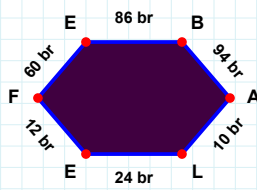
|FF| kaç brdir?

- ☐ 42 br  
☐ 54 br  
☐ 44 br



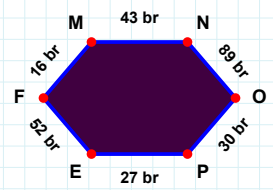
|FD| kaç cmdir?

- ☐ 2 cm  
☐ 8 cm  
☐ 5 cm



|EF| kaç brdir?

- ☐ 7 br  
☐ 11 br  
☐ 12 br



|EF| kaç brdir?

- ☐ 47 br  
☐ 52 br  
☐ 50 br

### SÜREÇ ODAKLI DEĞERLENDİRME ÖLÇEĞİ

Doğru Sayısı: ..... / 24

Öğretmen ilgili kutucuğu işaretler.

Geliştirilmeli (0-8)

İyi (9-14)

Çok İyi (15-20)

Mükemmel (21-24)

☐
☐
☐
☐

Hazırlayan: .....

Bu bölüme sınıfınızın ilgili kazanıma yönelik genel durumuna ilişkin gözlem ve izlenimlerinizi, öğrencilerinizin bu kazanımla ilgili öğrenme eksikliklerini ve bu eksikliklerin giderilmesi amacıyla yaptığınız/yapmayı planladığınız faaliyetleri not edebilirsiniz.

No	Adı - Soyadı	Toplam Puan	Değerlendirme
1			
2			
3			
4			
5			
6			
7			
8			
9			
10			
11			
12			
13			
14			
15			
16			
17			
18			
19			
20			
21			
22			
23			
24			
25			
26			
27			
28			
29			
30			
31			
32			
33			
34			
35			

Hazırlayan: .....