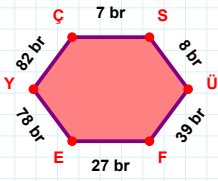
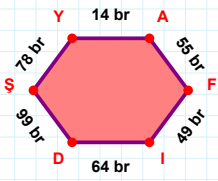


SORU: Aşağıdaki geometrik şekillerle ilgili soruları cevaplayınız.



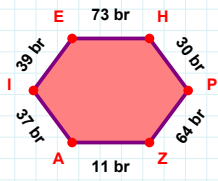
27 br hangi kenara aittir?

Kenar:



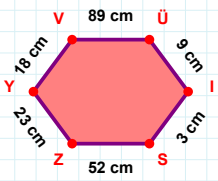
78 br hangi kenara aittir?

- ☐ FD kenarı
☐ ID kenarı
☐ AF kenarı



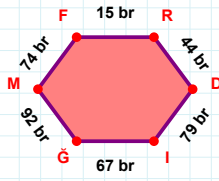
37 br hangi kenara aittir?

Kenar:



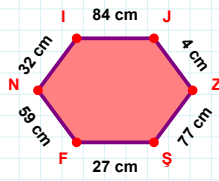
|ÜI| kaç cm'dir?

- ☐ 8 cm
☐ 9 cm
☐ 10 cm



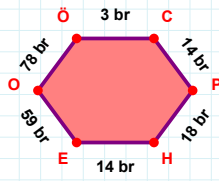
74 br hangi kenara aittir?

- ☐ FI kenarı
☐ MF kenarı
☐ DI kenarı



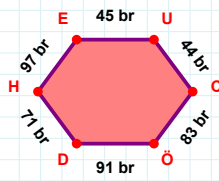
|IJ| + |FN| =

Cevap: cm



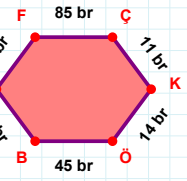
|ÖC| kaç br'dir?

- ☐ 2 br
☐ 3 br
☐ 4 br



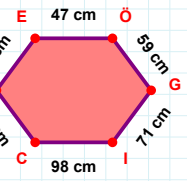
44 br hangi kenara aittir?

Kenar:



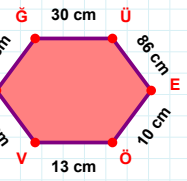
|ÖB| + |EF| =

Cevap: br



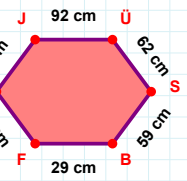
98 cm hangi kenara aittir?

Kenar:



87 cm hangi kenara aittir?

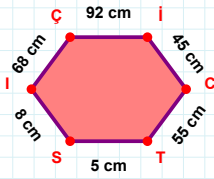
- ☐ ÇG kenarı
☐ VÇ kenarı
☐ ÖÜ kenarı



5 cm hangi kenara aittir?

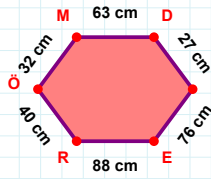
- ☐ BF kenarı
☐ JÜ kenarı
☐ ÇÜ kenarı

SORU: Aşağıdaki geometrik şekillerle ilgili soruları cevaplayınız.



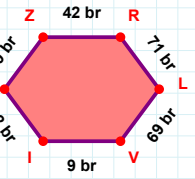
68 cm hangi kenara aittir?

- ☐ IÇ kenarı
☐ İC kenarı
☐ İI kenarı



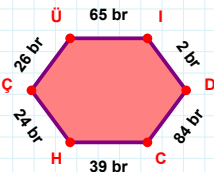
|DI| kaç cmdir?

- ☐ 26 cm
☐ 27 cm
☐ 28 cm



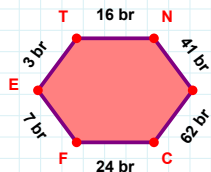
71 br hangi kenara aittir?

Kenar:



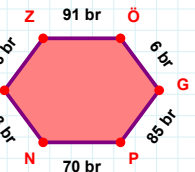
|ÜI| kaç brdir?

- ☐ 64 br
☐ 65 br
☐ 66 br



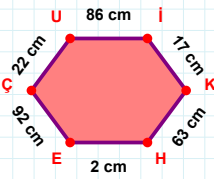
|ET| + |TN| =

Cevap: br



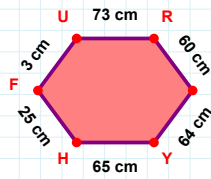
43 br hangi kenara aittir?

- ☐ NÇ kenarı
☐ ZP kenarı
☐ ÇZ kenarı



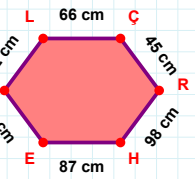
17 cm hangi kenara aittir?

Kenar:



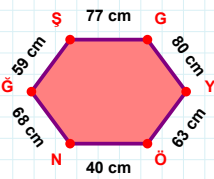
|UR| kaç cmdir?

- ☐ 72 cm
☐ 73 cm
☐ 74 cm



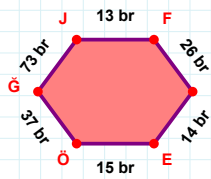
66 cm hangi kenara aittir?

Kenar:



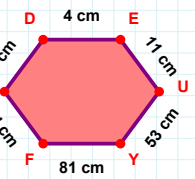
63 cm hangi kenara aittir?

Kenar:



73 br hangi kenara aittir?

- ☐ GN kenarı
☐ NE kenarı
☐ JF kenarı



|ÖD| + |DE| =

Cevap: cm

SÜREÇ ODAKLI DEĞERLENDİRME ÖLÇEĞİ

Doğru Sayısı: / 24

Öğretmen ilgili kutucuğu işaretler.

Geliştirilmeli (0-8)

İyi (9-14)

Çok İyi (15-20)

Mükemmel (21-24)

☐☐☐☐

Hazırlayan:

Bu bölüme sınıfınızın ilgili kazanıma yönelik genel durumuna ilişkin gözlem ve izlenimlerinizi, öğrencilerinizin bu kazanımla ilgili öğrenme eksikliklerini ve bu eksikliklerin giderilmesi amacıyla yaptığınız/yapmayı planladığınız faaliyetleri not edebilirsiniz.

No	Adı - Soyadı	Toplam Puan	Değerlendirme
1			
2			
3			
4			
5			
6			
7			
8			
9			
10			
11			
12			
13			
14			
15			
16			
17			
18			
19			
20			
21			
22			
23			
24			
25			
26			
27			
28			
29			
30			
31			
32			
33			
34			
35			

Hazırlayan: