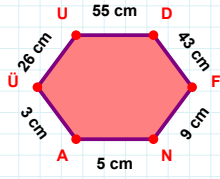
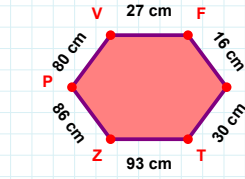


**SORU:** Aşağıdaki geometrik şekillerle ilgili soruları cevaplayınız.

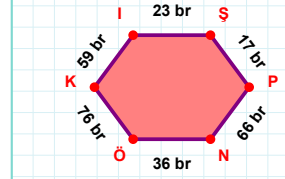
|DF| kaç cm'dir?

- ☐ 42 cm  
☐ 43 cm  
☐ 44 cm



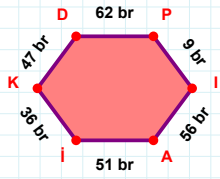
80 cm hangi kenara aittir?

- ☐ Zİ kenarı  
☐ ZP kenarı  
☐ PV kenarı



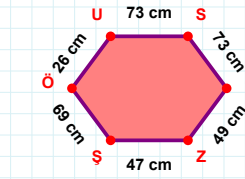
17 br hangi kenara aittir?

Kenar: .....



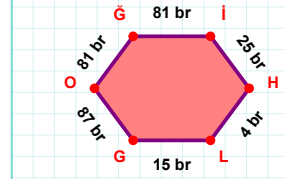
47 br hangi kenara aittir?

- ☐ KD kenarı  
☐ PI kenarı  
☐ IK kenarı



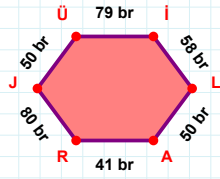
|SÇ| kaç cm'dir?

- ☐ 72 cm  
☐ 73 cm  
☐ 74 cm



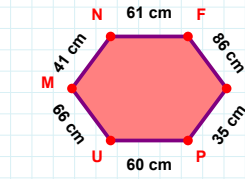
|Ğİ| kaç br'dir?

- ☐ 80 br  
☐ 81 br  
☐ 82 br



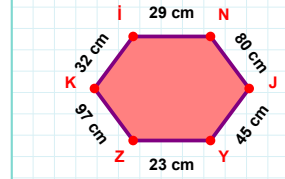
|Üİ| kaç br'dir?

- ☐ 78 br  
☐ 79 br  
☐ 80 br



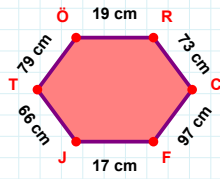
|PU| kaç cm'dir?

- ☐ 59 cm  
☐ 60 cm  
☐ 61 cm



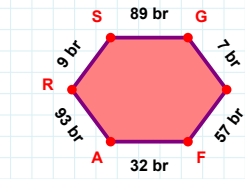
|NJ| + |YZ| = ....

Cevap: ..... cm



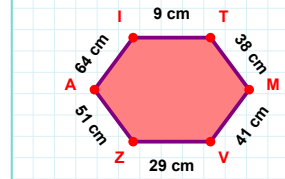
|RC| + |TÖ| = ....

Cevap: ..... cm



|RS| + |KF| = ....

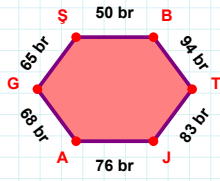
Cevap: ..... br



29 cm hangi kenara aittir?

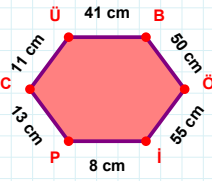
Kenar: .....

SORU: Aşağıdaki geometrik şekillerle ilgili soruları cevaplayınız.



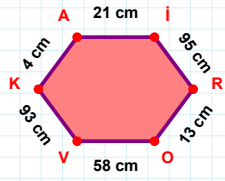
|SB| kaç brdir?

- ☐ 49 br  
☐ 50 br  
☐ 51 br



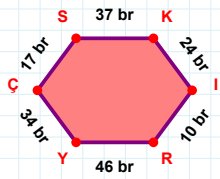
|ÜB| + |CÜ| = ....

Cevap: ..... cm



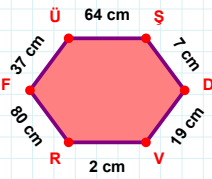
4 cm hangi kenara aittir?

- ☐ VK kenarı  
☐ KA kenarı  
☐ AV kenarı



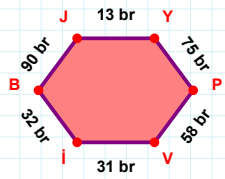
10 br hangi kenara aittir?

Kenar: .....



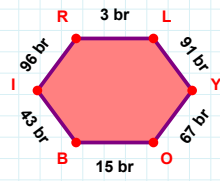
80 cm hangi kenara aittir?

Kenar: .....



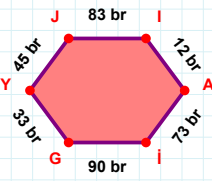
|VI| kaç brdir?

- ☐ 30 br  
☐ 31 br  
☐ 32 br



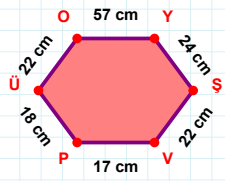
|LY| kaç brdir?

- ☐ 90 br  
☐ 91 br  
☐ 92 br



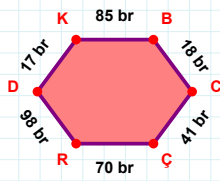
90 br hangi kenara aittir?

Kenar: .....



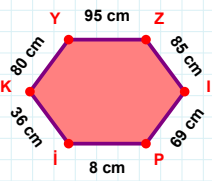
|ŞV| + |OY| = ....

Cevap: ..... cm



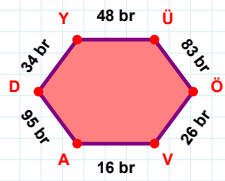
85 br hangi kenara aittir?

Kenar: .....



|KY| kaç cmdir?

- ☐ 79 cm  
☐ 80 cm  
☐ 81 cm



|ÖV| kaç brdir?

- ☐ 25 br  
☐ 26 br  
☐ 27 br

## SÜREÇ ODAKLI DEĞERLENDİRME ÖLÇEĞİ

Doğru Sayısı: ..... / 24

Öğretmen ilgili kutucuğu işaretler.

Geliştirilmeli (0-8)

İyi (9-14)

Çok İyi (15-20)

Mükemmel (21-24)

☐☐☐☐

Hazırlayan: .....

Bu bölüme sınıfınızın ilgili kazanıma yönelik genel durumuna ilişkin gözlem ve izlenimlerinizi, öğrencilerinizin bu kazanımla ilgili öğrenme eksikliklerini ve bu eksikliklerin giderilmesi amacıyla yaptığınız/yapmayı planladığınız faaliyetleri not edebilirsiniz.

No	Adı - Soyadı	Toplam Puan	Değerlendirme
1			
2			
3			
4			
5			
6			
7			
8			
9			
10			
11			
12			
13			
14			
15			
16			
17			
18			
19			
20			
21			
22			
23			
24			
25			
26			
27			
28			
29			
30			
31			
32			
33			
34			
35			

Hazırlayan: .....