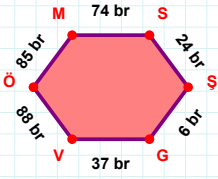
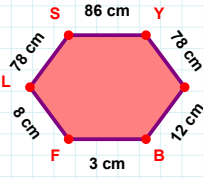


SORU: Aşağıdaki geometrik şekillerle ilgili soruları cevaplayınız.



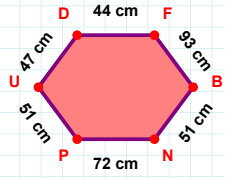
85 br hangi kenara aittir?

- ☐ MŞ kenarı  
☐ SŞ kenarı  
☐ MS kenarı



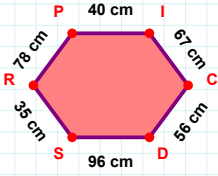
78 cm hangi kenara aittir?

- ☐ EB kenarı  
☐ YE kenarı  
☐ YF kenarı



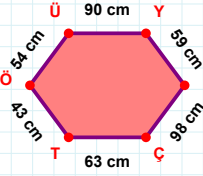
|NP| kaç cm'dir?

- ☐ 71 cm  
☐ 72 cm  
☐ 73 cm



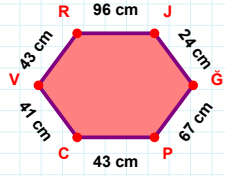
56 cm hangi kenara aittir?

Kenar: .....



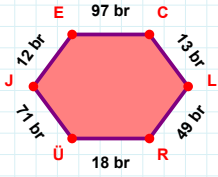
63 cm hangi kenara aittir?

Kenar: .....



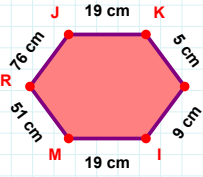
43 cm hangi kenara aittir?

- ☐ PC kenarı  
☐ CV kenarı  
☐ RÇ kenarı



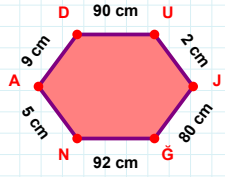
|EC| + |RÜ| = ....

Cevap: ..... br



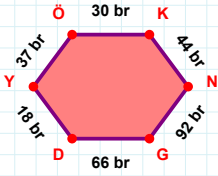
76 cm hangi kenara aittir?

- ☐ JM kenarı  
☐ KU kenarı  
☐ UI kenarı



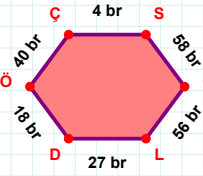
9 cm hangi kenara aittir?

- ☐ NU kenarı  
☐ JÇ kenarı  
☐ AD kenarı



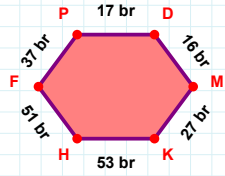
37 br hangi kenara aittir?

- ☐ ÖK kenarı  
☐ DY kenarı  
☐ KY kenarı



|SG| + |GL| = ....

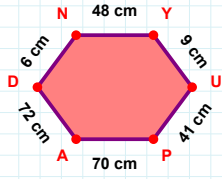
Cevap: ..... br



37 br hangi kenara aittir?

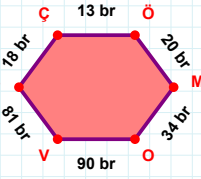
- ☐ MP kenarı  
☐ HF kenarı  
☐ KH kenarı

SORU: Aşağıdaki geometrik şekillerle ilgili soruları cevaplayınız.



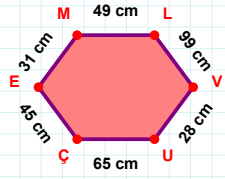
|NY| + |AD| = ....

Cevap: ..... cm



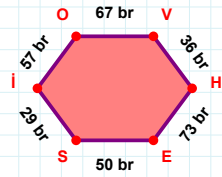
90 br hangi kenara aittir?

Kenar: .....



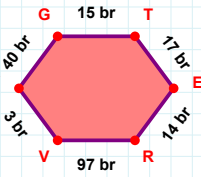
31 cm hangi kenara aittir?

- ☐ UÇ kenarı  
☐ VU kenarı  
☐ EV kenarı



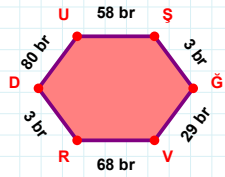
|İO| + |OV| = ....

Cevap: ..... br



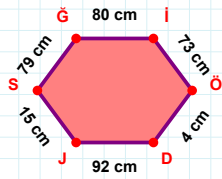
40 br hangi kenara aittir?

- ☐ GT kenarı  
☐ VT kenarı  
☐ TE kenarı



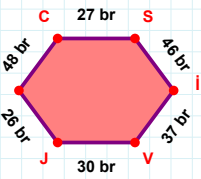
58 br hangi kenara aittir?

Kenar: .....



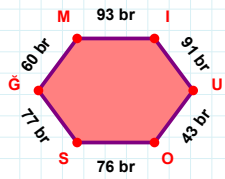
|Ğİ| + |SĞ| = ....

Cevap: ..... cm



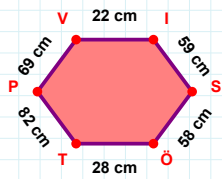
|VJ| kaç brdir?

- ☐ 29 br  
☐ 30 br  
☐ 31 br



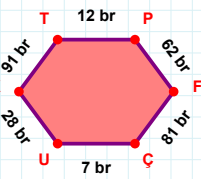
|MI| kaç brdir?

- ☐ 92 br  
☐ 93 br  
☐ 94 br



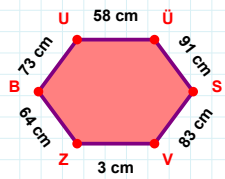
|SÖ| + |PV| = ....

Cevap: ..... cm



|TP| + |FÇ| = ....

Cevap: ..... br



|ZB| kaç cmdir?

- ☐ 63 cm  
☐ 64 cm  
☐ 65 cm

## SÜREÇ ODAKLI DEĞERLENDİRME ÖLÇEĞİ

Doğru Sayısı: ..... / 24

Öğretmen ilgili kutucuğu işaretler.

Geliştirilmeli (0-8)

İyi (9-14)

Çok İyi (15-20)

Mükemmel (21-24)

☐☐☐☐

Hazırlayan: .....

Bu bölüme sınıfınızın ilgili kazanıma yönelik genel durumuna ilişkin gözlem ve izlenimlerinizi, öğrencilerinizin bu kazanımla ilgili öğrenme eksikliklerini ve bu eksikliklerin giderilmesi amacıyla yaptığınız/yapmayı planladığınız faaliyetleri not edebilirsiniz.

No	Adı - Soyadı	Toplam Puan	Değerlendirme
1			
2			
3			
4			
5			
6			
7			
8			
9			
10			
11			
12			
13			
14			
15			
16			
17			
18			
19			
20			
21			
22			
23			
24			
25			
26			
27			
28			
29			
30			
31			
32			
33			
34			
35			

Hazırlayan: .....