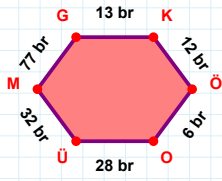
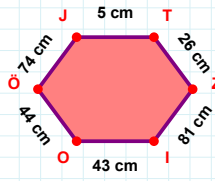


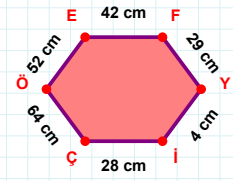
**SORU:** Aşağıdaki geometrik şekillerle ilgili soruları cevaplayınız. $|KÖ| + |GK| = \dots$ 

Cevap: ..... br

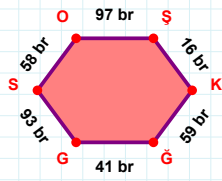


74 cm hangi kenara aittir?

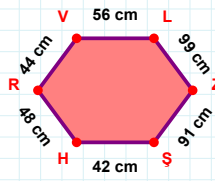
- ☐ OÖ kenarı  
☐ ÖJ kenarı  
☐ OJ kenarı

 $|Yİ|$  kaç cm'dir?

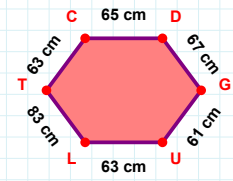
- ☐ 3 cm  
☐ 4 cm  
☐ 5 cm

 $|ŞG|$  kaç br'dir?

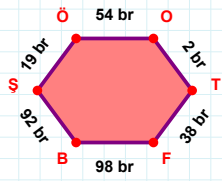
- ☐ 40 br  
☐ 41 br  
☐ 42 br

 $|RV| + |HR| = \dots$ 

Cevap: ..... cm

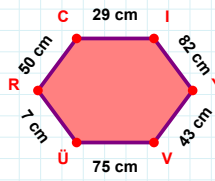
 $|TC|$  kaç cm'dir?

- ☐ 62 cm  
☐ 63 cm  
☐ 64 cm



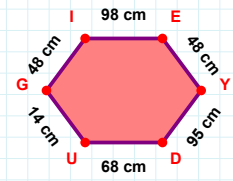
19 br hangi kenara aittir?

Kenar: .....

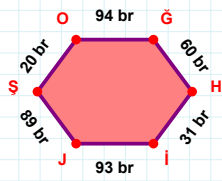


82 cm hangi kenara aittir?

Kenar: .....

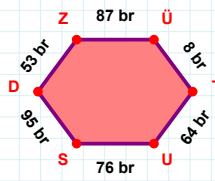
 $|DU|$  kaç cm'dir?

- ☐ 67 cm  
☐ 68 cm  
☐ 69 cm



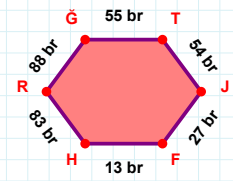
89 br hangi kenara aittir?

Kenar: .....



64 br hangi kenara aittir?

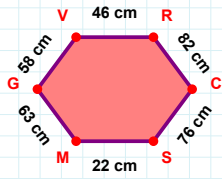
Kenar: .....



55 br hangi kenara aittir?

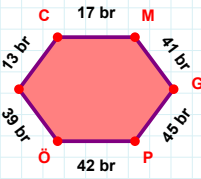
Kenar: .....

**SORU:** Aşağıdaki geometrik şekillerle ilgili soruları cevaplayınız.



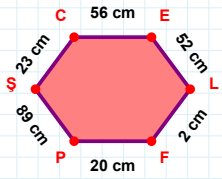
|VR| kaç cm'dir?

- ☐ 45 cm  
☐ 46 cm  
☐ 47 cm



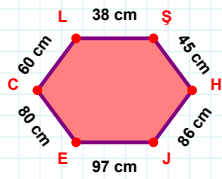
|PÖ| + |GP| = ....

Cevap: ..... br



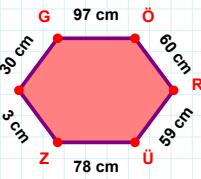
52 cm hangi kenara aittir?

Kenar: .....



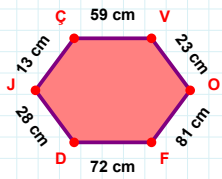
60 cm hangi kenara aittir?

- ☐ EC kenarı  
☐ CL kenarı  
☐ CH kenarı



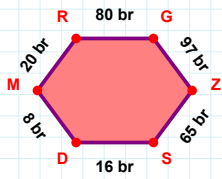
97 cm hangi kenara aittir?

Kenar: .....



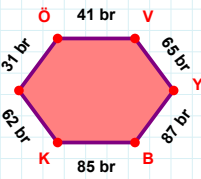
|DJ| kaç cm'dir?

- ☐ 27 cm  
☐ 28 cm  
☐ 29 cm



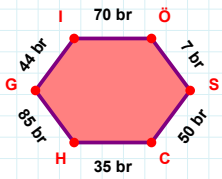
20 br hangi kenara aittir?

Kenar: .....



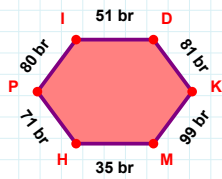
65 br hangi kenara aittir?

Kenar: .....



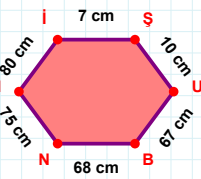
|HG| + |İÖ| = ....

Cevap: ..... br



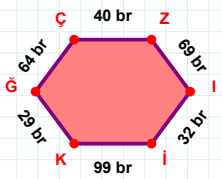
|HP| kaç br'dir?

- ☐ 70 br  
☐ 71 br  
☐ 72 br



|NM| kaç cm'dir?

- ☐ 74 cm  
☐ 75 cm  
☐ 76 cm



64 br hangi kenara aittir?

- ☐ ÇÇ kenarı  
☐ İİ kenarı  
☐ Zİ kenarı

### SÜREÇ ODAKLI DEĞERLENDİRME ÖLÇEĞİ

Doğru Sayısı: ..... / 24

Öğretmen ilgili kutucuğu işaretler.

Geliştirilmeli (0-8)

İyi (9-14)

Çok İyi (15-20)

Mükemmel (21-24)

☐
☐
☐
☐

Hazırlayan: .....

Bu bölüme sınıfınızın ilgili kazanıma yönelik genel durumuna ilişkin gözlem ve izlenimlerinizi, öğrencilerinizin bu kazanımla ilgili öğrenme eksikliklerini ve bu eksikliklerin giderilmesi amacıyla yaptığınız/yapmayı planladığınız faaliyetleri not edebilirsiniz.

No	Adı - Soyadı	Toplam Puan	Değerlendirme
1			
2			
3			
4			
5			
6			
7			
8			
9			
10			
11			
12			
13			
14			
15			
16			
17			
18			
19			
20			
21			
22			
23			
24			
25			
26			
27			
28			
29			
30			
31			
32			
33			
34			
35			

Hazırlayan: .....