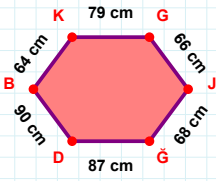
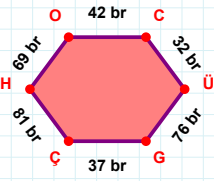


SORU: Aşağıdaki geometrik şekillerle ilgili soruları cevaplayınız.



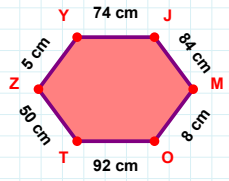
64 cm hangi kenara aittir?

Kenar: .....



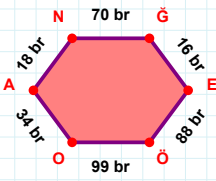
|ÜG| kaç brdir?

- ☐ 75 br  
☐ 76 br  
☐ 77 br



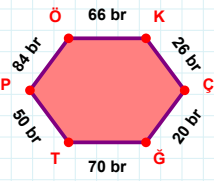
84 cm hangi kenara aittir?

Kenar: .....



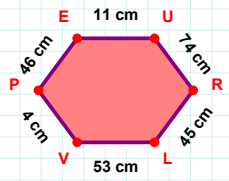
|NĞ| kaç brdir?

- ☐ 69 br  
☐ 70 br  
☐ 71 br



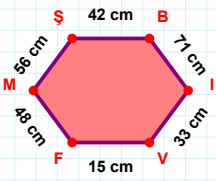
50 br hangi kenara aittir?

Kenar: .....



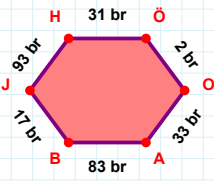
|VP| kaç cmdir?

- ☐ 3 cm  
☐ 4 cm  
☐ 5 cm



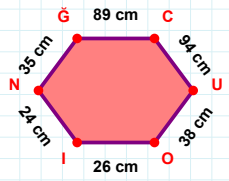
|MŞ| + |FM| = ....

Cevap: ..... cm



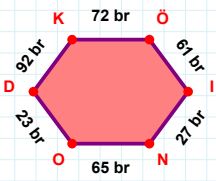
|BJ| + |AB| = ....

Cevap: ..... br



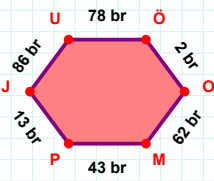
|UO| kaç cmdir?

- ☐ 37 cm  
☐ 38 cm  
☐ 39 cm



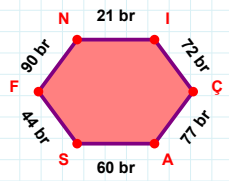
92 br hangi kenara aittir?

- ☐ NO kenarı  
☐ KÖ kenarı  
☐ DN kenarı



|ÖO| kaç brdir?

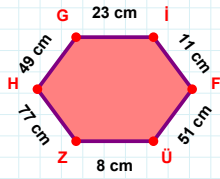
- ☐ 1 br  
☐ 2 br  
☐ 3 br



|ÇA| + |SF| = ....

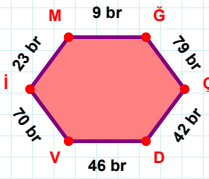
Cevap: ..... br

**SORU:** Aşağıdaki geometrik şekillerle ilgili soruları cevaplayınız.



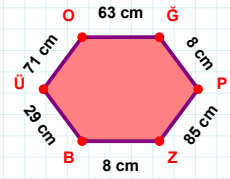
77 cm hangi kenara aittir?

Kenar: .....



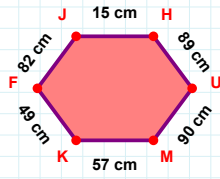
$|ÇD| + |Vİ| = \dots$

Cevap: ..... br



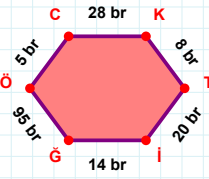
$|OĞ|$  kaç cmdir?

- ☐ 62 cm  
☐ 63 cm  
☐ 64 cm



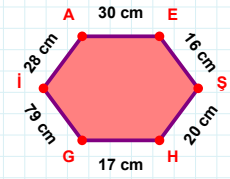
$|FJ| + |UM| = \dots$

Cevap: ..... cm



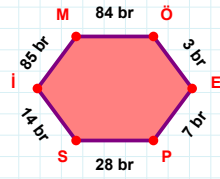
$|CK|$  kaç brdir?

- ☐ 27 br  
☐ 28 br  
☐ 29 br



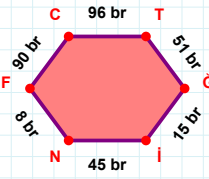
$|İA|$  kaç cmdir?

- ☐ 27 cm  
☐ 28 cm  
☐ 29 cm



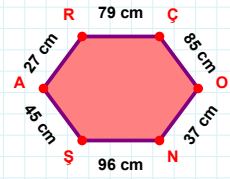
$|Sİ|$  kaç brdir?

- ☐ 13 br  
☐ 14 br  
☐ 15 br



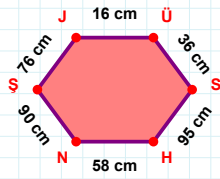
90 br hangi kenara aittir?

- ☐ NF kenarı  
☐ İT kenarı  
☐ FC kenarı



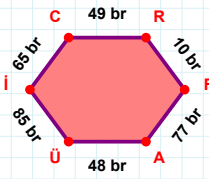
27 cm hangi kenara aittir?

- ☐ ŞA kenarı  
☐ AO kenarı  
☐ ON kenarı



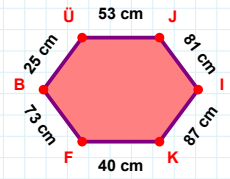
$|SH|$  kaç cmdir?

- ☐ 94 cm  
☐ 95 cm  
☐ 96 cm



10 br hangi kenara aittir?

Kenar: .....



40 cm hangi kenara aittir?

Kenar: .....

### SÜREÇ ODAKLI DEĞERLENDİRME ÖLÇEĞİ

Doğru Sayısı: ..... / 24

Öğretmen ilgili kutucuğu işaretler.

Geliştirilmeli (0-8)

İyi (9-14)

Çok İyi (15-20)

Mükemmel (21-24)

☐
☐
☐
☐

Hazırlayan: .....

Bu bölüme sınıfınızın ilgili kazanıma yönelik genel durumuna ilişkin gözlem ve izlenimlerinizi, öğrencilerinizin bu kazanımla ilgili öğrenme eksikliklerini ve bu eksikliklerin giderilmesi amacıyla yaptığınız/yapmayı planladığınız faaliyetleri not edebilirsiniz.

No	Adı - Soyadı	Toplam Puan	Değerlendirme
1			
2			
3			
4			
5			
6			
7			
8			
9			
10			
11			
12			
13			
14			
15			
16			
17			
18			
19			
20			
21			
22			
23			
24			
25			
26			
27			
28			
29			
30			
31			
32			
33			
34			
35			

Hazırlayan: .....