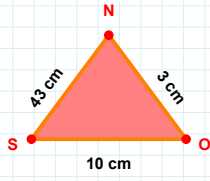
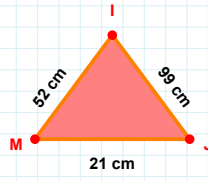


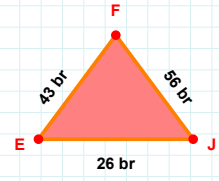
SORU: Aşağıdaki geometrik şekillerle ilgili soruları cevaplayınız.

3 cm hangi kenara aittir?

- ☐ ON kenarı
☐ XY kenarı
☐ SO kenarı

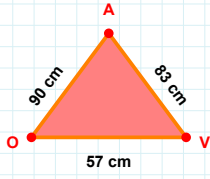
 $|MJ| + |JI| = \dots$

Cevap: cm

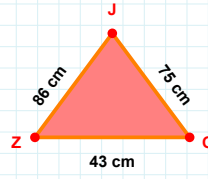


26 br hangi kenara aittir?

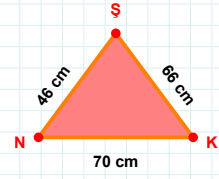
Kenar:

 $|VA|$ kaç cmdir?

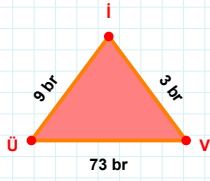
- ☐ 82 cm
☐ 83 cm
☐ 84 cm

 $|ZO|$ kaç cmdir?

- ☐ 42 cm
☐ 43 cm
☐ 44 cm

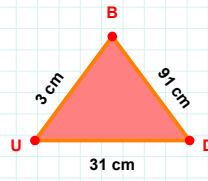
 $|NK|$ kaç cmdir?

- ☐ 69 cm
☐ 70 cm
☐ 71 cm

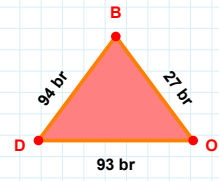


3 br hangi kenara aittir?

- ☐ ÜV kenarı
☐ İÜ kenarı
☐ XY kenarı

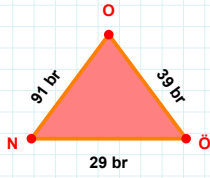
 $|UD| + |BU| = \dots$

Cevap: cm

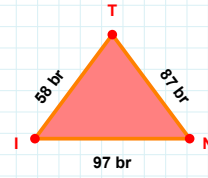


93 br hangi kenara aittir?

Kenar:

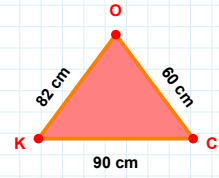
 $|ÖÖ|$ kaç brdir?

- ☐ 38 br
☐ 39 br
☐ 40 br

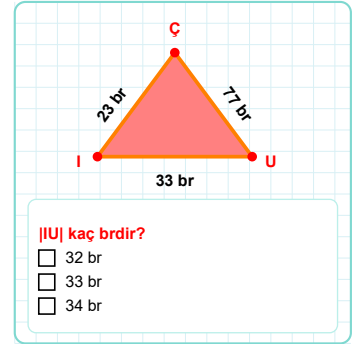
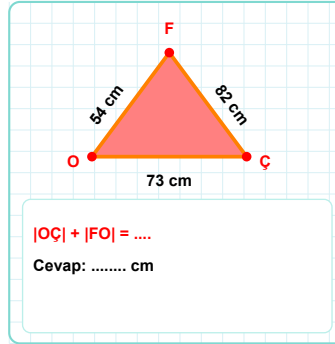
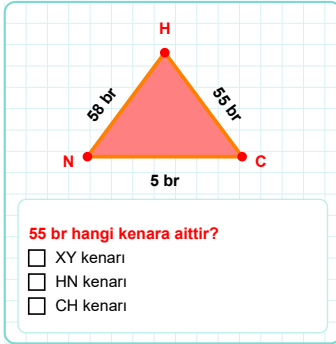
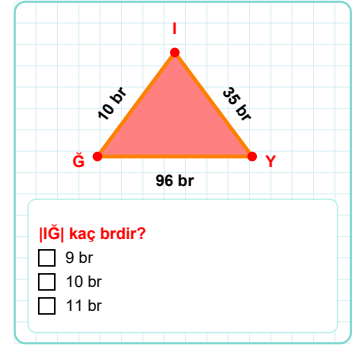
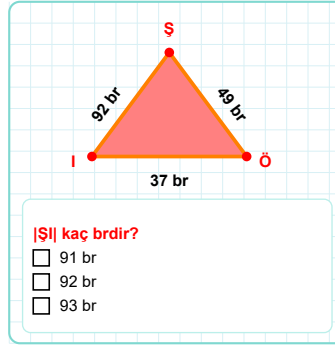
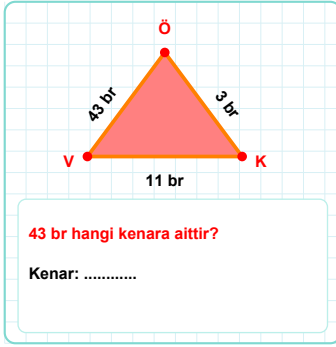
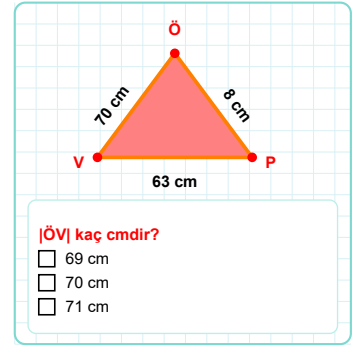
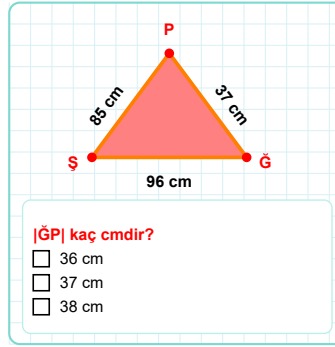
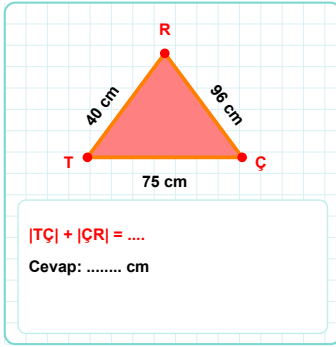
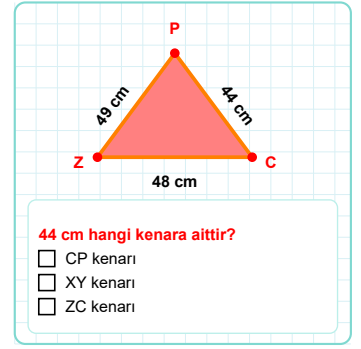
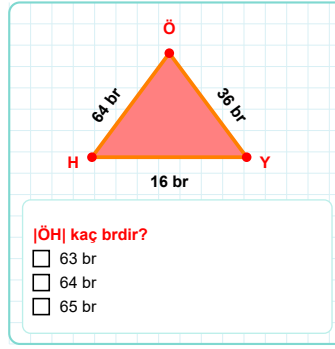
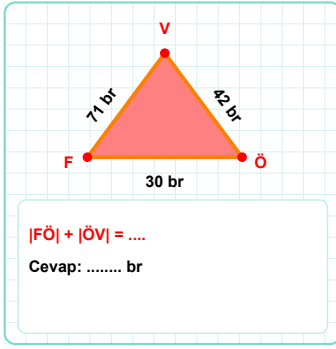


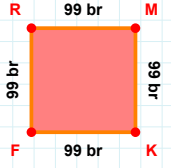
87 br hangi kenara aittir?

- ☐ XY kenarı
☐ NT kenarı
☐ IN kenarı

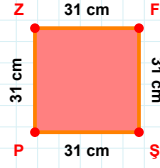
 $|OK|$ kaç cmdir?

- ☐ 81 cm
☐ 82 cm
☐ 83 cm

SORU: Aşağıdaki geometrik şekillerle ilgili soruları cevaplayınız.

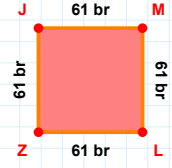
SORU: Aşağıdaki geometrik şekillerle ilgili soruları cevaplayınız. $|RM| + |MK| = \dots$

Cevap: br

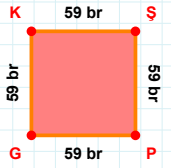


31 cm hangi kenara aittir?

- ☐ PZ kenarı
☐ FP kenarı
☐ FŞ kenarı

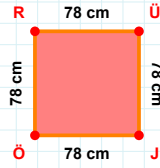
 $|ZJ|$ kaç brdir?

- ☐ 60 br
☐ 61 br
☐ 62 br

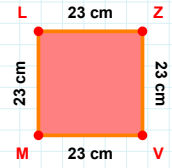


59 br hangi kenara aittir?

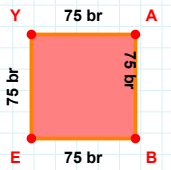
- ☐ PG kenarı
☐ GK kenarı
☐ KP kenarı

 $|ÜJ|$ kaç cmdir?

- ☐ 77 cm
☐ 78 cm
☐ 79 cm

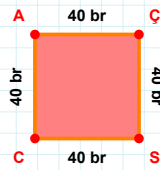
 $|VM|$ kaç cmdir?

- ☐ 22 cm
☐ 23 cm
☐ 24 cm



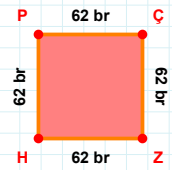
75 br hangi kenara aittir?

- ☐ EY kenarı
☐ YB kenarı
☐ AB kenarı

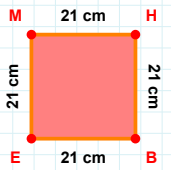


40 br hangi kenara aittir?

- ☐ CA kenarı
☐ ÇC kenarı
☐ SC kenarı

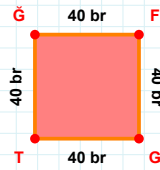
 $|PC|$ kaç brdir?

- ☐ 61 br
☐ 62 br
☐ 63 br



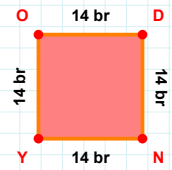
21 cm hangi kenara aittir?

Kenar:



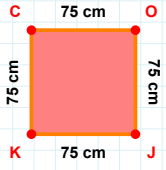
40 br hangi kenara aittir?

- ☐ ĞF kenarı
☐ TĞ kenarı
☐ ĞG kenarı



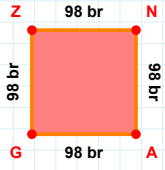
14 br hangi kenara aittir?

- ☐ DY kenarı
☐ NY kenarı
☐ DN kenarı

SORU: Aşağıdaki geometrik şekillerle ilgili soruları cevaplayınız.

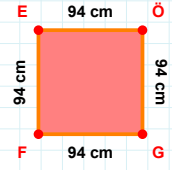
$$|JK| + |OJ| = \dots$$

Cevap: cm



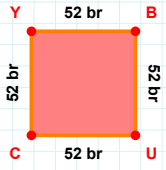
98 br hangi kenara aittir?

- ☐ AG kenarı
☐ GZ kenarı
☐ GN kenarı



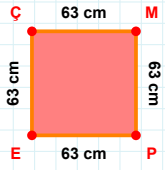
94 cm hangi kenara aittir?

Kenar:



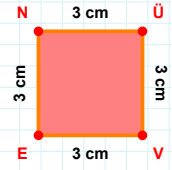
52 br hangi kenara aittir?

Kenar:



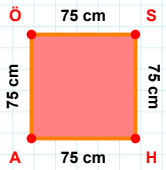
|PE| kaç cmdir?

- ☐ 62 cm
☐ 63 cm
☐ 64 cm



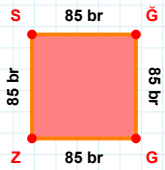
3 cm hangi kenara aittir?

Kenar:



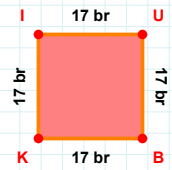
75 cm hangi kenara aittir?

Kenar:



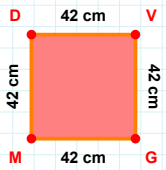
|GG| kaç brdir?

- ☐ 84 br
☐ 85 br
☐ 86 br



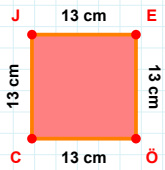
$$|IU| + |KI| = \dots$$

Cevap: br



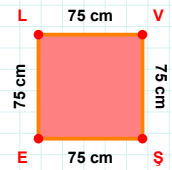
|MD| kaç cmdir?

- ☐ 41 cm
☐ 42 cm
☐ 43 cm



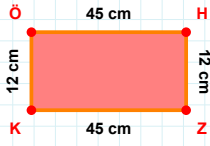
$$|CJ| + |JE| = \dots$$

Cevap: cm

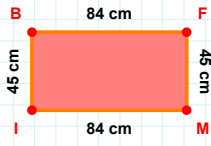


$$|LV| + |SE| = \dots$$

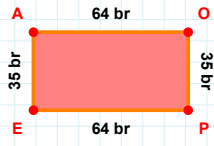
Cevap: cm

SORU: Aşağıdaki geometrik şekillerle ilgili soruları cevaplayınız.**|HZ| kaç cm'dir?**

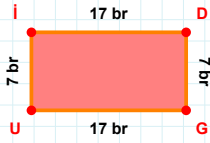
- ☐ 11 cm
☐ 12 cm
☐ 13 cm

**84 cm hangi kenara aittir?**

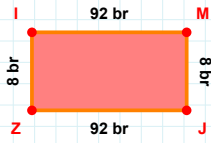
Kenar:

**|EA| kaç br'dir?**

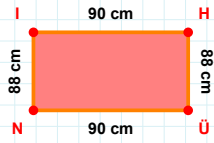
- ☐ 34 br
☐ 35 br
☐ 36 br

**7 br hangi kenara aittir?**

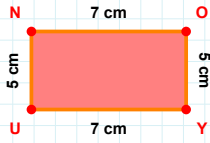
Kenar:

**|JZ| kaç br'dir?**

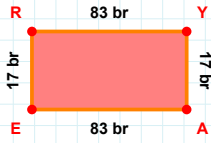
- ☐ 91 br
☐ 92 br
☐ 93 br

**88 cm hangi kenara aittir?**

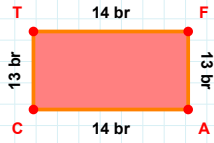
- ☐ NH kenarı
☐ ÜN kenarı
☐ NI kenarı

**|YU| + |NO| =**

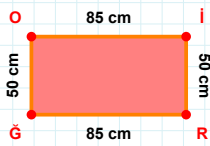
Cevap: cm

**|RY| + |ER| =**

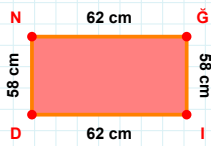
Cevap: br

**|AC| + |FA| =**

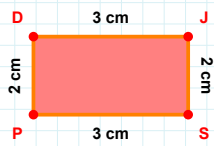
Cevap: br

**|ĞÖ| kaç cm'dir?**

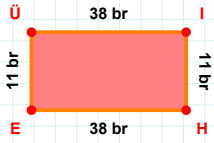
- ☐ 49 cm
☐ 50 cm
☐ 51 cm

**|İD| + |NĞ| =**

Cevap: cm

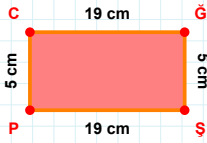
**|DJ| + |SP| =**

Cevap: cm

SORU: Aşağıdaki geometrik şekillerle ilgili soruları cevaplayınız.

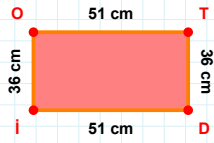
11 br hangi kenara aittir?

- ☐ ÜH kenarı
☐ EÜ kenarı
☐ IH kenarı



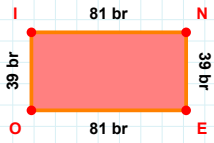
5 cm hangi kenara aittir?

- ☐ PC kenarı
☐ GP kenarı
☐ CG kenarı



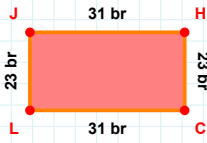
51 cm hangi kenara aittir?

Kenar:



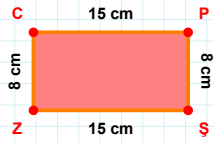
|İN| kaç brdir?

- ☐ 80 br
☐ 81 br
☐ 82 br



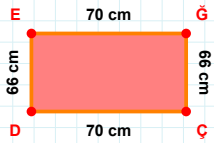
|HC| kaç brdir?

- ☐ 22 br
☐ 23 br
☐ 24 br



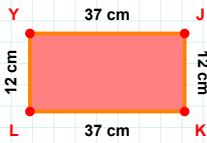
|CP| kaç cmdir?

- ☐ 14 cm
☐ 15 cm
☐ 16 cm



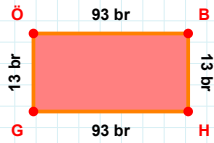
|GÇ| kaç cmdir?

- ☐ 65 cm
☐ 66 cm
☐ 67 cm



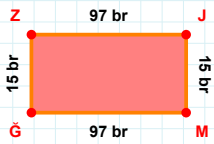
|JK| kaç cmdir?

- ☐ 11 cm
☐ 12 cm
☐ 13 cm



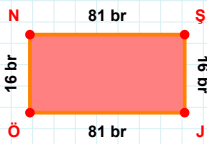
93 br hangi kenara aittir?

Kenar:



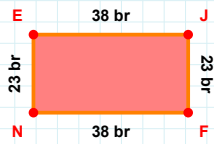
15 br hangi kenara aittir?

- ☐ ZJ kenarı
☐ ZM kenarı
☐ GZ kenarı



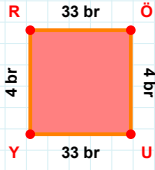
|ŞJ| kaç brdir?

- ☐ 15 br
☐ 16 br
☐ 17 br



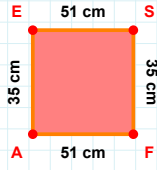
23 br hangi kenara aittir?

Kenar:

SORU: Aşağıdaki geometrik şekillerle ilgili soruları cevaplayınız.

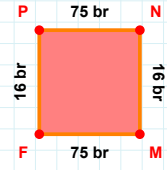
4 br hangi kenara aittir?

- ☐ ÖU kenarı
☐ YR kenarı
☐ YÖ kenarı



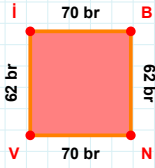
35 cm hangi kenara aittir?

Kenar:

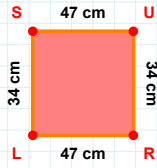


16 br hangi kenara aittir?

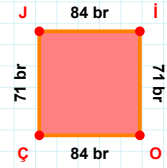
- ☐ PN kenarı
☐ FN kenarı
☐ FP kenarı

 $|BN| + |İB| = \dots$

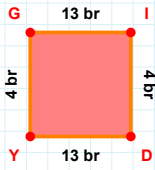
Cevap: br

 $|UR|$ kaç cm'dir?

- ☐ 33 cm
☐ 34 cm
☐ 35 cm

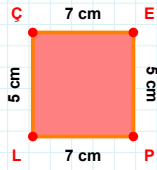
 $|ÇJ| + |İO| = \dots$

Cevap: br



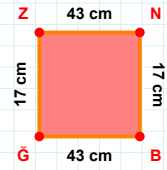
4 br hangi kenara aittir?

Kenar:



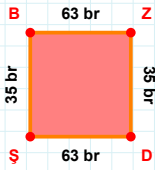
5 cm hangi kenara aittir?

- ☐ LÇ kenarı
☐ EL kenarı
☐ ÇE kenarı



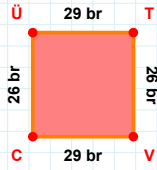
17 cm hangi kenara aittir?

Kenar:



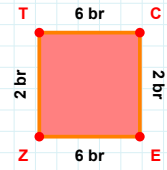
35 br hangi kenara aittir?

Kenar:



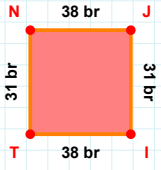
26 br hangi kenara aittir?

Kenar:

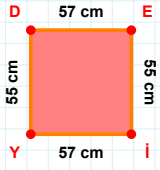
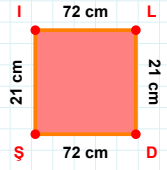
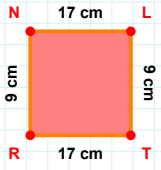


6 br hangi kenara aittir?

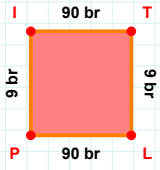
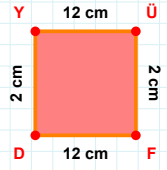
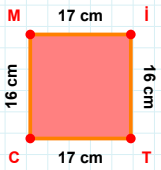
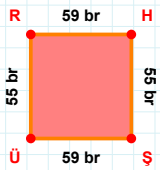
Kenar:

SORU: Aşağıdaki geometrik şekillerle ilgili soruları cevaplayınız.**|TN| kaç brdir?**

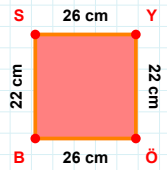
- ☐ 30 br
☐ 31 br
☐ 32 br

**|EI| + |DE| =****Cevap:** cm**|Şİ| + |LD| =****Cevap:** cm**9 cm hangi kenara aittir?**

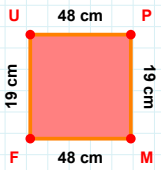
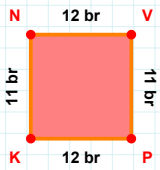
- ☐ NL kenarı
☐ RL kenarı
☐ TR kenarı

**|LP| + |TL| =****Cevap:** br**12 cm hangi kenara aittir?****Kenar:****16 cm hangi kenara aittir?****Kenar:****|ŞÜ| kaç brdir?**

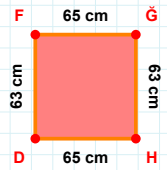
- ☐ 58 br
☐ 59 br
☐ 60 br

**|BS| kaç cmdir?**

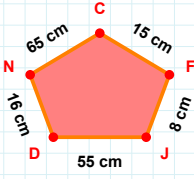
- ☐ 21 cm
☐ 22 cm
☐ 23 cm

**48 cm hangi kenara aittir?****Kenar:****11 br hangi kenara aittir?**

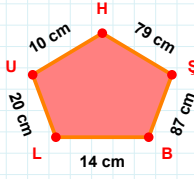
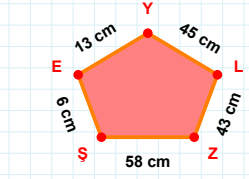
- ☐ VK kenarı
☐ VP kenarı
☐ PK kenarı

**|DF| kaç cmdir?**

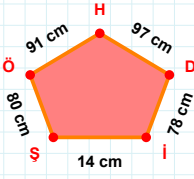
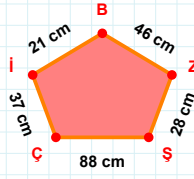
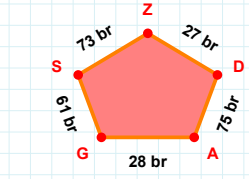
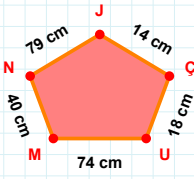
- ☐ 62 cm
☐ 63 cm
☐ 64 cm

SORU: Aşağıdaki geometrik şekillerle ilgili soruları cevaplayınız.**|CN| kaç cm'dir?**

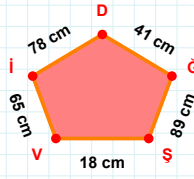
- ☐ 64 cm
☐ 65 cm
☐ 66 cm

**|HU| + |UL| =****Cevap:** cm**|SZ| kaç cm'dir?**

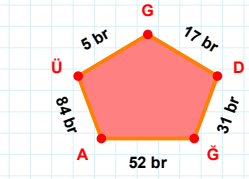
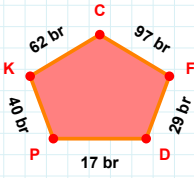
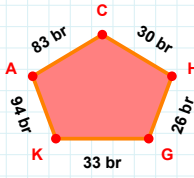
- ☐ 57 cm
☐ 58 cm
☐ 59 cm

**|HÖ| + |DH| =****Cevap:** cm**|SZ| + |ÇŞ| =****Cevap:** cm**|SG| + |DZ| =****Cevap:** br**14 cm hangi kenara aittir?**

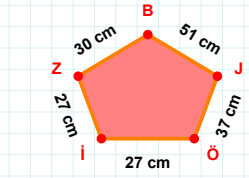
- ☐ JN kenarı
☐ JU kenarı
☐ ÇJ kenarı

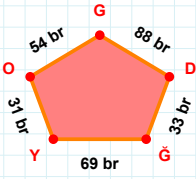
**|GD| kaç cm'dir?**

- ☐ 40 cm
☐ 41 cm
☐ 42 cm

**31 br hangi kenara aittir?****Kenar:****97 br hangi kenara aittir?****Kenar:****|KG| kaç br'dir?**

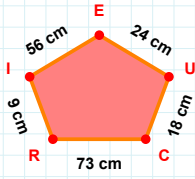
- ☐ 32 br
☐ 33 br
☐ 34 br

**30 cm hangi kenara aittir?****Kenar:**

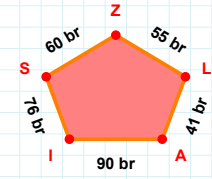
SORU: Aşağıdaki geometrik şekillerle ilgili soruları cevaplayınız.

54 br hangi kenara aittir?

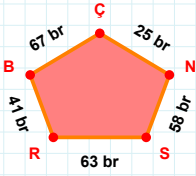
Kenar:

 $|IR| + |RC| = \dots$

Cevap: cm

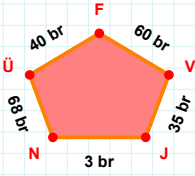
 $|ZS|$ kaç brdir?

- ☐ 59 br
☐ 60 br
☐ 61 br



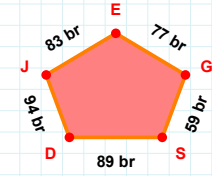
63 br hangi kenara aittir?

Kenar:

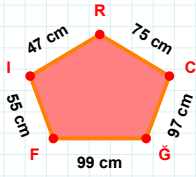


60 br hangi kenara aittir?

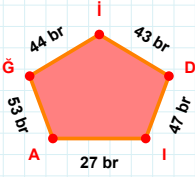
- ☐ FN kenarı
☐ ÜN kenarı
☐ JV kenarı

 $|DS|$ kaç brdir?

- ☐ 88 br
☐ 89 br
☐ 90 br

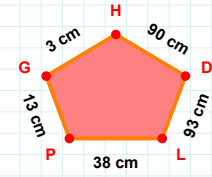
 $|CR| + |GC| = \dots$

Cevap: cm

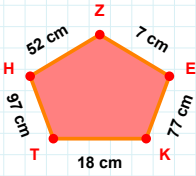


47 br hangi kenara aittir?

Kenar:

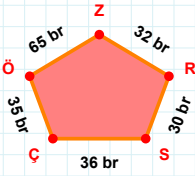
 $|LD| + |DH| = \dots$

Cevap: cm

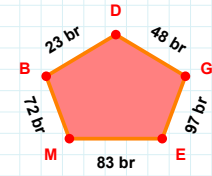


77 cm hangi kenara aittir?

Kenar:

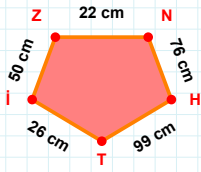
 $|SR| + |ÖÇ| = \dots$

Cevap: br

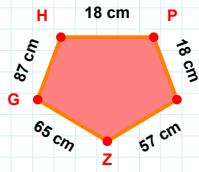


48 br hangi kenara aittir?

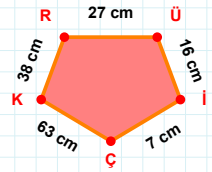
- ☐ EB kenarı
☐ GD kenarı
☐ ME kenarı

SORU: Aşağıdaki geometrik şekillerle ilgili soruları cevaplayınız.**|Tİ| kaç cm'dir?**

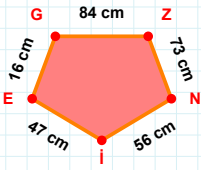
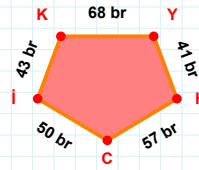
- ☐ 25 cm
☐ 26 cm
☐ 27 cm

**|GH| kaç cm'dir?**

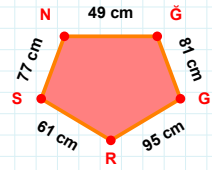
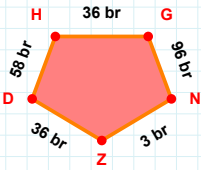
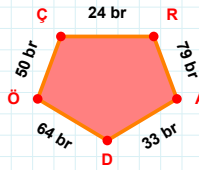
- ☐ 86 cm
☐ 87 cm
☐ 88 cm

**|RÜ| kaç cm'dir?**

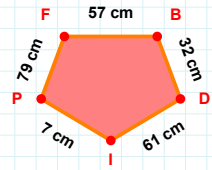
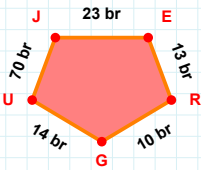
- ☐ 26 cm
☐ 27 cm
☐ 28 cm

**|EG| + |ZN| =****Cevap:** cm**|KY| kaç br'dir?**

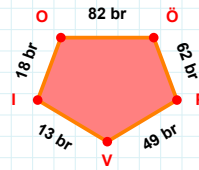
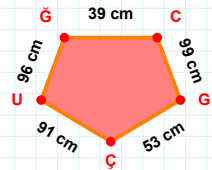
- ☐ 67 br
☐ 68 br
☐ 69 br

**95 cm hangi kenara aittir?****Kenar:****36 br hangi kenara aittir?****Kenar:****|RA| kaç br'dir?**

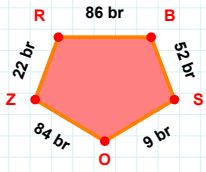
- ☐ 78 br
☐ 79 br
☐ 80 br

**61 cm hangi kenara aittir?****Kenar:****70 br hangi kenara aittir?**

- ☐ UR kenarı
☐ UJ kenarı
☐ JE kenarı

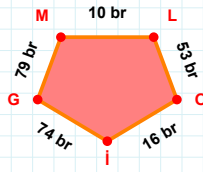
**|İO| + |Vİ| =****Cevap:** br**|CG| kaç cm'dir?**

- ☐ 98 cm
☐ 99 cm
☐ 100 cm

SORU: Aşağıdaki geometrik şekillerle ilgili soruları cevaplayınız.

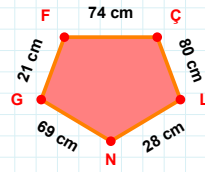
22 br hangi kenara aittir?

- ☐ SO kenarı
☐ OZ kenarı
☐ BO kenarı



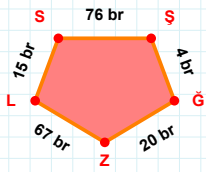
|İG| kaç brdir?

- ☐ 73 br
☐ 74 br
☐ 75 br



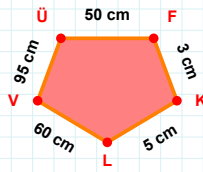
|GF| kaç cmdir?

- ☐ 20 cm
☐ 21 cm
☐ 22 cm



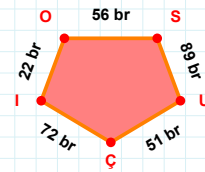
|ŞĞ| + |ĞZ| =

Cevap: br



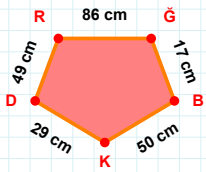
95 cm hangi kenara aittir?

- ☐ VÜ kenarı
☐ ÜF kenarı
☐ FV kenarı



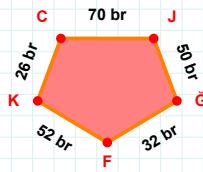
22 br hangi kenara aittir?

- ☐ UÇ kenarı
☐ ÇS kenarı
☐ IO kenarı



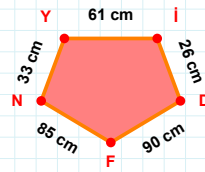
49 cm hangi kenara aittir?

- ☐ BK kenarı
☐ DB kenarı
☐ KD kenarı



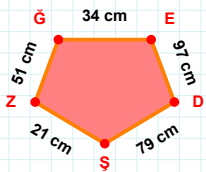
32 br hangi kenara aittir?

Kenar:



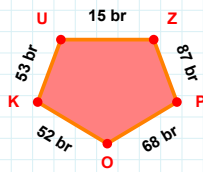
|DF| + |Yİ| =

Cevap: cm



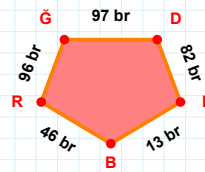
|ĞE| + |ŞZ| =

Cevap: cm



52 br hangi kenara aittir?

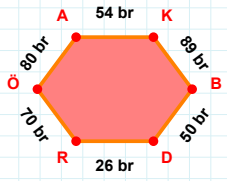
Kenar:



96 br hangi kenara aittir?

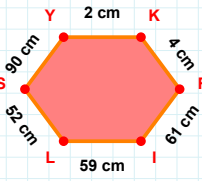
- ☐ DI kenarı
☐ IB kenarı
☐ İĞ kenarı

SORU: Aşağıdaki geometrik şekillerle ilgili soruları cevaplayınız.



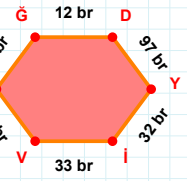
|DR| kaç brdir?

- ☐ 25 br
☐ 26 br
☐ 27 br



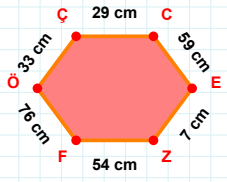
2 cm hangi kenara aittir?

Kenar:



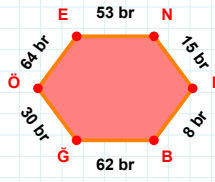
|VA| + |AĞ| =

Cevap: br



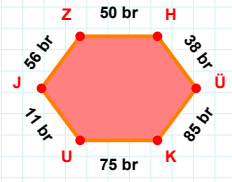
|FÖ| kaç cmdir?

- ☐ 75 cm
☐ 76 cm
☐ 77 cm



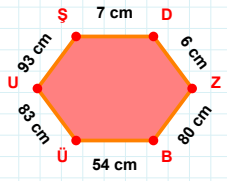
64 br hangi kenara aittir?

- ☐ EL kenarı
☐ GÖ kenarı
☐ ÖE kenarı



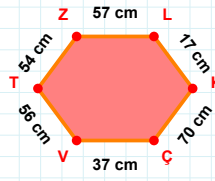
|JZ| + |HÜ| =

Cevap: br



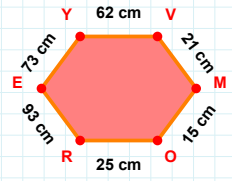
6 cm hangi kenara aittir?

Kenar:



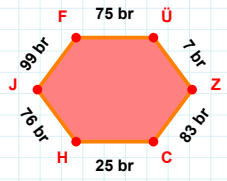
|KÇ| kaç cmdir?

- ☐ 69 cm
☐ 70 cm
☐ 71 cm



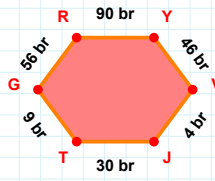
|RE| kaç cmdir?

- ☐ 92 cm
☐ 93 cm
☐ 94 cm



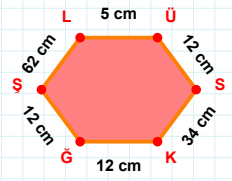
99 br hangi kenara aittir?

- ☐ ZC kenarı
☐ ÜZ kenarı
☐ HF kenarı



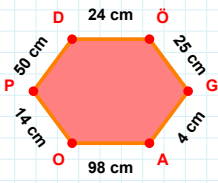
56 br hangi kenara aittir?

- ☐ GR kenarı
☐ YV kenarı
☐ RJ kenarı



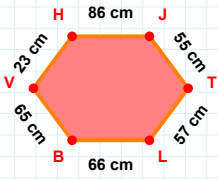
62 cm hangi kenara aittir?

- ☐ SŞ kenarı
☐ ŞL kenarı
☐ SK kenarı

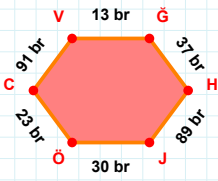
SORU: Aşağıdaki geometrik şekillerle ilgili soruları cevaplayınız.

14 cm hangi kenara aittir?

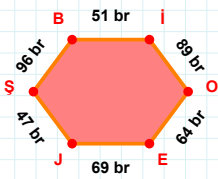
Kenar:

 $|BV| + |VH| = \dots$

Cevap: cm

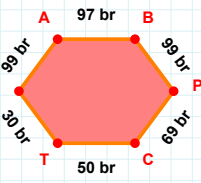
 $|ÖC|$ kaç brdir?

- ☐ 22 br
☐ 23 br
☐ 24 br

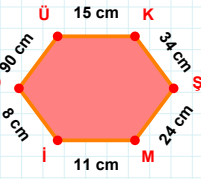


96 br hangi kenara aittir?

- ☐ JŞ kenarı
☐ OB kenarı
☐ Bİ kenarı

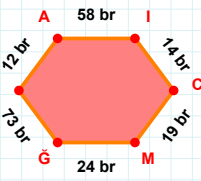
 $|TÜ| + |CT| = \dots$

Cevap: br



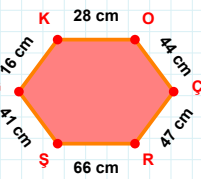
90 cm hangi kenara aittir?

- ☐ Mİ kenarı
☐ ÖÜ kenarı
☐ ÖK kenarı



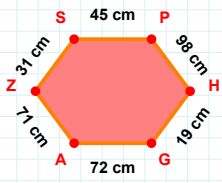
12 br hangi kenara aittir?

- ☐ CM kenarı
☐ NA kenarı
☐ GI kenarı



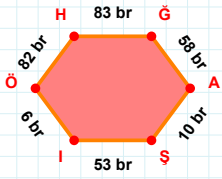
16 cm hangi kenara aittir?

- ☐ KO kenarı
☐ KR kenarı
☐ OÇ kenarı

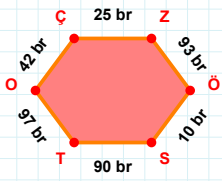


72 cm hangi kenara aittir?

Kenar:

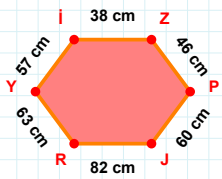
 $|Şİ| + |İÖ| = \dots$

Cevap: br



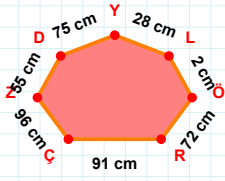
42 br hangi kenara aittir?

- ☐ ÖÇ kenarı
☐ ST kenarı
☐ ZÖ kenarı



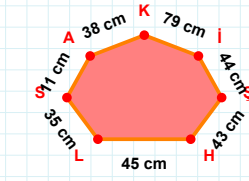
57 cm hangi kenara aittir?

- ☐ PJ kenarı
☐ Yİ kenarı
☐ RZ kenarı

SORU: Aşağıdaki geometrik şekillerle ilgili soruları cevaplayınız.

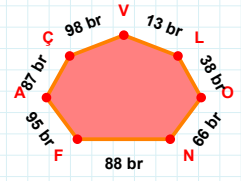
$$|DZ| + |RÖ| = \dots$$

Cevap: cm



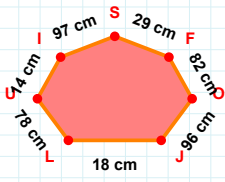
$$|HŞ| \text{ kaç cmdir?}$$

- ☐ 42 cm
☐ 43 cm
☐ 44 cm



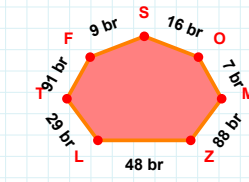
$$|LV| + |NO| = \dots$$

Cevap: br



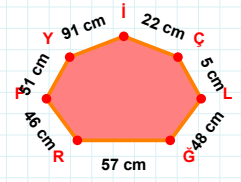
$$82 \text{ cm hangi kenara aittir?}$$

Kenar:



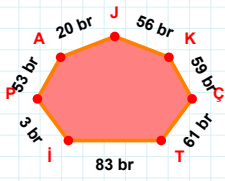
$$|LZ| \text{ kaç brdir?}$$

- ☐ 47 br
☐ 48 br
☐ 49 br



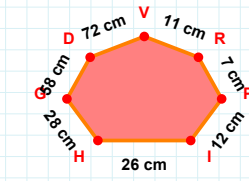
$$57 \text{ cm hangi kenara aittir?}$$

Kenar:



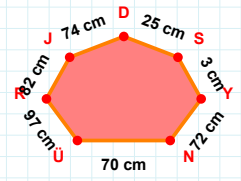
$$53 \text{ br hangi kenara aittir?}$$

Kenar:



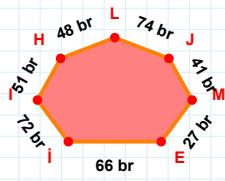
$$11 \text{ cm hangi kenara aittir?}$$

- ☐ HD kenarı
☐ DG kenarı
☐ HI kenarı



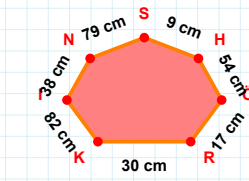
$$|SD| + |NY| = \dots$$

Cevap: cm



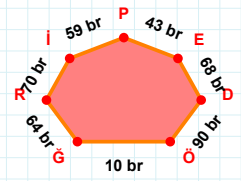
$$74 \text{ br hangi kenara aittir?}$$

- ☐ HI kenarı
☐ MJ kenarı
☐ IM kenarı



$$|ÖH| \text{ kaç cmdir?}$$

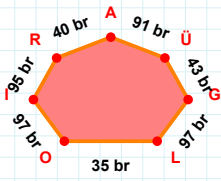
- ☐ 53 cm
☐ 54 cm
☐ 55 cm



$$68 \text{ br hangi kenara aittir?}$$

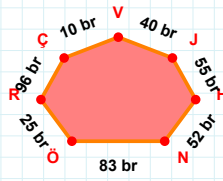
Kenar:

SORU: Aşağıdaki geometrik şekillerle ilgili soruları cevaplayınız.



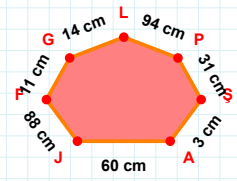
91 br hangi kenara aittir?

- ☐ GÜ kenarı
☐ IO kenarı
☐ IÜ kenarı



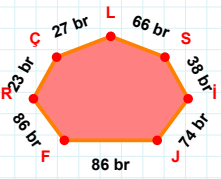
$|HJ| + |NH| = \dots$

Cevap: br



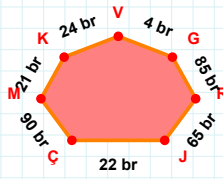
$|PL|$ kaç cm'dir?

- ☐ 93 cm
☐ 94 cm
☐ 95 cm



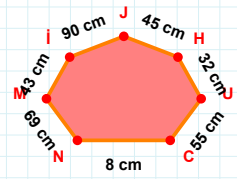
66 br hangi kenara aittir?

- ☐ RL kenarı
☐ ÇR kenarı
☐ JL kenarı



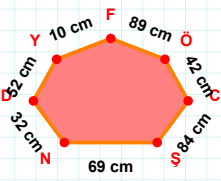
$|MC|$ kaç br'dir?

- ☐ 89 br
☐ 90 br
☐ 91 br



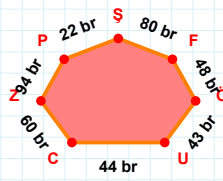
$|MN| + |UH| = \dots$

Cevap: cm



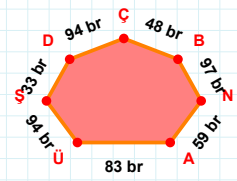
10 cm hangi kenara aittir?

Kenar:



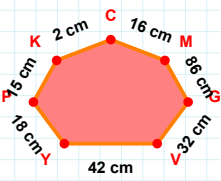
$|ZC|$ kaç br'dir?

- ☐ 59 br
☐ 60 br
☐ 61 br



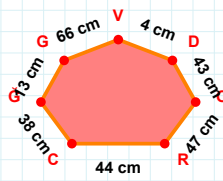
$|ÜA| + |NB| = \dots$

Cevap: br



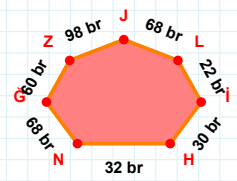
$|PY| + |CK| = \dots$

Cevap: cm



$|GÇ|$ kaç cm'dir?

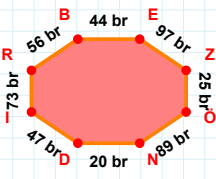
- ☐ 12 cm
☐ 13 cm
☐ 14 cm



$|İL|$ kaç br'dir?

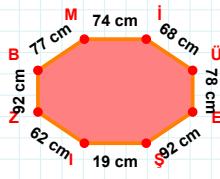
- ☐ 21 br
☐ 22 br
☐ 23 br

SORU: Aşağıdaki geometrik şekillerle ilgili soruları cevaplayınız.



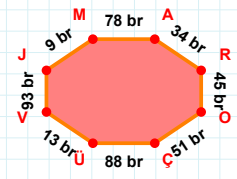
56 br hangi kenara aittir?

- ☐ RB kenarı
☐ NI kenarı
☐ EZ kenarı



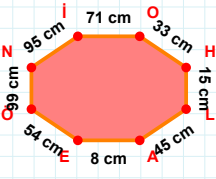
68 cm hangi kenara aittir?

Kenar:



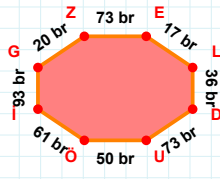
|JM| kaç brdir?

- ☐ 8 br
☐ 9 br
☐ 10 br



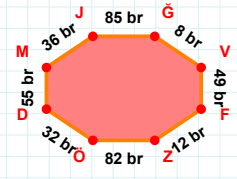
|OH| + |ÖN| =

Cevap: cm



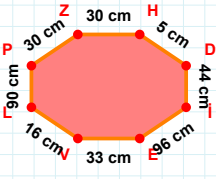
17 br hangi kenara aittir?

Kenar:



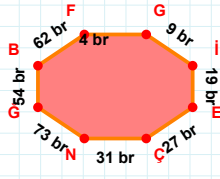
36 br hangi kenara aittir?

- ☐ GV kenarı
☐ VÖ kenarı
☐ DM kenarı



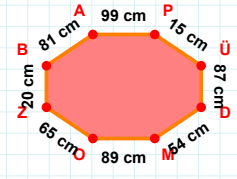
|ZH| kaç cmdir?

- ☐ 29 cm
☐ 30 cm
☐ 31 cm



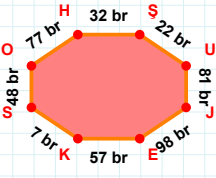
62 br hangi kenara aittir?

- ☐ İE kenarı
☐ GB kenarı
☐ GE kenarı



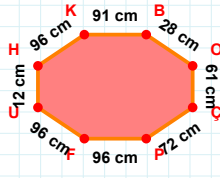
|AP| kaç cmdir?

- ☐ 98 cm
☐ 99 cm
☐ 100 cm



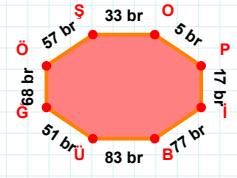
7 br hangi kenara aittir?

Kenar:



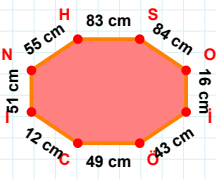
28 cm hangi kenara aittir?

Kenar:



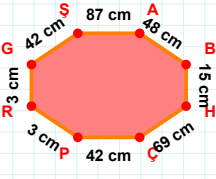
|İB| + |GÖ| =

Cevap: br

SORU: Aşağıdaki geometrik şekillerle ilgili soruları cevaplayınız.

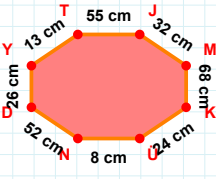
49 cm hangi kenara aittir?

Kenar:



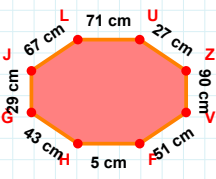
42 cm hangi kenara aittir?

Kenar:



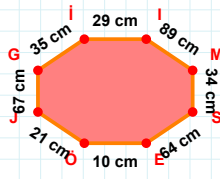
13 cm hangi kenara aittir?

- ☐ KÜ kenarı
☐ MK kenarı
☐ ÜD kenarı



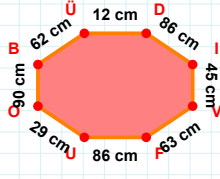
67 cm hangi kenara aittir?

- ☐ ZV kenarı
☐ VF kenarı
☐ VJ kenarı

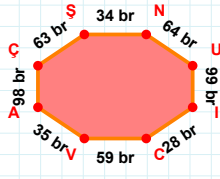


35 cm hangi kenara aittir?

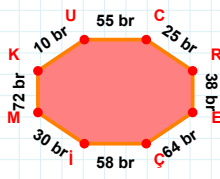
- ☐ ÖJ kenarı
☐ IM kenarı
☐ GS kenarı

 $|UO| + |BÜ| = \dots$

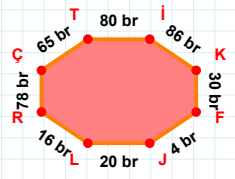
Cevap: cm

 $|VA| + |ŞN| = \dots$

Cevap: br

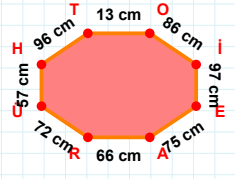
 $|EÇ| + |Çİ| = \dots$

Cevap: br



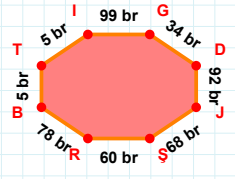
65 br hangi kenara aittir?

- ☐ İL kenarı
☐ İK kenarı
☐ ÇT kenarı

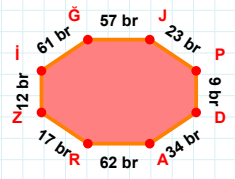


96 cm hangi kenara aittir?

- ☐ ÜH kenarı
☐ TO kenarı
☐ OH kenarı

 $|RB|$ kaç brdir?

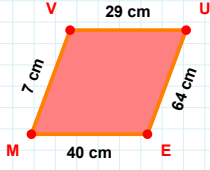
- ☐ 77 br
☐ 78 br
☐ 79 br



61 br hangi kenara aittir?

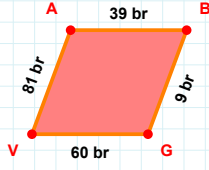
- ☐ DA kenarı
☐ Zİ kenarı
☐ AĞ kenarı

SORU: Aşağıdaki geometrik şekillerle ilgili soruları cevaplayınız.

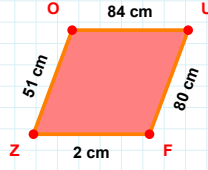


7 cm hangi kenara aittir?

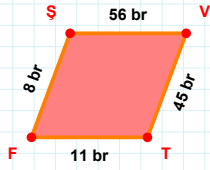
- ☐ MV kenarı
☐ VE kenarı
☐ VU kenarı

 $|VA| + |BG| = \dots$

Cevap: br

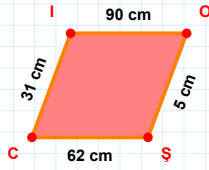
 $|FZ|$ kaç cm'dir?

- ☐ 1 cm
☐ 2 cm
☐ 3 cm

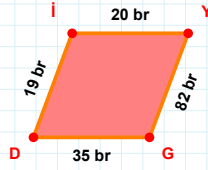


11 br hangi kenara aittir?

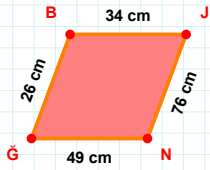
Kenar:

 $|CI|$ kaç cm'dir?

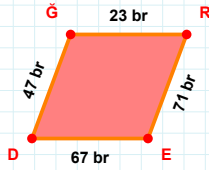
- ☐ 30 cm
☐ 31 cm
☐ 32 cm

 $|GD|$ kaç br'dir?

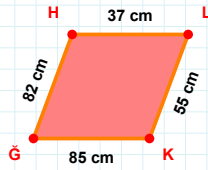
- ☐ 34 br
☐ 35 br
☐ 36 br

 $|JN|$ kaç cm'dir?

- ☐ 75 cm
☐ 76 cm
☐ 77 cm

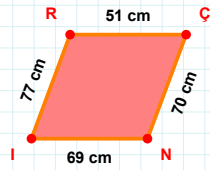
 $|GR| + |RE| = \dots$

Cevap: br

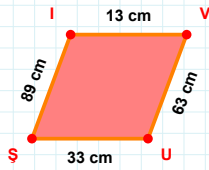


82 cm hangi kenara aittir?

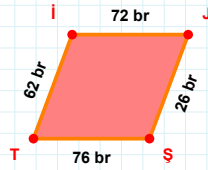
- ☐ HK kenarı
☐ KĞ kenarı
☐ LK kenarı

 $|IR| + |CN| = \dots$

Cevap: cm

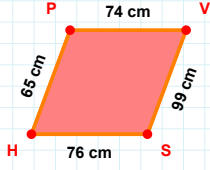
 $|IV| + |VU| = \dots$

Cevap: cm



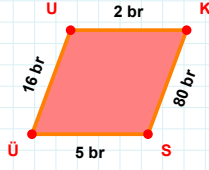
62 br hangi kenara aittir?

- ☐ İJ kenarı
☐ Şİ kenarı
☐ JŞ kenarı

SORU: Aşağıdaki geometrik şekillerle ilgili soruları cevaplayınız.

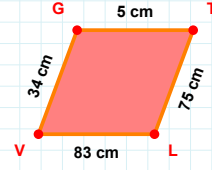
65 cm hangi kenara aittir?

- ☐ HP kenarı
☐ VS kenarı
☐ HV kenarı



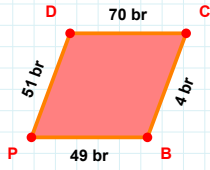
16 br hangi kenara aittir?

- ☐ KÜ kenarı
☐ UK kenarı
☐ ÜU kenarı

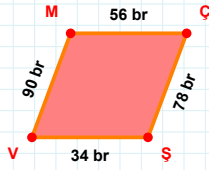


34 cm hangi kenara aittir?

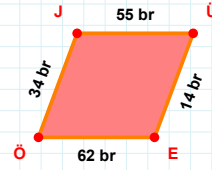
Kenar:

 $|PD| + |DC| = \dots$

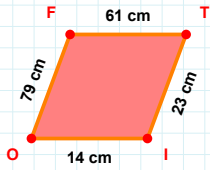
Cevap: br

 $|VM|$ kaç brdir?

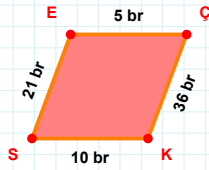
- ☐ 89 br
☐ 90 br
☐ 91 br

 $|EÖ|$ kaç brdir?

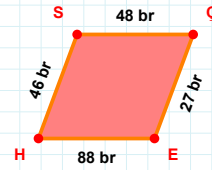
- ☐ 61 br
☐ 62 br
☐ 63 br

 $|FT|$ kaç cmdir?

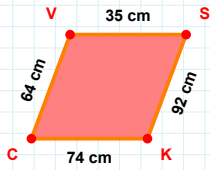
- ☐ 60 cm
☐ 61 cm
☐ 62 cm

 $|SE| + |EC| = \dots$

Cevap: br

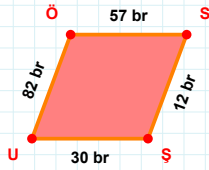
 $|ÇE|$ kaç brdir?

- ☐ 26 br
☐ 27 br
☐ 28 br



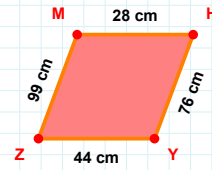
35 cm hangi kenara aittir?

Kenar:

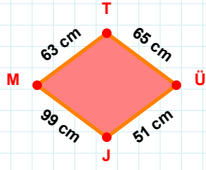


57 br hangi kenara aittir?

Kenar:

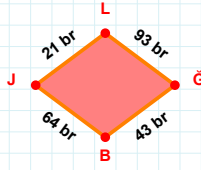
 $|YZ| + |ZM| = \dots$

Cevap: cm

SORU: Aşağıdaki geometrik şekillerle ilgili soruları cevaplayınız.

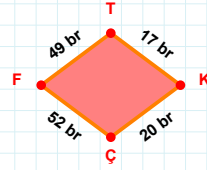
$$|TÜ| + |MT| = \dots$$

Cevap: cm



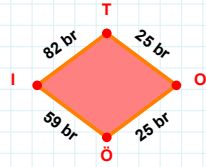
$$93 \text{ br hangi kenara aittir?}$$

Kenar:



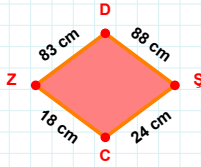
$$|FT| + |TK| = \dots$$

Cevap: br



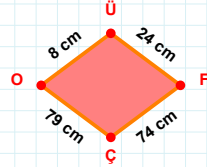
$$|Öİ| \text{ kaç brdir?}$$

- ☐ 58 br
☐ 59 br
☐ 60 br



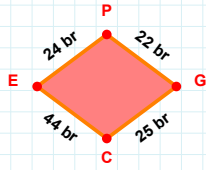
$$83 \text{ cm hangi kenara aittir?}$$

- ☐ ZD kenarı
☐ ZŞ kenarı
☐ CZ kenarı



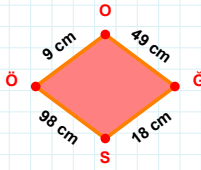
$$8 \text{ cm hangi kenara aittir?}$$

- ☐ ÇO kenarı
☐ FO kenarı
☐ OÜ kenarı



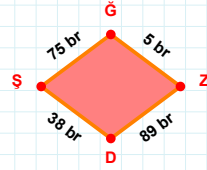
$$|CE| \text{ kaç brdir?}$$

- ☐ 43 br
☐ 44 br
☐ 45 br



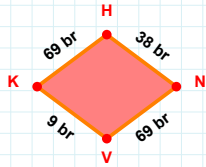
$$|GS| \text{ kaç cmdir?}$$

- ☐ 17 cm
☐ 18 cm
☐ 19 cm



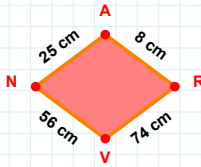
$$89 \text{ br hangi kenara aittir?}$$

Kenar:



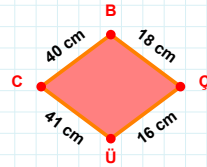
$$|HN| + |NV| = \dots$$

Cevap: br



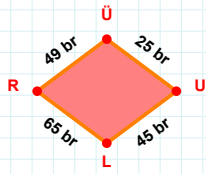
$$8 \text{ cm hangi kenara aittir?}$$

Kenar:



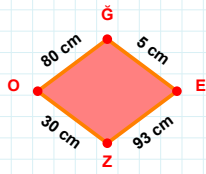
$$16 \text{ cm hangi kenara aittir?}$$

Kenar:

SORU: Aşağıdaki geometrik şekillerle ilgili soruları cevaplayınız.

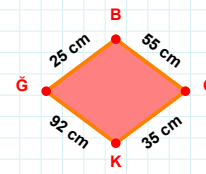
49 br hangi kenara aittir?

- ☐ UR kenarı
☐ LR kenarı
☐ RÜ kenarı



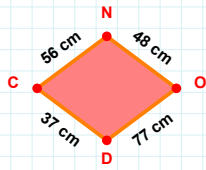
30 cm hangi kenara aittir?

Kenar:



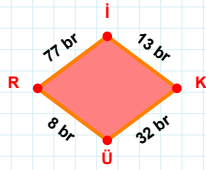
|KĞ| kaç cm'dir?

- ☐ 91 cm
☐ 92 cm
☐ 93 cm



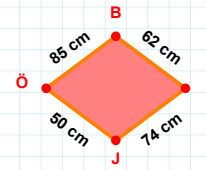
|OD| + |CN| =

Cevap: cm



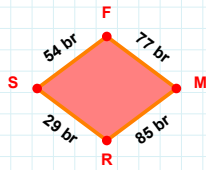
|ÜR| + |Rİ| =

Cevap: br



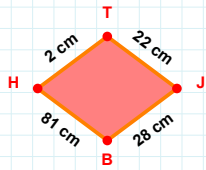
|JÖ| kaç cm'dir?

- ☐ 49 cm
☐ 50 cm
☐ 51 cm



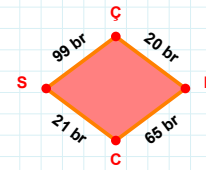
54 br hangi kenara aittir?

- ☐ RS kenarı
☐ FR kenarı
☐ MR kenarı



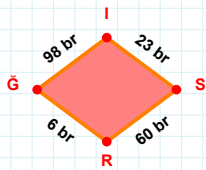
|JB| + |TJ| =

Cevap: cm



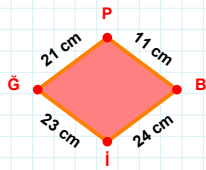
|SC| + |ÇH| =

Cevap: br



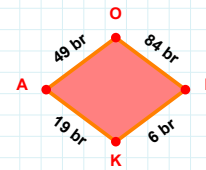
|IS| kaç br'dir?

- ☐ 22 br
☐ 23 br
☐ 24 br



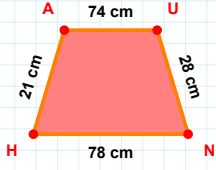
23 cm hangi kenara aittir?

Kenar:



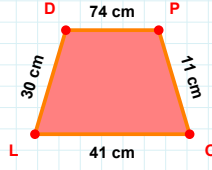
84 br hangi kenara aittir?

Kenar:

SORU: Aşağıdaki geometrik şekillerle ilgili soruları cevaplayınız.

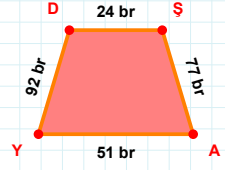
21 cm hangi kenara aittir?

- ☐ HA kenarı
☐ AN kenarı
☐ NH kenarı



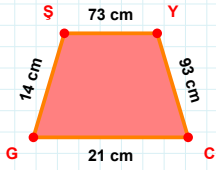
11 cm hangi kenara aittir?

Kenar:



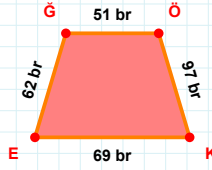
51 br hangi kenara aittir?

Kenar:

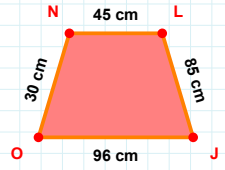


14 cm hangi kenara aittir?

- ☐ YG kenarı
☐ YC kenarı
☐ GŞ kenarı

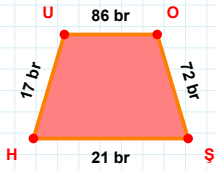
 $|KE| + |EG| = \dots$

Cevap: br

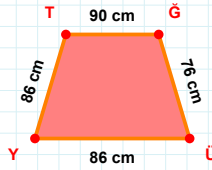


30 cm hangi kenara aittir?

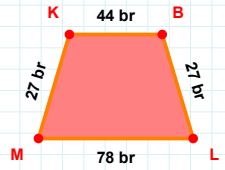
- ☐ JN kenarı
☐ JO kenarı
☐ NL kenarı

 $|UO|$ kaç brdir?

- ☐ 85 br
☐ 86 br
☐ 87 br

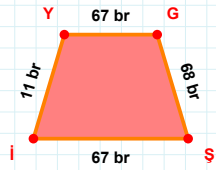
 $|ĞÜ|$ kaç cmdir?

- ☐ 75 cm
☐ 76 cm
☐ 77 cm



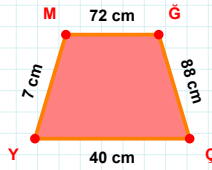
27 br hangi kenara aittir?

Kenar:



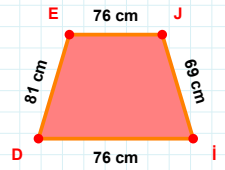
11 br hangi kenara aittir?

- ☐ YG kenarı
☐ Gİ kenarı
☐ Şİ kenarı



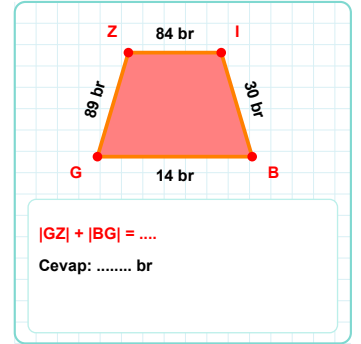
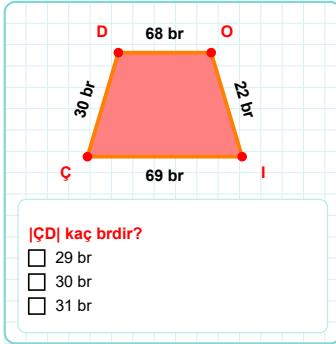
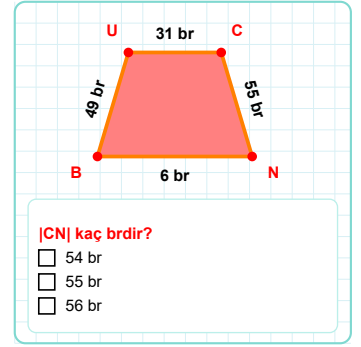
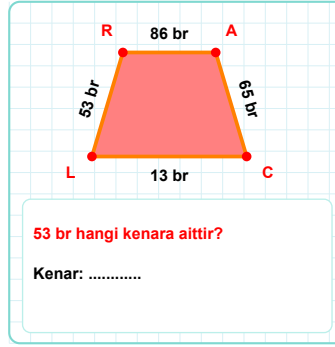
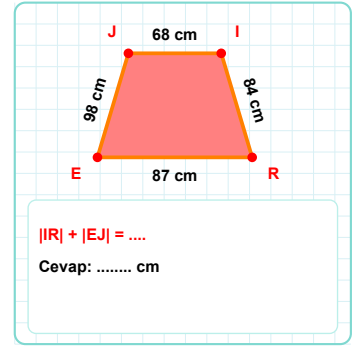
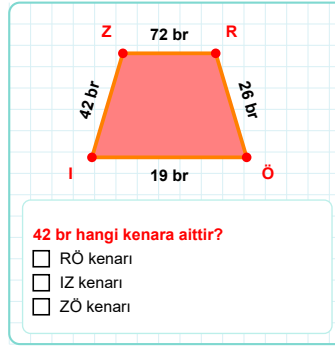
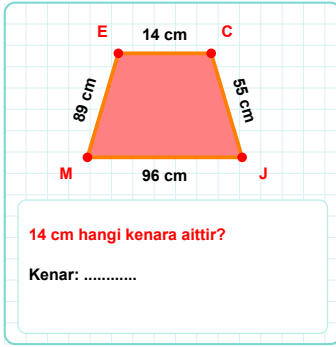
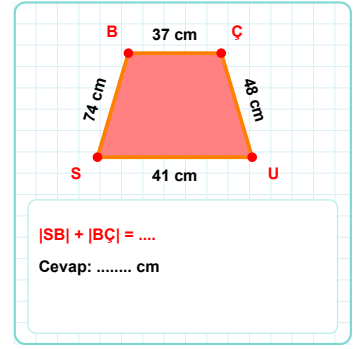
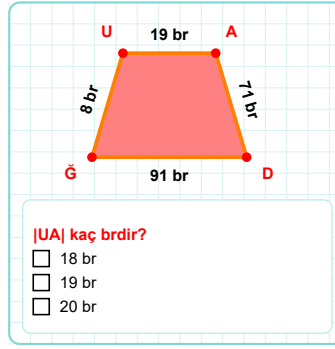
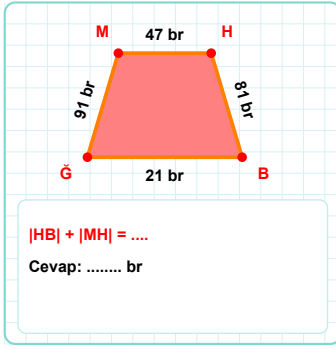
7 cm hangi kenara aittir?

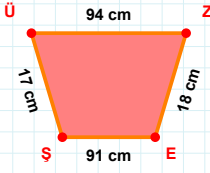
- ☐ MÇ kenarı
☐ YM kenarı
☐ ĞÇ kenarı



81 cm hangi kenara aittir?

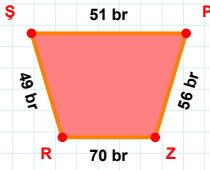
- ☐ İD kenarı
☐ JD kenarı
☐ Jİ kenarı

SORU: Aşağıdaki geometrik şekillerle ilgili soruları cevaplayınız.

SORU: Aşağıdaki geometrik şekillerle ilgili soruları cevaplayınız.

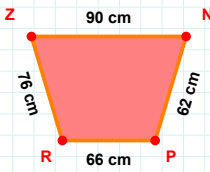
91 cm hangi kenara aittir?

Kenar:



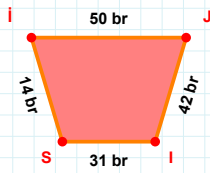
70 br hangi kenara aittir?

Kenar:



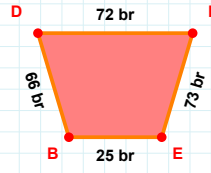
76 cm hangi kenara aittir?

- ☐ ZN kenarı
☐ NR kenarı
☐ RZ kenarı



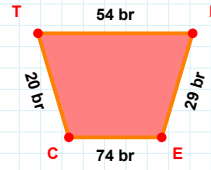
50 br hangi kenara aittir?

Kenar:



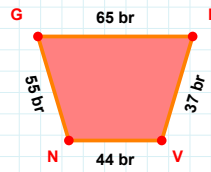
66 br hangi kenara aittir?

- ☐ EB kenarı
☐ BN kenarı
☐ NE kenarı

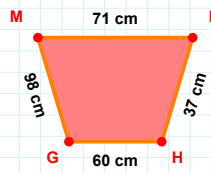


29 br hangi kenara aittir?

Kenar:

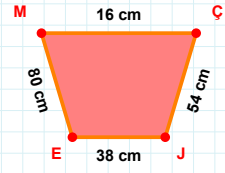
 $|NG| + |HV| = \dots$

Cevap: br



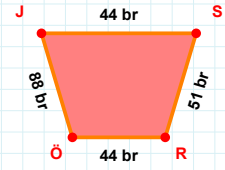
71 cm hangi kenara aittir?

Kenar:



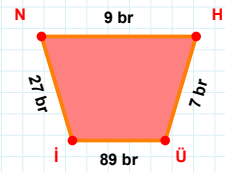
80 cm hangi kenara aittir?

- ☐ JE kenarı
☐ ÇJ kenarı
☐ ÇE kenarı

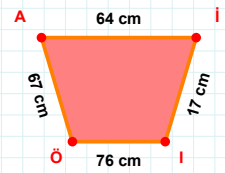


44 br hangi kenara aittir?

Kenar:

 $|NH| + |HÜ| = \dots$

Cevap: br

 $|İI|$ kaç cm'dir?

- ☐ 16 cm
☐ 17 cm
☐ 18 cm

SORU: Aşağıdaki geometrik şekillerle ilgili soruları cevaplayınız.

93 cm hangi kenara aittir?

☐ DC kenarı
☐ SD kenarı
☐ GD kenarı

73 cm hangi kenara aittir?

Kenar:

43 cm hangi kenara aittir?

☐ ÖO kenarı
☐ OÜ kenarı
☐ ZO kenarı

83 cm hangi kenara aittir?

☐ GO kenarı
☐ GÜ kenarı
☐ ÜH kenarı

|AI| kaç cmdir?

☐ 67 cm
☐ 68 cm
☐ 69 cm

49 br hangi kenara aittir?

Kenar:

|GT| kaç brdir?

☐ 26 br
☐ 27 br
☐ 28 br

|UZ| kaç cmdir?

☐ 7 cm
☐ 8 cm
☐ 9 cm

|MZ| kaç brdir?

☐ 47 br
☐ 48 br
☐ 49 br

|NU| kaç brdir?

☐ 23 br
☐ 24 br
☐ 25 br

55 cm hangi kenara aittir?

Kenar:

45 br hangi kenara aittir?

Kenar:

SÜREÇ ODAKLI DEĞERLENDİRME ÖLÇEĞİ			
Geliştirilmeli (0-109)	İyi (110-187)	Çok İyi (188-265)	Mükemmel (266-312)
<input type="checkbox"/>	<input type="checkbox"/>	<input type="checkbox"/>	<input type="checkbox"/>

Hazırlayan:

Bu bölüme sınıfınızın ilgili kazanıma yönelik genel durumuna ilişkin gözlem ve izlenimlerinizi, öğrencilerinizin bu kazanımla ilgili öğrenme eksikliklerini ve bu eksikliklerin giderilmesi amacıyla yaptığınız/yapmayı planladığınız faaliyetleri not edebilirsiniz.

No	Adı - Soyadı	Toplam Puan	Değerlendirme
1			
2			
3			
4			
5			
6			
7			
8			
9			
10			
11			
12			
13			
14			
15			
16			
17			
18			
19			
20			
21			
22			
23			
24			
25			
26			
27			
28			
29			
30			
31			
32			
33			
34			
35			

Hazırlayan: